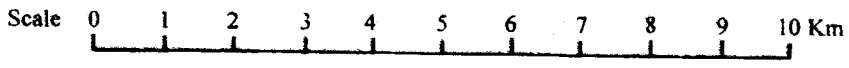
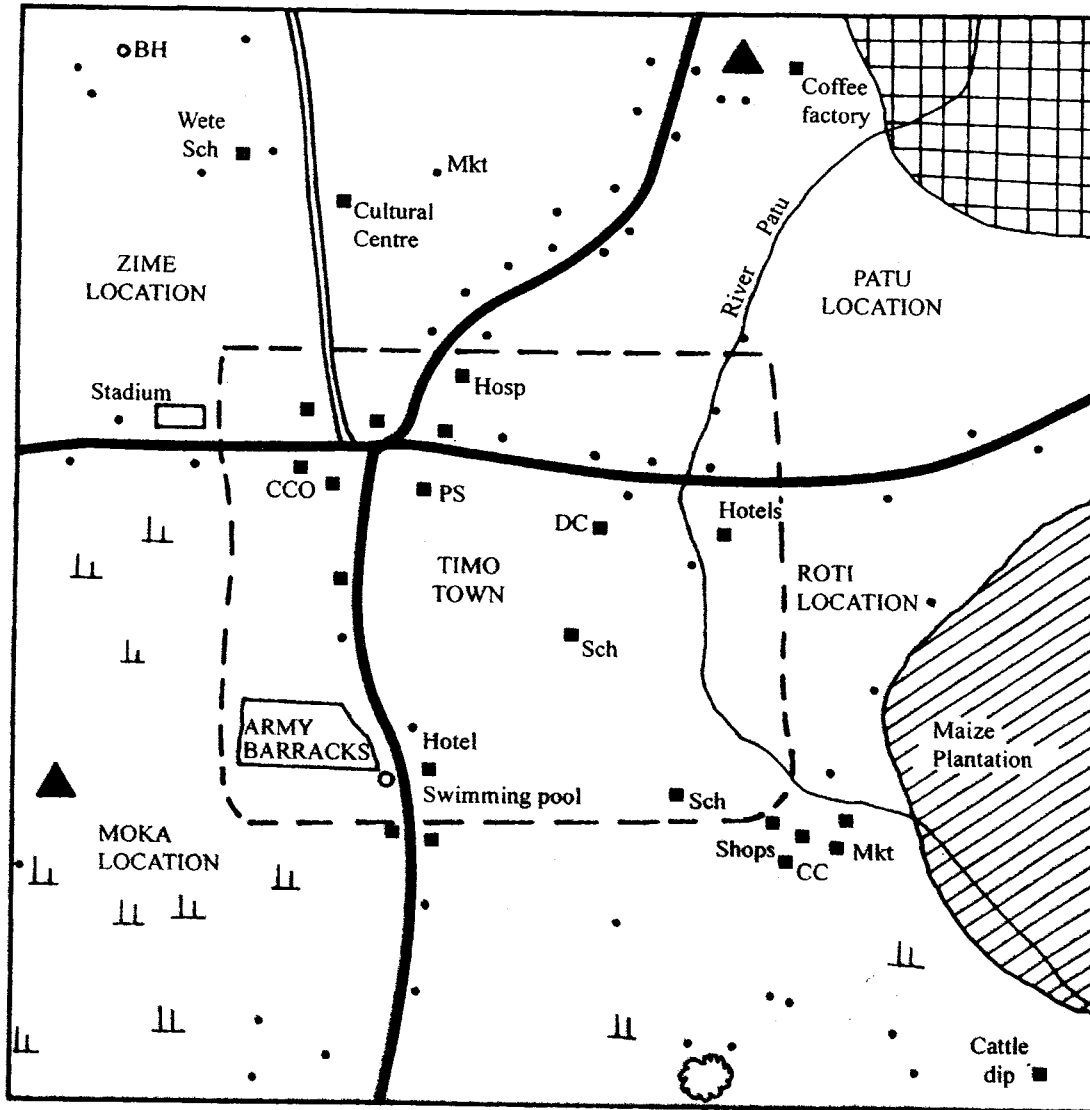


PART I SOCIAL STUDIES

TIMO AREA



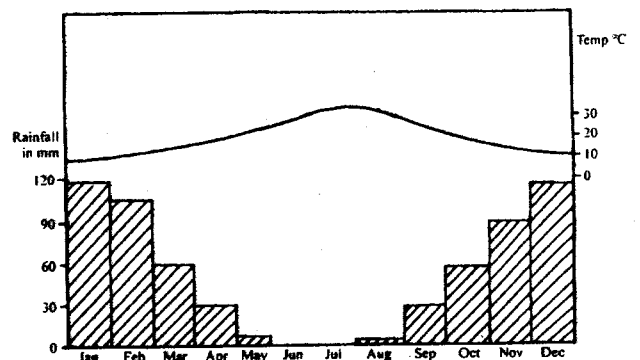
KEY

- | | | | |
|--|------------------|--|-----------------------------------|
| | River | | Permanent houses |
| | Tarmac road | | Settlements |
| | Murrum road | | CC Chief's camp |
| | Town boundary | | CCO County council office |
| | Hill | | DC District commissioner's office |
| | Scrub vegetation | | Hosp Hospital |
| | Quarry | | Sch School |
| | Coffee farm | | Mkt Market |
| | | | PS Police Station |
| | | | BH Bore hole |

Study the map of TIMO area and answer questions 1 to 7.

- What is the general direction of Wete School from the coffee factory?
 - North East.
 - North West.
 - West.
 - East.
- What is the approximate area of Timo Town in square kilometers?
 - 15 sq. kilometres.
 - 30 sq. kilometres.
 - 56 sq. kilometres.
 - 64 sq. kilometres.
- Most of the settlements in Timo area are found
 - along the roads
 - near the quarry
 - near the cattle dip
 - along the river.
- Which one of the following features would attract tourists in Zime Location?
 - The borehole.
 - The stadium.
 - The murram road.
 - The cultural centre.
- The climate experienced in Moka Location is likely to be
 - cool and wet
 - hot and dry
 - cool and dry
 - hot and wet.
- Some cows have strayed into the maize plantation in Roti Location and destroyed the crop. The correct action for the owner of the plantation to take is to
 - poison the cows
 - arrest the herdsman
 - sell the cows in the nearby market
 - report the matter to the chief.
- Which one of the following social services is not available in Timo town?
 - Educational services.
 - Religious services.
 - Health services.
 - Recreational services.
- Which one of the following factors least explains why the Bantu migrated from their original homeland into Eastern Africa?
 - Spirit of adventure.
 - Search for fertile land.
 - Population pressure.
 - Attacks by other communities.

- Which one of the following gives the correct order of the evolution of Early Man?
 - Homo Erectus → Homo Habilis → Homo Sapiens.
 - Homo Sapiens → Homo Habilis → Homo Erectus.
 - Homo Habilis → Homo Erectus → Homo Sapiens.
 - Homo Habilis → Homo Sapiens → Homo Erectus..
- Which one of the following was a result of the coming of the Arabs to Eastern Africa?
 - Introduction of growing of cloves in Zanzibar.
 - Building of Fort Jesus at Mombasa.
 - Setting up of kingdoms in the interior.
 - Construction of the railway to the interior.
- The main reason for teaching moral laws to the youth is to
 - encourage them to support one another
 - guide them on how to choose marriage partners
 - enable them to learn their traditions
 - enable them to acquire responsible behaviour.
- Which one of the following duties was performed by the Ntemi Chief among the Nyamwezi during the pre-colonial period?
 - Organizing marriage ceremonies.
 - Distributing land to farmers.
 - Controlling trade.
 - Leading hunting trips.
- Which one of the following methods of irrigation is used in the Ahero Irrigation Scheme?
 - Canal irrigation.
 - Overhead irrigation.
 - Sprinkler irrigation.
 - Trickle irrigation.
- The graph below represents the climate of a town in Africa.

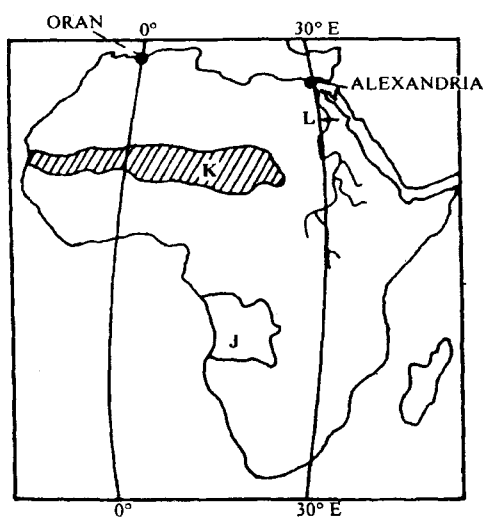


- Which one of the following statements correctly describes the climate of the town?
- There is rainfall throughout the year.
 - The town has one dry season.
 - Temperatures are high throughout the year.
 - The town has two wet seasons.

15. One of the roles of prefects in school management is to
 A. prepare the school timetable
 B. keep pupils' progress records
 C. take part in school committee meetings
 D. take care of school property.
16. Tamaru is a sister to Mbeya. Tamaru has a son called Ndavi while Mbeya has a daughter called Maria. To Ndavi, Maria is a
 A. niece
 B. cousin
 C. nephew
 D. sister.
17. Which one of the following is the main benefit the West African countries have gained as members of the Economic Community for West African States (ECOWAS)?
 A. Expansion of trade.
 B. Increased production of cash crops.
 C. Promotion of free movement of people in the region.
 D. Expansion of manufacturing industries in the region.
18. Your class went on a study tour of an area whose vegetation had the following characteristics:
 (i) Scattered umbrella-shaped trees.
 (ii) Large areas covered with grass.
 (iii) Some thorny bushes and shrubs.


The vegetation found in the area that your class visited is
 A. Equatorial forest
 B. Desert vegetation
 C. Savanna vegetation
 D. Coniferous forest.

19. Use the map of Africa below to answer questions 19, 20, 21 and 22.



The country marked J was colonized by
 A. France
 B. Portugal
 C. Italy
 D. Belgium.


20. The main economic activity carried out in the shaded area marked K is
 A. mining
 B. tourism
 C. crop growing
 D. nomadic pastoralism.
21. The multi-purpose project found in the place marked L is the
 A. Aswan High Dam
 B. Owen falls Dam
 C. Akosombo Dam
 D. Kariba Dam.
22. What is the time in Alexandria on longitude 30°E when it is 9.00 am in Oran on longitude 0°?
 A. 7.00 am.
 B. 9.00 pm.
 C. 11.00 am.
 D. 1.00 pm.
23. You have noticed that your friend Kefa has started smoking. What would be the best action for you to take in order to help him stop the behaviour?
 A. Take away the cigarettes from him.
 B. Talk to him about its effects.
 C. Advise him to see a doctor.
 D. Avoid his company.
24. Which one of the following African leaders collaborated with the Europeans during the establishment of Colonial rule?
 A. Lewanika of the Lozi.
 B. Samore Toure of the Mandinka.
 C. Kabaka Mwanga of the Baganda.
 D. Sakawa of the Abagusii.
25. The diagram below shows a method of fishing.



The fishing method represented in the diagram is
 A. purse-seining
 B. drifting
 C. gill net
 D. trawling.

26. The main method used by the Africans in Zimbabwe to attain their independence was
 A. boycotting work
 B. seeking support from neighbours
 C. fighting guerilla warfare
 D. negotiating with the colonialists.

27. Which one of the following is the correct order of the Provincial Administration in Kenya?



28. To make a complete rotation on its axis, the earth takes
- twelve hours
 - twenty four hours
 - seven days
 - thirty days.

29. Which one of the following is a benefit of a representative democracy?
- People freely elect their leaders.
 - All citizens take part in decision-making.
 - All people obey the law.
 - Citizens are excused from paying taxes.

30. A Standard VIII prefect finds her two classmates quarrelling in class. The **right** action for the prefect to take is to
- ignore the pupils
 - punish the pupils
 - send the pupils out of class
 - discuss the issue with the pupils.

31. Which one of the following methods is used to mine limestone in Kenya?
- Deep shaft method.
 - Open cast method.
 - Panning.
 - Dredging.

32. Which one of the following groups consists of crops grown in Kenya during the pre-colonial period?
- Cassava and sorghum.
 - Rice and sisal.
 - Wheat and coffee.
 - Tea and sugarcane

33. Which one of the following is a way of promoting peace in society?
- Allowing many foreigners into the country.
 - Punishing suspected criminals.
 - Encouraging the spirit of forgiveness.
 - Reducing the number of political parties.

34. The court system in Kenya is headed by the
- Chief Magistrate
 - Chief Justice
 - Registrar of the High Court
 - Attorney General.

35. The following are conditions necessary for growing a cash crop in Africa.

- High temperatures throughout the year.
- Deep well-drained fertile soils.
- Shelter from strong winds.
- High rainfall throughout the year.

The crop that requires the conditions listed above is

- cocoa
- sisal
- pyrethrum
- tea.

36. The government of Swaziland is headed by

- a Secretary General
- a Prime Minister
- a President
- a King.

37. Three of the following are roles played by the early political associations in Kenya between 1914 and 1945. Which one is **not**?

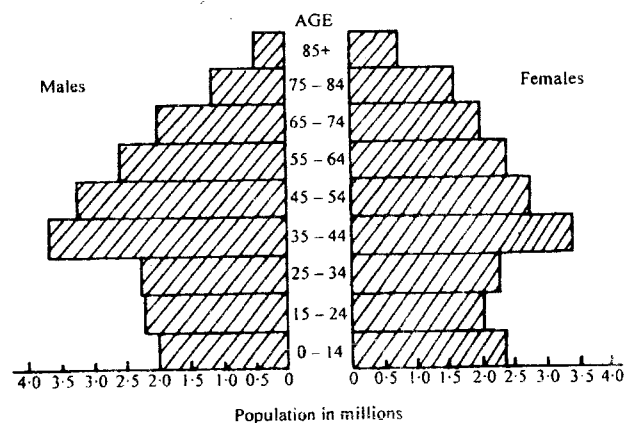
- Defending African culture.
- Fighting for better wages for workers.
- Demanding for the release of Jomo Kenyatta.
- Demanding that Africans be allowed to grow cash crops.

38. Mutua, a football player who is representing Kenya in the Commonwealth Games is promised a lot of money by a Canadian Coach if he agrees to play for Canada. He refuses the offer.

The action by Mutua shows that

- he loves his country
- he fears the Canadian
- he has enough money
- he is foolish.

39. The Age-sex pyramid below represents the population of Germany.



Which one of the following statements is **true** about the population according to the pyramid?

- Most of the population is over 55 years.
- There are more males than females at all ages.
- There are more female than male children at age 0-14 years.
- The number of males and females who are over 85 years are equal.

40. Which one of the following statements is **true** about the geographical position of Kenya?
 A. It borders the Atlantic ocean.
 B. It lies south of Sudan.
 C. It is found to the east of Somalia.
 D. It lies to the west of the prime meridian.
41. The **main** role of the opposition parties in a democratic system of government is to
 A. educate citizens on their rights
 B. nominate members to parliament
 C. promote development projects
 D. ensure that the country is administered fairly.
42. Road safety education is taught in primary schools in Kenya in order to
 A. prepare pupils to become traffic police officers
 B. create awareness on careful use of roads
 C. make learning more interesting
 D. teach pupils how to drive vehicles.
43. The **most** widespread means of passing information in the rural areas of Africa is by
 A. radio
 B. telegraph
 C. television
 D. newspapers.
44. The **main** problem facing agricultural cooperative societies in Kenya is
 A. employment of unqualified workers
 B. disagreements among leaders
 C. misuse of funds by officials
 D. unstable prices of products in the markets.
45. The following are farming practices in Africa.
 (i) Using the land communally
 (ii) Use of simple tools
 (iii) Ploughing along the contours
 (iv) Leaving the land fallow
 (v) Growing crops on large farms
- Which one of the following combination of farming practices applies to shifting cultivation?
 A. (i) (ii) (iv).
 B. (i) (ii) (iii).
 C. (ii) (iii) (v).
 D. (iii) (iv) (v).
46. Which one of the following is an achievement of Daniel arap Moi?
 A. He promoted communal farming.
 B. He was the first African representative to the Legislative Council.
 C. He was a founder member of Kenya African Union.
 D. He promoted soil conservation activities in the country.
47. Which one of the following statements is **true** about horticultural farming in both Kenya and the Netherlands? In both countries
 A. crops are grown on plantations
 B. farmers grow crops in green houses
 C. crops are grown on reclaimed land
 D. most of the work is done using machines.
48. According to the laws of Kenya, amending the constitution is the responsibility of
 A. the High Court
 B. the office of the President
 C. the National Assembly
 D. the Judicial Service Commission.
49. The **main** reason why wife inheritance should be discouraged in Kenya is because it leads to
 A. spread of HIV and AIDS
 B. increased population
 C. immoral behaviour
 D. misuse of family resources.
50. Who among the following Municipal Council officials is elected?
 A. The Town Clerk.
 B. The Treasurer.
 C. The Mayor.
 D. The Town Engineer.
51. Which one of the following organs of the United Nations (UN) is responsible for resolving disputes between member countries?
 A. The Secretariat.
 B. The Security Council.
 C. The General Assembly.
 D. The Economic and Social Council.
52. The **main** factor that influences the location of a furniture making industry is
 A. availability of transport
 B. availability of power
 C. availability of raw materials
 D. availability of market.
53. Lewa, a pupil at Chui Primary School has been refused by his teacher to go for break for failing to answer questions in class.
 Which one of the following child rights has Lewa been denied?
 A. The right to privacy.
 B. The right to leisure.
 C. The right to education.
 D. The right to security.
54. Which one of the following types of soil erosion is **correctly** matched with the area where it commonly occurs?

Type of erosion	Area
A. Gully erosion	- steep slopes
B. Rill erosion	- flat ground
C. Sheet erosion	- hill tops
D. Splash erosion	- gentle slopes

55. Which one of the following is the **best** way of conserving wildlife?
- Fencing the national parks.
 - Controlling the selling of wildlife products.
 - Establishing animal orphanages.
 - Educating people on the importance of wildlife.
56. The Atlas mountains were formed as a result of
- faulting
 - erosion
 - folding
 - volcanicity.
57. The **main** problem resulting from rapid population growth in the rural areas in Kenya is that it has led to
- shortage of land for agriculture
 - reduction of areas under forest
 - increased soil erosion
 - inadequate water for domestic use.
58. Three of the following are problems experienced in urban centres in Kenya. Which one is **not**?
- Rise of street families.
 - Shortage of workers.
 - Inadequate housing.
 - Traffic congestion.
59. David Smith, a former British citizen has acquired Kenyan Citizenship through naturalization. Smith may lose his Kenyan citizenship if he
- destroys his national identity card
 - refuses to vote during general elections
 - visits a foreign country
 - is found with illegal drugs.
60. In Kenya the national flag is raised in order to
- display its beauty
 - promote the Harambee spirit
 - promote loyalty among citizens
 - show the direction of the wind.

PART II RELIGIOUS EDUCATION

SECTION A: CHRISTIAN RELIGIOUS EDUCATION

61. The **main** teaching of the Genesis stories of creation is that
- human beings were the last to be created
 - human beings were created to multiply
 - God is the creator of the universe
 - God blessed the day of rest.
62. From the call of Abraham, Christians learn that they should
- go to strange lands to preach the good news
 - travel in groups when going on a journey
 - believe in dreams
 - live in peace.
63. The father of Esau and Jacob was
- Laban
 - Joseph
 - Noah
 - Isaac.
64. Moses was **not** willing to go back to Egypt when he was sent by God **mainly** because
- the Israelites did not know him
 - he was afraid of the Egyptian Pharaoh
 - his family was in Midian
 - he was not good in speaking.
65. Which one of the following commandments teaches Christians to be satisfied with what they have?
- Respect your father and mother.
 - Do not accuse anyone falsely.
 - Keep the Sabbath day holy.
 - Do not desire your neighbours' property.
66. Which one of the following was an achievement of King David?
- Writing the first books of the Bible.
 - Bringing the Ark of the covenant to Jerusalem.
 - Fighting against idol worship in Israel.
 - Judging cases in Israel.
67. "I inherited the vineyard from my ancestors" Naboth replied. "The Lord forbid that I should let you have it" (1 Kings 21:3). From this incident of King Ahab and Naboth, Christians learn that they should
- work as a team
 - enjoy the fruits of their labour
 - look after their gardens
 - be fair in their dealings.
68. Prophet Elisha told the Shunamite woman that she was going to have a son because she
- had asked for a miracle
 - was a hardworking woman
 - was a kind person
 - was a famous person.
69. Which one of the following was a prophecy of Isaiah about the Messiah? He would be
- born of a virgin
 - born in Jerusalem
 - called a Nazarine
 - called out of Egypt.
70. The reason why Joseph and Mary went to Bethlehem the night Jesus was born is because they wanted to
- meet their parents
 - meet king Herod
 - register in their home town
 - look for a place to deliver the baby.

71. What did Simeon say about baby Jesus when he was presented in the temple?
 A. He would feed the hungry.
 B. His name would be holy.
 C. He would be a light to the Gentiles.
 D. He would show mercy to the people.
72. Jesus was baptised in River Jordan because he wanted to
 A. join others in repenting their sins
 B. show that John was a powerful man
 C. encourage others to be baptised
 D. fulfill the will of God.
73. A lesson that Christians learn from the parable of the talents is to
 A. help their workmates
 B. use their abilities well
 C. love one another
 D. get advice from the leaders.
74. Which one of the following miracles of Jesus shows that he was a universal saviour?
 A. The healing of the centurion's servant.
 B. The healing of the blind Bartimaeus.
 C. The cure of the paralysed man.
 D. The feeding of the five thousand.
75. From the teaching of Jesus on forgiveness in the Lord's prayer, Christians learn that they should forgive
 A. without expecting returns
 B. as many times as possible
 C. those who ask for it
 D. those who wrong them.
76. The main reason why Peter denied Jesus is because he
 A. was afraid of the crowd
 B. lacked faith in him
 C. was shocked by the events
 D. was disappointed with his actions.
77. The two followers of Jesus walking to Emmaus came to know that he was the risen Lord when he
 A. asked them what they were talking about
 B. shared the bread with them
 C. accepted to stay with them
 D. explained to them the written word.
78. From the Apostle's creed we learn that God is
 A. a saviour
 B. a judge
 C. our father
 D. our Lord.
79. Which one of the following happenings took place on the day of Pentecost?
 A. Jesus ascended into heaven.
 B. The rocks split apart.
 C. A lame man was healed.
 D. People spoke in many languages.
80. Which one of the following is a gift of the Holy Spirit?
 A. Wisdom.
 B. Goodness.
 C. Gentleness.
 D. Humility.
81. The early Christians chose the seven deacons because they wanted them to
 A. distribute food among the widows
 B. help Christians sell their property
 C. witness to the believers in prison
 D. stop the persecution of believers.
82. In some traditional African communities people worship in a cave because it
 A. is a place to hide
 B. is God's dwelling place
 C. protects them from danger
 D. is a quiet place.
83. Which one of the following wedding practices is found in both Christian and traditional African communities?
 A. Prayers are offered for the couple.
 B. A certificate is given to the couple.
 C. Sacrifices are made to thank God.
 D. Holy communion is given to the couple.
84. In traditional African communities kinship ties are important mainly because they
 A. make relatives stay together
 B. give guidance in matters of the family
 C. make clan members to respect one another
 D. give relatives a sense of belonging.
85. The youth in traditional African societies are taught moral values by
 A. seers
 B. peers
 C. elders
 D. warriors.
86. The virtue of self control is best shown by Christians when they
 A. honour those in authority
 B. tolerate those who mistreat them
 C. obey rules of the society
 D. care for the sick.
87. While playing in the school field with your friends you pick a fifty Kenya shilling note, what would you do?
 A. Keep the money to use later.
 B. Take the money to the church.
 C. Give it to a needy pupil.
 D. Find out who the owner is.
88. The best way to spend leisure after sitting the Kenya Certificate of Primary Education examination is by
 A. helping the old people
 B. visiting former classmates
 C. listening to Christian music
 D. writing letters to former classmates.

89. Titus, a Standard Seven pupil does not want to help his brother in cleaning their compound because he feels it is a dirty job.

What advice would you give him? Tell him to

- A. do the work and ask for payment
- B. let the brother do it alone
- C. do the work and wash himself later
- D. ask his cousin to do it for him.

90. The parents of Anne a Standard Eight pupil, want her to get married to an old wealthy man hoping that this would improve their life. As a Christian what is the best action for her to take?

- A. Run away from home.
- B. Refuse and seek help from her teachers.
- C. Report the matter to the local pastor.
- D. Refuse and seek help from friends.

SECTION B: ISLAMIC RELIGIOUS EDUCATION

61. Which one of the following verses from the Qur'an is found in *Surah An-Nas*?

- A. "So glorify the praises of your Lord."
- B. "Let them worship the Lord of this house."
- C. "Say: I seek refuge in the Lord of mankind."
- D. "Pray to your Lord and sacrifice to Him alone."

62. People who are busy accumulating wealth and forgetting the punishment of disobeying Allah are mentioned in *Surah*

- A. *At-Takathur*
- B. *Al-Maun*
- C. *Al-Fil*
- D. *Al-Qariah*.

63. Which one of the following is a teaching of *Surah Adiyat*?

- A. The Night of Power is better than a thousand months.
- B. Human beings are at a loss except those who have faith.
- C. Human beings will be like moths on the Day of Judgement.
- D. All things will be exposed on the Day of Judgement.

64. The *Surah* which must be recited by Muslims seventeen times in one day is

- A. *Al-Bayyinah*
- B. *Al-Fatihah*
- C. *Al-Ikhlash*
- D. *Al-Maun*.

65. Which one of the following *surahs* teaches that Allah provides food and security?

- A. *Al-Kauthar*.
- B. *Al-Lahab*.
- C. *Al-Falaq*.
- D. *Al-Quraish*.

66. The Prophet (p.b.u.h) said, "None of you believe until you do to your brother what you would like done to you."

This *Hadith* is about

- A. *Fiqh*
- B. *Iman*
- C. *Zakat*
- D. *Tawheed*.

67. The Prophet (p.b.u.h) said, "He is not among us who eats and fills up his stomach while his neighbour is hungry."

The main teaching of this *Hadith* is:

Muslims must

- A. not eat before their neighbours have eaten
- B. treat their neighbours like brothers and sisters
- C. not discriminate against their neighbours
- D. share their food with their needy neighbours.

68. Which one of the following statements is true about a genuine *Hadith*?

- A. It must have a long chain of transmitters.
- B. It must have been read by Imam Bukhari.
- C. It must be traced to the Prophet (p.b.u.h).
- D. It must mention the name of the Swahaba.

69. Three of the following are pillars of *Salat*, which one is not?

- A. Reciting another *Surah* after *Fatihah*.
- B. *Takbiratul Ihram*.
- C. Performing *rukoo*.
- D. Performing *sijdat*.

70. When is *Tahiyattul Masjid* performed?

- A. After sunrise.
- B. After midnight.
- C. Immediately after entering the mosque.
- D. Immediately after *fardh* prayers.

71. Which one of the following acts nullifies *Saum*?

- A. Taking an injection.
- B. Cooking food.
- C. Drinking water.
- D. Crying loudly.

72. Which one of the following places is not a station of *Hajj*?

- A. *Mina*.
- B. *Muzdalifa*.
- C. *Arafat*.
- D. *Quba*.

73. Which one of the following items is liable for *Zakat*?

- A. Owner occupied house.
- B. Money saved in the bank.
- C. Furniture in the house.
- D. Personal clothes.

74. A person converting to Islam is required to

- A. recite and believe in the *Kalima*
- B. take a ritual bath
- C. marry a Muslim
- D. go to Makka for *Hajj*.

75. The most important teaching about the belief in *Yaumul Qiyama* is that it is a day when
 A. the world will come to an end
 B. eternal life will begin
 C. parents will run away from their children for fear of Allah
 D. good deeds will be rewarded and bad deeds punished.
76. Three of the following are names of angels, which one is not?
 A. *Ridhwan*.
 B. *Idris*.
 C. *Israfil*.
 D. *Malik*.
77. Which one of the following acts is most likely to lead to corruption?
 A. Begging.
 B. Gambling.
 C. Taking part in sports.
 D. Borrowing money.
78. Islam forbids the hoarding of goods in order to fight against
 A. pride
 B. intolerance
 C. injustice
 D. unfaithfulness.
79. Which one of the following phrases is used by Muslims to console the bereaved members of a family?
 A. *Assalamu aleikum warahmatullah*.
 B. *Alhamdulillah Rabil alamin*.
 C. *Astaghfirullah L'adhim*.
 D. *Inna Lillahi waina ilayhi rajiun*.
80. Asiya's friend Mariam has not come to school because her mother is sick. The best course of action for Asiya to take is to
 A. visit Mariam's mother after school
 B. send Mariam a letter of sympathy
 C. ask the class prefect to visit Mariam
 D. go home and inform her mother about it.
81. Yusuf, a standard seven pupil borrowed a book from his friend Hassan, but before he could give it back, Hassan was transferred to another school. The right course of action for Yusuf to take is to
 A. look for Hassan and give him the book
 B. give the book to the class teacher
 C. sell the book and keep the money
 D. write his name on the book and keep it.
82. Which one of the following is a duty of Muslims to their neighbours?
 A. To give them *Zakat*.
 B. To offer them greetings.
 C. To find out what they do.
 D. To watch over their houses.
83. Which one of the following is the best way of celebrating *Idd-ul-fitr*?
 A. Giving *zakatul fitr* and going for prayers.
 B. Wearing new clothes and holding a feast.
 C. Going for a family outing.
 D. Visiting friends and relatives.
84. Which one of the following is the first ritual to be performed when a baby boy is born?
 A. The baby is circumcised.
 B. The baby is given a name.
 C. Two goats are slaughtered and the meat distributed.
 D. *Adhan* is said in the right ear of the baby.
85. Which one of the following events took place in the month of *Muharram*?
 A. Prophet Muhammad (p.b.u.h) was born.
 B. The Muslims conquered Makka.
 C. Prophet Musa (A.S) freed the Banu Israil from Fir'aun.
 D. Muslims defeated the Quraish in the battle of Badr.
86. The main reason why the Quraish rejected the message of Prophet Muhammad (p.b.u.h) is that
 A. they could not believe that one God could control the whole world
 B. they did not want to abandon the religion of their ancestors
 C. they wanted to see Allah physically
 D. the message condemned their evil deeds.
87. According to the terms of the treaty of Hudaibiya, the peace between the Muslims and the Quraish was to last for
 A. three years
 B. five years
 C. seven years
 D. ten years.
88. The early Muslims settled along the coast of Kenya in order to
 A. trade with the local people
 B. colonise the people of the region
 C. control the sea route to India
 D. protect the region from European invasion.
89. Which one of the following statements is true about Prophet Nuh (A.S)?
 A. He built the Kaaba in Makka.
 B. He was swallowed by a whale.
 C. He built the ark.
 D. He healed the sick.
90. Which one of the following religions is correctly matched with its place of worship?
- | Religion | Place of worship |
|-----------------|------------------|
| A. Judaism | church |
| B. Hinduism | temple |
| C. Christianity | synagogue |
| D. Sikhism | mosque |

SECTION C HINDU RELIGIOUS EDUCATION

61. The sound of AUM at the beginning of a Hindu prayer signifies that Paramatma is
 A. All – loving
 B. All – knowing
 C. Omnipresent
 D. Omnipotent.
62. Which one of the following boxes contains the qualities of Paramatma as *Satchitanand*?
- | | |
|------------------------------------|-----------------------------------|
| Truth
Bliss
Knowledge | Love
Patience
Peace |
| A | B |
| Humility
Generosity
Kindness | Justice
Mercy
Righteousness |
| C | D |
63. The quality of Paramatma demonstrated in the personality of Veda Vyasa is
 A. wisdom
 B. tolerance
 C. courage
 D. compassion.
64. In which *avatar* did Lord Vishnu assist the Deva and Danava to get *amrit* from the ocean?
 A. *Matsya*.
 B. *Kurma*.
 C. *Vaman*.
 D. *Narsimha*.
65. Which one of the following practices was opposed by Lord Buddha?
 A. Use of Pali language.
 B. Meditation to attain *Nirvana*.
 C. Sending out of missionaries.
 D. Sacrificing of animals.
66. Which one of the following scriptures teaches morals through simple stories?
 A. *Veda*.
 B. *Puran*.
 C. *Shruti*.
 D. *Upanishad*.
67. Which one of the following statements is **not** true about Sita?
 A. She was found as a baby in a field.
 B. She was able to lift the *Shiv Dhanush* as a child.
 C. She was abducted by Ravan.
 D. She was imprisoned in Ravan's palace.

68. Which one of the following scriptures contains the teachings of Lord Buddha?
 A. *Kalpasutra*.
 B. *Ratnatraya*.
 C. *Tripitika*.
 D. *Shikshapatri*.
69. Who among the following personalities preached the principle of *Anekantvad*?
 A. Lord Mahavir.
 B. Guru Arjandev.
 C. Chaitanya Mahaprabhu.
 D. Jagadguru Shankaracharya.
70. Swami Dayanand came to know that his cook had served him with poisoned food. He told the cook to run away to avoid being punished by the King. Swami Dayanand practiced the principle of
 A. *Ahimsa*
 B. *Dhruiti*
 C. *Kshama*
 D. *Satya*.
71. The Sikhs practise the principle of *Wand ke Chakhana* in a *Gurudwara* when they
 A. brush shoes
 B. wash dishes
 C. serve *Langar*
 D. clean *Guru Darbar*.
72. During the *Vivaha Sanskar*, the bride and the groom take a vow to share the ups and downs in their family. This is an expression of
 A. *Aparigraha*
 B. *Dama*
 C. *Dhee*
 D. *Dhruiti*.
73. The Jain principle that would best help in the fight against corruption is
 A. *Ahimsa*
 B. *Asteya*
 C. *Brahmacharya*
 D. *Satya*.
74. The following are steps of a ritual performed when visiting a *Mandir*:
 (i) Devotees bow to the presiding *Murti* of the temple.
 (ii) Devotees go round the *Garbha Graha*.
 (iii) Devotees continuously chant the name of Paramatma.
 (iv) Devotees bow to the four directions.
- The ritual described above is
 A. *Pradakshina*
 B. *Abhishek*
 C. *Jaap*
 D. *Aarti*.

75. Which one of the following *Kakars* is a symbol of unity among the Sikhs?
 A. *Kaccha*.
 B. *Kanga*.
 C. *Kirpan*.
 D. *Kada*.
76. What do Jains apply on their foreheads when visiting a *Derasar*?
 A. *Akshat*.
 B. *Chandan*.
 C. *Kumkum*.
 D. *Vibhuti*.
77. Which one of the following is a Jain place of pilgrimage?
 A. Ayodhya.
 B. Palitana.
 C. Amarnath.
 D. Nanakana Sahib.
78. The following are events commemorated during a Hindu festival:
 (i) Swami Dayanand attained salvation.
 (ii) Guru Har Gobind was released from prison.
 (iii) Lord Mahavir attained *Moksha*.
 (iv) Lord Rama returned to Ayodhya.
- The festival during which the above events are commemorated is
 A. *Paryushan*
 B. *Holi*
 C. *Diwali*
 D. *Vaisakhi*.
79. Which one of the following scriptures is read during the festival of *Paryushan*?
 A. *Adi Granth*.
 B. *Dhammapada*.
 C. *Shikshapatri*.
 D. *Kalpasutra*.
80. Which one of the following festivals is celebrated to mark the victory of good over evil?
 A. *Vijaydashmi*.
 B. *Janmashtami*.
 C. *Maha Shivaratri*.
 D. *Rishibodh Divas*.
81. Which one of the following symbols is associated with *Tirthankar* Neminath?
 A. Conch shell.
 B. Water jar.
 C. Crescent.
 D. Swastika.
82. Who among the following personalities practised *Karma* Yoga?
 A. Shabari.
 B. Nivedita.
 C. Meerabai.
 D. Chandanbala.
83. *Shavasana* is practised in order to
 A. relax the body
 B. induce deep sleep
 C. assist digestion
 D. lose weight.
84. When is *Surya Namaskar* performed?
 A. In the middle of the night.
 B. In the evening.
 C. In the afternoon.
 D. In the morning.
85. Which one of the following yoga helps an individual develop complete faith in and loyalty to *Paramatma*?
 A. *Jnana* Yoga.
 B. *Karma* Yoga.
 C. *Bhakti* Yoga.
 D. *Raja* Yoga.
86. Which one of the following principles if practised would help in the fight against the spread of HIV/AIDS?
 A. *Aparigraha*.
 B. *Indriya Nigraha*.
 C. *Asteya*.
 D. *Anekantvad*.
87. Each morning, Vishal and Kalyani touch the feet of their parents. This is **mainly** a sign of
 A. love
 B. kindness
 C. gratitude
 D. respect.
88. Hindus donate foodstuffs to the victims of the drought. This act demonstrates the principle of
 A. *Pranidaya*
 B. *Shaucham*
 C. *Kshama*
 D. *Akrodha*.
89. Which one of the following festivals is celebrated during the *Varsha Ritu*?
 A. *Navaratri*.
 B. *Shivaratri*.
 C. *Janmashtami*.
 D. *Rama Navami*.
90. Which one of the following days of the week is **correctly** matched with the corresponding planet.
- | Day of the week | Planet |
|--------------------|---------|
| A. <i>Somvar</i> | Venus |
| B. <i>Guruvar</i> | Jupiter |
| C. <i>Shanivar</i> | Mars |
| D. <i>Budhvar</i> | Saturn |