

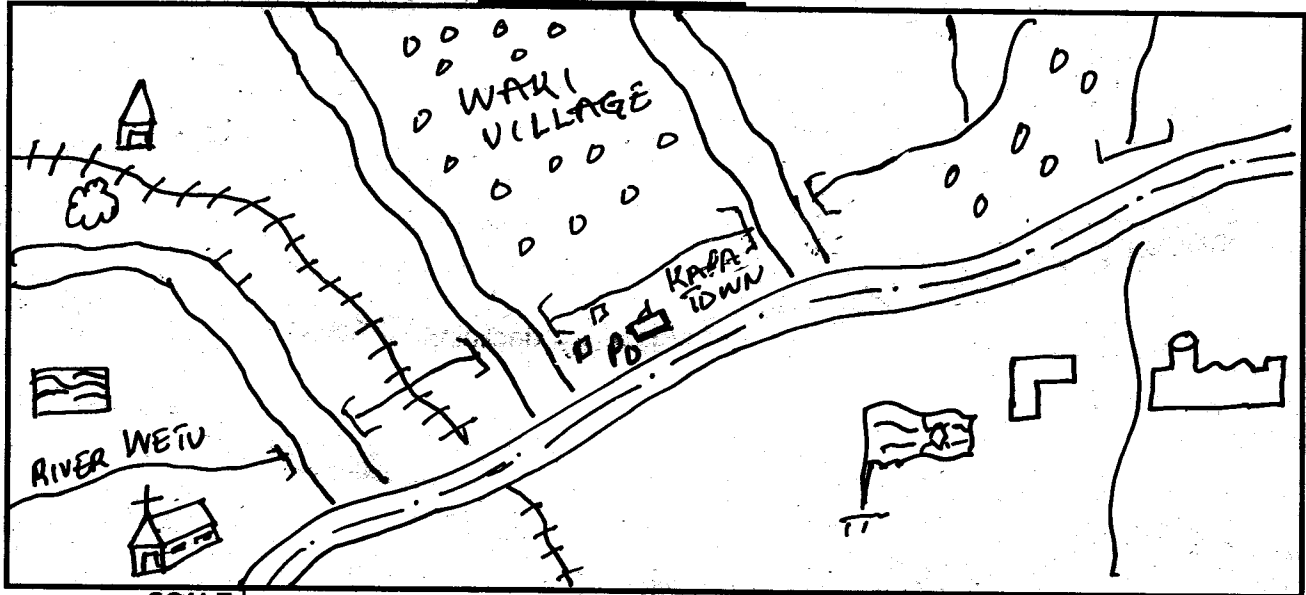
# GATUNDU DISTRICT

## MID TERM 3 - 2014

TIME: 2 HR 15 MIN

### STD 5 - SOCIAL STUDIES/C.R.E

#### TUMAINI AREA



KEY:

SCALE

0 1 2 3 4 5 6 7 8 9 10 km

	School		River		Permanent building		Quarry Church
	Tea factory		Cattle deep		Post office		D.O's office
	Tarmac road		Bridge		Settlement		Railway station
	Railway		Murrum road				

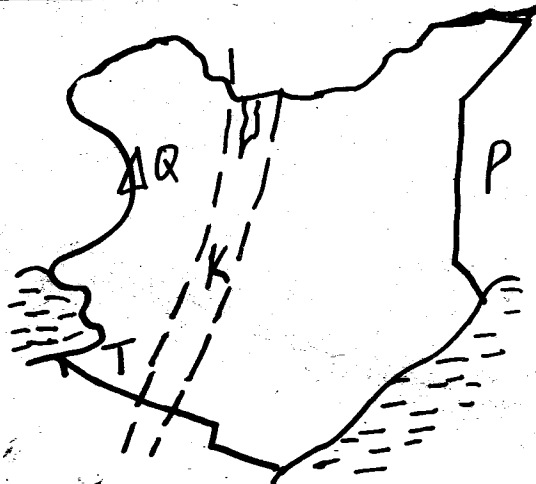
Use the map of Tumaini Area to answer questions 1-7

- River Kwetu flows from \_\_\_\_\_ to \_\_\_\_\_  
 A. S.W to N.B. S.W to N.E  
 C. N to S.W.D. S.E to N  
*SB CRT*
- What is the direction of the church from the post office?  
 A. N.W B. S.W C. N.E D. S.E
- People of Tumaini area practice \_\_\_\_\_ religion?  
 A. Islam B. Hindu  
 C. Traditional D. Christianity
- Tumaini area is divided into \_\_\_\_\_ divisions  
 A. One B. Two C. Four D. Three
- What is likely to be mined in the Quarry  
 A. Tiles B. Stones C. Timber D. Tea
- The railway line is likely to transport  
 A. Cattle B. Timber  
 C. Stones D. Flowers
- The **MAIN** means of transport in Tumaini area is  
 A. Railway B. Air C. Water D. Road
- The walls of the Rift Valley are known as \_\_\_\_\_  
 A. Escarpments B. Ranges

- Which one of the following is an island found on Lake Victoria?  
 A. Chulu B. Pate C. Mungano D. Lamu
- Abaluhya, abagusii and Abakuria are examples of \_\_\_\_\_  
 A. Central Bantu B. Eastern Bantu  
 C. Western Bantu D. Highlands Nilotes
- In the traditional education, children were taught by \_\_\_\_\_  
 A. Teachers B. Age mates  
 C. Relatives D. Adults
- The type of rain that falls near large water bodies is called \_\_\_\_\_  
 A. Relief B. Convectional  
 C. Cyclonic D. Orographic
- Repair of motor vehicles is an examples of \_\_\_\_\_ industry  
 A. Manufacturing B. Assembly  
 C. Service D. Processing
- The road sign below warns motorists about?  
 A. Speed Limit  
 B. Danger Ahead  
 C. No



15. The MAIN staple food of Kenya is?  
 A. Banana B. Tea C. Coffee D. Maize  
**Use the diagram below to answer question 16-18**




16. The feature marked K is?  
 A. Plateau B. Plain  
 C. River D. Rift Valley
17. The mountain marked Q is?  
 A. Kilimanjaro B. Marsabit  
 C. Elgon D. Kenya
18. The town marked T is likely to be?  
 A. Nairobi B. Kisumu  
 C. Mombasa D. Nakuru
19. Artefacts are important because?  
 A. They are kept in museums  
 B. They show the history of the way of life of a community  
 C. They can be sold for a lot of money  
 D. They are made by skilled people
20. The MAIN problem facing wildlife in Kenya is?  
 A. Poaching B. Flooding  
 C. Drought D. Fire outbreak
21. Wembuye town in the Western region of Kenya is a town where \_\_\_\_\_ is produced  
 A. Vehicles B. Clothes  
 C. Paper D. Sugar
22. Heavy and bulky commodities can be transported from one continent to another by?  
 A. Air B. Road C. Railway D. Water
23. Several age-groups formed?  
 A. An age-set B. A tribe  
 C. A Nation D. A clan
24. National census in Kenya is conducted after every \_\_\_ years  
 A. Six B. Five C. Ten D. Twenty
25. Which physical feature borders Kenya to the South East?  
 A. Indian Ocean B. Mt Elgon  
 C. Awara Plains D. Loman Swamp
26. The following are fresh water lakes. Which

one is **NOT**?

- A. Lake Naivasha B. Lake Magadi  
 C. Lake Jipe D. Lake Challa
27. Which one of the following is **NOT RIGHT** entitled to a Kenyan?  
 A. Right to life  
 B. Right to incite others  
 C. Right to ownership of property  
 D. Right to security
28. On 1st May, We celebrate?  
 A. Mashujaa day B. Madaraka day  
 C. Labour day D. Jamhuri day
29. Who is the Deputy President of Kenya?  
 A. Willy Mutunga B. Uhuru Kenyatta  
 C. Kalonzo Musyoki D. William Ruto
30. Which method of communication is declining with time  
 A. Messenger B. Letter  
 C. Mobile phone D. Television
31. There are how many counties in Kenya?  
 A. 60 B. 7 C. 47 D. 8
32. The type of breeze shown above is?  
 A. Sun breeze  
 B. Land breeze  
 C. Shore breeze  
 D. Sea breeze
- 
33. The **MAIN** crop grown under irrigation in Perkerra irrigation scheme is?  
 A. Cotton B. Sugar cane  
 C. Onions D. Rice
34. Diatomite is a mineral mined at Kiriandusi near Gilgil. The method of mining used is  
 A. Drilling B. Opencast  
 C. Dredging D. Evaporation
35. The rock mined from Lake Magadi that give us Soda ash is called?  
 A. Trona B. Flourspar  
 C. Duiatomite D. Limestone
36. The Kenyan community matched with the area of origin is?  
 A. Teso - Congo forest  
 B. Maasai - Ethiopia  
 C. Luo - Bha-el-Ghazah  
 D. Taita - Shungwaya
37. The weather measuring instrument alongside is used to measure  
 A. Air pressure  
 B. Strength of wind  
 C. Speed of wind  
 D. Amount of rainfall
- 
38. Three of the following are traditional methods of storing food **except**?  
 A. Granary B. Basket

39. The title of Ameru religious leader was?  
 A. Mugwe B. Mugambi  
 C. Nkomango D. Kiruka
40. Which one of the following animal breeds is the **odd** one out?  
 A. Jersey B. Ayrshire  
 C. Zebu D. Freshian
41. Longitudes are \_\_\_\_\_ lines drawn from North to South  
 A. Short B. Long  
 C. Thick D. Imaginary
42. The administrator in charge of a county is?  
 A. Senator B. Governor  
 C. Chief D. Mayor
43. The vegetation found in the swamp is called?  
 A. Mangrove B. Scrub  
 C. Papyrus and reeds D. Savannah
44. Three of the following are problems facing urban centres. Which one is not?  
 A. Adequate social ammenities  
 B. Growth of slums  
 C. Unemployment  
 D. Over population
45. Which colours on our national flag represents vegetation?  
 A. Black B. Red C. Green D. White
46. The body incharge of elections in Kenya is?  
 A. E.C.K B. K.B.C  
 C. I.I.E.B.C D. I.E.B.C
47. A neclear family is made up of?  
 A. Father, Uncle and Children  
 B. Father, Mother and Children  
 C. Mother, Aunt and Relatives  
 D. Mother, Uncle and Children
48. The laws that govern our country are written in a document called  
 A. Referendum B. Constitution  
 C. Parliament D. Draft
49. Below are the basic human needs. Which one is **Not**?  
 A. Clothing B. Shelter  
 C. Car D. Food
50. River Ewaso Nyiro drains its water into?  
 A. Lake Victoria B. Indian Ocean  
 C. Lake Turkana D. Lorian Swamp
51. The physical feature shared by Kenya, Uganda and Tanzania is?  
 A. Lake Victoria B. Nile  
 C. Rift Valley D. Indian Ocean



- The type of rainfall shown in the diagram is?  
 A. Relief B. Conventional  
 C. Convectional D. Downpour
53. Which statement is **true** about altitude?  
 A. Distance from the sea  
 B. Height above sea level  
 C. Distance from the equator  
 D. Another word for altitude
54. One may become a Kenyan citizen through  
 A. Employment B. Movement  
 C. Baptism D. Registration
55. Who is the head of the judiciary in Kenya  
 A. Cabinet Secretary B. Governor  
 C. Chief Justice D. President
56. Three of the following are **benefits** of forests. Which one is **not**?  
 A. They are a home for wildlife  
 B. They encourage soil erosion  
 C. They protect sources of water  
 D. They provide employment opportunities to many people
57. Who among the following headers had his people in welcoming the British?  
 A. Nabongo Mumias  
 B. Koitalel Arap Samoei  
 C. Ababukusu  
 D. Mekatilili wa Menza
58. Cutting down of trees is referred to as?  
 A. Afforestation B. Re-afforestation  
 C. De-forestation D. Ploughing
59. Who was the third President of Kenya?  
 A. Raila Odinga B. Jomo Kenyatta  
 C. Arap Moi D. Mwai Kibaki
60. In traffic lights, red colour means  
 A. Wait B. Stop C. Be ready D. Go

### C.R.E

61. The best reason why we should take care of plants, insects, animals and birds is  
 A. They are living things  
 B. They give us food  
 C. They are part of God's creation  
 D. They feed
62. Adam and Eve \_\_\_ God and they were sent out of Eden  
 A. Praised B. Disobeyed  
 C. Hid D. Obeyed
63. \_\_\_\_\_ buried the body of Jesus Christ  
 A. Joseph of Arimathea B. Simon of Cyrene  
 C. Peter D. Judas Iscariot
64. The husband of Hannah was?  
 A. Abraham B. Moses C. Elkana D. Abel
65. The bible says that we are \_\_\_ made  
 A. Fearfully and beatifully  
 B. Fearfully and wonderfully

- C. Wonderfully and lovingly  
D. Thoroughly and perfectly
66. Among the ten commandments, which one has a promise?  
A. Do not covet  
B. Do not kill  
C. Do not commit adultery  
D. Obey your parents
67. Levi was a \_\_\_\_  
A. Tax collector                      B. Priest  
C. Farmer                                D. Teacher of the law
68. The mother in law of Ruth was  
A. Orpah    B. Mahlon    C. Naomi    D. Chilion
69. \_\_\_\_ and \_\_\_\_ healed a crippled beggar at the beautiful gate?  
A. James and John            B. Peter and John  
C. Phillip and Paul            D. Peter and Andrew
70. The stage of growth between 13 and 18 years is known as  
A. Adolescence                      B. Childhood  
C. Adulthood                         D. Maturity
71. The greatest commandment talks about?  
A. Honouring your parents  
B. Observing the sabbath day  
C. Loving God above everything  
D. Not accusing anyone falsely
72. Which among the following is NOT a fruit of holy spirit?  
A. Peace                                B. Joy  
C. Self Control                        D. Wisdom
73. Who among the following people saw a stair way to heaven and called that place Bethel?  
A. Jacob                                 B. Abraham  
C. Samuel                                D. Daniel
74. Which miracle shows that Jesus had power over life and death?  
A. Changing water into wine  
B. Calming the storm  
C. Raising Jairus daughter  
D. Feeding five thousand people
75. What is child labour?  
A. Good treatment of children  
B. Work that is harmful to children  
C. Work done to help parents  
D. Work we do in school.
76. Who was sent to king Ahab to warn him when he took Naboths vineyard.  
A. Elijah    B. Samuel    C. God    D. Ezekiel
77. Christians celebrate Easter to remember?  
A. Birth of Jesus  
B. Death and Resurrection of Jesus  
C. Resurrection of Jesus  
D. Death of Jesus on the cross
78. Paul and Silas were persecuted because of  
A. Stealing from people  
B. Accusing their authority  
C. Spreading the gospel of Jesus Christ  
D. Causing trouble in the city
79. In Traditional African Society, passage from childhood to adulthood was through?  
A. Baptism                                B. Naming  
C. Death                                    D. Initiation
80. The book that describes the movement of Israelites out of Egypt is known as  
A. Exodus                                 B. Genesis  
C. Leviticus                               D. Numbers
81. Which of the following is not experienced by girls when growing?  
A. Hips broaden                        B. Voice breaks  
C. Hips widen                            D. Breasts grow
82. "Love your enemy" This was said by ?  
A. Saul    B. Paul    C. Jesus    D. John
83. Hindus are to the \_\_\_\_\_ as Christians are to the church  
A. Temple                                 B. Mosque  
C. Church                                 D. Convent
84. \_\_\_\_\_ saw the burning bush  
A. David    B. John    C. Jesus    D. Moses
85. Joseph restored good relationship with his brothers when he \_\_\_\_  
A. Interpreted their dream  
B. Forgave them in Egypt  
C. Went to herdsheep with them  
D. Gave them food
86. The worship of objects as gods is known as?  
A. Adultery                                B. Polygamy  
C. Idolatry                                 D. Monogamy
87. Five years ago Jane was 1 metre tall and now she is 1.2 metre tall. We say that she is \_\_\_\_ grown.  
A. Mentally                                B. Emotionally  
C. Physically                              D. Socially
88. Who was the first Christian Martyr?  
A. John    B. Stephen  
C. Paul    D. Elijah
89. Among the following people, who committed murder?  
A. Cain    B. Abel  
C. Abraham    D. Ahab
90. Your best friend become sick while in school. The best thing that could have been done for him was?  
A. Give him medicine  
B. Ignore him  
C. Pray for him  
D. Take him to hospital