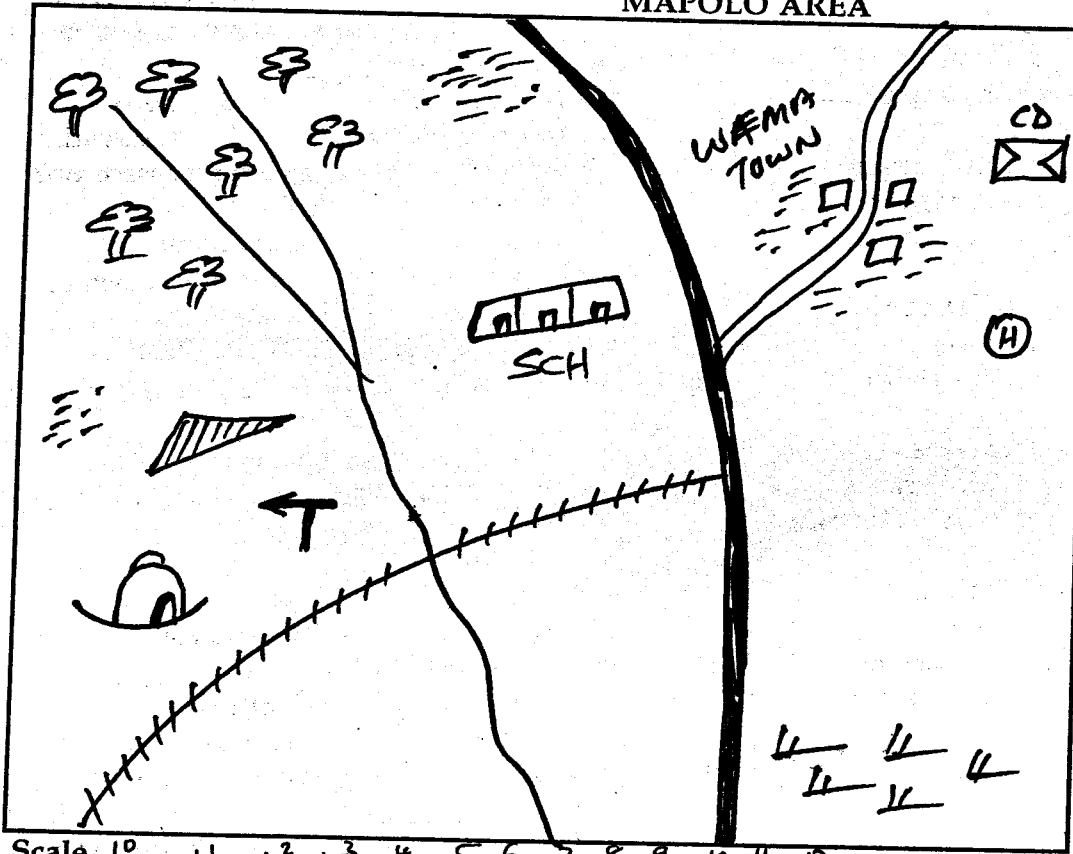


Study the map of Mapolo Area and answer the questions below 1-7.

MAPOLO AREA

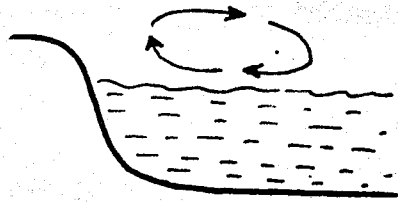


Key	
	School
	Scrubs
	Hospital
	Tarmac rd.
	Mosque
	Forest
	Murrum rd.
	Railway
	Settlement
	Permanent Building
	Flower Plantation
	Airstrip
	Cattle dip

Scale 0 1 2 3 4 5 6 7 8 9 10 11 12

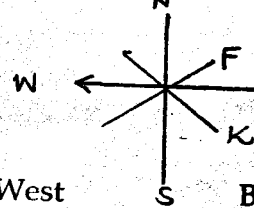
- The cattle dip in Mapolo Area is to the _____ the hospital.
 A. East B. West
 C. North D. South
- Which is the main factor that has contributed to the settlement of Wema Town?
 A. Road junction B. Forest
 C. Hospital D. Railway
- State the economic activity is not found in Mapolo Area?
 A. Trade B. Transport
 C. Mining D. Farming
- The lowest part of Mapolo Area is likely to be _____
 A. North B. South
 C. South East D. North West
- Calculate the distance of the tarmac road in Mapolo Area is about:-
 A. 13km B. 12km
 C. 6km D. 15km
- Which crop can also be grown on the South Eastern part of the map?
 A. Rice B. Coffee
 C. Tea D. Sisal
- The flowers grown at the flower plantation are bestly transported by?
 A. water B. air
 C. railway D. road
- Which of the following shows the qualities of a good citizen?
 A. Patriotic B. Selfish
 C. Christianity D. All-knowing
- A good map should have the following elements except?
 A. Frame B. Drawing
 C. Scale D. Key
- Which one of the following is a drainage feature?
 A. Mountain B. Hill
 C. Plain D. Lake
- Population distribution is influenced by the following factors except?
 A. Mountain B. Good soils
 C. Trees D. Government policy

12. Who was the former president of Kenya?
 A. Mwai Kibaki
 B. Raila Odinga
 C. Daniel Arap Moi
 D. Jomo Kenyatta
13. The natural homes for wildlife are also known as _____
 A. habitats
 B. holes
 C. forest
 D. caves
14. Which one of the following is **not** a traditional ceremony?
 A. Baptism
 B. Child naming
 C. Birth
 D. Marriage
15. What type of rainfall is found around Mt. Elgon?
 A. Relief
 B. Windward
 C. Convectional
 D. Heavy
16. The Western Bantu includes all the following **except**?
 A. Aembu
 B. Abagusii
 C. Abakuria
 D. Abaluhya
17. The following rivers drain in L. Victoria **except**?
 A. R. Nyando
 B. R. Kerios
 C. R. Yalla
 D. R. Mara
18. Which of the following communities is **correctly** matched with their area of origin?
 A. Meru- Sudan
 B. Rendile -Sudan
 C. Taita- Congo Forest
 D. Maasai-Somali
19. The breeze show below is known as _____



- A. Onshore breeze
 B. Late breeze
 C. Land breeze
 D. Sea breeze
20. The breeze drawn above occurs during?
 A. Daytime
 B. Night time
 C. Morning hours
 D. Afternoon
21. After the birth of a child a _____ ceremony was held.
 A. Naming
 B. Death
 C. Religion
 D. Marriage
22. Which one of the following was **not** taught to girls in the old days?
 A. Looking after animals
 B. Caring for babies
 C. Cooking
 D. Washing utensils

23. Cattle which are kept for meat are called
 A. Lion
 B. Dairy
 C. Beef
 D. Bulls
24. Who is the current Prime Minister in Kenya?
 A. Daniel Moi
 B. Raila Odinga
 C. Mwai Kibaki
 D. Kalonzo Musyoka
25. The ruler of the Abawanga people in the past was called _____
 A. Namachanja
 B. Odera
 C. Nabongo Mumia
 D. Mudavadi
26. Which of the following is **not** a cash crop?
 A. Maize
 B. Tea
 C. Coffee
 D. Sugarcane
27. The sun rises from _____ and sets to the _____
 A. West, East
 B. East, West
 C. North, South
 D. North West
28. The point marked K is _____

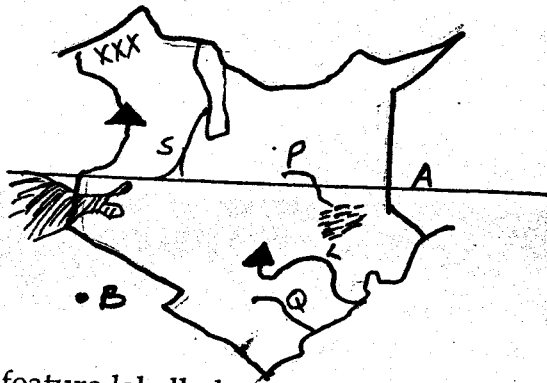


- A. West
 B. East
 C. North South
 D. South East
29. The point marked F is called _____
 A. North
 B. North East
 C. South East
 D. Western
30. On 20th October every year Kenya we mark _____
 A. Mashunjaa Day
 B. Jamhuri Day
 C. Madaraka Day
 D. Labour Day
31. The instrument which show the strength and the direction of wind is called _____
 A. Windsock
 B. Anenometer
 C. Windvane
 D. Thermometer



32. The instrument above is used for _____
 A. Transport
 B. Communication
 C. Education
 D. Writing
33. We get _____ from pigs.
 A. beef
 B. pork
 C. mutton
 D. chicken
34. The following are lakes along the Rift Valley **except**?
 A. L. Victoria
 B. L. Magadi
 C. L. Elementaita
 D. L. Naivasha
35. Vegetation which grows in swampy areas are _____
 A. Reeds and Papyrus
 B. Mangrove
 C. Acacia
 D. Cypress

Use the map below to answer the questions 36-40.



36. The feature labelled xxx is known as _____
 A. Kapiti Plain B. Kano Plains
 C. Awara Plains D. Lotikipi Plains
37. The line marked A is called _____
 A. Altitude B. Equator
 C. Longitude D. Latitude
38. What is the significance of the lake marked B in Kenya?
 A. It harbours birds
 B. Good for fishing
 C. Source of soda ash
 D. It is an international lake
39. River P drains its water in _____
 A. Indian Ocean B. L. Victoria
 C. L. Turkana D. Lorian Swamp
40. Identify the drainage feature marked S _____
 A. Sbaki B. Nzoia
 C. Turkwel D. Kerio
41. Large farms used for keeping beef cattle are called _____
 A. Paddocks B. Stalls
 C. Savanna D. Ranches
42. Which of the following is not a tourist attraction in our country?
 A. Warm climate B. Good schools
 C. Wildlife D. Natural Scenery
43. A group of people who have their origin from one ancestor is known as _____
 A. Community B. Family
 C. Tribe D. Clan
44. Which of the following is not a traditional form of communication?
 A. Smoke B. Hornblowing
 C. Drumbeating D. Telephone
45. The way of life of the people in the society is called _____
 A. culture B. customs
 C. artefacts D. belief
46. Which of the following is not a way of interaction?
 A. Trade B. Education
 C. Birth D. SPorts
47. The highest mountain in Kenya is _____ m high.
 A. 4321 B. 5199
 C. 5895 D. 6141
48. _____ are Southern Cushites speakers in Kenya.
 A. Sanye B. Somali
 C. Pokomo D. Randile
49. Which one of the following is not a modern ceremony?
 A. Baptism B. Removal of teeth
 C. Birth D. Marriage
50. Name a plateau within a plateau in Kenya.
 A. Nyika B. Yatta
 C. Chalbi D. Bilesha
51. Name the feature found at the coastal part
 A. Table land B. Inselbergs
 C. Crater D. Coral reefs
52. Counting of people in a country is called _____
 A. Census B. Voting
 C. Counting D. Selection
53. What is the origin of the bantus?
 A. Mombasa B. Shungwaya
 C. Kisii Highland D. Mau Forest
54. Which of the following is an item made in traditional society?
 A. Guns B. Baskets
 C. Laptops D. Biropens
55. Which of the following is not among the nine tribes of the Mijikenda?
 A. Duruma B. Jibana
 C. Ribe D. Taveta
56. _____ is the head of the family.
 A. Mother B. Grandfather
 C. Father D. Headteacher
57. A person whose lifestyle one would want to copy is _____
 A. Role model B. Gunstar
 C. Celebrity D. Brother
58. Which of the following combinations makes up the animals which carry loads on their back?
 A. Donkeys and goats B. Sheep and chicken
 C. Donkey and oxen D. Oxen and cows
59. The National flag of Kenya has _____ colours
 A. 5 B. 4 C. 3 D. 2
60. Who is the head of the Kenya government
 A. President
 B. Vice-President
 C. The Deputy Prime Minister
 D. The Chief Justice

C.R.E.

61. Jesus brought _____ back to life.
A. John the Baptist B. Lazarus
C. Zachaeus D. Martha
62. Every year we remember the death and coming to life of Jesus during _____
A. Easter B. Christmas
C. Pentecost D. Passover
63. Child labour is _____
A. Work that is not meant for children
B. Good treatment of children
C. Work done to help the parents
D. Work we do in the church
64. What should be done to person with HIV/AIDS?
A. Show them love, peace and hope
B. Isolate them from others
C. Avoid coming into contact with them
D. Ignore them
65. The story of creation is recorded in the book of _____
A. Acts B. Mathew
C. Genesis D. Proverb
66. Stephen was killed by _____
A. stoning B. burning
C. beating D. poisoning
67. The commandment that forbid us to kill other is number _____
A. one B. six C. seven D. eight
68. The greatest commandment is based on _____ for God's and one's neighbour
A. hate B. kind C. faith D. love
69. Jesus performed his first miracle at _____
A. Canaan in Galilee B. Bethany
C. Antioch D. Canaan
70. Our bodies are temple of _____
A. worship B. Holy Spirit
C. Angles D. Faith
71. _____ can show respect to our parents.
A. hatred B. obeying
C. rudeness D. stealing
72. The commandments are also known as _____
A. decalogue B. sermon
C. beatitudes D. rules
73. The wedding Jesus attended was of _____
A. Cana of Galilee B. Jerusalem
C. Bethany D. Nazareth
74. When we receive new life we are called children of _____
A. man B. Saul C. God D. Angel
75. A covenant is a _____
A. command B. reward
C. decision D. agreement
76. Saul changed his name to _____
A. Peter B. Paul
C. John D. Levis
77. A statement of belief is called _____
A. belief B. worship
C. creed D. prayer
78. The disciples received the Holy Spirit during _____
A. Pentecost B. Easter
C. Christmas D. Good Friday
79. Who was the mother of Jacob?
A. Elizabeth B. Mary
C. Rebecca D. Sarah
80. Who was David's friend?
A. Saul B. Solomon
C. Jonthan D. Nathan
81. Abraham is the father of _____
A. Faith B. Love
C. Peace D. Humility
82. We celebrate the death of Jesus during _____
A. Easter
B. Good friday
C. Christmas day
D. Madaraka day
83. Zachariah the father of John the Baptist was a _____
A. priest B. carpenter
C. teacher D. doctor
84. The wisemen who visited baby Jesus from the east were led by _____
A. star B. moon C. sun D. fire
85. The greatest commandment is _____
A. Love yourself
B. Love your relatives
C. Love the lord your God only
D. Love your neighbour as your love yourself
86. The first disciple of Jesus worked as _____
A. carpenters B. blacksmith
C. teacher D. fishermen
87. The most loved disciple by Jesus was _____
A. John B. Simon Peter
C. James D. Mark
88. By washing the disciples feet, Jesus taught them _____
A. humility B. bravery
C. justice D. cleanliness
89. Traditional places of worship were called _____
A. Temples B. caves
C. shrines D. church
90. The first man in the Bible was _____
A. Abel B. Isaac
C. Adam D. God

JASMO SERIES

STD: 5 TERM 1 - 2014

MARKING SCHEME

<u>MATHS</u>	<u>ENGLISH</u>	<u>KISWAHILI</u>	<u>SCIENCE</u>	<u>S/STUDIES</u>
1. D	1. B	1. C	1. D	1. D
2. A	2. A	2. A	2. B	2. C
3. B	3. D	3. D	3. C	3. C
4. C	4. C	4. C	4. A	4. C
5. A	5. A	5. B	5. B	5. C
6. B	6. B	6. A	6. C	6. C
7. A	7. D	7. D	7. A	7. B
8. D	8. A	8. B	8. D	8. A
9. B	9. C	9. C	9. A	9. B
10. A	10. B	10. A	10. D	10. D
11. B	11. B	11. C	11. D	11. B
12. C	12. B	12. B	12. C	12. B
13. D	13. B	13. D	13. C	13. A
14. A	14. C	14. A	14. A	14. A
15. B	15. D	15. D	15. B	15. C
16. A	16. B	16. C	16. B	16. A
17. D	17. A	17. B	17. A	17. D
18. A	18. C	18. B	18. D	18. C
19. C	19. C	19. D	19. B	19. C
20. A	20. B	20. B	20. B	20. B
21. C	21. D	21. B	21. D	21. A
22. D	22. C	22. D	22. B	22. D
23. C	23. B	23. A	23. C	23. A
24. B	24. D	24. C	24. B	24.
25. D	25. A	25. A	25. B	25. C
26. A	26. C	26. B	26. D	26. A
27. B	27. D	27. C	27. A	27. D
28. C	28. B	28. C	28. C	28. D
29. B	29. C	29. D	29. B	29. B
30. D	30. C	30. A	30. D	30. A
31. A	31. B	31. B	31. A	31. C
32. C	32. D	32. C	32. D	32. B
33. B	33. C	33. C	33. D	33. B
34. C	34. A	34. D	34. C	34. A
35. D	35. A	35. B	35. A	35. B
36. C	36. D	36. C	36. D	36. D
37. B	37. D	37. A	37. C	37. B
38. A	38. A	38. B	38. D	38. A
39. D	39. C	39. A	39. B	39. B
40. C	40. A	40. C	40. A	40. C
41. B	41. D	41. A	41. D	41. A
42. A	42. C	42. D	42. B	42. B
43. D	43. A	43. C	43. B	43. D
44. B	44. C	44. C	44. C	44. D
45. C	45. D	45. C	45. D	45. A
46. B	46. A	46. A	46. A	46. C
47. A	47. B	47. B	47. A	47.
48. C	48. A	48. A	48. D	48. D
49. B	49. C	49. D	49. C	49. B
50. D	50. D	50. C	50. B	50. B

