



Code 0012015

TIMER NATIONAL SERIES

EVALUATION TEST

{ 5 }

STD 5 SOCIAL STUDIES & C.R.E

READ THESE INSTRUCTIONS CAREFULLY

1. You have been given this question paper and a separate answer sheet. The question paper contains 90 questions.
2. Do not write on this question paper.
3. When you have chosen your answer, mark it on the **ANSWER SHEET**, not in this question paper.
4. Make sure that you have written on the answer sheet.

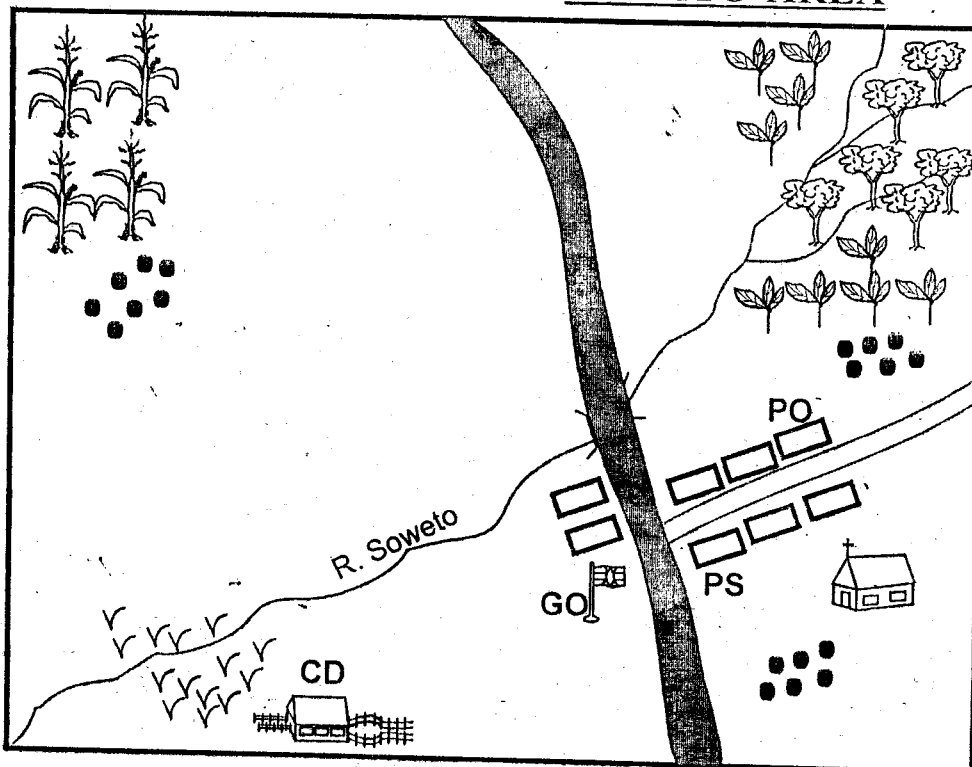
Time: 2 hrs. 15 mins

HOW TO USE THE ANSWER SHEET

YOUR NAME _____

NAME OF YOUR SCHOOL _____

SOWETO AREA



KEY

G.O	Governor's office
P.S	Police station
P.O	Post office
C.D	Cattle dip
	Maize farm
	Tea farm
	Shops
	Settlements
	Church
	Grass
	Forest

Use the map of Soweto area to answer questions 1-7.

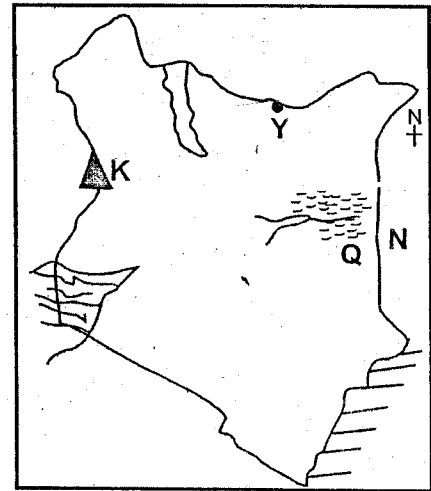
1. River Soweto flows from which direction?
A. North East B. South West
C. South East D. North West
2. Which is the **MAIN** form of transport in Soweto area?
A. Railway B. Road
C. Air D. Water
3. Soweto area is **LIKELY** to be a
A. County B. Location
C. District D. Division
4. Which food crop is grown in Soweto area?
A. Tea B. Grass
C. Coffee D. Maize
5. The **MAIN** religion in Soweto area is
A. Christianity B. Islamic
C. Tradition D. Hinduism

6. Which of the following types of cattle can be kept in the North Eastern part of Soweto area?
A. Zebu B. Friesian
C. Hereford D. Sahiwal
7. The type of settlement in Soweto area is
A. linear B. densely
C. sparsely D. nucleated
8. Which is the **MAIN** language group in our country?
A. Bantus B. Nilotes
C. Cushites D. Semites
9. Rivers that flow throughout the year are known as
A. seasonal rivers B. permanent rivers
C. hard rivers D. soft rivers
10. A high raised flat land is called
A. plain B. hill
C. mountain D. plateau
11. The vegetation that grows along rivers is called
A. swamp vegetation B. grassland vegetation
C. riverine vegetation D. forest


12. The people's way of life is known as
 - A. clan
 - B. culture
 - C. community
 - D. moral values
13. Which of these is a basic need in a family?
 - A. Radio
 - B. Television
 - C. Car
 - D. Food
14. Planting of trees in areas that did not have trees initially is called
 - A. deforestation
 - B. re-afforestation
 - C. agroforestry
 - D. afforestation
15. Which of the following is **NOT** an element of a good map?
 - A. Title
 - B. Frame
 - C. Colour
 - D. Compass
16. A member of parliament represents a
 - A. Ward
 - B. Constituency
 - C. County
 - D. Country
17. Crops that are grown for sale are called
 - A. food crops
 - B. subsistence crops
 - C. cash crops
 - D. cereals
18. Dairy cattle are **MAINLY** kept in
 - A. plains
 - B. highlands
 - C. deserts
 - D. plateaus
19. The **MAIN** tourists attraction along the Kenyan Coast is
 - A. wildlife
 - B. good hotels
 - C. sandy beaches
 - D. warm climate
20. The National flag in Kenya has how many colours?
 - A. Three
 - B. Four
 - C. Six
 - D. Two
21. Which of the following is **NOT** a modern form of communication?
 - A. Radio
 - B. Television
 - C. Telephone
 - D. Smoke
22. Which of the following was **NOT** a way through which the youth were taught in the past?
 - A. Writing
 - B. Apprenticeship
 - C. Stories
 - D. Riddles
23. The people who kill wild animals without permission are known as
 - A. tourists
 - B. wardens
 - C. poachers
 - D. citizens
24. The following are social activities **EXCEPT**;
 - A. mining
 - B. worship
 - C. dancing
 - D. games
25. The water body that borders Kenya to the South East is called
 - A. L. Victoria
 - B. L. Turkana
 - C. R. Tana
 - D. Indian Ocean
26. Which of the following weather instruments is used to measure the strength and direction of wind?
 - A. Thermometer
 - B. Windvane
 - C. Windsock
 - D. Anemometer

- A. Thermometer
- B. Windvane
- C. Windsock
- D. Anemometer


Use the map of Kenya below to answer questions 27-30.



27. The physical feature marked K is **LIKELY** to be
 - A. Mt. Kenya
 - B. Mt. Elgon
 - C. Mt. Marsabit
 - D. Mt. Uganda
28. The town marked Y is **LIKELY** to be
 - A. Wajir
 - B. Mandera
 - C. Lodwar
 - D. Moyale
29. The country marked N is
 - A. Uganda
 - B. Tanzania
 - C. Somalia
 - D. Ethiopia
30. The river that drains its water to the physical feature marked Q is
 - A. Tana
 - B. Ewaso Nyiro North
 - C. Athi
 - D. Nzoia
31. The **MAIN** form of interaction among Kenyan communities in the past was
 - A. raids
 - B. wars
 - C. trade
 - D. worship
32. The following are economic activities in Kenya **EXCEPT**;
 - A. initiation
 - B. mining
 - C. fishing
 - D. trade
33. General elections in Kenya are conducted after _____ years.
 - A. ten
 - B. five
 - C. three
 - D. two
34. _____ is the height above sea level.
 - A. Climate
 - B. Latitude
 - C. Altitude
 - D. Longitude
35. Which colour is found at the top of our National Flag in Kenya?
 - A. Green
 - B. Black
 - C. Yellow
 - D. White
36. The set of rules that guide us on how to behave in the society are called
 - A. constitution
 - B. moral values
 - C. school rules
 - D. guidelines

37. Many sub-counties make up a
 A. location B. district
 C. county D. division
38. The capital city of Kenya is
 A. Mombasa B. Kisumu
 C. Eldoret D. Nairobi
39. In the olden days people worshipped in
 A. churches B. mosques
 C. shrines D. temples
40. Who is **NOT** a member of a nuclear family?
 A. Aunt B. Mother
 C. Father D. Child
41. People who belong to a common ancestor makeup a
 A. family B. society
 C. age group D. clan
42. The road sign means

 A. danger ahead
 B. stop
 C. u-turn
 D. no entry
43. Which is the **MAIN** form of transport used in our country?
 A. Air B. Railway
 C. Road D. Water
44. The needle arrow of a compass always points to
 A. South B. North
 C. East D. West
45. The type of trade where people exchanged goods with other goods was known as
 A. money trade B. barter trade
 C. international trade D. currency trade
46. Animals used to transport goods are called
 A. donkeys B. carriers
 C. oxen D. pack animals
47. The colour of the flag that shows peace is
 A. red B. green
 C. white D. black
48. Which of the following is the **ODD** one out?
 A. Radio B. Television
 C. Mobile phone D. Beating drums
49. The head of the country is the
 A. President B. judges
 C. Governor D. Chief Justice
50. The fastest means of transport is
 A. road B. air
 C. railway D. water
51. The **MAIN** vegetation found in swamps is
 A. mangrove trees B. grass
 C. weeds D. papyrus reeds

52. The **MAIN** occupation of the Bantu was
 A. trade B. pastoralism
 C. fishing D. agriculture
53. Kenya, Uganda and Tanzania share
 A. Indian Ocean B. L. Victoria
 C. Mt. Kilimanjaro D. Rift Valley
54. The **MAIN** cause of road accidents is
 A. poor roads B. careless driving
 C. traffic jams D. unroadworthy vehicles
55. Mashujaa day is celebrated on
 A. 10th October B. 1st June
 C. 12th December D. 20th October
56. The largest relief region in Kenya is the
 A. coastal plains B. Lake Basin
 C. highland D. plateau region
57. Which of the following trees is **NOT** a hardwood?
 A. Cedar B. Mahogany
 C. Mvule D. Meru oak



The diagram shows the formation of
 A. cyclonic rainfall D. frontal rainfall
 C. convectional rainfall D. relief rainfall

59. The original homeland of Cushites was at
 A. Congo foerst B. South Sudan
 C. Horn of Africa D. Shungwaya
60. HIV/AIDS is **MAINLY** spread through
 A. breast feeding B. kissing
 C. sex D. blood transfusion

C.R.E

61. Human beings were created on the ____ day.
 A. 1st B. 6th
 C. 4th D. 7th
62. Who was told by God to build an ark?
 A. Noah B. Adam
 C. Aaron D. Abraham
63. Who among the following people is considered as the father of faith?
 A. Moses B. Adam
 C. Abraham D. Noah
64. The spokesman of Moses in Egypt was
 A. Joshua B. Aaron
 C. Jethro D. Abraham
65. The book in the Bible that records the fleeing of the children of Israel from slavery in Egypt is called

- A. Genesis
C. Revelation
- B. Psalms
D. Exodus
66. When we commit our lives to God, we
A. serve Him
C. work always
- B. disobey our parents
D. play always
67. Prophet _____ announced birth of Jesus in Bethlehem many years before he was born.
A. Micah
C. Jeremiah
- B. Isaiah
D. Zechariah
68. Which of the following is a Christian sacred place?
A. Synagogue
C. Mosque
- B. Church
D. Mountain
69. Which one of the following is **NOT** a good effect of weather?
A. Wind is used to sail boats
B. Rain makes plants grow
C. Sun gives us light
D. Floods killing people
70. Who baptised Jesus?
A. Peter
C. John
- B. Andrew
D. Samuel
71. The number of people that were fed by Jesus Christ using five loaves of bread and two fish were
A. 5 000
C. 500
- B. 3 000
D. 300
72. Who was raised from death by Jesus Christ?
A. Philip
C. Andrew
- B. Lazarus
D. Simon Peter
73. Which one of the following was **NOT** a command of Jesus Christ to his disciples?
A. Heal the sick
B. Preach the gospel
C. Punish wrong doers
D. Cast out demons
74. Who among the following women promised to dedicate her son to God?
A. Elizabeth
C. Hannah
- B. Rebecca
D. Mary
75. The followers of Jesus Christ were first called Christians at
A. Antioch
C. Bethlehem
- B. Jerusalem
D. Capernaum
76. Which quality did Jesus demand from all those who came to Him to be healed?
A. Truth
C. Justice
- B. Honesty
D. Faith
77. Who among the following became the leader of the apostles after the death of Jesus?
A. Paul
C. John
- B. Andrew
D. Peter
78. Who was killed because of his faith?
A. Stephen
C. Moses
- B. Judas
D. Luke
79. The early believers did three of the following **EXCEPT**;
A. held fellowship meetings.
B. prayed together.
C. shared property.
D. were rebuked together.
80. Which one of the following activities **CANNOT** be done in the church?
A. Wedding
C. Blessing warriors
- B. Anointing priests
D. Dedicating babies
81. Which of the following is **NOT** a fruit of the Holy Spirit?
A. Wisdom
C. Patience
- B. Joy
D. Peace
82. What is the view of work in traditional African society?
A. Everyone is expected to work.
B. Men and women do same work.
C. People who work hard are disliked.
D. Women and girls guard crops against wild animals.
83. Jesus taught about loving our neighbours in the parable of
A. lost son
C. Good Samaritan
- B. ten maidens
D. sower
84. The greatest commandment is about
A. working hard.
B. love.
C. giving offering to God.
D. singing in the church.
85. Maria found Joseph stealing pencil in their classroom. What should Maria do?
A. Scream to attract attention.
B. Beat him up.
C. Talk to him and show him the importance of respecting other pupils property.
D. Force him to pay.
86. As boys and girls grow up they have different roles. These roles make them
A. grow up differently.
C. love themselves.
- B. mix freely.
D. responsible persons.
87. A person with Holy Spirit does the following **EXCEPT**;
A. abuses others.
B. lives holy life.
C. does good to others
D. confesses to Jesus Christ.
88. Which one is **NOT** a Christian community in Kenya?
A. Catholic
C. Court
- B. Anglican
D. Presbyterian
89. On 25th December we celebrate
A. Easter
C. Passover
- B. Christmas
D. Birthday
90. Which one of the following diseases has no cure?
A. Malaria
C. Headache
- B. Measles
D. HIV/AIDS