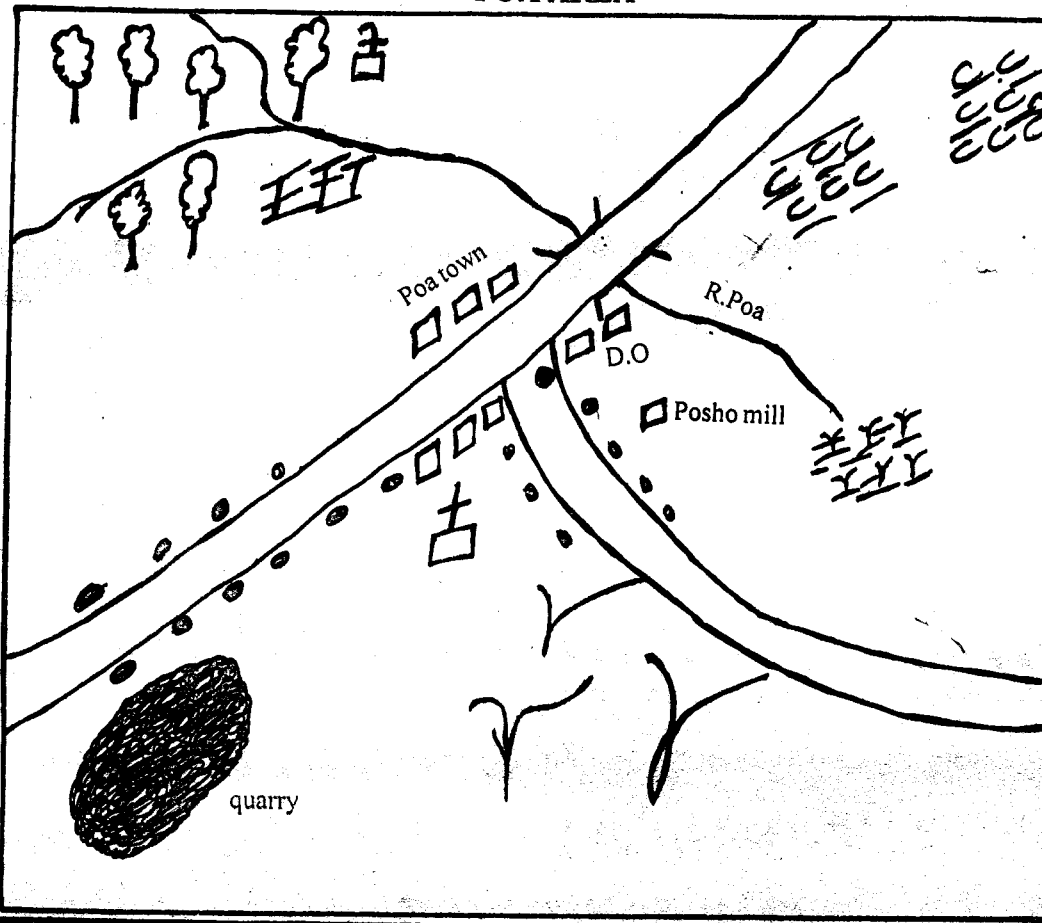


# KENYA LINK K.T.Z.2 OPENER SCHOOL BASED EXAM

## SOCIAL STUDIES /CRE STD 5 TERM II 2013

Use the map below to answer questions 1-7

POA AREA



**KEY**

- Tea
- church
- coffee
- shrubs
- saw mill
- swamp.
- D.O district officer

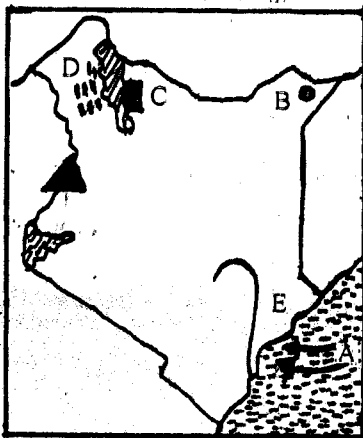


1. Three of the following are economic activities of the people of Poa area. Which one is not?  
 A. Lumbering                      B. Mining  
 C. Fishing                            D. Cash crop farming.
2. R. Poa flows from \_\_\_\_\_  
 A. North East                      B. North West  
 C. South                                D. South West.
3. The people of Poa area are \_\_\_\_\_  
 A. Christians                      B. Muslims  
 C. Pagans                              D. Jews.
4. Who is the head of the area shown in the maps.  
 A. District officer                  B. District commissioner  
 C. Divisional officer                D. Chief.
5. The type of settlement shown on the map is known as  
 A. Cluster                              B. Density  
 C. Linear                                D. Nucleated.
6. The main means of transport of the people of Poa area is \_\_\_\_\_  
 A. Road                                B. River  
 C. Railway                              D. Air.
7. Which is the staple food of the people of Poa area?  
 A. Maize                                B. Fish  
 C. Coffee                                D. Tea.
8. Which country borders Kenya to the North West  
 A. Ethiopia                            B. Southern Sudan

- C. Tanzania                            D. Somalia.
9. Three of the following are elements of a good map. which one is not?  
 A. Compass                          B. Key  
 C. Plateau                              D. Frame.
10. Which latitude divides Kenya into two halves.  
 A. Prime meridian                  B. Green which  
 C. Tropic of cancer                 D. Equator.
11. Which group of people consists of the Kalenjin speakers only?  
 A. Kipsigis, Pokomo                B. Maasai, Saboat  
 C. Terik, Tugen                        D. Marakwet, Turkana.
12. Which one of the following is the main tourist attraction along the Coast?  
 A. Scenery                              B. Wildlife  
 C. Prehistoric sites                 D. Beaches.
13. The traditional method of exchanging goods for goods was known as  
 A. Barter trade                        B. Internal trade  
 C. International trade                D. Domestic trade.
14. Which plain is found around Kisumu?  
 A. Loita                                 B. Kano  
 C. Bilesha                                D. Athikapiti.
15. Population distribution in Kenya is influenced by the following except \_\_\_\_\_

- A. Industries                      B. Mining  
C. Soils                              D. Census.
16. The following are forest conservation methods except.
- A. Deforestation                  B. Agro-forestry  
C. Reforestation                  D. Afforestation.
17. Below are trees found in planted forests except\_\_
- A. Pine                                B. Eucalyptus  
C. Mvule                              D. Gravellea.
18. Which one of the following mountains is not found within the Rift valley?
- A. Longonot                        B. Kulal  
C. Ndoto                              D. Elgon.
19. A person who is elected during general elections to represent a constituency is known as \_\_\_\_\_
- A. An MP                              B. A Councillor  
C. A governor                      D. A Senator.
20. Hills which have resisted erosion for along period of time are known as \_\_\_\_\_
- A. Ranges                            B. Mountains  
C. Volcano                          D. Inselbergs.
21. Horticultural goods are transported to the airport by
- A. Aeroplanes                      B. Refrigerated lorries.  
C. Trains                              D. Fast buses.
22. Banking, vehicle repairing and tourism are examples of \_\_\_\_\_ industries.
- A. Juakali                            B. Service  
C. Processing                        D. Assembling.
23. Which of the following is a modern method of fish preservation?
- A. Salting                            B. Smoking  
C. Refrigeration                    D. Sundrying.

Use the map of Kenya to answer questions 24-28



24. What is the name of the plain marked D ?
- A. Lotikipi                          B. Awara  
C. Kano                                D. Sardidinda.
25. The border town marked B is known as \_\_\_\_\_
- A. Mandera                        B. Lodwar  
C. Moyale                            D. Garissa.
26. The people who entered Kenya through the route marked A were mainly \_\_\_\_\_

- A. Pastoralists                      B. Farmers  
C. Mixed farmers                  D. Traders.
27. What is the name of the national park marked C. ?
- A. Malkamari                      B. Sibilio  
C. Lotikipi                            D. Kano.
28. The river marked E has three names. Which one is not among the names?
- A. Galana                            B. Tana  
C. Sabaki                            D. Athi.
29. Which one of the following towns is associated with seaport?
- A. Kisumu                            B. Mombasa  
C. Turkana                          D. Naivasha.
30. Which one of the following crops is not a cash crop
- A. Wheat                              B. Coffee  
C. Flower                            D. Cassava.
31. \_\_\_\_\_ refers to all features that are related to water and its movements?
- A. Relief                              B. Drainage  
C. Physical                          D. Rift valley
32. The altitude of the highest mountain in Kenya is \_\_\_\_
- A. 5099m                            B. 5991  
C. 5199m                            D. 5190
33. Three of the following are moral values in the society. Which one is not?
- A. Corruption                      B. Courage  
C. Patience                        D. Honesty.
34. Which one of the following communities does not belong to the High land Nilotes?
- A. Iluchamus                        B. Marakwet  
C. Tugen                              Keiyo.
35. Goods that are bought by a country from another country are \_\_\_\_\_
- A. Imports                            B. Exports  
C. Domestic                        D. External.
36. The type of trade that money is used as a medium of exchange is
- A. External trade                  B. Barter trade  
C. Monetary trade                D. Internal trade.
37. The most widely used dairy product is \_\_\_\_\_
- A. Podwer milk                      B. Fresh milk  
C. Yorghurt                        D. Butter.
38. The mixture of trona and water is called \_\_\_\_\_
- A. Slurry                              B. Soda  
C. Adit                                D. Shaft.
39. Three of the following are the common methods used for commercial purpose except \_\_\_\_\_
- A. Drifting                            B. Traps  
C. Seining                            D. Trawling.
40. In the past children were taught in the following ways except \_\_\_\_\_
- A. Story books                      B. Proverbs  
C. Story telling                      D. Riddles.

41. The things which were made and used by a community in the past were known as \_\_\_\_\_

- A. Apprenticeship      B. Cultural artefacts  
C. Museum              D. Cultures.

42. Three of the following affects the climate of a place. Which one does not?

- A. Aspect                      B. Large waterbody  
C. Latitude                  D. Longitude.

43. Which one among the following towns is the oldest?

- A. Machakos                B. Nairobi  
C. Kisumu                  D. Mombasa.

44. Which one among the following was not a reason as to why people migrated in the past?

- A. Enough food supply  
B. Search for pastures  
C. Poor rainfall  
D. Wars.

45. Who was the first president of Kenya?

- A. Daniel Arap Moi  
B. Jomo Kenyatta  
C. Jaramogi Oginga  
D. Mwai Kibaki.

46. People who hunt and kill wild animals illegally are known as \_\_\_\_\_

- A. Game wardens      B. Poachers  
C. Kws                      D. Poaching.

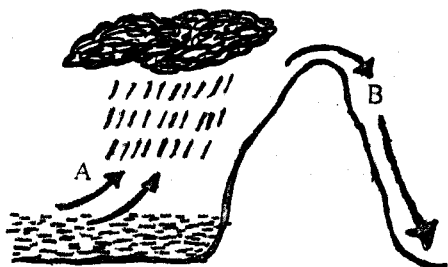
47. Which one of the following minerals is processed through evaporation?

- A. Sugar                      B. Salt  
C. Cement                  D. Paint.

48. The number of people living in one kilometre square is known as \_\_\_\_\_

- A. Densely populated  
B. Sparsely populated  
C. Population density  
D. Population.

Use the diagram below to answer questions 49-51.



49. The winds marked A are \_\_\_\_\_

- A. Warm and moist  
B. Warm and dry  
C. Cool and moist.  
D. Cool and dry.

50. The economic activity which can be suitable in the side marked B is \_\_\_\_\_

- A. Dairy farming      B. Cash crop farming  
C. Pastoralism        D. Tea growing.

51. The information of the above rainfall is influenced by \_\_\_\_\_

- A. Altitude  
B. Latitude  
C. Climate  
D. Nearness to the large water body.

52. Which type of soil is used by the Maasai and Turkana to decorate their bodies?

- A. Alluvial soils              B. Red ochre  
C. Clay soil                  D. Muddy soil.

53. Keeping a large number of animals in a small area is a practice called \_\_\_\_\_

- A. Overstocking          B. Overgrazing  
C. Deforestation        D. Monocropping.

54. According to the new constitution who will be the leader of a county?

- A. Governor  
B. County representative  
C. Senator  
D. Councillor.

55. Which year did President Moi retire from politics?

- A. 2002                      B. 1997  
C. 2001                      D. 2010.

56. Who was the famous Kamba leader who lived in Machakos when the European entered Kenya?

- A. Chief Kivoi              B. Masaku  
C. Kiso wa Munyao      D. Paul Ngei.

57. When did Kenya attain full independence?

- A. 1st June 1963  
B. 12th December 1963  
C. 12th December 1964  
D. 20th October 1952.

58. Which is the largest language group in Kenya?

- A. Nilotes                      B. Cushites  
C. Bantus                      D. Semites.

59. Who forced the Bantu communities to move from Shungwaya?

- A. Taita                      B. Galla  
C. Maasai                      D. Pokot.

60. Who brought formal education into our country?

- A. Missionaries              B. Arabs  
C. Portuguese                D. Explorers.

#### C.R.E

61. The last book in the old Testament is \_\_\_\_\_

- A. Revelation              B. Malachi  
C. Proverbs                  D. Mathew.

62. Jesus fed the five thousand people with \_\_\_\_\_

- A. 5 fish and 2 loaves of bread  
B. 5 fish and 5 loaves of bread  
C. 2 fish and 5 loaves of bread  
D. 2 fish and 2 loaves of bread.

63. The Apostles had all the following except \_\_\_\_\_

- A. Born of virgin Mary

- B. Give us our daily bread  
C. Conceived of holy spirit.  
D. Will come to judge the living and dead.
64. Emmanuel means \_\_\_\_\_  
A. The saviour            B. Universal  
C. Love                    D. God with us.
65. God appeared to Moses in the wilderness in form of a \_\_\_\_\_  
A. Fire   B. Thunder   C. Cloud   D. Wind.
66. Jesus raised Lazarus from the dead to show that he has power \_\_\_\_\_  
A. Over diseases   B. To forgive sins  
C. Over nature     D. To give life.
67. Jonah was sent by God to preach to the people of \_\_\_\_\_  
A. Damascus            B. Nineveh  
C. Tyre                    D. Jerusalem.
68. Who among the following was the first christian martyr?  
A. Stephen              B. Joseph  
C. James                 D. John the baptist.
69. "Faith without action is dead" is a statement that is found in which book?  
A. John   B. James   C. Paul   D. Peter.
70. The book of Acts was written by \_\_\_\_\_  
A. John   B. Moses   C. Paul   D. God.
71. Some disciples of Jesus were \_\_\_\_\_ before Jesus called them to follow him.  
A. Farmers              B. Preachers  
C. Drivers                D. Fishermen.
72. In the story of the prodigal son, Jesus wanted to teach about \_\_\_\_\_  
A. Sharing                B. Poverty  
C. Riches                 D. Forgiveness.
73. Man was created on \_\_\_\_\_  
A. 5th day                B. 7th day  
C. 6th day                D. 3rd day.
74. Jesus said "Blessed are the poor in spirit for \_\_\_\_\_  
A. They will see God  
B. They shall be satisfied  
C. They shall be called sons of God.  
D. Their is the kingdom of heaven.
75. Another name for 'agreement' is \_\_\_\_\_  
A. Obligation            B. Covenant  
C. Constitution         D. Bible.
76. The disciples of Jesus frequently went to fish in \_\_\_\_\_  
A. Dead sea              B. River Jordan  
C. Mediterranean sea   D. Lake Galilee.
77. Which of the following places did Jesus begin his preaching?  
A. Bethany                B. Nazareth  
C. Jerusalem              D. Judea.
78. Christian celebrate the holy communion to remember the \_\_\_\_\_  
A. Birth and baptism of Jesus  
B. Coming of the Holy spirit.  
C. Feeding of five thousand men.  
D. Suffering and death of Jesus.
79. I am fearfully and \_\_\_\_\_  
A. Physically fit   B. Wonderfully made  
C. Perfectly made   D. Beautifully made.
80. Which commandment has a promise?  
A. 6th   B. 4th   C. 5th   D. 7th.
81. Jesus was a refugee in \_\_\_\_\_  
A. Syria   B. Israel   C. Jericho   D. Egypt.
82. Jesus was born in \_\_\_\_\_  
A. Bethlehem            B. Nazareth  
C. Jerusalem             D. Ethiopia.
83. Adam and Eve were chased out of Eden's garden because of their \_\_\_\_\_  
A. Selfishness            B. Disobedience  
C. Kindness               D. Danger.
84. Akamba called their God \_\_\_\_\_  
A. Ngai                    B. Enkai  
C. Nyasaye               D. Mulungu.
85. Church is to christians as mosque is to \_\_\_\_\_  
A. Catholics              B. Hindus  
C. Muslims                D. Budhists.
86. HIV/AIDS can be controlled by \_\_\_\_\_  
A. Not sitting with people infected with HIV/AIDS  
B. Avoiding sex before marriage  
C. Praying for people with HIV/AIDS  
D. Not eating with people with HIV/AIDS.
87. Jesus was crucified in \_\_\_\_\_  
A. Jericho                B. Gethsemane  
C. Jerusalem              D. Juda Iscariot.
88. Which of the following is a fruit of the Holy spirit  
A. Knowledge            B. Preaching  
C. Wisdom                D. Gentleness.
89. Lazarus stayed in the tomb for \_\_\_\_\_ days.  
A. Three   B. Four   C. Five   D. Forty.
90. Who did Jesus first appear to after his resurrection?  
A. Thomas                B. Paul  
C. Mary Magdalene     D. Peter.