

# ACADEMIC BREAK-THROUGH SERIES

## STD. 5 TERM II - YEAR 2011

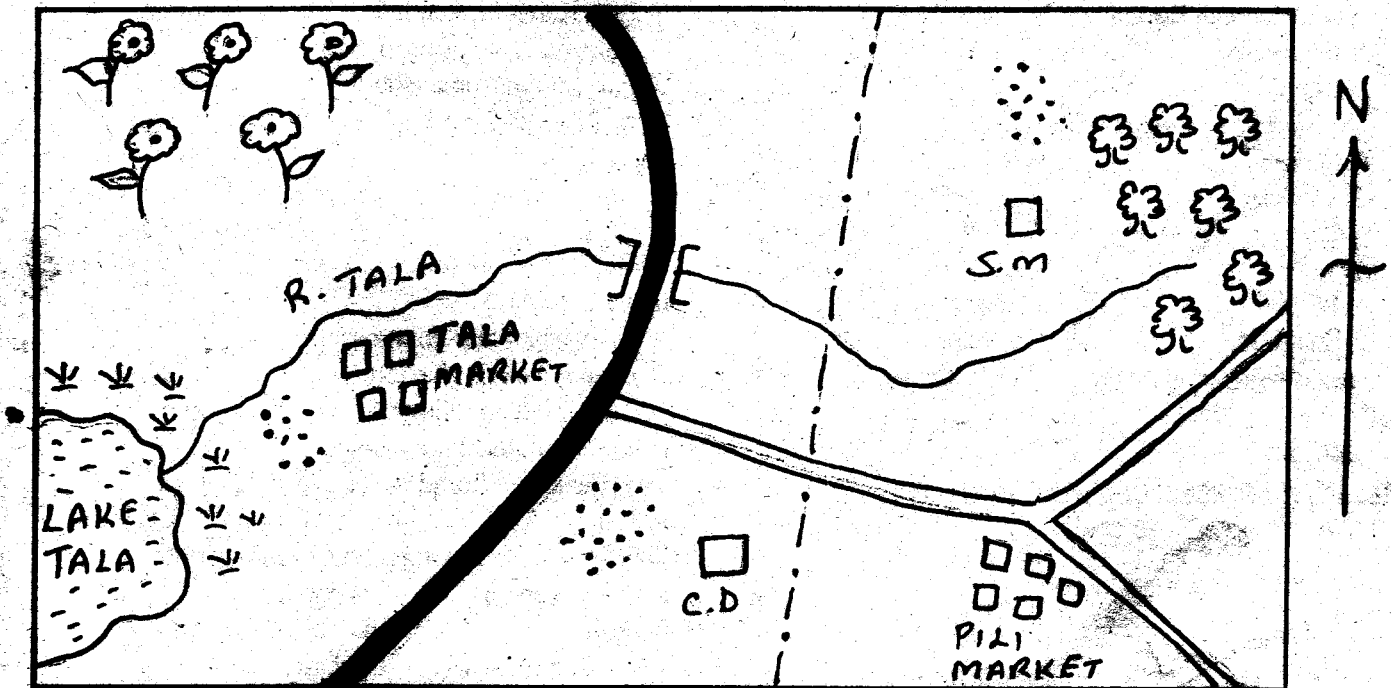
### SOCIAL STUDIES & CRE

006

Time: 2hrs 15min

Study the map of Tala Area to answer questions 1 - 7

#### TALA AREA



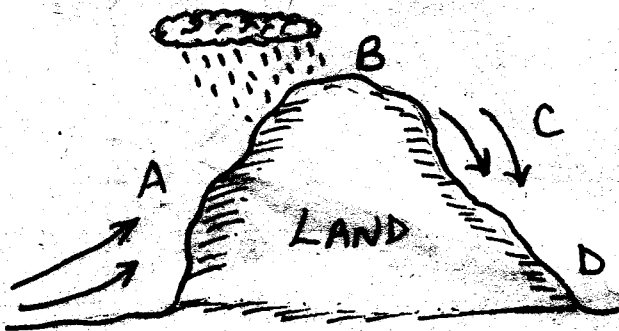
#### Key

	Swamp		C.D. Cattle dip		Market		Tarmac road		River		Sunflower
	Locational boundary		Forest		Settlement		Bridge		S.M.		Saw mill

- The flow of River Tala is \_\_\_\_\_  
A. West to East      B. East to West  
C. South to North      D. N.W to S.E
- The administrative leader of Tala area is likely to be  
A. D.O      B. D.C  
C. Chief      D. Assistant chief
- The possible economic activity practised by people living in the Southern part of Tala area is likely to be  
A. fishing      B. cattle keeping  
C. mining      D. crop growing
- Which side of Tala area is highest than the rest?  
A. Eastern      B. Western  
C. Northern      D. Southern
- Where does R. Tala drain its water \_\_\_\_\_  
A. forest      B. bridge      C. L. Tala      D. Junction
- Which cash crop is grown in Tala area?  
A. Tea      B. Pyrethrum  
C. Sunflower      D. Coffee
- Trees cut in the forest can be transported to the market by \_\_\_\_\_  
A. air      B. tarmac road  
C. river      D. murrum road
- Which of the following is not an economic activity carried out in Tala area?  
A. Trading      B. Saw -milling  
C. Livestock keeping      D. Mining
- How many markets are there in the area?  
A. 2      B. 3      C. 5      D. 4
- Which country among the following borders Kenya to the North?  
A. Ethiopia      B. Uganda      C. Somalia      D. Tanzania
- L. Victoria is invaded by water weed called \_\_\_\_\_  
A. Hyacinth      B. Black jack  
C. Mangroove      D. Wandering jew
- Which country is NOT crossed by the Equator?  
A. Uganda      B. Kenya      C. Somalia      D. Tanzania
- Which one of the following is NOT element of a map?  
A. Title      B. Key      C. Size      D. Scale
- The work of the Kenya police is to \_\_\_\_\_  
A. beat people  
B. judge wrong doers  
C. maintain law and order  
D. kill people

15. Which river drains into Lorian swamp?  
A. Ewaso Nyiro                      B. R. Nzoia  
C. R. Tana                              D. R. Athi
16. The mountain between the border of Kenya and Uganda is mt \_\_\_\_\_  
A. Suswa                              B. Longonot  
C. Elgon                                 D. Kenya
17. \_\_\_\_\_ is found in the Indian Ocean.  
A. Pate                                 B. Mfangano  
C. Ndere                                D. Mageta
18. How do we call the leader of a constituency?  
A. Councillor                         B. Mayor  
C. Chief                                 D. M.P
19. The biggest province in Kenya is \_\_\_\_\_  
A. Nairobi                              B. Rift valley  
C. Western                              D. N. Eastern
20. Which of the following does not affect the climate of Kenya?  
A. Winds                                B. Altitude  
C. Longitude                            D. Latitude
21. The crop grown at Ahero Irrigation Scheme is \_\_\_\_\_  
A. rice                                  B. cotton  
C. onions                                D. flowers

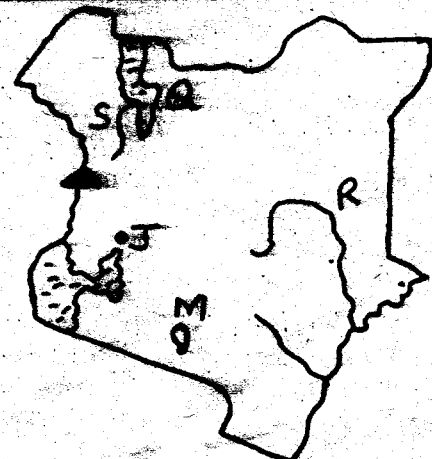
**Use the below diagram to answer questions 22 - 26**



22. The name given to this kind of rainfall is \_\_\_\_\_  
A. Convectional                      B. Windward  
C. Relief                                D. Mountain
23. Which side of the mountain will receive a lot of rain?  
A. A                      B. C                      C. B                      D. D
24. The side that shall receive dry winds is \_\_\_\_\_  
A. D                      B. A                      C. B                      D. C
25. This kind of rainfall is commonly experienced in which areas?  
A. Plains                                 B. Lake region  
C. Coast                                 D. Highlands
26. Which side of the mountain is best for crop farming?  
A. D                      B. C                      C. B                      D. A
27. The following describes a certain type of climatic region.  
i) Hot and dry throughout the year.  
ii) Temperatures are high during the day and very cold during the nights.  
iii) Low and unreliable rainfall.  
The climatic region is most likely to be  
A. Tropical                              B. Semi - desert  
C. Equatorial                            D. Mountain


28. All these affect the vegetation of an area except which one?  
A. Latitude    B. Altitude    C. Soil                      D. Climate
29. On which river is Hydro - electric power produced?  
A. Turkwel    B. Nzoia    C. Yala                      D. Migori
30. All these are importance of forests except which one?  
A. Forest fires                         B. Home of wild animals  
C. Paper                                 D. Medicine
31. Which group consist of Bantu speakers only?  
A. Pokomo, Akamba, Orma, Oromo  
B. Luo, Kalenjin, Rendille  
C. Kikuyu, Kuria, Luhya, Meru  
D. Ameru, Abasuba, Nandi
32. How do we call the instrument used to measure the speed of wind?  
A. Anemometer                         B. Windssock  
C. Windvane                              D. Barometer
33. Which one of the following is not an importance of physical features?  
A. They help mark boundaries.  
B. High mountains have snow.  
C. They influence climate.  
D. Lakes are used for transport.
34. The true desert found in Kenya is known as \_\_\_\_\_  
A. Lorian    B. Winam    C. Chalbi    D. Kano
35. Which of the following is NOT a child's right?  
A. Education                              B. Shelter  
C. Food                                    D. Road
36. The safest place to cross a road is at \_\_\_\_\_  
A. a junction                              B. near a bend  
C. a corner                                D. zebra crossing
37. The height of a place above the sea level is known as \_\_\_\_\_  
A. altitude                                 B. highland  
C. latitude                                 D. longitude
38. One of the following is NOT a salty water lake. Which one is it?  
A. Elementaita                            B. Victoria  
C. Magadi                                 D. Bogoria
39. The planting of new forests is called \_\_\_\_\_  
A. Afforestation                         B. Agro - forestry  
C. Deforestation                         D. Reforestation

**Use the below diagram to answer questions 40 - 44**



40. The river marked S is known as \_\_\_\_\_  
 A. Nzoia B. Turkwel C. Athi D. Sondu
41. The lake marked M is well for the mining of \_\_\_\_\_  
 A. limestone B. soda ash  
 C. flourspar D. diatomite
42. Three of the following is true about river marked R except one. which one?  
 A. It is the longest river in Kenya.  
 B. Hydro - electric power is produced from the river  
 C. Irrigation is done using its waters.  
 D. Mining of limestone takes place.
43. The lake marked Q is \_\_\_\_\_  
 A. Turkana B. Victoria C. Naivasha D. Nakuru
44. The town marked J is likely to be \_\_\_\_\_  
 A. Eldoret B. Kakamega  
 C. Nairobi D. Kisumu
45. Who among the following came to Kenya to help in the bulding of Kenya - Uganda Railway?  
 A. Indians B. Nubians C. Europeans D. Arabs
46. Three of the following are importance of vegetation except one. Which one?  
 A. Vegetation distribution.  
 B. Prevention of soil erosion  
 C. Home of wild animals.  
 D. Source of firewood

**Use the diagram below to answer questions 47- 49**



47. The diagram shows \_\_\_\_\_  
 A. land breeze B. convectional rainfall  
 C. relief rainfall D. sea - breeze
48. When does it occur?  
 A. In December B. During the day  
 C. At night D. In April
49. Near which areas is it experienced?  
 A. Kisumu B. Nyeri C. Kericho D. Busia
50. Which is the correct order of Provincial Administration.  

A	B	C	D
D.C	P.C	Chief	D.C
↑	↑	↑	↑
P.C	D.C	D.O	D.O
↑	↑	↑	↑
D.O	D.O	D.C	Chief
↑	↑	↑	↑
Chief	Chief	Ass. Chief	P.C
51. Who among the following was the first African to be appointed minister?  
 A. Jomo Kenyatta B. Tom Mboya  
 C. B.A. Ohanga D. Eliud Mathu

52. One of the following animals is kept for beef. Which one is it?  
 A. Jersey B. Arshire C. Guernsey D. Zebu
53. The illegal hunting of wildlife is called \_\_\_\_\_  
 A. paddocking B. shearing  
 C. poaching D. broilers
54. Which of the following is NOT a traditional industry?  
 A. Pot making B. Basketry  
 C. Wood carving D. Jua kali
55. All these are problems facing trade except?  
 A. Lack of money B. Poor roads  
 C. Foreign exchange D. Insecurity
56. Which of the following signs means NO RIGHT turn for vehicles?



57. Akoth wants to send an urgent message to her aunt in Mombasa. Which method is she not likely to use?  
 A. Telephone B. Mobile phone  
 C. E-mail D. Drum
58. One can become a Kenyan citizen by three of the following ways except?  
 A. By birth B. By registration  
 C. Birth certificate D. Through Naturalization
59. A government by the people, of the people and for the people is a \_\_\_\_\_ government.  
 A. dictatorial B. democratic  
 C. republican D. social
60. Three of these are causes of conflict in our society. Which one is not?  
 A. Failure to share resources  
 B. No respect for others.  
 C. People are denied their rights.  
 D. Settling misunderstanding

**SECTION II - C.R.E**

61. Which one is a good effect of weather?  
 A. Too much sun over a long period.  
 B. Enough rainfall for our crops to grow.  
 C. A lot of wind that cools our bodies.  
 D. Too much rain that causes floods.
62. During the floods, God saved \_\_\_\_\_ and his family.  
 A. Moses B. Noah C. Elijah D. Adam
63. The first two disciples Jesus called were \_\_\_\_\_  
 A. tax collectors B. pastors  
 C. fishermen D. teachers
64. The miracle of Jesus calming the storm shows that Jesus \_\_\_\_\_  
 A. has power to heal the sick  
 B. has power to create  
 C. has power over nature  
 D. has power over evil

65. Why should we take care of God's creation?  
 A. God commands us to.  
 B. To get alot of money.  
 C. To show our friends we are good.  
 D. To avoid being punished.
66. The following are qualities of a good leader except?  
 A. Gentle B. Proud C. Humble D. Peaceful
67. Jesus was baptised by \_\_\_\_\_ in the River Jordan.  
 A. Andrew B. Judas  
 C. John the Baptist D. Peter
68. Which one was not a command of Jesus Christ to His disciples?  
 A. Heal the sick B. Preach the Gospel  
 C. Cast out demons D. Punish sinners
69. Who among the following women promised to dedicate her son to God?  
 A. Elizabeth B. Rebecca  
 C. Hannah D. Mary
70. Jesus always went with His disciples to pray on the Mount of \_\_\_\_\_  
 A. Sinai B. Moriah  
 C. Carmel D. Olives
71. The prophet who spoke about the coming of Jesus Christ was \_\_\_\_\_  
 A. Daniel B. Hosea C. Isaiah D. Jeremiah
72. People express peace at home through the following ways except one. Which one is it?  
 A. Forgiving others  
 B. Being friendly  
 C. Living in harmony  
 D. Refusing to shake hands with friends
73. Jesus was born in \_\_\_\_\_  
 A. Bethany B. Bethlehem  
 C. Jerusalem D. Nazareth
74. \_\_\_\_\_ and \_\_\_\_\_ sold their piece of land and hid some of the money.  
 A. Priscillar and Aquilla B. Adam and Eve  
 C. Peter and John D. Ananias and Sapphira
75. God appeared to me in a dream. I asked God for wisdom. God gave me wealth as well. Who was I?  
 A. Elijah B. Solomon  
 C. David D. Saul
76. The prophet who sealed the covenant between the Israelites and God was \_\_\_\_\_  
 A. Jeremiah B. Habakkuk  
 C. Joel D. Isaiah
77. When Jesus washed the disciples' feet. He was teaching that  
 A. it is good for us to be clean  
 B. we should have a towel when washing our feet  
 C. a leader should be ready to serve others  
 D. we should refuse to be washed by our leaders
78. The commandment with a promise is \_\_\_\_\_  
 A. love your neighbour  
 B. love God  
 C. respect your father and mother  
 D. do not commit adultery
79. In traditional African society girls and boys grew separately because of the following reasons except one. Which one is it?  
 A. To avoid pre - marital sex  
 B. They are different  
 C. To exercise self control  
 D. To be taught different roles
80. Young Christians should use their time wisely because  
 A. they are responsible for their actions  
 B. their body is the temple of God  
 C. they can fail exams  
 D. they will annoy their parents
81. The following are results of irresponsible sexual behaviour except  
 A. contracting STDS  
 B. getting HIV/AIDS  
 C. dropping out of school  
 D. succeeding in life
82. Prophet \_\_\_\_\_ was sent by God to condemn Ahabs evil action.  
 A. Samuel B. Nathan  
 C. Elisha D. Elijah
83. Christians receive new life in Jesus Christ when they get \_\_\_\_\_  
 A. jobs B. circumcised  
 C. baptised D. married
84. The greatest command of God is \_\_\_\_\_  
 A. love God  
 B. love your neighbours  
 C. love your enemies  
 D. love your friends
85. 'Do not commit murder' is the \_\_\_\_\_ commandment  
 A. first B. fifth C. sixth D. tenth
86. Jesus was crucified on Mt \_\_\_\_\_ at a place called Golgotha.  
 A. Olives B. Calvary  
 C. Sinai D. Moriah
87. God tested Abraham's \_\_\_\_\_ by asking him to sacrifice his only son.  
 A. faith B. love C. honesty D. bravely
88. The early church believers did the following together except one. Which one is it?  
 A. Prayed B. Fellowshiped  
 C. Shared possession D. Persecuted others
89. Otieno, a classmate five pupil, has picked a pen in a field. The best action to take is to \_\_\_\_\_  
 A. help a friend who does not have one  
 B. take it to the teacher on duty  
 C. destroy it  
 D. hide it
90. 'Immanuel' means \_\_\_\_\_  
 A. God saves B. God with us  
 C. God forgives D. God is peace