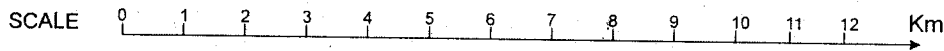
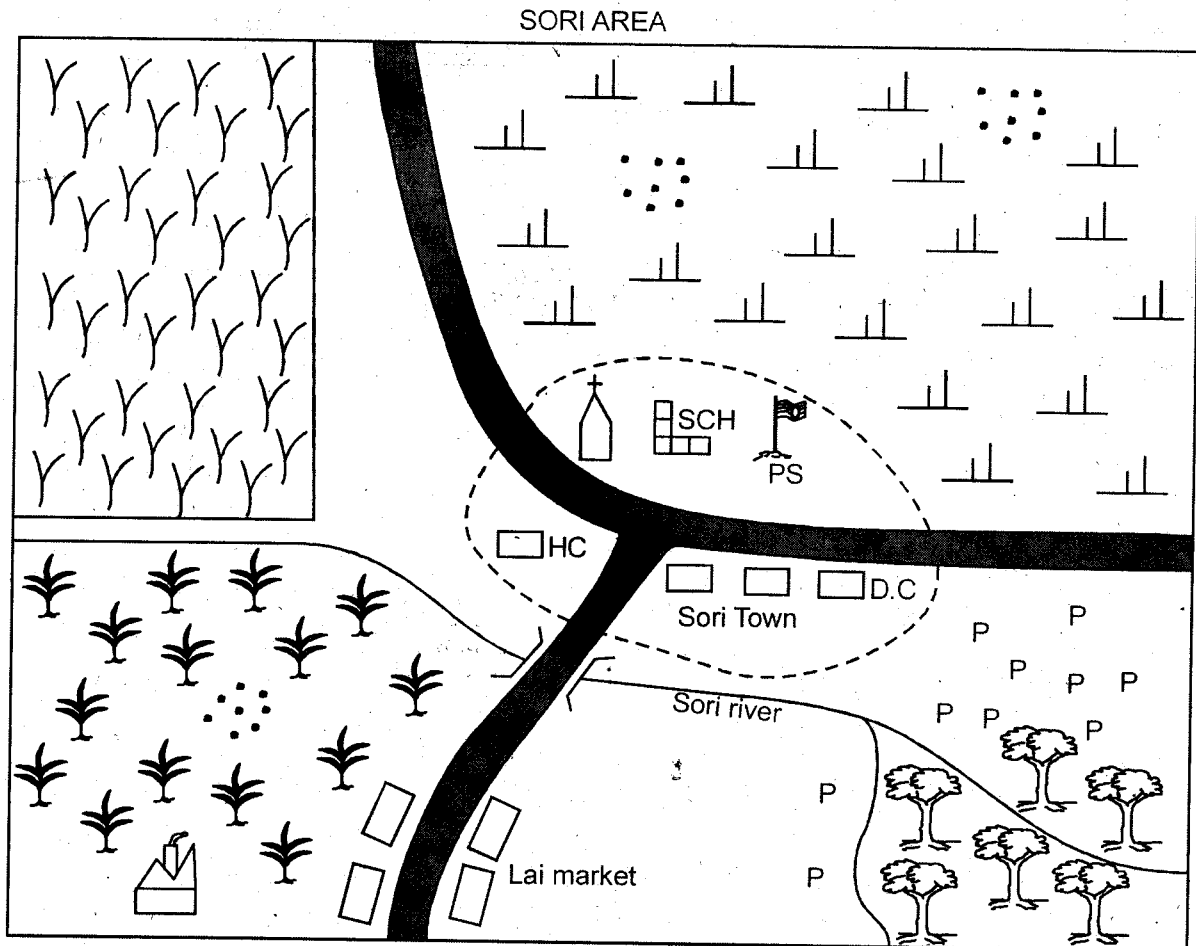


**SOCIAL STUDIES AND
RELIGIOUS EDUCATION**

Time: 2 hours 15 minutes

PART I SOCIAL STUDIES



KEY

	Tarmac road		Town boundary		Rice
	Church		Health centre		Forest
	School		Factory		Permanent buildings
	Sugarcane		Pyrethrum		Shrubs
	Villages		Police station		

Study the map of Sori area and use it to answer questions 1-7.

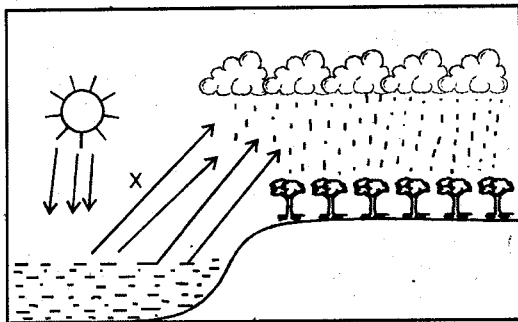
1. What is the direction of Lai market from the school?
 - A. South east
 - B. North east
 - C. South west
 - D. South
2. The staple food of the people of Sori area is
 - A. rice
 - B. pyrethrum
 - C. sugarcane
 - D. shrubs
3. The climate of north eastern part of the map is **LIKELY** to be
 - A. cool and wet
 - B. warm and wet
 - C. hot and wet
 - D. hot and dry
4. The head of Sori area is
 - A. DC
 - B. Chief
 - C. PC
 - D. DO
5. The factory shown in the map is an example of a
 - A. processing factory
 - B. manufacturing factory
 - C. jua kali factory
 - D. industrial factory
6. The type of soil **LIKELY** to be found on the north western side of the map is
 - A. young soils
 - B. black cotton soils
 - C. loam soils
 - D. volcanic soils
7. The people of Sori area are
 - A. Muslim
 - B. traditionalists
 - C. Christians
 - D. pagans
8. Which one of the following weather instruments should be kept in an open area away from buildings?
 - A. Rain gauge
 - B. Thermometer
 - C. Barometer
 - D. Windsock
9. In which of the following relief regions of Kenya are you **LIKELY** to find Homa hills?
 - A. Rift valley
 - B. Lake basin
 - C. Highlands
 - D. Coastal low lands
10. Which of these is a traditional fishing method?
 - A. Purse-seining
 - B. Long lining
 - C. Trawling
 - D. Basket traps
11. The second highest mountain in Kenya is
 - A. Mt. Kenya
 - B. Mt. Marsabit
 - C. Mt. Suswa
 - D. Mt. Elgon
12. The **MOST** westerly longitude of Kenya is
 - A. 5°E
 - B. 42°E
 - C. 34°W
 - D. 34°E
13. Which of the following is **NOT** an example of manufacturing industry?
 - A. Sugar factory
 - B. Glass making factory
 - C. Paper manufacturing factory
 - D. Cement factory
14. Which one of the following Bantus community was assimilated by Luos during their settlement in Kenya?
 - A. Abakuria
 - B. Abagusii
 - C. Abasuba
 - D. Agikuyu
15. Disputes in traditional African communities were solved by
 - A. women
 - B. elders
 - C. children
 - D. parents
16. If a mineral is near the earth's surface then
 - A. underground method is used in mining.
 - B. open cast method is used in mining.
 - C. deep shaft method is used in mining.
 - D. dredger is used in mining.
17. In Mwea Tebere irrigation scheme rice is grown using water from river
 - A. Athi
 - B. Yala
 - C. Thika
 - D. Nyamindi
18. Which one of the following means of transport connects most parts of Kenya?
 - A. Road
 - B. Railway
 - C. Air
 - D. Water
19. The type of soil found in Mwea, Kano and Kapiti plains is
 - A. volcanic soils
 - B. alluvial soils
 - C. black cotton soils
 - D. young soils
20. Which of the following rivers forms a border between Kenya and Uganda?
 - A. Yala
 - B. Nyando
 - C. Kuja
 - D. Sio

21. The following are descriptions of a town in Kenya
- It started as an agricultural town.
 - It is located on a flat area.
 - It is a tourist attraction site.

The town described above is

- A. Nairobi B. Thika
C. Kisumu D. Mombasa

Use the diagram below to answer questions 22 - 24



22. The type of rainfall shown above is
- A. relief B. long rain
C. convectional D. annual
23. The above rainfall is **LIKELY** to be experienced in the following areas **EXCEPT**
- A. Kisumu D. Mombasa
C. Lamu D. Embu
24. The arrow marked **X** represent
- A. winds carrying moisture.
B. sun rays.
C. water vapour
D. hot dry winds.
25. The first Europeans to arrive in Kenya were
- A. Portuguese B. Arabs
C. British D. Germans
26. Which one of the following is the **ODD** one out?
- A. Vasco da Gama pillar
B. Fort Jesus
C. Kariandusi
D. Maasai-Mara
27. The **MAIN** function of mountains in the past was
- A. tourists attraction.
B. camping
C. used as a place of worship
D. mining

28. Afforestation programmes are supported by the government of Kenya **MAINLY** to
- A. create employment.
B. protect water catchment areas.
C. create home for wild animals.
D. increase supply of fuel.

29. Which of these communities can be classified as plain nilotes?
- A. Nandi and Pokomo
B. Teso and Pokot
C. Maasai and Turkana
D. Samburu and Tugen

30. Bamburi and Athi river have one thing in common. It is that they are
- A. diatomite mining areas.
B. stone mining areas
C. fluorspar mining areas.
D. limestone mining areas.

31. Which one of the following is **NOT** a tea growing area in Kenya?
- A. Isiolo B. Kericho
C. Limuru D. Nyeri

32. The following relates to a certain type of climate:
- Receives rainfall of less than 250mm.
 - Temperatures are high during the day and low during the night.
 - Plants such as cactus may grow there.

The climate described above is

- A. mountain climate
B. tropical climate
C. desert climate
D. modified equatorial climate

33. Which one of the following is **NOT** a horticultural crop?
- A. Kales
B. Orchids
C. Mangoes
D. Sunflower

34. The Nandi community resisted the colonial rule through the leadership of
- A. Oloibon Lenana
B. Mekatilili
C. Koitalel Arap Samoei
D. Nabongo Mumia

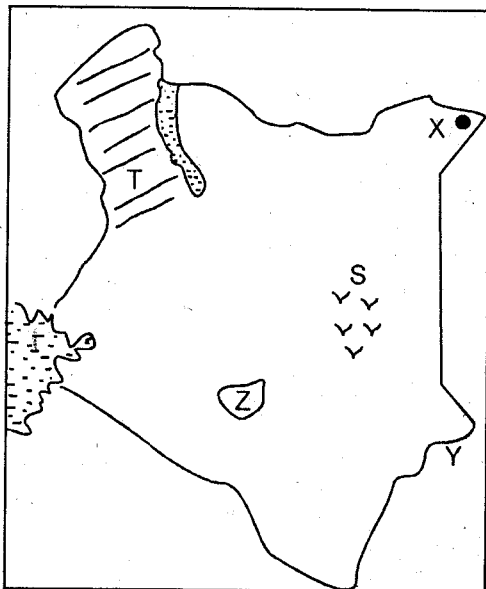
35. Which of the following features was formed as a result of faulting and sinking?
 A. Mt. Kenya B. Rift valley
 C. Nyika plateau D. Lake Victoria

36. Below are uses of rivers in Kenya:
 (i) Provision of water for hydro-electricity.
 (ii) Provision of water for irrigation.
 (iii) Provision of fishing grounds.

Which of these rivers provides all the uses listed above?

- A. River Tana B. River Athi
 C. River Kerio D. River Nzoia
37. Which of the following was **NOT** a way of interaction in the past?
 A. War B. Trade
 C. Inter-marriage D. Tourism
38. The **MOST** common fish in our fish farms is
 A. dagaa B. trout
 C. mud fish D. tilapia
39. Which one of the following is a characteristic of sandy soils?
 A. They are deep and fertile.
 B. They are sticky when dry.
 C. They are shallow and dry.
 D. They have small air spaces.

Use the map below to answer questions 40 - 44



40. What is the name of town marked X?
 A. Mandera B. Moyale
 C. Wajir D. Marsabit

41. The feature marked S is a mouth of river
 A. Lorian B. Kerio
 C. Kuja D. Ewaso Nyiro
42. The Marine park marked Y is
 A. Ruma marine park
 B. Kiunga marine park
 C. Kisite-Mpunguti marine park
 D. Malindi marine park
43. The economic activity carried out in the region shaded and marked T is
 A. irrigation farming B. mining
 C. ranching D. pastoralism
44. The county marked Z is
 A. Nairobi B. Kiambu
 C. Machakos D. Kajiado
45. The highest court in Kenya is
 A. Court of appeal B. High court
 C. Supreme court D. District court
46. Which one of the following forms of communication is the **MOST** recent?
 A. Telephone B. Internet
 C. Radio D. Television
47. Who is the commander-in-chief of the armed forces in Kenya?
 A. Police commissioner
 B. Prime-minister
 C. Vice-president
 D. President
48. A serious social problem in modern Kenya is
 A. HIV/AIDS
 B. shortage of schools
 C. air pollution
 D. lack of employment
49. In which sporting activity is Kenya **MOST** famous?
 A. Boxing
 B. Athletics
 C. Rugby
 D. Soccer
50. Which one of the following is **NOT** an element of weather?
 A. Wind B. Temperature
 C. Altitude D. Rainfall

51. Which of these departments rehabilitates criminals?
 A. Kenya police
 B. Prisons department
 C. Kenya army
 D. National youth service
52. Which one of the following is a man-made lake in Kenya?
 A. Masinga
 B. Naivasha
 C. Bogoria
 D. Magadi
53. Which of the following methods of poultry rearing is the **CHEAPEST** to carry out?
 A. Deep litter system
 B. Battery system
 C. Free range system
 D. Cage system
54. Three of the following shows the importance of law and order in a society. Which one does **NOT**?
 A. Freedom of movement
 B. Love and respect for each other
 C. There is development
 D. Threats to people
55. A Kenyan citizen is eligible for an identity card at the age of
 A. 21 years
 B. 18 years
 C. 25 years
 D. 16 years
56. A councillor represents a
 A. constituency
 B. county
 C. location
 D. ward
57. The main source of government revenue is
 A. fines
 B. loans
 C. taxes
 D. licenses
58. The Goshu, Gurreh and Boran are all
 A. Cushites
 B. Nilotes
 C. Bantus
 D. Semites
59. The national assembly consists of three of the following **EXCEPT**
 A. Chief justice
 B. the Speaker
 C. nominated MPs
 D. elected MPs
60. Which of the following is **NOT** an example of inland fishing ground in Kenya?
 A. Lake Victoria
 B. Lake Naivasha
 C. River Tana
 D. Indian ocean

PART II: RELIGIOUS EDUCATION

SECTION A:

CHRISTIAN RELIGIOUS EDUCATION

61. Who among the following was given a punishment of hard labour during the fall of man?
 A. Adam
 B. Eve
 C. Cain
 D. snake
62. Which of the following is the third book in the Old Testament?
 A. Deuteronomy
 B. Exodus
 C. Leviticus
 D. Kings
63. When Moses saw the burning bush he was in the land of
 A. Egypt
 B. Midian
 C. Judah
 D. Nazareth
64. The sign in the covenant between God and Noah was
 A. rain
 B. circumcision
 C. flood
 D. rainbow
65. The temple of God in Israel was built by
 A. David
 B. Solomon
 C. Ahab
 D. Moses
66. From the story of Job, Christians learn to be
 A. patient
 B. kind
 C. rude
 D. loving
67. "If you give me a son, I will surely give him back to you to serve in the temple". Who made this promise to God?
 A. Sarah
 B. Hannah
 C. Elizabeth
 D. Mary
68. "Do not make yourself images" Israelites broke this commandment when they
 A. worshipped a golden calf.
 B. argued with Moses.
 C. fought with Philistines.
 D. accepted ornaments from Egyptians.
69. Elimelech and Naomi were parents of
 A. Boaz
 B. Ruth
 C. Chillion
 D. Jesse
70. The mark of the Sinai covenant was by use of
 A. blood
 B. baptism
 C. water
 D. laying of hands

71. From the miracles of Jesus, Christians learn to have
 A. faith B. courage
 C. hope D. humility
72. What happened on the eighth day after Jesus was born?
 A. He was dedicated to God.
 B. He was taken to Egypt.
 C. He was baptised.
 D. He underwent circumcision.
73. Jesus healed the centurion's servant at the town of
 A. Bethany B. Capernaum
 C. Jerusalem D. Galilee
74. The words "I am thirsty" were spoken by Jesus during
 A. the last supper
 B. the transfiguration
 C. the baptism
 D. His crucifixion
75. Which of these women had concern for the needy and the poor?
 A. Mary Magdalene
 B. Mary mother of Jesus
 C. Dorcas
 D. Salome
76. Which one of the following is a gift of the Holy Spirit?
 A. Self-control
 B. Faithfulness
 C. Humbleness
 D. Interpretation of messages
77. The early Christian community had special relationship with each other. Their communion involved three of the following **EXCEPT**
 A. fellowshiping together.
 B. sharing their belongings.
 C. sharing the holy communion.
 D. trading together.
78. Who among the following leaders of Israel led in the conquering of Jericho?
 A. Samuel B. Moses
 C. Joshua D. Saul
79. Who among the following was promised a son when he was offering incense to God in the holy of holies?
 A. Elkanah B. Hannah
 C. Serah D. Zechariah
80. From the apostles creed we learn that
 A. God is a saviour
 B. God is a judge
 C. Jesus suffered
 D. Jesus ascended to hell
81. The wine taken during the last supper represents the blood of
 A. God B. sheep
 C. Holy Spirit D. Jesus
82. Who among the following prophets did God promise a new covenant where the laws would be written in the hearts of men?
 A. Jeremiah B. Isaiah
 C. Nathan D. Daniel
83. In the story of the Good Samaritan the injured man was a
 A. Samaritan B. Jew
 C. Roman D. Syrian
84. Peter and John healed a lame man at the beautiful gate in
 A. Nazareth B. Jerusalem
 C. Joppa D. Galilee
85. Prophet Elisha healed Naaman of a disease called
 A. epilepsy B. typhoid
 C. malaria D. leprosy
86. John the Baptist described Jesus as the
 A. Prince of peace
 B. Lamb of God
 C. Mighty father
 D. Wonderful counsellor
87. Which parable in the bible talks about a good neighbour?
 A. The lost sheep
 B. The mustard seed
 C. The good Samaritan
 D. The lost son
88. Growth of the mind is called
 A. physical growth B. spiritual growth
 C. mental growth D. emotional growth
89. Which one is **NOT** a gospel book?
 A. Matthew B. Luke
 C. Mark D. Romans
90. Elders in the African traditional society were **MAINLY** expected to show the quality of
 A. courage B. wisdom
 C. patience D. trust

SECTION B:

ISLAMIC RELIGIOUS EDUCATION

61. Surah Takaathur warns Muslims **NOT** to waste their time on _____
A. wealth
B. gambling
C. just sitting in the mosque
D. children
62. In which month did the prophet receive the first Wahyi of the Qur'an?
A. Muharram
B. Rabii-ul-Awwal
C. Ramadhan
D. Rajab
63. Before we sleep we should recite surah Nas and Falaq for the _____ of Allah, throughout the night.
A. forgiveness
B. rizk
C. protection
D. guidance
64. The surah of the holy Qur'an also known as "the Dua" is _____
A. surah Nasr
B. surah Ikhlas
C. surah Ma'un
D. surah Fatiha
65. Qur'an is Allah's message that was revealed to prophet Muhammad by angel _____
A. Raqib (A.S)
B. Jibril (A.S)
C. Ridhwaan (A.S)
D. Isra'il (A.S)
66. The reason for Allah (S.W.) sending prophets was to _____
A. guide mankind
B. destroy idols
C. show miracles
D. receive wahyi
67. The prophet said, "paradise is under the feet of mothers" and so Muslims should _____
A. work for them
B. respect them
C. kill them and take it
D. pray to them
68. To avoid begging in an Islamic society, Muslims should _____
A. work very hard
B. borrow from rich Muslims.
C. punish the beggars
D. pray hard
69. Many people will be punished in the hellfire because of their _____
A. hands
B. behaviour
C. tongue
D. fear
70. When we hear Adhaan, we quickly know that it is time for _____
A. salaah
B. celebration
C. madrassa
D. a meeting in the mosque
71. Which action of the pillar of salaah is **CORRECTLY** matched with its Arabic name?
A. Sitting - julus
B. Bending - sijda
C. Short stand - rukuu
D. Standing - itidaal
72. Muslim should start training their children to pray at the age of _____ years.
A. five
B. twelve
C. ten
D. seven
73. The first month of Islamic calendar is _____
A. Rabiiul Awwal
B. Muharram
C. Ramadhan
D. Shaaban
74. Which of the following means 'BISMILLAH'?
A. With the will of Allah
B. Praise be to Allah
C. Glory be to Allah
D. In the name of Allah
75. We should pay 2½% zakkat on each of these wealth **EXCEPT** _____
A. money
B. gold
C. food
D. silver
76. Which prayer is fardh kifaya and has zero rakaats?
A. Taraweh
B. Subh
C. Qabliyya
D. Janaza
77. Which prophet was given the holy Zabur as a book of guidance?
A. Nabii Ibrahim
B. Nabii Suleiman
C. Nabii Issa
D. Nabii Daud
78. Muslims spend in the mosque for itkaf on 27th Rajab to remember the _____ of the prophet.
A. Maulid
B. Hijra
C. Isra miiraj
D. first wahyi

79. Muslim ladies cover their heads with parda or veil cloth called _____
 A. jalabib B. kafiyyatun
 C. libasu taqwa D. hijaab
80. Prophet Muhammad was respected when he led all other prophets in a prayer at Masjid Aqsa. He was then called _____
 A. Swadiq B. Mustafa
 C. Imaam D. Shariff
81. Qabila killed his brother Habila because of _____
 A. accident B. revenge
 C. confusion D. jealousy
82. Marriage ceremony in Islam is referred to as _____
 A. kadhi B. Nikah
 C. talaq D. walii
83. Before coming of Islam the Qureish and Jews were mushriquuns who prayed to _____
 A. the sun B. idols
 C. fire D. the caves
84. Which industry among these makes haraam products?
 A. Sugar industry B. A brewery
 C. Jua kali industry D. Tea factory
85. Which one of these acts can spoil udhu?
 A. Eating B. Laughing
 C. Talking D. Sleeping
86. The prophet (p.b.u.h) went to Shaam for the following activity. Which one?
 A. Farming B. Business
 C. Grazing D. Iron mining
87. What will you say when you promise Muslims to do something?
 A. Subhanallah B. Maashallah
 C. Inshallah D. Shukran
88. Which first lady married the prophet when she was 40 years old?
 A. Lady Aisha B. Lady Hafswa
 C. Lady Khadijah D. Lady Maimuna
89. At which place was the prophet's uncle AbuLahab cursed by Allah (S.W)?
 A. At Ashawt
 B. Mount Marwa
 C. At Aqaba
 D. Mount Swafa
90. A good Muslim must pray _____ times a day.
 A. 17 B. 5
 C. 7 D. 10