



# TIMER NATIONAL SERIES EVALUATION TEST STD 5 SOCIAL STUDIES & CRE

Serial no. 0042014

READ THESE INSTRUCTIONS CAREFULLY

1. You have been given this question paper and a separate answer sheet. The question paper contains 90 questions.
2. Do not write on this question paper.
3. When you have chosen your answer, mark it on the ANSWER SHEET, not in this question paper.
4. Make sure that you have written on the answer sheet.

{ 5 }

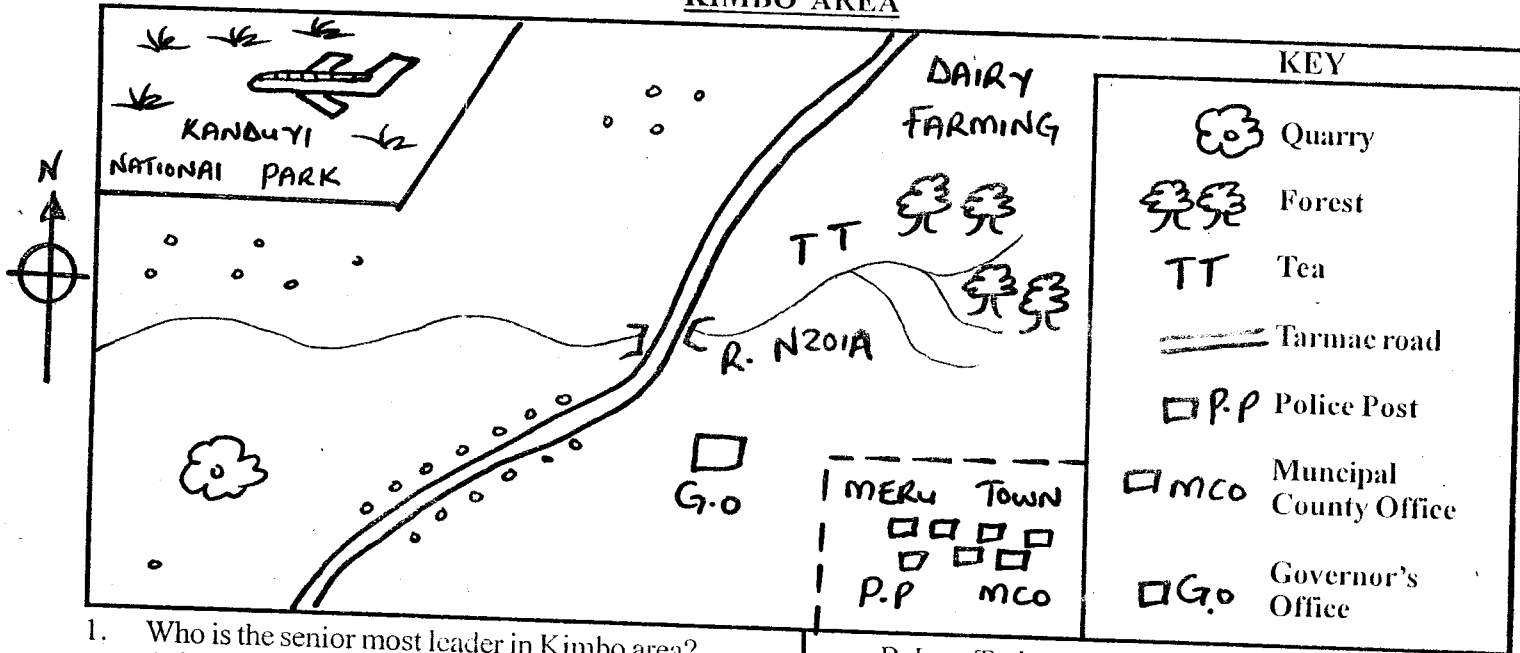
Time: 2 hrs. 15 mins

**HOW TO USE THE ANSWER SHEET**

YOURNAME \_\_\_\_\_


NAME OF YOUR SCHOOL \_\_\_\_\_

## KIMBO AREA



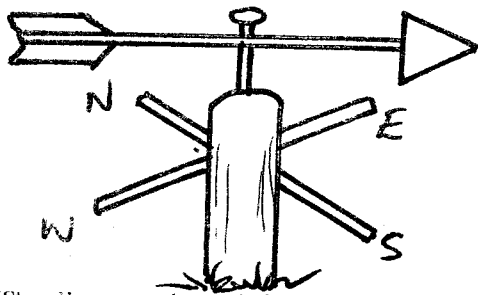
1. Who is the senior most leader in Kimbo area?  
A. Mayor                      B. President  
C. Chief                        D. Governor
2. Which is the **MAJOR** economic activity carried out in Meru town?  
A. Trade                        B. Farming  
C. Fishing                      D. Lumbering
3. Describe the settlement pattern around the National Park  
A. nuclear    B. sparse    C. linear    D. dense
4. Who is the civic leader of Meru town?  
A. Chief    B. Police    C. Mayor    D. Governor
5. What shows that there is tourism on the map?  
A. Dairy farming              B. National park  
C. Quarry                        D. Town
6. Which is the quickest means of transport in Kimbo area?  
A. Air    B. Road    C. Railway    D. None
7. Which is the highest part in Kimbo area?  
A. West    B. North    C. South    D. East.
8. Which of the following groups shows the Highland Nilotes only?  
A. Kipsigis, Sabaot, Pokomo
9. Another name for black cotton soil is \_\_\_\_  
A. volcanic soil                B. alluvial soils  
C. clay soil                      D. sandy soil
10. Which of the following lakes is shared by three countries?  
A. L. Victoria                    B. L. Turkana  
C. L. Magadi                      D. L. Baringo
11. Tourists come to Kenya to \_\_\_\_  
A. poach                        B. build roads  
C. see wild animals            D. work
12. Which of the following is **NOT** an element of a good map?  
A. Title    B. Symbols    C. Scale    D. Key

Use the diagram below to answer questions 13-15.



13. The type of rainfall shown above is \_\_\_\_\_  
A. relief                                      B. convectional  
C. evaporational                              D. condensation
14. The economic activity **LIKELY** to be practised in side T is \_\_\_\_\_  
A. dairy cattle keeping                      B. growing crops  
C. mining                                        D. pastoralism
15. The side marked S is called \_\_\_\_\_  
A. leeward                                      B. rain-shadow  
C. windward                                     D. sloppy
16. River Ewaso Nyiro North drains its water into the \_\_\_\_\_  
A. Yala swamp                                 B. Lorian swamp  
C. Saiwa swamp                                D. Indian Ocean
17. The colour of flag that represents agriculture is \_\_\_\_\_  
A. green                                         B. red  
C. white                                         D. black
18. Rivers that flow throughout the year are called \_\_\_\_\_  
A. seasonal                                      B. tributaries  
C. distributaries                                D. permanent
19. Which of the following is **NOT** a traditional method of education?  
A. Role playing                                B. Working with adults  
C. Imitation                                      D. Writing notes

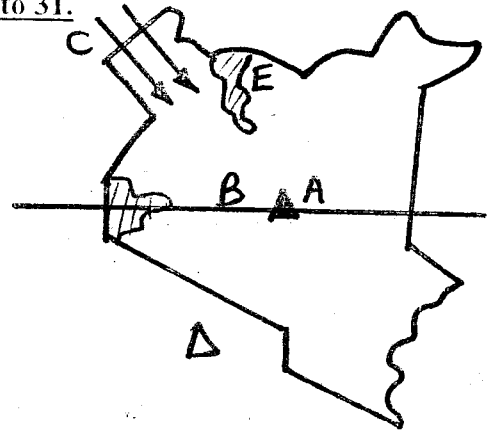
Use the diagram below to answer questions 20 and 21.




20. The diagram above is known as \_\_\_\_\_  
A. windsock                                    B. windvane  
C. raingauge                                    D. thermometer
21. The above instrument is used to measure \_\_\_\_\_  
A. rainfall                                        B. temperature  
C. wind direction                              D. wind strength
22. Which of the following groups of River-Lake Nilotes was first to migrate into Kenya?  
A. Joka-Jok                                      B. Joka-Owiny  
C. Joka-Omollo                                 D. Joka-Abasuba
23. Which of the following does **NOT** cause soil erosion?  
A. Deforestation                                B. Monocropping  
C. Overstocking                                D. Planting cover crops
24. Which of the following features is **COMMONLY** found in Nyika plateau?  
A. Escarpment                                    B. Salty lakes  
C. Inselbergs                                    D. Mountains
25. Which of the following vegetation is found only in the Coastal region in Kenya?  
A. Mangrove forest                              B. Savannah grassland  
C. Dry bush-land                                D. Scrub

26. Which Kenyan community is **CORRECTLY** matched with its area of origin?  
A. Luo - Bahr-el-Ghazel  
B. Agikuyu - Southern Sudan  
C. Taita - Southern Ethiopia  
D. Nandi - Congo

Use the map of Kenya below to answer questions 27 to 31.



27. The feature marked A is mount \_\_\_\_\_  
A. Kenya    B. Elgon            C. Suswa    D. Longonot
28. The line of Latitude marked B is \_\_\_\_\_  
A. Meridian                                    B. Cancer  
C. Capricorn                                    D. Equator
29. The language group that followed route C during migration is \_\_\_\_\_  
A. Bantu    B. Cushites            C. Nilotes    D. Semites
30. The country marked D is \_\_\_\_\_  
A. Ethiopia    B. Tanzania    C. Uganda    D. Sudan
31. The lake marked E is \_\_\_\_\_  
A. Victoria                                      B. Baringo  
C. Naivasha                                      D. Turkana
32. Which of the following was acquired through apprenticeship in traditional education?  
A. History of community    B. Grazing  
C. Cooking                                        D. Wood carving
33. In the past, people interacted in the following ways **EXCEPT**;  
A. birthday                                        B. wars  
C. migrations                                      D. marriage
34. The following factors undermine law and order in the country **EXCEPT**;  
A. tribalism                                        B. worshipping  
C. bribery    D. nepotism
35. Areas with many people are said to be \_\_\_\_\_  
A. densely populated.  
B. not populated.  
C. medium populated.  
D. sparsel populated.
36. The compass direction marked W is \_\_\_\_\_  
A. North East  
B. South West  
C. South East  
D. North West



37. When we resolved our differences, we live \_\_\_\_\_  
 A. unhappily B. in peace  
 C. in poverty D. in sadness
38. Which of the following human rights are provided free to children in Kenya?  
 A. Shelter B. Education  
 C. Clean water D. Balanced diet
39. A good citizen of Kenya is one who \_\_\_\_\_  
 A. goes to church regularly.  
 B. does not drink beer.  
 C. takes his children to school.  
 D. one who obeys the law.
40. Who is the second Prime Minister of Kenya?  
 A. Mwai Kibaki B. George Saitoti  
 C. Raila Odinga D. Kalonzo
41. Which of the following is **NOT** a form of modern industry?  
 A. Manufacturing B. Pottery  
 C. Banking D. Processing
42. Exchange of goods for other goods is called \_\_\_\_\_  
 A. barter trade B. open air trade  
 C. traditional trade D. cowrie shell trade
43. \_\_\_\_\_ farming is keeping of cattle for meat.  
 A. Beef B. Poultry C. Fish D. Dairy
44. Which of the following was **NOT** used as a form of communication in the past?  
 A. Blowing horns B. Wailing  
 C. Letters D. Beating drums
45. Which is the **MAIN** tourists attraction in Lake Nakuru and Bogoria?  
 A. Buffaloes B. Lions  
 C. Flamingos D. Cultural dances
46. Which of the following factors does **NOT** affect population distribution in an area?  
 A. Soils B. Climate  
 C. Religion D. Relief
47. In Kenya census is done after \_\_\_\_\_ years.  
 A. 10 B. 5 C. 7 D. 15
48. Which of the following is a salty water lake?  
 A. L. Naivasha B. L. Magadi  
 C. L. Victoria D. L. Turkana
49. Who is the Cabinet Secretary for Education in Kenya?  
 A. Hon. David Ngugi B. Hon. Uhuru Kenyatta  
 C. Hon. George Saitoti D. Hon. Mutula Kilonzo
50. Below are causes of road accident. Which one is **NOT**?  
 A. Good roads.  
 B. Careless driving.  
 C. Unroadworthy vehicles.  
 D. Carelessness of pedestrians.

51. The road sign means \_\_\_\_\_



A. bumps ahead

52. The **FASTEST** means of transport is \_\_\_\_\_  
 A. railway B. air C. water D. road
53. The **MOST** feared disease in Kenya today is called \_\_\_\_\_  
 A. HIV/AIDS B. malaria  
 C. cholera D. bird flu
54. A member of parliament (MP) is the head of a \_\_\_\_\_  
 A. County B. Constituency  
 C. Ward D. Country
55. Which of the following aspects of culture does **NOT** need to be preserved?  
 A. Female genital mutilation.  
 B. Respect for human life.  
 C. Growing traditional crops.  
 D. Working together.
56. The **BEST** way to solve conflict among people is through \_\_\_\_\_  
 A. fight B. punishment  
 C. discrimination D. dialogue
57. Who was the first President of Kenya?  
 A. Daniel Moi B. Jomo Kenyatta  
 C. Oginga Odinga D. Mwai Kibaki
58. Which of the following plants is **COMMONLY** found in swamps?  
 A. Papyrus reeds B. Coconut tree  
 C. Cashewnuts D. Baobab trees
59. People initiated together into adulthood were called \_\_\_\_\_  
 A. age-group B. council of elders  
 C. age-mates D. age-set
60. Kenya is headed by \_\_\_\_\_  
 A. President B. Prime Minister  
 C. Attorney General D. Chief Justice
- C.R.E**
61. Who among the following people was a patriarch?  
 A. Elijah B. John C. Moses D. Jesus
62. Emmanuel means \_\_\_\_\_  
 A. God with us. B. God is good.  
 C. Jesus leaves. D. God is everywhere.
63. The Luhya call their God \_\_\_\_\_  
 A. Nyasaye B. Mulungu  
 C. Mwene Nyaga D. Wele Khakaba
64. The Roman officer whose servant was healed by Jesus was also called \_\_\_\_\_  
 A. commander B. Centurion  
 C. Apostle D. teacher
65. Who among the following people sold his field and gave the money to be shared by the apostles?  
 A. Stephen B. Jacob  
 C. Barnabas D. Samuel
66. What did Jesus find people doing in the temple?

- A. Buying and selling things.  
B. Praying to God.  
C. Reading the Bible.  
D. Singing to God.
67. Which one of the following is **NOT** a fruit of the Holy Spirit?  
A. Humility  
B. Faithfulness  
C. Joy  
D. Faith
68. How did Adam and Eve disobey God?  
A. Did the work that God gave them.  
B. Ate the forbidden fruit.  
C. Made clothes from leaves.  
D. There was a snake nearby.
69. When Moses saw a burning bush, God commanded him to remove his sandals because \_\_\_\_\_  
A. the place was holy.  
B. he was to be given the commandments.  
C. he would be burnt.  
D. there was a snake nearby.
70. Which one of the following are both qualities of a good leader?  
A. Faithful, dishonest  
B. Humble, untrustworthy  
C. Caring, kindness  
D. Honest, selfishness
71. Jesus washed his disciples feet as a sign of \_\_\_\_\_  
A. forgiveness and service.  
B. faithfulness and justice.  
C. patience and humility.  
D. humility and service.
72. Which one of the following is **NOT** a voluntary service?  
A. Working in public places for payment.  
B. Cleaning up public places.  
C. Taking part in freedom from hunger walk.  
D. Visiting the sick and the aged.
73. The story of Ananias and Sapphira teaches Christians to;  
A. pray to God always.  
B. tell the truth.  
C. hide God's property.  
D. keep something to ourselves.
74. When Jesus sent out the twelve disciples, he instructed them to carry \_\_\_\_\_  
A. food  
B. money  
C. clothes  
D. nothing
75. The sisters of Lazarus were \_\_\_\_\_  
A. Mary and Joseph  
B. Serah and Martha  
C. Elizabeth and Mary  
D. Martha and Mary
76. The second book of the New Testament is \_\_\_\_\_  
A. Matthew  
B. Luke  
C. Mark  
D. Exodus
77. Jesus fed \_\_\_\_\_ people with five loaves of bread and two fish.  
A. 4000  
B. 500  
C. 3000  
D. 5000
78. Mary and Jane found two hundred shillings on their way to school. What should they do?  
A. Take the money to the teacher.  
B. Buy sweets and share with friends.  
C. Share the money equally.  
D. Buy sugar and take it to their friends.
79. A baby stays in the mother's womb for \_\_\_\_\_  
A. one month  
B. two weeks  
C. nine years  
D. nine months
80. Who is a neighbour according to Jesus teaching?  
A. One who is in need.  
B. One who is next to our home.  
C. One who is our relative.  
D. One who stays near our school.
81. Exodus 20:12 says: Respect your father and mother so that \_\_\_\_\_  
A. they will not punish you.  
B. you pray and worship together.  
C. you may live longer.  
D. they may buy you gifts.
82. Which one of the following is **NOT** an important part of a covenant?  
A. Agreement  
B. A dishonesty  
C. Sacrifice  
D. A promise
83. The word church means \_\_\_\_\_  
A. those who are neighbours.  
B. those houses with a cross.  
C. the house of God.  
D. those who believe in Jesus.
84. Kola, a std five pupil is HIV positive. What should her classmate do?  
A. Care and comfort her.  
B. Tell everyone in the school.  
C. Avoid sharing anything with her.  
D. Run away from her.
85. The town where Jesus was born was called \_\_\_\_\_  
A. Jerusalem  
B. Judea  
C. Bethlehem  
D. Nazareth
86. Which one of the following is **NOT** a traditional way of forgiving others?  
A. Sharing a meal.  
B. Talking to a priest.  
C. Performing rituals.  
D. Shaking hands.
87. Who helped Jesus to carry his cross to Golgotha?  
A. Simon Peter  
B. Joseph of Arimathea  
C. Judas Iscariot  
D. Simon of Cyrene
88. God said, "I am who I am", These words were told to \_\_\_\_\_  
A. Moses  
B. Abraham  
C. Joseph  
D. Jeremiah
89. Daniel was thrown in the den of lion during the time of King \_\_\_\_\_  
A. Ahab  
B. David  
C. Darius  
D. Solomon
90. Which one of the following was created by God during the first day?  
A. Sun, moon and stars  
B. Day and night  
C. Man