

STANDARD FIVE EVALUATION TEST SOCIAL STUDIES & CRE

2015

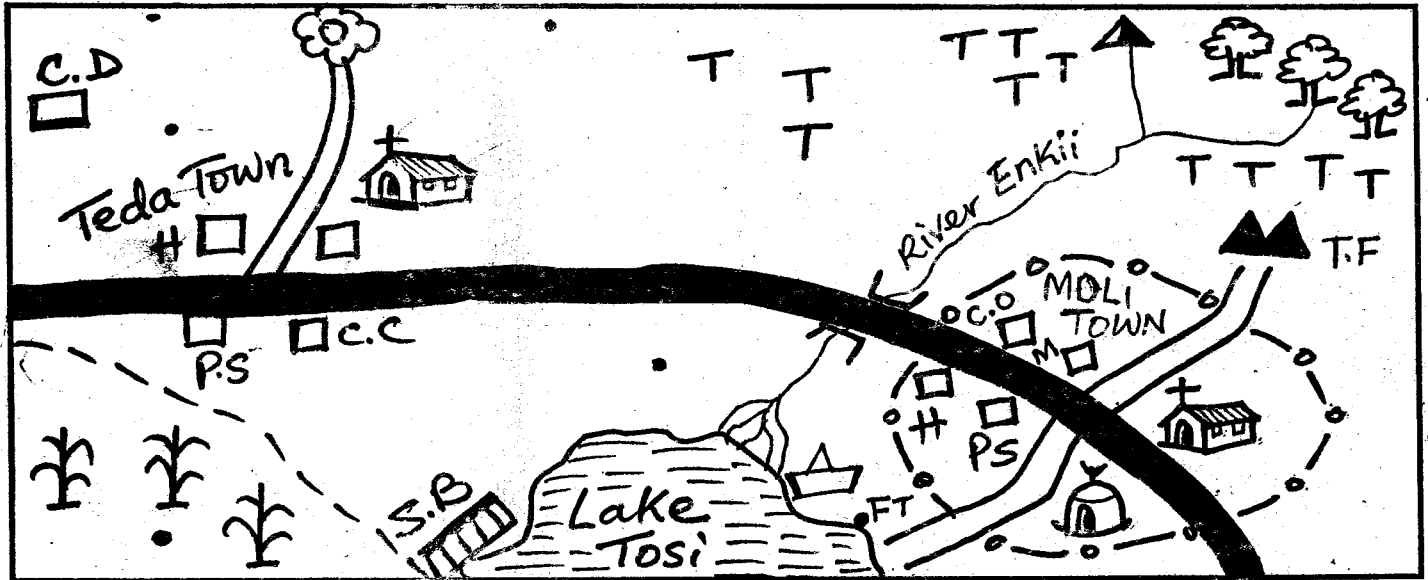
PACEMAKER
SERIES - 006

HOW TO USE THE ANSWER SHEET

1. Use only an ordinary pencil
2. Make sure that you have written on the Answer Sheet
 - (i) YOUR NAME
 - (ii) NAME OF YOUR SCHOOL

Time:- 2hrs 15mins

MEGUMI AREA



KEY

Forest	Mosque	Quarry	S.B	Sandy beaches	Boat repair	
Tarmac road	Millet	Seasonal river	F.T	Fish trap	C.D	Cattle dip
Murrum road	Tea	H	T.F	Tea factory	MKT	Market
Church	Mountain	M	P.S	Police station	C.O	County offices


Study the map of Megumi area to answer questions 1-7

1. What is the flow direction of river Enkii ?
A. North East to South
B. North West to East
C. North to South East
D. South to North East
2. Most of the people of Megumi area are
A. Hindus B. Christians
C. Muslims D. Pagans
3. Which is the climatic condition of the South western part of Megumi area ?
A. Cool and wet B. Warm and moist
C. Hot and dry D. Cool and dry
4. The population distribution of Megumi area can be described as
A. dense B. linear C. clustered D. sparse
5. Which of the following economic activities is **not** carried out in Megumi area ?
A. Tourism B. Farming C. Mining D. Lumbering
6. Which of the following important social facilities is missing in Megumi area?

- A. Hospital
- B. County Governor's Office
- C. School
- D. Market
7. Which are the main means of transport in Megumi area ?
A. Road and water B. Road and air
C. Air and pipeline D. Water and railway line
8. Which of the communities below lived in nine villages known as Makayas ?
A. Maasai B. Kalenjins C. Mijikenda D. Ameru
9. Which was the main reason for the migration of Bantus from Congo forest ?
A. Search for pasture and water
B. Search for fertile land
C. Search for trading items
D. Search for marriage partners
10. Which weather instrument is used to measure the strength of wind ?
A. Rain gauge B. Windvane
C. Barometer D. Windsock
11. The line of latitude that cuts across Kenya to almost two halves is called ?

12. Flowers in Kenya are grown in special houses known as
 A. zero grazing
 B. floriculture
 C. greenhouses
 D. ponds
13. Who is the first deputy president of the republic of Kenya?
 A. Mzee Jomo Kenyatta
 B. William Samoei Ruto
 C. Jaramogi Oginga Odinga
 D. Willy Mutunga

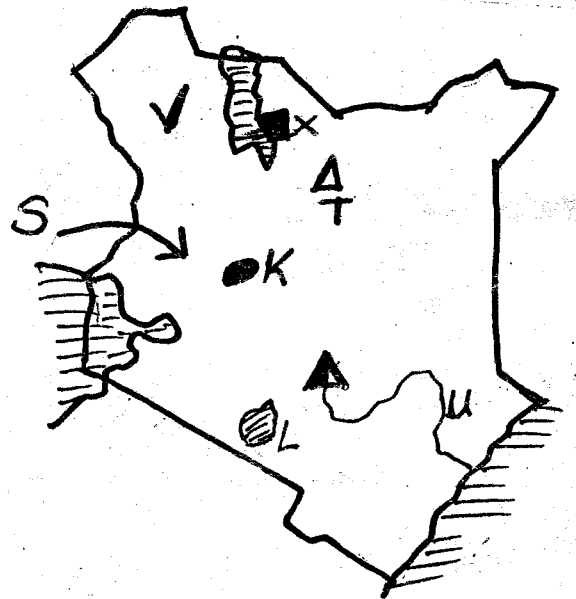
Use the diagram below to answer question 14



14. The fishing method drawn above is called
 A. trawling
 B. purse-seining
 C. longlining
 D. net-driftng
15. Which is the cheapest method of preserving fish?
 A. refrigeration
 B. sun-drying
 C. salting
 D. canning
16. Which is the main importance of wildlife in Kenya?
 A. They are source of food
 B. They are used as gifts for tourists
 C. They earn the country foreign exchange
 D. They are used to entertain guests
17. Which is the main problem affecting tourism in Kenya?
 A. Insecurity
 B. Forest fires
 C. Many wild animals
 D. Pollution
18. Another name for clay soil is
 A. volcanic soil
 B. alluvial soil
 C. young soil
 D. black cotton soil
19. Which of the following is not a relief region in Kenya?
 A. Coastal lowland
 B. Rift valley
 C. River basin
 D. Highlands
20. Most of the trees that are found in natural forest
 A. grow very fast
 B. take long time to mature
 C. are all softwood
 D. are planted in rows
21. Three of the wild animals below are among the big five except?
 A. Lions
 B. Elephants
 C. Hyenas
 D. Buffaloes
22. Which is the most famous tourist attraction site in Kenya?
 A. Maasai Mara
 B. Amboseli
 C. Boni
 D. MalkaMari

23. Fluorspar is mined at _____
 A. Kajiado
 B. Gilgil
 C. Kerio valley
 D. Machakos
24. Which of the following types of fish is not caught in fresh water lake?
 A. Tilapia
 B. Nile perch
 C. Dagaa
 D. Starfish
25. Which of the following countries neighbours Kenya to the East?
 A. Uganda
 B. Somalia
 C. Ethiopia
 D. Tanzania

Use the map of Kenya below to answer questions 26 -30




26. The national park marked X is called
 A. Ruma
 B. Lake Nakuru
 C. Sibiloi
 D. Tsavo
27. The migration route marked S was followed by one of the following language group. Which one?
 A. Highland Nilotes
 B. Western Bantus
 C. Cushites
 D. Plain Nilotes
28. Which mineral is mined from the lake marked L?
 A. Fluorspar
 B. Diatomite
 C. Soda ash
 D. Limestone
29. The town marked K is likely to be
 A. Eldoret
 B. Kisumu
 C. Moyale
 D. Mombasa
30. The mountain marked T is called
 A. mt. Elgon
 B. mt. Kilimanjaro
 C. mt. Mtelo
 D. mt. Marsabit
31. Which is the longest river in Kenya?
 A. R. Athi
 B. R. Nyando
 C. R. Ewaso Nyiro South
 D. R. Tana
32. Which of the following communities decorates their hair and heads with red ochre soil?
 A. Maasai and Samburu
 B. Kipsigis and Tugen
 C. Luos and Elmolo
 D. Agikuyu and Akamba
33. The daily changes of the environment is known as
 A. climate
 B. weather
 C. temperature
 D. sunshine

34. Which river is correctly matched with its source?
 A. R. Turkwel - lake Victoria
 B. R. Kerio - mt. Kenya
 C. R. Nzoia - Mau ranges
 D. R. Athi - Ngong hills
35. Fill the blank space marked with Y with the correct community that fits the group



36. Which one is not a moral value that was taught in the African traditional education?
 A. Honesty B. Obedience
 C. Disrespect D. Kindness
37. People who traced their origin from a common ancestor formed a
 A. language group B. age - group C. clan D. family
38. Which of the following skills was learnt through apprenticeship in the past?
 A. Drawing B. Reading
 C. Cooking D. Iron -smelting
39. Three of the following were specialists in the past. Who among them caused harm to the society?
 A. Rainmaker B. Prophet C. Wizard D. Herbalist
40. Cultural artefacts are important because
 A. they are kept in museums
 B. they attract tourists
 C. they tell the history of the community
 D. they were made in the past
41. Things that are bought from other countries are called
 A. exports B. imports C. electronics D. machines
42. Which of the following is not one of the forty seven counties in Kenya
 A. Kiambu B. Kajiado C. Thika D. Nairobi
43. Who led the Ababukusu community to resist the British colonial power?
 A. Mukite wa Nameme B. Nabongo wa Mumia
 C. Oloibon Lenana D. Waiyaki wa Hinga
44. The counting of people after every ten years is called
 A. population distribution
 B. general election
 C. population census
 D. population density
45. Northern Kenya is sparsely populated mainly because
 A. the area is hot and dry
 B. there are no road networks
 C. the area has fertile soil
 D. the area has many wild animals
46. Our national anthem is sung in ___ languages.
 A. three B. two C. four D. five
47. During the general election, a member of parliament is elected by voters to represent an area known as
 A. county B. constituency C. ward D. location
48. Which is the latest means of communication?
 A. Radio B. Letters C. Messenger D. Internet
49. Flowers are exported to other countries by air because

- A. air is fast
 B. flowers don't get spoilt
 C. air is expensive
 D. air is comfortable
50. Dairy farming is practised in the highlands because the climate is
 A. hot B. dry C. cool D. warm
51. Which of the groups consists of the coastal Bantus only?
 A. Giriama, Mbeere, Embu
 B. Taita, Kuria, Gusii
 C. Wadawida, Pokomo, Digo
 D. Ribe, Rabai, Njemps
52. The Swahili language came as a result of intermarriage between
 A. Bantus and Cushites B. Bantus and Arabs
 C. Nilotes and Cushites D. Nilotes and Arabs
53. The traditional method of farming where land was prepared by slashing and burning was called
 A. shifting cultivation B. bush following
 C. zero grazing D. plantation
54. Which of the following crops is harvested by use of machine?
 A. Flower B. Tea C. Cotton D. Wheat
55. On the 12th December every year, Kenyans celebrate
 A. Madaraka day B. Jamhuri day
 C. Labour day D. Mashujaa day
56. Who among the following Kenyan heroes will be remembered for her effort of conserving environment?
 A. George Saitoti B. John Michuki
 C. Wangari Maathai D. Jomo Kenyatta
57. Road accidents can be prevented by doing the following except?
 A. Educating people how to obey traffic rules
 B. Use of roadworthy vehicles
 C. Use of speed governors and safety belts
 D. Employing many policemen on roads
58. Three of the following activities encourages people to live in peace. Which one does not?
 A. Forgiveness
 B. Obeying the law
 C. Tribalism
 D. Respecting other people's culture
59. Which of the following trees is not found in natural forest?
 A. Camphor B. Elgon teak C. Meru oak D. Cypress
60. Four pupils of class five in Mashuru had gone for an education trip to the city. They came across the following road sign and gave its meaning



- Who gave the correct answer?
 A. Moli - bump ahead
 B. Meritei - danger ahead
 C. Lekamau - junction ahead
 D. Econet - school nearby

CHRISTIAN RELIGIOUS EDUCATION

61. God commands us to love
A. relatives and friends
B. ourselves
C. others as we love ourselves
D. those who love us only
62. The Holy spirit lives in
A. the church
B. heaven
C. our bodies
D. the air around us
63. We can follow the examples of leadership set by Jesus Christ by
A. obeying God
B. being sad
C. asking for help
D. being lazy
64. True friendship in the Bible is demonstrated by
A. James and John
B. David and Jonathan
C. Ananias and Saphira
D. Esau and Jacob
65. The greatest commandment says
A. love God with all your heart
B. love others as you love yourself
C. love your enemies
D. love your friends only
66. The man from Cyrene who helped Jesus to carry His cross for crucifixion was
A. Nicodemus
B. Joseph of Arimathea
C. Pilate
D. Simon
67. Which prophet prophesied about the coming of the new covenant?
A. Moses
B. Jeremiah
C. Angel Gabriel
D. Isaiah
68. HIV / AIDS can be spread from one person to another through
A. shaking hands
B. living with an infected person
C. sharing clothes
D. blood transfusion
69. Which one of the following is found in the Apostles' creed only?
A. Forgive us our trespasses
B. Give us this day our daily bread
C. May we dwell in unity, peace and liberty
D. He will come to judge the living and the dead
70. Jesus had one disciple that He loved most. He was called
A. Peter
B. James
C. John
D. Paul
71. When Moses saw the burning bush he was told to
A. shout for help
B. take off his sandals
C. move away immediately
D. put out the fire
72. Jesus is called the good shepherd because
A. He cares for His followers
B. He cares for His sheep
C. He cares for other shepherds
D. He cares for believers only
73. A commandment which has a promise added is
A. honour your father and mother
B. observe the sabbath day
C. do not steal
D. worship no god but me
74. When one is joined with Jesus Christ, one doesn't
A. start a new life
B. leave the old life
C. start eternal life
D. disobey Jesus commandments
75. Adam and Eve were found by God being naked after
A. obeying God
B. eating the forbidden fruit
C. being in the garden of Eden
D. disobeying satan
76. The two sons of Isaac were
A. Ishmael and Esau
B. Jacob and Esau
C. Jacob and Joseph
D. Joseph and Benjamin
77. In traditional African societies which one of the following was an activity carried out by girls only?
A. Listening to stories
B. sitting around the fire
C. cooking and looking after babies
D. singing and dancing
78. Whose name was changed and called Israel?
A. Isaac
B. Joseph
C. Abraham
D. Jacob
79. As true christian witnesses, we should practise our faith and show it through our
A. actions
B. dancing
C. helping
D. singing
80. Sharing work makes
A. work hard
B. us tired
C. us hungry
D. work easier
81. Naomi's husband was known as
A. David
B. Elimelech
C. Abraham
D. Jacob
82. When baby Jesus was born, He was laid in a
A. manger
B. hospital
C. bed
D. baby cot
83. When we make a promise to God, we should
A. keep the promise
B. hide from God
C. break the promise
D. sing to Him
84. There are ___ books in the Old Testament and ___ books in the New Testament.
A. 66, 27
B. 27, 39
C. 27, 33
D. 39, 27
85. Which statement is not true according to traditional African society?
A. Boys and girls should not engage in sex before marriage
B. Boys and girls should respect their bodies
C. Boys and girls should express their love through sex
D. Boys and girls should exercise self-control when dealing with each other.
86. We are all made in the _____ of God.
A. love
B. image
C. soul
D. legs
87. When Jesus went back to heaven, He promised His disciples to send back
A. Holy spirit
B. angels
C. son
D. peace
88. What led the wisemen to the place Jesus was born?
A. An angel
B. King Herod
C. The shepherus
D. A star
89. Sammy a boy in class five found sh 100 on his way to school. As a christian, he should
A. buy exercise books
B. buy sugar for his mother
C. hide it and use later
D. take it to the headteacher
90. Reconciling a broken relationship in the African society was done by the
A. elders
B. women only
C. men only
D. adults only