

EXCELLENT EVALUATION TEST

STANDARD 5 - YEAR 2014

SCIENCE

- For good health we should rest because _____
 A. a tired body is not fresh
 B. it misuses the food that we eat
 C. it allows our body recover lost strength
 D. it helps a weak person become weak again
- Which of these things is not made from plants?
 A. school desks
 B. iron sheets on the roofs of school building
 C. Books we read
 D. school uniform
- The weather symbols shows _____ and _____




- The actions below are protection behaviours in animals except
 A. eating
 B. biting
 C. stinging
 D. coiling
- The following are uses of moving air. Which one is not?
 A. winnowing
 B. felling trees
 C. sailing boats
 D. driving windmills
- Kiragu, a std 5 boy, was asked to name the sources of sound. He listed the following _____
 A. drum B. fire C. bell D. vehicle
- What is the name of the tooth drawn below?
 A. premolars
 B. Canine
 C. Molar
 D. Incisor

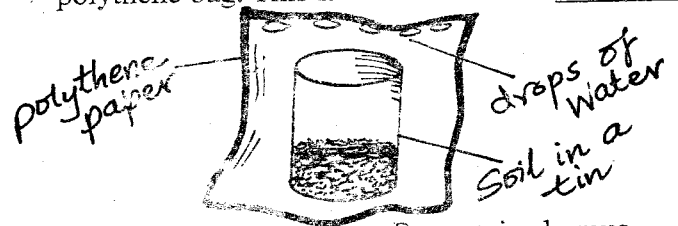


- Food crops include
 A. cereals
 B. beverages
 C. coffee
 D. coconuts
- Weeds are plants which grow in places where they are not wanted. Which of the following weeds can we eat?
 A. Pigweed
 B. Sodom apple
 C. Thorn apple
 D. Mexican marigold
- The following are poultry except _____
 A. duck
 B. hen
 C. goose
 D. scare crow
- All animals have the following characteristics

- Which one is not?
 A. All animals move B. All animals remove waste
 C. All animals grow D. All animals germinate
- The best point to fix a tap on a tank is at the ____
 A. top B. bottom C. under D. side
- Which one of the following factors affects floating and sinking?
 A. Length of the object
 B. Colour of the Object
 C. Size of an object
 D. Material of the object
- We use _____ to sharpen tools
 A. File B. panga C. jembe D. saw
- This tool is used for _____



- removing bottle tops B. driving in nails
 C. scooping soil D. removing weeds
- The following are ways of using heat. Which one is not?
 A. cooking B. cooling C. drying D. warming
- The below experiment was left in the sun for some time. Drops of water were seen in the polythene bag. This shows that the soil _____



- contains air B. contains humus
 C. contains water D. contains animals
- The type of food shown in the diagram gives us _____














- fish B. vitamins C. proteins D. carbohydrates
- A.I.D. stands for
 A. Acquiring Immunize Die Syndrome
 B. Acquired Immune Syndrome Deficiency
 C. Acquired Deficiency Immune Syndrome
 D. Acquired Immune Deficiency Syndrome

20. Which one of the following is not good for your teeth?
A. carrots B. Sugarcane C. milk D. Sweets
21. Lighting up a house is done using _____
A. ironing B. a gas lamp C. cooking D. stars
22. We get light at night from the _____ and _____
A. stars and sun B. sun and cloud
C. moon and stars D. moon and sun
23. The meat of a sheep is called _____
A. mutton B. beef C. milk D. pork
24. Which one cannot be used for storing water?
A. tank B. pot C. boat D. drum
25. Shedding teeth is _____
A. losing permanent teeth
B. putting a shed on teeth
C. losing milk teeth
D. growing of new teeth
26. The soil that contains very fine particles is called _____
A. loam soil B. clay soil
C. sandy soil D. organic soil
27. Dark grey clouds which bring heavy rainfall are _____
A. cumulus B. white clouds
C. high clouds D. nimbus
28. Foods that protect our bodies against diseases are called _____
A. protective foods B. energy-giving foods
C. body-building foods D. herbs
29. Different shapes of the moon are called _____
A. shapes of the moon B. phases of the moon
C. sizes of the moon D. colours of the moon
30. Which cash crop below is both a fibre crop and an oil crop?
A. Sisal B. Coconut C. Sunflower D. Cotton
31. To clean the teeth between them we use a thread with wax. it is called _____
A. tooth brush B. salty water
C. dental floss D. tooth paste
32. Water can be used in the industry for _____
A. cooling machines B. irrigation
C. swimming D. keeping fish
33. Which one of the following is a special sound?
A. singing B. Screaming
C. Ambulance siren D. Noise
34. Which of the following objects will reflect light?
A. Wood B. Dress C. Store D. Glass
35. Which of the following is a use of water in the farm?
A. watering animals B. Cooking
C. Fountain D. Boat racing
36. Which one of the following animals is **not** matched with it's product?
A. Poultry - Eggs,meat B. Sheep - meat, wool
C. Cattle - beef, milk D. Goats - milk, wool
37. A grown up human being has _____ molars
A. 32 B. 8 C. 12 D. 4

38. The young one of a dog is called _____
A. puppy B. kitten C. kid D. baby
39. A eagle moves by _____
A. frying B. flying
C. slithering D. swimming
40. The part of the body of the animal that makes sound is the _____
A. ear B. nose
C. eye D. mouth

Use the weather chart below to answer questions 41 - 45.

Day	Morning	Afternoon
Monday		
Tuesday		
Wednesday		
Thursday		
Friday		 

41. Which day did people not see the sun at any time?
A. thursday B. Wednesday
C. Monday D. Tuesday
42. The hottest day was _____
A. Tuesday B. Thursday
C. Wednesday D. Friday
43. The best day to wash clothes was _____
A. Tuesday B. Monday
C. Wednesday D. Friday
44. Which two days were rainy in the morning?
A. monday, Tuesday B. Friday, Tuesday
C. Wednesday, Thursday D. Monday, Friday
45. The wet and hot afternoon was on _____
A. Friday B. Thursday
C. Wednesday D. Tuesday
46. Humus is made up of _____
A. Organic matter B. Light
C. air D. water
47. Study of the things found in the sky is called _____
A. science B. astronomy
C. astronomist D. farming
48. Which charateristic is not for a living things?
A. feeding B. dying
C. moving D. reproducing
49. People who can not speak or hear use _____ to communicate
A. kicks B. jumping
C. sounds D. gesture
50. Dairy goats are kept for _____
A. meat B. wool
C. milk D. mohair

EXCELLENT EVALUATION TEST

STD. 5 MARKING SCHEME-2014

MATHS	ENGLISH	KISWAHILI	SCIENCE	SOCIAL STUDIES/C.R.E	
1.C	1.B	1.B	1.C	1.C	51.A
2.A	2.A	2.C	2.B	2.D	52.B
3.B	3.D	3.A	3.D	3.A	53.D
4.B	4.C	4.B	4.A	4.B	54.B
5.C	5.D	5.B	5.B	5.A	55.C
6.A	6.A	6.C	6.B	6.C	56.A
7.A	7.D	7.A	7.C	7.D	57.A
8.C	8.B	8.C	8.A	8.C	58.D
9.D	9.C	9.D	9.A	9.D	59.C
10.B	10.C	10.A	10.D	10.B	60.B
11.A	11.A	11.A	11.D	11.B	61.B
12.C	12.D	12.B	12.D	12.C	62.B
13.D	13.B	13.B	13.D	13.A	63.C
14.D	14.C	14.B	14.A	14.D	64.A
15.A	15.D	15.A	15.A	15.B	65.B
16.D	16.A	16.C	16.B	16.A	66.C
17.B	17.B	17.D	17.C	17.C	67.C
18.B	18.A	18.A	18.C	18.C	68.D
19.B	19.A	19.D	19.D	19.B	69.B
20.A	20.B	20.B	20.D	20.A	70.B
21.A	21.C	21.A	21.B	20.A	71.C
22.C	22.D	22.B	22.C	21.B	72.C
23.D	23.B	23.C	23.A	22.A	73.A
24.D	24.B	24.A	24.C	23.B	74.D
25.B	25.D	25.C	25.C	24.D	75.A
26.A	26.C	26.B	26.B	25.B	76.C
27.C	27.D	27.D	27.D	26.D	77.A
28.D	28.C	28.A	28.A	27.B	78.C
29.D	29.A	29.C	29.B	28.B	79.C
30.A	30.D	30.B	30.D	29.A	80.D
31.B	31.C	31.D	31.C	30.B	81.D
32.A	32.D	32.A	32.A	31.D	82.C
33.C	33.A	33.B	33.B	32.B	83.B
34.B	34.D	34.B	34.D	33.A	84.C
35.A	35.B	35.C	35.A	34.A	85.C
36.A	36.C	36.D	36.D	35.C	86.C
37.D	37.C	37.D	37.C	36.B	87.C
38.D	38.C	38.C	38.A	37.D	88.B
39.C	39.C	39.C	39.B	38.B	89.C
40.B	40.B	40.A	40.D	39.A	90.C
41.B	41.A	41.C	41.C	40.A	
42.A	42.C	42.D	42.B	41.A	
43.D	43.B	43.D	43.C	42.C	
44.A	44.D	44.C	44.D	43.C	
45.D	45.C	45.B	45.A	44.D	
46.A	46.C	46.D	46.A	45.A	
47.A	47.B	47.A	47.B	46.C	
48.D	48.B	48.A	48.C	47.B	
49.C	49.A	49.C	49.D	48.C	
	50.C	50.C	50.C	49.D	
				50.C	