



Code 0012015

# TIMER NATIONAL SERIES

## EVALUATION TEST

# { 5 }

### STD 5 SCIENCE

READ THESE INSTRUCTIONS CAREFULLY

1. You have been given this question paper and a separate answer sheet. The question paper contains 50 questions.
2. Do not write on this question paper.
3. When you have chosen your answer, mark it on the ANSWER SHEET, not in this question paper.

**HOW TO USE THE ANSWER SHEET**

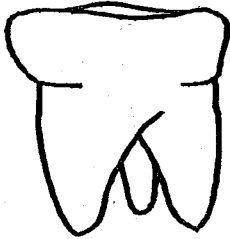
4. Make sure that you have written on the answer sheet.

**Time: 1 hr. 40 mins**

YOURNAME \_\_\_\_\_

NAME OF YOUR SCHOOL \_\_\_\_\_

1. The type of teeth shown below is known as



- A. premolar
- B. canine
- C. molar
- D. incisor

2. People who study weather are known as

- A. astrologers
- B. witchdoctors
- C. meteorologists
- D. astronomers

3. The process of watering crops is called

- A. irrigation
- B. spraying
- C. raining
- D. floods

4. The following are factors that determine sinking and floating of an object. Which one does NOT?

- A. Size
- B. Shape
- C. Weight
- D. Type of material

5. \_\_\_\_\_ is NOT a cereal crop.

- A. Millet
- B. Sorghum
- C. Maize
- D. Coconut

6. Insects breath through

- A. nose
- B. spiracles
- C. lungs
- D. gills

7. Which of the following is NOT seen at night?

- A. Stars
- B. Moon
- C. Clouds
- D. Sun


8. Which of the following diseases is spread by mosquitoes?

- A. Measles
- B. AIDS
- C. Malaria
- D. Typhoid

9. Which of the following materials can you use to model clouds?

- A. Mud
- B. Charcoal
- C. Cotton wool
- D. Manilla paper

10. The weather is



- A. windy
- B. cloudy
- C. rain
- D. calm

11. Plants growing in the garden and are not wanted are known as

- A. weeds
- B. crops
- C. cereals
- D. grass

12. The food that contains correct amount of proteins, carbohydrates and vitamins is referred to as

- A. protective food.
- B. energy giving food.
- C. balanced diet.
- D. sweet food.

13. Water can be used for enjoyment. This is called
- A. recreation
  - B. swimming
  - C. cleaning clothes
  - D. fountains

14. What is the name of the phase of the moon drawn below?



- A. New moon
- B. Full moon
- C. Gibbous
- D. Crescent

15. Animals that feed on flesh only are known as
- A. carnivores
  - B. vultures
  - C. omnivores
  - D. herbivores

16. Monica covered a surface with a lid which had soil in it. She heated it for sometime and opened the lid. What did she observe?
- A. Water droplets under the lid.
  - B. Bubbles in the soil.
  - C. Soil formed mud.
  - D. Minerals float on the soil.

17. Chemicals used to kill weeds are known as
- A. insecticides
  - B. pesticides
  - C. herbicides
  - D. weed killer

18. Water can be stored in the following ways EXCEPT;
- A. pots
  - B. pipes
  - C. dams
  - D. drums

19. Which of these is NOT a product from goat?

- A. Mutton
- B. Mohair
- C. Milk
- D. Beef

20. Which one of the following is NOT correctly matched with its body cover?

- A. Fish - scales
- B. Snake - hair
- C. Birds - feathers
- D. Cow - fur

21. Clouds are said to be feathery or dark grey. This helps us to classify clouds according to their

- A. appearance
- B. shape
- C. colour
- D. height

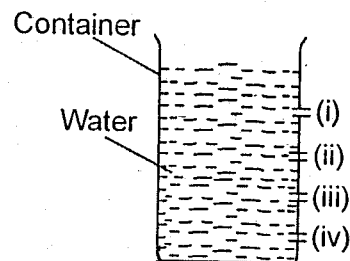
22. Which of the following groups of food is CORRECTLY matched with its examples?

- A. Energy giving food      yam, bread, mango
- B. Protective food          tomato, kales, lemon
- C. Body building food      fish, orange, egg
- D. Vitamins                    meat, beans, chicken

23. Which one of the following animals is the ODD one out?

- A. Crab
- B. Spider
- C. Tick
- D. Scorpion

24. Which of the following jets had the lowest pressure?



- A. v
- B. iii
- C. ii
- D. i











25. Which of the following is a natural source of heat?

- A. Electricity
- B. Fire
- C. Lightning
- D. Sun



40. For seeds to germinate, they need warmth, water and
- A. soil                                      B. air  
C. smoke                                      D. sunlight
41. The following are uses of soil to man **EXCEPT**;
- A. making pots                              B. growing crops  
C. building houses                              D. making ant hills

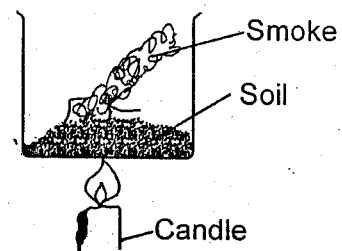
Use the weather chart below to answer questions 42 and 43.

DAY	MORNING	AFTERNOON
MONDAY		
TUESDAY		
WEDNESDAY		
THURSDAY		
FRIDAY		

42. Which day did pupils carry their umbrellas on their way to school?
- A. Tuesday                                      B. Wednesday  
C. Thursday                                      D. Friday
43. Which of the following statements is **FALSE**?
- A. It was rainy on Tuesday afternoon.  
B. Clothes did not dry on Monday morning.  
C. It was both windy and sunny on Thursday afternoon.  
D. It was calm on Wednesday morning.
44. Which of the following items should **NOT** be shared?
- A. Plates                                      B. Bed  
C. Spoons                                      D. Underwears

45. Which of the following simple machines is used to remove nails?
- A. Claw hammer                              B. Scissors  
C. Spade                                      D. Axe
46. Which of the following helps the fish to swim in water?
- A. Scales                                      B. Gills  
C. Fins                                      D. Mouth
47. Water is used for cleaning in all the following **EXCEPT**;
- A. farm                                      B. our homes  
C. recreation                                      D. industries

48. Philip heated some soil as shown below.



What conclusion did he make?

- A. Soil has air.  
B. Soil has water.  
C. Soil has living organisms.  
D. Soil has organic matter.
49. We eat \_\_\_\_\_ of a cabbage.
- A. stem                                      B. root  
C. flowers                                      D. leaves
50. The following are needed when cleaning the teeth. Which one is **NOT**?
- A. Toothpaste                                      B. Toothpick  
C. Dental floss                                      D. Water