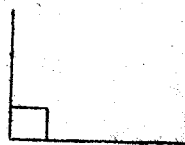


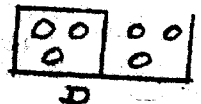
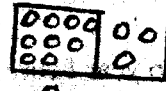

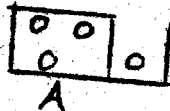
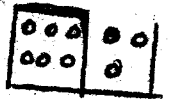


27. How many cents are there in 3 shillings?
A. 100 cts B. 3000 cts C. 100 cts D. 300 cts
28. Change 300 mins to hours.
A. 30 hrs B. 50 hrs C. 5 hrs D. 60 hrs
29. Josephat Imbaya wrote a letter to his friend in Nakuru on 10.7.2002 saying "I will visit you after 15 days." On what date was he to visit his friend?
A. 25th June 2002 B. 15th July 2002 C. 5th July 2002
D. 25th July 2002
30. If in a leap year February has 29 days. How many days are there in the months of November and February of a leap year?
A. 30 B. 29 C. 59 D. 62
31. Sharon was given by her mother five hundred shillings to go and buy 2 kg sugar at Sh. 45 per kg and a kg of meat at Sh. 140 per kg. What change was she given?
A. Sh. 270 B. Sh. 230 C. Sh. 570 D. Sh. 360
32. Tom walks everyday from home to school a distance of 3 km. How many km does he walk to and fro in one week? (Monday to Friday)
A. 6 km B. 30 km C. 15 km D. 8 km
33. Which of the following numbers is divisible by two and ten?
A. 35 B. 86 C. 90 D. 222
34. Which of these numbers is odd?
A. 36 B. 209 C. 492 D. 710
35. Mr. Omari transported choir members from Bukhulunya to Chavakali. If the matatu carried 24 pupils in one trip, how many pupils were transported in 4 trips?
A. 96 B. 20 C. 28 D. 86
36. Multiply: $5 \times 5 \times 5 =$ _____
A. 25 B. 50 C. 15 D. 125
37. What is $\frac{1}{2}$ of 8?
A. $\frac{1}{16}$ B. 2 C. 4 D. $\frac{2}{4}$
38. How many debses of 20 litres will fill a drum of 240 litres?
A. 200 B. 12 C. 10 D. 120
39. What name is given to this angle?
A. Straight angle
B. Two sided angle
C. Right angle



18. Silas Muchikha is a farmer and has several animals on his farm. If he has 20 sheep on his farm, how many eyes do the sheep have?
 A. 2 B. 20 C. 40 D. 80

19. Abigail's mother started preparing her lunch at 12 noons. If she took 2 hrs 24 mins, at what time was it ready?
 A. 1:45 p.m. B. 2:45 p.m. C. 11:45 p.m. D. 12:45 p.m.

20. What is the next pattern?



Use the following table to answer questions 21-23.

Pupils absent from Std 4 Bukhulunya Primary School

MON	TUE	WED	THUR	FRI
12	0	20	5	3

21. On which day was the number of pupils inside the class greatest?
 A. Monday B. Wednesday C. Tuesday D. Friday

22. The class normally has 57 pupils. What was the number of pupils present on Thursday?
 A. 62 B. 52 C. 5 D. 72

23. Mrs. Lusimbo, the class teacher, organized a party for the pupils on Wednesday. How many pupils were present in the party?
 A. 37 B. 57 C. 45 D. 54

24. Write the following as a decimal: $\frac{42}{100}$
 A. 4.2 B. 0.42 C. 0.042 D. 42

25. Write 0.8 as a fraction.
 A. $\frac{8}{100}$ B. $\frac{10}{8}$ C. $\frac{8}{10}$ D. $\frac{.08}{10}$

26. Work out:

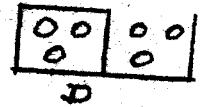
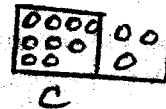

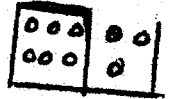
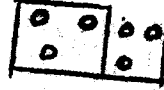

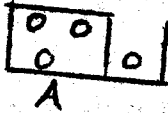
M	Cm
27	20
+	85
<hr style="width: 50%; margin-left: 0;"/>	03

A. 27m 105 cm B. 28 m 05 cm C. 27 m 65 cm D. 2805 m

18. Silas Muchikha is a farmer and has several animals on his farm. If he has 20 sheep on his farm, how many eyes do the sheep have?
 A. 2 B. 20 C. 40 D. 80

19. Abigail's mother started preparing her lunch at 12 noons. If she took 2 hrs 24 mins, at what time was it ready?
 A. 1:45 p.m. B. 2:45 p.m. C. 11:45 p.m. D. 12:45 p.m.

20. What is the next pattern?



Use the following table to answer questions 21-23.

Pupils absent from Std 4 Bukhulunya Primary School				
MON	TUE	WED	THUR	FRI
12	0	20	5	3

21. On which day was the number of pupils inside the class greatest?
 A. Monday B. Wednesday C. Tuesday D. Friday

22. The class normally has 57 pupils. What was the number of pupils present on Thursday?
 A. 62 B. 52 C. 5 D. 72

23. Mrs. Lusimbo, the class teacher, organized a party for the pupils on Wednesday. How many pupils were present in the party?
 A. 37 B. 57 C. 45 D. 54

24. Write the following as a decimal: $\frac{42}{100}$
 A. 4.2 B. 0.42 C. 0.042 D. 42

25. Write 0.8 as a fraction.
 A. $\frac{8}{100}$ B. $\frac{10}{8}$ C. $\frac{8}{10}$ D. $\frac{08}{10}$

26. Work out:

M	Cm
27	20
+	85

A. 27m 105 cm B. 28 m 05 cm C. 27 m 65 cm D. 2805 m

27. How many cents are there in 3 shillings?
A. 100 cts B. 3000 cts C. 100 cts D. 300 cts
28. Change 300 mins to hours.
A. 30 hrs B. 50 hrs C. 5 hrs D. 60 hrs
29. Josephat Imbaya wrote a letter to his friend in Nakuru on 10.7.2002 saying "I will visit you after 15 days." On what date was he to visit his friend?
A. 25th June 2002 B. 15th July 2002 C. 5th July 2002
D. 25th July 2002
30. If in a leap year February has 29 days. How many days are there in the months of November and February of a leap year?
A. 30 B. 29 C. 59 D. 62
31. Sharon was given by her mother five hundred shillings to go and buy 2 kg sugar at Sh 45 per kg and a kg of meat at Sh. 140 per kg. What change was she given?
A. Sh. 270 B. Sh. 230 C. Sh. 570 D. Sh. 360
32. Tom walks everyday from home to school a distance of 3 km. How many km does he walk to and fro in one week? (Monday to Friday)
A. 6 km B. 30 km C. 15 km D. 8 km
33. Which of the following numbers is divisible by two and ten?
A. 35 B. 86 C. 90 D. 222
34. Which of these numbers is odd?
A. 36 B. 209 C. 492 D. 710
35. Mr. Omari transported choir members from Bukhulunya to Chavakali. If the matatu carried 24 pupils in one trip, how many pupils were transported in 4 trips?
A. 96 B. 20 C. 28 D. 86
36. Multiply: $5 \times 5 \times 5 =$ _____
A. 25 B. 50 C. 15 D. 125
37. What is $\frac{1}{2}$ of 8?
A. $\frac{1}{16}$ B. 2 C. 4 D. $\frac{2}{4}$
38. How many debses of 20 litres will fill a drum of 240 litres?
A. 200 B. 12 C. 10 D. 120
39. What name is given to this angle?
A. Straight angle
B. Two sided angle
C. Right angle

