



JASMO SERIES

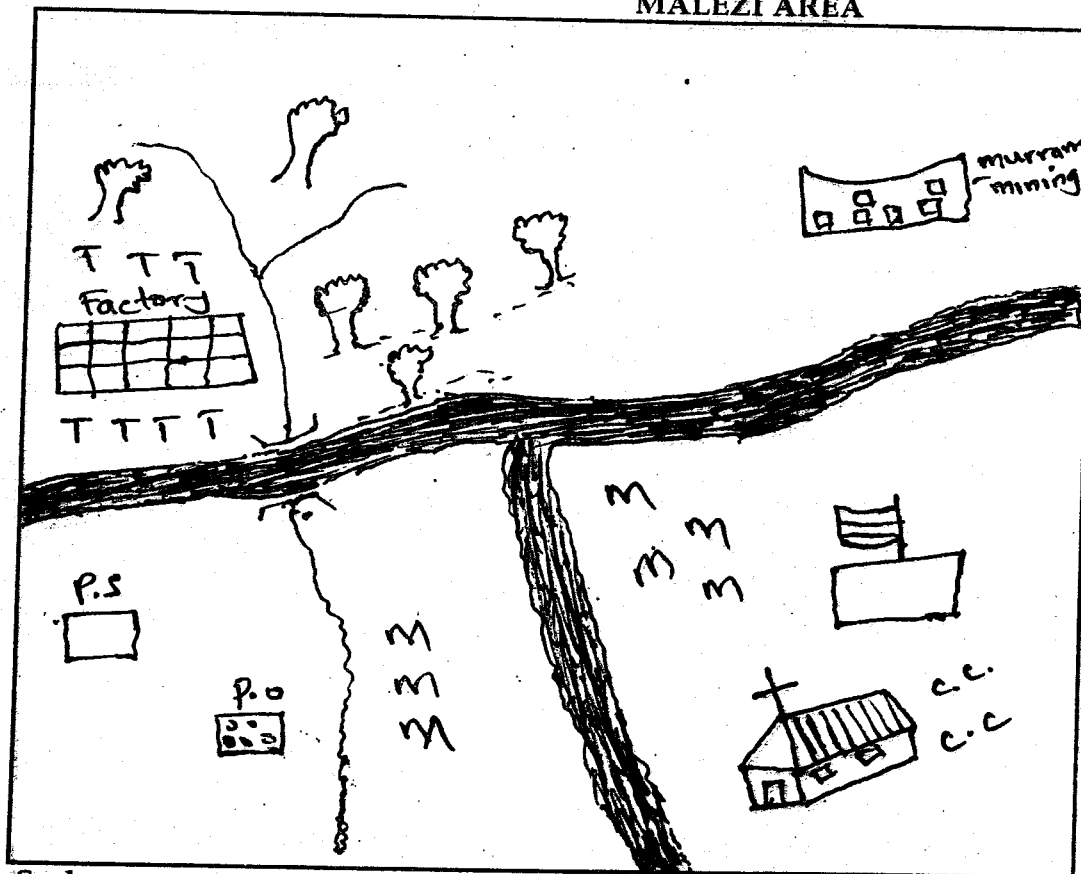
STD. 4 TERM 1 - 2014

SOCIAL STUDIES/CRE

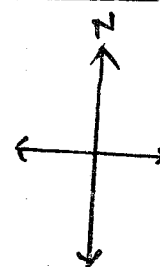
TIME: 2HRS 15 MINS

Study the map of Malezi Area and answer the questions below 1-7.

MALEZI AREA



Key	
	River
	P.S. Post Office
	Police station
	Forest
	Chief's camp
	Maize
	Tea
	Road
	Church
	Factory
	Murram Mining







Scale

- The major cash crop in Malezi area is ____
A. maize B. cotton
C. tea D. coffee
- River Oyani is flowing from ____ to ____
A. North to South B. South to North
C. East to West D. West to East
- The factory shown on the map will process ____
A. cotton B. wheat
C. sugarcane D. tea
- People of Malezi area are likely to be?
A. Muslims B. Christians
C. Hindu D. Pagan
- The food crop the people of Malezi Area are is ____
A. tea B. rice
C. maize D. wheat
- The means of transport in Malezi Area is
A. roads B. railway
C. water D. air
- The murrum mining on the map is in ____ side of the map.
- Our country is made up of?
A. District B. Locations
C. Sub-locations D. Divisions
- John is standing facing North. His back is towards the direction called?
A. North East B. South East
C. South West D. South
- Traditional clothing was made from ____
A. cotton B. reeds
C. skin D. papers
- Which one of the following was NOT taught to girls in old days.
A. Looking after animals
B. Caring for babies
C. Cooking
D. Washing utensils
- The instrument used to tell where the wind is blowing from is called ____
A. Barometer B. Windvane
C. Rain gauge D. Thermometer

13. Some Rivers in the counties in the former Nyanza Province flow only during the dry season. They are said to be _____
 A. shallow B. seasonal
 C. flooded D. permanent
14. The main lake in which fishing is done in the former Nyanza province is _____
 A. L. Saio B. L. Victoria
 C. L. Simbi D. L. Kanyaboli
15. Which of the following is a community belonging to the Bantu language group found in Migori county.
 A. Arabs B. Samburu
 C. Abaluhya D. Abagusii
16. Which of the following statements is **True** about communities of the same language group?
 A. They line and work together
 B. Some words are similar
 C. All the communities speak the same language.
 D. They have a common ancestor
17. In Migori County, areas with high population density are mainly the _____
 A. areas around lake region
 B. areas with little rainfall
 C. areas near the road
 D. towns and urban centres
18. Crops grown for selling are called _____
 A. food crop B. cereal crop
 C. vegetaton D. cash crop
19. A large piece of land filed with water is known as _____
 A. valley B. mountain
 C. hills D. lakes
20. The sun sets in the _____
 A. East B. North
 C. South D. West

Use the diagram to answer questions 21-23.

Mon	Tue	Wed	Thur
			

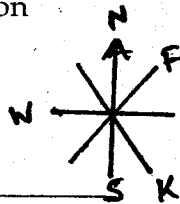
21. Which day was cloudy?
 A. Monday B. Wednesday
 C. Tuesday D. Thursday
22. Thursday was _____
 A. Rainy B. Windy
 C. Cloudy D. Calm
23. Which day did the children go to school with an umbrella?
 A. Thursday B. Monday
 C. Wednesday D. Tuesday

24. Who is the current prime minister in Kenya.
 A. Daniel Moi B. Uhuru Kenyatta
 C. Raila Odinga D. Mwai Kibaki
25. Poultry are _____
 A. birds B. bees
 C. cattle D. fish
26. The leader of the location is called _____
 A. D.O. B. D.C.
 C. President D. Chief
27. A _____ guards our home at night.
 A. Donkey B. Cat
 C. Dog D. cat
28. It is child right to be taken to _____
 A. market B. school
 C. tour D. the city



29. The instrument above is used for _____
 A. transport B. communication
 C. education D. writing
30. Areas such as Nyamira, Kisii and Kisumu town have a high population. They are _____ populated.
 A. sparsely B. thinly
 C. densely D. highly
31. After the birth of a child a _____ ceremony was held.
 A. naming B. death
 C. religion D. marriage
32. Farmers prepare their land during _____ season.
 A. dry B. wet
 C. cold D. hot ad wet
33. School uniform should be worn _____
 A. wekly B. monthly
 C. daily D. school days
34. Insects that cause diseases on trees are called _____
 A. pests B. flies
 C. arachids D. myriopodes
35. Trees give us _____ we use to bild house
 A. firewood B. timber
 C. ash D. leaves
36. A _____ is a source of water
 A. house B. tap
 C. river D. trees.
37. Things that help us to get wealth are called _____
 A. goods B. services
 C. cattle D. resources
38. The things that people do to get money are called _____

39. The animals we keep at home are _____ animals.
 A. wild B. domestic
 C. cows D. fish
40. Leaving the soil with the plant cover leads to soil _____.
 A. growth B. erosion
 C. disease D. pests



41. The point marked "K" is _____.
 A. West B. East
 C. North West D. South East
42. The diagram below is used for _____




- A. sweeping B. digging
 C. slashing D. cutting
43. Which of the following is the name of our county?
 A. Migori County B. Homabay County
 C. Kisii County D. Siaya County
44. Area with few people are _____ populated.
 A. densely B. hardly
 C. sparsely D. thinly
45. Rain gauge is used to measure _____.
 A. spread of wind
 B. direction of wind
 C. amount of rainfall
 D. strength of wind
46. The tail of a windvane points _____.
 A. where the wind is blowing from
 B. the wind is blowing to
 C. the east and west direction
 D. the north and south direction
47. Many homes make a _____.
 A. town B. location
 C. center D. village
48. Most furniture are made of _____.
 A. wood B. stones
 C. mud D. papers
49. We plant flowers to make our compound look _____.
 A. bushy B. dirty
 C. clean D. beautiful
50. Our national flag has _____ colours.
 A. 1 B. 4 C. 5 D. 2
51. The fastest means of transport is _____.
 A. air B. road
 C. railway D. water

52. Which of the following is NOT a product from pig?
 A. pork B. leather
 C. sausages D. bacon
53. In the past sick people were treated by _____.
 A. nurses B. balcksmith
 C. medicine men D. doctors
54. The road sign drawn below shows a _____



- A. sharp corner B. hospital
 C. stop D. no entry



55. The wind on the side marked B are _____.
 A. cool and dry B. hot and wet
 C. warm and moist D. moist and cool
56. Building stones are mined at a place called a _____.
 A. crops B. vegetation
 C. vegetables D. food crops
57. Plants that grow naturally are described as _____.
 A. crops B. vegetation
 C. vegetables D. food crops
58. Which of the following was a traditional sports _____.
 A. tennis B. wrestling
 C. netball D. soccer
59. In our national flag the black colour represents _____.
 A. peace B. people
 C. justice D. unity
60. The head of the school is _____.
 A. headteacher
 B. gamesmaster
 C. deputy headcher
 D. senior teacher
- C.R.E.**
61. _____ was the mother of Jesus.
 A. Elizabeth B. Mary
 C. Zipporah D. Magdalene
62. David saw his fellow Std. 4 boys fighting what was he supposed to do immediately?
 A. join the fight
 B. cheer them
 C. report to the teacher
 D. call other pupil to see
63. As a christian how do we respect our parents?

64. A. by quarelling them B. by obeying them
C. by abusing them D. by fighting them
Onyango was given more change that was required by a shopkeeper. The best thing he should do is _____
A. use the money to buy sweets
B. give his parents the money
C. share the money with his friends
D. refund the change to the shopkeeper
65. The first book in the bible _____
A. Genesis B. Mathew
C. Malachi D. Revelation
66. Who was stoned to death because of his faith?
A. Stephen B. Judas
C. John D. Isaih
67. Ancestors used to worship in the _____
A. mosque B. churches
C. John D. Isaiah
68. What is a church?
A. a building B. a group of believers
C. A parmanent building
D. A place et a side
69. Christians take care of trees and animals mainly because they are _____
A. good B. eating
C. God's creation D. man's food
70. The book that talks about creation is called _____
A. Numbers B. Genesis
C. Leviticus D. Micah
71. Jesus Christ obeyed God by _____
A. accepting to die for our sins
B. avoiding God's will
C. being proud of himself
D. not praying to him
72. Jesus fed 5,000 people with _____ and _____
A. five fish and two loaves of breas
B. meat and ugali
C. ten loaves of bread and ten fish
D. two fish and five loaves of bread
73. The birth and death of Jesus was to bring _____ to human kind.
A. judgement B. salvation
C. death D. faith
74. One should take care of the environment by:-
A. breaking branches from times to use as firewood
B. killing bees that visit flowers around
C. putting butterfly in our classroom
D. putting rubbish in dustbin or pit
75. Which one of the following is not a good behaviour?
76. A. pride B. honesty
C. humility D. kindness
The following are gifts of the Holy Spirit except?
A. preaching B. healing
C. stealing D. speaking in tongues
77. The word covenant means _____
A. succession B. agreement
C. testament D. separation
78. The Holy Bible has _____ books.
A. 27 B. 39 C. 66 D. 76
79. Incase of any problem, the bible tells us to
A. cry B. sleep C. pray D. laugh
80. We must look after the sick by giving them _____
A. sweets B. medicine
C. miraa D. cigarettes
81. Which of the following should not be done in the church?
A. playing B. singing
C. praying D. reading
82. Who could not see Jesus Christ because because of his height?
A. Peter B. David
C. David D. Mathew
83. One of the following symbols represents the Holy Spirit. Which one is it?
A. Cloud B. Dove
C. Water D. Earthquake
84. During the time of Noah, God destroyed the world using _____
A. fire B. floods
C. hailstoens D. plagues
85. What did Jesus need from those he healed
A. Love B. Trust C. Faith D. Courage
86. Who among the following is not a church leader.
A. Bishop B. Pastor C. Trader D. Priest
87. Jesus was baptised in river _____
A. Tana B. Athi C. Missisipi D. Jordan
88. Jesus showed a sign of service by washing the _____
A. utensils B. hands of disciples
C. feet of disciples D. heads of the disciples
89. Adam and Eve were chased away out of the garden of eden due to
A. buying good
B. being disobedient
C. cheating
D. being unfair to others
90. Jesus went with his disciples to pray on the mount of _____
A. Sinai B. Gethsemane
C. Olives D. Golgotha

TASMO SERIES

STANDARD 4 - YEAR 2014

MARKING SCHEME

ENGLISH	KISWAHILI	SCIENCE	MATHS	SOCIAL STUDIES
1 A 26 C	1 B 26 A	1 26 D	1 B 26 B	1 C 31A 61B
2 A 27 D	2 B 27 D	2 27	2 C 27 C	2 A 32A 62C
3 A 28 D	3 C 28 A	3 A 28 C	3 A 28 C	3 D 33D 63B
4 C 29 A	4 B 29 D	4 C 29 B	4 C 29 A	4 B 34A 64D
5 B 30 D	5 C 30 B	5 D 30 C	5 C 30 A	5 C 35B 65A
6 A 31 B	6 A 31 C	6 C 31 D	6 C 31 B	6 A 36C 66A
7 B 32 C	7 B 32 C	7 32 D	7 A 32 D	7 A 37D 67-
8 A 33 A	8 A 33 B	8 33 A	8 A 33 A	8 B 38A 68B
9 D 34 D	9 D 34 C	9 B 34 C	9 C 34	9 A 39B 69C
10 B 35 D	10 C 35 B	10 A 35 C	10 B 35 A	10 C 40A 70B
11 B 36 B	11 C 36 A	11 D 36 B	11 36 B	11 A 41D 71A
12 A 37 A	12 B 37 D	12 B 37 C	12 B 37 D	12 B 42A 72D
13 C 38 D	13 C 38 C	13 C 38 B	13 A 38 D	13 B 43D 73B
14 B 39 B	14 B 39 D	14 39 B	14 C 39 D	14 B 44C 74D
15 C 40 A	15 40 B	15 C 40 C	15 A 40 C	15 C 45C 75A
16 A 41 A	16 D 41 D	16 C 41 C	16 D 41 A	16 C 46B 76C
17 D 42 C	17 D 42 C	17 A 42 B	17 C 42 D	17 D 47D 77B
18 C 43 -	18 B 43 D	18 43 D	18 B 43 B	18 D 48A 78C
19 B 44	19 A 44 A	19 A 44 B	19 C 44 C	19 D 49D 79C
20 A 45	20 D 45 B	20 45 A	20 B 45 A	20 D 50B 80B
21 C 46	21 B 46 C	21 A 46 A	21 A 46 C	21 C 51A 81A
22 B 47	22 A 47 B	22 B 47 C	22 C 47 A	22 A 52B 82-
23 A 48	23 C 48 A	23 B 48 C	23 D 48 B	23 A 53C 83B
24 C 49	24 A 49 A	24 B 49 C	24 B 49 D	24- 54D 84B
25 C 50	25 A 50 D	25 C 50 B	25 D 50 C	25 A 55A 85C
				26 A 56B 86C
				27 C 57B 87D
				28 B 58B 88C
				29 B 59B 89B
				30 D 60A 90C

COMPOSITION/INSHAMARKING SCHEME

MARKING SCHEME CRITERION

The composition will be assessed according to the following guidelines:-

- The maximum mark will be 40 and the minimum mark 01

- Does the script show that the candidate can communicate accurately, fluently and imaginatively in English/Kiswahili.

Accuracy (16 Marks)

- A) Correct tense and agreement of verbs
C) Correct spelling (4 marks)

- B) Accurate use of vocabulary (4 marks)
D) Correct punctuation (4 marks)

Fluency (16 marks)

- A) Correct flow of the story (4 marks)
C) Correct spelling (4 marks)

- B) Well sequenced sentences and connected paragraphs (4 marks)
D) Ideas developed in logic sequence (4 marks)

Imagination (8 marks)

- A) Unusual but appropriate use of words (4 marks)

- B) Variety of structure

