

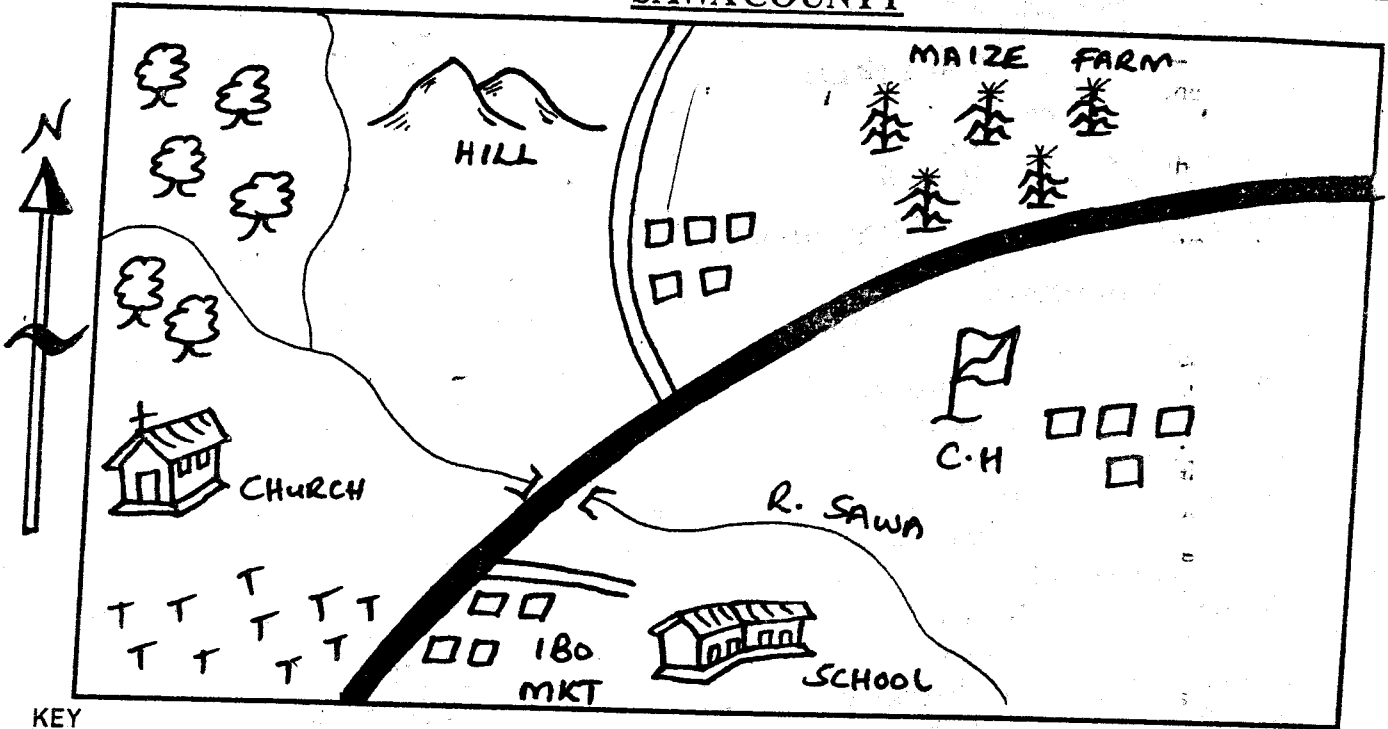
COUNTY BOOST EXAMINATION SERIES

STANDARD FOUR TERM 1 - YEAR 2014

SOCIAL STUDIES & C.R.E

SAWA COUNTY

TIME: 2 Hrs. 15MIN



KEY

- | | | | |
|------------------------|-------------|----------------|------------|
| Tarmac Road | Murrum Road | River & Bridge | Church |
| Shops | Tea | Maize | MKT Market |
| CH County Headquarters | Forest | Hills | |

Use the map of SAWA COUNTY above to answer questions 1 - 7:-

1. The people of Sawa County get their water from

A. lake	B. Dam
C. river	D. borehole
2. The main means of transport in the County is

A. road	B. railway
C. air	D. water
3. The county cash crop grown in Sawa county is

A. Tea	B. Millet.
C. maize	D. beans
4. People of Sawa county are _____

A. Muslims	B. Pagans
C. Hindus	D. Christians
5. Sawa County is administered by _____

A. Governor	B. headteacher
-------------	----------------

- | | |
|----------|------------|
| C. Chief | D. teacher |
|----------|------------|
6. River Sawa flows from _____ to South East

A. North East	B. North
C. North West	D. South East
 7. How many bridges are there in Sawa County?

A. 1	B. 2
C. 3	D. 4
 8. Vegetation that grows on its own is called

A. natural	B. artificial
C. grassland	D. scrub
 9. Three of the following are good morals EXCEPT ____

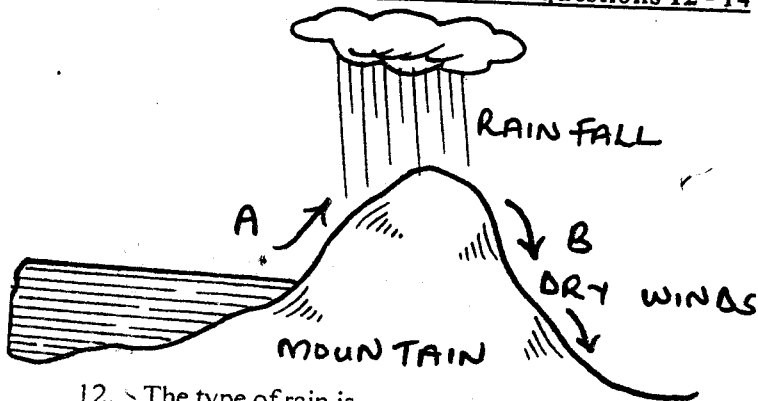
A. respecting others	B. corruption
C. obedience	D. working hard
 10. People who visit our country to see wildlife (wild animals) are

A. thieves	B. poachers
C. tourists	D. wardens

11. The four main points of a compass are called _____ points

- A. compass B. needle
C. cardinal D. corners

Use the diagram below to answer questions 12 - 14



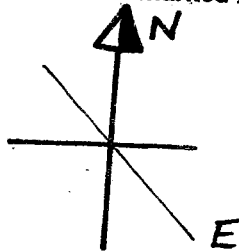
12. The type of rain is _____
A. relief B. convectional
C. cyclonic D. mountain rain

13. Side A is called _____ side
A. leeward B. windward
C. rainy D. rainshadow

14. The side marked B is called _____ side
A. windward B. rainy
C. dry side D. leeward

15. Food, shelter and _____ are basic needs
A. cars B. clothes
C. education D. mobile phones

16. The compass direction marked E is _____



- A. South West B. North East
C. South North D. South East

17. The sun sets from the _____
A. East B. North
C. South D. West

18. Another name for grassland is _____
A. forest B. pasture
C. savannah D. shrub


19. Crops grown for food are known as _____ crops
A. food B. cash
C. market D. home

20. Our President today in Kenya is
A. Kalonzo B. Uhuru
C. Kibaki D. Raila

21. The streams of small rivers are called _____

- A. channels B. lakes
C. distributaries D. tributaries

22. The sign below represents _____



- A. wind B. clouds
C. rainfall D. sun

23. The directions North, South, East and West are the _____ of the compass

- A. eight cardinal points B. four main points
C. eight main points D. four cardinal points

24. The houses of the Maasai are called

- A. huts B. shelter
C. warriors D. Manyattas

25. The road sign below means



- A. shop B. hospital
C. school D. home

26. The highest mountain in Kenya is _____

- A. Mt. Kilimanjaro
B. Mt. Kenya
C. Mt. Elgon
D. Mt. Aberdares

27. An area of wet land with vegetation called _____

- A. Semi-desert B. Swamp
C. Sudd D. Desert

28. _____ maintains law and order in Kenya

- A. Army B. Priest
C. Elders D. Police

29. A lot of rain causes _____


- A. floods B. drought
C. frogs D. nothing

30. The head of a family is _____

- A. father B. mother
C. children D. aunt


31. Buying of goods and services is _____

- A. using B. bought
C. trade D. purchase

32. The capital city of Kenya is
 A. Mombasa B. Kisumu
 C. Mandera D. Nairobi
33. _____ was the first president of Kenya
 A. Jomo Kenyatta B. Harry Thuku
 C. Daniel Moi D. Tom Mboya
34. The main means of travel in Kenya is by
 A. air B. road
 C. water D. railway
35. Which colour in our national flag represents our peace?
 A. Black B. Red
 C. Green D. White
36. Which of the following is not a cash crop?
 A. Tea B. Coffee
 C. Yams D. cotton
37. _____ is the movement of people from one place to another?
 A. Migration B. Movement
 C. Communication D. Transport
38. Irrigation is done where there is
 A. plenty of rainfall B. dry land
 C. no rivers D. no rivers
39. Moving air is called _____
 A. temperature B. Climate
 C. rain D. wind
40. Long ago boys and girls were taught by _____
 A. father B. mother
 C. elders D. uncles
41. The flag of Kenya has _____ colours
 A. 5 B. 3 C. 1 D. 4
42. Below are rights of a child. Which one is not a right?
 A. Right to education B. Right to life
 C. Right to health D. Right to fight
43. Which one of the following is NOT a resource in our country?
 A. Cow B. Land
 C. House D. River
44. Which one of the following is NOT a source of water?
 A. Tanks B. Rivers
 C. Boreholes D. Wells
45. Which element of weather is measured by this instrument?

 A. Wind B. Rainfall
 C. Sunshine D. Temperature
46. Areas with few people are said to be _____ populated.
 A. densely B. sparsely
 C. thinly D. high density populated
47. Which of the following is NOT an importance of vegetation
 A. Some plants are sources of medicine
 B. Some types of plants attract bees
 C. Vegetation protect soil from being carried away
 D. Forests do not help in the formation of rainfall
48. Which of the following is a food crop?
 A. Cotton B. Arrow roots
 C. Sisal D. Coffee
49. The major tourist attraction in our country is
 A. Wildlife B. Historical sites
 C. Good hotels D. Friendly people
50. All of the following are wild animals except
 A. Hippo B. Turkey
 C. crocodile D. Lion
51. The magnetic needle of a compass always points
 A. North B. South
 C. East D. West
52. The head of a county is known as
 A. Provincial Commissioner
 B. Governor
 C. District Commissioner
 D. District Office
53. Rivers that have water throughout the year are known as
 A. occasional B. permanent
 C. tributaries D. Seasonal
54. One of the following games was NOT played in the past. Which one?
 A. Football B. Swimming
 C. Wrestling D. Raing
55. Who among the following provide security in a place?
 A. Teachers B. Citizens
 C. Police D. Parents
56. People who break laws should be _____
 A. killed B. burnt
 C. beaten D. arrested
57. People who get medicine from the forest to treat people are called
 A. bush doctors B. foresters
 C. herbalists D. Nurses
58. A family which consists of father, mother and children are known as _____ family
 A. extended B. nuclear
 C. single parent D. relatives
59. To conserve the environment we should
 A. Kill the wild animals B. burn forest
 C. plant trees D. cut down trees
60. It is the responsibility of children to
 A. provide food
 B. provide security
 C. take care of family property
 D. teach moral values

C. R. E

61. God created everything in _____ days
 A. six B. seven
 C. five D. ten
62. Jesus had _____ disciples
 A. 10 B. 12
 C. 13 D. 15
63. Which is the first book in the Bible?
 A. Genesis B. Exodus
 C. Malachi D. Revelation
64. As Christians we should avoid being _____
 A. kind B. loving
 C. unselfish D. selfish
65. During the time of Noah, people were destroyed with
 A. fire B. lightning
 C. famine D. water
66. Where did God give Moses the Ten Commandments?
 A. Mt. Kenya B. Mt. Elgon
 C. Mt. Sinai D. School
67. The death of Jesus on the cross shows God's _____
 to mankind
 A. creation B. Power
 C. Faith D. Love
68. Jesus was baptized by John the Baptist in River
 A. Jordan B. Galilee
 C. Sinai D. Red Sea
69. Jesus grew up in the town of _____
 A. Bethlehem B. Jerusalem
 C. Nazareth D. Judea
70. The Bible has _____ books
 A. 99 B. 27
 C. 39 D. 66
71. Samuel served in the house of _____
 A. Eli B. David
 C. Samson D. Daniel
72. Jesus offered his life to _____ us with God
 A. connect B. fight
 C. sin D. destroy
73. The name "EMMANUEL" means _____
 A. We are saved B. God with us
 C. Prince of Peace D. Born in Bethlehem
74. Jesus' father was Joseph. He worked as a _____
 A. teacher B. fisherman
 C. carpenter D. tourist
75. Jesus prayed in the garden of _____
 A. Eden B. Gethsemane
 C. Nazareth D. Judah
76. The first people to see Baby Jesus were the _____
 after he was born.
 A. Angels B. Wisemen
 C. Shepherds D. Herod
77. King Solomon asked God for _____
 A. wisdom B. power
 C. energy D. wealth
78. When we want to speak to God, we should _____
 A. dance B. write
 C. pray D. ring
79. Jesus told his disciples that HE would make them fishers
 of _____
 A. fish B. children
 C. men D. women
80. Who was the son of Abraham?
 A. Benjamin B. Jacob
 C. Joseph D. Isaac
81. Jesus taught using short stories called
 A. parables B. miracles
 C. riddles D. proverbs
82. We should always _____ our friends when they
 wrong us.
 A. abuse B. hate
 C. forget D. forgive
83. Jesus sent _____ to his disciples on the day of
 Pentecost.
 A. Simon B. gifts
 C. holy spirit D. Peter
84. The _____ did not like Jesus.
 A. kings B. Prophets
 C. pharisees D. angels
85. The sisters of Lazarus were _____ and _____
 A. Mary and Elizabeth B. Mary and Sarah
 C. Elizabeth and Hannah D. Mary and Martha
86. A good leader should _____ to his people.
 A. listen B. be tough
 C. show hatred D. give punishment
87. There is God the Father, God the Son and God the _____
 A. mother B. daughter
 C. Holy Spirit D. Son
88. When a shopkeeper gives us more change, we should
 A. keep it
 B. use it to buy chips
 C. share it with friends
 D. return the extra money
89. In the Old Testament God spoke to His people through
 A. Pastors B. Bible
 C. Prophets D. Jesus
90. As Grace was coming from school, she met a very old
 woman carrying water. As a Christian, what could she
 have done?
 A. Pity her
 B. Leave her alone
 C. Laugh at her
 D. Help her to carry the water



COUNTY BOOST EXAMINATION SERIES

STANDARD FIVE TERM 1 - YEAR 2014

MARKING SCHEME

MATHS		ENGLISH		KISWAHILI		SCIENCE		SOCIAL STUDIES & CRE		
1. A	31. B	1. A	31. A	1. D	31. B	1. D	31. D	1. D	31. C	61. B
2. C	32. A	2. B	32. D	2. C	32. B	2. A	32. B	2. A	32. C	62. B
3. B	33. C	3. C	33. B	3. A	33. A	3. C	33. A	3. A	33. A	63. A
4. B	34. C	4. D	34. C	4. B	34. D	4. D	34. B	4. A	34. B	64. A
5. D	35. B	5. A	35. B	5. B	35. C	5. C	35. C	5. B	35. A	65. C
6. A	36. D	6. A	36. A	6. C	36. B	6. B	36. D	6. C	36. C	66. B
7. A	37. D	7. B	37. D	7. D	37. D	7. D	37. C	7. D	37. D	67. B
8. B	38. A	8. D	38. A	8. B	38. C	8. C	38. B	8. B	38. C	68. C
9. D	39. B	9. A	39. D	9. B	39. A	9. B	39. C	9. D	39. B	69. D
10. C	40. A	10. B	40. B	10. B	40. A	10. C	40. D	10. A	40. A	70. C
11. B	41. A	11. B	41. C	11. B	41. A	11. A	41. C	11. B	41. A	71. A
12. B	42. B	12. A	42. D	12. C	42. B	12. D	42. B	12. C	42. D	72. B
13. C	43. B	13. C	43. B	13. A	43. D	13. A	43. A	13. C	43. A	73. D
14. D	44. A	14. A	44. A	14. A	44. C	14. D	44. C	14. B	44. C	74. D
15. B	45. A	15. B	45. C	15. C	45. B	15. A	45. B	15. B	45. A	75. A
16. D	46. D	16. B	46. A	16. B	46. A	16. C	46. A	16. A	46. B	76. C
17. A	47. A	17. D	47. D	17. C	47. C	17. A	47. C	17. B	47. D	77. B
18. A	48. B	18. D	48. B	18. D	48. C	18. C	48. A	18. C	48. A	78. D
19. A	49. C	19. B	49. C	19. D	49. C	19. A	49. A	19. B	49. B	79. A
20. D	50. D	20. A	50. A	20. A	50. D	20. B	50. B	20. C	50. A	80. C
21. B		21. D		21. C		21. B		21. D	51. B	81. A
22. C		22. B		22. C		22. C		22. C	52. A	82. D
23. C		23. B		23. D		23. D		23. B	53. C	83. B
24. D		24. A		24. B		24. A		24. C	54. D	84. D
25. C		25. B		25. B		25. C		25. A	55. B	85. A
26. D		26. C		26. C		26. B		26. B	56. B	86. C
27. B		27. A		27. A		27. C		27. D	57. A	87. B
28. C		28. D		28. A		28. B		28. A	58. A	88. D
29. A		29. D		29. C		29. A		29. D	59. B	89. B
30. D		30. C		30. B		30. D		30. A	60. C	90. C

COMPOSITION MARKING SCHEME

MARKING CRITERIA

1. The composition will be assessed according to the following guidelines.

- The maximum mark will be 40 and the minimum mark 01

- Does the script show that the candidate can communicate accurately fluently and imaginatively in English?

Accuracy (8 marks)

(8 marks)

(a) Correct tenses and agreement of verbs (4 marks) (b) Accurate use of vocabulary (4 marks)

(16) (c) Following a sequence (4 marks)

(d) Correct punctuation

(4 marks)

Fluency (8 marks)

(8 marks)

(a) Words in the correct order (4 marks) (b) Sentence connected and paragraphs (4 marks)

(b) Correct spelling (4 marks)

(d) Ideas developed in logical sequence (4 marks)

Imagination (8 marks)

(a) Unusual but appropriate use of words and phrases (4 marks)

(b) Variety of structure (4 marks)

NB: Please, teachers are requested to scrutinize this marking scheme before use. It is worth.

