

ACADEMIC BREAK-THROUGH SERIES

003

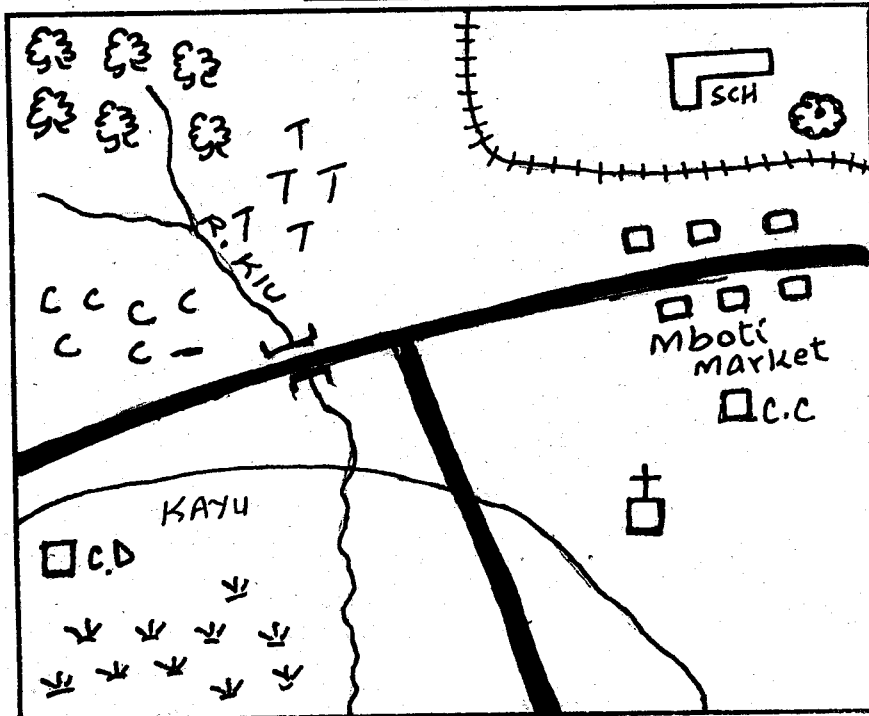
STD. 4 TERM I - YEAR 2012

SOCIAL STUDIES & C.R.E

Time: 2hrs 15minutes

MBOTI AREA

KEY



	Forest
	Tea
	Coffee
	Church
	Railway
	Tarmac road
	Chiefs camp
	Cattle dip
	Market
	School
	Grass
	Quarry

SCALE 0 1 2 3 4 5 6 7 8 9 10 Km

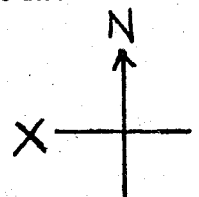
Study the map of Mboti area and answer questions 1-7

- River Kiu flows to ___ direction.
A. North West B. South
C. West D. East
- The main economic activity in Mboti area is ___
A. trading B. mining
C. farming D. tourism
- People of Mboti area are ___
A. muslims B. pagans
C. budhists D. christians
- The main means of transport in Mboti area is ___
A. road B. railway
C. air D. water
- The direction of the school from the church is ___
A. South B. North
C. East D. North West
- Mboti area is administered by ___
A. Chief B. D.O C. D.C D. P.C
- What evidence in the map shows that people of Kayu area are cattle keepers?
A. forest B. quarry
C. market D. cattle dip

8. Which one of the following is a modern method of communication?

- A. horns B. smoke
C. mobile D. drums

9. The direction marked X is ___



- A. West
B. East
C. North
D. South

10. ___ is the highest mountain in our province.

- A. Mt. Aberdare B. Mt. Kenya
C. Mt. Karima D. Mt. Elgon

11. Who is the prime minister of Kenya? ___

- A. Daniel Moi B. Raila Odinga
C. Kenyatta D. Musyoka

12. The four points of a compass are called ___ points.

- A. ordinal B. compass
C. north D. cardinal

13. The head of a district is called ___

- A. Headmaster B. D.O
C. D.C D. Chief


14. The instrument used to measure direction of wind is called _____
 A. anemometer B. thermometer
 C. rain gauge D. windvane
15. Which one of the following is not an element of weather?
 A. windsock B. rainfall
 C. wind D. temperature
16. How many counties are there in Kenya?
 A. 52 B. 36 C. 47 D. 18
17. The head of our country is _____
 A. chief B. president
 C. D.O D. Uhuru Kenyatta
18. The sun sets in the _____
 A. West B. East
 C. North East D. South
19. The direction between North and East is _____
 A. South B. North West
 C. North East D. West
20. The road sign below means?



- A. left turn
 B. no parking
 C. danger ahead
 D. loose stones

21. Areas with many people are referred to as _____ populated.
 A. sparsely B. few
 C. more D. densely
22. The main economic activity of people in our province is _____
 A. farming B. mining
 C. fishing D. trading
23. The head of a county is called _____
 A. D.C B. chief
 C. governor D. minister

Study the diagram below and answer questions 24-26



24. The type of rainfall shown above is called _____
 A. convectional B. relief
 C. mountain D. winds
25. The side marked **D** is known as _____
 A. windward B. relief
 C. leeward D. plains

26. Which economic activity is practised in the side marked **C**?
 A. farming B. pastoralism
 C. mining D. lumbering
27. Elections in Kenya are held after every _____ years.
 A. 10 B. 8 C. 2 D. 5
28. Which one of the following is a beef cattle? _____
 A. Jersey B. Zebu
 C. Fresian D. Ayrshire
29. _____ is an area of high flat land.
 A. plain B. mountain
 C. plateau D. hill
30. The head of education in our province is _____
 A. P.D.E B. D.E.O
 C. D.C D. Head teacher
31. Which one is a traditional method of transport?
 A. railway B. donkey
 C. road D. air
32. Who among the following is not allowed to treat sick people?
 A. dentist B. witchdoctor
 C. herbalist D. doctor
33. The material used in pottery is known as _____
 A. clay B. soapstone
 C. cotton D. trees
34. The best day for washing clothes was _____
 A. Thursday B. Monday
 C. Wednesday D. Friday
35. Which day was rainy throughout _____
 A. Tuesday B. Thursday
 C. Friday D. Wednesday
36. Which day was cloudy in the morning and sunny in the afternoon?
 A. Tuesday B. Friday
 C. Thursday D. Wednesday
37. Who was the first president of Kenya? _____
 A. Mwai Kibaki B. Raila Odinga
 C. Jomo Kenyatta D. Kalonzo Musyoka
38. River Tana is the longest river in Kenya. It drains its water in _____
 A. Mt. Kenya B. Chania
 C. Abedare D. Indian ocean
39. The vegetation that grow in swamps is called _____
 A. bamboo B. papyrus reeds
 C. riverline D. shrubs
40. The vegetation that grows on its own is _____ vegetation.
 A. natural B. planted
 C. forest D. hills
41. Laws that guides us on how to behave are known as _____ laws.
 A. school B. moral
 C. guidance D. cultural

42. Children in the past were taught specialised skills through _____
 A. reading B. hunting
 C. apprenticeship D. writing
43. In the past children were taught by _____
 A. teachers B. elders
 C. pastor D. class teachers
44. People in the past worshipped God in _____
 A. churches B. mosques
 C. temples D. shrines
45. _____ marked the passage from childhood to adulthood.
 A. initiation B. birth
 C. festival D. ceremony
46. Which one of the following is not a basic need?
 A. food B. shelter
 C. clothing D. radio
47. We measure temperature with an instrument called _____
 A. rain gauge B. thermometer
 C. barometer D. windvane
48. Father, mother and children make a _____
 A. extended B. single-parent
 C. nuclear D. polygamous
49. People who come to see wild animals in our province are called _____
 A. tourists B. wardens
 C. police D. teachers
50. _____ was the payment made to the bride's parents for marriage.
 A. fees B. dowry
 C. fare D. rent
51. Growing of crops and keeping of animals is known as _____
 A. cash crop farming B. monocropping
 C. subsistence farming D. mixed farming
52. Chicken that are kept for meat are called _____
 A. layers B. chicks
 C. broilers D. beef
53. The reason why the Bantus migrated from their original land was to look for _____
 A. pasture B. land to cultivate
 C. water D. minerals
54. _____ keeps law and order in our country.
 A. police B. chief
 C. president D. M.P
55. The main means of transport in our province is _____
 A. railway B. air
 C. road D. water
56. Which one of the following is not a child right?
 A. education B. food
 C. medical care D. child abuse
57. Which means of communication was not used in the past? _____
 A. radio B. horns
 C. drums D. smoke
58. _____ is not a use of trees.
 A. making papers B. glass making
 C. making furniture D. making herbal medicines
59. Beef cattles are kept in large farms known as _____
 A. ranches B. paddocks
 C. sheds D. cattle dip
60. An area represented by a councillor is called _____
 A. constituency B. county
 C. ward D. location
- C.R.E**
61. According to creation story all animals, plants and human beings were created by _____
 A. nature B. God
 C. satan D. Adam
62. God told _____ and his family to build the Ark.
 A. Adam B. Abraham
 C. Noah D. Jacob
63. Jesus fed _____ thousand people using two fish and five loaves of bread.
 A. 5000 B. 4000 C. 12000 D. 6000
64. Which one of the following shows we are caring for our environment _____
 A. going to church on Sunday
 B. repenting our sins
 C. cleaning the school compound and weeding
 D. obeying our parents
65. Jesus raised _____ after he had been buried for 4 days.
 A. Jairus daughter B. Lazarus
 C. Zachaeus D. Tabitha
66. Three of the following are qualities of a good leader. Which one is not?
 A. humble B. polite
 C. caring D. proud
67. "My house shall be called a house of prayer but you have made it a den of robbers". Who said these words? _____
 A. Peter B. Jesus
 C. God D. priest
68. When Jesus was baptised the Holy spirit came upon him in the form of a _____
 A. pigeon B. an eagle
 C. fire D. dove
69. _____ was the mother of Samuel.
 A. Mary B. Hannah
 C. Elizabeth D. Esther

70. Jesus prayed in the garden of ____
 A. Genesaret B. Gethsemane
 C. Aden D. Golgotha
71. Jesus resurrected on the ____ day.
 A. first B. second
 C. fourth D. third
72. A good shepherd does the following except ____
 A. protect his animals
 B. feed his animals
 C. kill his animals
 D. be ready to die for his animals
73. The story of creation is found in the book of ____
 in the bible.
 A. Matthew B. Genesis
 C. Mark D. Exodus
74. Who announced the birth of Jesus to Mary ____
 A. God B. Joseph
 C. Angel Gabriel D. David
75. We can show love to our parents by being ____
 A. obedient B. lazy
 C. fearful D. dishonest
76. The first four books in the New Testament are called ____
 A. Gospels B. Numbers
 C. Letters D. Prophets
77. Prophet ____ prayed for a rich woman in Shunem
 to have a son.
 A. Elijah B. Isaiah
 C. Elisha D. Samuel
78. The following were brothers ____
 A. James and John B. Matthew and Peter
 C. Judas and Thomas D. Philip and Levi
79. Jesus healed ten people who were suffering from ____
 A. cold B. fever
 C. blindness D. leprosy
80. Jesus calmed the storm in the sea. This shows he
 had power over?
 A. sea B. disciples
 C. nature D. boat
81. Jane a Std. 3 girl sometimes come to school
 without food. As a christian the best thing I can
 do for her is to ____
 A. tell her to carry money to school
 B. tell her to steal food from others
 C. share my food with her
 D. tell her to go and play
82. Adam and Eve were first living in a beautiful
 garden known as ____
 A. Gethsemane B. Aden
 C. Olives D. Golgotha
83. There are ____ books in the Old Testament.
 A. 66 B. 39
 C. 27 D. 166
84. ____ was sold by his brothers.
 A. Samuel B. Jacob
 C. Solomon D. Joseph
85. One of the following can be done for our country.
 Which one is correct?
 A. pray for our leaders
 B. burn other people's houses
 C. fight our bad neighbours
 D. cut down trees for firewood
86. Jesus turned water into wine in a small village in
 Galilee known as ____
 A. Jericho B. Bethsaida
 C. Cana D. Jopa
87. Jesus was given 3 gifts by ____
 A. wisemen B. shepherds
 C. Herod D. priests
88. "Our father who is at heaven". This is a beginning
 of a prayer which is known as ____
 A. Praise
 B. Lords passover
 C. Lords prayer
 D. Apostles creed
89. In African traditional society small boys did one
 of the following. Which one? ____
 A. hunted wild animals
 B. build houses for the family
 C. looked after sheep
 D. cooked for the family
90. Christians are helped by the ____
 A. Holy spirit B. parents
 C. leaders D. food