



Code 0022015

# TIMER NATIONAL SERIES

## EVALUATION TEST

# {4}

### STD 4 SOCIAL STUDIES & C.R.E

**READ THESE INSTRUCTIONS CAREFULLY**

1. You have been given this question paper and a separate answer sheet. The question paper contains 90 questions.
2. Do not write on this question paper.
3. When you have chosen your answer, mark it on the ANSWER SHEET, not in this question paper.

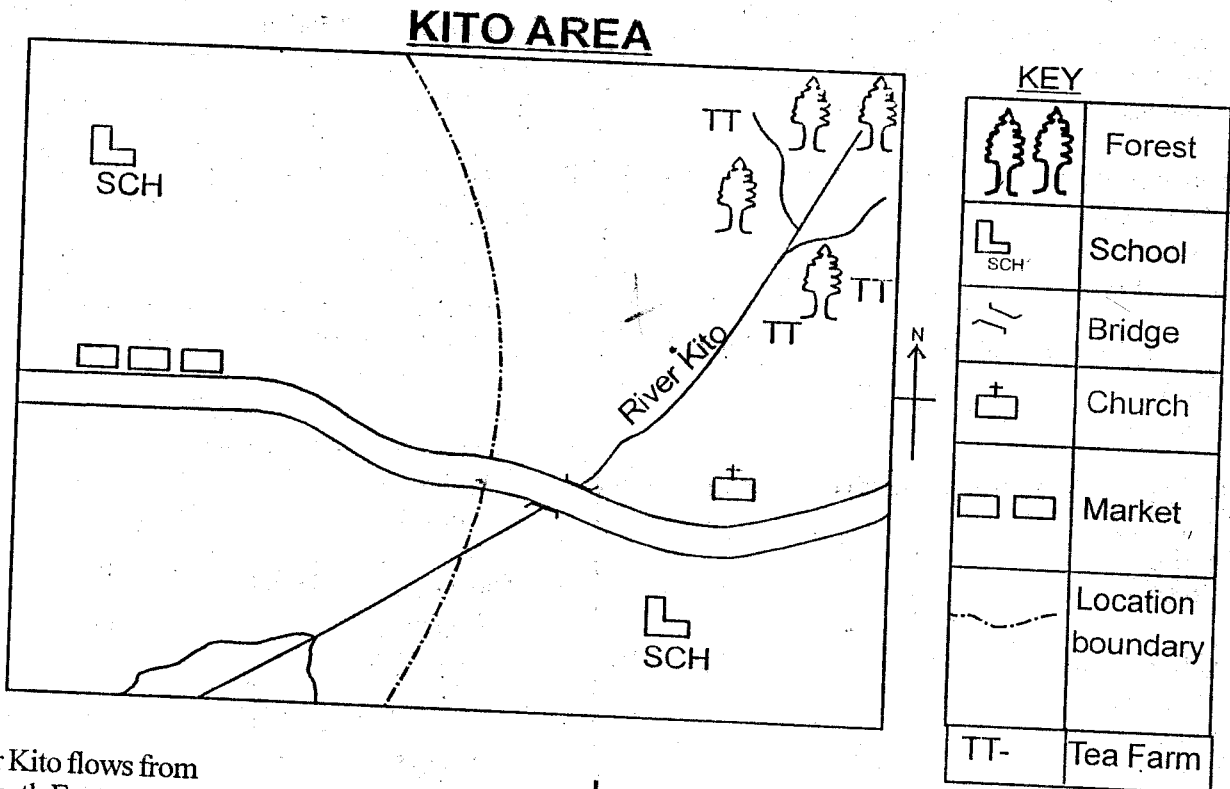
**HOW TO USE THE ANSWER SHEET**

4. Make sure that you have written on the answer sheet.

YOURNAME \_\_\_\_\_

NAME OF YOUR SCHOOL \_\_\_\_\_

Time: 2 hrs. 15 mins



1. River Kito flows from
 

A. North East	B. North West
C. South East	D. South West
2. Kito area has \_\_\_\_ locations.
 

A. 1	B. 2
C. 3	D. 4
3. People in Kito area are administered by a
 

A. governor	B. D.C
C. chief	D. D.O
4. The religion of the people in Kito area is
 

A. traditionalists	B. paganism
C. Christianity	D. Islamic
5. Which cash crop is grown by the people of Kito area?
 

A. Maize	B. Sisal
C. Tea	D. Cotton
6. How many tributaries does River Kito have?
 

A. 2	B. 3
C. 1	D. 4
7. Which feature is formed by River Kito at the mouth?
 

A. Confluence	B. Delta
C. Tributary	D. Stream
8. Which of the following is NOT a physical feature?
 


A. Hills	B. Mountains
C. Swamps	D. Buildings
9. Rivers that flow during the rainy season only are called
 


A. seasonal rivers	B. permanent rivers
C. natural rivers	D. salty rivers
10. A \_\_\_\_ is a raised flat land.
 

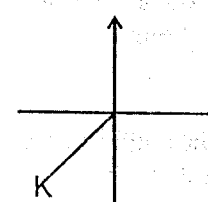
A. plain	B. hill
C. plateau	D. mountain
11. Which of the following is NOT a cardinal point in a compass?
 

A. North	B. East
C. South	D. North East

12. Crops grown for sale are called  
 A. food crops                      B. subsistence crops  
 C. cash crops                        D. staple food
13. Chicken reared for eggs are called  
 A. dairy                                B. beef  
 C. broilers                            D. layers
14. Temperature is measured in \_\_\_\_\_ units.  
 A. mm                                  B. km  
 C. cm                                  D. °C
15. Which of the following liquid is found in a thermometer?  
 A. Water                                B. Mercury  
 C. Paraffin                            D. Milk
16. The vegetation that grows along rivers is known as  
 A. bamboo                              B. scrub  
 C. savannah                          D. riverine
17. The instrument that is used to show the direction of wind is called  
 A. windvane                            B. windsock  
 C. thermometer                        D. rain gauge
18. \_\_\_\_\_ colour represents peace in our National Flag.  
 A. Black                                B. White  
 C. Green                                D. Red
19. Who among the following is NOT a member of a nuclear family?  
 A. Father                                B. Mother  
 C. Children                              D. Aunt
20. Which one of the following is NOT a cash crop grown in our country?  
 A. Tea                                    B. Maize  
 C. Coffee                                D. Sisal
21. Many sub-counties form a  
 A. district                                B. sub-county  
 C. county                                D. country
22. Planting of trees in a place where they had been cut is  
 A. afforestation                        B. deforestation  
 C. forestry                                D. re-afforestation
23. Animals kept for meat are called  
 A. dairy                                B. broilers  
 C. beef                                    D. layers
24. The point of compass between North and West is called  
 A. North East                            B. North West  
 C. South                                 D. West
25. Small rivers that join the main river are called  
 A. streams                                B. junctions  
 C. deltas                                 D. tributaries
26. \_\_\_\_\_ is the way people spread in a place.  
 A. Population                            B. Population density  
 C. Population distribution            D. Population pressure
27. Which of the following is NOT an element of a good citizen?  
 A. Loyalty                                B. Fairness  
 C. Honesty                                D. Untrustworthy
28. Bantus originated from \_\_\_\_\_ forest.  
 A. Congo                                 B. Kenya  
 C. Elgon                                 D. Aberdares
29. The first president of Kenya was  
 A. Moi                                    B. Kibaki  
 C. Uhuru                                 D. Kenyatta
30. Our country is divided into \_\_\_\_\_ counties.  
 A. 8                                        B. 47  
 C. 210                                    D. 290
31. Beef animals are kept in large farms called  
 A. paddocks                              B. stalls  
 C. green houses                         D. ranches
32. The counting of people in a country is called  
 A. population data                      B. election  
 C. census                                 D. population counting
33. Where do Muslims worship?  
 A. Church                                B. Synagogue  
 C. Temple                                D. Mosque
34. Supplying crops with water artificially is known as  
 A. irrigation                              B. sprayig  
 C. swimming                              D. mulching
35. \_\_\_\_\_ is the trade of exchanging goods with goods.  
 A. Domestic                              B. Barter  
 C. Money                                 D. Currency
36. \_\_\_\_\_ is the quickest form of transport.  
 A. Air                                     B. Water  
 C. Road                                  D. Railway
37. The highest mountain in Kenya is \_\_\_\_\_  
 A. Mt. Elgon                              B. Mt. Kenya  
 C. Mt. Marsabit                         D. Mt. Kulal
38. On 12th December we celebrate  
 A. Mashujaa day                        B. Madaraka day  
 C. Jamhuri day                         D. Labour day
39. A group of people who come from a common ancestor form a  
 A. tribe                                    B. community  
 C. age group                              D. clan
40. An area represented by a member of parliament is known as

- A. ward  
C. location
- B. county  
D. constituency
41. Medicinemen treated people using  
A. tablets  
C. syrup
- B. herbs  
D. skins
42. All the following are Bantus EXCEPT;  
A. Maasai  
C. Agikuyu
- B. Akamba  
D. Aembu
43. In Kenya the MAIN tourist attraction is  
A. mountains  
C. wildlife
- B. beaches  
D. culture
44. The average weather condition of a place is known as  
A. climate  
C. temperature
- B. weather  
D. wind
45. What does the weather element represent?
- 


- A. Cloudy  
C. Windy
- B. Rainy  
D. Sunny
46. The rainfall that occurs near large water bodies is  
A. relief  
C. cyclonic
- B. convectional  
D. short rainfall
47. Which of the following is traditional form of communication?  
A. Radio  
C. Mobile phone
- B. Television  
D. Smoke
48. The MAIN food for most Kenyans is  
A. coffee  
C. fish
- B. potatoes  
D. maize
49. People who walk along the road on foot are called  
A. walkers  
C. cyclists
- B. drivers  
D. pedestrians
50. Deforestation is  
A. planting of trees.  
C. maintaining trees.
- B. cutting down trees.  
D. growing trees.
51. Luos, Kalenjins, Maasai belong to \_\_\_\_\_ language group.  
A. Cushites  
C. Nilotes
- B. Bantus  
D. Arabs
52. The current deputy president of Kenya is  
A. Raila  
C. Ruto
- B. Uhuru  
D. Kalonzo
53. Moving air is called  
A. air  
C. weather
- B. climate  
D. wind

54. The Kenyan flag has \_\_\_\_\_ colours.  
A. 4  
C. 5
- B. 3  
D. 2
55. General elections in Kenya are held after every \_\_\_\_\_ years.  
A. 10  
C. 4
- B. 2  
D. 5
56. Merino sheep is MAINLY kept for  
A. meat  
C. wool
- B. milk  
D. fur
57. Keeping of birds is called \_\_\_\_\_ farming.  
A. livestock  
C. piggery
- B. poultry  
D. mixed
58. Who is the head of a county?  
A. Senator  
C. Governor
- B. President  
D. Speaker
59. The capital city of Kenya is  
A. Nairobi  
C. Nakuru
- B. Kisumu  
D. Mombasa
60. The point marked K is
- 
- A. NE  
C. SW
- B. SE  
D. NW

### C.R.E

61. Three of the following things were created by God. Which one was NOT?  
A. Clouds  
C. Roads
- B. Rain  
D. Wind
62. Who built the ark?  
A. Jesus  
C. Peter
- B. Noah  
D. Abraham
63. Who among the following was NOT one of the sons of Noah?  
A. Ham  
C. Japheth
- B. Shem  
D. Isaac
64. Prophet \_\_\_\_\_ warned leaders who hate what is good that God would not listen to their prayer.  
A. Hosea  
C. Micah
- B. Elijah  
D. Isaiah
65. A person who is orderly, hardworking and obedient is a \_\_\_\_\_ leader.  
A. good  
C. selfish
- B. bad  
D. unfaithful

