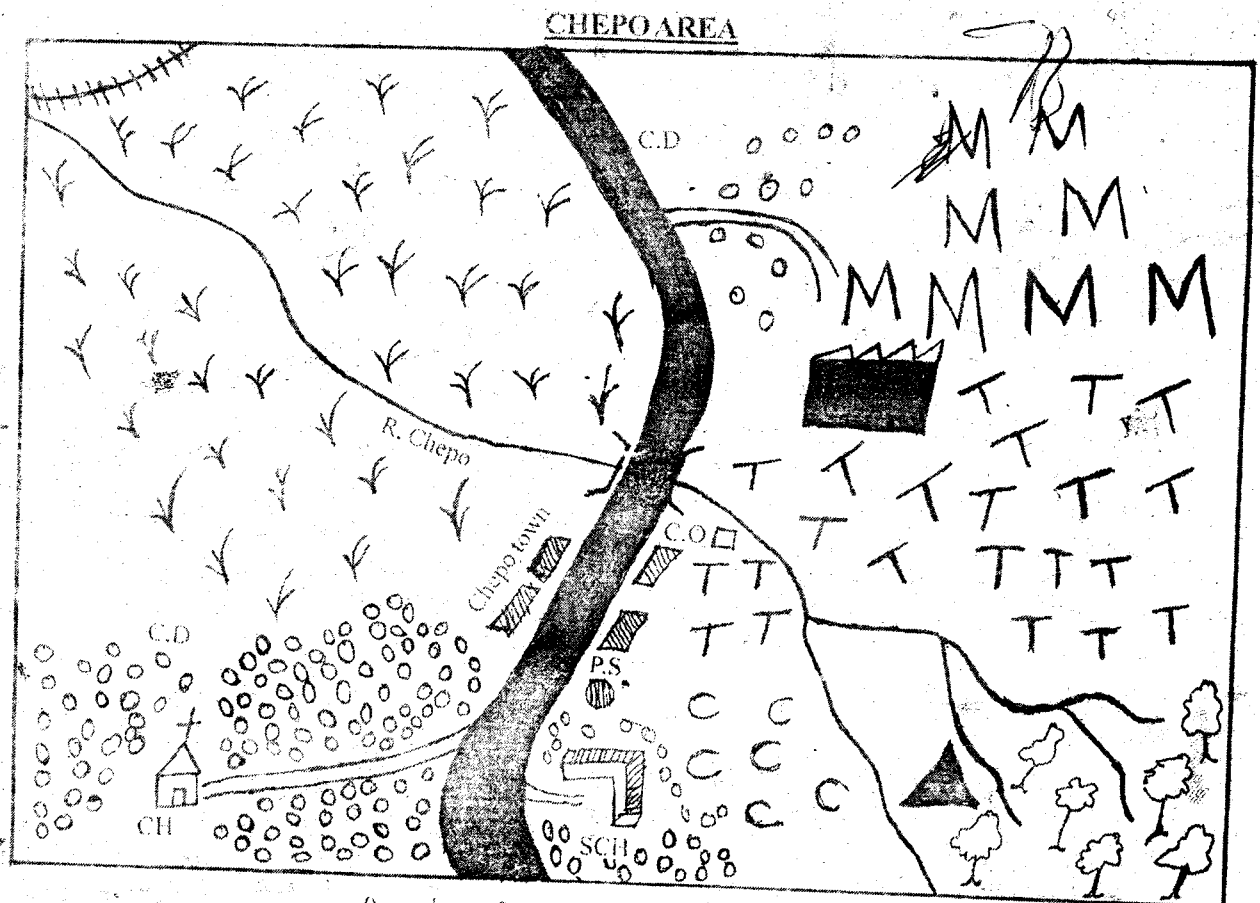


KENYA LINK M.A.3 SCHOOL BASED EXAM

SOCIAL STUDIES / CRE STD 4 TERM III 2012

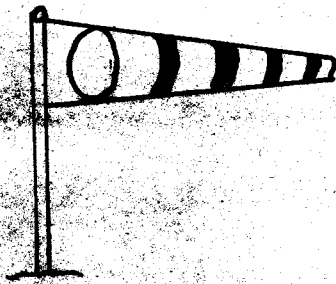


KEY	Scale	0 1 2 3 4 5 6 7 8 9 KM
Forest Grass Maize C.O - County Offices	Hill Factory P.S - Police Station	Tarmac road Murrum road School C.D - Cattle dip CH - Church TT - Tea Houses CC - Coffee River Railway line

Use the map of Chepo Area to answer questions

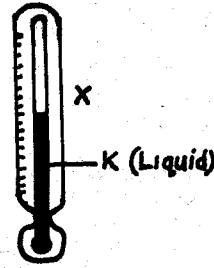
1. The people of Chepo area are likely to be _____
 A. Muslims B. Hindus
 C. Christians D. Pagans
2. The highest point in Chepo area is likely to be the
 A. North West B. South East
 C. North East D. South
3. The head of the Chepo area is _____
 A. Senator B. Chief
 C. Governor D. None
4. The main means of transport in Chepo area is _____
 A. Road B. Air C. Water D. Railway
5. The factory in Chepo area is likely to process _____
 A. Coffee B. Maize
 C. Tea D. Phyrethrum
6. River Chepo flows from _____ of the map.
 A. South
 C. East
 B. North West
 D. South East
7. What is the evidence of cattle keeping in the map?
 A. River
 C. Railway line
 B. Cattle dip
 D. Town
8. Kenya has _____ counties
 A. Eight
 C. Forty seven
 B. Twenty seven
 D. Many
9. A compass has _____ main points.
 A. 8 B. 4 C. 2 D. 10
10. Moving air is called _____
 A. Rain B. Moisture C. Oxygen D. Wind
11. Which is the longest river in Kenya?
 A. River Nzoia B. River Tana
 C. River Nyando D. River Athi
12. Which is the highest mountain in Kenya?
 A. Mt. Marsabit B. Mt. Kulal

- C. Mt. Kenya D. Mt. Kilimanjaro
13. The ocean to the South East of Kenya is known as
 A. Turkana B. Victoria
 C. Red sea D. Indian
14. Rivers flows to the following except one. Which one?
 A. Hills B. Swamps
 C. Lakes D. Oceans
15. Health and moorland vegetation is mainly found at _____
 A. Lakes B. Swamps
 C. Hills D. Mountains
16. Which one of these is *not* an element of weather?
 A. Temperature B. Wind
 C. Rainfall D. Altitude
17. Riverine forests are found along _____
 A. Ocean B. Rivers C. Lakes D. Hills
18. Another name for grassland vegetation is _____
 A. Forest B. Desert
 C. Savannah D. Scrub
19. Which of the following is not an importance of vegetation.
 A. Vegetation helps in formation of rain.
 B. Vegetation creates hideouts for gangs.
 C. Vegetation helps to stop soil erosion.
 D. It reduces water loss through evaporation.
20. Beaches at the Coast are usually covered with _____
 A. Reeds B. Trees C. Sand D. Stones

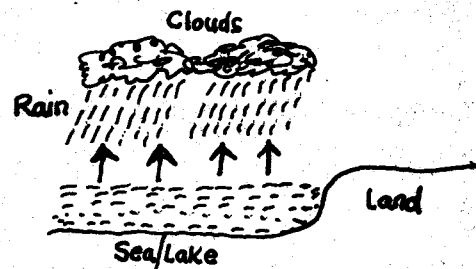


21. What is the name of this weather instrument?
 A. Thermometer B. Raingauge
 C. Windvane D. Windsock
22. The capital city of Kenya is _____
 A. Nairobi B. Eldoret
 C. Kisumu D. Mombasa
23. Rivers which flows throughout the year are known as _____
 A. Active rivers B. Permanent rivers
 C. Semi permanent rivers D. Dormant rivers
24. Temperature is measured in _____
 A. Kilometres B. Centimetres
 C. Degrees celcius D. Kilograms

25. The part marked X is _____



- A. Wood B. Glass
 C. Plastic D. Polythene paper
26. The liquid marked K is called _____
 A. Paraffin B. Milk
 C. Mercury D. Petrol
27. The colour of liquid K is _____
 A. White B. Red C. Yellow D. Black
28. The type of rainfall shown below is _____



- A. Relief B. Sea rainfall
 C. Convectional rainfall D. Lake rainfall

29. The Maasai, Samburu and Turkana are classified as?
 A. Bantus B. Nilotes
 C. Cushites D. Arabs
30. Which group is said to have migrated from Congo?
 A. Nilotes B. Cushites
 C. Bantus D. Europeans
31. Which is the most staple food in Kenya?
 A. Rice B. Wheat C. Maize D. Millet
32. Which is the cash crop among these?
 A. Cassava B. Cotton
 C. Millet D. Sorghum
33. In which year did Kenya attain its independence?
 A. 1963 B. 1964
 C. 1978 D. 1966
34. Growing of flowers and vegetables is called _____
 A. 1963 B. 1964
 C. 1978 D. 1966
34. Growing of flowers and vegetables is called _____
 A. Horticulture B. Substance
 C. Arable D. Mixed
35. Perishable goods are best transported using _____
 A. Railway transport B. Road transport

- C. Water transport D. Air transport
36. Most game parks are mostly found in _____
 A. Valleys B. Plains
 C. Deserts D. Mountains
37. Which is a traditional form of communication?
 A. Mobile phone B. Drum
 C. Radio D. Mail
38. Which of the following is apack animal?
 A. Buffalo B. Lion
 C. Elephant D. Donkey
39. In which year Kenya got new constitution?
 A. 2010 B. 2011
 C. 2005 D. 2012
40. People who come to see our wildlife are called _____
 A. Seers B. Visitors
 C. Tourists D. Foreigners
41. Which item is odd one out?
 A. Spear B. Hoe
 C. Cattle bell D. Umbrella
42. Agikuyu called their God _____
 A. Mulungu B. Mungu
 C. Ngai D. Enkai
43. Who was the first president of Kenya
 A. Odinga B. Kenyatta
 C. Kalonzo D. Kibaki
44. The traditional form of trade was called _____ trade
 A. Barter B. Currency
 C. Old D. Modern
45. The fastest and most expensive form of transport is _____ transport
 A. Water B. Air
 C. Road D. Railway
46. In Kenya people have right to _____
 A. Die B. Hide
 C. Security D. Pollution
47. Rules followed in a country by people are called _____
 A. Commandments B. Regulations
 C. Laws D. Rights
48. In the past people made clothes from _____
 A. Trees B. Skins
 C. Leaves D. Grass
49. Traditional way of life is known as _____
 A. Fashion B. Old life
 C. Culture D. None
50. Areas with many people are said to be _____
 A. Densely populated B. Sparsely populated
 C. Least populated D. Most populated
51. Cattle kept for meat are called _____
 A. Dairy B. Beef
 C. Poultry D. Broilers
52. People who live in the wind ward side of a mountain are likely to be
 A. Hunters B. Gathers
- C. Farmers D. Herdsmen
53. People who were traditionally initiated together formed _____
 A. An age-group B. A clan
 C. A generation D. Village
54. Height above sea level is known as _____
 A. Longitude B. Altitude
 C. Latitude D. Meridian
55. Goods sold to other countries are known as _____
 A. Imports B. Services
 C. Exports D. Markets
56. Which is not a quality of a good citizen?
 A. Promoting unity B. Refusing bribes
 C. Promoting robbery D. Promoting peace
57. The following are uses of trees except _____
 A. They attract rain
 B. They provide us with minerals
 C. They provide timber
 D. They provide medicine
58. One can get HIV and AIDs through _____
 A. Sharing food B. Smiling at someone
 C. Sexual intercourse D. Shaking hands
59. Rules made by a community to help members regulate their behaviour are known as _____
 A. Immoral laws B. Moral laws
 C. Bad laws D. Oppressive laws
60. The official counting of people is known as _____
 A. Nomination B. Election
 C. Head county D. Census
- CRE**
61. How many people were saved during the great flood at the time of Noah?
 A. 8 B. 6 C. 4 D. 10
62. The father of Samuel was called _____
 A. Joseph B. Eli
 C. Elkanah D. Jacob
63. A good church leader should not be _____
 A. Honest B. Respectful
 C. A drunkard D. Nature in faith
64. Noah was given a duty to build _____
 A. Industry B. Ark
 C. Shrine D. Temple
65. At Cana Jesus _____
 A. Raised Lazarus to life
 B. Was baptised
 C. Changed water to wine
 D. Healed a Roman officer servant
66. Golgotha means _____
 A. Place of suffering
 B. Place of skull
 C. Place of repentance
 D. Place of good hope

67. Jesus teaches us to be _____
 A. Rude B. Bad
 C. Obedient D. Proud
68. Unselfishness means ?
 A. Being unkind to others
 B. Being selfish to others
 C. Being unloving to others
 D. Considering the needs of others
69. When Moses went to Midian he looked after goats and sheep that belonged to _____
 A. Abraham B. Jethro
 C. Laban D. Jacob
70. The paralysed man was taken to the room where Jesus was through the _____
 A. Door B. Roof
 C. Window D. Crack on the wall
71. Jesus wept during the raising to life of _____
 A. Jairus daughter
 B. Son of the window of Nain
 C. Lazarus
 D. Dorcas
72. When Jesus fed five thousand people there were some leftovers. How many basket were filled with leftovers ?
 A. 10 B. 6 C. 12 D. 4
73. Which king of Israel killed Goliath?
 A. Ahab B. David
 C. Saul D. Solomon
74. The ten commandments were given to _____
 A. Abraham B. Peter
 C. Moses D. Aaron
75. Who was the first Christian martyr ?
 A. Paul B. Stephen
 C. Peter D. John
76. Believers of Jesus received the Holy Spirit on the day of _____
 A. Christmas B. Pentecost
 C. Crucification D. Jesus
77. According to Isaiah 9:6 Jesus was not referred to as
 A. Wonderful counsellor
 B. Prince of peace
 C. King of peace
 D. Eternal father
78. What happened to believers of Jesus at Antioch?
 A. They were all persecuted
 B. They all received the gifts of the holy spirit
 C. They were first called Christians
 D. They were all killed by Herod
79. Jesus grew up in _____
 A. Jerusalem B. Bethlehem
 C. Nazareth D. Bethany
80. By Jesus walking on water, it proved that he had
 A. Magical powers
 B. Power to forgive sins
 C. Power over nature
 D. Power over death
81. The last book in the Bible is _____
 A. Genesis B. Exodus
 C. Luke D. Revelation
82. Which of the following is a bad effect of weather?
 A. Rain provides water to drink
 B. Wind cools our bodies
 C. Drought causes starvation
 D. The sun dries our clothes
83. Who among the following was a son of Noah ?
 A. Shem B. Jacob C. Esau D. Isaac
84. The first woman to be created by God was ?
 A. Debohar B. Sarah
 C. Eve D. Miriam
85. Man was created in the _____
 A. Shape of a monkey B. Vision of a woman
 C. Image of God D. Image of a woman
86. Israelites were led into the promised land by _____
 A. Mosses B. Aaron
 C. Joshua D. Gideon
87. When serving others we should do it _____
 A. Complaining B. Joyfully
 C. Sadly D. Only once
88. When Jesus was born Mary wrapped Him in strips of cloth and laid Him in a ?
 A. Comfortable bed B. Sofa set
 C. Manger D. Beautiful basket
89. On which day did Jesus die after being crucified ?
 A. Monday B. Friday
 C. Sunday D. Saturday
90. Naomi's daughters-in-law were _____
 A. Ruth and Orpah B. Ruth and Dorcas
 C. Ruth and Lydia D. Orpah and Mary