

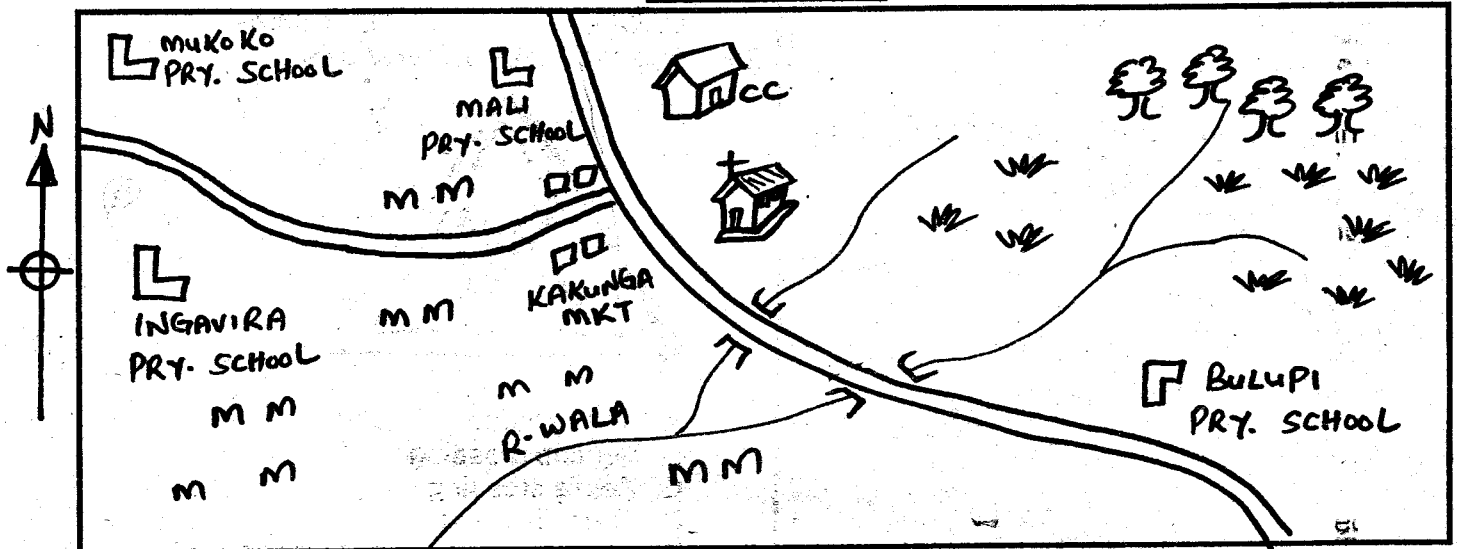
# KAKAMEGA COUNTY

## STANDARD FOUR TERM II - YEAR 2015


TIME: 2 HRS 15 MIN

### SOCIAL STUDIES & C.R.E.

#### WALA AREA




KEY-



School



Market



Road



Maize



Forest



Chief's camp



CC

Bridge



River

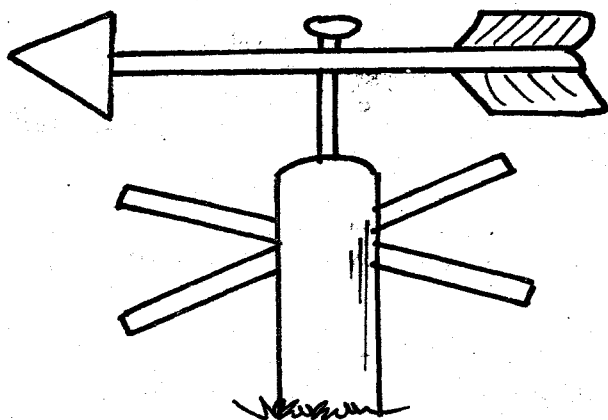


Tea

#### Study the map of Wala Area to answer questions 1-7.

1. The people of Wala area are :  
A. Christians      B. Pagans  
C. Muslims      D. Hindus
2. How many bridges are there in Wala area?  
A. 5      B. 4  
C. 2      D. 1
3. The chief's camp is on \_\_\_\_\_ direction from the church  
A. North      B. East  
C. West      D. South
4. The river in Wala area is called \_\_\_\_\_  
A. Sio      B. Tala  
C. Wala      D. Sasala
5. The cash crop grown in Wala area is \_\_\_\_\_  
A. sunflower      B. sugarcane  
C. coffee      D. tea
6. How many schools are there in Wala area  
A. 3      B. 2  
C. 4      D. 5
7. The food crop grown in Wala area is  
A. Maize      B. Potatoes  
C. Cassava      D. Beans
8. Which of the following is not a physical feature?  
A. Hill      B. River  
C. School      D. Valley
9. Kenyan flag has \_\_\_\_\_ colours  
A. 2      B. 4  
C. 3      D. 5
10. Rivers that dry up during the dry season are called \_\_\_\_\_  
A. dry rivers      B. seasonal rivers  
C. permanent rivers      D. valley rivers
11. Small rivers that join main rivers are called  
A. streams      B. ranges  
C. tributaries      D. distributaries
12. Which of the following cash crops is not grown in Kakamega county?  
A. Rice      B. Sugarcane  
C. Coffee      D. Tea
13. Areas with many people are said to be \_\_\_\_\_ populated  
A. densely      B. sparsely  
C. moderately      D. thinly
14. The largest river in Kakamega county is  
A. Yala      B. Nzoia  
C. Lusumu      D. Sio
15. Buying and selling of goods is called \_\_\_\_\_  
A. transport      B. barter  
C. trade      D. farming
16. The main trees found in savanna woodland are  
A. Pine      B. Mvule  
C. Acacia      D. Camphor

17. The vegetation that grow along the rivers form forest called \_\_\_\_\_  
 A. riverine forests      B. natural forests  
 C. planted forests      D. mangrove forests
18. Women who helped mothers to give birth were called \_\_\_\_\_  
 A. Apprentices  
 B. Herbalistd  
 C. Midwives  
 D. Witchcraft
19. Which of the following musical instruments was played by the people in our county?  
 A. Guitar                      B. Piano  
 C. Keyboard                  D. Eshiriri
20. Which of the following districts is not found in Kakamega county?  
 A. Matungu                      B. Utere  
 C. Samia                         D. Matete
21. Long chain of Hills are called \_\_\_\_\_  
 A. plains                              B. ranges  
 C. highlands                      D. mountains
22. Which one of the following is a clan of the Abaluhya  
 A. Wanga                              B. Teso  
 C. Kipsigis                         D. Nandi
23. The name given to children who were born as twins was called \_\_\_\_\_  
 A. Wawire                              B. Mukhwana  
 C. Makokha                         D. Tsisiche
24. People who kill wild animals illegally are called  
 A. hunters                              B. thieves  
 C. thugs                                 D. poachers
25. The weather instrument shown below is used to measure



- A. strength of wind  
 B. speed of wind  
 C. direction of wind  
 D. temperature
26. Which one of the following is not a cardinal point  
 A. South West                      B. North  
 C. West                                 D. East

27. Which one of the following is not a county in Kenya?  
 A. Siaya                                 B. Vihiga  
 C. Likuyani                             D. Busia
28. Which of the following language groups came to Kakamega county as traders  
 A. Cushites                              B. Asians  
 C. Bantu                                 D. Nilotes
29. The road sign below shows



- A. Road junction  
 B. Vehicle crossing  
 C. Zebra crossing  
 D. Train crossing
30. Papyrus reeds are used to make \_\_\_\_\_  
 A. ropes                                 B. mats  
 C. cooking stick                         D. pots
31. Which of the following is not a moral value taught at home  
 A. stealing                                 B. respect  
 C. obedience                                 D. honest
32. Adults who have good moral values are called  
 A. kings                                 B. leaders  
 C. role models                                 D. teachers
33. People who treat sick people using parts of plants are called \_\_\_\_\_  
 A. herbalists  
 B. nurses  
 C. midwives  
 D. witchdoctors
34. Planting of trees in areas that were once forests is called \_\_\_\_\_  
 A. agriculture  
 B. agroforestry  
 C. re - afforestation  
 D. cultivation
35. Which of the following trees is found in natural forests  
 A. Mvule  
 B. Cypress  
 C. Pine  
 D. Eucalyptus
36. Game parks are managed by the Government through the \_\_\_\_\_  
 A. police  
 B. rangers  
 C. Kenya wildlife service  
 D. Ward administrators

37. People use \_\_\_\_\_ to transport things on the road  
 A. ship  
 B. aeroplanes  
 C. train  
 D. lorries
38. Which of the trading centres has a market day on Wednesday and Saturday?  
 A. Lubao                      B. Kakamega  
 C. Malava                      D. Butali
39. Which of the following Kenyan currency is in form of coins?  
 A. sh 100                      B. sh 40  
 C. sh 500                      D. sh 1000
40. The exchange of goods for other goods is known as \_\_\_\_\_  
 A. Money trade  
 B. Barter trade  
 C. Currency trade  
 D. Boda boda trade
41. The people who made items from iron were called \_\_\_\_\_  
 A. blacksmith's  
 B. herbalists  
 C. missionaries  
 D. carpenters
42. Pottery involved the making of various items from  
 A. stones                      B. sand  
 C. clay                      D. gold
43. Which of the following is not a tourist attraction in Kakamega county?  
 A. The crying stone  
 B. Bull fighting  
 C. Kakamega forest  
 D. Coastal beach
44. Which of the following is not a traditional industry  
 A. pottery  
 B. weaving  
 C. iron work  
 D. glass making
45. Which of the following is an early form of communication  
 A. Use of smoke              B. Letters  
 C. Telegram                      D. Mobile
46. Chicken kept for meat are called \_\_\_\_\_  
 A. broilers                      B. layers  
 C. beef                      D. dairy
47. Which of the following ceremonies is carried out in order to prepare young for adulthood?  
 A. Harvest festival  
 B. Initiation  
 C. Birth ceremony  
 D. Naming ceremony
48. Forests which grow on their own are called  
 A. Planted forests  
 B. Man - made forests  
 C. Agroforestry  
 D. Natural forests
49. Which of the following forests is not found in Kakamega county?  
 A. Kaimosi forest  
 B. Malava forest  
 C. Kakamega forest  
 D. Chesero forest
50. Which of the following sugar companies is not found in Kakamega county?  
 A. Mumias sugar company  
 B. Nzoia sugar company  
 C. Butali sugar company  
 D. West Kenya sugar company
51. The growing of flowers, fruits and vegetables is called \_\_\_\_\_  
 A. cash crop  
 B. food crop  
 C. food crop  
 D. plantation farming
52. Sunflower seeds are processed to produce  
 A. sange                      B. flour  
 C. cooking                      D. beverage
53. Which of the following crops is both a food crop and cash crop in settlement schemes?  
 A. Sugarcane                      B. Cassava  
 C. Coffee                      D. Maize
54. Dairy cattle are mainly kept to provide \_\_\_\_\_  
 A. manure                      B. milk  
 C. meat                      D. mutton
55. Meat from fish is a rich source of \_\_\_\_\_  
 A. protein                      B. fats  
 C. carbohydrates              D. vitamins
56. Keeping of fish in ponds is called \_\_\_\_\_  
 A. fish mongering  
 B. fish drying  
 C. fish farming  
 D. trawling
57. The keeping and feeding of dairy cattle in special structures is known as  
 A. herding                      B. tethering  
 C. zero grazing                      D. paddocking
58. Which of the following is a beverage crop?  
 A. Sugarcane                      B. Tea  
 C. Cotton                      D. Rice
59. The head of a county is a \_\_\_\_\_  
 A. president                      B. governor  
 C. cabinet secretary              D. MCA
60. Madaraka day is celebrated on \_\_\_\_\_ every year  
 A. 1st June                      B. 1st May  
 C. 20th October                      D. 12th December

**SECTION II**  
**CHRISTIAN RELIGIOUS EDUCATION**

61. God created all animals in the sea, land and air. We should take care of them by \_\_\_\_  
A. pruning them                      B. keeping them clean  
C. weeding them                      D. overgrazing them
62. God created the world in six days and rested on the seventh day which He blessed and set apart as \_\_\_\_  
A. Sunday                              B. Saturday  
C. holiday                                D. Sabbath
63. \_\_\_\_\_ means God with us.  
A. Immanuel                            B. Saviour  
C. Jesus                                  D. IAM
64. David killed Goliath because he had \_\_\_\_\_ in the God of Israel.  
A. courage B. strength C. faith                      D. life
65. Who among the following patriarchs was the father of faith?  
A. Joseph B. Abraham C. Moses D. Isaac
66. The businesswoman in Philippi who was baptised by Paul was \_\_\_\_  
A. Tabitha B. Dorcas C. Apollo                      D. Lydia
67. Which of the following did not happen during the birth of Jesus ?  
A. Jesus was laid on a manger  
B. Shepherds visited Jesus  
C. Mary was visited by an angel  
D. Angels sang praises to God
68. The window of Zarepath showed kindness to prophet \_\_\_\_\_ by providing him with food.  
A. Elijah                                B. Moses  
C. Jeremiah                              D. Daniel
69. Jesus promised the disciples \_\_\_\_\_ before He ascended to heaven.  
A. Holy spirit                            B. life                                    C. love                                    D. money
70. King \_\_\_\_ acted unfairly when he took Naboth's land.  
A. Saul B. Jezebel C. Ahab D. Solomon
71. Which is a bad effect of weather?  
A. Rain makes plants to grow  
B. Floods cause destruction  
C. Wind is used to make boats sail  
D. Water is used to wash clothes
72. \_\_\_\_\_ and \_\_\_\_\_ were brothers.  
A. John, Peter                            B. Andrew, John  
C. Simon, Andrew                      D. James, Simon
73. Jesus fed five thousand people with \_\_\_\_  
A. five fish and two loaves  
B. two fish and five loaves  
C. three fish and two loaves  
D. two fish and two loaves
74. Jesus said the house of God is a house of \_\_\_\_  
A. prayers                                B. Holy spirit  
C. thieves                                 D. God
75. When Jesus sent His disciples , He told them to carry \_\_\_\_  
A. food                                    B. clothes                                C. nothing                                D. water
76. Perfect \_\_\_\_\_ drives out fear.  
A. faith                                    B. love                                    C. hope                                    D. hate
77. When we follow Jesus we make God \_\_\_\_  
A. happy                                  B. sad                                    C. holy                                    D. love
78. Who were the parents of John the Baptist?  
A. Abraham and Sarah  
B. Elkanah and Hannah  
C. Elizabeth and Zachariah  
D. Adam and Eve
79. Which one of the following is not good for our health?  
A. Meat                                  B. Milk                                  C. Fruits                                D. Bhang
80. \_\_\_\_\_ came to bring peace to the world.  
A. God                                      B. Adam  
C. Jesus                                    D. Holy spirit
81. Samuel served God in the temple under priest \_  
A. Elikanah                                B. Eli  
C. Abaraham                              D. Moses
82. Judas, one of the twelve disciples betrayed Jesus. This act shows that Judas was \_  
A. kind                                      B. unselfish  
C. hardworking                            D. selfish
83. When Jesus was washing His disciples' feet, one of them had refused to be washed. He was  
A. Andrew                                B. John  
C. Peter                                    D. James
84. Which one of the following is a fruit of the Holy spirit ?  
A. Love                                    B. Unkindness  
C. Selfishness                            D. Hatred
85. Jesus went to pray in the garden of \_\_\_\_\_ where He sweat drops like blood.  
A. Eden                                    B. Gethsemane  
C. Egypt                                  D. Sinai
86. Jesus told the rich young man to to sell everything and follow Him. From this we learn that a christian should \_\_\_\_  
A. be sad                                  B. forgive                                C. share                                  D. hope
87. \_\_\_\_\_ laughed at Hannah because she did not have a child.  
A. Martha                                B. Elikanah                              C. Peninah                                D. Eli
88. Jesus washed His disciples feet as a sign of \_\_\_\_  
A. faith                                    B. humility  
C. courage                                D. kindness
89. One of the following is not a quality of a good leader . Which one ?  
A. He is kind  
B. He is honest  
C. He talks about other people  
D. He does not love money
90. Who among the following is not a church leader?  
A. Chief                                    B. Priest  
C. Bishop                                 D. Pastor