

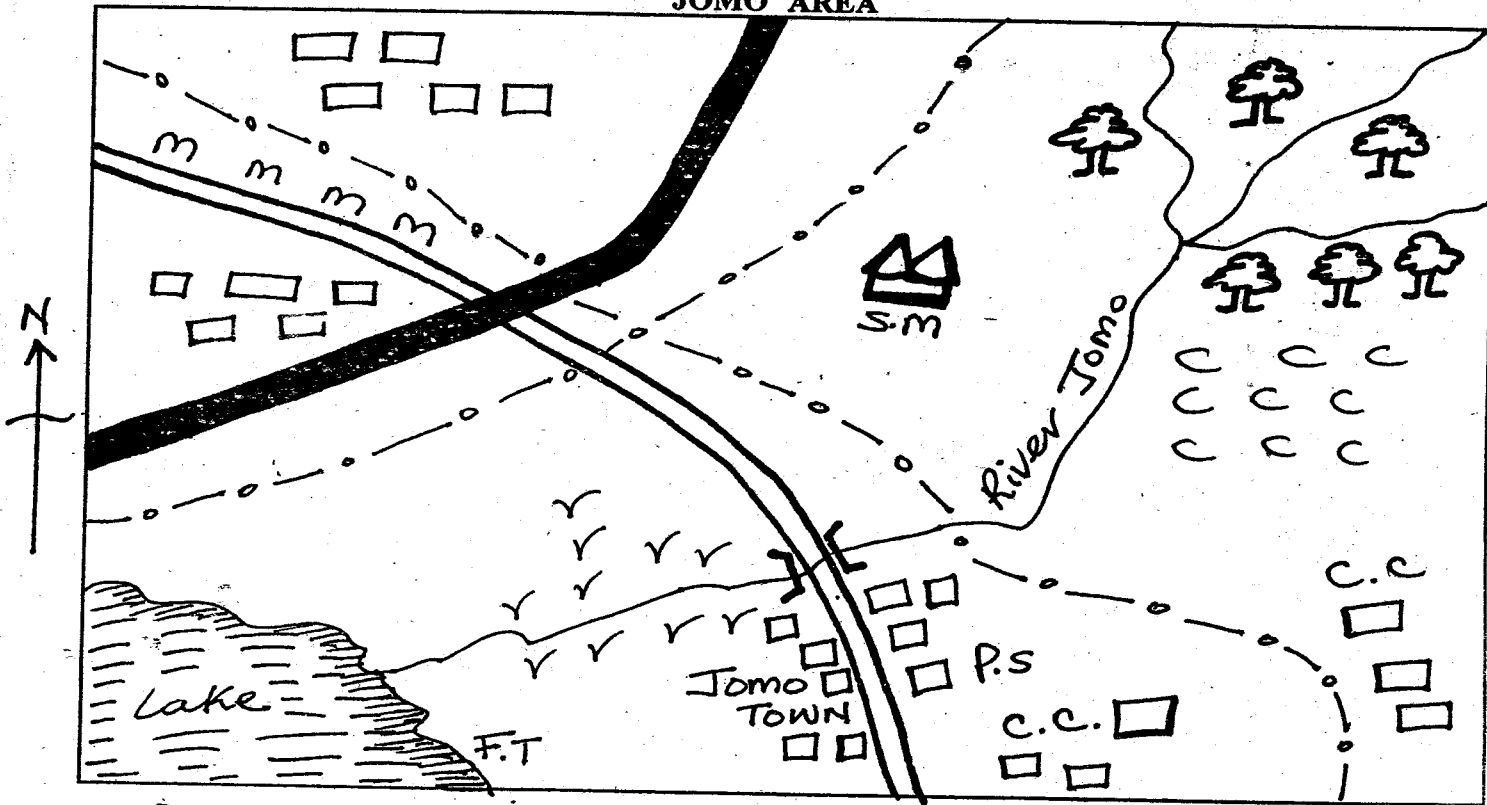
TOP SERIES EXAM

STD 4 TERM 1 2013

SOCIAL STUDIES & C.R.E.

TOP
SERIES

JOMO AREA



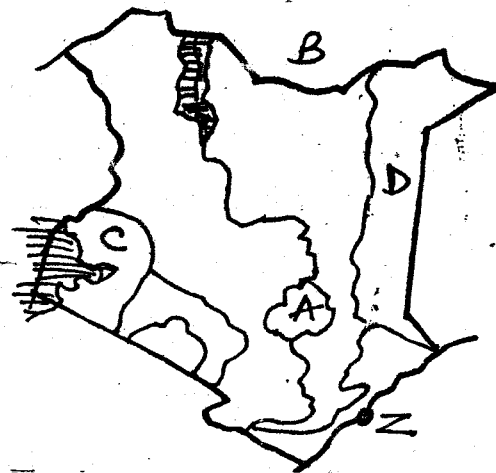
KEY:	Tarmac road	Murram road	Forest	Locational boundary
Buildings	S.M = Saw Mill	M.M = Maize	F.T = Fish Traps	
C.C = Chief's camp	C.C = Coffee	P.S = Police Station	Grass	

Use the above map to answer questions 1-7

- What is the direction of the forest from the lake?
A. North East B. North West
C. South West D. South East
- Timber can be obtained from the _____
A. chief's camp B. police station
C. saw mill D. maize farm
- Which of these economic activities is being carried out around the lake?
A. Mining B. Trading
C. Cultivation D. Fishing
- How many locations are there in Jomo area?
A. 5 B. 4 C. 3 D. 6
- If a thief is caught breaking into a shop in Jomo area he or she should _____
A. be drowned in the lake
B. be burnt to death
C. be taken to the chief's camp
D. be taken to the police station
- The most commonly used means of transport in the area is by use of _____
A. railway B. road
C. air D. water
- Which of these economic activities is not being carried out in Jomo area?
A. Mining B. Farming
C. Trading D. Forestry
- Rivers which only flows during the rainy season are known as _____
A. rainy rivers B. seasonal rivers
C. permanent rivers D. swampy rivers

9. Wind is also known as _____
A. rain B. moisture
C. moving air D. clouds
10. Who was the second president of Kenya?
A. Moi B. Kibaki
C. Kenyatta D. Odinga
11. Which of the following is not a cause of road accidents in Kenya?
A. Careless driving
B. Bad roads
C. Using roadworthy vehicles
D. Lack of road signs
12. A wet marshy area is known as _____
A. a swamp B. a river
C. a lake D. a depression
13. Which of the following could be made in a traditional industry?
A. A vehicle B. Iron sheets
C. Glass D. Boats
14. The leading tourist attraction in Kenya is _____
A. wildlife B. mountains
C. beaches D. the Rift valley
15. Which of the following crops is not mainly grown as a cash crop?
A. Sisal B. Beans
C. Cotton D. Coffee
16. Which of the following is a beverage crop?
A. Sisal B. Cotton
C. Coffee D. Flowers
17. Rainfall is measured by an instrument called _____
A. rainmaker B. windsock
C. thermometer D. raingauge
18. Madaraka day is celebrated on _____
A. 12th December B. 20th October
C. 1st June D. 1st January
19. A place where meat is sold is called _____
A. butchery B. market
C. bank D. supermarket
20. The following are main language groups in Kenya. Which one is not?
A. Bantus B. Cushites
C. Nilotes D. Portuguese
21. The direction where the sun sets is called _____
A. North B. East
C. West D. South





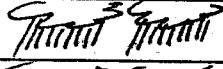



Use the map to answer questions 22 - 27




22. The above diagram show a map of _____
A. Uganda B. Kenya
C. Africa D. Tanzania
23. The country marked 'B' is known as _____
A. Uganda B. Tanzania
C. Ethiopia D. Somalia
24. Which swamp is found in the province marked 'D'?
A. Lorian swamp B. Lokitipi swamp
C. Yala swamp D. Ondiri swamp
25. The headquarters of the country above is ?
A. Nakuru B. Nyeri
C. Nairobi D. Garissa
26. Who is the president of the a bove country ?
A. Raila B. Kibaki
C. Uhuru D. Mudavadi
27. The town marked 'Z' is likely to be _____
A. Mombasa B. Lamu
C. Nairobi D. Voi
28. People walking along the road are called _____
A. travellers B. walkers
C. cyclist D. pedestrians
29. Which one is not true about a disabled person?
A. Cannot speak B. Cannot read
C. Cannot see D. Cannot hear
30. The type of forest planted by man is called _____
A. riverline forest B. woodland
C. planted forest D. natural forest
31. Which of the following compass point is not cardinal?
A. East B. North East
C. West D. South
32. The following are elements of weather except _____
A. rain B. cold
C. wind D. clouds
33. Which of the following is a physical feature?
A. Houses B. Roads
C. Bridges D. Swamps
34. The carrying away of soil by wind is also called _____
A. soil fertility B. soil erosion
C. soil texture D. soil eroding

35. Who is the head of a province?
 A. District officer
 B. Provincial commissioner
 C. District commissioner
 D. District Education officer
36. Which of the following groups of people is Bantu?
 A. Agikuyu
 B. Boran
 C. Kalenjin
 D. Luo
37. In Kenya who helps to keep law and order?
 A. Doctors
 B. Teachers
 C. Police
 D. Scouts
38. Rules on how to behave properly are also known as
 A. moral laws
 B. good laws
 C. bad laws
 D. constitution
39. The highest mountain in Kenya is _____
 A. Mt. Marsabit
 B. Mt. Chyulu
 C. Mt. Kenya
 D. Mt. Elgon
40. People who kill wild animals without permission are called _____
 A. tourists
 B. visitors
 C. killers
 D. poachers
41. The type of vegetation that grows in a swampy area is _____
 A. papyrus
 B. grass
 C. trees
 D. acacia


Use the weather chart below to answer questions 42 - 43

Day	Morning	Afternoon
Monday		
Tuesday		
Wednesday		
Thursday		

42. On which day of the week did people use umbrellas and raincoats the whole day?
 A. Thursday
 B. Tuesday
 C. Monday
 D. Wednesday
43. Which was the best day for washing clothes?
 A. Wednesday
 B. Thursday
 C. Tuesday
 D. Monday
44. The road sign shown means that there is _____ ahead.



- A. round about
 B. road junction
 C. cattle crossing
 D. bumps
45. Fishing is carried out in _____
 A. rivers
 B. land
 C. mountains
 D. land

46. The green colour in our national flag means _____
 A. people
 B. vegetation
 C. land
 D. peace
47. The area of flat level land is called _____
 A. mountain
 B. plain
 C. plateau
 D. lake
48. Which of the following animals is harmful?
 A. Dog
 B. Bee
 C. Cow
 D. Tick
49. Who among the following communities are pastoralists?
 A. Agikuyu
 B. Abaluhya
 C. Maasai
 D. Abakuria
50. Which of the following is not a modern way of transport?
 A. Use of porters
 B. Use of bicycles
 C. Railway
 D. Aeroplane
51. Birds kept at home are also called _____
 A. dairy cattle
 B. poultry
 C. wild animals
 D. pets
52. Muslims go to worship their God in _____
 A. church
 B. temple
 C. mosque
 D. synagogue
53. What is the weather shown?

 A. Rainy
 B. Clouds
 C. Sunny
 D. Cloudy
54. The hotness or coldness of a place is called _____
 A. humidity
 B. pressure
 C. temperature
 D. air
55. One of the following is not a child right. Which one?
 A. Parental care
 B. Leisure
 C. Provide for the family
 D. Education
56. The soil that drains water quickly is _____
 A. sand and clay
 B. loam
 C. clay
 D. sand
57. During the olden days, the young people were taught by _____
 A. grandparents
 B. teachers
 C. elder brothers
 D. pastors
58. The following is not an early form of transport. Which is it?
 A. Walking
 B. Water
 C. Aeroplane
 D. Animals
59. The following is not a game played in the past.
 A. running
 B. wrestling
 C. football
 D. throwing sticks
60. General elections in Kenya are held after _____ years.
 A. 10
 B. 5
 C. 20
 D. 3

C.R.E.

61. Samuel was called by God _____ times.
A. 2 B. 4 C. 3 D. 1
62. The fifth book in the bible is _____
A. Genesis B. Revelation
C. Mathew D. Deutronomy
63. Who was known as the king of Jews?
A. King Herod B. Samuel
C. Saul D. Jesus
64. The earthly father of Jesus was a _____
A. farmer B. fisherman
C. carpenter D. saviour
65. _____ were the first disciples to be called.
A. Simon and Andrew B. John and James
C. Phillip and Luke D. Matthew and John
66. We should care for environment by _____
A. cutting trees B. burning bushes
C. planting trees D. burning charcoal
67. Which of the following is not a way of worshipping God?
A. Singing B. Praying
C. Playing D. Reciting a memory verse
68. God told Moses He is called _____
A. Ernmanuel B. God
C. I Am D. Lord
69. One of the following is not a partriach. Which one is it?
A. Jacob B. Elijah
C. Joseph D. David
70. Juma saw a ten shilling coin in the school compound. As a christian what should he do?
A. Buy cakes and sweets
B. Share with his friends
C. Give to the teacher
D. Take to his mother
71. Lydia came from a town called _____
A. Nazareth B. Phillipi
C. Bethany D. Jericho
72. _____ is the time of getting ready for the coming of christ.
A. Advent B. Descending
C. Ascending D. Resurrection
73. During christmas we should do the following except
A. visit our relatives
B. share with the needy
C. visit the sick
D. steal from neighbours
74. Jane a class four pupil is HIV positive. What should a good classmate do?
A. Run away from her B. Love her
C. Laugh at her D. Abuse her
75. We should _____ our parent and teachers.
A. obey B. hate
C. abuse D. disobey
76. The bible has _____ books.
A. 27 B. 66 C. 39 D. 40
77. Jesus was given the following gifts except _____
A. gold B. silver
C. frankincense D. myrrh
78. When we are given something we should _____
A. abuse B. say thank you
C. ignore D. say nothing
79. Jesus healed _____ lepers.
A. 5 B. 2 C. 10 D. 12
80. Jesus prayed on mount _____
A. Kenya B. Elgon
C. Sinai D. Olive
81. The national anthem "Natu jenge taifa letu" is in _____ stanza.
A. 1 B. 2 C. 3 D. 4
82. Jane and James were fighting. As a good leader what would you do?
A. Report the matter to the teacher
B. Help to fight
C. Scream
D. Run away
83. Jesus taught people using stories called _____
A. riddles B. parables
C. proverbs D. creation stories
84. Jesus ordered _____ and his friend to lower the net into the deep water.
A. John B. Simon
C. James D. Andrew
85. Unselfishness means _____
A. to consider the needs of others
B. being selfish to others
C. being unloving to others
D. being unkind to others
86. Who among the following women promised to dedicate her son to God?
A. Elizabeth B. Rebecca
C. Hamah D. Mary
87. When we are sick we can get well by _____
A. sleeping B. praying
C. working D. talking
88. The followers of Jesus were first called christians at
A. Antioch B. Capernaum
C. Bethlehem D. Jerusalem
89. The disciples received the Holy spirit on _____ day.
A. sabbath B. christmas
C. Easter D. Pentecost
90. When we treat people the same, we are being ____
A. unfair B. obedient
C. fair D. lovely