

CHALLENGER SERIES

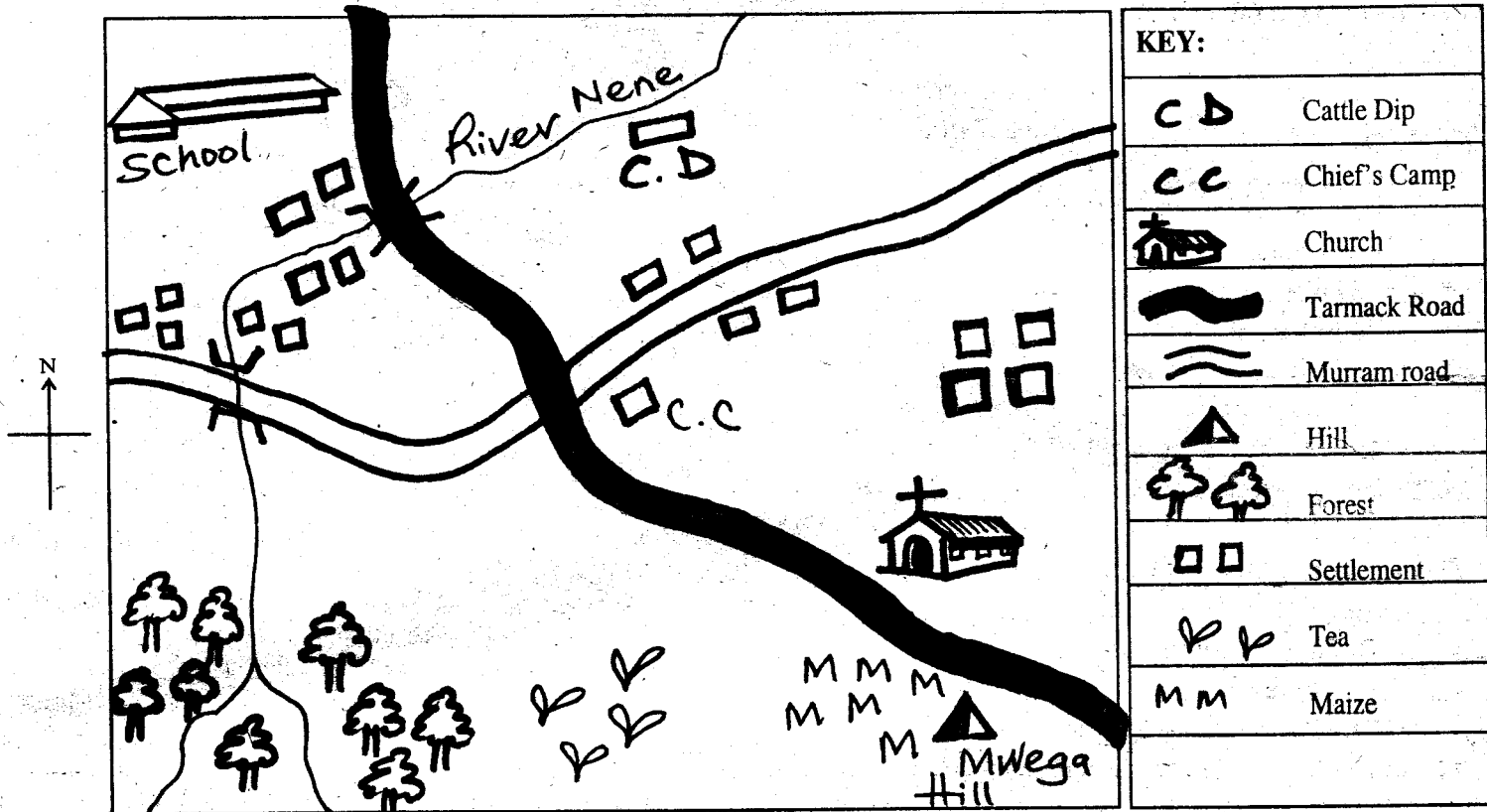
STD. 4 TERM 2 2013

SOCIAL STUDIES / C.R.E

BSP - SERIES 2/13

NAME: CLASS:

NGATO AREA



Use the map above and answer the questions 1-7

- The common means of transport in Ngato area is ____
A. Air B. Water C. Road D. Rail
- The people of Ngato area are ____
A. Christians B. Pagans
C. Hindus D. Muslims
- What animals are kept in Ngato area? ____
A. Pigs B. Cattle C. Poultry D. Donkeys
- The direction of Mwega hill from the Church is ____
A. South B. East C. West D. North
- The cash crop mostly grown in Ngato area is ____
A. Maize B. Sugarcane
C. Trees D. Tea
- How many bridges are there on river Nene? ____
A. One B. Three C. Four D. Two
- The food crop grown in Ngato area is ____
A. Potatoes B. Maize
C. beans D. Cabbages
- The following were means of sending messages in the past except? ____
A. Drums B. Smoke
C. Horns D. Phones
- Who among the following is elected ____
A. D.C B. Governor
- The last General Election in Kenya were held on ____
A. 4th March, 2013 B. 4th March, 2012
C. 1st May, 2012 D. 20th Oct. 2013
- _____ was the first president of Kenya.
A. Mwai Kibaki B. Daniel Arap Moi
C. Raila Odinga D. Mzee Jomo Kenyatta
- Winnowing is best done during a ____
A. Calm day B. Windy day
C. Sunny day D. Rainy day
- The instrument used to tell the direction wind is blowing from is called ____
A. Barometer B. Wind vane
C. Thermometer D. Raingauge
- Areas with many people are said to be ____ populated.
A. Densely B. Thinly
C. Sparsely D. Many
- When we replace the trees that we have cut by planting new ones, that activity is known as ____
A. Trees B. Rainfall
C. Re-afforestation D. Forest
- In order for a person to vote for a member of parliament, one is supposed to be above ____
A. 35 B. 18 C. 21 D. 5

17. Areas where beef cattle are kept are called _____
 A. Cattle Dip B. Cattle ranches
 C. Cattle herders D. Cattle bomas
18. The second president of Kenya was _____
 A. Kibaki B. Moi
 C. Raila D. Kenyatta
19. Counting people in a country is called _____
 A. Cencus B. Data
 C. Election D. Population
20. Small rivers that join up to make a river are called _____

- A. Streams B. Rivers
 C. Tributaries D. Tana

21. Moral laws tell us how to _____
 A. Behave properly
 B. Defeat each other
 C. Abuse others
 D. Kill each other

22. Elections in Kenya are held every _____ years
 A. 10 B. 5 C. 21 D. 18

23. The main function of the police is to _____
 A. Kill people
 B. Punish wrong doers
 C. Abuse people
 D. Maintain law and order

24. An instrument used to measure temperature is called _____
 A. Barometer B. Rain-gauge
 C. Thermometer D. Windsock

25. Watering crops where rainfall is not enough is called _____
 A. Cropping B. Rainfall
 C. Irrigation D. Watering

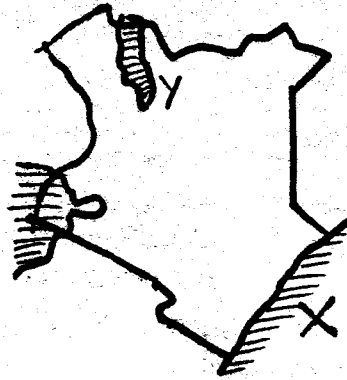
26. _____ is another name for grassland.
 A. Plateau B. Bushland
 C. Forest D. Savanna

27. Which one of the following statements explains why our people carry out initiation? _____
 A. To move to adulthood
 B. To show that one is strong
 C. To show that one is brave
 D. To make us different from other people

28. The idea of people coming together to work for the benefit of our community is known as _____
 A. Meeting B. Harambee
 C. Function D. Ceremony

29. Most people who live in arid and semi arid areas are _____
 A. Farmers B. Miners
 C. Pastoralists D. Fishermen

Use the map below to answer questions 30 - 31



30. The lake marked Y is called _____
 A. Lake Victoria B. Lake Turkana
 C. Lake Magadi D. Lake Naivasha

31. The ocean marked X is _____ ocean
 A. Pacific B. Indian
 C. Victoria D. Atlantic

32. Three of the following are causes of road accident except? _____
 A. Overspeeding B. Careless driving
 C. Worn-out tyres D. Obeying road signs

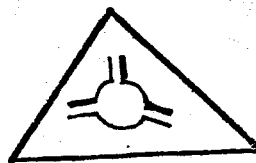
33. Moving air is called _____
 A. Breeze B. Wind C. Air D. Current

34. _____ is the present given to girl's parents during marriage?
 A. Dowry B. Gifts C. Animals D. Money

35. Which one of the following is ODD one out? _____
 A. Nilotes B. Cushites C. Bantus D. Luo

36. The condition of the atmosphere everyday is known as _____
 A. Climate B. Sunshine
 C. Weather D. Temperature

37. The road sign shown below shows that _____
 A. There is no road
 B. There is a round about
 C. There is a circle
 D. There is traffic light



38. Dairy cattle are kept for _____
 A. Milk B. Beef C. Hides D. Skins

39. Area set mainly for wild animals is called _____
 A. Field B. Forest
 C. National Park D. Museum

40. Holy places for our ancestors are called _____
 A. Churches B. Schools
 C. Playing areas D. Shrines


41. Most people move to town to _____
 A. Kill people B. Look for jobs
 C. Get married D. Look for friends

42. The physical feature on which it is best to place a satellite dish is a _____
 A. Valley B. Plain C. Hill D. River

43. The direction of North-West lies between _____ and _____
 A. North and West B. North and East
 C. South and East D. West and South

44. The illegal killing of wild animals is called _____
 A. Killing B. Murdering
 C. Hunting D. Poaching
45. The crops grown for sale are known as _____
 A. Food crops B. Cash crops
 C. Fodder crops D. Subsistence crops
46. The flag of Kenya has _____ colours
 A. 3 B. 4 C. 6 D. 2
47. Which one of the following is NOT a Traditional Industry? _____
 A. Iron working B. Basketry
 C. Pottery D. Glass making
48. Long ago, children were taught through _____
 A. Stories B. Books
 C. Literature D. Reading
49. Maasai houses were built by _____
 A. Women B. Elders
 C. Warriors D. Morans
50. We celebrate _____ on 12th December
 A. Labour day B. Christmas day
 C. Jamhuri day D. Madaraka day

Use the diagram below to answer questions 51 - 52



51. The type of rain shown above is called _____
 A. Relief B. Convectional
 C. Air D. River
52. The side marked B is called _____
 A. Windward B. Mountain
 C. Lee ward D. Relief
53. The name given to God among the Kalenjins was _____
 A. Ngai B. Enkai
 C. Asis D. Were
54. Three of the following are reasons why we should plant more trees. Which one is not? _____
 A. Tree spoil the air
 B. Trees give us rain
 C. Trees give us wood
 D. Trees prevent soil erosion

55. Who was the president of Kenya before Mwai Kibaki? _____
 A. George Saitoti
 B. Jomo Kenyatta
 C. Oginga Odinga
 D. Daniel Arap Moi
56. _____ is the extensive area of fairy flat land.
 A. Hills B. Valley
 C. Highlands D. plateau
57. Chickens kept for eggs are called _____
 A. Broilers B. Layers
 C. Chicks D. Free range
58. On 1st June every year we celebrate _____
 A. Kenyatta day
 B. Moi day
 C. Jamhuri day
 D. Madaraka day
59. _____ is carrying away of soil by water and wind.
 A. Soil erosion B. Rainfall
 C. Weathering D. I don't know
60. The money people pay to the government is called _____
 A. Loss B. Tax
 C. Profit D. Money

C.R.E.

61. King Ahab wanted to buy the garden of _____
 A. Jacob B. Naboth
 C. David D. Jezebel
62. The meaning of the word "Church" is _____
 A. A market
 B. A building for prayers
 C. A building for selling things
 D. Christian believers
63. Zacharia the father of John the baptist was a _____
 A. Priest B. Farmer
 C. Fisherman D. Carpenter
64. If we share textbooks with our classmates, it shows we are not? _____
 A. Clever B. Selfish
 C. Good D. Bad
65. The sisters of Lazarus were _____
 A. Ruth and Mary
 B. Esther and Naomi
 C. Esther and Ruth
 D. Martha and Mary
66. Christians talk to God through _____
 A. Prayers B. Man
 C. Dreams D. Satan

67. We should _____ before we go to sleep
 A. Watch T.V B. Sing National Anthem
 C. Pray D. Dance
68. The first Christian Martyr was _____
 A. Paul B. Stephen
 C. Andrew D. John
69. How many robbers were crucified with Jesus? _____
 A. 3 B. 5 C. 2 D. 4
70. Who was the priest at the temple where the boy Samwel served God? _____
 A. Elijah B. Eli
 C. Elikana D. Elisha
71. Why should we take care of God's creation? _____
 A. To get a lot of money
 B. To avoid being punished
 C. To show that we are good
 D. God commands us to
72. Who among the following women promised to dedicate her son to God? _____
 A. Elizabeth B. Rebecca
 C. Mary D. Martha
73. God provided Abraham with a _____
 A. Goat B. Ram C. Cow D. Chicken
74. As Christians we should _____ our enemies
 A. Forget B. Hate
 C. Kill D. Love
75. Before Jesus broke the bread he _____
 A. Prayed B. Played
 C. Ate D. Cooked
76. We should be careful when choosing _____
 A. Aunts B. Uncles
 C. Friends D. Parents
77. Who said, "let the children come to me" _____
 A. Jesus B. John
 C. Peter D. Philip
78. The greatest commandment is _____
 A. Hatred B. Love
 C. Joy D. Kindness
79. The following are words that can express peace at home. Which one is NOT? _____
 A. I don't care
 B. I am sorry
 C. Excuse me
 D. Thank you
80. In John 11:38-44 when Jesus found that Lazarus was dead, what did he do? _____
 A. He shouted
 B. He ran away
 C. He wept
 D. He beat people
81. The name of the land God promised for Israelites with milk and honey was _____
 A. Israel B. Jerusalem
 C. Jordan D. Canaan
82. By washing his disciples feet Jesus showed _____
 A. Service to others
 B. Boasting
 C. Carelessness
 D. How dirty they were
83. One can easily get HIV/AIDs through _____
 A. Greeting
 B. Sexual intercourse
 C. Learning together
 D. Smiling
84. A true friend helps in times of _____
 A. Feasting B. Need
 C. Dancing D. Death
85. Moses lived in the land of _____
 A. Jordan B. Sinai
 C. Jethro D. Midian
86. The word gospel means _____
 A. Good news
 B. Saviour
 C. Laughter
 D. God with us
87. Who is termed as prince of peace? _____
 A. Peter
 B. John the baptist
 C. Elikanah
 D. Jesus Christ
88. Which prophet foretold the birth of Jesus Christ? _____
 A. Jeremiah B. Isaiah
 C. Hosea D. Micah
89. Where were the disciples during the day of pentecost? _____
 A. Mt. Olives B. Bethlehem
 C. Antioch D. Jerusalem
90. In the sermon on the mountain, "Happy are those who mourn, God will _____ them."
 A. Hear B. Teach
 C. Heal D. Comfort