

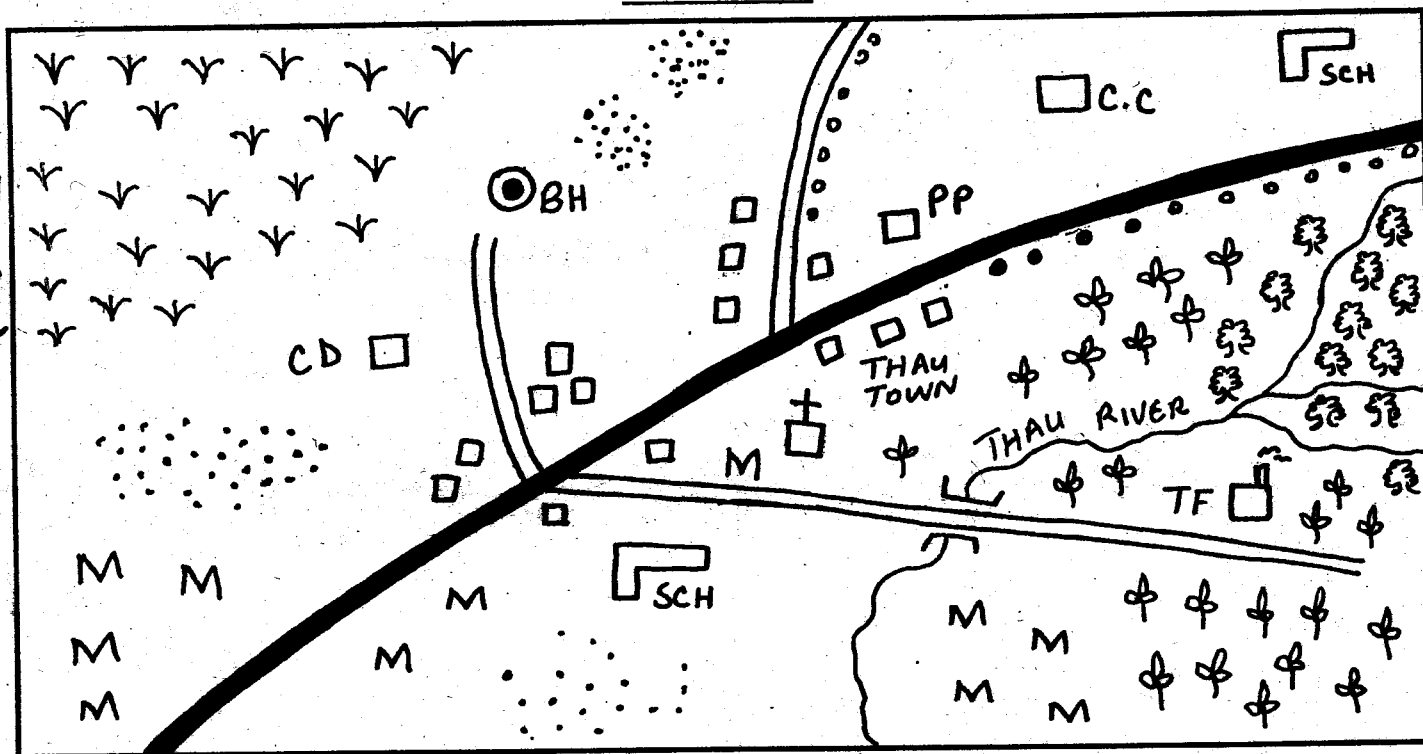
# WESTERN PROVINCE

## TERM II-YEAR 2010

### SOCIAL STUDIES & C.R.E

### STD 4

THAU AREA



**KEY:**

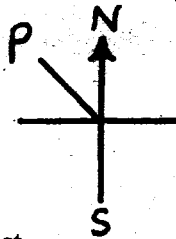
|  |                |  |             |  |          |  |                |
|--|----------------|--|-------------|--|----------|--|----------------|
|  | Tea            |  | River       |  | Church   |  | Tarmac road    |
|  | Murrum road    |  | SCH School  |  | Forest   |  | Huts           |
|  | Villages       |  | Shops       |  | MM Maize |  | CD Cattle dip  |
|  | PP Police post |  | BH Borehole |  | YY Grass |  | PP Police post |

**Use the map of Thau area to answer questions 1-81.**

1. The type of farming carried out in Thau area is?
  - A. Irrigation
  - B. Mixed farming
  - C. Dairy farming
  - D. Beef farming
2. What is the general flow of river Thau?
  - A. NW to SE
  - B. SW to NE
  - C. NE to S
  - D. SE to N
3. The religion of the people of Thau area is?
  - A. Christianity
  - B. Hinduism
  - C. Islam
  - D. Buddhism
4. Which of the following crops are grown in Thau area?
  - A. Sisal and tea
  - B. Maize and coffee
  - C. Tea and coffee
  - D. Tea and maize
5. People living in the NW of Thau area?
  - A. Are fishermen
  - B. Keep cattle
  - C. Are farmers
  - D. Are shopkeepers

6. Thau area is administered by a \_\_\_\_\_
  - A. Chief
  - B. DO
  - C. Headteacher
  - D. DC
7. The main means of transport in Thau area is?
  - A. Air
  - B. Road
  - C. Water
  - D. Railway
8. How many shopping centres are in Thau area?
  - A. 4
  - B. 1
  - C. 3
  - D. 2
9. Which of the following features is manmade?
  - A. Ocean
  - B. Mountain
  - C. Dam
  - D. River
10. A province is divided into \_\_\_\_\_
  - A. Districts
  - B. Locations
  - C. Schools
  - D. Divisions

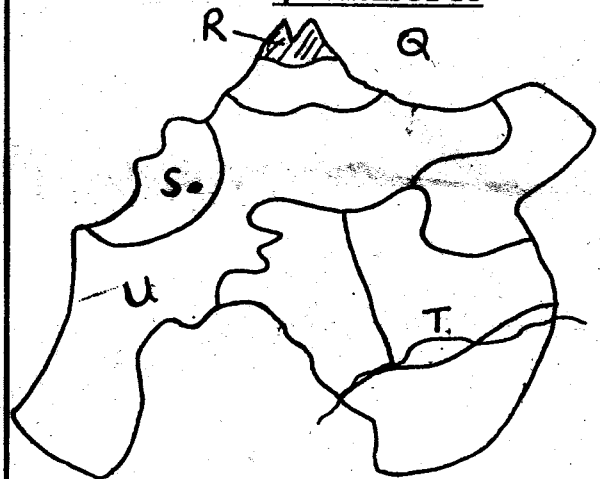
11. Below are forms of communication. Which one is NOT modern?  
A. Fax B. Telephone C. Mobile D. Drum
12. Chicken kept for eggs are called \_\_\_\_\_  
A. Hens B. Layers C. Broilers D. free range
13. Three of the following are basic needs to human beings. Which one is NOT?  
A. Mobile B. Shelter C. Clothing D. Food
14. Which one of the following is true about a compass?  
A. It is used for telling time  
B. It is used for drawing lines  
C. It is used for calculating sums  
D. It is used for showing direction
15. Below are crops that we grow in our farms. Which one is a vegetable crop?  
A. Wheat B. Sorghum C. Spinach D. Millet
16. A ceremony carried on when a new baby is born is called \_\_\_\_\_ ceremony  
A. Naming B. Initiation C. Birthing D. Funeral
17. Most communities have laws that tell them how to behave well. They are called?  
A. Tribal laws B. Moral laws  
C. School laws D. Civil laws
18. Which of the following is a traditional industry?  
A. Basketry B. Car repair  
C. Shoe making D. Bakery
19. How many district are in our province?  
A. 6 B. 7 C. 8 D. 11
20. The headquarters of Teso district are in?  
A. Bungoma B. Amagoro  
C. Busia D. Vihiga
21. Which is the highest mountain in our province?  
A. Mt. Elgon B. Mt. Kenya  
C. Mt. Chyulu D. Mt. Meru
22. The direction marked P is \_\_\_\_\_



- A. North East B. South West  
C. North West D. South East
23. Arrange the following from the lowest to the highest  
A. Sub-chief, D.O, chief, D.C, P.C  
B. Chief, D.C, D.O, P.C  
C. P.C, D.C, D.O, chief, sub-chief  
D. Sub-chief, chief, D.O, D.C, P.C
24. Who among the following is NOT a member of the nuclear family?  
A. Aunt B. Mother  
C. Children D. Father
25. Visitors who come to visit our country are called?  
A. Messengers B. Tourists  
C. Priests D. Visitors

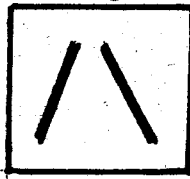
26. Areas with stagnant water and few plants growing are called?  
A. Plateaus B. Plains C. Swamps D. Flats
27. Below are rivers found in our province except one. Which one?  
A. Nzoia B. Yala C. Lusumu D. Tana
28. The following are types of trees found in our province. Which of them will be found in planted forest?  
A. Meru oak, Teak, Camphor  
B. Cypress, Pine, Cedar  
C. Pine, Meru oak, Cedar  
D. Cedar, Pine, Camphor
29. The instrument used to measure temperatures is called \_\_\_\_\_  
A. Compass B. Thermometer  
C. Rain gauge D. Barometer
30. The MP represents a \_\_\_\_\_  
A. Constituency B. Zonal  
C. Ward D. Sub-location

**Study the map of Western province and answer questions 31-35**



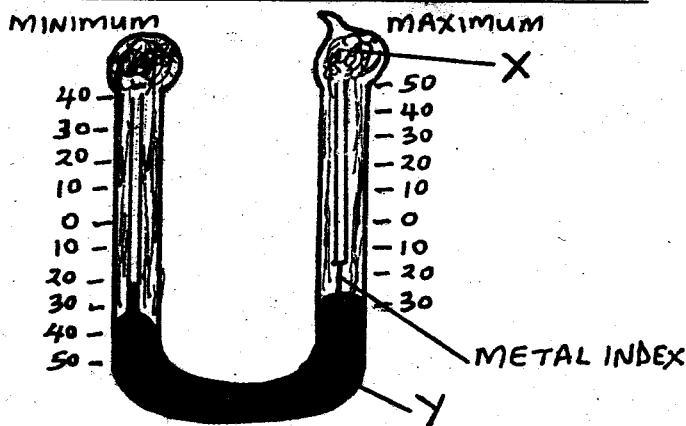
31. The province marked Q to the East is?  
A. Nairobi B. North Eastern  
C. Rift valley D. Coast
32. The area shaded and marked R has \_\_\_\_\_ type of vegetation  
A. Rainforest B. Savanna  
C. Desert D. Heath and moorland
33. The town marked S is \_\_\_\_\_  
A. Vihiga B. Malaba C. Lugari D. Busia
34. The river marked T is?  
A. Lusumu B. Yala C. Kuywa D. Nzoia
35. The district marked U is?  
A. Busia B. Bungoma  
C. Teso D. Butere-Mumias
36. The main language groups in Western province are  
A. Bantu and Cushites B. Semites and Bantus  
C. Bantus and Nilotes D. Cushites and Semites
37. Who among the following is not a great person in our province?  
A. Uhuru Kenyatta B. Albert Ekirapa

- C. Moses Mudavadi                      D. Wycliffee Awori
38. Where is tea grown in our province?  
 A. Mt. Elgon district                      B. Vihiga district  
 C. Bungoma district                      D. Kakamega district
39. What will the road sign below tell the driver. That \_



- A. The road ahead is slippery  
 B. There are two bumps ahead  
 C. The road narrows ahead  
 D. The road is wide ahead
40. Which of the following is an element of weather?  
 A. Water                                      B. Winds  
 C. Soil                                         D. Plants
41. In Kenya laws are made by the \_\_\_\_\_  
 A. Churches                                  B. Teachers  
 C. Parliament                                D. Chief

Use the diagram below to answer questions 42-43



42. The part marked X is \_\_\_\_\_  
 A. Mercury                                  B. Vacuum  
 C. Petrol                                     D. Torch
43. Part Y holds a liquid called \_\_\_\_\_  
 A. Petrol                                     B. Paraffin  
 C. Mercury                                 D. Water
44. Why is mob justice wrong, because  
 A. The police are better at punishing criminals  
 B. The mob does not know the reason why someone committed a crime  
 C. Jail is the right place for criminals  
 D. Good citizens respect the law and allow the police and courts to administer justice
45. In the olden days trading activities were conducted  
 A. Only in the shops  
 B. In an open air market  
 C. Along the road  
 D. At chiefs' office
46. \_\_\_\_\_ is the largest district in our province  
 A. Bungoma                                 B. Busia  
 C. Lugari                                     D. Amagoro

47. Where do we go when we fall sick? To the  
 A. Market                                    B. Hospital  
 C. Hotel                                        D. Court
48. Our province covers an area of about  
 A. 6,824km<sup>2</sup>                                 B. 9,264km<sup>2</sup>  
 C. 2,864km<sup>2</sup>                                 D. 8,264km<sup>2</sup>
49. Which one of the following is NOT a way of helping your parents at home?  
 A. Taking drugs                              B. Taking care of animals  
 C. Washing utensils                        D. Cleaning the compound
50. Below are causes of road accidents except?  
 A. Driving while drunk  
 B. Ignoring road signs  
 C. Using well repaired roads  
 D. Using the road carelessly
51. Waterfalls, wild animals and beaches all attract  
 A. Pupils                                        b. Farmers  
 C. Tourists                                    D. Travellers
52. The most common food for pastoralist is?  
 A. Ugali                                         B. Milk  
 C. Chapati                                     D. Matoke
53. Fresian and Ayrshire are both breeds of  
 A. Goats                                        B. Pigs  
 C. Cattle                                        D. Sheep
54. Below are local materials that could be used to make mats and baskets. EXCEPT?  
 A. Sisal                                         B. Maize leaves  
 C. Papyrus reed                              D. Banana fibres
55. What was the name given to the traditional iron makers?  
 A. Potters                                      B. Ironist  
 C. Black smith                                D. Withcrafts
56. People who are employed to take care of our wildlife are called?  
 A. Game men                                 B. Game guards  
 C. Poachers                                  D. Game rangers
57. Which one of the following is not a language group in Kenya?  
 A. Yao    B. Bantus    C. Cushites    D. Nilotes
58. There are four colours in our national flag. Colour green shows our  
 A. Nation vegetation                        B. Blood shed  
 C. Colour                                        D. Unity
59. Pyrethrum flowers are used for making?  
 A. Sprays                                        B. Insecticide  
 C. Powder                                        D. Medicine
60. Land which is surrounded by water is caled?  
 A. Sea    B. Highland  
 C. Island                                         D. Bay

**C.R.E.**

61. When Jesus prayed in Gethsemane the drops of sweat looked like  
 A. Blood                                        B. Water  
 C. Tea    D. Milk

62. Who baptized Jesus?  
A. Mark B. James C. John D. Peter
63. Jesus overcome the devil through the power of  
A. The cross B. Holy spirit  
C. Lucifer D. John the baptist
64. Which of the following would promote peace in our community?  
A. Selfishness among people  
B. Working together in harmony  
C. Favouring relatives in working places  
D. Living far away from each other
65. Which one of the following is NOT a way of sharing  
A. Praying with others  
B. Abusing others  
C. Loving God  
D. Feeding the hungry
66. The victory of Jesus Christ over death is celebrated during?  
A. Christmas B. Easter  
C. Pentecost D. Palm Sunday
67. Who among the following was chosen by God to lead the Israelites out of Egypt?  
A. John B. Abraham C. Moses D. Isaac
68. The story of Noah teaches us that  
A. We should please God  
B. God hates people  
C. God is not merciful  
D. We should destroy God's creation
69. With whom does Jesus compare the kingdom of God  
A. Angels B. Children C. Priest D. Disciples
70. God's greatest gift to man is \_\_\_\_\_  
A. Psalms B. Creation  
C. Holy scripture D. Jesus Christ
71. Christians talk to God through \_\_\_\_\_  
A. Prayers B. Singing  
C. Dancing D. Speaking
72. The first human being created by God lived in the garden of?  
A. Calvary B. Golgotha  
C. Eden D. Gethsemane
73. Who among the following was a sister to Lazarus?  
A. Martha B. Tabitha C. Salome D. Dorcas
74. Most of the twelve disciples of Jesus were  
A. Tax collector B. Teachers of the law  
C. Doctors D. Fishermen
75. In Traditional African Community those who were lazy were?  
A. Congratulated B. Disliked  
C. Liked D. Loved
76. Which one of the following was not a command given to the disciples?  
A. Punish sinners B. Preach the gospel  
C. Cast out demons D. Heal the sick
77. "This is my own dear son with whom I am pleased" These words were spoken by  
A. Abraham B. Moses  
C. Jesus D. God
78. The following are diseases that may attack us. Which one of them has no cure?  
A. Measles B. Polio  
C. HIV/AIDS D. Malaria
79. Cheating is bad. Who among the following died because of cheating?  
A. Saphira B. Saul  
C. Stephen D. Jeremiah
80. \_\_\_\_\_ was the king of Egypt who was very cruel  
A. Moses B. Herod  
C. Pharaoh D. Saul
81. Where did the members of the early church meet to pray  
A. In school B. In a synagogue  
C. On the mountains D. In the temple
82. As children we should  
A. Abuse each other B. Obey our elders  
C. Cheat our teachers D. Hate our enemies
83. Jesus fed 5,000 people with \_\_\_\_\_  
A. 3 loaves and 3 fish  
B. 4 loaves and 1 fish  
C. 5 loaves and 2 fish  
D. 20 loaves and 4 fish
84. When Noah was six hundred years old God sent floods. It rained for \_\_\_\_\_ days and nights  
A. Forty B. Fifty  
C. Thirty D. Twenty
85. \_\_\_\_\_ is treating each person equally with each other  
A. Judgment B. Unfairness  
C. Selfishness D. Fairness
86. The birth of Jesus was announced by  
A. Joseph B. Angel Gabriel  
C. Mary D. Angel Michael
87. Jesus always went with His disciples to pray on the mount of?  
A. Sinai B. Olives  
C. Carmel D. Moriah
88. When we have the fruit of the Holy Spirit we live in \_\_\_\_\_ with each other  
A. Dislike B. Problems  
C. Hatred D. Peace
89. God looked at everything. He had created and said it was?  
A. Good B. Enough  
C. Bad D. Of no use
90. The parents of Samuel were?  
A. Moses and Zipporah  
B. Sarah and Abraham  
C. Elizabeth and Elkanah  
D. Hannah and Elkanah