

# TARGETER WINGS EVALUATION TEST





**STANDARD FOUR - YEAR 2012**


006

## SCIENCE

TIME: 1hr 40 mins

1. Which type of teeth is used in tearing?
  - A. Molar
  - B. Pre-molar
  - C. Canine
  - D. Incisor
2. We should clean between our teeth using \_\_\_\_
  - A. brush
  - B. tooth paste
  - C. dental floss
  - D. needle
3. The word *deficiency* means \_\_\_\_
  - A. protected from
  - B. a group of signs
  - C. get from
  - D. lack of
4. *Maize, sorghum, wheat and millet* are examples of \_\_\_\_
  - A. cereals
  - B. legumes
  - C. vegetables
  - D. fruits
5. The tooth problem of teeth below is known as \_\_\_\_  

  - A. bad breath
  - B. bleeding gum
  - C. cavities
  - D. tooth decay
6. Which of the following is not an example of tuber?
  - A. Potato
  - B. Mango
  - C. Arrowroot
  - D. Yam
7. Cash crops are taken to a factory and are made to useful products. This is known as \_\_\_\_
  - A. changing
  - B. harvesting
  - C. processing
  - D. irrigating
8. The plant below is an example of \_\_\_\_ crop.  

  - A. fibre
  - B. oil
  - C. beverage
  - D. legume
9. Which of the following is not an example of weeds?
  - A. Black jack
  - B. Pig weed
  - C. Oxalis
  - D. Sisal
10. The best method of controlling weeds is by \_\_\_\_
  - A. digging them out
  - B. slashing
  - C. mulching
  - D. uprooting

11. The phase of the moon shown below is called \_\_\_\_\_




- A. gibbous
- B. half moon
- C. full moon
- D. new moon

12. The grey mountainous clouds are called \_\_\_\_\_

- A. stratus
- B. cirrus
- C. cumulus
- D. nimbus

13. The animal below eat by \_\_\_\_\_



- A. sucking
- B. pecking
- C. chewing
- D. biting

14. Which of the following is **wrongly** matched with its movement?

- A. Horse → runs
- B. Snake → slithers
- C. Eagle → fly
- D. Snail → glides

15. The liquid waste matter in animals is called \_\_\_\_\_

- A. saliva
- B. tears
- C. urine
- D. feaces

16. The young one of a rabbit is called \_\_\_\_\_

- A. puppy
- B. bunny
- C. chick
- D. fingerling

17. Spreading dry grass around the plant is called \_\_\_\_\_

- A. spraying
- B. planting
- C. shading
- D. mulching

18. During a hot day dog \_\_\_\_\_

- A. hides under rocks
- B. recoils
- C. pants
- D. fluffs its feathers

19. Which of the following is correctly matched with its product?

- A. goat → mutton
- B. sheep → wool
- C. poultry → milk
- D. beef cattle → butter

20. Animals are \_\_\_\_\_ to remove worms inside their bodies.

- A. dewormed
- B. sprayed
- C. slaughtered
- D. sold

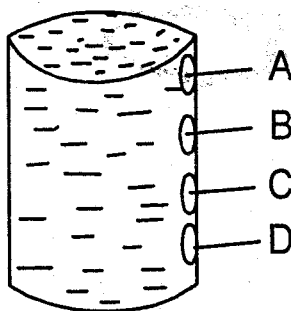
21. When a mother animal gives birth to many youngones we call them \_\_\_\_\_

- A. piglets
- B. chicks
- C. litter
- D. children

22. Which of the following is **not** a recreational use of water?

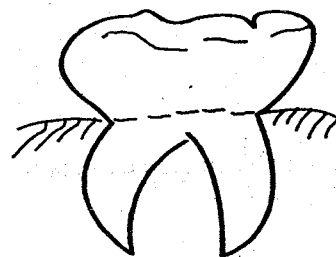
- A. Swimming
- B. Boat rowing
- C. Surfing
- D. Irrigating

23. Water is not stored in a \_\_\_\_\_  
 A. tank  
 B. drum  
 C. jerrican  
 D. tap
24. Which of the following animals does **not** live in soil?  
 A. Termites  
 B. Earthworm  
 C. Millipedes  
 D. Grasshopper
25. Which soil contains the finest particles?  
 A. Loam  
 B. Clay  
 C. Sand  
 D. Alluvial
26. Food that help in our body repair is also known as:-  
 A. energy giving food  
 B. nutrients  
 C. protective food  
 D. body building food
27. Which of these is **not** a balanced diet?  
 A. Rice, beans, cabbage  
 B. Ugali, chicken, spinach  
 C. Chapati, green grams, orange  
 D. Fish, beef, kales
28. Which is the best place to put a tap in this tank?




29. Scientist who study weather is called \_\_\_\_\_  
 A. weather chart  
 B. meteorologist  
 C. dentist  
 D. doctor

30. The amount of moisture in the air is called \_\_\_\_  
 A. rain  
 B. humidity  
 C. wind  
 D. temperature
31. Living things are divided into two \_\_\_\_ and \_\_\_\_  
 A. animals and people  
 B. insects and birds  
 C. plants and animals  
 D. plants and insects
32. Which seed below is the **odd one** out?  
 A. maize                      B. millet  
 C. bean                        D. wheat
33. A house of a pig is called \_\_\_\_\_  
 A. web                         B. sty  
 C. hutch                      D. nest
34. In the hospital doctors use \_\_\_\_\_ to measure our body temperature.  
 A. thermometer  
 B. raingauge  
 C. windvane  
 D. barometer
35. Which of the following is **not** a fuel?  
 A. Paraffin  
 B. Charcoal  
 C. Rock  
 D. Wood
36. What is the function of the tooth shown below?



- A. Grinding                      B. Biting  
 C. Tearing                        D. Cutting
37. The sun sets in the \_\_\_\_\_  
 A. South  
 B. East  
 C. West  
 D. North

38. Which one of the following is an example of energy giving food?  
 A. Tomatoes  
 B. Cooked bananas  
 C. Orange  
 D. Chicken
39. Insects breath through the \_\_\_\_\_  
 A. spiracles  
 B. lungs  
 C. gills  
 D. nose
40. Which of the following is an edible weed?  
 A. Sodom apple  
 B. Pig weed  
 C. Black jack  
 D. Wandering jew
41. A male sheep is known as \_\_\_\_\_  
 A. ram  
 B. ewe  
 C. bull  
 D. beef
42. Every home must have a \_\_\_\_\_  
 A. fence  
 B. gate  
 C. latrine  
 D. car
43. The germ that causes AIDS is called \_\_\_\_\_  
 A. fungi  
 B. bacteria  
 C. syndrome  
 D. HIV
44. Weak teeth may be caused by lack of \_\_\_\_\_  
 A. proteins  
 B. fats  
 C. calcium  
 D. carbohydrates
45. Water can be made safe and clean for drinking by \_\_\_\_\_  
 A. boiling  
 B. filtering  
 C. adding salt  
 D. warming
46. \_\_\_\_\_ is the path that the moon follows as it goes round the sun.  
 A. Line  
 B. Orbit  
 C. Route  
 D. Phase
47. Milk teeth are also known as \_\_\_\_\_  
 A. permanent  
 B. dental  
 C. temporary  
 D. shedding
48. Animals that feed on plants only are called \_\_\_\_  
 A. omnivores  
 B. carnivores  
 C. herbivores  
 D. vultures
49. AIDS cannot be spread through \_\_\_\_\_  
 A. eye contact  
 B. sexual intercourse  
 C. sharing sharp objects  
 D. sharing injections
50. The weather symbol below shows a \_\_\_\_\_ day.  
  
 A. windy  
 B. rainy  
 C. cloudy  
 D. sunny