


STD. 4 END TERM -II- YEAR 2008

SCIENCE

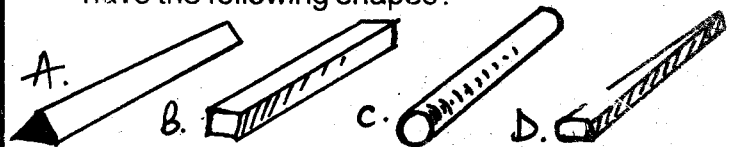
Time:- 1hr 45mins

- Stones, papers and wood are things we can hold. They are _____.
A. Liquids B. Gases C. Solids D. Air
- One of the following sinks in water. Which one?
A. Stones B. Wood
C. Plastic D. Feathers
- One of the following is not an oil crop. Which one?
A. Sunflowers B. Pyrethrum
C. Coconut D. Palm tree
- The chemicals that we get from Pyrethrum is used to make _____.
A. Insecticides B. Herbicides
C. Hemicides D. Doomcides
- Which one of the following is **not** a vegetable?
A. Onions B. Bananas
C. Tomato D. Cabbage
- Which one of the following is a poultry?
A. Camel B. Dog C. Sheep D. Turkey
- The chicken kept for slaughtering and selling are called?
A. Hens B. Chicken meat
C. Broilers D. Layers
- The short hair found on sheep or goats is called?
A. Wool B. Hair C. Far D. Fur
- Removing wool from sheep is called?
A. Hearing B. Curing
C. Shearing D. Shaving
- We get eggs from _____.
A. Cows B. Turkey
C. Sheep D. Goats
- The first teeth are known as three of the following **except**?
A. Primary teeth B. Milk teeth
C. Permanent teeth D. Deciduous teeth
- A premolar has _____ roots.
A. One B. Two C. Three D. Four
- The shape of the tooth drawn below is a _____.

A. Canine B. Pre molar
C. Molar D. Incisor
- One way of taking care of medicines is keeping them?
A. Near the fire B. Under direct sunlight
C. Near water D. Locked in a cupboard
- To climb tall buildings we should use one of the following machines:-
A. Ladder B. Roller
C. Winch D. Crowbar

16. The part marked **B** is called the:-



17. One word for solids, gases and liquids is _____.
A. Air B. Sinkers
C. Floaters D. Matter
18. For the rollers to make work easier they should have the following shapes?



19. Three of the following are uses of heat except?
A. Cooking B. Swimming
C. Boiling D. Steaming
20. Plants use their _____ to make food.
A. Stems B. Leaves
C. Roots D. Fruits

Use the table below to answer questions 21-23.

Month	Jan	Feb	Mar	April	May	June	July	Aug	Sept	Oct	Nov	Dec
Temp	22	23	20	18	16	11	10	12	16	18	20	21

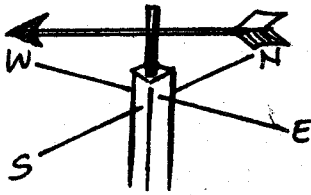
21. Which month had the highest temperature?
A. April B. January
C. February D. June
22. Which month had the lowest temperature?
A. May B. November
C. July D. March
23. Which two months had the same temperature?
A. March and April B. November and June
C. October and April D. August and January
24. The _____ is the chief source of heat.
A. Sun B. Fire C. Moon D. Stars
25. The shape of the moon shown is a _____



- A. full moon
B. new moon
C. crescent
D. gibbous

26. The animals that feed on plants are known as :-
A. Omnivores B. Herbivores
C. Carnivores D. Cows
27. One of the following animals is found inside buildings?
A. Tick B. Earthworm
C. Cockroach D. Grass hopper

28. Seeds germinate when there is water, air and _____
 A. Soil B. Humus
 C. Warmth D. Shamba
29. The instrument shown below is used to measure?



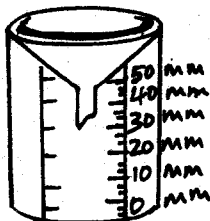
- A. Wind speed
 B. Wind direction
 C. Wind strength
 D. Wind vane

30. Which one of the following is not a liquid?
 A. Petrol B. Diesel
 C. Water D. Cement

Use the weather chart below to answer questions 31-33.

Day	Morning	Afternoon
Monday		
Tuesday		
Wednesday		
Thursday		
Friday		

31. Which day was calm in the morning and rainy in the afternoon?
 A. Monday B. Tuesday
 C. Wednesday D. Thursday
32. Which two days were calm in the morning?
 A. Monday and Friday
 B. Monday and Tuesday
 C. Tuesday and Thursday
 D. Thursday and Monday
33. Which day was all sunny in the morning and in the afternoon?
 A. Monday B. Friday
 C. Tuesday D. Wednesday
34. The instrument shown below is a _____



- A. Windsock
 B. Windvane
 C. Raingauge
 D. Thermometer


35. When we do exercises our body produces a liquid called?
 A. Sweat B. Salt
 C. Soup D. Saliva
36. The faeces from rabbits are known as _____
 A. Droppings B. Pellets
 C. Dung D. Waste products
37. The meat from sheep is known as _____
 A. Mutton B. Beef
 C. Real D. Chicken

38. Which soil makes the longest ribbons?
 A. Clay B. Sandy
 C. Loam D. Silt
39. Which one of the following is not used for storing water?
 A. Dam B. Pot
 C. Drum D. Pipe
40. Which soil has the largest air spaces?
 A. Clay B. Loam
 C. Sand D. Silt
41. This tool is called a _____



- A. Jembe
 B. Claw hammer
 C. Axe
 D. Forked Jembe

42. Which tool do we use to cut down a big tree?
 A. Axe B. Hack saw
 C. Panga D. Fork lift
43. Wachinga put a lump of soil inside the jar as shown. The appearance of bubbles shows that:-



- A. Soil has water B. Soil has animals
 C. Soil has air D. Soil contains circles
44. Which one is not a protective food?
 A. Bread B. Carrots
 C. Cabbages D. Spinach
45. The amount of and kind of food we eat is called?
 A. Diet B. Proteins
 C. Meat D. Food
46. Which one is not a natural source of light?
 A. Sun B. Stars
 C. Fire fly D. Lamp
47. Which one of these animals cannot fly?
 A. Butterfly B. Mosquito
 C. Bat D. Ostrich
48. How many legs will two spiders and two houseflies have altogether?
 A. 16 B. 24 C. 32 D. 28
49. We get wool from _____
 A. Cows B. Turkey
 C. Poultry D. Sheep
50. Which one of the following is not a use of water in a house?
 A. Washing utensils B. Washing food
 C. Fishing D. Drinking