

EVALUATION TEST
STANDARD FOUR TERM I - YEAR 2015

KED

SCIENCE


{4}

HOW TO USE THE ANSWER SHEET

1. Use only an ordinary pencil
2. Make sure that you have written on the Answer Sheet
(i) YOUR NAME (ii) NAME OF YOUR SCHOOL

Time:- 1hr 40mins

1. The diagram shows a human tooth. How many are found in an adult?



- A. 0 B. 12
C. 32 D. 8
2. The falling off of teeth in children is called
A. milkteeth B. teething
C. shedding D. grinding
3. Trees bend when the weather is:
A. Windy B. Calm
C. Cloudy D. Sunny
4. Weather changes are recorded in a table called:
A. Time table B. Symbols
C. Picture D. Weather chart
5. Barley and grapes are used in making:
A. Bread and cakes
B. Beer and wine
C. Medicine
D. Spices
6. Which of these is wrong when having meals?
A. Not talking when chewing food
B. Eating in a hurry
C. Not putting a lot of food in the mouth
D. Chewing food before swallowing

7. These plants can give us medicines. Which one cannot?

A. Coriander B. Castor plant
C. Aloe vera D. Neem tree

8. The way we behave when having meals is called

A. Meal manners
B. Chewing
C. Table manners
D. Housing

9. We should wash our _____ before and after eating

A. face B. teeth
C. legs D. hands

10. We wear heavy clothes when the weather is

A. cold B. warm
C. hot D. calm


11. We sense touch by the _____

A. tongues B. eyes
C. skin D. ears

12. To know whether tea has sugar, we use:


A. tongue B. ears
C. eyes D. nose

13. The diagram shows that the weather is:



- A. hot B. cloudy
C. calm D. windy
14. All the following are ways of handling food hygienically. Which one is not?
A. Cleaning of utensils
B. Cleaning foods eaten raw
C. Cleaning hands after eating
D. Cleaning hands before eating
15. Separating things from water using a piece of cloth is called
A. Boiling B. Filtering
C. Evaporating D. Decanting
16. Drinking water is made safe by
A. Boiling B. Filtering
C. Separating D. Mixing
17. Which of the following statements is true?
A. Filtered water is good to drink
B. Muddy water is safe to drink
C. Filtering water makes it clean
D. Filtered water should be boiled to make it safe to drink
18. The best way of transporting large amounts of water for long distances is by using
A. Tankers
B. Animals
C. Pipes
D. Cans
19. The process of making dirty water clean using a piece of cloth is called
A. Filtering B. Decanting
C. Boiling D. Evaporation
20. One of the following is not a source of water. Which one?
A. River B. Tap
C. Well D. Dam

21. All the items listed below can be modelled. Which one cannot?
A. Letters B. Water
C. Animals D. Toys
22. The best soil for modelling is
A. Sand B. Loam
C. Clay D. Stones
23. The soil which makes the shortest ribbons is
A. Loam B. Ashes
C. Clay D. Sandy
24. The soil which feels rough and loose is
A. sandy soil B. clay soil
C. loam soil D. stony soil
25. Things made from clay are called
A. Toys B. Drawings
C. Models D. Animals
26. The picture below shows a problem related to teeth

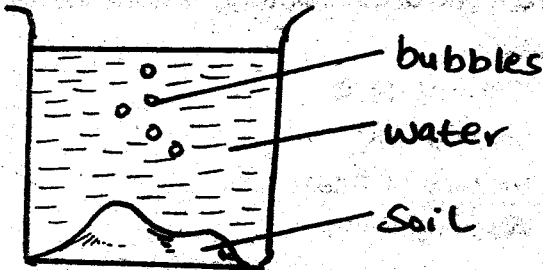


- The problem shown is known as _____
A. decay
B. bleeding gums
C. cavity
D. dental caries
27. Which one of the following foods is not good for our teeth?
A. Ice cream
B. Sugar cane
C. Milk
D. Avocados

28. Which of the following is not an effect of moving air?

- A. Blowing soil away
- B. Felling trees
- C. Blowing roofs
- D. Winnowing

29. This shows that there is _____



- A. air in water
- B. air in the soil
- C. is no air in water
- D. is no air in soil

30. Which one of the following is not a way of protecting itself in small animals?

- A. Flying off
- B. Stinging
- C. Hopping
- D. Coiling

31. Which of the following animals is harmful?

- A. Poultry
- B. Dog
- C. Cat
- D. Rat

32. Eagles and giraffes are _____ animals

- A. wild
- B. useful
- C. domestic
- D. dirty

33. AIDS stands for _____

- A. Acquired Immune Deficiency Symptoms
- B. Acquired Immune Deficiency Syndrome
- C. Acquired Immunodeficiency signs
- D. A Got from somebody else

34. From the abbreviation HIV letter I means _____

- A. virus attacks people
- B. the type of germ which causes the disease
- C. body's self protection from diseases is lacking
- D. lack of

35. Which one of the following is not a requirement for maintaining strong teeth?

- A. Drinking milk
- B. Chewing hard foods
- C. Eating fruits and vegetables
- D. Visiting a dentist after every six years

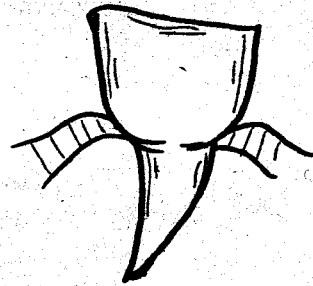
36. Which one of the following is a use of moving air?

- A. Blowing soil away
- B. Felling trees
- C. Blowing roofs
- D. Sailing boats and canoes

37. A _____ moves by crawling

- A. locust
- B. fly
- C. spider
- D. bee

38. What is the function of the tooth drawn below?



- A. Tearing
- B. Cutting
- C. Grinding
- D. Crushing

39. The following crops are grown as a source of cash except

- A. tubers
- B. sisal
- C. coffee
- D. oil crops

40. The following should be done when having meals except
- washing hands before meals
 - keeping plate close
 - coughing over the food
 - not licking fingers
41. Which one of the following is not part of the deciduous teeth?
- Molars
 - Premolars
 - Canines
 - Incisors
42. Which weed has the following characteristics?
- (i) **White flowers**
(ii) **Black seeds**
- Wandering Jew
 - Mexican marigold
 - Black Jack
 - Oxalis
43. The following happens when having meals except
- Family members come together
 - Children learn good habits
 - Mother eats in the kitchen
 - Food is shared
44. The following are ways of showing that sound travels in all directions except
- Looking at the school bell
 - Singing
 - Screaming
 - Shouting
45. Which one of the following tools can be used to dig out weeds?
- Axe
 - Rake
 - Sickle
 - Hoe
46. Which one of the following is done last during meals?
- Chewing food
 - Serving food
 - Swallowing food
 - Washing hands
47. Which one of the following weeds is eaten
- Wandering Jew
 - Pig weed
 - Oxalis
 - Black Jack
48. The following foods can be eaten raw except
- Potatoes
 - Sugarcane
 - Cassava
 - Carrot
49. Which one of the following special sounds can not be heard after a car accident?
- Screaming
 - Hooting
 - Shedding tears
 - Ambulance siren
50. The following activities are done in our homes except
- washing utensils
 - washing some foods before cooking
 - washing body before every meal
 - cleaning table after meals