

# REFLECTOR SERIES

008


Year 2013

TIME: 1HR 40MIN

- Mrs. Kamau was cooking meat in her room. Mr. Onyango her neighbour sensed, what she was cooking by \_\_\_\_\_
- A. seeing                      B. feeling  
C. smelling                    D. hearing
2. Animals kept at home are called domestic animals or \_\_\_\_\_
- A. wild    B. home    C. tamed    D. pets
3. To keep away diseases, we should always \_\_\_\_\_


- A. wash hands before visiting toilets  
B. wash hands after visiting toilets  
C. eat alot of food  
D. wash our body once a week

4. We should always place the plate of food near us as we eat so that \_\_\_\_\_
- A. to finish the food quickly  
B. for food-not to be taken away  
C. to get satisfied quickly  
D. the food does not spill
5. Study the diagram below. The plant shown below grows in \_\_\_\_\_ area.



- A. dry  
B. rainy  
C. cold  
D. wet

- The following are uses of water **except**.
- A. cooking                      B. digging  
C. washing                      D. irrigation
- Study the diagram below



- The tool shown above is used to \_\_\_\_\_
- A. cut wood  
B. lift stones  
C. drive and remove nails in wood  
D. crush stones

- We prepare land for planting during \_\_\_\_\_ season.
- A. wet    B. cold    C. rainy    D. dry
- Study the drawing below. The face shows that the child is \_\_\_\_\_

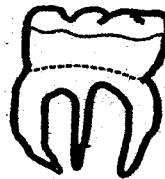


- A. excited  
B. happy  
C. surprised  
D. sad

10. Which of the following is **not** a requirement for good health.

- A. sleeping under mosquito  
B. rest under a shade  
C. playing in the rain  
D. medical care

11. Study the diagram below. The drawing shows which tooth.



- A. Premolar  
B. Molar  
C. Incisor  
D. Canine

12. Which of the following type of teeth is **correctly matched** with its function.

- A. Premolar - crushing  
B. Canine - cutting  
C. Incisor - tearing  
D. Molar - biting

13. A pupil came across a weed with the following characteristics.

- (i) The stem grows along the ground  
(ii) It produces purple flowers  
(iii) The leaves are green and purple
- The weed was likely to be \_\_\_\_\_

- A. sodom apple                      B. pig weed  
C. wandering jew                    D. black jack

14. The following are tuber crops **except**:-
- A. Potatoes                      B. Arrow roots  
C. Sweet potatoes                  D. Groundnuts

15. The **last** characteristics in all animals is that they all \_\_\_\_\_

- A. grow                                  B. die  
C. eat                                      D. remove waste

16. Study the following drawing







- The diagram above shows an animal that move by \_\_\_\_\_

- A. swimming                      B. Gliding  
C. Crawling                        D. Slithering

17. A millipede recoils when it senses danger. This characteristic is \_\_\_\_\_

- A. reacting to changes              B. reproduction  
C. growing                              D. dying

18. Falling off of milk is referred to as \_\_\_\_\_  
 A. deciduous                      B. growing  
 C. teething                        D. shedding
19. How many temporary teeth are found in one jaw.  
 A. 20            B. 12            C. 10            D. 32
20. Humus is also referred to as \_\_\_\_\_  
 A. inorganic matter            B. organic matter  
 C. living organisms            D. mineral particles
21. Which among the following small animals is not found in the soil.  
 A. Grasshopper                      B. Ants  
 C. Termites                         D. Earthworm
22. Which of the following is not the best way of controlling weeds.  
 A. Mulching                         B. Digging out  
 C. Slashing                         D. Uprooting
23. Which of the following is not a use of light in daily life.  
 A. Taking photographs  
 B. Airing the house  
 C. See clearing  
 D. Photosynthesis
24. Which one of the following is a recreational use of water.  
 A. Transport                         B. Fishing  
 C. Irrigation                         D. Swimming
25. Kamau a Std 4 boy wanted to cut nappier grass. He used \_\_\_\_\_  
 A. saw                                 B. jembe  
 C. knife                                D. panga
26. The following are ways of maintaining simple tools except.  
 A. oiling and greasing  
 B. sharpening  
 C. Cleaning  
 D. Keeping them outside
27. The second type of teeth to grow is \_\_\_\_\_  
 A. canine                             B. incisor  
 C. molars                             D. pre-molar
28. We get oil from \_\_\_\_\_ plants.  
 A. coffee                              B. cocoa  
 C. yam                                 D. sunflower
29. Which among the following is not a cereal crop.  
 A. Maize    B. Millet            C. Beans    D. Rice
30. Chickens, turkeys, ducks, pigeons and geese are all known as \_\_\_\_\_  
 A. layers                              B. poultry  
 C. broilers                            D. livestock
31. Which one of the following is not a source of heat.  
 A. Fire                                 B. Sun  
 C. Electricity                        D. Moon
32. A person who treat teeth is called \_\_\_\_\_  
 A. doctor                              B. dentist  
 C. nurse                               D. surgeon
33. Which of these tools cannot be sharpened.  
 A. Jembe                              B. Panga  
 C. Hammer                         D. Knife
34. Which soil has \_\_\_\_\_  
 A. Sand    B. Clay
35. Which of the folk out teeth?  
 A. Biscuits  
 C. Fruits
36. The other name of bleeding gums.  
 A. Dental carries                B. Gingivities  
 C. Cavities                         D. Bad smell
37. Clouds which look like bundles of cotton wool with a flat bottom are called \_\_\_\_\_  
 A. Cumulus clouds                B. Nimbus clouds  
 C. Cirrus clouds                    D. Stratus clouds
38. Which of the following is not use of water in the farm?  
 A. Irrigation                         B. Keeping fish  
 C. Watering animals              D. Cooking
39. Which of the following is not used for transport in water.  
 A. Train    B. Boat            C. Ship    D. Ferry
40. Moving air is used for \_\_\_\_\_  
 A. Weeding                         B. Winnowing  
 C. Ploughing                        D. Cutting
41. A chameleon protects itself by \_\_\_\_\_  
 A. jumping                         B. crawling  
 C. flying                             D. changing its colours
42. A plate will most likely float on water because of its.  
 A. weight    B. size            C. shape    D. colour
43. Which of the following is used to control weeds.  
 A. fungicide                         B. pesticide  
 C. herbicide                         D. insecticide
44. Which of the following shapes represents new moon.  
 A.                       B.   
 C.                       D. 
45. The natural home of living things is called \_\_\_\_\_  
 A. forest                                B. cave  
 C. home                                 D. habitat
46. A doctor uses \_\_\_\_\_ to measure temperature.  
 A. rainauge                         B. barometer  
 C. thermometer                    D. windvane
47. Which of the following animals can sting.  
 A. Wasp                                B. Frog  
 C. Dog                                 D. Housefly
48. Before swallowing food we should first \_\_\_\_\_  
 A. cook    B. roast    C. wash    D. chew
49. Which of the following animals can fly.  
 A. Bat    B. Rabbit    C. Cat    D. Moth
50. Which of the following is not a way of caring for the animals.  
 A. Feeding                            B. Beating them  
 C. Watering                         D. Sheltering