

LURAMBI EAST ZONE

STANDARD FOUR END TERM II - 2015


SCIENCE

Time:-1Hr 40Mins

HOW TO USE THE ANSWER SHEET

1. Use only an ordinary pencil
2. Make sure that you have written on the Answer Sheet
 - (i) YOUR NAME
 - (ii) NAME OF YOUR SCHOOL

1. Which of the following is NOT a problem related to teeth ?
 - A. Tooth cavity
 - B. Dental floss
 - C. Tooth decay
 - D. Bleeding gum
2. Which of the following activities does not make our hands dirty ?
 - A. Rinsing our hands
 - B. Visiting the toilet
 - C. Blowing our nose
 - D. Collecting rubbish
3. Which of the following groups consists of a balanced diet ?
 - A. eggs, milk, spinach
 - B. Bread, chapati, ugali
 - C. Rice, oranges, meat
 - D. Liver, chicken meat, milk
4. Which of the following materials is a floater ?
 - A. A small stone
 - B. feather
 - C. a nail
 - D. soil
5. Which of the following teeth is used for biting and cutting ?




6. The following are sources of heat. Which one is NOT ?

A. Electricity	B. Fire
C. Sun	D. Torch

7. In HIV/AIDS, which word stands for a group of signs

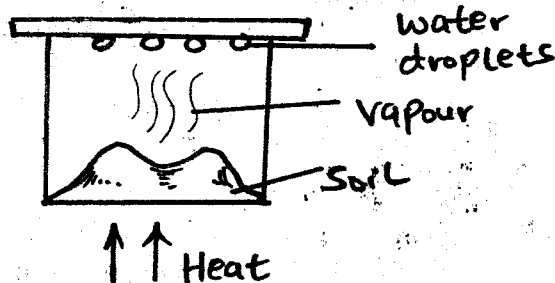
A. Syndrome	B. Deficiency
C. Acquired	D. Immune
8. Which of the following tools can be used to control weeds ?
 - A. Wheel barrow
 - B. Axe
 - C. Slasher
 - D. Hammer
9. Study the diagram below carefully and answer the question which follows .



Which type of moon is shown above

- A. new moon
 - B. Gibbous moon
 - C. Crescent moon
 - D. Full moon
10. Which of the following is a use of water in the farm?
 - A. Cleaning tools after use
 - B. Making fountains
 - C. Cooling machines
 - D. Cleaning tools before use
 11. The following are importance of light EXCEPT ?
 - A. For safety
 - B. Discourage pests
 - C. Ironing clothes
 - D. Enables us to read comfortably

12. Which of the following factors does not affect floating and sinking ?
 A. Weight B. Size
 C. Shape D. Type of material
13. Which of the following units is used to measure temperature ?
 A. Kilograms
 B. Thermometer
 C. Centimetres
 D. Degrees Celsius
14. Which of the following is a characteristic of cumulus clouds
 A. Dark grey in colour
 B. their presence indicates fine weather
 C. irregular shape
 D. look like mountains
15. Which type of teeth has the following characteristics
 i) Four in number
 ii) have one root
 iii) sharp and pointed
 A. Premolars B. Molars
 C. Canines D. Incisors
16. Which of the following is a useful animal.
 A. Termite B. Fish
 C. Tick D. Flea
17. Which of the following is NOT a special sound ?
 A. Ringing of a bell
 B. Screaming
 C. Fire engine siren
 D. Talking
18. Study the diagram below and answer the question which follows

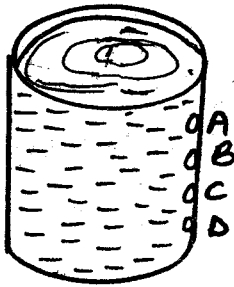


What was likely to be investigated?

- A. Soil contains water
 B. Soil contains humus
 C. Soil contains air
 D. Soil contains living things

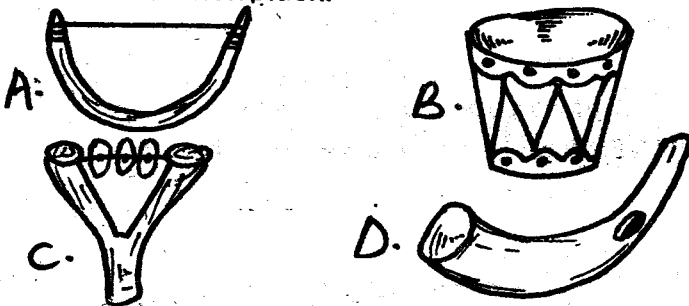
19. Which of the following is a good use of moving air ?
 A. Sailing boats
 B. Felling trees
 C. Blowing off roofs
 D. Blowing away the soil
20. HIV/AIDS cannot be spread through ?
 A. Kissing
 B. Engaging in sexual intercourse
 C. Sleeping with an infected person
 D. Sharing cutting objects
21. Which of the following food groups consists of body building foods only ?
 A. Carrots, tomatoes, yams
 B. Groundnuts, millet, green bananas
 C. Ripe bananas, oranges, beans
 D. Beef, fish, peas
22. Which of the following is NOT a way of transporting water?
 A. Dams B. Animals
 C. Pipes D. Tanks
23. Which of the following animals provides us with mutton ?
 A. Cows B. Sheep
 C. Hens D. Rabbits
24. Which of the following activities will make the water safe for drinking ?
 A. Bathing in rivers
 B. Urinating in rivers and streams
 C. Throwing dirty things in water sources
 D. Filtering and boiling
25. People who cannot see at all are known as
 A. blind B. deaf
 C. dumb D. crippled
26. Which of the following teeth is not part of deciduous set of teeth ?
 A. Pre-molars B. Incisors
 C. Molars D. Canines
27. Which of the following is not a basic food group ?
 A. Water and minerals
 B. Body building foods
 C. Energy giving foods
 D. Protective foods

28. Study the diagram below carefully



At which point is the pressure highest?

29. Which of the following should be practice when cleaning a toilet.
- A. Closing the toilet window when sweeping
 - B. Use a toilet brush to scrub the bowl
 - C. Clean the toilet bowl using a rug
 - D. Wash your hands with clean water only
30. Which of the following instruments produces sound when pluck.



31. Which of the following is NOT a way of caring for the animals?
- A. Housing
 - B. Watering
 - C. Feeding
 - D. Overworking
32. Which of the following materials cannot be used to make a wheel?
- A. Leaves
 - B. A wire
 - C. Maize cob
 - D. old slippers

Study the chart below carefully

	Morning	Afternoon
Mon		
Tue		
Wed		
Thur		
Fri		

33. Which were the best days to have games in the school?
- A. Monday and Friday
 - B. Thursday and Tuesday
 - C. Wednesday and Friday
 - D. Monday and Thursday
34. Which was the best day to wash clothes?
- A. Friday
 - B. Wednesday
 - C. Monday
 - D. Tuesday
35. Which of the following groups consists of legumes only?
- A. Beans, peas, groundnuts
 - B. Maize, wheat, millet
 - C. Cassava, green grams, sorghum
 - D. Sweet potatoes, oranges, kales
36. Standard four pupils were asked to name the components of the soil and they gave the following answers. Who gave the wrong answer?
- A. Jane - Living organisms
 - B. Peter - Water
 - C. Mary - Air
 - D. Hallon - inorganic particles
37. A caterpillar moves by
- A. flying
 - B. crawling
 - C. walking
 - D. Hopping
38. Which of the following soil is used to make long ribbons
- A. Sand soil
 - B. Loam soil
 - C. Sand and clay soil
 - D. Clay soil
39. The removal of weeds from the farm is known as
- A. Irrigation
 - B. Germination
 - C. Uprooting
 - D. Weeding

40. Leaves can be classified according to the following except ?

- A. Size
- B. Function
- C. Colour
- D. Shape

41. Which of the following is NOT a sense organ?

- A. Fingers
- B. Tongue
- C. Nose
- D. Eyes

42. Which of the following clothes is likely to be worn on a hot day ?

- A. Jacket
- B. Neck scarf
- C. T-Shirt
- D. Heavy sweater

43. The following animals are kept at home. Which of them does not provide us with milk ?

- A. Cow
- B. Goat
- C. Camel
- D. Ox

44. Which of the following is a way of maintaining strong teeth ?

- A. Using a proper toothbrush
- B. Eating sweets and cakes
- C. Using a toothpick to remove food particles between teeth
- D. Taking food rich in calcium

45. Which of the following foods is the odd one out ?

- A. Pineapple
- B. Cabbage
- C. Coffee
- D. Pumpkin

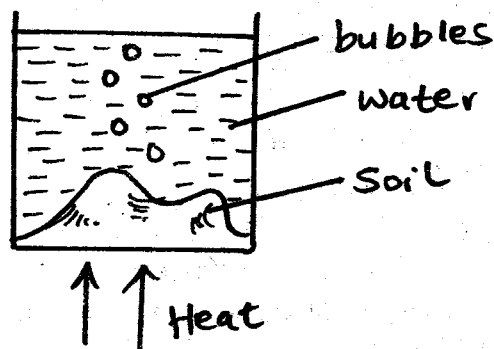
46. Which of the following animals protects itself by flying off ?

- A. Cockroach
- B. Housefly
- C. Spider
- D. Wasp

47. Which is the best method of storing water in the farm ?

- A. Pots
- B. Buckets
- C. Cans
- D. Dams

48. The experiment below was set up to investigate

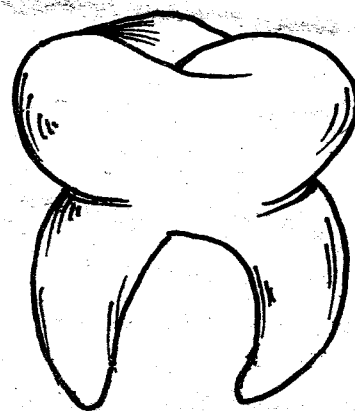


- A. soil contains air
- B. Water contains soil
- C. Air contains water
- D. Soil contains humus

49. We should do all the following when taking meals EXCEPT ?

- A. Chewing food with mouth closed
- B. Not talking with food in the mouth
- C. Chewing food properly before swallowing
- D. Eating large quantities of food at a time

50. Study the diagram below



The tooth above is used for

- A. Tearing food
- B. Gripping food
- C. Chewing and grinding
- D. Tearing and gripping