



JASMO SERIES

STD. 4 TERM 1 - 2014

SCIENCE

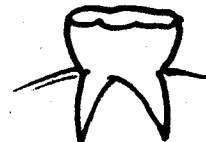
TIME: 1HR 40 MINS

- The teeth at the front of the mouth are called ____
A. Canines B. Incisors
C. Molars D. Premolars
- Which type of the teeth is between the incisors and premolar?
A. molar B. premolars
C. canines D. incisors
- Why do animals move?
A. Look for food B. To fight
C. To hide D. To steal
- The main source of light on earth is ____
A. moon B. electricty
C. sun D. lamps
- Which virus causes AIDS?
A. Germs B. Bacteria
C. Immunity D. HIV
- Cash crops are ____
A. not edible B. edible
C. sold D. food crops
- The cloud which gives us rain is
A. cirrus B. cumulus
C. nimbus D. stratus
- Which phase of the moon is drawn?



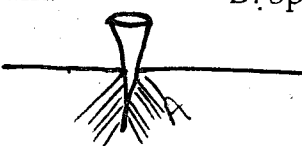
- Gibbous B. Fullmoon
C. Crescent D. New moon
- Which plant is a weed?
A. onion B. sodom apple
C. carrot D. potatoes
- Which of the following plant is a fruit?
A. Avocado B. millet
C. onions D. kales
- What does letter "V" stands for in HIV?
A Human
B. Immuno deficiency
C. Immunity
D. Virus
- Cabbages is an example of ____
A. Cereals B. Vegetables
C. Fruits C. Tubers
- Which of the following crops is used to process oil?
A. Coffee B. Peas
C. Sunflower C. Maize

- The sun rises in the ____
A. East B. South
C. West D. North
- We use water for ____ at home
A. Transport B. Selling
C. Drinking D. Playing
- Cassava, yams and sweet potatoes are examples of ____
A. Fruit
B. Vegetables
C. Tuber
D. Cereals
- Sisal plants, coffee plant, cotton plants and tea plants are examples of ____
A. Cash crops
B. Food crops
C. Stem crops
D. Edible crops
- Name two things that can be seen in the sky at night ____
- Which of the following is not a type of teeth?
A. Permanent teeth B. Incisors
C. Canines D. Premolars

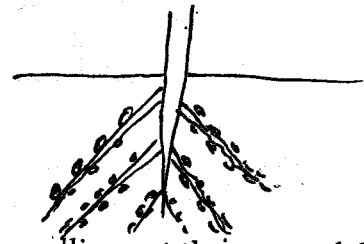


- The type of teeth shown in the diagram is a ____
A. Canine B. Molar
C. Incisor D. Premolars
- Strong teeth is built by foods rich in ____
A. calcium B. fats
C. proteins D. sugar
- The young one of a dog is ____
A. kitten
B. puppy
C. cub
D. calf
- How many teeth should an adult have?
A. 8 B. 32 C. 24 D. 16
- An example of a cereal rop is ____
A. bananas B. rice
C. onion D. melon
- A doctor who checks our teth is known as
A. nurse B. physician
C. dentist D. optician



26. Diseases are caused by _____
 A. sickness B. malaria
 C. water D. germs
27. An adult has _____ incisors
 A. 4 B. 6 C. 8 D. 12
28. We get _____ and _____ from the sun.
 A. water, light
 B. heat, food
 C. light, heat
 D. water, food
29. All animals eat food in order to live, we therefore say all animals _____
 A. chew
 B. feed
 C. swallow
 D. grind
30. Which of the following foods give us a lot of energy to work?
 A. chicken
 B. fish
 C. beans
 D. rice
31. Which of the following is not an oil crop?
 A. coconut B. corn
 C. beans D. rice
32. Which of the following is not a characteristic of animals?
 A. movement B. growing
 C. feeding D. have roots
33. At what time is the sun overhead?
 A. 12 p.m. B. 6 p.m.
 C. 9 a.m. D. 3 p.m.
34. 
 What is the name of the part labelled A in the tooth drawn?
 A. enamel B. gums
 C. roots D. crown
35. Which of the following plants is grown on a farm?
 A. oxalis B. blackjack
 C. rice D. sodomapple
36. Which of the following is NOT a problem related to the teeth?
 A. bad smell B. brushing regularly
 C. cavity D. tooth decay
37. Which disease has no cure?
 A. Typhoid B. Malaria
 C. AIDS D. Cholera
38. Which of the following is not a legume?
 A. Beans B. Greengrams
 C. Peas D. Millet

39.



The swellings at the roots of this leguminous plant are called _____

- A. seeds B. nodules
 C. swellings D. roots
40. Which type of food protects our bodies from disease?
 A. proteins
 B. carbohydrates
 C. vitamins
 D. maize
41. The crop drawn is an example of _____
 A. cereal B. fruit
 C. tuber D. beverage
42. A caterpillar moves by _____
 A. walking B. crawling
 C. leaping D. hopping
43. Which characteristics of animals give us manure?
 A. movement B. dying
 C. growing D. removing waste
44. Which of the following items will float on water?
 A. stone B. paper
 C. nail D. coin
45. A hole in the tooth is called _____
 A. cavity
 B. dental carries
 C. bad breath
 D. tooth decay
46. We store water at home using _____
 A. jerricans B. tankers
 C. taps D. calabash
47. Which of the following foods is good for strong teeth?
 A. biscuits B. cakes
 C. milk D. bread
48. _____ soil is used for modelling.
 A. loam B. sand
 C. clay D. red
49. We use a toothbrush to clean our _____
 A. nose B. hair
 C. teeth D. legs
50. Plants use sunlight to _____
 A. develop roots
 B. make food
 C. absorb water
 D. develop leaves



TASMO SERIES

STANDARD 4 - YEAR 2014

MARKING SCHEME

ENGLISH	KISWAHILI	SCIENCE	MATHS	SOCIAL STUDIES
1 A 26 C	1 B 26 A	1 26 D	1 B 26 B	1 C 31A 61B
2 A 27 D	2 B 27 D	2 27	2 C 27 C	2A 32A 62C
3 A 28 D	3 C 28 A	3 A 28 C	3 A 28 C	3 D 33D 63B
4 C 29 A	4 B 29 D	4 C 29 B	4 C 29 A	4 B 34A 64D
5 B 30 D	5 C 30 B	5 D 30 C	5 C 30 A	5 C 35B 65A
6 A 31 B	6 A 31 C	6 C 31 D	6 C 31 B	6 A 36C 66A
7 B 32 C	7 B 32 C	7 32 D	7 A 32 D	7A 37D 67-
8 A 33 A	8 A 33 B	8 33 A	8 A 33 A	8 B 38A 68B
9 D 34 D	9 D 34 C	9 B 34 C	9 C 34	9 A 39B 69C
10 B 35 D	10 C 35 B	10 A 35 C	10 B 35 A	10 C 40A 70B
11 B 36 B	11 C 36 A	11 D 36 B	11 36 B	11 A 41D 71A
12 A 37 A	12 B 37 D	12 B 37 C	12 B 37 D	12 B 42A 72D
13 C 38 D	13 C 38 C	13 C 38 B	13 A 38 D	13 B 43D 73B
14 B 39 B	14 B 39 D	14 39 B	14 C 39 D	14 B 44C 74D
15 C 40 A	15 40 B	15 C 40 C	15 A 40 C	15 C 45C 75A
16 A 41 A	16 D 41 D	16 C 41 C	16 D 41 A	16 C 46B 76C
17 D 42 C	17 D 42 C	17 A 42 B	17 C 42 D	17 D 47D 77B
18 C 43 -	18 B 43 D	18 43 D	18 B 43 B	18 D 48A 78C
19 B 44	19 A 44 A	19 A 44 B	19 C 44 C	19 D 49D 79C
20 A 45	20 D 45 B	20 45 A	20 B 45 A	20 D 50B 80B
21 C 46	21 B 46 C	21 A 46 A	21 A 46 C	21 C 51A 81A
22 B 47	22 A 47 B	22 B 47 C	22 C 47 A	22 A 52B 82-
23 A 48	23 C 48 A	23 B 48 C	23 D 48 B	23 A 53C 83B
24 C 49	24 A 49 A	24 B 49 C	24 B 49 D	24- 54D 84B
25 C 50	25 A 50 D	25 C 50 B	25 D 50 C	25 A 55A 85C
				26 A 56B 86C
				27 C 57B 87D
				28 B 58B 88C
				29 B 59B 89B
				30 D 60A 90C

COMPOSITION/INSHAMARKING SCHEME

MARKING SCHEME CRITERION

The composition will be assessed according to the following guidelines:-

- The maximum mark will be 40 and the minimum mark 01

- Does the script show that the candidate can communicate accurately, fluently and imaginatively in English/Kiswahili.

Accuracy (16 Marks)

- A) Correct tense and agreement of verbs
C) Correct spelling (4 marks)

- B) Accurate use of vocabulary (4 marks)
D) Correct punctuation (4 marks)

Fluency (16 marks)

- A) Correct flow of the story (4 marks)
C) Correct spelling (4 marks)

- B) Well sequenced sentences and connected paragraphs (4 marks)
D) Ideas developed in logic sequence (4 marks)

Imagination (8 marks)

- A) Unusual but appropriate use of words (4 marks)

- B) Variety of structure

