
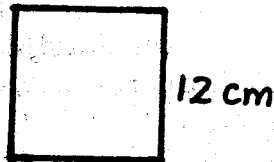


30. There are 30 eggs in a tray. How many eggs are there in 9 trays
 A. 39 eggs
 B. 180 eggs
 C. 9 eggs
 D. 270 eggs
31. Work out $635 \div 5$
 A. 127 B. 117 C. 116 D. 126
32. What is the product of 54 and 3
 A. 54 B. 163 C. 162 D. 62
33. What is the time shown on the clockface drawn



- A. Twenty minutes to one
 B. Twenty minutes past one
 C. Five minutes past eight
 D. One o'clock
34. Find the area of this square




- A. 24cm^2 B. 12cm^2 C. 144cm^2 D. 144cm^2

35.
$$\begin{array}{r} \text{M} \quad \text{Cm} \\ 8 \quad 75 \\ + 5 \quad 55 \\ \hline \end{array}$$

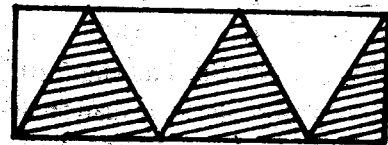
- A. 15m 30cm B. 14m 30cm
 C. 13m 130cm D. 14m 130cm

36.
$$\begin{array}{r} \text{Hrs} \quad \text{Min} \\ 6 \quad 30 \\ + 2 \quad 10 \\ \hline \end{array}$$

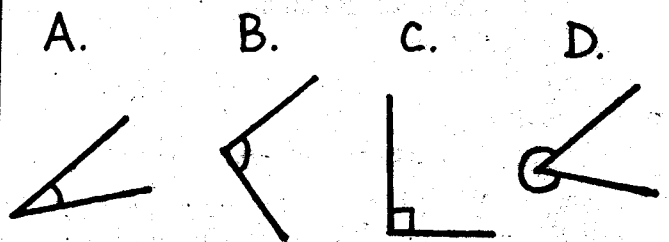
- A. 8hrs 0min 50sec
 B. 8hrs 60min 50sec
 C. 9hrs 0min 50sec
 D. 9hrs 60min 50sec
37. Which are the next two numbers in the series 4, 8, 16, 32, _____, _____?
 A. 64, 128 B. 48, 112
 C. 33, 99 D. 12, 144
38. How many days were there in the months of January, February and March, 1992?
 A. 62 B. 91 C. 90 D. 365
39. How many triangles are in the figure?




- A. 4 B. 6 C. 5 D. 8
40. How many five shillings coins are there in a forty shilling coin
 A. 0 B. 20 C. 8 D. 40
41. Miriam bought a cow at shs 2000 she later sold the cow at shs. 3000. What was her profit?
 A. Shs. 250 B. Shs. 3000
 C. Shs. 1000 D. Shs. 2000
42. I think of a number multiply it by 6 I got 18. Which number am I?
 A. 2 B. 6 C. 3 D. 9
43. Work out $10.87 - 9.04 =$
 A. 1.83 B. 9.04 C. 10.83 D. 18.3
44. Aoko bought 2kg @shs. 50.00 per kg, a packet of tea leaves @43.00 and a litre of milk @shs. 20.00. How much change did she get if she gave a shs. 200.00 note
 A. Shs. 38.00 B. Shs. 37.00
 C. Shs. 200 D. Shs. 163
45. How many hours and minutes are there in 230 minutes?
 A. 2 hrs 45 min B. 3hrs 50min
 C. 4hrs 30 min D. 2hrs 30min
46. What fraction is shaded?



- A. $\frac{2}{6}$ B. $\frac{1}{2}$ C. $\frac{3}{2}$ D. $\frac{4}{6}$
47. Which of these figures is an acute angle?



48. How many cubes make the cuboid below?



- A. 21 B. 18 C. 8 D. 30
49. _____ + 30 = 100
 A. 70 B. 60 C. 40 D. 30
50. How many days are there in a week?
 A. 5days B. 10 days
 C. 7 days D. 30 days