

STEGA SERIES



STD 1 TERM 1 2014



MATHEMATICS



NAME _____

DATE _____

Count and write

1.  +  = _____

2.  +  = _____

3.  +  = _____

Add

4. $7 + 3 =$ _____

5. $9 + 0 =$ _____

6. $7 + 5 =$ _____

7. $3 + 9 =$ _____

8. $11 + 4 =$ _____

9. $\begin{array}{r} 6 \\ + 3 \\ \hline \end{array}$

10. $\begin{array}{r} 8 \\ + 8 \\ \hline \end{array}$

11. $\begin{array}{r} 9 \\ + 7 \\ \hline \end{array}$

12. $\begin{array}{r} 0 \\ + 10 \\ \hline \end{array}$

Take away

13. $16 - 9 =$ _____

14. $12 - 3 =$ _____

15. $9 - 9 =$ _____

16. $11 - 3 =$ _____

17. $4 - 4 =$ _____

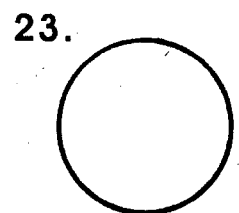
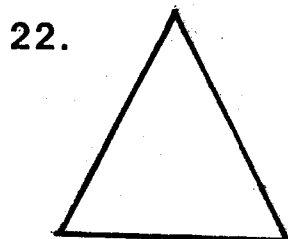
18. $\begin{array}{r} 9 \\ - 6 \\ \hline \end{array}$

19. $\begin{array}{r} 80 \\ - 50 \\ \hline \end{array}$

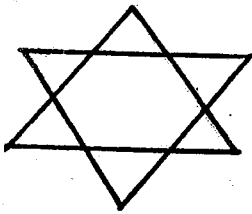
20. $\begin{array}{r} 7 \\ - 7 \\ \hline \end{array}$

21. $\begin{array}{r} 40 \\ - 20 \\ \hline \end{array}$


Name the shapes



24.



25.



26.



27.



(zigzag, rectangle, star, oval,
triangle, circle)

28. $7 + 3 + 4 =$ _____

29. $6 + 3 + 1 =$ _____

30. $2 + 0 + 1 =$ _____

31. 6

$+ 4$

32. 9

$+ 0$

33. One week has _____ days.

34. 2 boys have _____ fingers.

35. 1 cat has _____ eyes.

Work out

36. $3 + \square = 9$

37. $4 + \square = 10$

38. $2 + \square = 2$

39. 3

$+ \square$

$+ \square$

40. 7

$+ \square$

$+ \square$

41. 4

$+ \square$

42. 9

$+ \square$

Write in words

43. 9 _____

44. 8 _____

45. 7 _____

46. 10 _____

47. 2 _____

48. 4 _____

49. 20

$+ 13$

50. 33

$+ 33$

