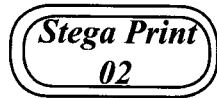


GLOWING SUPREME ASSESSMENT TEST

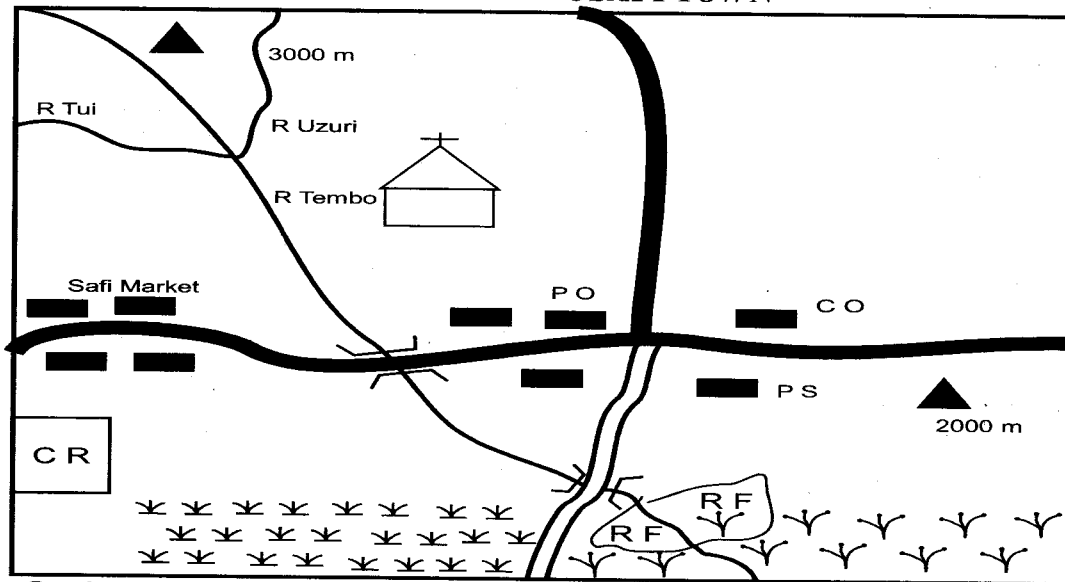
STANDARD FIVE 2018

SOCIAL STUDIES

Time : 2 hour 15 min



USAFI TOWN



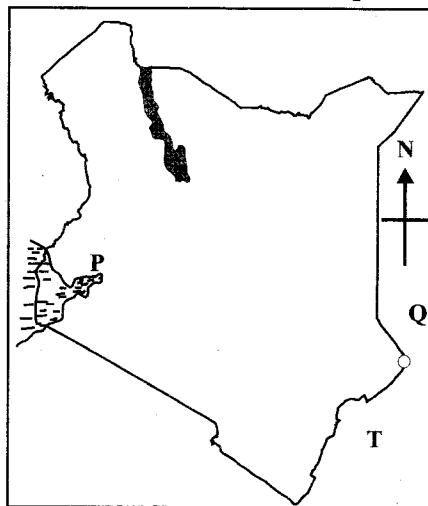
Scale 0 1 2 3 4 5 6 7 8 9km

KEY		Shrubs		PO	Posts offices		CO - County officer
		Cattle ranch			Grass		CD Cattle dip
		Rice farm			Tarmac road		Murram road
		Church			PS Police station		

- The main administrator of Usafi Area is the
 - chief
 - governor
 - assistant county commissioner
 - county commission
- Which one of the following is not an economic activity of Usafi area?
 - Herding
 - Crop-farming
 - Mining
 - Trasnport
- The religion of Usafi residents is
 - Islam
 - Christian
 - Hindu
 - Pagan
- The climate of the South Western part of Usafi area is
 - hot and dry
 - hot and wet
 - cool and wet
 - cool and dry
- A person caught stealing at Usafi town should be taken to
 - market
 - church
 - his home
 - police station
- The method of irrigation likely to be used in the rice scheme at Usafi area is
 - canal
 - furrow
 - drip
 - overheed
- How many tributaries does river Usafi have?
 - 4
 - 2
 - 5
 - 1
- The average weather condition of a place for a period of time of about 30 - 35 years is called
 - weather
 - climate
 - rainfall
 - meteorology
- The largest and the longest river in Kenya is
 - Victoria
 - Athi
 - Nzoia
 - Tana
- The total area of Kenya's land mass is approximately
 - 500000 km²
 - 492000 km²
 - 583000km²
 - 30300000 km²
- The main element of a map is the
 - key
 - direction
 - scale
 - frame
- Which of the following is not a major type of soil in Kenya?
 - Loam soil
 - Clay soil
 - Sandy soil
 - Rocky soil
- Which one of the following community is correctly matched with its language group?
 - Luo - Bantus
 - Rendille - Cushites
 - Abaluhya - Nilotes
 - Taita - Cushites
- Ameru traditional government was headed by a
 - king
 - emperor

- C. hereditary chief D. council of elders
15. The climate in the semi-desert regions of Kenya can be described as
A. cool and dry B. hot and dry
C. hot and wet D. cool and wet
16. The following are causes of soil erosion. Which one is NOT?
A. Deforestation B. Over grazing
C. Terracing D. Overstocking
17. The largest language group in Kenya is
A. Semites B. Cushites
C. Bantu D. Nilotes
18. The original homeland of the Bantus was
A. Horn of Africa B. Southern Arabia
C. Congo Basin D. Nile valley
19. Three of the following towns in Kenya are crossed by equator EXCEPT
A. Maseno B. Hagadera
C. Kisumu D. Solai
20. Through which ways did people interact most in the past?
A. Through seminars
B. During trade
C. During wars
D. During initiation ceremonies
21. Which of the following is not a cultural artefact that was used in the past?
A. Shield B. Laptops
C. Spears D. Necklaces

Use the map below to answer questions 22-24.



22. The physical feature marked T to the South East of Kenya is
A. Lake rift valley B. Indian ocean
C. Rift valley D. Lake Turkana
23. The line of longitude marked Q is
A. 42°N B. 34° E
C. 42° E D. 42° W
24. The physical feature marked P is found in _____ county.
A. Nairobi B. Kisumu
C. Garissa D. Mombasa
25. The National language of Kenya is

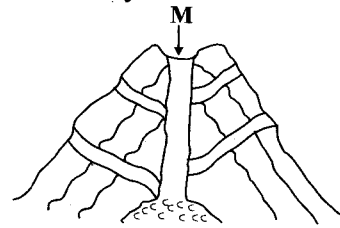
- A. Kikuyu B. English
C. Kiswahili D. Luo
26. Which of the following countries borders Kenya to the South?
A. Tanzania B. Uganda
C. Ethiopia D. Somali
27. Kenya lies between longitudes
A. 5° N and 4½° S B. 34° E and 42° S
C. 34° E and 42° E D. 4½° N and 5° S
28. The largest Island on the Kenyan Lake Victoria is
A. Mageta Island B. Migingo Island
C. Mfangano Island D. Rusinga Island
29. Below is a description of a type of soil
(i) It has large particles
(ii) It allows water to pass through
(iii) It is used for construction
The soil described above is
A. loam soil B. alluvial soil
C. clay soil D. sandy soil
30. The main vegetation on slopes of Mt Kenya and Aberdare ranges is
A. mangrove B. scrub
C. forest D. grassland
31. Which type of vegetation are acacia and baobab MAINLY found?
A. Mountain vegetation
B. Swamp vegetation
C. Savanna vegetation
D. Mangrove vegetation
32. The road sign below means



- A. drive with caution B. bumps ahead
C. no parking D. no throughway
33. To which language group do the Arabs belong?
A. Cushites B. Nilotes
C. Semites D. Bantu
34. The steep side of the Rift valley are known as
A. ranges B. escarpments
C. fault lines D. valleys
35. The Bantus who settled in Shungwaya were forced to move out by the
A. Rendille B. Ameru
C. Pokomo D. Galla
36. Law and order in the country is maintained by
A. police
B. county governor
C. women representative
D. member of parliament
37. The main cause of road accident in Kenya is
A. Lack of safety belt
B. Poor roads
C. Failure to observe traffic rules
D. Overloading
38. An area of land that is fairly high and flat is

- called
- A. valley B. mountains
C. plain D. plateau
39. The following will not promote harmony in the family EXCEPT
- A. forgiveness B. discrimination
C. love D. tolerance
40. In the past, medicine men treated their patients with
- A. herbal medicines B. modern medicines
C. prayers D. injections
41. Which one of the following is a softwood tree?
- A. Mvule B. Meru oak
C. Cedar D. Ebony
42. The official counting of people in Kenya is carried out after every _____ years.
- A. two B. five
C. twenty D. ten
43. The most wide spread mode of transport in Kenya is
- A. railways B. water transport
C. road transport D. air transport
44. Most mountains on the floor of the Rift valley are
- A. block mountains B. hills
C. inselbergs D. volcanic mountains
45. Which county of Kenya is the smallest?
- A. Nairobi B. Mombasa
C. Marsabit D. Turkana
46. Nyika is a Kiswahili word meaning
- A. dry land B. a flat land
C. dusty land D. productive land
47. Which lake in Kenya is famous for hot springs?
- A. Lake Elementaita B. Lake Jipe
C. Lake Baringo D. Lake Bogoria
48. A group of people with the same forefathers is known as
- A. family B. clan
C. age-group D. age set
49. The _____ came to Kenya to help in the building of Kenya Uganda railway.
- A. Africans B. Asians
C. Americans D. Europeans
50. Most mountains in Kenya have been formed due to _____ process.
- A. inselberg B. faulting
C. folding D. volcanicity
51. The Maasai herdsmen of Kenya migrate each year due to _____
- A. bad government policies
B. search for better schools
C. attacks by wildlife
D. changes in amount of rainfall
52. Which of the following European nations colonised Kenya?
- A. Portugal B. Germany
C. Britain D. Spain

53. The most common source of fuel in the rural area is
- A. biogas B. firewood
C. electricity D. coffee husks



54. The diagram represents the formation of
- A. volcanic mountain B. rift valley
C. mountain ranges D. escarpments
55. The main economic activity among the Cushites is
- A. herding B. hunting and gathering
C. crop farming D. trading
56. The correct order of the arrival of Luo people in Kenya is
- A. Joka Omollo - Joka Owiny - Joka Jok
B. Joka Omollo - Joka Owiny
C. Joka Jok - Joka Owiny - Joka Omollo
D. Joka Owiny - Joka Omollo - Joka Jok
57. The Mijikenda consists of nine groups. Which one is not among them?
- A. Ribe, Rabai B. Agiriama, Jibana
C. Chonyi, Duruma D. Taita, Taveta
58. Kenya became fully independent on
- A, 1st June 1963
B. 12th december 1964
C. 20th October 1952
D. 12th december 1963
59. The second president of Kenya was
- A. Mwai Kibaki
B. Daniel Arap Moi
C. Jomo Kenyatta
D. Jaramogi Oginga Odinga
60. The main tourist attraction in Lake Nakuru is
- A. flamingoes B. hot springs
C. swamps D. sand beaches

C.R.E

61. Who killed Goliath?
- A. Eliab B. David
C. Jonathan D. Saul
62. When people disagree with one another it means there is a
- A. friendship B. conflict
C. peace D. love
63. The Bible is divided into _____ parts.
- A. 66 B. 27
C. 2 D. 39
64. Abraham's faith was tested by God when he was told to
- A. sacrifice his wife
B. kill the animals offered by God
C. go to Egypt
D. offer his only son as a sacrifice

65. The word of God helps us to grow
A. physically B. mentally
C. spiritually D. emotionally
66. The old covenant was made for the Jews while the new covenant was made for
A. disciples B. Romans
C. Samaritans D. All human beings
67. The first miracle of Jesus was changing water into wine at
A. Canaan B. Nazareth
C. Jerusalem D. Cana
68. _____ was stoned to death because of his faith.
A. Jesus B. Stephen
C. John the Baptist D. Paul
69. Which book in the Bible instructs us to be good managers of God's time?
A. Genesis B. Exodus
C. Numbers D. Ecclesiastes
70. Which one is a physical change in boys?
A. Breasts appear
B. Hip broaden
C. Voice become deep
D. Menstrual flow begins
71. _____ united the people of Israel with God on Mt Sinai.
A. Joseph B. Moses
C. Jacob D. Abraham
72. The commandments which tells us to respect life is
A. do not steal
B. do not commit murder
C. do not commit adultery
D. do not covet
73. Valuing and worshipping other things apart from God is called
A. idolatry B. Lord's prayer
C. praise and worship D. devil worship
74. The disciple of Jesus called from fishing was
A. Philip B. John
C. Judas Iscariot D. Thomas
75. Why are human beings special in the eyes of God?
A. They were created from dust
B. They were created on the last day
C. They were given power to name all the animals
D. They were created in God's image and likeness
76. "We are fearfully and wonderfully made." These words are found in the book of
A. Genesis B. Psalms
C. Mark D. Exodus
77. The name Jesus means
A. God with us B. Saviour
C. Anointed one D. Son of God
78. _____ and _____ were the sons of Zebedee.
A. James and Peter B. Judas and Thomas
C. John and James D. Simon and Andrew
79. Christians bear witness to Christ mainly by
A. giving testimony about Jesus
B. speaking freely about Christ
C. helping the needy
D. telling the others how he was saved from sins
80. In the Lord's prayer we need to forgive other for God to _____ us.
A. forgive B. bless
C. remember D. know
81. How many disciples were waiting in the upper room for the coming of the Holy Spirit?
A. 120 B. 12 C. 11 D. 150
82. We say Jesus is merciful because He
A. condemns us when we go wrong
B. guides us into sin
C. cried with us when we sin
D. forgives us when we go wrong
83. When we help the needy we are practising our _____ through our actions.
A. prayers B. songs
C. games D. faith
84. As during the baptism of Jesus the Holy Spirit descended on him in form of
A. water B. tongues of fire
C. a dove D. an eagle
85. Joseph and Mary travelled to Bethlehem during the birth of Jesus in order to attend the
A. Pentecost B. Passover
C. Temple opening D. Census
86. Abraham is known for his great
A. faith B. singing
C. prayer D. descendants
87. We should obey those in authority because they
A. have been put there by God
B. like punishing us
C. are so powerful
D. are to be feared
88. _____ marked the transition from childhood to adulthood in the traditional African society.
A. Birth B. Death
C. Initiation D. Marriage
89. Happy are those who are humble for they will
A. be called children of God
B. see God
C. inherit the kingdom of God
D. receive what God has promised
90. _____ is the way of communicating with God.
A. singing B. visiting
C. dancing D. praying

GLOWING SUPREME ASSESSMENT TEST DARASA LA TANO 2018

Stega Print
002

KISWAHILI

MUDA : 1 DAKIKA 40

Jaza nafasi zifuatazo kukamilisha mtungo

1 wa magari mengi 2 ukipita kwa mwendo wa asteaste ambapo 3
ya barabara watu wengi waliyatupia macho magari 4 kwa makini sana 5 na jinsi
6 kwa maua 7 . 8 ya wale waliojipanga barabarani kushuhudia 9
Mzee Mdudu.

Ilikuwa ni 10 Ijumaa adhuhuri. Gari la kwanza na 11 lilikuwa 12
zaidi liliwabeba maharusi. Sisi sote tuliya fuata tukitembea 13 miguu. Tulipotia guu 14
umati wa watu ulijaa sisisi, nsi 15 nafasi ya kutua.

- | | | | | |
|-----|-----------------------|---------------|-----------------|--------------------|
| 1. | A. umati | B. safu | C. mlolongo | D. titu |
| 2. | A. zilikua | B. ulikuwa | C. ilikuwa | D. yalikuwa |
| 3. | A. mbele | B. ndani | C. kati | D. kando |
| 4. | A. hayo | B. zile | C. hizo | D. hiyo |
| 5. | A. kutokanana | B. kutokana | C. kutokea | D. kutoka |
| 6. | A. yalivyopambwa | B. yamepambwa | C. yaliyopambwa | D. yalivyopamba |
| 7. | A. kokocho | B. pochopocho | C. kupukupu | D. kochokocho |
| 8. | A. kwenye | B. miongo | C. kati | D. katika |
| 9. | A. ilikuwa | B. alikuwa | C. walikuwa | D. alikua |
| 10. | A. wakati wa | B. usiku wa | C. siku ya | D. muda wa |
| 11. | A. ambaye | B. ambayo | C. ambao | D. ambalo |
| 12. | A. limepambwa | B. limepamba | C. limebambwa | D. limepamba |
| 13. | A. na | B. pamoja na | C. kwa | D. pa |
| 14. | A. A. kwenye ukumbini | B. ukumbini | C. kwa ukumbi | D. katika ukumbini |
| 15. | A. hakupata | B. alipata | C. asingepata | D. hangepata |

Jibu kulingana na maagizo

16. Chagua wingi wa
Paka huyu ameniuma.
A. Paka hawa wametuuma
B. Paka hawa wameniuma
C. Paka huyu wametuuma
D. Paka huyu ametuuma
17. Hii ni akisami ipi $\frac{1}{9}$?
A. subui B. thuluthi
C. humusi D. tusui
18. Chagua jibu sahihi.
Mvua iliponyesha nilisikia _____
A. randi B. radhi
C. radi D. rathi
19. Nomino 'gitaa' iko katika ngeli gani?
A. I - ZI B. I - I
C. U - ZI D. LI - YA
20. Chagua kitenzi katika sentensi hii.
Mikate hii inalika upesi.
A. upesi B. inalika
C. mikate D. hii
21. Tegua kitendawili hiki.
Ni mlinzi mzuri asiyepewa mshahara.
A. simba B. taa
C. mlango D. kitanda
22. Chagua jibu sahihi.
Mwana ale chakula bora ili _____ upesi.
A. akue B. awe
C. ale D. akuwe
23. Tumia amba- ipasavyo.
Chura _____ tulimwona ameingia katika maji.
A. ambacho B. ambao
C. ambayo D. ambaye
24. Upinde una rangi ngapi?
A. Mbili B. Saba
C. Tano D. Kumi
25. Chagua a-unganifu sahihi.
Ziara yetu ilikuwa katika mbuga _____ wanyamapori.
A. pa B. cha
C. ya D. la
26. Chagua maana ya; kung'oa nanga.
A. kutamani
B. kufika ulipokua unaenda
C. kuanza safari
D. kutembea
27. Anayeendesha ndege huitwa rubani, anayeendesha garimoshi huitwaje?
A. dereva B. kandawala
C. rubani D. nahodha
28. Ni sentensi ip iliyoandikwa katika wakati uliopita?
A. Hau aliniahidi zawadi
B. Baba amepika chakula halua
C. Darasa limefunguliwa sasa hivi
D. Ziara itakuwa ya kesho
29. Wingi wa sentensi hii ni; Ua limeota uani.
A. Maua zimeota nyuani
B. Maua yameota mauani
C. Maua izeota mauani
D. Maua yameota nyuani
30. Jibu la salamu; Alamsiki ni
A. binuru B. aheri
C. buriani D. poa

Soma kifungu kifuatacho kisha ujibu maswali 31-40.

SHULE YA MSINGI YA IMANI,
S.L.P 221,
MATOPENI
30 Januari 2018.

Kwa mjomba Muna,

Pokea salamu tele mithili ya mchanga ufuoni mwa bahari. Unaendelea vipi? Mimi hapa niko mwema kama chuma cha pua. Wavyele wangu wako salama salimini. Mola ametulinda sote.

Shuleni ninaendelea kufanya bidii za mchwa ajengaye kichuguu kwa mate. Mtihani tulioufanya wa mwanzo wa muhula niliibuka kifua mbele. Nilijizolea maki mia nne sabini na saba. Hakika mchumia juani hulia kivulini. Nilizawadiwa zawadi chungu nzima. Je, mkoi wangu anaendelea vipi katika masomo yake?
KISW - 02/5/18

Madhumuni ya kukuandikia waraka huu ni kuomba mahitaji ya shuleni. Majuma mawili yajayo, tutakuwa na ziara ya kuzuru mbuga ya wanyamapori. Nakuomba unitumie shilingi elfu mbili za nauli na nyingine mia tano za masurufu. Ukinifanyia hiyo hisani nitashukuru sana. Msalimie mkoi wangu pamoja na mama yake yaani mkazahau. Mwambie aniandikie akinieleza vile anavyoendelea masomoni. Asisahau kuwa barua ni nusu ya kuonana.

Wako wa kufa kuzikana,
Musa Mavitu.

31. Barua hii ni ya aina gani? A. Kirasmi B. Rasmi C. Kiafisi D. Kirafiki	A. Tatu B. Nne C. Mbili D. Moja
32. Mwandishi wa barua hii anasomea shule iitwayo? A. Muna B. Matopeni C. Imani D. Msingi	37. Mwandishi aliandika barua hii muhula gani? A. Likizo B. Muhula wa tatu C. Wa kwanza D. Muhula wa tatu
33. Aliyeandikiwa barua hii humwita mwandishi vipi? A. Mkoi B. Bavyaa C. Umbu D. Mpwa	38. Sababu kuu ya kuandika barua hii ni A. kueleza jinsi aendelevyo masomoni B. kuomba nauli na pesa za matumizi safarini C. kujuliana hali tu D. kujisifu kwa mjomba wake
34. Bidii za mwandishi amezilinganisha na za nini? A. Mchwa B. Nyuki C. Kuchugua D. Pua	39. Mwandishi wa barua hii ni nani? A. Amani B. Mjomba C. Mama D. Mavitu
35. Tunaweza kusema kuwa mwandishi masomoni ni A. mzembe B. wembe C. simba D. kisu butu	40. Neno wavyele limetumika katika aya ya kwanza, neno jingine lenya maana sawa ni A. wazazi B. wanafunzi C. walimu D. wasasi
36. Barua hii ina anwani ngapi?	

Soma habari hii kisha ujibu maswali 41-50.

Wanyamapori ni rasilimali kubwa katika taifa letu. Huwavutia watalii wa mbali na karibu. Wageni huja nchini mwetu, nia kuu kuwaona wanyama hawa. Wao hufahamu kuwa fahari ya macho ni kutazama. Watalii kutoka ng'ambo huleta pesa nyingi zaitwazo za kigeni. Pesa hizi hutumika katika kuimarisha uchumi wa nchi.

Kuna majangili ambao huwaua wanyamapori ovyoovyo. Siku moja walijihami na kuenda kwenye

kazi yao ya haramu. Waliona kichocho ambapo ndovu walikuwa wakipitia. Walikifuata kichocho hadi wakatokezea kwenye kundi la ndovu. Walianza kukabiliana nao. Ndovu waliwashinda nguvu ikawa ni miguu niponye. Walipokuwa wakichana mbuga mmoja wao alitegwa na unyasi akaanguka chini. Ndovu mmoja alimshika kwa mkonga wake akamtupa chini na kumbana. Wawindaji wengine walihepa hatari ile.

Ghafla walipokuwa wakikimbia walipatana na askaripori. Wawindaji hao walitiwa mbaroni na kupokonywa silaha zao haramu. Wote walifikishwa katika kituo cha polisi na kutiwa korokoroni kwa saa ishirini na moja kisha kupelekwa mahakamani. Waliomba msamaha lakini wapi! Walihukumiwa kutumikia kifungu cha miaka kumi gerezani. Kwa kweli wawindaji haramu ni adui wa nchi yetu.

- | | |
|---|--|
| <p>41. Wanyamapori huwavutia watalii
A. wakitoka ng'ambo tu
A. wa kutoka nchini tu
C. wa kutoka nchini na nchi nyingine
D. wa kutoka karibu tu</p> <p>42. Pesa zitokanazo na watalii baada ya kuzuru mbuga za wanyamapori huitwa
A. pesa za watalii B. pesa za kigeni
C. kianga macho D. masurufu</p> <p>43. Wawindaji haramu pia huitwa
A. askaripori B. magaidi
C. majangili D. wahalifu</p> <p>44. Pesa zinazotokana na wanyamapori
A. husaidia kuinua uchumi wa nchi
B. husaidia wawindaji haramu kujiendeleza
C. hazina faida yoyote katika taifa letu
D. huwasaidia askaripori na familia zao</p> <p>45. Kichocho kilikuwa
A. barabara kuu ya polisi
B. kijia chembamba walichopitia wanyamapori
C. kijia cha askaripori na wapita njia wengine
D. barabara ya ndovu na wawindaji haramu</p> <p>46. Mwindaji aliyeanguka chini aliangukwa na nini?
A. Aliangukwa na nyasi</p> | <p>B. Aliangukwa na wenzake wakikimbia
C. Aliangukwa kwa jiwe
A. Aliangukwa na nguvu kwa woga</p> <p>47. Wawindaji walikaa katika korokoro kwa muda wa saa ngapi?
A. Kwa wiki tatu B. Kwa siku moja
C. Saa ishirini na moja D. Saa tatu</p> <p>48. Wawindaji waliponaswa walikuwa
A. wakipumzika kwa uchovu
B. mbioni kuyaokoa maisha yao
C. wakiwachunga ndovu
D. wakimwoko mwenzao</p> <p>49. Kulingana na ufahamu ni kweli kusema
A. wawindaji walikuwa wamebeba silaha
B. hakuna aliyekamatwa na askaripori
C. hakuna aliyeyeruhiwa na ndovu
D. wawindaji haramu wana faida tele nchini</p> <p>50. Chagua kichwa kinachofaa zaidi habari hii.
A. Askaripori
B. Wasasi halali
C. Hifadhi la wanyama
D. Wawindaji haramu</p> |
|---|--|

GLOWING SUPREME ASSESSMENT TEST

STANDARD FIVE 2018

ENGLISH

Stega Print
02

Time : 1 hour 40 min

Read the passage below and fill the blank spaces

Read the passage below and fill the blank spaces

It 1 getting late. As I 2 at the bus stop, I started getting 3. There were no 4 to 5 me home. It 6 start raining at any time. 7, I got a phone call from my father. At 8 my father was on 9 way to pick me up. I 10 now afford a smile. I knew I was 11 of danger and 12 be home in a short 13. I had 14 my lesson. Next time I would be early to 15 a bus home.

- | | | | | |
|-----|-------------|--------------|------------|------------------|
| 1. | A. am | B. will | C. was | D. have |
| 2. | A. standing | B. stood | C. stand | D. stode |
| 3. | A. bitter | B. happy | C. worried | D. worry |
| 4. | A. busses | B. buses | C. cars | D. bus |
| 5. | A. escort | B. call | C. ferried | D. ferry |
| 6. | A. will | B. can | C. would | D. shall |
| 7. | A. Luckily | B. Unluckily | C. Sadly | D. Unfortunately |
| 8. | A. list | B. first | C. least | D. most |
| 9. | A. her | B. his | C. him | D. their |
| 10. | A. can | B. could | C. shall | D. will |
| 11. | A. out | B. off | C. of | D. in |
| 12. | A. can | B. will | C. would | D. may |
| 13. | A. minute | B. whilst | C. while | D. task |
| 14. | A. learn | B. learnt | C. seen | D. know |
| 15. | A. see | B. caught | C. touch | D. catch |

Choose the correct preposition to answer

questions 16 to 18.

16. The boy had agreed _____ the headmaster.
A. to B. with
C. as D. by
17. The captain was disappointed _____ the team.
A. in B. with
C. by D. to
18. The dog jumped _____ the fence.
A. up B. above
C. over D. across

For questions 19-21, choose a word that least fits into the group.

19. A. shelf B. lamp
C. torch D. candle
20. A. bedding B. luggage
C. equipment D. table
21. A. ant B. wasp
C. insect D. cricket

Choose the simile to answer questions 22- 24.

22. As playful as a _____
A. dove B. kitten
C. puppy D. monkey
23. As strong as _____
A. horse B. stone
C. metal D. steel
24. As fierce as _____
A. cat B. dog
C. lion D. sheep

Choose the sentence which is in passive voice.

25. They are baking cakes.
A. The cakes are baked.
B. The cakes will be baked
C. The cakes are being baked
D. They baked the cakes
26. He is painting the pictures.
A. The pictures are painted
B. The pictures will be painted
C. The pictures would be painted
D. The pictures are being painted
27. The boy is modelling the clay.
A. The clay is being modelled
B. The clay was modelled
C. The clay is modelled
D. The clay is modelling the boy

Choose the best question tag to answer questions 28-30.

28. John lost his book, _____ ?
A. didn't he B. isn't did
C. does she D. doesn't she
29. I am not a bad pupil, _____ ?
A. amn't I B. isn't it
C. am I D. aren't she
30. He is not a very good man, _____ ?
A. isn't he B. is he
C. isn't it D. doesn't he

Read the passage below and answer questions 31-40

SUCCESS SCHOOL,
P.O BOX 2830,
BIDII
20/01/2018

Dear mother,

I salute you most sincerely and thank you for the letter dated 20/12/2017, which I received the day before yesterday. I am glad to hear that everybody is as fit as a fiddle. As you know learning is very strenuous these days.

I am grateful that you understand my problem and sent me some money to buy the books I had requested. I promise to make maximum use of them. Surely, mother you are one in a million!

Please tell my elder brother Moses that I'm still waiting for the beanie he promised as it is sometimes

very cold especially during the rainy season.

Give my regards to everyone. I love you mother. Bye for now.

Your loving son,
Kamwanja

- | | |
|--|--|
| <p>31. From the letter, we can tell that</p> <p>A. the writer was in a day school</p> <p>B. the writer was in Bidii school</p> <p>C. the writer was in a boarding school</p> <p>D. the writer loved is called Moses.</p> | <p>A. doctor</p> <p>B. teacher</p> <p>C. pilot</p> <p>D. pupil</p> |
| <p>32. When the writer wrote the letter earlier, he needed</p> <p>A. books</p> <p>B. jackets</p> <p>C. caps</p> <p>D. pens</p> | <p>37. How many times has the pronoun 'I' been used in the letter?</p> <p>A. Seven</p> <p>B. Four</p> <p>C. Six</p> <p>D. Eight</p> |
| <p>33. When did Kamwenje write the letter?</p> <p>A. 20/01/2018</p> <p>B. 20/01/2017</p> <p>C. 20/12/2017</p> <p>D. 20/02/2018</p> | <p>38. P.O BOX in full many means</p> <p>A. police officer box</p> <p>B. post one box</p> <p>C. personal opinion box</p> <p>D. post office box</p> |
| <p>34. The opposite of the word maximum is</p> <p>A. major</p> <p>B. minimum</p> <p>C. minor</p> <p>D. minimal</p> | <p>39. The word grateful means the same as</p> <p>A. thankful</p> <p>B. great</p> <p>C. good</p> <p>D. wonderful</p> |
| <p>35. Who promised Kamwanja a beanie?</p> <p>A. His mother</p> <p>B. His elder brother</p> <p>C. His elder sister</p> <p>D. His cousin</p> | <p>40. The writer _____ his mother to make maximum use of the books.</p> <p>A. allowed</p> <p>B. warned</p> <p>C. promised</p> <p>D. around</p> |
| <p>36. The writer is likely to be a</p> | |

Read the passage below and answer questions 41-50

Lamal had never been to a desert. One day he visited the Sahara Desert and felt very thirsty. He saw something far off and hurried off hoping to get some water. He found that it was only an old woman selling ties.

"Can I have some water? Lamal asked. "I don't have any water. Why don't you buy this tie? It can

go well with your shirt.” replied the woman. “I dont want a tie you fool!” Lamal responded rudely. Over that sanddune, five kilometres from here, is a restaurant. You will get some water there,” the woman advised.

Lamal walked towards the sand dune. Four hours later, he crawled back huffing and puffing. “Didn’t you find the restaurant?” asked the old lady.

Lamal gasped, “I found it but they wouldn’t let me in without a tie!” The woman said, “You are too late. All the ties have been sold out.”

-
41. According to the passage its true to say that
- A. Lamal had visited Sahara Desert before
B. Lamal was feeling sick
C. Lamal was hungry
D. Lamal had never visited Sahara Desert before
42. What did Lamal see at a far off distance?
- A. Restaurant B. An old woman
C. Sand dunes D. An oasis
43. Lamal was _____ to the old lady.
- A. polite B. kind
C. impolite D. good
44. “Can I have some water?” Who said these words?
- A. Lamal B. The old woman
C. Writer D. The old man
45. The distance from the place where the old lady was selling the ties to the restaurant was
- A. fifteen kilometres B. five kilometres
C. 50 kilometres D. 500 kilometres
46. Lamal could not be allowed to get into the restaurant because he lacked
- A. some money B. nice clothes
C. a tie D. directions
47. By the time, Lamal went for a tie, they had been
- A. stolen B. lost
C. washed D. sold out
48. To huff and puff is to _____ noisily.
- A. breathe B. bathe
C. sit D. walk
49. The word restaurant can be replaced with
- A. church B. mosque
C. hotel D. school
50. The best title for the passage would be
- A. Lamal and the restaurant
B. Lamal and the sanddunes
C. Lamal and the old woman
D. Lamal learns a lesson the hard way

GLOWING SUPREME ASSESSMENT TEST

STANDARD FIVE 2018



MATHEMATICS

Time : 2 hours

- | | |
|---|---|
| <p>1. Write seven thousand, two hundred and eighteen in symbols.</p> <p>A. 718 B. 7000218</p> <p>C. 7218 D. 7281</p> <p>2. What is the place value of digit 9 in 4956?</p> <p>A. Tens B. Hundreds</p> <p>C. Ones D. Thousands</p> <p>3. Which digit has the place value of tens in 1845?</p> <p>A. 4 B. 1</p> <p>C. 8 D. 5</p> <p>4. $60 \div 10 =$</p> <p>A. 50 B. 70</p> <p>C. 6 D. 600</p> <p>5. $592 + 984 + 911 =$</p> <p>A. 2872 B. 1303</p> <p>C. 2487 D. 1376</p> <p>6. $594 - 478 =$</p> <p>A. 1027 B. 1303</p> <p>C. 161 D. 116</p> <p>7. What is $\frac{1}{3}$ of 60</p> <p>A. 180 B. 20</p> <p>C. 63 D. 36</p> <p>8. Find the value of</p> <p style="text-align: center;">$7 \overline{)578}$</p> | <p>A. 28 rem 4 B. 82 rem 4</p> <p>C. 4 rem 28 D. 82</p> <p>9. What is the value of $82 \times 20 =$</p> <p>A. 1460 B. 1640</p> <p>C. 820 D. 4016</p> <p>10. Kaguri bought 11 packets of cakes. Each packet has 6 cakes. How many cakes did she buy altogether?</p> <p>A. 17 B. 611</p> <p>C. 116 D. 66</p> <p>11. Which of the numbers below is not divisible by 5?</p> <p>A. 551 B. 350</p> <p>C. 1055 D. 1000</p> <p>12. What fraction is shaded below?</p> <div style="text-align: center;"> </div> <p>A. $\frac{1}{2}$ B. $\frac{1}{4}$</p> <p>C. $\frac{1}{3}$ D. $\frac{1}{5}$</p> <p>13. Wanyua was given $\frac{9}{12}$ of a bottle of milk. She drank $\frac{3}{12}$ of the milk. What fraction remained?</p> <p>A. $\frac{12}{12}$ B. $\frac{9}{12}$</p> <p>C. $\frac{6}{12}$ D. $\frac{3}{12}$</p> <p>14. What is the place value of digit 8 in 20.867?</p> |
|---|---|

- A. Tens B. Tenths
C. Hundredths D. Hundreds

15. $2.46 + 200.13 + 0.9 =$

- A. 213.49 B. 223.49
C. 223.49 D. 203.49

16. Work out

m	cm
18	15
<u> x </u>	<u> 8 </u>

- A. 45m 20 cm B. 14m 20 cm
C. 18 m 23cm D. 145m 20 cm

17. How many centimetres make 3 metres?

- A. 3 B. 30
C. 300 D. 3000

18. One side of a square is 25 cm, What is its perimeter?

- A. 100 cm B. 50 cm
C. 125 cm D. 250 cm

19. Measure the line below in centimetres using a ruler.

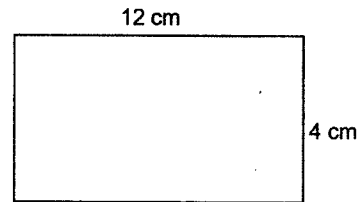


- A. 1 cm B. 3 cm
C. 5 cm D. 7 cm

20. Divide 13m 14 cm by 6

- A. 13m 20 cm B. 2m 19 cm
C. 19m 2 cm D. 2m 29 cm

21. Find the area of the figure below.



- A. 16 cm^2 B. 48 cm^2
C. 16^2 D. 32 cm^2

22. A tray of eggs hold 30 eggs. How many eggs will 8 trays hold?


- A. 830 B. 22
C. 38 D. 240

23. 16.27

$- 11.38$

- A. 4.89 B. 27.65
C. 15.11 D. 5.80

24. How many small cubes make the stack below?



- A. 20 B. 47
C. 100 D. 60

25. How many half litre containers will fill a 12 litre container?

- A. 6 B. 24
C. 48 D. 10

26. $\frac{1}{2} \text{ kg} + \frac{1}{2} \text{ kg} =$

- A. 2 kg B. 1 kg
C. $\frac{1}{4} \text{ kg}$ D. 6 kg

27. What is the approximate mass of a std 4 girl?

- A. $\frac{1}{4}$ kg B. 90 kg
 C. 1 kg D. 35 kg

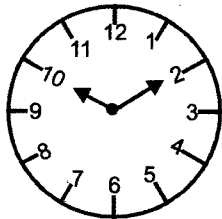
28. Musa had a sh 500 note. He bought 10 loaves of bread at sh 40 each. How much money was he left with?

- A. sh 100 B. sh 600
 C. sh 540 D. sh 510

29. How many seconds make $3\frac{1}{2}$ minutes?

- A. $3\frac{1}{2}$ B. 200
 C. 210 D. 220

30. What is the time shown by the clockface?



- A. 10.10 B. 2.10
 C. 10.02 D. 10.11

31. How many days altogether are in the months of September, October and November?

- A. 90 B. 91
 C. 92 D. 93

32. How many sh 50 note will make sh 200?

- A. 4 B. 250
 C. 150 D. 5

33. What is the largest number which can be made by the digits 4, 7 and 9?

- A. 479 B. 794
 C. 749 D. 974

34. $20 \div t = 4$. What is the value of t?

- A. 24 B. 4
 C. 5 D. 25

35. $\frac{3}{4} = \frac{?}{12} =$

- A. 8 B. 6
 C. 3 D. 9

36. Work out;

Weeks Days

4 3

- 1 5

- A. 2wks 5 days B. 3wks 2days
 C. 2wks 8 days D. 5wks 8 days

37. What is $4 \times 0 =$

- A. 40 B. 04
 C. 0 D. 4

38. Which is bigger $\frac{1}{3}$ or $\frac{1}{8} =$

- A. $\frac{1}{3}$ B. $\frac{1}{8}$
 C. None D. They are equal

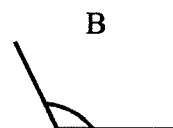
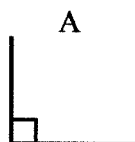
39. What is $\frac{5}{10}$ written as a decimal?

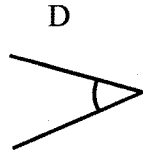
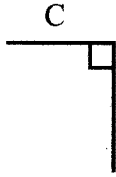
- A. 10.5 B. 10
 C. 0.5 D. 15

40. The time 12.15 is the same as fifteen minutes _____ twelve.

- A. from B. to
 C. and D. past

41. Which of the angles below is obtuse angle?





42. Which is the next number in the pattern;

100, 87, 74 _____?

A. 61 B. 81

C. 71 D. 71

43. What is 0.99 written as a fraction?

A. $\frac{49}{10}$ B. $\frac{0.99}{100}$

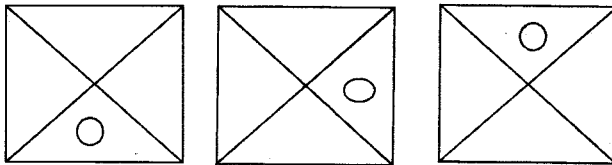
C. $\frac{99}{100}$ D. $\frac{100}{99}$

44. Babu had 36 goats. A third died. How many goats remained?

A. 36 B. 12

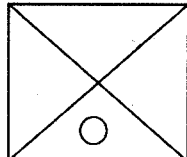
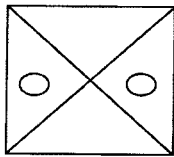
C. 48 D. 24

45. Which is the next shape in the pattern?



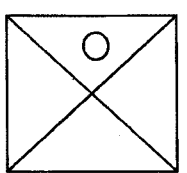
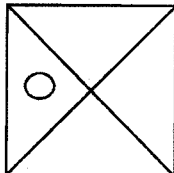
A

B



C

D



46. In an exam Bancy got 473 marks out of 500.

How many marks did she lose?

A. 147 B. 137

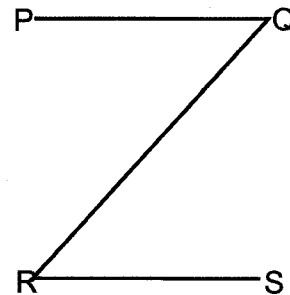
C. 27 D. 117

47. Kithongo had p shillings, he spent m shilling. How much money remained?

A. $p + m$ B. $p - m$

C. $m - p$ D. $p \times m$

48. Name the points of intersection.



A. P and R B. P and Q

C. Q and R D. R and S

49. Which day is between Sunday and Tuesday?

A. Monday B. Tuesday

C. Wednesday D. Friday

50. Muthoni was in school for 8 years. This is the same as _____ months.

A. 56 B. 40

C. 12 D. 96

JINA LAKO

JINA LA SHULE YAKO

GLOWING SUPREME ASSESSMENT TEST



KISWAHILI SEHEMU YA PILI: INSHA

DARASA LA TANO 2018

MUDA: DAK. 40

Andika insha ya kuvutia kuhusu;

SHULE YETU

NAME	
NAME OF YOUR SCHOOL	



GLOWING SUPREME ASSESSMENT TEST

ENGLISH SECTION B: COMPOSITION

STD 5 2018

Time : 40 Mins

Write an interesting story about:

A VISIT TO THE GAME PARK

Handwriting lines for composition.

GLOWING SUPREME ASSESSMENT TEST STD 5



MARKING SCHEME 2018

<u>ENGLISH</u>		<u>KISWAHILI</u>		<u>MATHS</u>		<u>SCIENCE</u>		<u>SOCIAL STUDIES</u>		
1. C	31. C	1. C	31. D	1. C	31. B	1. B	31. A	1. B	31. C	61. B
2. B	32. A	2. B	32. B	2. B	32. A	2. C	32. C	2. C	32. B	62. B
3. C	33. A	3. D	33. B	3. A	33. D	3. D	33. B	3. B	33. C	63. C
4. D	34. B	4. A	34. C	4. C	34. C	4. A	34. D	4. A	34. B	64. D
5. D	35. B	5. B	35. A	5. C	35. D	5. C	35. C	5. D	35. D	65. C
6. C	36. D	6. A	36. C	6. D	36. A	6. B	36. B	6. A	36. A	66. D
7. A	37. D	7. D	37. A	7. B	37. C	7. C	37. A	7. B	37. C	67. D
8. C	38. D	8. C	38. D	8. B	38. A	8. A	38. C	8. B	38. D	68. B
9. B	39. A	9. B	39. A	9. B	39. C	9. D	39. D	9. D	39. C	69. D
10. B	40. C	10. C	40. D	10. D	40. D	10. B	40. B	10. C	40. A	70. C
11. A	41. D	11. D	41. C	11. A	41. B	11. C	41. C	11. D	41. C	71. B
12. C	42. B	12. A	42. B	12. A	42. A	12. B	42. A	12. D	42. B	72. C
13. C	43. C	13. C	43. A	13. C	43. C	13. D	43. C	13. B	43. C	73. A
14. B	44. A	14. B	44. D	14. B	44. D	14. C	44. D	14. D	44. D	74. B
15. D	45. B	15. D	45. D	15. D	45. C	15. B	45. B	15. B	45. B	75. D
16. B	46. C	16. A	46. B	16. D	46. C	16. C	46. C	16. C	46. A	76. C
17. A	47. D	17. D	47. C	17. C	47. B	17. A	47. D	17. C	47. D	77. B
18. C	48. A	18. C	48. B	18. A	48. C	18. D	48. C	18. C	48. B	78. C
19. A	49. C	19. D	49. B	19. D	49. A	19. B	49. B	19. C	49. B	79. D
20. D	50. D	20. B	50. C	20. B	50. D	20. C	50. A	20. B	50. D	80. A
21. C		21. C		21. B		21. A		21. B	51. D	81. C
22. B		22. A		22. D		22. C		22. B	52. C	82. D
23. A		23. D		23. A		23. B		23. C	53. B	83. D
24. C		24. B		24. D		24. C		24. B	54. A	84. C
25. C		25. C		25. B		25. D		25. C	55. B	85. D
26. D		26. C		26. B		26. C		26. A	56. C	86. A
27. A		27. B		27. D		27. B		27. C	57. D	87. A
28. A		28. A		28. A		28. D		28. D	58. D	88. C
29. C		29. D		29. C		29. C		29. D	59. B	89. D
30. B		30. D		30. A		30. B		30. C	60. A	90. D

A COMPOSITION MARKING SCHEME

MARKING CRITERION

1. The composition will be assessed according to the following guidelines.

- The maximum mark will be 40 and the minimum (mark 01)

- Does the script show that the candidate can communicate accurately, fluently and imaginatively in English?

Accuracy (8 marks)

- (16) a) Correct tenses and agreement of verbs (4 marks) b) Accurate use of vocabulary (4 marks)
 c) Following a sequence (4 marks) d) Correct punctuation (4 marks)

Fluency (8 marks)

- a) Words in the correct order (4 marks) b) Sentence connection and paragraphs (4 marks)
 c) Correct spelling (4 marks) d) Ideas developed in logical sequence (4 marks)

Imagination (8 marks)

- a) Unusual but appropriate use of words and phrases (4 marks)
 b) Variety of structure (4 marks)

NB: Please, teachers are requested to scrutinize this marking scheme before use, it is worth