

SCHOOL BASED EVALUATION TEST

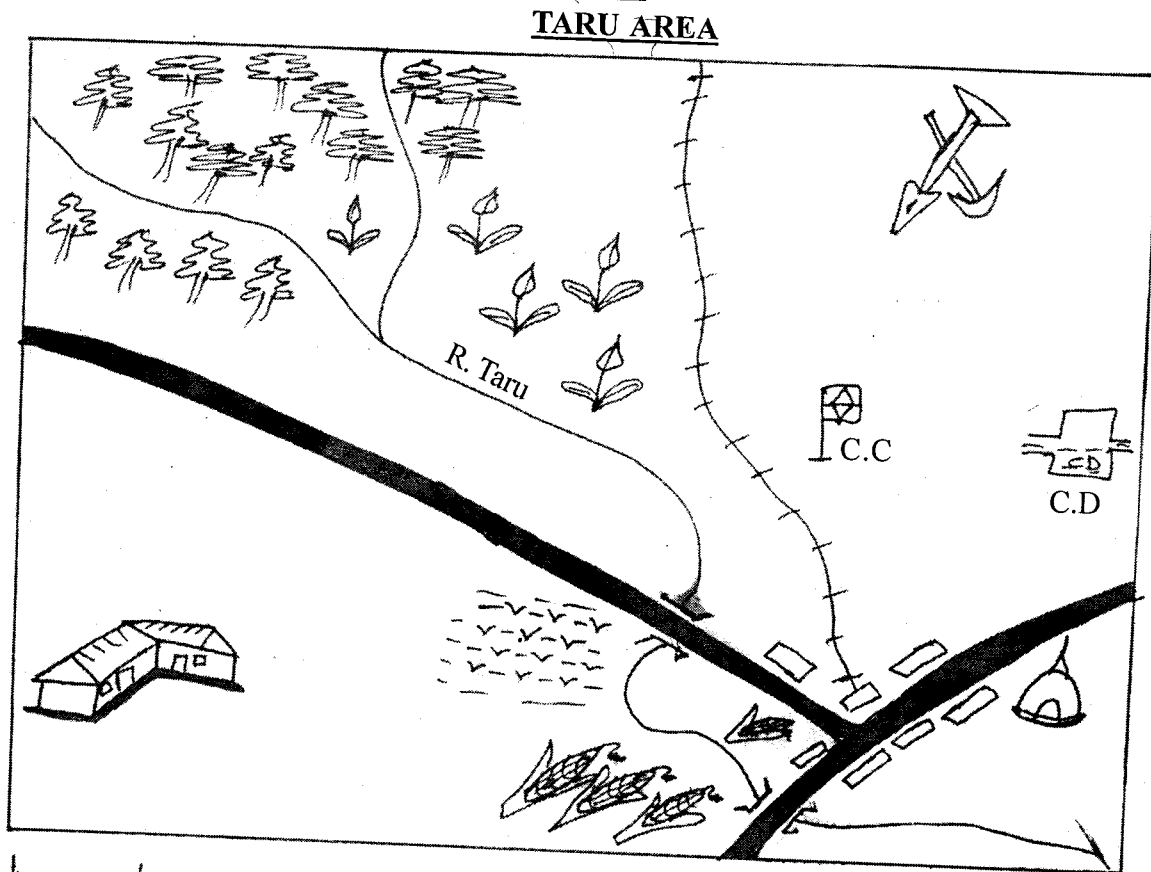
STD 4 TERM 3 2017

SOCIAL STUDIES/ C.R.E

4

Study the map of Taru area and answer questions 1-7

Time: 2 Hrs 15 Min



KEY

	Forest		Railway		Chief's camp
	School		Tea		Swamp
	Cattle dip		Mosque		
	Maize				

- The river in Taru area flows from _____
 - South to North West
 - North West to South East
 - North to South
 - South East to North West
- What is the direction of the quarry from the school?
 - North West
 - South West
 - South East
 - North East
- The **main** subsistence crop grown in Taru area is
 - Trees
 - Tea
 - Maize
 - Papyrus
- Taru area is a _____
 - Division
 - Sub-location
 - County
 - Location
- The people of Taru area belongs to _____ religion
 - Christianity
 - Islam
 - Pagans
 - Hindu
- The **main** form of transport in Taru area is _____
 - Air
 - Railway
 - Road
 - Animals
- What shows that people in Taru area keep cattle?
 - Swamp
 - Quarry
 - Forest
 - Cattle dip

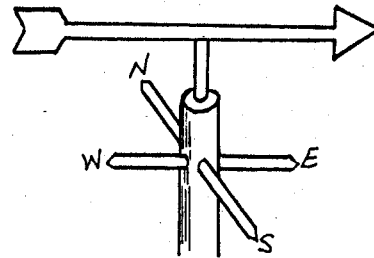
8. Majority of people in our county belong to _____ language group
 A. Cushites B. Bantu
 C. Semites D. Nilotes
9. The total number of people living in a particular place is known as _____
 A. Culture B. Density
 C. Population D. Language group
10. Which of the following is the **odd** one out?
 A. Lakes B. Plains
 C. Swamps D. Rivers
11. Vegetation that grows on its own is known as _____
 A. Artificial B. Man-made
 C. Planted D. Natural
12. Papyrus reeds are used to make _____
 A. Ropes B. Tables
 C. Mats D. Medicine
13. Which of the following is an example of Cushites in our county?
 A. Maasai B. Abagusii
 C. Somali D. Luo
14. _____ are standards of good behaviour
 A. Social relations B. Honesty
 C. Obedience D. Moral values
15. A person who loves his country is said to be _____
 A. Citizen B. Patriotic
 C. Corrupt D. Loyal
16. _____ is animals, birds and plants in their natural habitat
 A. Domestic animals B. Wild animals
 C. Wildlife D. Gamepark
17. Which one is **not** a traditional industry?
 A. Pottery B. Weaving
 C. Basketry D. Glass making
18. Buying and selling of goods and services is called
 A. Selling B. Trade
 C. Exchanging D. Barter
19. The road sign shown means _____



- A. Cattle dip ahead
 B. Danger ahead
 C. Cattle crossing
 D. Ranch ahead


20. Which one is **not** a quality of a good citizen?
 A. Corruption B. Loyalty
 C. Fairness D. Hardworking
21. Which of the following is **not** a human right?
 A. Right to shelter B. Right to fight
 C. Right to food D. Right to life

22. A _____ results from a difference in opinion between people
 A. Disorder B. Fight
 C. Disagreement D. Mistake
23. The following are members of the county assembly. Who is **not**?
 A. Elected M.C.A B. Speaker
 C. Nominated M.C.A D. Governor
24. A member of County Assembly is elected to represent a _____
 A. Ward B. Constituency
 C. County D. Location
25. A child born in Kenya become a Kenyan citizen by
 A. Registration B. Association
 C. Birth D. Appointment
26. People in the past who made items using iron were called _____
 A. Dressmakers B. Potters
 C. Moulders D. Blacksmiths
27. Artificial method of watering crops is called _____
 A. Flooding B. Watering
 C. Folding D. Irrigation
28. The weather instrument shown is a _____



- A. Anemometer
 B. Windsock
 C. Windvane
 D. Barometer

29. The weather instrument is used to measure _____
 A. Direction of wind B. Strength of wind
 C. Speed of wind D. Temperature
30. Elections in Kenya are conducted after _____ years
 A. Seven B. Five
 C. Two D. Ten
31. Sending and receiving of messages from one person to another is known as _____
 A. Migration B. Transport
 C. Alulation D. Communication
32. The following are traditional forms of communication **except** _____
 A. Fire B. Blowing horns
 C. Mobile phones D. Sending messengers
33. The person who assists the governor to the govern the county is _____
 A. Senator B. Deputy governor
 C. Women representative D. Speaker
34. Illegal killing of wild animals is known as _____
 A. Pollution B. Poaching
 C. Hunting D. Killing

35. Things that people use to get wealth are called _____
 A. Minerals B. Materials
 C. Resources D. Economic activities
36. _____ refers to people's way of life
 A. Culture B. Traditions C. Relations D. Lifestyle
37. Pyrethrum is used to make _____
 A. Medicine B. Beverage
 C. Furniture D. Insecticides
38. The following are uses of milk **except** _____
 A. Making butter B. Making bread
 C. Making yoghurt D. Making cheese
39. Areas covered with a lot of grass and few trees are called _____
 A. Savannah woodlans B. Swamp
 C. Savannah grassland D. Natural forests
40. Which one is **not** a form of democracy in school?
 A. Choosing prefects B. Making class rules
 C. Choosing games D. Practising tribalism
41. Disagreements between teachers and pupils are caused by _____
 A. Obedience B. Poor performance
 C. Behaving well D. Respecting others
42. Kenya has _____ counties
 A. 290 B. 7 C. 47 D. 50
43. Exchanging of goods for other goods is known as
 A. Barter trade B. Currency trade
 C. Exchange trade D. Community trade
44. The headquarter of Nyandarua county is in _____
 A. Nyahururu B. Olkalou
 C. Njabini D. Oljoro orok
45. Vegetation growing along rivers is known as _____
 A. Forest B. Planted forests
 C. Riverine D. Swamp vegetation
46. In the past, sick people were treated by _____
 A. Medicinemen B. Rainmaker
 C. Doctor D. Surgeon
47. People who walk along the road are called _____
 A. Passengers B. Road users
 C. Pedestrians D. Cyclists
48. On 20th October, we celebrate _____
 A. Mashujaa day B. Jamhuri day
 C. Madaraka day D. Labour day
49. A family made of father, mother and their children is called _____
 A. Extended family B. Small family
 C. Adopted family D. Nuclear family
50. The road sign below means _____
 A. Stop
 B. Danger ahead
 C. Roundabout
 D. Junction ahead
- 
51. Chicken are kept **mainly** to produce _____
 A. Milk B. Feathers
 C. Meat and eggs D. Manure
52. A raised land with a flat top is called a _____
 A. Plateau B. Ranges
 C. Plain D. Mountain
53. A _____ is a person who belongs to a particular country
 A. Foreigner B. Native
 C. Refugee D. Citizen
54. Carrying of people and goods from one place to another is known as _____
 A. Communication
 B. Migration
 C. Transport
 D. Moving
55. Which of these lakes is found in our county?
 A. Ol borosat B. Nakuru
 C. Naivasha D. Ol kalou
56. A compass has _____ cardinal points
 A. Eight B. Four
 C. Six D. Two
57. The national flag has _____ colours
 A. Six B. Four
 C. Five D. Two
58. The **main** economic activity in our county is _____
 A. Trading B. Fishing
 C. Farming D. Pastoralism
59. The quickest means of transport is _____
 A. Air B. Road
 C. Water D. Railway
60. We go to school to _____
 A. Run B. Play
 C. Make friends D. Learn

C.R.E

61. The sons of Noah were _____
 A. Japheth, Cain and Ham
 B. Shem, Ham and Japheth
 C. Ham, Abel and Japheth
 D. Japheth, Shem and Abel
62. Jesus ordered _____ and his friends to lower the net into the deep water
 A. John B. James
 C. Simon D. Andrew
63. Which one of the following was **not** a command of Jesus Christ to His disciples?
 A. Healing the sick
 B. Preach the gospel
 C. Cast out demons
 D. Punish sinners

64. Which one of the following is **not** a way of responding to Jesus Christ's salvation?
 A. Going to school early
 B. Singing praises to God
 C. Loving the HIV/AIDS patients
 D. Obeying God's commandments
65. Which one of the following prophet predicted about a famine that was to affect the whole world?
 A. Agabus
 B. Isaiah
 C. Elijah
 D. Micah
66. The Bible teaches us to help carry one another's burdens. This means _____
 A. We should carry one another's books
 B. We should work to help one another
 C. We need to exchange our bags
 D. We should work only for those who pay us
67. Which one of the following is **not** one of the agencies that promote peace?
 A. Prison department
 B. The police force
 C. Market place
 D. The church
68. Emmanuel means _____
 A. God saves
 B. God with us
 C. God forgives
 D. God is peace
69. The followers of Jesus Christ were first called Christians at _____
 A. Jerusalem
 B. Bethlehem
 C. Antioch
 D. Capernaum
70. Jesus grew up in _____
 A. Galilee
 B. Bethlehem
 C. Nazareth
 D. Jerusalem
71. The day set aside for worshipping God is called _____ day
 A. Sabbath
 B. Wedding
 C. Christmas
 D. Birth
72. Lydia heard Apostle _____ preaching the gospel, she believed in God and was baptised
 A. Peter
 B. Paul
 C. Andrew
 D. John
73. The greatest gift God gave us is _____
 A. Jesus
 B. Mary
 C. Peter
 D. Paul
74. Goliath was in the army of _____ and David in the army of Israel
 A. Hebrews
 B. Philistines
 C. Jews
 D. Egyptians
75. A good leader _____
 A. Is served by his people
 B. Serves his people
 C. Is visited by his people
 D. Is worshiped by his people
76. Lydia was baptised by _____
 A. Peter
 B. Paul
 C. John
 D. Andrew
77. King Ahab had a wife called _____
 A. Jezreel
 B. Elizabeth
 C. Jezebel
 D. Mary
78. _____ is said to be a man of faith
 A. Abraham
 B. Jacob
 C. Esau
 D. Isaac
79. The Luo call their God _____
 A. Were
 B. Enkai
 C. Nyasae
 D. Engoro
80. Before Jesus was arrested, He prayed in the garden of _____
 A. Eden
 B. Gethsemane
 C. Jericho
 D. Heaven
81. Lazarus had two sisters, Mary and _____
 A. Magdalene
 B. Ruth
 C. Phoebe
 D. Martha
82. By washing His disciples feet, Jesus taught them how to _____
 A. Clean other people's feet
 B. Serve other people
 C. Take care of their feet
 D. Make friendship
83. We should treat orphans _____
 A. Harshly
 B. Cruelly
 C. Kindly
 D. Moderately
84. Lazarus stayed in the grave for _____ days
 A. 3
 B. 2
 C. 6
 D. 4
85. Moses was working for his _____
 A. Father
 B. Sister
 C. Uncle
 D. Aunt
86. _____ and _____ were the sons of Zebedee
 A. Levi and John
 B. John and James
 C. Matthew and James
 D. Isaac and John
87. _____ is the Prince of Peace
 A. Peter
 B. John
 C. Jesus
 D. God
88. Unselfish means _____
 A. To consider the needs of others
 B. Being unkind to others
 C. Being selfish to others
 D. Being unloving to others
89. The disciples of Jesus were unable to heal the boy with the evil spirit because they lacked _____
 A. Joy
 B. Peace
 C. Love
 D. Faith
90. Jesus fed _____ people with seven loaves of bread and a few small fish
 A. 2 000
 B. 4 000
 C. 5 000
 D. 7 000

SCHOOL BASED EVALUATION TEST

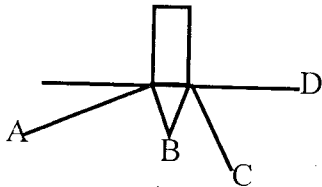
STD 4 TERM 3 2017

SCIENCE

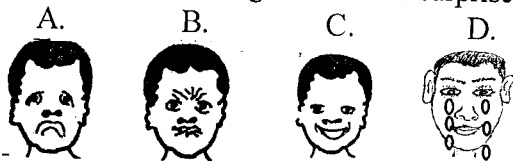
4

Time: 1Hr 15min

1. Which of the following is **not** good use of moving air?
 - A. Winnowing
 - B. Blowing soil away
 - C. Windmill
 - D. Sailing canoe and boats
2. Where will be the shadow of the stick at noon?



3. Which sense organ is missing on the head?
 - A. Touch
 - B. Taste
 - C. Sight
 - D. None
4. Which of the following is **not** a requirement for good health?
 - A. Sleeping
 - B. Rest
 - C. Education
 - D. Physical education
5. For a seed to germinate it requires _____
 - A. Soil
 - B. Light
 - C. Warmth
 - D. Darkness
6. Which of the following faces shows surprise?

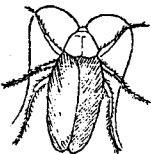


7. Which of the following is necessary when cleaning a latrine?
 - A. Herbicides
 - B. Pesticides
 - C. Disinfectant
 - D. Acaricides
8. Who among the following will use a urinal?
 - A. Girls
 - B. Ladies
 - C. Women
 - D. Men
9. The below plant grow in a _____ habitat



- A. Under shade
- B. In dry places
- C. In water
- D. Near the ocean

10. The below animal lives _____



- A. At home
- B. In water
- C. In desert
- D. On trees

11. Which of the following activity is **not** done to protect plants from drying?
 - A. Mulching
 - B. Shading
 - C. Watering
 - D. Uprooting
12. Which one of the following is **not** a way of caring for

animals at home?

- A. Irrigation
- B. Watering
- C. Feeding
- D. Housing

13. Which of the soil below will make longest ribbons?
 - A. Silt
 - B. Clay
 - C. Loam
 - D. Sand

14. We chew sugarcane using _____ teeth

- A. Molars and incisors
- B. Canines and premolars
- C. Premolars and molars
- D. Canines and incisors

15. The first teeth to shed are _____

- A. Upper incisors
- B. Lower incisors
- C. Lower premolars
- D. Lower canine

16. Which one of the following is **odd** one out?

- A. Artificial teeth
- B. False teeth
- C. Dentures
- D. Permanent teeth

17. Pyrethrum is used for _____

- A. Beverage crop
- B. Fibre crop
- C. Oil crop
- D. Insecticides

18. Potatoes are _____

- A. Stem tubers
- B. Root tubers
- C. Cereals
- D. Vegetables

19. Which class of food is a carrot?

- A. Protective
- B. Body building
- C. Carbohydrates
- D. Energy giving

20. A maize crop growing in a kale shamba is _____

- A. Weed
- B. Food crop
- C. Cereal crop
- D. Monocot

21. Which is the correct order of the phases of moon?

- A. New moon, full moon, gibbous, crescent
- B. New moon, crescent, gibbous, full moon
- C. New moon, gibbous, crescent, full moon
- D. New moon, gibbous, full moon, crescent

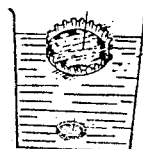
22. In the word AIDs which letter stands for "a group of signs"?

- A. S
- B. A
- C. I
- D. D

23. Which food combination forms a balanced diet?

- A. Cake, bread, soda
- B. Beans, ugali, kales
- C. Meat, rice, potatoes
- D. Fruits, vegetables, carrots

24. In the drawing below one bottle top sank the other floated because of _____



- A. Weight
- B. Shape
- C. Material
- D. Size

25. A big piece of wood floats while a small pin sinks this is because of _____

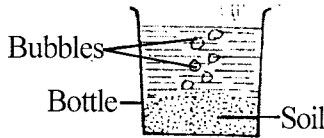
- A. Weight B. Size
C. Material D. Shape

26. The tool below is used for _____



- A. Beating nails
B. Driving nails
C. Screwing nails
D. Breaking nails

27. The below experiment shows _____



- A. Air has soil
B. Soil has air
C. Soil in a bottle
D. Soil has air

28. A bat reproduces by _____

- A. Laying eggs
B. Giving birth to young ones
C. Hatching
D. Multiplying

29. On a hot day a lizard will _____

- A. Pan B. Floff
C. recoil D. Bask

30. When domestic animals are sick we call a _____

- A. Vetenary B. Doctor
C. Dentist D. Agriculturist

31. Which of the following is **not** a recreational use of water?

- A. Surfing B. Racing
C. Ferry D. Skiing

32. Soil that contains very fine particles is _____

- A. Clay B. Sand
C. Loam D. Organic matter

33. The animal that burrows in the ground to make a home is called _____

- A. Rabbit B. Grasshopper
C. Mole D. Lizard

34. Another name of energy giving foods is _____

- A. Carbohydrates
B. Body building
C. protective
D. Vitamins

35. Std 4 pupils place plants growing in a plastic container near the window in order to get _____

- A. Sunlight B. Heat from the sun
C. Air D. Shade


36. Which of the following is **not** a reason for proper storage of tools?

- A. Tidiness B. Damage
C. Accidents D. Efficient

37. Which one of the following animals is **not** an omnivore?

- A. pig B. Man
C. Monkey D. Lion

38. At what point does the work become easier?



39. The root drawn below is likely to be of _____ plant



- A. Wheat
B. Millet
C. Greengrams
D. Sorghum

40. Which soil is mixed with cement to make building block?

- A. Clay B. Loam
C. Sand D. Silt

41. Sound travels in _____

- A. All directions B. Upward
C. Sideways D. Straight

42. The ability of the body to fight disease is called _____

- A. Deficiency B. Immunity
C. Syndrome D. Acquire

43. The teeth used for tearing is called _____

- A. Premolar B. Canine
C. Incisor D. Molars

44. Which one of the following is **true**?

- A. Kitchen knife rusts
B. Kitchen knife is made of stainless steel
C. All tools made of metal need to be oiled and greased
D. All metal need to be sharpened

45. Which of the following does **not** affect floating and sinking?

- A. Colour B. Shape
C. Material D. Weight

46. Things that reflect light are _____

- A. Black B. Rough
C. Shiny D. Dull


47. Which of the following is **odd** one out?

- A. Dog B. Cat C. Rat D. Fish

48. Which of the following is an insect?



49. The part of the animal shown is used for _____



- A. Hearing
B. Breathing
C. Eating
D. Drinking

50. A feather floats because of _____

- A. Size B. Weight
C. Shape D. Material

SCHOOL BASED EVALUATION TEST

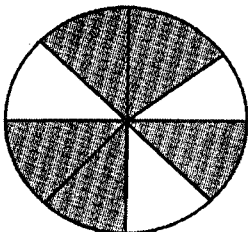
STD 4 TERM 3 2017

MATHEMATICS

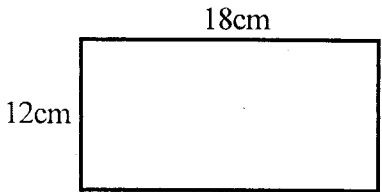
4

Time: 2 Hours

- Write in words: 4 009
A. Four zero zero nine
B. Four thousand and ninety
C. Four thousand and nine
D. Four thousand and ninety nine
- What is the place value of digit 3 in 83765?
A. Tens
B. Hundreds
C. Thousands
D. Ones
- Work out: $69476 + 27948$
A. 98414
B. 98324
C. 97424
D. 98424
- Which numbers are divisible by both 2 and 3?
A. 6, 9
B. 12, 24
C. 10, 15
D. 21, 24
- What is the total value of 7 in 6473?
A. 70
B. 700
C. 7000
D. 7
- What is the area of a square of 7cm in length?
A. 28cm
B. 35cm²
C. 49cm
D. 49cm²
- What is the next number in the pattern?
5, 10, 15, 20, _____
A. 15
B. 25
C. 30
D. 35
- Which number comes just before 1000?
A. 99
B. 9999
C. 999
D. 1001
- What is the value of $44.44 + 22.22 + 0.222$?
A. 66.882
B. 288.44
C. 88.882
D. 44.222
- Solve $43 \times 20 =$
A. 86
B. 63
C. 860
D. 23
- Divide: $8 \overline{)248} =$
A. 81
B. 31
C. 88
D. 801
- What fraction is unshaded?




- A. $\frac{5}{8}$
B. $\frac{2}{8}$
C. $\frac{1}{4}$
D. $\frac{3}{8}$

- Find the perimeter

A. 216cm²
B. 60cm²
C. 60cm
D. 30cm
- Work out: $\frac{1}{7}$ of 56 =
A. 7
B. 8
C. 49
D. 63
- 8 metres = _____ centimetres
A. 800
B. 8 000
C. 8
D. 80 000
- Which one of the following numbers is not a multiple of 8?
A. 24
B. 64
C. 32
D. 53
- How many days are there in the months of June and July?
A. 60
B. 62
C. 61
D. 59
- Work out: $\frac{2}{7} + \frac{3}{7} + \frac{1}{7} =$
A. $\frac{6}{7}$
B. $\frac{6}{21}$
C. $\frac{5}{7}$
D. $\frac{4}{7}$
- Which is heavier; 3kg of sawdust and 3kg of stone?
A. 3kg sawdust
B. 3kg stones
C. None
D. 6kg stones
- What is 2009 take away 999
A. 2990
B. 2910
C. 1910
D. 1010
- Arrange the following numbers from the smallest to the largest; 37, 49, 8, 17
A. 49, 37, 17, 8
B. 37, 8, 17, 49
C. 8, 17, 37, 49
D. 17, 8, 37, 49
- How many minutes are there in two hours?
A. 48
B. 60
C. 14
D. 120
- Work out: $\frac{7}{8} - \frac{3}{8} =$
A. $\frac{4}{6}$
B. $\frac{4}{8}$
C. $\frac{10}{8}$
D. $\frac{3}{8}$
- Work out: $7.8 + 9 =$
A. 8.7
B. 16.8
C. 17.8
D. 18.8
- Which one of the following is an odd number?
A. 24
B. 37
C. 66
D. 54
- How many hours are there in 4 days?
A. 240
B. 96
C. 48
D. 96
- Fill in the missing number
 $\frac{1}{2} = \frac{3}{?}$
A. 2
B. 6
C. 8
D. 4

28. How many legs do 13 rabbits have?
 A. 26 B. 13 C. 39 D. 52
29. Work out: $45\text{m} \div 9 =$
 A. 5m B. 9m
 C. 36m D. 54m

30. What is the time shown on the clockface?



- A. Two past five
 B. Five past two
 C. Ten minutes to five
 D. Twenty five minutes past two

31. How many months are there in two years?
 A. 120 B. 48 C. 2 D. 24

The table below shows the number of vehicles that passed through Mahua primary school. On a Friday morning. Use it to answer questions 32-36

Type of vehicle	No. of vehicles
Probox	12
Nissan	36
Sienta	40
Fielder	29
Lorries	22

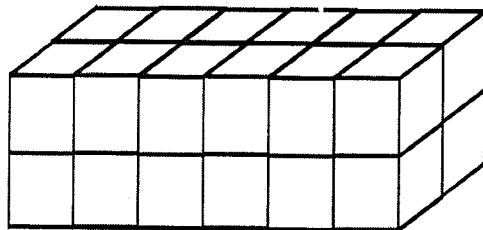
32. Which type of vehicle had the highest number?
 A. Probox B. Sienta
 C. Lorries D. Nissan
33. Which type of vehicle had the smallest number?
 A. Lorries B. Fielder
 C. Probox D. Nissan
34. What was the total number of probox and nissan?
 A. 36 B. 69 C. 48 D. 51
35. What was the total number of Sienta and Lorries?
 A. 62 B. 48 C. 76 D. 69
36. What was the total number of vehicles that passed through the school that Friday morning?
 A. 129 B. 139 C. 88 D. 142
37. How many years are there in 24 months?
 A. 3 B. 4 C. 2 D. 1
38. $\frac{1}{2}$ litre + $\frac{1}{4}$ litre =
 A. $\frac{1}{2}$ L B. $\frac{1}{4}$ L
 C. $\frac{3}{4}$ L D. $\frac{2}{4}$ L
39. $\frac{1}{5} \times 45 =$
 A. 5 B. 9 C. 40 D. 50

40. m cm
 6 70
 + 2 60

- A. 9m 30cm
 B. 8m 130cm
 C. 4m 10cm
 D. 9m 10cm

41. Divide: $3 \overline{)312} =$
 A. 104 B. 14 C. 114 D. 309
42. Muungano primary school has 417 boys and 539 girls. How many pupils are there in this school?
 A. 956 B. 946
 C. 959 D. 122
43. Work out: $43 \times 21 =$
 A. 129 B. 903 C. 86 D. 64
44. Subtract 8.4 from 30
 A. 38.4 B. 22.4
 C. 21.6 D. 21.4
45. Wanjira was sent to the shop to buy the following items
 - 1 loaf of bread Sh. 45
 - 1 kilogram of sugar Sh. 130
 - Tea leaves Sh. 20
 What change did she get from Sh. 200?
 A. Sh. 195 B. Sh. 205
 C. Sh. 5 D. Sh. 35

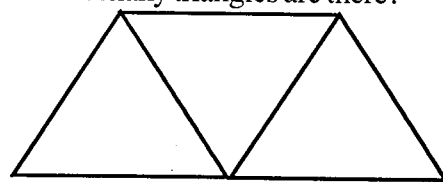
46. How many small cubes are used to make this cube?



- A. 28
 B. 12
 C. 36
 D. 24

47. Work out: $274 \times 0 =$
 A. 0 B. 273 C. 275 D. 274


48. How many triangles are there?







- A. 5 B. 3 C. 4 D. 1

49. A family uses 3 litres of milk per day. How many half litres of milk does the family use in a week?
 A. 21 B. 42 C. 6 D. $3\frac{1}{2}$

50. What is the next pattern?



- A.  B.  C.  D. 

SCHOOL BASED EVALUATION TEST

STD 4 TERM 3 2017

ENGLISH

4

Time: 1 Hr 40 Min

Read the passage below and fill the gaps

Kamau is a 1. He 2 on his farm from morning till evening. He is always very 3 after a day's work. When it is almost time for 4, Kamau hires a 5 to prepare his field. It pulls a 6 that cuts and turns the 7. After the land is prepared, Kamau uses a 8 to dig holes for sowing 9 from which the plants grow.

Before planting, Kamau adds 10 to the 11 to make it fertile. He has put a 12 round the farm to keep away 13 and people who may destroy his crops. At 14 time, a farm worker carries some of the harvest in a 15. he has to push it through the field.

- | | |
|-----------------|--------------|
| 1. A. farmer | B. tailor |
| C. nurse | D. fisherman |
| 2. A. sleeps | B. sings |
| C. works | D. reads |
| 3. A. angry | B. tired |
| C. sorry | D. short |
| 4. A. playing | B. laughing |
| C. running | D. planting |
| 5. A. tractor | B. bicycle |
| C. train | D. bus |
| 6. A. cart | B. plough |
| C. spoon | D. jembe |
| 7. A. ash | B. sand |
| C. trees | D. soil |
| 8. A. wheel | B. saw |
| C. hoe | D. pencil |
| 9. A. seeds | B. fruits |
| C. flowers | D. roots |
| 10. A. firewood | B. manure |
| C. milk | D. flour |
| 11. A. flour | B. house |
| C. fire | D. soil |
| 12. A. road | B. river |
| C. fence | D. string |
| 13. A. animals | B. birds |
| C. workers | D. insects |
| 14. A. havest | B. harvest |
| C. hevest | D. hasvt |
| 15. A. train | B. matatu |
| C. wheelbarrow | D. tractor |

Write one word for the following

16. Kenya, Uganda, Tanzania, Sudan, Ethiopia
A. Cities B. Countries
C. Counties D. Places
17. Spanner, Screwdriver, pliers, hammer
A. tools B. furnitures
C. utensils D. things
18. Come, go, sing, dig, drink
A. games B. fruits

C. vehicles D. verbs

Choose the plural of the given words

19. Mouse _____
A. mouses B. mice
C. mise D. mices
20. Me _____
A. us B. our
C. mine D. they
21. Sheep _____
A. sheeps B. sheps
C. sheep D. seep

Write a similar word in place of the underlined one

22. He can't talk as he is dump.
A. help B. buy
C. speak D. try
23. My brother gave the right answer
A. correct B. collect
C. hard D. light

Choose the opposite of the underlined word

24. The table is too heavy to lift.
A. soft B. light
C. difficult D. right
25. Give me a sharp panga.
A. dull B. dirty
C. long D. blunt

Complete the following

26. His feet were as cold as _____
A. fire B. water
C. ice D. butter
27. My mother was as busy as a _____
A. lion B. deer
C. pig D. bee
28. My teacher was as happy as a _____
A. king B. bat
C. honey D. feather

Fill the correct pronouns in the following sentences

29. The woman washes _____ clothes.
A. his B. her
C. their D. its

30. I am doing _____ homework.

- A. our B. his
C. mine D. my

Read the passage and answer questions 31 - 39

Ali, John and Simon are great friends. They are always together. Ali is the oldest boy. He is fifteen years old. John and Simon are three years younger than Ali. Although John is younger, he is the tallest and Simon the shortest.

The three boys are talking about what they will do this Saturday. Ali said, "I will help my mother dig weeds in the shamba and then I will go to watch a football game in the afternoon. John said, "I will help my father to feed the chickens in the morning and then plant some tomatoes in the afternoon. Simon said, "I will be in the field looking after our cattle the whole day.

31. Who is the oldest boy?
A. John B. Simon
C. Ali D. Not told
32. How old is Simon?
A. ten years
B. twelve years
C. three years
D. Six years
33. Who is the tallest boy?
A. Simon B. Ali
C. James D. John
34. What did Ali say he would do in the afternoon?
A. watch football
B. feed chickens
C. plant maize
D. uproot weeds
35. Who of the three boys will be doing work at home in the morning?
A. Simon B. John
C. Ali D. James
36. Who will do only one activity the whole day?
A. Ali B. John
C. Simon D. Nobody
37. Who is the shortest boy?
A. Simon B. John
C. Ali D. Peter
38. Ali, John and Simon were great _____
A. enemies
B. brothers
C. friends
D. classmates
39. Which is the best title for the passage?
A. Watching football
B. Feeding the animals
C. Working in the shamba
D. The three friends

Read the letter below and answer questions 40 - 50

Mwenja Pri. School
P.O. Box 44
Nyahururu
12th Sept. 2017.

Dear Susan,

I would like to inform you that my birthday will be on 20th September and I have invited you to attend. It will be a great day. I will be very happy to see you. My parents will be happy too. My father will take us to the Park with his car after the birthday.

Please don't fail to come. Come with your cousin Natasha. I hope your mother will give you permission and escort you to our home. I wish you the best.

Yours Cousin,
Dorcias.

40. The one who wrote the letter lives in _____
A. Ol Kalou B. Kasuku
C. Nyahururu D. Nairobi
41. Who wrote this letter?
A. Susan B. Dorcas
C. Natasha D. Not told
42. How many address are in this letter?
A. Two B. Three
C. One D. Four
43. When is the birthday?
A. 20th September B. 12th September
C. 20th October D. 12th October
44. The letter was written to _____
A. Natasha B. Dorcas
C. Mother D. Susan
45. After the birthday, where will the children be taken ?
A. Park B. River
C. Lake D. town
46. Who will accompany Susan to the party?
A. Dorcas B. her father
C. her mother D. Natasha
47. Who is Susan to Natasha?
A. Sister B. Cousin
C. Niece D. Aunt
48. Who will give Susan permission?
A. Her brother B. He cousin
C. Her mother D. Her friend
49. Which school does Susan go to?
A. Inooro B. Weru
C. Kahingo D. Mwenja
50. The type of letter is _____
A. Official B. Friendly
C. Mine D. School

SCHOOL BASED EVALUATION TEST

MUHULA WA TATU 2017

KISWAHILI DARASA LA NNE

4

Muda: Saa 1 Dak. 40

Soma kifungu kifuatacho kisha ujibu maswali kutoka nambari ya 1 - 15 kwa usahihi

Ukimwi ni 1 unaosababishwa na 2 wa kinga 3. Ukimwi ni ugonjwa 4 sana kwani 5 tiba. Si vizuri kutojipusha 6 ugonjwa huu nduli. Kunazo njia nyingi 7 kujikinga tokana na ugonjwa huu. Njia zinazosababisha kuenea kwa 8 huu ni kama kutumia 9 na 10 zilizotumiwa na mtu 11. La busara ni kuwa na tabia njema na kujiepusha na mapenzi ya 12. Kupenda 13 na 14 ndicho 15 cha shida hii.

- | | |
|-----------------|---------------|
| 1. A. rafiki | B. ugonjwa |
| C. ajizi | D. mwandani |
| 2. A. ukosevu | B. ukashifu |
| C. ukosefu | D. kukosa |
| 3. A. akilini | B. mwirini |
| C. afueni | D. mwilini |
| 4. A. hatari | B. hatali |
| C. mzuri | D. kababe |
| 5. A. unayo | B. hakuna |
| C. hauna | D. unalo |
| 6. A. na | B. kwa |
| C. lau | D. japo |
| 7. A. kwa | B. za |
| C. mwa | D. la |
| 8. A. rafiki | B. urafiki |
| C. ugonjwa | D. njia |
| 9. A. wembe | B. nyembe |
| C. kisu | D. sindano |
| 10. A. shindano | B. cindano |
| C. sindana | D. sindano |
| 11. A. mwingine | B. mwengine |
| C. mingine | D. yoyote |
| 12. A. kiraiya | B. kiholela |
| C. kirafiki | D. kirejareja |
| 13. A. kicheko | B. anasa |
| C. tarehe | D. furaha |
| 14. A. starehe | B. milele |
| C. huzuni | D. mgeni |
| 15. A. kionjo | B. mwanzo |
| C. chanzo | D. shinda |

Katika swali 16 - 30 jibu swali kulingana na maagizo

16. Kifaa kinachotumiwa na seremala kupimia urefu au ufupi ni _____
- | | |
|----------------|-------------|
| A. pembe mraba | B. kekee |
| C. utepe | D. bisibisi |
17. Mdudu ambaye ana miguu mingi sana duniani ni _____
- | | |
|-------------|-----------|
| A. konokono | B. kiwavi |
| C. jongoo | D. buibui |

Andika umoja:

18. Maswali hayo ni magumu
- | | |
|------------------------|-----------------------|
| A. Swali hii ni ngumu | B. Swali hili ni gumu |
| C. Swali hili ni ngumu | D. Swali hii ni gumu |
19. Neno kufuli liko katika ngeli gani ?
- | | |
|------------|------------|
| A. A - WA | B. I - ZI |
| C. LI - YA | D. YA - YA |

Kanusha:

20. Amekunywa soda na chai
- | | |
|----------------------------|------------------------------|
| A. Sijakunywa soda na chai | B. Hajanywa soda wala chai |
| C. Hajanywa soda na chai | D. Hajakubywa soda wala chai |
21. Ugonjwa unaomfanya mtu kuanguka na kupoteza fahamu huitwa _____
- | | |
|-------------|-------------|
| A. kifafa | B. ukimwi |
| C. kichocho | D. kifaacho |
22. Kitambaa cha kufunikia dirisha huitwa _____
- | | |
|-----------|------------|
| A. zulia | B. foronya |
| C. busati | D. pazia |
23. Ni ndege yupi kati ya hawa hufugwa nyumbani?
- | | |
|----------|---------------|
| A. Heroe | B. Njiwamanga |
| C. Sigi | D. Korongo |
24. Ni rangi gani kati ya hizi haipatikani katika upinde wa mvua?
- | | |
|-------------|-------------|
| A. Nyekundu | B. nyeupe |
| C. Manjano | D. Urujuani |
25. Tumia kiunganishi kifaacho kujaza pengo. Hatujala _____ kunywa chochote.
- | | |
|-----------|---------|
| A. na | B. wala |
| C. lakini | D. bila |
26. Ngómbe ni kwa zizi kama vile kiwavi ni kwa _____
- | | |
|----------|---------------|
| A. kiota | B. kifukofuko |
| C. tundu | D. Mzinga |
27. Barabarani watu huvuka barabara katika _____
- | | |
|--------------------|--------------------|
| A. paraja | B. kona |
| C. kivuko cha umma | D. taa za barabara |

Tegua kitendawili

28. Mtungi wangu hauishi maji.

- A. bahari B. mto
C. ziwa D. mvua

Jaza pengo

29. _____ mwenye _____ amepika _____

- A. Mchuzi, ujuzi, mchuuzi
B. Ujuzi, mchuzi, mchuuzi
C. Mchuuzi, mchuzi, ujuzi
D. Mchuuzi, ujuzi, mchuzi

30. Chagua sentensi iliyoandikwa katika wakati ujao.

- A. Asha atapanga vitabu mkobani.
B. Mwalimu husoma hadithi
C. Aliandika insha ya kupendeza
D. Ninasoma kitabu cha hadithi

Soma kifungu kisha ujibu maswali 31 hadi 40

Hapo zamani palikuwa na mvulana aliyeitwa Mutiso.

Alitoka katika familia maskini sana. Walimwalia mwana wao kwa matumaini makubwa kwani yeye ndiye alikuwa kifungua mimba. Alisoma kwa shida sana ili aweze kumaliza umaskini uliokuwa kwao.

Mvulana huyu alikuwa na bidii ya mchwa na aliweza kufaulu katika masomo yake. Baadaye alibarikiwa kuwa mhandisi na kuweza kuwasaidia jamaa zake sana. Kwa kweli subira huvuta heri.

31. Mvulana anayezungumziwa katika kifungu hiki anaitwa _____

- A. Mutiso B. Paulo
C. Ali D. Sila

32. Familia ya mtoto huyu ilikuwa _____

- A. tajiri B. maskini sana
C. mzuri sana D. mbaya

33. Familia hii ilimwalia mwana wao kwa _____ makubwa.

- A. majuto B. maagizo
C. matumaini D. uangalifu

34. Mvulana huyu alikuwa _____

- A. kifungua mimba B. kifunga mimba
C. mdogo sana D. mwana pekee

35. Kwa kuwa walikuwa maskini mvulana huyu alisoma kwa _____ sana.

- A. furaha B. bahati
C. shida D. kusaidiwa

36. Alitaka kufanyia nini jamii yake baada ya masomo

- A. kuwahamisha
B. kuwanunulia shamba
C. kuwatoa katika umaskini
D. kuwatoroka

37. Mvulana huyu alikuwa na bidii ya _____

- A. Babake B. mamake
C. mwalimu wake D. mchwa

38. Aliweza kufanya vipi katika masomo yake?

- A. Kuanguka B. Kuacha masomo
C. Kufaulu D. Kufanya vibaya

39. Baadaye mvulana huyu alifanya kazi gani?

- A. Ualimu B. Uhandisi
C. Udaktari D. Uakili

Ni nini maana ya methali hii:

40. Subira huvuta heri

- A. Mwenye uvumilivu hupata baraka
B. Asiye mvumilivu hupata baraka
C. Mwenye heri hupata subira
D. Mwenye subira hapati baraka

Soma hadithi hii kisha ujibu maswali 41 hadi 50

Kuna walimu kumi katika shule yetu. Wanne hufunza Kiswahili na ni wa kike. Waliobaki hufunza hesabu. Mwalimu wetu wa darasa ni wa Kiswahili. Mwalimu mkuu hufunza kiswahili pia. Wanafunzi darasani, kumi huvaa kaptura. Waliobaki huvaa rinda. Kinara wa darasa ndiye mkakamavu kwa uari na tunamtii sana. Shuleni kuna viwanja vya netiboli, kandanda, voliboli. Madarasa yote ni kumi na mawili shuleni.

41. Kuna walimu wangapi katika shule hiyo?

- A. Tisa B. Wanne
C. Kumi na wawili D. Kumi

42. Wanafunzi katika darasa la mwandishi ni wangapi?

- A. Hawajatajwa B. Tisa
C. Kumi D. Hamsini

43. Wavulana ni wangapi?

- A. Arobaini B. Sitini
C. Kaptura D. Kumi

44. Mwalimu mkuu ni _____

- A. mwanamume
B. mwanamke
C. mkulima
D. daktari

45. Walimu wa kiume ni wangapi?

- A. Watano B. Saba
C. Sita D. Kumi

46. Katika darasa, aliye mzee sana kwa wote ni _____

- A. kinara B. mwandishi
C. nduguye D. dadake

47. Kuna viwanja vingapi vilivyotajwa?

- A. 5 B. 4
C. 3 D. 2

48. Tunatumia _____ kucheza kandanda

- A. mkono B. vijiti
C. miguu D. magoti

49. Kuna _____ katika mlingoti wa netiboli.

- A. mche B. pete
C. paa D. dawati

50. Kichwa kinachofaa cha hadithi hii ni _____

- A. Nyumbani mwetu
B. Zanahati mwetu
C. Kiamboni kwetu
D. Shule yetu

JINA LAKO	
JINALASHULE YAKO	

SCHOOL BASED EVALUATION TEST

KISWAHILI SEHEMU YA PILI: INSHA **4**
DARASA LA NNE MUHULA WA TATU 2017

MUDA : DAKIKA 40

Andika insha kuhusu

CHAKULA NIKIPENDACHO

SCHOOL BASED EVALUTATION TEST

MARKING SCHEME TERM 3 2017

4

<u>ENGLISH</u>	<u>KISWAHILI</u>	<u>MATHS</u>	<u>SCIENCE</u>	<u>SOCIAL STUDIES</u>
1. A 31. C	1. B 31. A	1. C 31. B	1. B 31. C	1. B 31. D 61. B
2. C 32. B	2. C 32. B	2. C 32. B	2. B 32. A	2. D 32. C 62. C
3. B 33. D	3. D 33. C	3. C 33. C	3. D 33. C	3. C 33. B 63. D
4. D 34. A	4. A 34. A	4. B 34. C	4. C 34. A	4. D 34. B 64. A
5. A 35. B	5. C 35. C	5. A 35. A	5. C 35. A	5. B 35. C 65. C
6. B 36. C	6. A 36. C	6. D 36. B	6. A 36. D	6. C 36. A 66. B
7. D 37. A	7. B 37. D	7. B 37. C	7. C 37. D	7. D 37. D 67. C
8. C 38. C	8. C 38. C	8. C 38. C	8. D 38. D	8. B 38. B 68. B
9. A 39. D	9. B 39. B	9. A 39. B	9. D 39. C	9. C 39. C 69. C
10. B 40. C	10. D 40. A	10. C 40. A	10. A 40. C	10. B 40. D 70. C
11. D 41. B	11. A 41. D	11. B 41. A	11. D 41. A	11. D 41. B 71. A
12. C 42. C	12. B 42. A	12. D 42. A	12. A 42. B	12. C 42. C 72. A
13. A 43. A	13. B 43. D	13. C 43. B	13. B 43. B	13. C 43. A 73. A
14. B 44. D	14. A 44. B	14. B 44. C	14. C 44. B	14. D 44. B 74. B
15. C 45. A	15. C 45. C	15. A 45. C	15. A 45. A	15. B 45. C 75. B
16. B 46. D	16. C 46. A	16. D 46. D	16. D 46. C	16. C 46. A 76. A
17. A 47. B	17. C 47. C	17. C 47. A	17. D 47. D	17. D 47. C 77. C
18. D 48. C	18. B 48. C	18. A 48. B	18. A 48. C	18. B 48. A 78. A
19. B 49. D	19. C 49. B	19. C 49. B	19. A 49. B	19. C 49. D 79. C
20. A 50. B	20. B 50. D	20. D 50. C	20. A 50. D	20. A 50. C 80. B
21. C	21. A	21. C	21. B	21. B 51. C 81. D
22. C	22. D	22. D	22. A	22. C 52. A 82. B
23. A	23. B	23. B	23. B	23. D 53. D 83. C
24. B	24. B	24. B	24. B	24. A 54. C 84. D
25. D	25. B	25. B	25. C	25. C 55. A 85. C
26. C	26. B	26. B	26. B	26. D 56. B 86. B
27. D	27. C	27. B	27. D	27. D 57. B 87. C
28. A	28. A	28. D	28. B	28. C 58. C 88. A
29. B	29. D	29. A	29. D	29. A 59. A 89. D
30. D	30. A	30. D	30. A	30. B 60. D 90. B

A COMPOSITION MARKING SCHEME

MARKING CRITERION

1. The composition will be assessed according to the following guidelines.

- The maximum mark will be 40 and the minimum mark 01

- Does the script show that the candidate can communicate accurately, fluently and imaginatively in English?

Accuracy (8 marks)

- a) Correct tenses and agreement of verbs (4 marks)
- c) Following a sequence (4 marks)

(8 marks)

- b) Accurate use of vocabulary (4 marks)
- d) Correct punctuation (4 marks)

Fluency (8 marks)

- a) Words in the correct order (4 marks)
- c) Correct spelling (4 marks)

(8 marks)

- b) Sentence connection and paragraphs (4 marks)
- d) Ideas developed in logical sequence (4 marks)

Imagination (8 marks)

- a) Unusual but appropriate use of words and phrases (4 marks)
- b) Variety of structure (4 marks)

NB: Please, teachers are requested to scrutinize this marking scheme before use, it is worth.