

**GLOWING SUPREME SERIES
STANDARD FOUR 2017
ENGLISH**

Time: 1 hour 40 minutes

Choose the best answer from the choices given to fill in the blank spaces numbered 1-15

Once 1 a time there lived 2 old man with his 3. His name was Muchai. He 4 with his four sons in 5 village. He had a farm but his family was 6 as the four sons 7 always busy in fighting instead 8 helping their father 9 cultivating 10 land. So the old man was very unhappy. One day, he called 11 together and 12 them work to do. The work was so 13 that they 14 to 15 in order to finish.

- | | | | | |
|-----|-------------|-----------|-----------|--------------|
| 1. | A. in | B. up | C. on | D. upon |
| 2. | A. the | B. an | C. a | D. this |
| 3. | A. wife | B. waif | C. waive | D. wive |
| 4. | A. lived | B. live | C. left | D. lives |
| 5. | A. a | B. an | C. in | D. the |
| 6. | A. big | B. poor | C. unable | D. small |
| 7. | A. were | B. are | C. was | D. is |
| 8. | A. off | B. in | C. of | D. on |
| 9. | A. to | B. at | C. on | D. in |
| 10. | A. the | B. theirs | C. his | D. hers |
| 11. | A. they | B. them | C. their | D. there |
| 12. | A. gave | B. give | C. given | D. gives |
| 13. | A. easy | B. simple | C. small | D. difficult |
| 14. | A. have | B. has | C. had | D. haven't |
| 15. | A. separate | B. unite | C. fight | D. cry |

Choose the correct word

16. The man _____ to the hospital.
A. rush B. lashed
C. rushed D. rusheded
17. We sing songs to _____ to make them sleep.
A. babies B. babys
C. baby D. babyies
18. There was _____ gum in the bottle.
A. any B. some
C. many D. a
19. It has been raining _____ two hours.
A. since B. to
C. for D. at
20. This apple belong to _____. It is hers.
A. her B. hers
C. him D. at

Choose the word that does not fit in the group

21. A. blue B. red
C. circle D. yellow
22. A. January B. Wednesday
C. July D. June

Choose one word for the following

23. Desks, tables, chairs, _____
A. wood B. things
C. tools D. furniture

24. Minibuses, buses, cars, _____
A. vans B. cars
C. vehicles D. moveables
25. Cabbages, kales, tomatoes, _____
A. items B. vegetables
C. fruits D. greens

Complete the sentences below

26. As brave as a _____
A. cheetah B. guard
C. lion D. dog
27. As white as _____
A. wool B. cotton
C. milk D. snow

Choose the correct plural word for the following words

28. Child
A. childes B. childs
C. children's D. children
29. Mouse
A. mice B. mouses
C. mices D. mouses
30. Ox
A. oxes B. ox
C. oxens D. oxen

Read the following passage carefully and answer questions 31-40.

The cobra is the most poisonous snake in India. Its colour is sometimes yellowish, sometimes brown with a dirty white underside. It is about five feet long. When it is irritated it raises up the front part of its body, spreads out the eight front pairs of ribs at the side, so that a shield shaped hood is formed below the head. The rest of the body is curled round and gives the creature firm support.

On the back of its head are yellow markings. The cobra lives in old walls or heaps of stones and timber. In fact, anywhere it can find a shelter hole.

31. What colour is cobra?
 A. A very dirty colour
 B. Stripped in colour
 C. Yellowish and sometimes brown
 D. Brown all over
32. The cobra is the _____ snake in India.
 A. Most harmless B. Largest
 C. Most deadly D. Most brightly coloured
33. What does it do when it is angry?
 A. It becomes poisonous
 B. It spreads out its tail
 C. It curls the front part of its body round
 D. It makes a hood below its head with its ribs
34. How can the snake support itself?
 A. It has a shield
 B. It has strong ribs
 C. The lower part of its body is curled round
 D. It is long and thick
35. Where would you find a cobra?
 A. On the branches of a tree
 B. In a cave in rocks
 C. Underground
 D. In any protected hole
36. How many front ribs does a cobra have?
 A. Eight B. Sixteen
 C. Six D. Thirty two
37. What markings are found at the back of cobra's head?
 A. Yellowish brown B. Brown
 C. Yellow D. White and yellow
38. _____ colour is found on the underside of cobra's body?
 A. Dirty yellow B. Dirty brown
 C. Dirty white D. White and yellow
39. In which country is cobra the most poisonous snake?
 A. Canada B. India
 C. Kenya D. China
40. The best title for the passage would be
 A. The dirty cobra
 B. How cobra protects itself
 C. Cobra, the most deadly snake in India
 D. Cobra and its home

Read the passage below carefully and answer questions 41 -50 .


Stumpy was an old blue-black cattle dog that lived in Australia. He got his name because when he was only a puppy his tail was cut off. As there was only a stump where his tail should have been, people called him Stumpy.

For a while he belonged to a milkman who thought he was a 'silly' dog and not worth training. He gave him out to a family where there were several children. Stumpy was given a great welcome.

Stumpy became fond of two small children. Joan and Mandy. He watched over them wherever they went.

Joan was four years old and Mandy two. So they needed a lot of watching as they were always getting into one kind of mischief or another.

41. In which country did Stumpy live?
- A. India B. America
C. Kenya D. Australia
42. When he was only a puppy his _____ was cut off.
- A. stump B. nose
C. tail D. ear
43. Whose puppy was he at first?
- A. Milkman B. Australia's
C. Mother's D. Joan's
44. A silly dog. This means the milkman thought Stumpy was _____
- A. useless B. brave
C. clever D. foolish
45. Which word in the passage tells us that the family mentioned had many children?
- A. Seven B. A lot
C. Fond D. Several
46. Who was older, Joan or Mandy?
- A. Mandy B. Stumpy
C. Joan D. Not told
47. What is a puppy?
- A. A young goat
B. A female dog
C. A young bull
D. A young dog
48. How was Stumpy received in the new family?
- A. Was not wanted
B. Was given great welcome
C. Was not loved
D. Was beaten
49. Choose the sentence that is true.
- A. Stumpy had a tail when he was born
B. Stumpy hated the milkman and his family
C. Stumpy had several siblings
D. Stumpy was not good
50. The best title for the passage would be _____
- A. The Australian dog
B. The cattle dog
C. Stumpy the dog
D. The milkman



GLOWING SUPREME SERIES

DARASA LA NNE 2017

KISWAHILI

MUDA: 1: DAKIKA 40

Jaza kwa kuchagua jibu sahihi zaidi

Mtoto anapozaliwa 1 mama 2 hutunzwa 3 sana ili awe na 4 njema. Mama 5 humnyonyesha 6 na akilala yeye humlaza 7. Mtoto 8 ameshiba hulala uzingizi 9. Baada ya kutosheka 10 usingizi yeye 11 na kulia 12. Kulia 13 ndiko kusema 14 mtoto 15 ana njaa, kiu au ni mgonjwa.

- | | | | | |
|-----|------------|-----------|--------------|------------|
| 1. | A. na | B. ya | C. la | D. cha |
| 2. | A. lake | B. yake | C. yao | D. wao |
| 3. | A. uzuri | B. kizuri | C. vizuri | D. mzuri |
| 4. | A. avya | B. afia | C. hafya | D. afya |
| 5. | A. huu | B. huyu | C. hiki | D. hili |
| 6. | A. mwanawe | B. wanake | C. mwanao | D. mwanalo |
| 7. | A. kitanda | B. nyumba | C. kitandani | D. chini |
| 8. | A. akiwa | B. awe | C. kana | D. kila |
| 9. | A. nono | B. mkubwa | C. mnene | D. mnono |
| 10. | A. kwa | B. na | C. la | D. ni |
| 11. | A. huamua | B. huamka | C. hulala | D. hukaa |
| 12. | A. zana | B. saana | C. sana | D. sanaa |
| 13. | A. kule | B. huyu | C. huku | D. hiyo |
| 14. | A. kuwa | B. kua | C. kwa | D. kuwaa |
| 15. | A. huyu | B. huku | C. hiyo | D. hilo |

Kutoka swali la 16-30, chagua jibu lifaalo

16. Jibu salamu; hujambo ni

- A. jambo B. sijambo
C. sawa D. safi

17. Jaza pengo kwa kimilikishi

Timu _____ imeshinda.

- A. letu B. chetu
C. yetu D. mwetu

Kamilisha kwa -o-ote

18. Kipindi _____ kizuri hupendeza.

- A. lolote B. chochote
C. yoyote D. yote

19. Neno chura liko katika ngeli ya

- A. a -wa B. ki - vi
C. u - zi D. u - ya

20. Ndugu yako mkubwa huitwa

- A. dada B. ndugu
C. kaka D. binamu

21. Sehemu ya uso inayoota ndevu ni

- A. shavu B. kisogo
C. shingo D. kidevu

22. ***Kitendawili***

Hufukuzana lakini hawapatani

- A. adui B. mbwa na paka
C. sisimizi D. magurudumu ya gari

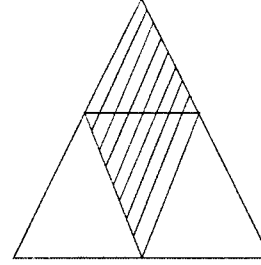
23. Wingi wa doa ni

- A. madoa B. madoadoa

C. doa

D. vidoa

24. Sehemu iliotelewa rangi ni



- A. thuluthi
B. robo
C. nusu
D. humusi

25. Kifaa cha ufundi cha kukongelea misumari ni

- A. nyundo B. msumeno
C. mbao D. chuma

26. Dada yake baba ni

- A. mjomba B. ami
C. mwana D. shangazi

27. Chakula cha mama ni kitamu kama

- A. asali B. sukari
C. peremende D. siagi

28. Makao ya ng'ombe huwa ni

- A. zizini B. myasini
C. mzingani D. nyikani

29. Tumia kiulizi

Kitabu _____ kimepotea.

- A. ipi B. kipi
C. lipi D. yupi

30. Kikembe cha punda ni


- A. kihongwe B. ndama
C. buu D. shibli

Soma kifungu hiki kisha ujibu maswali 41-50.

Bwana Wivu alitamani shamba la Bwana Kiasi lililokuwa kondeni, ukingoni palikuwa tambarare kama ufuo wa bahari. Kila siku alisikika akisema shamba lingekuwa lake angelijengea maanzili ya kifahari kando ya mto. Vile vile angejitengenezea bustani ya maua ya kifalme na kushinda akiogelea. Kila kulipokucha tamaa ya mlafi huyu iliongezeka. Alimwita Bwana Wivu na kumwambia kwamba ni mwiko kwao kuuza shamba la urithi. Hili lilimkera sana Bwana Wivu. Bidii zake zilipoambulia patupu alitafuta ushauri.

Watu walimwambia atumie cheo chake kumuondoa Bwana Kiasi njiani mwake. Jambo hili lilimfurahisha na akaamua kuchukua hatua kwa sababu ya uwezo wake. Aliwahusisha wanasheria, maafisa wa polisi na wengineo. Aliwatumia magaidi kumwagamiza mpinzani wake na kesi na vyeti vya shamba kuharibiwa. Hatimaye alijinyakulia shamba lile na kutimiza haja ya moyo wake. Hili lilithibitisha wazi kuwa mnyonge hana haki.

- | | | |
|--|---|-----------|
| 41. Bwana Wivu alitamani shamba la | C. Wezi | D. Polisi |
| A. Bwana | B. Bibi | |
| C. Bwana Kiasi | D. Bi Kiashi | |
| 42. Shamba la Bwana Kiasi lilikuwa | 47. Bwana Wivu alikerwa sana alipoambulia | |
| A. kondeni | A. pazuri | B. pabaya |
| B. uwanjani | C. patupu | D. yote |
| C. mjini | D. porini | |
| 43. Ukingoni pa shamba la Bwana Kiasi palikuwa | 48. Bustani ni shamba lenye | |
| A. na mlima | A. miti | |
| B. ma mabonde | B. maua | |
| C. tambarare | C. mahindi | |
| D. wezi | D. majani | |
| 44. Kila kulipokucha tamaa ya mlafi huyu | 49. Habari hii inaonyesha kuwa mnyonge | |
| A. ilipungua | A. ana haki | |
| B. iliisha | B. hupendwa | |
| C. ilipotea | C. hana haki | |
| D. iliongezeka | D. hubahatika | |
| 45. Bwana Kiasi alikataa kuuza shamba kwa kuwa lilikuwa la | 50. Kisa hiki ni kuhusu | |
| A. nduguye | A. Bwana wivu | |
| B. wazazi wake | B. Bwana Kiasi na shamba lake | |
| C. jirani | C. Bwana Wivu anunua shamba | |
| D. urithi | D. Bwana Wivu amnyanganya Bwana Kiasi shamba lake | |
| 46. Vyeti vya shamba viliharibiwa na nani? | | |
| A. Bwana Kiasi | | |
| B. Magaidi | | |

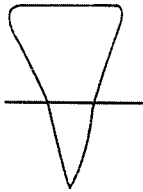


1. Which one of the following is a useful animal?

A. Rat B. Housefly

C. Cat D. Fleas

2. Name the tooth below.



A. pre-molar B. molar

C. canine D. incisor

3. Change from a seed into a young plant is known as

A. seedling B. germination

C. planting D. irrigation

4. A ladder is used for

A. climbing tall trees B. carrying heavy load

C. driving in nails D. cutting wood

5. _____ is produced when a guitar is plucked.

A. Light B. Shadow

C. Sound D. Shade

6. Body movements used to communicate are known as

A. noise B. words

C. smiling D. gestures

7. Shadow is shortest at

A. morning B. noon

C. evening D. night

8. A place where we get water from is known as a

A. storage of water B. river

C. source of water D. dam

9. When the plants grow farmers take care of them by

A. planting B. cutting

C. ploughing D. weeding

10. Dry soil gives us

A. dust B. mud

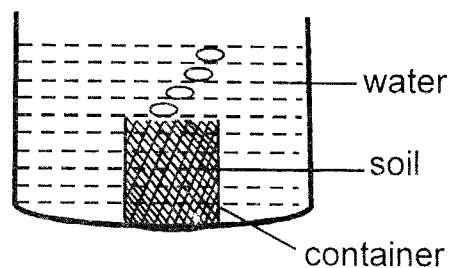
C. models D. rough

11. Which one of the following animals will **not** swim?

A. Fish B. Millipede

C. Tadpole D. Crocodile

12. Study the experiment below.

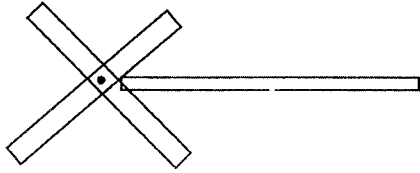


The experiment shows that soil contains

A. bubbles B. particles

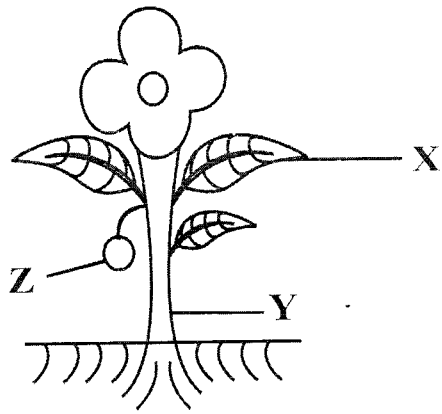
- A. bean B. banana
C. maize D. pawpaw

28. This is a _____



- A. kite B. propeller
C. cross D. stick
29. _____ can destroy our teeth.
- A. Sugarcane B. Maize
C. Cassava D. Sweets
30. Which one of the following requires a lot of clay to model?
- A. Elephant B. Letter E
C. Cup D. Plate
31. At night we can get light from
- A. sun B. lamp
C. plate D. mirrors
32. A _____ can walk and fly.
- A. cat B. rat
C. bird D. tortoise
33. _____ soil contains sand, clay, dead animal and dead plant particles.
- A. Silt B. Sand
C. Clay D. Loam

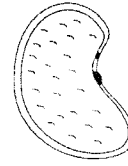
34. A cow does **not** give us
- A. meat B. wool
C. milk D. skin
35. The last teeth to be shed are the
- A. premolars B. molars
C. incisors D. canines
36. There are _____ types of soil.
- A. two B. one
C. three D. four
37. The house of a dog is called a
- A. hut B. shed
C. hutch D. kennel
38. Which one of the following crops is used as food?
- A. Sisal B. Maize
C. Cotton D. Flax
39. We use the sense of _____ to tell whether something is hot or cold.
- A. hearing B. smelling
C. seeing D. feeling
40. Vegetables should be _____ before cutting.
- A. cooked B. cut
C. washed D. peeled
41. Name the part labelled Z.



- A. flower B. fruit
C. stem D. root

42. Which crop do we eat the part marked Y?
A. Sugarcane B. Carrot
C. Cabbage D. Onion
43. Which one of the following harmful animals will suck blood from animals?
A. Tick B. Termite
C. Rat D. Snake
44. In order to have strong and healthy teeth we should
A. eat sweets
B. open sodas with our teeth
C. eat roasted maize
D. eat cakes
45. We use water for _____ when we are thirsty.
A. cooking B. drinking
C. washing D. bathing

46. This is a _____ seed.



- A. maize B. rice
C. bean D. wheat

47. AIDS is caused by
A. HIV virus B. mosquito
C. fleas D. tics
48. Animals kept at home should be
A. beaten B. mistreated
C. killed D. taken care of
49. Baskets are made from _____ crop.
A. cotton B. sisal
C. neem D. ginger
50. A child aged 6 years has _____ canines in each jaw.
A. six B. four
C. two D. eight

GLOWING SUPREME SERIES

STANDARDFOUR2017

MATHEMATICS

Time: 2 Hours



1. What is the number nine thousand, nine hundred and ninety nine written in figures?

A. 9099 B. 999

C. 9999 D. 90099
2. Write the place value of digit 7 in the number 90743.

A. 700 B. Hundredths

C. Hundreds D. Seven hundred
3. Work out;

$500 - 411 =$

A. 89 B. 99

C. 111 D. 98
4. Which of the following represents the number 4326 in expanded form?

A. $400 + 300 + 20 + 6$

B. $4000 + 300 + 20 + 6$

C. $40000 + 300 + 20 + 6$

D. $4000 + 320 + 6$
5. Find the value of $791 + 209 =$

A. 910 B. 1000

C. 1010 D. 9010
6. Find the missing numbers in the pattern


14, 18, 22, 26, _____

A. 28 B. 30

C. 32 D. 29
7. What is $\frac{1}{4}$ of 40?

A. 44 B. 36

C. 30 D. 10
8. The figure drawn below is a _____



A. rectangle B. square

C. cube D. diamond star
9. Alex had 90 oranges which he arranged into 9 piles each having the same number of oranges. How many oranges were in each pile?

A. 81 B. 10

C. 99 D. 1
10. Work out $3 \times 0 \times 3$

A. 9 B. 6

C. 0 D. 30
11. A class has 40 pupils. During the term 5 pupils went to a boarding school and 5 pupils joined the class from a new school. How many pupils were in the class at the end of the term?

A. 45 B. 50

C. 40 D. 35
12.

Weeks	days
10	0
- 4	2

A. 5 wks 5 days B. 5 wks 8 days

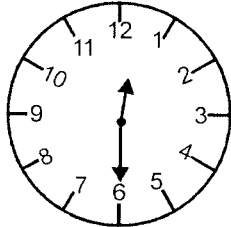
C. 6 wks 2 days D. 14 wks 2 days

13. Work out;

$$17842 + 3953 + 469 =$$

- A. 22164 B. 21364
C. 22264 D. 22624

14. What is the time on the clockface?



- A. Half past six B. Twelve o'clock
C. Half past one D. Half past twelve

15. Which one is **not** a factor of 20?

- A. 4 B. 6
C. 5 D. 10

16. Write thirty three thousand and three hundred in figures

- A. 33300 B. 330300
C. 33000300 D. 30300

17. Work out;

$$\begin{array}{r} \text{sh} \quad \text{cts} \\ 18 \quad 16 \\ + 12 \quad 14 \\ \hline \end{array}$$

- A. sh 210 210 cts B. sh 20 20 cts
C. sh 30 20 cts D. sh 30 30 cts

18. Which one of the following numbers is ODD?

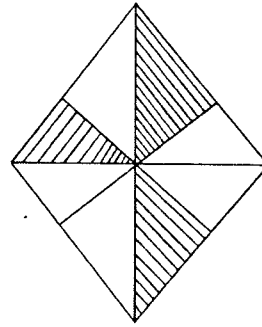
- A. 140 B. 248
C. 617 D. 776

19. Fill in the missing number

$$149 - \square = 40$$

- A. 109 B. 100
C. 189 D. 140

20. What fraction of the whole is unshaded?



- A. $\frac{5}{8}$ B. $\frac{4}{8}$
C. $\frac{8}{5}$ D. $\frac{3}{8}$

21. Work out;

$$75 + 8036 + 894$$

- A. 9105 B. 9005
C. 90105 D. 9015

22. Which one of the following numbers is divisible by both 2 and 5?

- A. 125 B. 100
C. 87 D. 96

23. What is the total value of digit 4 in the number 2458?

- A. 4000 B. 400
C. 2400 D. Hundreds

24. Which list consists of even numbers only?

- A. 44, 18, 28 B. 17, 20, 31
C. 14, 25, 36 D. 11, 21, 27

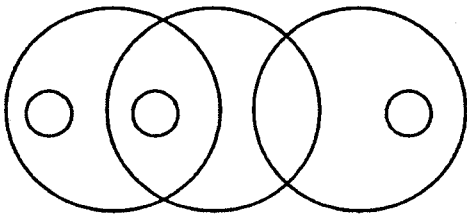
25. Meg shared 56 sweets among her seven friends. How many sweets did each get?

- A. 9 B. 5
C. 6 D. 8

26. Which of the fractions below is the largest?

- A. $\frac{1}{4}$ B. $\frac{1}{6}$
C. $\frac{1}{12}$ D. $\frac{1}{10}$

27. How many circles are in the figure below?



- A. 6 B. 8
C. 9 D. 7
28. A pipe is 889 m long and another one is 224 m long. If they are joined, what is their total length?
- A. 1113 B. 10103
C. 1013 D. 1103
29. Fill in the missing number;
- $$\square / 8 - 2/8 = 5/8$$
- A. 3 B. 4
C. 7 D. 6
30. How many days are in 5 weeks?
- A. 30 B. 47
C. 35 D. 41
31. In the number 8753, which digit is in the tens place value?
- A. 3 B. 7
C. 8 D. 5
32. Weeks days
- | | |
|----------------------------|---|
| 10 | 6 |
| + 9 | 4 |
| <hr style="width: 100%;"/> | |
- A. 19 wks 3 days B. 20 wks 3 days
C. 19 wks 10 days D. 20 wks 0 days
33. James is 70 kg and Mary weighs 57kg. What is the difference in their mass?
- A. 23 B. 27
C. 13 D. 127

34. A matatu covered 10 km in one trip. How many km did it cover in 5 trips?
- A. 15 B. 50
C. 2 D. 55
35. Work out;
- $$3/8 + 1/8 + 4/8 =$$
- A. $7/8$ B. 1
C. $4/8$ D. $8/7$
36. Work out;
- $$\begin{array}{r} 14849 \\ - 9878 \\ \hline \end{array}$$
- A. 6071 B. 5071
C. 4971 D. 4881
37. What is 0.2 written as a fraction?
- A. $2/10$ B. $2/100$
C. $1/2$ D. $1/20$
38. Which multiple of 6 comes after 36?
- A. 30 B. 42
C. 45 D. 40
39. Which of the following pairs of numbers is the odd one out?
- A. 10 x 2 B. 20 x 1
C. 5 x 4 D. 10 x 4
40. A class has 48 pupils while another one has 59 pupils. How many pupils are in the two classes?
- A. 117 B. 171
C. 97 D. 107
41. Write $3/4$ in words
- A. Three fourths B. Three quarters
C. Four thirds D. Three over four

42. Work out;


$$\begin{array}{r} 18 \\ \times 20 \\ \hline \hline \end{array}$$

- A. 180 B. 360
C. 38 D. 160

Use the price list below to answer questions 43

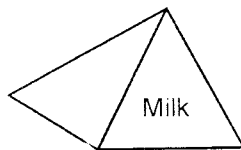
and 44

Book



sh 35

Milk




sh 27

Pencil



sh 25.50

Short



sh 150

43. Mrs. Nancy bought two books, a packet of milk and a short. How much did she pay altogether?

- A. sh 347 B. sh 247
C. sh 337 D. sh 237

44. John Diego bought two pencils and all the other items. How much did he pay?

- A. sh 262.50 B. sh 262
C. sh 263 D. sh 237.50

45. Which of the numbers below is divisible by 10?

- A. 120 B. 95
C. 246 D. 155

46. Fill in the missing number

$$\square \div 9 = 9$$

- A. 1 B. 72
C. 18 D. 81

47. Baloteli shared 30 apples among his nine friends. How many apples was he left with?

- A. 3 rem 3 B. 3
C. 21 D. 4

48. 64 is a multiple of 8. Find the next multiple of 8

- A. 56 B. 80
C. 72 D. 70

The table below shows the number of people who attended a wedding.

Men	Children	Women
219	255	331

49. How many adults attended the wedding?

- A. 550 B. 586
C. 464 D. 805

50. By how much is sh 350 less than sh 440

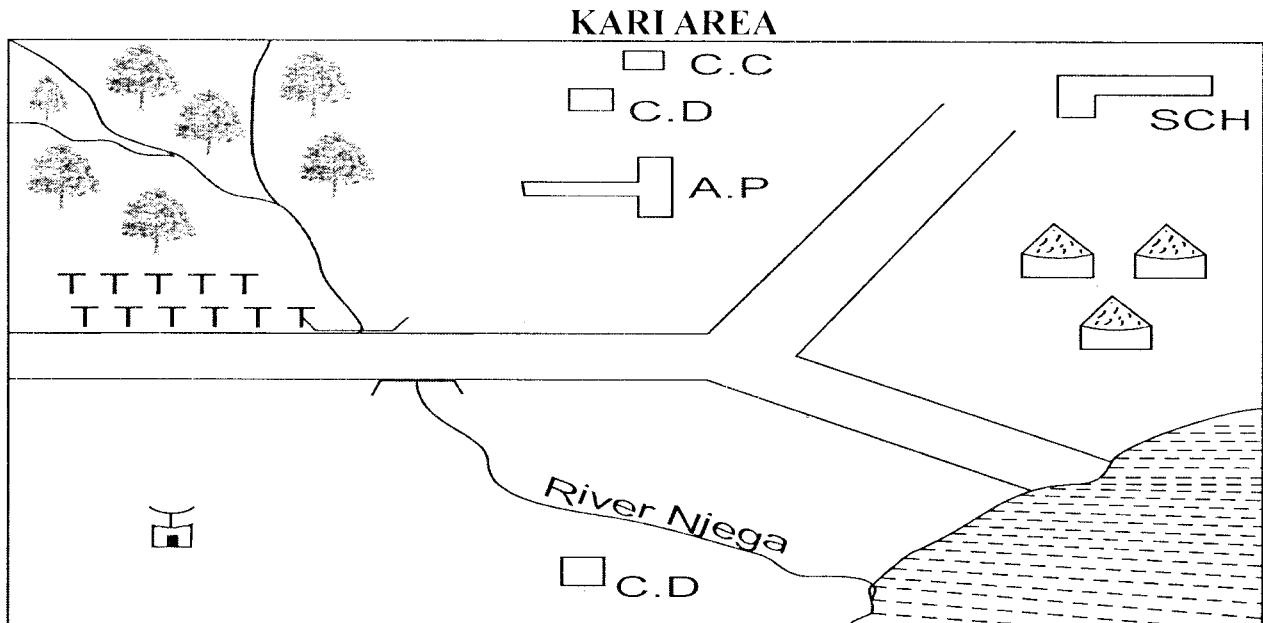
- A. sh 90 B. sh 110
C. sh 190 D. sh 790

GLOWING SUPREME SERIES

STANDARD FOUR 2017

SOCIAL STUDIES Time: 2 hours :15 Min

**GLOWING
SUPREME
SERIES 01**



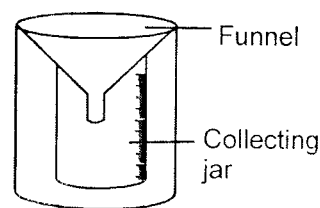
KEY

SCH	- School	Road	- Road
Forest	- Forest	C. D	- Cattle Dip
A.P	- Airport	TTT	- Tea
C. C	- Chief's camp	Village	- Village
Temple	- Temple		

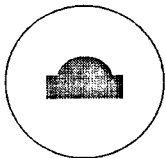
- People of Kari area are likely to be
 - muslims
 - hindus
 - pagans
 - christians
- The fastest means of transport in Kari area is
 - water
 - railway
 - air
 - road
- Njega river flows from
 - East to West
 - North to South
 - North West to South East
 - South West to North
- Kari area is administered by a
 - D.O
 - Chief
 - D.C
 - Governor
- The main cash crop in Kari area is
 - coffee
 - tea
 - cotton
 - maize
- Which animal is kept by farmers in Kari area?
 - Camels
 - Pigs
 - Cows
 - Elephants
- The direction of the school from the temple is
 - North West
 - South West
 - North East
 - South West
- _____ are values of good behaviour.
 - Respect
 - Honesty
 - Morals
 - Obedient
- The condition of the atmosphere of a place at a particular time is referred to as _____.
 - temperature
 - weather
 - direction
 - elements
- The compass point marked Y is
 - South West
 - North West
 - North East
 - South East
- Administrative units made up of many districts is called a

- A. country B. division
C. county D. location
12. Which physical feature helps in the formation of rainfall?
A. Valleys B. Plains
C. Mountains D. Rivers
13. Natural vegetation
A. is planted by man B. grows where not wanted
C. is found along rivers D. grows on its own
14. _____ are people walking on foot along the road
A. Cyclists B. Walkers
C. Pedestrians D. Passengers
15. A trader who walks with goods on the road is a
A. trader B. hawker
C. walker D. broker
16. Which one is **NOT** a traditional industry?
A. Wood carving B. Weaving
C. Pot making D. Glass making
17. A person who visits a place and enjoys it is a
A. adventurer B. traveller
C. tourist D. visitor
18. The safest means of transport is
A. water B. road
C. air D. rail
19. Plants that grow in swampy areas are
A. thickets B. bushes
C. grasslands D. reeds
20. People who hunt and kill wild animals without permission are called _____
A. thieves B. poachers
C. rangers D. murderers
21. Which is **NOT** a traditional form of communication
A. Blowing of horns B. Use of smoke signals
C. Beating of drums D. Writing letters
22. Which one is **NOT** a livestock?
A. Donkey B. Dog
C. Cow D. Goat
23. Which one is **NOT** an importance of fishing?
A. It makes land fertile
B. Good source of proteins
C. It is an economic activity
D. Fish are a valuable resource
24. Who is **NOT** a member of school community?
A. Pupils B. Teachers
C. Parents D. Chief
25. Which is **NOT** a right to Kenyans?
A. Right to refuse schooling
B. Right to move freely anywhere in Kenya
C. Right to be treated in hospital
D. Right to read any newspaper

26. The weather instrument below is called a



- A. thermometer B. raingauge
C. windvane D. windsock
27. The above instrument is used to measure
A. Rainfall B. Temperature
C. Direction of wind D. Clouds
28. Things that attracts tourists in our country are called
A. physical feature B. vegetation
C. tourist attractions D. resources
29. Areas set aside for wildlife to live in are called
A. Game parks B. Forests
C. Houses D. Caves
30. The hotness or coldness of a place is measured using a
A. thermometer B. raingauge
C. windvane D. windsock
31. Buying and selling goods is called
A. communication B. economic activities
C. transport D. trade
32. The type of trade that involves the use of money is called
A. barter trade B. currency trade
C. money trade D. traditional trade
33. The needle of a compass always points to the
A. North B. South
C. East D. West
34. The following are found in a bedroom **EXCEPT**
A. wardrobe B. bedding
C. stove D. clothes
35. My sister's son is my
A. niece B. nephew
C. cousin D. uncle
36. Which one is **NOT** a physical feature?
A. Hill B. Valley
C. River D. Tree
37. People who grow crops and keep livestock are
A. farmers B. porters
C. teachers D. doctors
38. Rivers that dry up when there is no rain are known as _____ rivers.
A. irrigation B. seasonal
C. permanent D. forest
39. Sending of messages from one person to another is called

- A. communication B. cyclists
C. transport D. movement
40. The method of moving people or goods from one place to another is called
A. communication B. transportation
C. industry D. economic activity
41. A manyatta is a house belonging to the _____ community.
A. Agikuyu B. Swahili
C. Maasai D. Somali
42. The following were ceremonies celebrated by our community traditionally **EXCEPT**
A. wedding
B. birth and naming of children
C. initiation
D. marriage
43. Air moving from one direction is called
A. wind B. rain
C. atmosphere D. weather
44. Which one is **NOT** a resource?
A. Clothes B. Land
C. Animals D. House
45. The following are elements of weather **EXCEPT**
A. Rain B. wind
C. sunshine D. forest
46. The following are traditional forms of transport **EXCEPT**
A. pack animals B. porters
C. bicycles D. canoes
47. The road sign below shows
 A. children crossing
B. pedestrian crossing
C. bumps ahead
D. zebra crossing
48. Which one of the following is **NOT** an importance of forests?
A. They provide natural habitats for wild animals
B. They provide fuel
C. They provide timber for making furniture
D. They provide hiding places for thieves
49. The following are elements of good citizenship **EXCEPT**
A. loyalty B. patriotism
C. dishonesty D. obedience
50. A person who belongs to a particular country is a
A. citizen B. patriot
C. citizenship D. human right
51. The following are basic needs of a family. **EXCEPT**
A. car B. food
C. clothes D. shelter
52. The crops grown for sale are called _____ crops.
A. food B. cash
C. subsistence D. plantation
53. Where a railway line crosses a major road _____ road sign is put up.
A. train crossing B. round about
C. cattle crossing D. bumps
54. A ward is represented by
A. the Member of County Assembly (MCA)
B. the Senator
C. the Governor
D. The Woman Representative
55. The pupil in charge of a class is the
A. headboy B. monitor
C. chairman D. classteacher
56. When all people obey the laws of the land there is
A. war B. resistance
C. peace D. no development
57. The following are importances of working together in the community **EXCEPT**
A. people meet and share ideas
B. it is easy to do difficult tasks
C. it brings disunity among people
D. work gets complete easily
58. Maintaining law and order is the work of
A. police B. prime minister
C. the Governor D. Mps
59. The following ceremonies are received with joy **EXCEPT**
A. circumcision B. funeral
C. birth D. marriage
60. The things which people use to help them live good lives are called
A. food B. prayers
C. good clothes D. resources

C.R.E

61. God created the world and everything in it for _____ days.
A. seven B. six C. four D. three
62. The Israelites were slaves in the land of
A. Canaan B. Jerusalem
C. Egypt D. Midian
63. _____ killed Goliath the Philistine soldier.
A. Samson B. David
C. Moses D. Saul
64. From the punishment of Adam and Eve christian learn to
A. hide when naked

- B. obey God's commands
C. avoid snakes
D. avoid talking to strangers
65. Who among the following women promised to dedicate her son to God?
A. Peninah B. Elizabeth
C. Hannah D. Sarah
66. I prophesied that Jesus would be born in Bethlehem of Judea. Who am I?
A. Micah B. Isaiah
C. Hosea D. Jeremiah
67. Who was the priest in the temple where the boy Samuel served?
A. Eli B. Elikanah
C. Zachariah D. Aaron
68. All the following are qualities of a good leader EXCEPT
A. self control B. respect
C. humility D. greed
69. _____ and _____ were the sisters of Lazarus
A. Naomi, Ruth B. Mary, Ruth
C. Ruth, Orpah D. Mary, Martha
70. Which one of the following is the first book in the New Testament?
A. Matthew B. Malachi
C. Genesis D. Revelation
71. Jesus was born in the town of
A. Jerusalem B. Nazareth
C. Bethany D. Bethlehem
72. The first miracles performed by Jesus was
A. changing stones into bread
B. changing water into wine
C. raising Lazarus
D. healing the sick
73. Who among the following people was a fisherman?
A. Moses B. Simon Peter
C. Adam D. Jesus
74. Jesus fed 5000 men with ___ fish and ___ loaves
A. 2, 5 B. 5, 4 C. 1, 6 D. 3, 7
75. _____ betrayed Jesus for 30 silver coins
A. John B. Peter C. Judas D. James
76. The parents of John the baptist were
A. Hannah and Elikanah
B. Zachariah and Elizabeth
C. Jacob and Leah
D. Lazarus and Martha
77. During the time of Noah there was rain for _____ days and nights.
A. forty B. four hundred
C. fifty D. four
78. _____ and _____ were the sons of Zebedee
A. Simon Peter and Andrew
B. Philip and Thomas
C. Jacob and Esau
D. James and John
79. Moses was given the ten commandments on Mount
A. Olives B. Calvary C. Sinai D. Carmel
80. One of the following denied Jesus three times. Who was he?
A. Judas B. Peter C. John D. Mathias
81. Abraham is called a friend of God MAINLY because he
A. was rich B. circumcised Isaac
C. killed Isaac D. trusted God
82. During the baptism of Jesus the Holy spirit came down in form of
A. a dove B. fire
C. strong wind D. thunder
83. _____ and _____ lived in the garden of Eden.
A. Mary and Joseph B. Adam and Eve
C. Abraham and Sarah D. Elikanah and Sarah
84. The disciples received the Holy spirit on the day of _____
A. Passover B. Good Friday
C. ascension D. Pentecost
85. As christians we should
A. share what we have with others
B. not bother about others
C. not think about others
D. love only our family members
86. How many books are in the Old Testament?
A. 27 B. 66 C. 39 D. 29
87. Who was the most beloved disciple of Jesus?
A. John B. James C. Peter D. Andrew
88. Who among the following people killed his brother because of jealousy?
A. Abel B. Cain C. Jacob D. Esau
89. Which one of the following is a fruit of the Holy spirit?
A. Faith B. Preaching
C. Humility D. Speaking in tongues
90. Which is the BEST way to deal with a girl suffering from HIV/AIDS?
A. Run away from her
B. Show her love
C. Laugh at her
D. Take her to a witchdoctor

GLOWING SUPREME SERIES - STD 4

**GLOWING
SUPREME
SERIES 01**

MARKING SCHEME 2017

<u>ENGLISH</u>		<u>KISWAHILI</u>		<u>MATHS</u>		<u>SCIENCE</u>		<u>SOCIAL STUDIES</u>		
1. D	31. C	1. A	31. D	1. C	31. D	1. C	31. B	1. B	31. D	61. B
2. B	32. C	2. B	32. C	2. C	32. B	2. D	32. C	2. C	32. B	62. C
3. A	33. D	3. C	33. D	3. A	33. C	3. B	33. D	3. C	33. A	63. B
4. A	34. C	4. D	34. B	4. B	34. B	4. A	34. B	4. B	34. C	64. B
5. D	35. D	5. B	35. A	5. B	35. B	5. C	35. A	5. B	35. B	65. C
6. B	36. B	6. A	36. C	6. B	36. C	6. D	36. C	6. C	36. D	66. A
7. A	37. C	7. C	37. A	7. D	37. A	7. B	37. D	7. C	37. A	67. A
8. C	38. C	8. A	38. C	8. A	38. B	8. C	38. B	8. C	38. B	68. D
9. D	39. B	9. D	39. C	9. B	39. D	9. D	39. D	9. B	39. A	69. D
10. A	40. C	10. B	40. B	10. C	40. D	10. A	40. C	10. C	40. B	70. A
11. B	41. D	11. B	41. C	11. C	41. B	11. B	41. B	11. C	41. C	71. D
12. A	42. C	12. C	42. A	12. A	42. B	12. C	42. A	12. C	42. A	72. B
13. D	43. A	13. C	43. C	13. C	43. B	13. D	43. A	13. D	43. A	73. B
14. C	44. A	14. A	44. D	14. B	44. C	14. C	44. B	14. C	44. A	74. A
15. B	45. D	15. A	45. D	15. B	45. A	15. B	45. B	15. B	45. D	75. C
16. C	46. C	16. B	46. B	16. A	46. D	16. A	46. C	16. D	46. C	76. B
17. A	47. D	17. C	47. C	17. D	47. B	17. C	47. A	17. C	47. C	77. A
18. B	48. B	18. B	48. B	18. C	48. C	18. D	48. D	18. B	48. D	78. D
19. C	49. A	19. A	49. C	19. A	49. A	19. B	49. B	19. D	49. C	79. C
20. A	50. C	20. C	50. D	20. A	50. A	20. A	50. C	20. B	50. A	80. B
21. C		21. D		21. B		21. C		21. D	51. A	81. D
22. B		22. D		22. B		22. C		22. B	52. B	82. A
23. D		23. A		23. B		23. A		23. A	53. A	83. B
24. C		24. C		24. A		24. B		24. D	54. A	84. D
25. B		25. A		25. D		25. D		25. A	55. B	85. A
26. C		26. D		26. A		26. A		26. B	56. C	86. C
27. D		27. A		27. A		27. C		27. A	57. C	87. A
28. D		28. A		28. A		28. B		28. C	58. A	88. B
29. A		29. B		29. C		29. D		29. A	59. B	89. C
30. D		30. A		30. C		30. A		30. A	60. D	90. B

A COMPOSITION MARKING SCHEME

MARKING CRITERION

1. The composition will be assessed according to the following guidelines.

- The maximum mark will be 40 and the minimum (mark 01)
- Does the script show that the candidate can communicate accurately, fluently and imaginatively in English?

Accuracy (8 marks)

- | | |
|--|---|
| a) Correct tenses and agreement of verbs (4 marks) | b) Accurate use of vocabulary (4 marks) |
| (16) c) Following a sequence (4 marks) | d) Correct punctuation (4 marks) |

Fluency (8 marks)

- | | |
|---|--|
| a) Words in the correct order (4 marks) | b) Sentence connection and paragraphs (4 marks) |
| c) Correct spelling (4 marks) | d) Ideas developed in logical sequence (4 marks) |

Imagination (8 marks)

- a) Unusual but appropriate use of words and phrases (4 marks)
- b) Variety of structure (4 marks)

NB: Please, teachers are requested to scrutinize this marking scheme before use, it is worth