











25. We eat _____ of a sugarcane.
 A. stem B. leaf C. root D. fruit
26. Which food gives us energy?
 A. Meat B. Ugali C. Fish D. Fruit

Study the weather chart below and answer questions 27-31

Day	Morning	Afternoon
Monday		
Tuesday		
Wednesday		
Thursday		
Friday		

27. Which day did the pupils carry umbrellas when going to school?
 A. Monday B. Friday
 C. Tuesday D. Wednesday
28. Which day was sunny and windy in the afternoon?
 A. Monday B. Friday
 C. Wednesday D. Tuesday
29. _____ was the best day for washing clothes.
 A. Tuesday B. Friday
 C. Thursday D. Wednesday
30. Which day was rainy throughout?
 A. Thursday B. Friday
 C. Tuesday D. Monday
31. Which day did the pupils wear light clothes?
 A. Tuesday B. Friday
 C. Thursday D. None
32. Which teeth are used for biting?
 A. Incisors B. Molar
 C. Premolars D. Canine
33. _____ is NOT a tuber crops.
 A. Potatoes B. yams
 C. Beans D. Cassava
34. Supplying water to crops is called _____.
 A. irrigation B. weeding
 C. cultivation D. farming
35. Which one is a use of water in recreation?
 A. Drinking B. Cooking
 C. Surfing D. Irrigation

36. Which one is NOT a use of water at home?
 A. Cooking B. Washing
 C. Transport D. Drinking
37. AIDS has no _____.
 A. HIV B. cure
 C. virus D. pain
38. Which one of the following is a natural source of water?
 A. Tap B. Tank
 C. Pot D. Rain
39. Which one is NOT a means of water transport?
 A. Ferry B. Motorcycle
 C. Boat D. Canoe
40. Which animal removes solid waste in form of pellets?
 A. Dog B. Cow
 C. Goat D. Donkey
41. Which one of the following is NOT a poultry?
 A. Duck B. Scarecrow
 C. Turkey D. Goose
42. Goats kept for meat are called _____ goats.
 A. mutton B. dairy
 C. mohair D. beef
43. The best way of removing weeds is by _____.
 A. digging out
 B. slashing
 C. mulching
 D. using chemicals
44. Weeds are _____ to crops.
 A. beneficial B. useful
 C. harmful D. advantageous
45. A true insect has _____ pair of legs.
 A. 8 B. 4
 C. 6 D. 3
46. Many young ones born from the same mother at the same time are called:-
 A. twins B. litter
 C. triplet D. babies
47. Bacon is meat of a _____.
 A. cow B. pig
 C. fish D. hen
48. Mixing of chemicals is one common use of water in the _____.
 A. house B. farm
 C. hotel D. shop
49. A human being has _____ milk teeth.
 A. 32 B. 16
 C. 20 D. 10
50. Coffee is a _____ crop.
 A. beverage B. tuber
 C. cereal D. fibre

SCHOOL BASED EVALUATION TEST

DARASA LA NNE - MUHULA WA PILI - 2016

PENPLUS
MK2 - 2016

KISWAHILI

Muda: Saa 1 Dakika 40

Chagua jibu sahihi kutoka swali 1 hadi 10.

Serikali 1 ya Kenya inawataka 2 wote wapande miti kwa 3 na kuitunza misitu. Rais wa taifa 4 huzungumzia juu ya jambo 5 kila wakati. Hivyo basi, serikali iliamua 6 wiki maalum ya 7 miti kila mwaka.

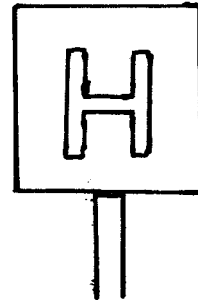
Kati ya watu wenye 8 ni Wangari Maathai. 9 mama aliyejitoa 10 misitu kwa hali na mali nchini 11 miti na misitu ina 12 nyingi. Huzuia mmomonyoko wa 13 na huwa kivutio cha 14. Miti mingine hutoa mbao 15 hutengenezwa vitu kama meza, viti na makabati.

1. A. letu B. yetu C. zetu D. wetu
2. A. wananchi B. wanaichi
C. mwananchi D. mwanaichi
3. A. mengi B. jingi C. wingi D. nyingi
4. A. hii B. hizi C. hili D. haya
5. A. hili B. hiki C. hii D. hizi
6. A. kutega B. kutenga
C. kutegua D. kutengua
7. A. kungo'a B. kupalilia
C. kukata D. kupanda
8. A. uzembe B. bidii C. ugoigoi D. udhaifu
9. A. ndio B. ndie C. ndiye D. ndiyo
10. A. kuitunza B. kuharibu C. kukata D. kuuza
11. A. kwetu B. mwetu C. petu D. pao
12. A. faida B. hasara C. madhara D. shida
13. A. udongo B. undogo C. udongo D. dongo
14. A. jua B. baridi C. upepo D. mvua
15. A. ambazo B. ambayo C. ambao D. ambaye


Kutoka swali la 16-30, chagua jibu kulingana na maagizo uliopewa

16. **Andika kwa wingi**
Mimi ninakula chakula kitamu.
A. Sisi ninakula vyakula kitamu
B. Mimi tunakula vyakula vitamu
C. Sisi tunakula vyakula vitamu
D. Mimi ninakula vyakula vitamu
17. Mwizi alishikwa.
A. Wezi wameshikwa B. Waizi walishikwa
C. Waizi wameshikwa D. Wezi walishikwa
18. Taja kifaa ambacho ni tofauti na vingine katika matumizi.
A. Buli B. Birika
C. Fyekeo D. Chano
19. Dada wa mama anaitwa nani?
A. Binamu B. Halati
C. Shangazi D. Mpwa

20. Chakula cha kishuka huliwa wakati upi wa siku?
A. Adhuhuri B. Jioni
C. Alfajiri D. Asubuhi
21. Ugonjwa wa kuanguka na kuzimia ni upi?
A. Kichaa B. Kifafa
C. Kichocho D. Kifaduro
22. Alama hii inatoa agizo gani?



- A. Miraba mieupe B. Alama ya pundamilia
C. Kivuko cha baiskeli D. Hospitali
23. Una matunda _____?
A. ngapi B. magani C. mapi D. mangapi
24. Jibu la tuonane kesho ni _____
A. majaliwa B. binuru
C. marahaba D. karibu
25. Umbo hili ni _____



- A. mche duara
B. mstatili
C. pia
D. duara dufu
26. **Kamilisha kitendawili** Parr! Haya nyika!
A. macho B. utelezi C. mbio D. kivuli
27. Jaza kiambishi sahihi
Gari _____ nakuja.
A. i B. li C. ya D. zi
28. **Kamilisha sentensi**
Tulipika mchele tukala _____
A. ugali B. mchele C. wali D. supu

29. Kamilisha methali

Mpanda ovyo _____

- A. havuni B. huvuna kwa wingi
C. hula ovyo D. huvuna ovyo

30. Alama ya hisi ni ipi?

- A. ! B. ? C. " " D. /

Soma hadithi ifuatayo kisha uyajibu maswali 31-40.

Hapo zamani za kale, sungura na fisi walikuwa marafiki kama chanda na pete. Waliishi katika msitu mmoja ambao haukuwa na wanyama wengi. Msitu wenyewe ulikuwa na aina mbalimbali ya miti. Sungura na fisi walitumia miti kupata kuni za upishi. Watoto wao walicheza pamoja kwa furaha.

Kulitokea msimu wa kiangazi ambapo wanyama wengi waliteseka kwa kukosa vyakula na maji. Sungura na rafiki yake fisi waliteseka sana.

Baada ya muda wa siku kadhaa, sungura na fisi walikubaliana njia bora ya kupata vyakula vya watoto wao. Waliwaza na kuwazua ya kwamba wawachinje mama zao ili wapate nyama wasife kwa njaa.

Sungura kwa sababu ya ujanja wake alienda akamficha mama yake ndani ya gunia ili asionekane na fisi. Baadaye aliweka gogo la mti ndani ya gunia hilo. Fisi naye kwa ujinga wake alienda akamuua mama yake kwa shoka lenye makali.

Ni bora tuwajue marafiki zetu vyema ili tusije kufanya mambo maovu kama alivyofanya fisi.

31. Nani walikuwa marafiki?

- A. Sungura na pete B. Fisi na chanda
C. Sungura na fisi D. Chanda na pete

32. Msitu wenyewe ulikuwa na nini?

- A. Milima B. Miti C. Maji D. Watoto

33. Neno kiangazi lina maana gani?

- A. Ukosefu wa mvua B. Mvua nyingi
C. Maji mengi D. Upepo mwingi

34. Tunasema mjanja kama _____

- A. shetani B. fisi C. mwalimu D. sungura

35. Sungura aliweka nini ndani ya gunia?

- A. Gogo la mti B. Jiwe kubwa
C. Mama yake D. Matunda mengi

36. Nani alikuwa mjinga kwa kumuua mama yake?

- A. Sungura B. Bweha
C. Fisi D. Fisi na sungura

37. Fisi alimuua mama yake kwa kutumia nini?

- A. Jiwe B. Gogo C. Shoka D. Sumu

38. Tunasema watu wamependana kama _____

- A. kidole na mkono B. chai na mkate
C. fisi na sungura D. chanda na pete

39. Ipi kati ya hizi si faida ya miti?

- A. Hutupatia kiangazi B. Hutupatia kuni
C. Hutupatia matunda D. Hutupatia kivuli

40. Hadithi hii inatufundisha nini?

- A. Tuwae mama zetu
B. Tusiwe na rafiki yeyote
C. Tuishi msituni
D. Tuwe na marafiki wazuri

Soma barua ifuatayo kisha ujibu maswali 41-50.

Shule ya msingi ya Bidii,
S.L.P 478,
Masomoni.
12-3-2016.

Kwa rafiki mpendwa Juma,

Pokea salamu nyingi kutoka kwangu. Je u hali gani?

Mimi ni mzima na ninasoma kwa bidii. Sasa niko katika darasa la nne shule ya msingi ya Bidii.

Darasa letu lina wanafunzi hamsini na wawili. Mwalimu wetu wa darasa anaitwa Bwana Tendamema. Yeye ni mwalimu mzuri sana. Somo nilipendalo zaidi ni Kiswahili. Tunasoma vitabu vingi vya Kiswahili.

Ni mimi wako mpendwa,
Johanna

41. Barua ya aina hii huitwa barua ya _____

- A. mwalimu B. kirafiki
C. kiofisi D. mpendwa

42. S.L.P ni kirefu cha _____

- A. shati lako pale B. shimo la panya
C. sanduku la posta D. sanduku la punda

43. Ni nani aliyeandikiwa barua hii?

- A. Johanna B. Masomoni
C. Bidii D. Juma

44. Mwandishi wa barua hii ako darasa lipi?

- A. La nne B. La nane
C. La tano D. La sita

45. Darasa lao lina wanafunzi wangapi?

- A. 42 B. 62
C. 52 D. 32

46. Mwalimu wa darasa lao anaitwa?

- A. Bwana Bidii B. Bwana Tendamema
C. Bwana Juma D. Bwana Kiswahili

47. Mwandishi wa barua hii analipenda somo gani zaidi?

- A. Hesabu B. Kiswahili
C. Sayansi D. Kiingereza

48. Barua hii iliandikwa mwaka upi?

- A. 2000 B. 2015 C. 2016 D. 2013

49. Malizia salamu ipasavyo. Je, hujambo? _____

- A. Sijambo B. Samahani
C. Pole D. Sijambiki

50. Barua ya aina hii pia huweza kuandikiwa _____

- A. chifu B. mzazi
C. rais D. daktari

SCHOOL BASED EVALUATION TEST

PENPLUS
MK2 - 2016

STD 4 - TERM 2 - 2016

ENGLISH

Time: 1 Hr 40 Mins

Fill in the blank spaces 1 to 15 using the best alternative from the choices given below.

The secretary was 1 busy. She 2 many things to do within a short time. She had to 3 the telephone every time it 4. She was also typing a letter that 5 boss was waiting 6. She had many admission forms that the new pupils had 7 in. She was supposed to put 8 in a file. 9 were also some flies 10 the table. She had not got time to put them 11 the drawer. The paper punch had been 12 by a teacher 13 now the secretary 14 punch the papers. Visitors came 15 the office every now and then. She had to stop her work so as to help them.

1. A. not B. very C. never D. slightly
2. A. has B. have C. had D. having
3. A. receive B. recieve C. reseive D. resieve
4. A. rang B. ringed C. ring D. rung
5. A. her B. his C. my D. their
6. A. of B. for C. from D. with
7. A. fill B. feel C. feeled D. filled
8. A. her B. they C. them D. it
9. A. there B. their C. they D. the
10. A. in B. on C. of D. with
11. A. in B. with C. to D. of
12. A. took B. take C. taken D. token
13. A. ! B. ? C. . D. ,
14. A. couldn't B. could C. could'nt D. cudn't
15. A. about B. with C. into D. of

For questions 16 to 18, choose the best word to fill the gap

16. My father has _____ goats on his farm.
A. much B. many
C. a lot D. a
17. Does your cow produce _____ milk?
A. a lot B. much C. a D. many
18. My cousin was treated _____ a doctor.
A. of B. for C. from D. by

Give the opposite of the underlined word

19. Her brother bought a new bicycle.
A. mother B. father
C. sister D. brothers
20. I always go to school early.
A. late B. morning
C. afternoon D. dawn
21. The princess attended the wedding.
A. king B. palace C. queen D. prince

Complete the following similes

22. As black as _____
A. sky B. charcoal C. chalkboard D. grass
23. As blind as a _____
A. ostrich B. pig C. bat D. fox

24. As sharp as a _____
A. spoon B. machine
C. razorblade D. tool
25. He visited the city last week.
A. citys B. cities C. cityies D. city
26. His sheep is feeding in the field.
A. sheep B. sheeps C. sheepes D. ships

Choose the correctly spelt word

27. A. passeger B. passanger
C. passager D. passenger
28. A. joarney B. jarney
C. journey D. journy

Fill the gaps with the correct adjective

29. My mother bought me the _____ jacket.
A. most expensive B. more expensive
C. expensivest D. much expensive
30. Peter is _____ than his friend.
A. oldest B. more older
C. old D. older

Read the following passage carefully and answer questions 31-40.

It is important to eat clean and healthy food. Good food helps us grow into strong and healthy people. Different types of food provide the body with different nutrients.

One of the nutrients the body needs is proteins. Proteins are also called body-building foods. Proteins are found in foods like meat, beans, milk, groundnuts, chicken and fish. It is important therefore to include body-building foods in your diet.

Another important nutrient is carbohydrates also called energy-giving foods. Carbohydrates are found in cereals like maize, rice, millet and sorghum. Carbohydrates are also found in foods like cassava, potatoes, fats and oils.

The body also needs vitamins and minerals. These are also called protective foods. They protect the body

against several diseases. Protective foods are mainly fruits and vegetables. Vitamins and minerals protect us against deficiency diseases such as anaemia.

We should eat a balanced diet because our body needs all the nutrients in the right amount.

31. Which of these statements is true?
 - A. People should only eat clean food
 - B. We should eat healthy food only
 - C. People should eat healthy food only
 - D. We should eat clean and healthy food
32. Proteins are also called _____
 - A. meat and beans
 - B. protective foods
 - C. energy giving foods
 - D. body-building foods
33. Chicken provides the body with _____
 - A. carbohydrates
 - B. all nutrients
 - C. proteins
 - D. vitamins
34. Which of the following is an energy-giving food?
 - A. Potatoes
 - B. Beans
 - C. Fish
 - D. Groundnuts
35. Which of the following is a cereal?
 - A. Cassava
 - B. Rice
 - C. Beans
 - D. Potatoes
36. What do vitamins and minerals do?
 - A. They give us energy
 - B. They build and repair our bodies
 - C. They make us sick
 - D. They protect us against diseases
37. We get protective foods from _____
 - A. mangoes and bananas
 - B. vegetables only
 - C. fruits only
 - D. fruits and vegetables
38. The following provide the body with vitamins except:-
 - A. rice
 - B. spinach
 - C. bananas
 - D. apples
39. Which of the following is NOT a deficiency disease?
 - A. Scurvy
 - B. Kwashiorkor
 - C. Typhoid
 - D. Rickets
40. A balanced diet is a diet with _____
 - A. vitamins and minerals
 - B. all the nutrients
 - C. enough proteins
 - D. proteins and carbohydrates

Read the following passage carefully then answer questions 41 to 50.

The ostrich was a very beautiful bird with a short fluffy neck. She had a friend, the crocodile that she really trusted. The crocodile looked cheerful. They had been friends for over five years. The ostrich visited her friend more often and they basked in the warm sunshine every morning.

After a few months, there was drought in the village. All food was eaten up and all animals were very hungry

and grew thinner each day. Ostrich would drag her feet to see her weak friend crying. She asked "what's the matter my good friend?" I have a bad toothache, come and check for me which tooth is aching." he replied, "It will be well my friend, stop crying now." Ostrich comforted him. The crocodile's strong jaw snapped closed as soon as his friend head was in his mouth.

Ostrich was too shocked to breath. She struggled to pull herself out. It was not easy because the crocodile was very strong. They pulled each other for long. With every pull, the ostrich's neck grew longer and longer. She got too tired to pull and pretended to be dead. At that very moment the crocodile stopped pulling to smile at the great meal he though he had got. "Thureeh! Fled the ostrich never to return to the village again. Crocodile was left with only feathers in her mouth.

41. How many animals were friends in the story?
 - A. Four
 - B. Two
 - C. Six
 - D. None
42. An ostrich is a **beautiful** bird. The opposite of the word beautiful is:-
 - A. pretty
 - B. handsome
 - C. nice
 - D. ugly
43. Which animal trusted the friend very much?
 - A. Ostrich
 - B. Crocodile
 - C. Mouse
 - D. Lion
44. After a few months there was _____
 - A. flood
 - B. food
 - C. drought
 - D. harvest
45. For how long had the ostrich and the crocodile been friends?
 - A. Three years
 - B. Five years
 - C. Five days
 - D. Three days
46. Whose neck grew longer and longer?
 - A. Crocodile's
 - B. Lion's
 - C. Monkey's
 - D. Ostrich's
47. The ostrich pretended to be _____
 - A. dead
 - B. alive
 - C. smiling
 - D. sick
48. Crocodile thought he would have a good _____ and smiled.
 - A. meat
 - B. soup
 - C. mill
 - D. meal
49. What did the ostrich do when the crocodile stopped pulling her head?
 - A. Smiled
 - B. Fled
 - C. Slept
 - D. Died
50. The crocodile was a _____ friend.
 - A. good
 - B. humble
 - C. bad
 - D. clever

SCHOOL BASED EVALUATION TEST

PENPLUS
MK2 - 2016

STD 4 - TERM 2 - 2016

MATHEMATICS

Time: 2Hrs

- What is the place value of digit 6 in 2146?
A. Ones B. Tens
C. Thousands D. Hundreds
- What is the total value of digit 8 in 48509?
A. 800 B. 8000
C. 80 D. 80000
- What is the product of 12 and 12?
A. 180 B. 240
C. 136 D. 144
- Which one of the following is an odd number?
A. 50 B. 73
C. 12 D. 10

5. **Work out:**

$$\begin{array}{r} 20 \\ 35 \\ + 72 \\ \hline \end{array}$$

- A. 121 B. 128
C. 139 D. 127

- Munyao had two goats. One goat weighs 428 kg and the other one weighs 489 kg. What is the difference in weigh of the two goats?
A. 17 B. 64
C. 61 D. 16

7. **Work out:**

$$\begin{array}{r} 873 \\ - 626 \\ \hline \end{array}$$

- A. 63 B. 51
C. 99 D. 247

- Agnes carried 80 eggs. 45 of them broke on the way. How many eggs were left?

- A. 35 B. 49
C. 125 D. 99

- What is the next number? 2, 4, 6, 8, _____

- A. 4 B. 12
C. 10 D. 6

10. **Work out:** $80 \times 10 =$

- A. 950 B. 810
C. 800 D. 200

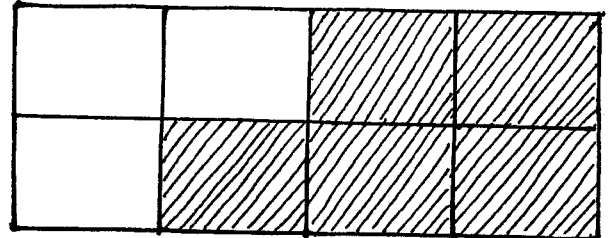
- There are 20 oranges to be shared equally among four girls. How many oranges will each girl get?

- A. 3 B. 50
C. 15 D. 5

12. **Work out:** $72 \div 8 =$

- A. 9 B. 11
C. 12 D. 13

- What fraction is unshaded?



- A. $\frac{3}{8}$ B. $\frac{5}{8}$
C. $\frac{3}{4}$ D. $\frac{1}{2}$

- Write in words $\frac{1}{4}$

- A. Four quarters B. Quarter
C. One sixth D. Three thirds

- What is $\frac{1}{5}$ of 25?

- A. 6 B. 5
C. 4 D. 12

- John had 1990kg of maize. He sold 898kg. How many kilograms of maize were left?

- A. 1102 B. 1092
C. 982 D. 1192

- Add $\frac{5}{12} + \frac{4}{12} + \frac{2}{12} =$

- A. $\frac{15}{12}$ B. $\frac{11}{12}$
C. $\frac{12}{12}$ D. $\frac{10}{12}$

- A fourth of 60 is:-

- A. 10 B. 20
C. 15 D. 25

- Arrange the following fractions from the smallest to the biggest.

- $\frac{2}{3}, \frac{1}{4}, \frac{1}{5}, \frac{1}{2}$
A. $\frac{1}{2}, \frac{1}{5}, \frac{1}{4}, \frac{2}{3}$ B. $\frac{1}{5}, \frac{1}{2}, \frac{2}{3}, \frac{1}{4}$
C. $\frac{1}{4}, \frac{1}{5}, \frac{2}{3}, \frac{1}{2}$ D. $\frac{1}{5}, \frac{1}{4}, \frac{1}{2}, \frac{2}{3}$

- What is the next multiple of 8 after 40?

- A. 44 B. 40
C. 38 D. 48

21. **Work out:**

Sh	Cts
42	10
x	4

- A. Sh 168 40cts B. Sh 171 30cts
C. Sh 171 20 cts D. Sh 171 40cts

- Write in figures.

Seventy nine thousands seven hundred and eighteen.

- A. 79608 B. 718
C. 79718 D. 79618

23. Work out:

$$\begin{array}{r} 58 \\ \times 30 \\ \hline \end{array}$$

- A. 1240
C. 1704
- B. 1780
D. 1740

24. Work out: $6 \overline{)77}$

- A. 12
C. 8 rem 5
- B. 12 rem 5
D. 7 rem 9

25. Add:

$$\begin{array}{r} 7898 \\ + 4939 \\ \hline \end{array}$$

- A. 13737
C. 12837
- B. 13837
D. 15827

26. Work out: $77 \times 7 =$

- A. 539
C. 439
- B. 690
D. 399

27. What is the sum of all odd numbers between 19 and 29?

- A. 130
C. 110
- B. 96
D. 100

28. What is the sum of $365 + 132 =$

- A. 832
C. 367
- B. 427
D. 497

29. How many days are there in 2 weeks?

- A. 7
C. 21
- B. 14
D. 28

30. Which of the number below is divisible by both 2 and 5?

- A. 125
C. 56
- B. 140
D. 117

31. Multiply $\frac{3}{8} \times 24$

- A. 12
C. 13
- B. 10
D. 9

32. Subtract:

$$\begin{array}{r} 8103 \\ - 3877 \\ \hline \end{array}$$

- A. 5774
C. 11980
- B. 4226
D. 4326

33. Odd number + odd number =

- A. odd
C. prime
- B. even
D. fraction

34. Add:

$$\begin{array}{r} 4675 \\ + 1584 \\ \hline \end{array}$$

- A. 2011
C. 6259
- B. 2029
D. 6095

35. How many 10 shilling coins are there in 10 ten shilling notes?

- A. 120
B. 24
C. 10
D. 1

36. Which of the following numbers below is divisible by 2?

- A. 203
C. 601
- B. 704
D. 95

37. Subtract:

$$\begin{array}{r} 79 \\ - 19 \\ \hline \end{array}$$

- A. 98
C. 80
- B. 70
D. 60

38.

Weeks	days
18	6
+ 6	2
<hr/>	

- A. 25 weeks 8 days
C. 24 weeks 2 days
- B. 24 weeks 1 days
D. 25 weeks 1 day

39. Work out: $53 \times 5 =$

- A. 265
C. 321
- B. 248
D. 268

40. How many days are there in the month of June, July and August?

- A. 91
C. 93
- B. 90
D. 92

41. Work out: $\frac{12}{14} - \frac{3}{14} =$

- A. $\frac{6}{14}$
C. $\frac{9}{14}$
- B. $\frac{9}{14}$
D. $\frac{4}{14}$

42. How many thousands are there in 5120?

- A. 5000
C. 500
- B. 5
D. 50

43. How many tails do 10 donkeys have?

- A. 10
C. 80
- B. 30
D. 24

44. A matatu carries 14 passengers. How many passengers will 10 matatus carry?

- A. 24
C. 84
- B. 140
D. 64

45. 3 weeks = _____ days.

- A. 21
C. 28
- B. 14
D. 15

46. Divide $5 \overline{)55}$

- A. 10
C. 16
- B. 12
D. 11

47. Find the missing number in the box.

- $\frac{4}{6} = \frac{?}{18}$
- A. 10
C. 12
- B. 16
D. 11

48. Work out: $11 \times 7 =$

- A. 20
C. 77
- B. 86
D. 45

49. Subtract

$$\begin{array}{r} 34 \\ - 19 \\ \hline \end{array}$$

- A. 53
C. 15
- B. 45
D. 25

50. A shopkeeper had 7233 sweets in her shop. She ordered 4689 more sweets. How many sweets did she have altogether?

- A. 11922
C. 22911
- B. 12922
D. 2542

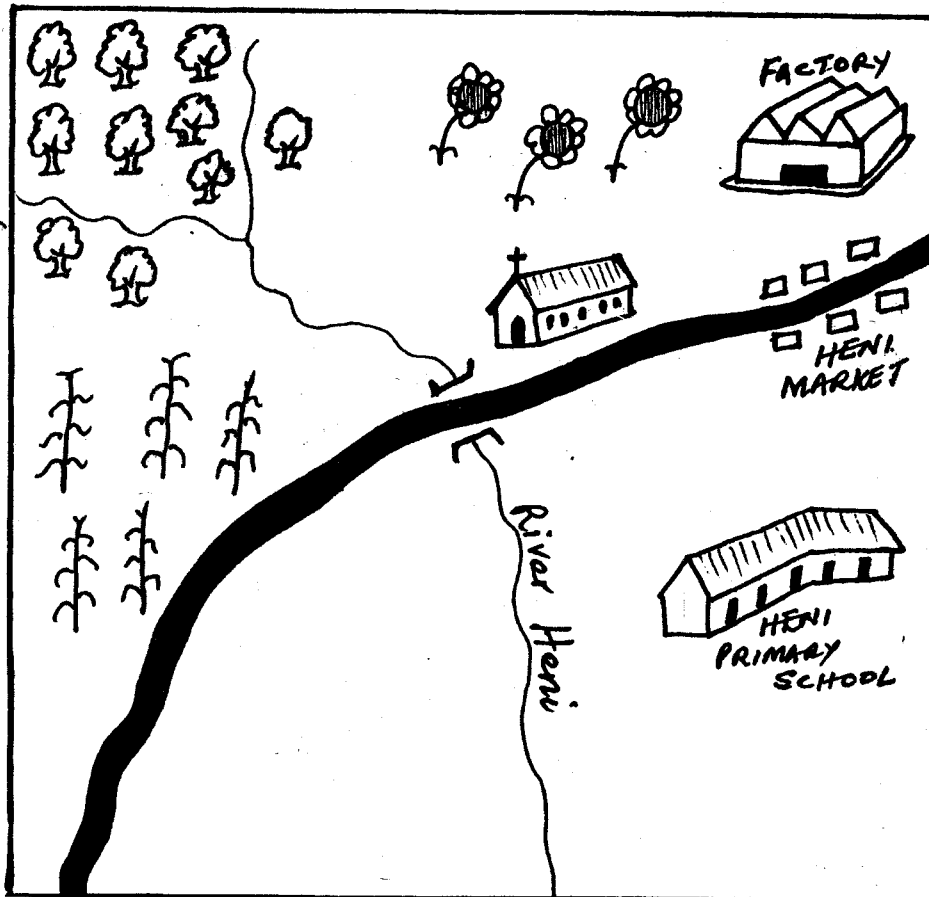
SCHOOL BASED EVALUATION TEST

PENPLUS
MK2 - 2016

STD 4 - TERM 2 - 2016 SOCIAL STUDIES/C.R.E.

Time: 2Hrs 15 Mins

HENI AREA



KEY	
	Forest
	Pyrethrum
	Maize
	Bridge
	Road
	Church
	River

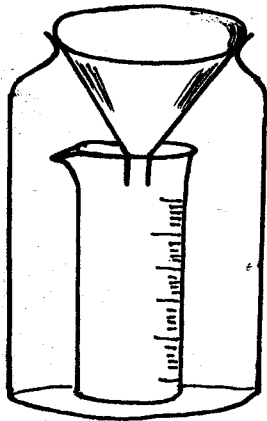
Use the map of Heni area to answer questions 1-7.

- The **MAIN** means of transport in Heni area is:-
A. road B. water
C. air D. railway
- People in Heni area worship in a _____
A. school B. shrine
C. factory D. church
- Kogi is a Std 4 pupil in Heni primary school. Where does he get water to wash the class?
A. Forest B. River
C. Market D. Dam
- The factory in the map is **LIKELY** to process:-
A. pyrethrum B. tea C. coffee D. maize
- What is the direction of factory from school?
A. North B. South
C. East D. West
- River Heni starts from the _____
A. factory B. hill C. bridge D. forest

- The food crop in Heni area is _____
A. pyrethrum B. maize C. tea D. coffee
- Which of the following is found in the school calendar?
A. planting ceremony B. birthday ceremony
C. music festival D. harvest festival
- The coldness and hotness of a place is called:-
A. climate B. humidity
C. temperature D. altitude
- The instrument used to tell the direction of the wind is called:-
A. windvane B. raingauge
C. barometer D. thermometer
- The four **MAIN** points of a compass are called:-
A. direction points B. imaginary points
C. main points D. cardinal points
- Which one is **NOT** a natural physical feature?
A. Hill B. Bridge
C. Swamp D. Valley


13. Kenya is divided into _____ counties.
 A. 37 B. 47 C. 27 D. 57
14. Which of the following ceremonies in traditional African society marked the beginning of adulthood?
 A. Initiation B. Birth
 C. Marriage D. Naming
15. A dangerous diseases that has no cure is:-
 A. measles B. Typhoid
 C. HIV/AIDS D. malaria
16. The laws which tell us how to behave well in the community are called:-
 A. Discipline laws B. School laws
 C. Moral laws D. Commandments
17. A _____ is kept for wool.
 A. chicken B. pig C. cow D. sheep

Use the diagram below to answer questions 18-19.

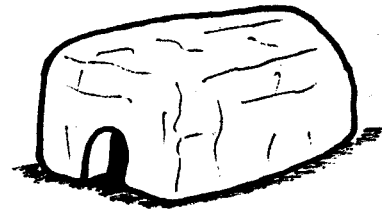


18. The above weather instrument is known as:-
 A. a windsock B. a windvane
 C. a rain gauge D. a thermometer
19. The instrument above is used to measure:-
 A. rainfall B. direction of wind
 C. air pressure D. strength of wind
20. Which of the following is NOT obtained from forests?
 A. Manure B. Timber
 C. Honey D. Fencing
21. The type of tree found in desert and semi desert type of vegetation is:-
 A. grass B. cypress
 C. acacia D. baobab
22. The element of weather measured using a thermometer is:-
 A. rain B. temperature
 C. wind D. clouds
23. The first president of Kenya was known as:-
 A. Jomo Kenyatta B. Uhuru Kenyatta
 C. William Ruto D. Mwai Kibaki
24. The rite of passage that marks the beginning of adulthood is:-
 A. marriage B. initiation
 C. birth D. adolescence

25. The symbol below is used to shows a _____ weather.



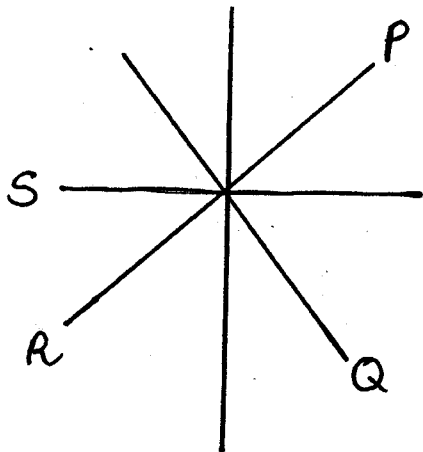
- A. calm
 B. rainy
 C. sunny
 D. cloudy
26. The national anthem is sang in _____ languages.
 A. 5 B. 4 C. 3 D. 2
27. Your mother's brother is your _____
 A. father B. aunt C. uncle D. cousin
28. People who work in jua kali are mainly called:-
 A. mechanic B. blacksmith
 C. artisans D. apprentice
29. Crops for sale are known as:-
 A. cash crops B. food crops
 C. staple crops D. horticulture crops
30. The diagram below shows a _____ house.



- A. Kikuyu B. Turkana C. Maasai D. Luo
31. People who live near rivers and dams are MAINLY:-
 A. Nomads B. Farmers
 C. Traders D. Fishermen
32. _____ arrest people who do bad things.
 A. Chiefs B. Doctors
 C. Teachers D. Police
33. Which one of the following is a physical feature?
 A. Roads B. Mountains
 C. Bridges D. Desks
34. A county is made up of many _____
 A. sub-villages B. sub-locations
 C. sub-divisions D. sub-counties
35. The type of vegetation with many trees growing together is:-
 A. scrub vegetation B. grassland vegetation
 C. forest vegetation D. woodland vegetation
36. Which of the following festivals is found in the school calendar?
 A. Drama festival B. Planting festivals
 C. Harvest festivals D. Birthday festivals
37. You have found a fifty shilling note in the school compound. What would you do with the money?
 A. Leave the money where you found it
 B. Take the money to your parents
 C. Buy sweets with your friends
 D. Take the money to the headteacher

38. If Wanjiku is standing facing South his back will face which direction?
 A. West B. East
 C. North D. North East
39. _____ is the washing away of soil by rain water or soil.
 A. Soil erosion B. Soil cultivation
 C. Planting D. Weeding
40. A county is headed by the _____
 A. governor B. senator
 C. president D. deputy president

Use the diagram below to answer questions 41-43.

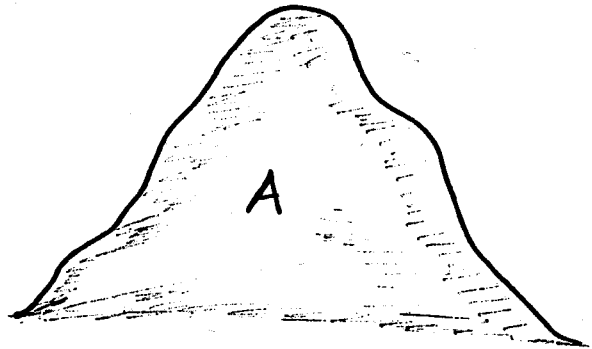


41. The point marked P is known as:-
 A. South West B. South East
 C. North West D. North East
42. The point between P is known as:-
 A. North B. East
 C. South D. West
43. The cardinal point from the compass should be:-
 A. Q B. S C. P D. R
44. Which of the following days do we raise the flag?
 A. Tuesday and Wednesday
 B. Monday and Thursday
 C. Tuesday and Friday
 D. Monday and Friday
45. People carry umbrellas when the weather is _____.
 A. cloudy B. sunny
 C. rainy D. windy
46. Rivers that flow during the rainy season are called _____ rivers.
 A. seasonal B. permanent
 C. forest D. swampy
47. The vegetation that have grass and few trees is called _____ vegetation.
 A. savannah B. thicket
 C. forest D. desert
48. In which date do we celebrate Madaraka day?
 A. 2nd June B. 1st June
 C. 1st May D. 2nd May

49. The road sign below shows what?



- A. Bumps ahead B. Cattle crossing
 C. Round about D. Children crossing
50. Which of the following is **NOT** a domestic bird?
 A. Hen B. Duck C. Ostrich D. Turkey
51. The vegetation that grows on its own is called _____ vegetation.
 A. man-made B. natural C. cultivated D. human
52. Dirty water can cause _____.
 A. diseases B. floods
 C. sunshine D. vegetation
53. Things that people do to get money are called:-
 A. planting B. farming
 C. resources D. economic activities
54. I am a wild animal. I roar and I eat meat. Who am I?
 A. Elephant B. Giraffe C. Lion D. Monkey
55. People who grow crops and keep animals are called:-
 A. teachers B. farmers
 C. doctors D. fishermen
56. The feature marked A is a _____



- A. hill B. valley
 C. forest D. river
57. Cutting lower branches of trees to help them grow strong is called:-
 A. weeding B. pruning
 C. planting D. harvesting
58. Wild animals live in the _____.
 A. forest B. home
 C. hospital D. school
59. A home for a dog is called _____.
 A. nest B. pen
 C. shed D. kennel
60. Who is the president of Kenya?
 A. Daniel Moi B. Jomo Kenyatta
 C. Uhuru Kenyatta D. William Ruto

CHRISTIAN RELIGIOUS EDUCATION

61. Which book tells us about the story of creation?
A. Exodus B. Galatians
C. Genesis D. Corinthians
62. _____ was the husband of Sarah.
A. Abraham B. Moses
C. Goliath D. Timothy
63. When we do different duties at home we call this:-
A. fasting B. punishment
C. celebration D. sharing
64. _____ means God with us.
A. Christ B. Jesus
C. Emmanuel D. God
65. Mary and Lazarus had a sister called _____
A. Lydia B. Tabitha
C. Sarah D. Martha
66. What can make people quarrel?
A. Happiness B. Hatred
C. Patience D. Love
67. Which of the following is a quality of a good leader?
A. Humble B. Proud
C. Jealous D. Unfair
68. Daniel prayed _____ times in a day.
A. 7 B. 3
C. 5 D. 10
69. The last book in the new testament is _____
A. Malachi B. Mathew
C. Revelation D. James
70. Who among the following was a Patriach?
A. Goliath B. Elijah
C. Abraham D. James
71. Who were the first people to see baby Jesus?
A. John B. Shepherds
C. Pharisees D. Disciples
72. Jesus drove out people who were selling things in the temple saying God's house is a house of:-
A. prayer B. Holy Spirit
C. Thieves D. God
73. Jesus healed a paralysed man and forgave his _____
A. sickness B. friends
C. saints D. sins
74. Coming back to life is called _____
A. baptism B. resurrection
C. living D. wake up
75. Luo people call their God _____
A. Ngai B. Nyasaye
C. Were D. Asis
76. Lydia came from _____
A. Bethany B. Mombasa
C. Thyratira D. Nazareth
77. Hannah prayed to God for a son. She gave birth to a son and called him _____
A. Flikanah B. Simon
C. Saul D. Samuel
78. Where were the disciples going when they saw Jesus walking on water?
A. Bethany B. Capernaum
C. Jerusalem D. Nazareth
79. During the time of Noah, there was rain for _____ days and nights.
A. four hundred
B. fifty
C. four
D. forty
80. Diana is a rich woman. She takes orphans from her village and takes care of them. Which fruit of the Holy Spirit does she have?
A. Love B. Patience
C. Joy D. Self control
81. The spirit of God came in form of a _____ during the baptism of Jesus.
A. dove B. calf
C. ram D. lamb
82. When Jesus raised the dead he showed that He had power over _____
A. nature B. death
C. creation D. Satan
83. The resurrection of Jesus Christ is celebrated during _____
A. advent B. Christmas
C. Easter D. Jamhuri
84. The window of _____ feed Elijah with bread and water.
A. Sodom B. Jerusalem
C. Bethlehem D. Zarephath
85. Jesus used two fish and five loaves of bread to feed _____ people.
A. 500 B. 5000
C. 50000 D. 10000
86. Samuel was called by God how many times?
A. 4 B. 6
C. 3 D. None
87. Serving other people involves helping without expecting them to:-
A. be happy B. love you
C. thank you D. pay you
88. I saw a burning bush when I was looking after sheep. Who am I?
A. David B. Goliath
C. Moses D. Peter
89. People who are selfish are _____
A. sad B. kind
C. peaceful D. loving
90. Everything on earth was created through the power of _____
A. man B. Satan
C. peter D. God

SCHOOL BASED EVALUATION TEST

STD 4 - TERM 2 - 2016

PENPLUS
MK2 - 2016

MARKING SCHEME

ENGLISH	MATHEMATICS	KISWAHILI	SCIENCE	S/STUDIES/C.R.E
1. B 31. D	1. A 31. D	1. B 31. C	1. D 31. B	1. A 31. D 61. C
2. C 32. D	2. B 32. B	2. A 32. B	2. A 32. A	2. D 32. D 62. A
3. A 33. C	3. D 33. B	3. C 33. A	3. C 33. C	3. B 33. B 63. D
4. A 34. A	4. B 34. C	4. A 34. D	4. B 34. A	4. A 34. B 64. C
5. A 35. B	5. D 35. C	5. A 35. A	5. B 35. C	5. A 35. C 65. D
6. B 36. D	6. C 36. B	6. B 36. C	6. D 36. C	6. D 36. A 66. B
7. D 37. D	7. D 37. D	7. D 37. C	7. C 37. B	7. B 37. D 67. A
8. C 38. A	8. A 38. D	8. B 38. D	8. B 38. D	8. C 38. C 68. B
9. A 39. C	9. C 39. A	9. C 39. A	9. A 39. B	9. C 39. A 69. C
10. B 40. B	10. C 40. D	10. A 40. D	10. C 40. C	10. A 40. A 70. C
11. A 41. B	11. D 41. B	11. B 41. B	11. D 41. B	11. D 41. D 71. B
12. C 42. D	12. A 42. B	12. A 42. C	12. D 42. A	12. B 42. B 72. A
13. D 43. A	13. A 43. A	13. C 43. D	13. B 43. A	13. B 43. B 73. D
14. A 44. C	14. B 44. B	14. D 44. A	14. A 44. C	14. A 44. D 74. B
15. C 45. B	15. B 45. A	15. A 45. C	15. A 45. D	15. C 45. C 75. B
16. B 46. D	16. B 46. D	16. C 46. B	16. C 46. B	16. C 46. A 76. C
17. B 47. A	17. B 47. C	17. D 47. B	17. B 47. B	17. D 47. A 77. D
18. D 48. D	18. C 48. C	18. C 48. C	18. D 48. B	18. C 48. B 78. B
19. C 49. B	19. D 49. C	19. B 49. A	19. A 49. C	19. A 49. D 79. D
20. A 50. C	20. D 50. A	20. A 50. B	20. D 50. A	20. A 50. C 80. A
21. D	21. A	21. B	21. B	21. D 51. B 81. A
22. B	22. C	22. D	22. C	22. B 52. A 82. B
23. C	23. D	23. D	23. B	23. A 53. D 83. C
24. C	24. B	24. A	24. D	24. B 54. C 84. D
25. B	25. C	25. C	25. A	25. C 55. B 85. B
26. A	26. A	26. B	26. B	26. D 56. A 86. A
27. D	27. B	27. B	27. C	27. C 57. B 87. D
28. C	28. D	28. C	28. A	28. C 58. A 88. C
29. A	29. B	29. D	29. B	29. A 59. D 89. A
30. D	30. B	30. A	30. C	30. C 60. C 90. D

COMPOSITION / INSHA MARKING SCHEME

MARKING CRITERION

- The composition will be assessed according to the following guidelines.
- The maximum mark will be 40 and the minimum mark 01.

Does the script show that the candidate can communicate accurately, fluently and imaginatively in English

Accuracy (16 marks)

- (a) Correct tense and agreement of verbs (b) Accurate use of vocabulary (4 marks)
(c) Correct spelling (4 marks) (d) Correct punctuation (4 marks)

Fluency (16 marks)

- (a) Correct flow of the story (4 marks) (b) Well sequenced sentence and connected paragraphs (4 marks)
(c) Correct spelling (4 marks) (d) Ideas developed in logic sequence (4 marks)

Imagination (8 marks)

- (a) Unusual but appropriate use of words (4 marks)
(b) Variety of structure (4 marks)

NB: Please teachers are requested to scrutinize this marking scheme before use, it is worth