

**GATUNDU DISTRICT EXAMINATION
STANDARD FOUR – END TERM I 2016
KISWAHILI**

Muda: Saa 1 dakika 40

Chagua jibu sahihi ili kujaza pengo 1-15

Hapo 1 za kale paliondokea mzee 2 aliyekuwa na bibi na watoto 3. Jina 4 mzee huyu lilikuwa Kamau. Kamau alikuwa 5 wa samaki. Siku moja aliamka asubuhi na mapema na kuelekea 6 ili akavue samaki. Njiani, alikutana na rafiki yake 7 walipendana sana. Waliandamana moja 8 moja hadi mahali pa kuvulia samaki. Waliweza kuvua samaki 9 sana. Rafiki yake Kamau alimsaidia kuwabebeba samaki hao wali 10 kuwa wanono na 11 sana.

Walianza safari ya kurudi nyumbani saa sita 12. Walikutana na mbwa 13 aliyewakimbiza na kuvanyang'anya samaki kadhaa. Hawakufa 14 bali waliendelea na safari 15 hadi nyumbani ambapo walimkuta mkewe Kamau akitayarisha chakula cha mchana.

- | A. | B. | C. | D. |
|-------------|----------|--------|----------|
| 1. Zamani | samani | namani | shamani |
| 2. mumoja | mmoja | moja | mmonja |
| 3. nnc | wasita | watatu | wasaba |
| 4. ya | cha | za | la |
| 5. mvivu | mvuvi | mfufu | mfufi |
| 6. msituni | shuleni | mtoni | shambani |
| 7. ambac | ambao | ambayo | ambaye |
| 8. kisa | na | ya | za |
| 9. nyingi | mingi | wengi | kingi |
| 10. ye | yo | zo | o |
| 11. wazito | nzito | nzito | kizito |
| 12. asubuhi | adhuhuri | jioni | alasiri |
| 13. wakati | kali | mkari | mkali |
| 14. roho | uhai | moyo | tama |
| 15. yake | yao | zake | zao |

PRINTED BY HIGHFLYER SERIES Tel: 0723 499860

**Funded By: C.D.F. Gatundu South Constituency,
Patron Hon. Moses Kuria, Mp Gatundu South.**

16. Kamilisha maamkizi haya. Hodi hapa?

- A. ingia
B. karibu
C. kwaheri
D. niko

17. Nomino sungura, kuku, swala na samaki ni katika ngeli ya _____

- A. YA-YA
B. U-U
C. U-YA
D. A-WA

18. Tambua kiashiria katika sentensi ifuatayo. Ndege yule anayeruka ni korongo.

- A. Yule
B. ruka
C. ndege
D. korongo

19. Tumia kiulizi sahihi kujaza pengo.

Kijana _____ aliyefaulu vizuri katika mtihani huo.

- A. Upi?
B. ipi?
C. yupi?
D. wapi?

20. Chombo kipi ambacho hakipatikani jikoni?

- A. seredani
B. kinu
C. buli
D. kochi

21. Kanusha: Mtoto alifunikwa gubigubi wakati wa baridi.

- A. Watoto walifunikwa gubigubi nyakati za baridi.
B. Mtoto hakufunikwa gubigubi wakati wa baridi.
C. Walifunikwa gubigubi wakati wa baridi.
D. Alifunikwa gubigubi wakati wa baridi.

22. Andika kwa nambari 909.

- A. mia tisa na tisa
B. Sita mia na sita.
C. Tisini na tisa.
D. Tisa tisini na tisa.

23. Andika umoja wa: Wagonjwa hao watapona.

- A. Gonjwa hizo watapona.
B. Mgonjwa huyo atapona.
C. Mgonjwa yule watapona.
D. Mgonjwa hizo watapona.

24. Ugonjwa unaosababishwa na mbu huitwa _____

- A. Kichocho
B. kansa
C. malaria
D. Malale

25. Tegua kitendawili kifuatacho. Nyoka pangoni!

- A. mafuta
B. yai
C. ulimi
D. macho

26. Mtu anayefunza wanafunzi shuleni ni mwalimu, naye ajengaye nyumba kwa mawe huitwa _____

- A. mwashi
B. mhunzi
C. fundi
D. sonara

27. Rangi ya mbingu bila mawingu ni _____

- A. Nyeupe
B. nycusi
C. kijivu
D. samawati

28. Kamilisha methali ifuatayo: Mvumilivu hula _____

- A. wa kwao
B. mbivu
C. matunda
D. kwa duraha

29. Kitendo kipi ambacho hakipatikani shambani?

- A. Kuangua
B. kupalilia
C. kuvuna
D. kukaanga

30. Andika kinyume cha: Dada anacheka vizuri.

- A. Madada wanacheka vizuri.
B. Dada walicheka vizuri.
C. Kaka analia vibaya
D. Makaka wanacheza vizuri.

Soma habari kisha ujibu maswali yafuatayo 31-40

Zamani palikuwepo watoto wawili. Mmoja alikuwa yatima na mwingine alikuwa na babake aliyeitwa Boboje. Watoto hawa wawili walikuwa wakichunga ng'ombe mahali pamoja. Mtoto wa mzee Boboje alikuwa mjeuri sana.

Siku moja mzee Boboje aliwaambia vijana hawa, "Leo kuna adui au magaidi na msiwapekele ng'ombe bondeni. Wapelekeni mlimani ili kila wakati niweze kuwaona nikiwa kwenye nyumba ya wazee." Mwanawe mzee Boboje alidharau maneno ya babake. Akapeleka ng'ombe mahali alipokatazwa. Mtoto yatima alisikia na kufuata maneno ya mzee. Akawapeleka ng'ombe wao moja kwa moja mpaka mlimani.

31. Ni watoto wangapi wametajwa katika habari _____
A. watatu
B. wawili
C. wanne
D. mmoja

32. Mzee Boboje aliwashauri watoto wapeleke ng'ombe wapi? _____
A. Bondeni
B. msituni
C. mlimani
D. malishoni

33. Watoto walikatazwa kuwapeleka ng'ombe bondeni kwa kuwa kulikuwa na _____
A. magaidi
B. wanyama
C. askari
D. mvua

34. Ni mtoto yupi alikuwa mtiifu katika hadithi _____
A. aliyekuwa na baba
B. aliyekuwa yatima
C. wote wawili
D. hakuna

35. Anayechunga ng'ombe huitwaje?
A. mchungaji
B. mlinzi
C. mlishi
D. mchunga

36. Makao ya ng'ombe ni zizi kama vile makao ya kuku ni _____
A. kizimba
B. kichuguu
C. kiota
D. uando

37. Ni nini maana ya kuwa mjeuri?
A. mtiifu
B. kutojali
C. mwaminifu
D. kiburi

38. Mzee Boboje alitaka ng'ombe wapelekw milimani ili aweze _____
A. kuwaona
B. kuwachunga
C. kuwahesabu
D. kuwalinda

39. Ng'ombe hatupatii _____
A. mbolea
B. manyoya
C. ngozi
D. nyama

40. Kichwa kinachofaa habari hii ni
A. mtoto mtiifu.
B. mtoto mzembe
C. mtoto mwenye bidii
D. mtoto mwenye busara.

Soma habari kisha ujibu maswali yafuatayo (41 – 50)

Tunashauriwa kunywa maji ya kutosha ili kuwa na afya njema. Schemu kubwa ya mwili wako ni maji. Maji pia husaidia mwili kuchukua chakula na kutoa uchafu.

Binadamu anafaa kunywa maji walau lita moja na nusu kwa siku ili kuwa na afya njema. Kunywa maji kwa wingi kunakufanya uonekana kijana. Maji huzuia ngozi kukunjamana na hivyo ngozi huonekana ikiwa nyororo.

Kunywa maji mengi husaidia kupunguza uzito. Ukinywa maji mengi unapunguza hamu ya kula. Maji pia husaidia kuongeza akili.

Kwa kifupi faida za kunywa maji ni nyingi hatuwezi kutaja zote. Kunywa maji utunze afya yake.

41. Schemu kubwa ya mwili wako ni _____

- A. nyama
- B. mifupa
- C. damu
- D. maji

42. Maji husaidia _____

- A. Kutoa uchafu
- B. Kuongeza uzito
- C. Kupunguza akili
- D. Kutoa chakula

43. Kwa siku unafaa kunywa maji _____

- A. Lita moja
- B. Lita moja na nusu
- C. Glasi moja na nusu
- D. Lita kumi

44. Ngozi kukunjamana ni sawa na:

- A. Ngozi kuwa nyororo
- B. Ngozi kuparara
- C. Ngozi kuwa kama ya mtu mzee
- D. Ngozi kuwa kama ya kijana

45. Ukinywa maji mengi utapunguza uzito kwa sababu:

- A. Hamu ya kula itaongezeka
- B. Hamu ya kula itaisha
- C. Hamu ya kula itapungua
- D. Chakula kitakosa ladhaa

46. Ni kweli kwamba:

- A. Faida zote za kunywa maji zimetajwa.
- B. Usipokunywa maji utatunza afya.
- C. Kunywa maji husaidia kuongeza akili.
- D. Watu wazito hawafai kunywa maji.

47. Aina za uchafu mwilini ni hizi isipokuwa _____

- A. mate
- B. mkojo
- C. jasho
- D. maji

48. Maji yanayofaa ya kunywa ni _____

- A. ya mtoni
- B. ya ziwa
- C. ya mfereji
- D. yaliyochemshwa

49. Watu wengi hunywa maji ili _____

- A. Wapate kushiba
- B. Wawe safi
- C. Wawe werevu
- D. Wakate kiu

50. Kichwa kinachofaa habari hii ni:

- A. Kunywa maji na usile
- B. Maji ni afya
- C. Shida ya maji mwalini
- D. Tutunze maji

GATUNDU DISTRICT EXAMINATION
STANDARD FOUR – END TERM I 2016
SCIENCE

Time: 1 hour 40 minutes

1. The part of a tooth which remains in the gum is called _____
 - A. Enamel
 - B. Crown
 - C. Root
 - D. Jaw
2. An adult has _____ permanent teeth
 - A. 20
 - B. 18
 - C. 24
 - D. 32
3. The two main types of crops are
 - A. Fibre and fruit crops
 - B. Food and beverage crops
 - C. Oil and fibre crops
 - D. Food and cash crops
4. Which one of the following is a weed
 - A. Sodom apple
 - B. Arrow root
 - C. Cassava
 - D. Sweet potatoes
5. The following are sources of light. Which one is not.
 - A. Moon
 - B. Skylights
 - C. Sun
 - D. Stars
6. Ducks and geese are all mainly called _____
 - A. Dairy animals
 - B. Poultry animals
 - C. Broilers
 - D. Layers
7. Which one is not use of water in recreation.
 - A. Skiing
 - B. surfing
 - C. Swimming
 - D. Washing
8. Which one of the following can be used to store water at home?
 - A. Dam
 - B. tank
 - C. Tap
 - D. spring
9. Which one of the following is NOT a characteristic of animals? They
 - A. Feed
 - B. Make food
 - C. React to changes in the surrounding
 - D. Die
10. Which one of the following statements refers to the best way of preventing bad breath.
 - A. Eating sugary foods.
 - B. Eating fresh fruits
 - C. Using tooth picks
 - D. Having good oral hygiene
11. Weather can be described using all the following words **EXCEPT**.
 - A. Calm
 - B. Bright
 - C. cloudy
 - D. Rainy

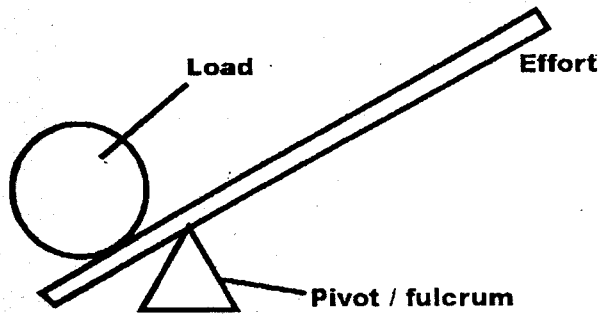
PRINTED BY HIGHFLYER SERIES Tel: 0723 499860

Funded By: C.D.F. Gatundu South Constituency,
Patron Hon. Moses Kuria, MP Gatundu South.

12. Cattle kept for milk production are called _____
 A. Dairy cattle
 B. Beef cattle
 C. Grade cattle
 D. Meat cattle
13. Several young ones born at the same time by the same mother are known as
 A. kids
 B. Puppies
 C. Chicks
 D. litter
14. Boiling water makes _____ appear
 A. Soil bubbles
 B. air bubbles
 C. water bubbles
 D. steam bubbles
15. A very sick person is being taken to hospital. I can hear the _____
 A. Fire alarm
 B. ambulance siren
 C. Dog barking
 D. A crying baby
16. A waxed string that is used to remove food particles stuck between teeth is called.
 A. tooth pick
 B. Dental floss
 C. Plaque
 D. Tooth sensitivity
17. Immune means _____
 A. to get from
 B. protected from
 C. a group of signs
 D. lack of
18. Foods that protect our bodies against diseases are called
 A. Energy giving foods
 B. Protective foods
 C. Body building foods
 D. Herbs
19. Which one of the following groups of foods make a balanced diet.
 A. milk, bread, sweet potatoes
 B. meat, cabbage, ugali
 C. Meat, beans, fish
 D. Rice, green bananas, potatoes
20. A person who has brown and rotten teeth is said to be suffering from
 A. cavities
 B. bad breath
 C. tooth decay
 D. tooth sensitivity
21. Aids is a disease that attacks
 A. human beings
 B. monkeys
 C. birds
 D. mosquitoes
22. A standard 3 pupil wanted to roll a big stone. Which one of the following did he use?
 A. crowbar
 B. panga
 C. hammer
 D. axe
23. Which one of the following tools is the best to drive in a nail in a piece of wood?
 A. saw
 B. hammer
 C. axe
 D. scissors
24. Which one of the following can be used to carry heavy loads.
 A. A wheelbarrow
 B. A hand cart
 C. A vehicle
 D. A spade
25. Which one of the following is not a type of tooth?
 A. incisor
 B. canine
 C. Primary
 D. premolar
26. Which one of the following types of teeth are found at the back of the mouth?
 A. Molars
 B. Canines
 C. Incisors
 D. premolars
27. Which one of the following body organs is a sense of sight?
 A. Ears
 B. eyes
 C. nose
 D. throat

28. Three of the following are cereal crops. Which one is **NOT**?
- Coconut
 - Maize
 - Sorghum
 - millet
29. A standard four pupil wanted to model a pot. Which type of soil was the best?
- clay
 - sand
 - loam
 - murram
30. The soil that is used to build modern houses is called _____
- loam
 - clay
 - sand
 - murram
31. Which type of soil has large particles.
- Sand
 - clay
 - loam
 - murram
32. Which type of soil is correctly matched?
- clay – growing crops
 - loam – modeling
 - sand – modeling
 - sand – building walls
33. A source of energy that comes from tree is?
- gas
 - charcoal
 - electricity
 - paraffin
34. Three of the following are all uses of light except.
- See clearly
 - provide safety
 - discourage pests
 - warming houses
35. Which one of the following is a lever?
- Television
 - crow bar
 - wheel
 - chair
36. To climb a tree easily, we can use a _____
- ladder
 - brush
 - bicycle
 - wheelbarrow.
37. Farmers keep fish in;
- ponds
 - Rivers
 - Oceans
 - Tanks
38. Which one of the following is not a means of water transport
- Ferry
 - Motor cycle
 - Boat
 - Canoe
39. Mixing chemicals is one common use of water in a
- Farm
 - House
 - Hotel
 - shop
40. A she goat has _____ teats to feed its young ones?
- two
 - four
 - size
 - One
41. Solid waste matter from animal is called?
- dung
 - droppings
 - Excreta
 - Urine
42. The best method to allow light in a house is?
- chimney
 - translucent sheets
 - Large windows
 - Sky lights.
43. One of the following is not the use of heat. Which one is it?
- Cooking
 - Seeing
 - Warming
 - Drying

44. What is the name of the machine below?



- A. Wheelbarrow
 - B. Crowbar
 - C. Ladder
 - D. Beam-balance
45. Weeds should be _____
- A. planted in the field
 - B. mixed with other crops
 - C. Controlled
 - D. Encouraged to grow in the field.
46. _____ is not a cereal crop.
- A. millet
 - B. sorghum
 - C. Maize
 - D. Coconut

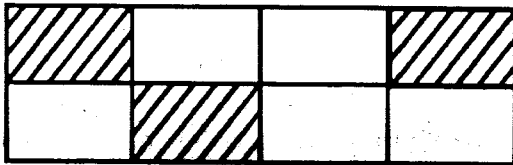
47. Which one of the following is not a poultry animal
- A. Ducks
 - B. Scarecrow
 - C. Turkey
 - D. Goose
48. Which one of the following is not an artificial sources of light?
- A. candle
 - B. Lamp
 - C. Sun
 - D. Electricity
49. A metal can be made to float on water by changing its
- A. shape
 - B. length
 - C. Size
 - D. weight
50. Which one of the following sentence is not correct?
- A. a saw has teeth
 - B. A panga has metallic parts
 - C. A saw can be used to cut a piece of timber.
 - D. A saw is used for weeding

GATUNDU DISTRICT EXAMINATION
STANDARD FOUR – END TERM I 2016
MATHEMATICS

Time: 2 hours

1. What is nineteen thousand nine hundred and fifty six in figures?
A. 19056 B. 19956
C. 199506 D. 19506
2. What is the place value of digit 6 in the number 76348?
A. Tens
B. Hundreds
C. Thousands
D. Ten thousands

3. What fraction of the figure below is shaded?



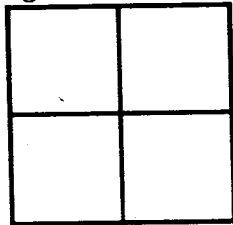
- A. $\frac{8}{8}$ B. $\frac{3}{5}$
C. $\frac{3}{6}$ D. $\frac{3}{8}$
4. What is the next number in the pattern below?
30, 35, 40, 45 _____
A. 50 B. 60
C. 45 D. 55
 5. Add 8932 + 7467
A. 15399 B. 16299
C. 16399 D. 16499

6. Write $\frac{2}{10}$ as a decimal.
A. 0.2 B. 0.02
C. 0.0002 D. 0.002
7. Work out: 98 x 10
A. 108 B. 980
C. 88 D. 9800
8. What is $\frac{2}{7} + \frac{2}{7} + \frac{2}{7}$?
A. $\frac{4}{7}$ B. $\frac{6}{7}$
C. $\frac{6}{21}$ D. $\frac{8}{21}$
9. Which of the following are even numbers only?
A. 1, 3, 5, 9
B. 4, 0, 7, 9
C. 4, 10, 16, 18
D. 2, 10, 7, 18
10. Which of the following numbers are both divisible by 2 and 5?
A. 235 B. 528
C. 940 D. 532
11. The distance from the school gate to the flag post is 7m 66cm. What is the distance in centimeters?
A. 766cm B. 70066
C. 7066 D. 7.66

PRINTED BY HIGHFLYER SERIES Tel: 0723 499860

Funded By: C.D.F. Gatundu South Constituency,
Patron Hon. Moses Kuria, MP Gatundu South.

12. Work out: $23.2 + 5.36$
 A. 0.2856 B. 2.856
 C. 285.6 D. 28.56
13. Which of the following is an odd number?
 A. 22 B. 69
 C. 44 D. 88
14. What is the total value of digit 7 in 470943?
 A. Tens of thousands
 B. 7000
 C. 70,000
 D. Thousands
15. Odd number + odd number = _____ number.
 A. odd B. prime
 C. mixed D. even
16. A boy bought 25 eggs from a shop. He broke 9 on the way home. How many eggs were left?
 A. 34 B. 15
 C. 16 D. 17
17. Six and seven are factors of _____
 A. 13 B. 42
 C. 6 D. 7
18. Work out $6473 - 362$
 A. 6111 B. 5111
 C. 6835 D. 6211
19. Work out $\frac{6}{9} - \frac{4}{9}$?
 A. $\frac{1}{9}$ B. $\frac{10}{9}$
 C. $\frac{2}{9}$ D. 2
20. What is $2 \sqrt{8}$
 A. 28 B. 6
 C. 16 D. 4


21. Which is the eighth month of the year?
 A. July B. September
 C. October D. August
22. What is the approximate height of your classroom door?
 A. 10m B. 20m
 C. 200m D. 2m
23. Which number comes after 9999?
 A. 100000 B. 9998
 C. 10,000 D. 1000
24. There are 20 children. Each child has 3 bananas. How many bananas do they have altogether?
 A. 60 B. 23
 C. 203 D. 17
25. Work out: $530 + 1389$
 A. 9191 B. 1919
 C. 1909 D. 10919
26. Which fraction is greater? $\frac{1}{2}$ or $\frac{1}{3}$
 A. equal B. none
 C. $\frac{1}{2}$ D. $\frac{1}{3}$
27. How many squares are in the figure below?

 A. 9 B. 5
 C. 6 D. 7
28. What is $\frac{1}{3}$ of 30?
 A. 30 B. 90
 C. 10 D. 31

29. Work out:

Weeks	Days
2	4
+ 3	4
<hr/>	

- A. 6 weeks 1 day
- B. 5 weeks 8 days
- C. 6 weeks 0 days
- D. 6 weeks 2 days

30. What is the time shown by the clock face?



- A. 3 o'clock
 - B. 12 o'clock
 - C. 1 o'clock
 - D. 2 o'clock
31. There were 934 adults in a meeting. 530 were women. How many men were there?
- A. 1464
 - B. 404
 - C. 504
 - D. 304

32. Work out:

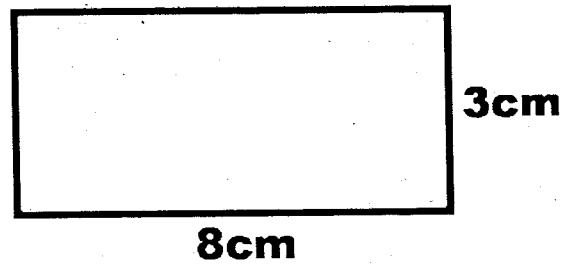
$$372\text{m} + 52\text{m} + 409\text{m}$$

- A. 833
- B. 733
- C. 933
- D. 633

33. Which one is heavier. 1kg of sugar or 1kg of wool?

- A. sugar + wool
- B. wool
- C. equal
- D. sugar

34. Find the area of the figure below.



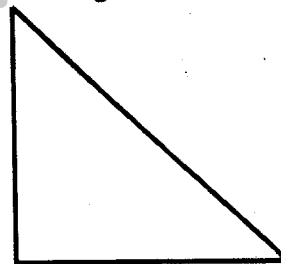
- A. 22cm^2
- B. 24cm
- C. 22cm
- D. 24cm^2

35. Sh. Cts

139	44
+ 63	63
<hr/>	

- A. Sh.192.7 cents
- B. Sh.203 70 cents
- C. Sh.92.70 cents
- D. Sh.203 7 cents

36. The figure below is called _____



- A. Triangle
- B. Rectangle
- C. Square
- D. None of them

37. Work out: 231×14

- A. 3234
- B. 3324
- C. 3432
- D. 2234

38. A crate of soda holds 24 bottles. How many bottles are there in 3 crates?

- A. 27
- B. 62
- C. 72
- D. 74

39. Njambi had 400 stamps. She sold 170 of them. How many were left?
 A. 570 B. 130
 C. 230 D. 330
40. Which one of the following is true?
 A. 4.43 is less than 4.03
 B. 4.43 is less than 4.33
 C. 5.43 is greater than 5.53
 D. 4.43 is less than 4.53
41. Arrange the following numbers from the smallest to the largest: 343, 433, 334, 403, 304.
 A. 304, 403, 334, 343, 443
 B. 304, 334, 403, 343, 443
 C. 304, 334, 343, 403, 433
 D. 433, 403, 343, 334, 304
42. What is the approximate height of your mathematics teacher?
 A. 1720m
 B. 17.2m
 C. 1.72m
 D. 172m
43. The month of June has 30 days. How many days are there in August?
 A. 30
 B. 31
 C. 28
 D. 62
44. Kinyua had a sugar cane. He gave $\frac{1}{4}$ to his brother, a $\frac{1}{4}$ to his friend, a $\frac{1}{4}$ to his mother and he also ate a $\frac{1}{4}$. How much sugar cane was he left with?
 A. $\frac{3}{4}$ B. 0
 C. $\frac{2}{4}$ D. $\frac{1}{4}$

45. Divide $10 \overline{) 340}$
 A. 304 B. 34
 C. 43 D. 403

46. How many sides does a rectangle have?
 A. 4 B. 3
 C. 6 D. 8

47. Subtract:

$$\begin{array}{r} 864 \\ - 312 \\ \hline \end{array}$$

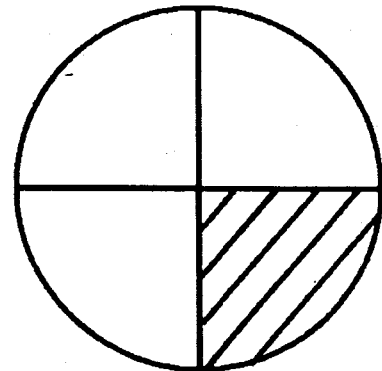
- A. 1176 B. 652
 C. 552 D. 452

48. Work out: $\frac{4}{11} + \frac{2}{11} + \frac{1}{11} = ?$

- A. $\frac{6}{11}$ B. $\frac{7}{11}$
 C. $\frac{8}{11}$ D. $\frac{7}{33}$

49. How many $\frac{1}{2}$ kg packets are there in 20kg of sugar?
 A. 40 B. 20
 C. 20 $\frac{1}{2}$ D. 10

50. What fraction of the figure below is unshaded?



- A. $\frac{1}{4}$ B. $\frac{2}{3}$
 C. $\frac{3}{4}$ D. $\frac{1}{8}$

**GATUNDU DISTRICT EXAMINATION
STANDARD FOUR – END TERM I 2016**

ENGLISH

Time: 1 hour 40 minutes

Read the following passage then fill in the gaps

Long time ago 1 lived 2 old man 3 Mr Kihara. He 4 very hard working. He always woke up 5 before everyone else 6 the homestead. Mr Kihara owned a big 7 of cattle 8 earned him a lot of money. Every day, 9 grandsons helped him to 10 the cattle. As the cattle 11, he told them 12 13. At noon, the grandsons took the cattle 14 the river to quench 15 thirst

- | A | B | C | D |
|-----------------|------------|------------|-------------|
| 1. They | their | there | thier |
| 2. Is | an | the | a |
| 3. Known | called | named | named |
| 4. Was | were | is | are |
| 5. Fast | fasten | vast | first |
| 6. At | try | on | in |
| 7. Hard | hand | hard | had |
| 8. Whose | what | which | whom |
| 9. Her | she | hers | his |
| 10. Look for | look at | look after | look out |
| 11. Graze | grazed | grazes | grazing |
| 12. Interesting | intersting | interested | interesting |
| 13. Stories | storeys | story | storys |
| 14. In | to | into | at |
| 15. There | them | their | the |

Complete these sentences with suitable words

16. Hare a clever animal.
A. Is
B. was
C. were
D. are
17. Muthoni and Mungai in school
A. There
B. are
C. is
D. was
18. She is eating egg
A. A
B. the
C. some
D. an

PRINTED BY HIGHFLYER SERIES Tel: 0723 499860

**Funded By: C.D.F. Gatundu South Constituency,
Patron Hon. Moses Kuria, Mp Gatundu South.**

19. Each of the boys _____ a cake
A. Has
B. have
C. are
D. hard

20. Kamanu goes to school _____ foot
A. With
B. by
C. in
D. on

21. The cat has _____ all the milk
A. Drank
B. drink
C. drinking
D. drunk

Choose the opposite of the underlined word in question 22-23

22. The woman cooked a big fish
A. Bigger
B. large
C. Small
D. smaller

23. My father is holding a short stick
A. Long
B. small
C. shorter
D. longer

Questions 24-25, fill up the similes of the following

24. As brave as a _____
A. Man
B. lion
C. elephant
D. buffalo

25. As busy as a _____
A. Mouse
B. rat
C. cat
D. bee

For question 26-27, choose the correct preposition

26. My brother arrived _____ home late
A. On
B. in
C. at
D. to

27. The ball is _____ the table
A. In
B. on
C. at
D. by

Questions 28-30, write the correct verb

28. The teacher _____ a book in a shop
A. Buying
B. bought
C. buyie
D. boght

29. The banana was _____ by Kamande
A. Ate
B. eating
C. cated
D. eaten

30. Madam Jane is _____ a blue car
A. Drove
B. driven
C. driving
D. droven

Read the passage below and answer questions 31-40

There are many games played in Kenya. Some of them are netball, volleyball, football and handball.

Football is very popular. The game has two teams. Each team has eleven players. A goalkeeper prevents the ball from entering the goal. The game is supervised by a referee who is helped by two lines men.

Football is mainly played by boys. Girls enjoy playing netball while handball is played by both boys and girls.

People who cheer and like football are called fans

31. A game of football has how many players
A. 22
B. 2
C. 11
D. 3
32. How many games are mentioned in the passage
A. 5
B. 4
C. 3
D. 2
33. The player who prevents the ball from entering the goal is the
A. Goal keeper
B. referee
C. linesmen
D. captain
34. The game of football is supervised by a
A. Linesman
B. goalkeeper
C. coach
D. referee
35. How many linesmen are in a game of football
A. 4
B. 2
C. 20
D. 22
36. Which one of the following games is played by both boys and girls?
A. Handball
B. football
C. volleyball
D. netball
37. The two people who help the referee are called
A. Cheers
B. linesmen
C. fans
D. players
38. Which one of the following game is very popular?
A. Netball
B. volleyball
C. none
D. football
39. Which one of the following is not mentioned in the passage
A. Volleyball
B. netball
C. hide and seek
D. football
40. People who like football and cheer players are called
A. Cheerers
B. players
C. fans
D. on-lookers

Read the passage below and answer questions 41-50

Once upon a time there lived an old man with his wife. His name was Muigai. He lived with his five sons in the village. He had a garden but the family was poor as the five sons were always busy fighting instead of helping their father in cultivating the land. So the old man was very unhappy.

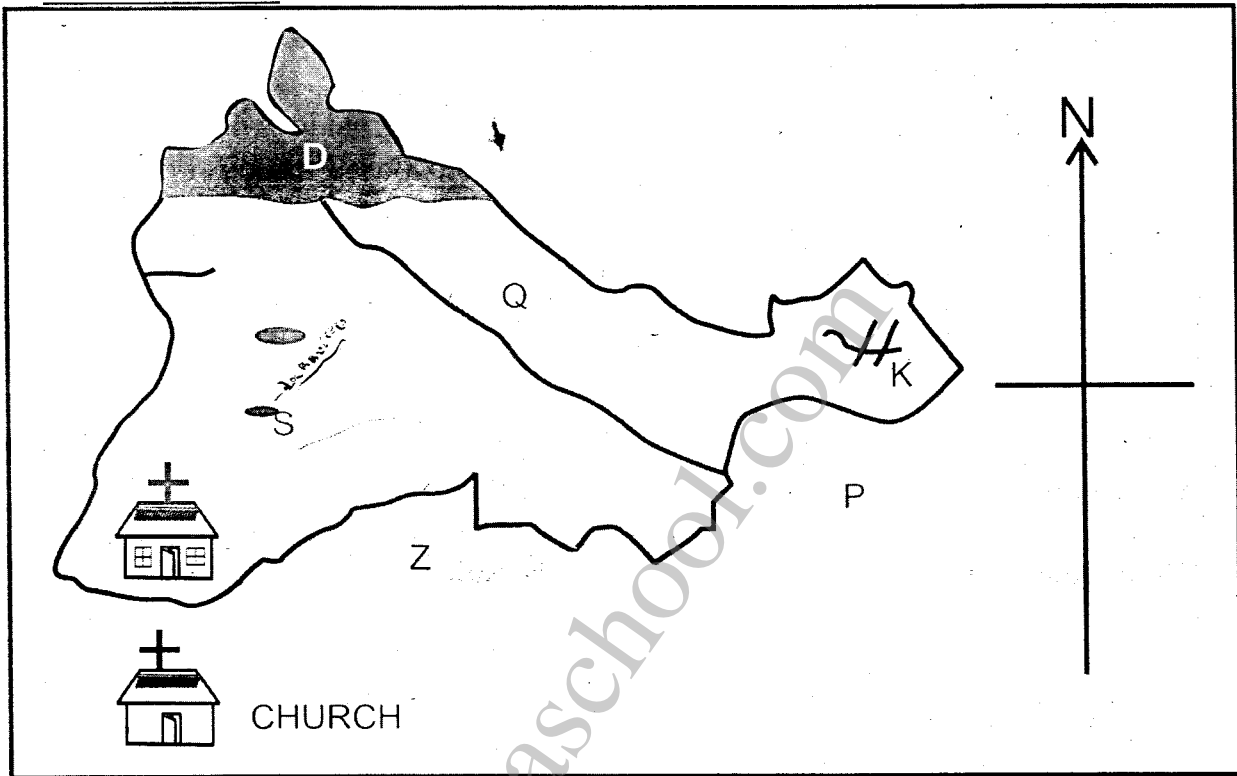
They lived in Gatundu which is in kiambu county. This area produces the highest amount of tea. In 2005, Gatundu produced five million kilograms of tea.

41. The old man lived with _____
A. His wife
B. A lady
C. A woman
D. A daughter
42. The old man was called _____
A. Mungai
B. Mbugua
C. Muigai
D. Munga
43. The old man had _____ sons
A. 4
B. 3
C. 2
D. 5
44. All the members of the family were _____
A. 5
B. 7
C. 6
D. 8
45. The old man lived an _____ life
A. Unhappy
B. happy
C. good
D. long
46. How was the old man's family?
A. Rich
B. bad
C. poor
D. healthy
47. Where did the old man live with his family
A. Murang'a
B. Gatanga
C. Ndundu
D. Gatundu
48. In which county was the family living?
A. Kitui
B. Kiambu
C. Kirinyaga
D. Kisii
49. How many kilograms of tea did Gatundu produce in the year 2005?
A. Five million
B. Four million
C. Six million
D. Three million
50. According to the above passage, which tribe live in kiambu county??
A. Akamba
B. Luo
C. Kikuyu
D. Ameru

GATUNDU DISTRICT EXAMINATION
STANDARD FOUR – END TERM I 2016
SOCIAL STUDIES & C.R.E

Time: 2 hours 15 minutes

OUR COUNTY



Study the map of our County and answer questions 1 - 7

1. The name of our county is _____

- A. Kiambu
- B. Thika
- C. Nakuru
- D. Kajiado

2. The county marked Z is _____

- A. Nyandarua
- B. Nairobi
- C. Nakuru
- D. Kajiado

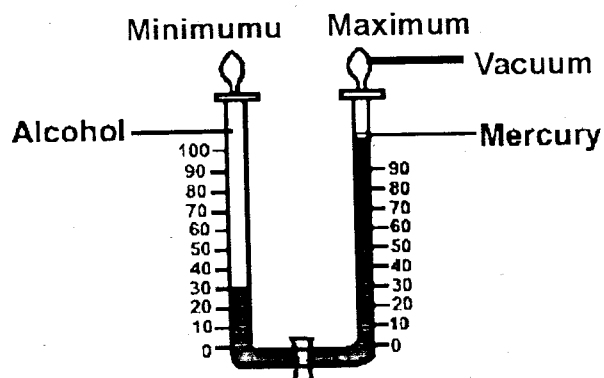
PRINTED BY HIGHFLYER SERIES Tel: 0723 499860

Funded By: C.D.F. Gatundu South Constituency,
Patron Hon. Moses Kuria, Mp Gatundu South.

3. The falls marked K is _____
 A. Thika falls
 B. Nyandarua falls
 C. Chania falls
 D. Fourteen falls
4. The feature marked D is _____
 A. Abardares ranges
 B. Ndarugu hills
 C. Kilimambogo hill
 D. Kakuzi Ranges
5. The dam marked S is _____
 A. Maguo dam
 B. Ruiru dam
 C. Limuru dam
 D. Ndakaini dam
6. Most people in our county are _____
 A. Hindus
 B. Muslims
 C. Jews
 D. Christians
7. The county marked P is _____
 A. Machakos
 B. Nyandarua
 C. Nyeri
 D. Nakuru
8. Our M.P is called _____
 A. Joseph Kinywa
 B. Kimani mbogo
 C. Alice Thuo
 D. Moses Kuria
9. Our county has _____ districts.
 A. 10
 B. 28
 C. 47
 D. 36
10. Vegetables that grows on their own are called _____
 A. Forest
 B. natural
 C. Seasonal
 D. planted
11. The four main parts of a compass are called _____ points
 A. north
 B. key
 C. compass
 D. cardinal
12. The most used means of transport in our county is _____
 A. Road
 B. Rail
 C. water
 D. Air
13. Our school is in _____ sub-county
 A. Thika west
 B. Kiambu
 C. Gatundu south
 D. Ruiru
14. Moving air is called _____
 A. Temperature
 B. wind
 C. Grass
 D. clouds
15. Another name for grassland is _____
 A. Savanna
 B. plateau
 C. Beach
 D. Desert
16. The leader of our country is _____
 A. M.P
 B. Governor
 C. Chief
 D. President

17. In big towns, people cross the road at _____
- Round about
 - Road junction
 - Zebra crossing
 - Corner

18. The weather instrument shown below is a _____



- Barometer
 - Thermometer
 - Wind vane
 - Rain gauge
19. The main language group in our sub-county/county is _____
- Bantu
 - Cushites
 - Nilotes
 - Asians
20. When the weather is cold we wear _____ clothes.
- light
 - heavy
 - Hot
 - Cold
21. What is culture _____
- Height above sea level.
 - The food that we eat.
 - Nature of land.
 - Peoples way of life.

22. People who walk with their goods selling to others are known as _____
- Buyers
 - hawkers
 - Traders
 - sellers.

23. People who use parts of trees to treat sick people are called _____
- Herbalists
 - Doctors
 - Nurses
 - Diviners

24. The best time for harvesting is _____
- Cold season
 - Rainy season
 - Wet season
 - dry season

25. _____ are people who kill wildlife to get money
- Hunters
 - wardens
 - Poachers
 - tourists.

26. The sun rises in the _____ direction.
- East
 - North
 - West
 - South

27. Many trees make up a _____
- mountain
 - vegetation
 - swamp
 - forest

28. Crops grown to be eaten at home are called _____

- A. Crops
- B. food crops
- C. cash crops
- D. weeds

29. There are _____ months in one year.

- A. twelve
- B. ten
- C. six
- D. five

30. The National flag has _____ colours.

- A. Two
- B. four
- C. six
- D. five

31. People who speak in a similar way and use words related to each other form a _____ group.

- A. world
- B. Language
- C. clan
- D. Community

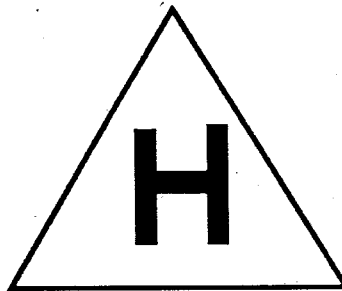
32. Who keep law and order in our country

- A. Police
- B. thieves
- C. teachers
- D. drivers

33. Which one of the following is a festival.

- A. Hunting
- B. Drama
- C. Marriage
- D. Naming

34. The road sign drawn shows there is _____ around.



- A. road
- B. Bridge
- C. Hospital
- D. Church

35. Birds kept for meat are called _____

- A. Layers
- B. cranes
- C. Broilers
- D. Beef

36. The 4th president of Kenya is _____

- A. Uhuru Kenyatta
- B. Mwai Kibaki
- C. Daniel Moi
- D. William Ruto

37. An area with many people is said to be _____ populated.

- A. High
- B. densily
- C. Sparsely
- D. Low

38. Cattle kept for meat are known as _____ cattle.

- A. Broilers
- B. Dairy
- C. Pork
- D. Beef

39. The Maasai live in _____

- A. stores
- B. places
- C. manyatta
- D. dens

40. Who is the deputy president of Kenya?

- A. Musalia Mudavadi
- B. William Ruto
- C. Kalonzo Musyoka
- D. George Saitoti

41. A county is made up of many _____

- A. Sub-locations
- B. Sub-counties
- C. Locations
- D. Divisions

42. The land between two hills is called a _____

- A. Plains
- B. Mountains
- C. valley
- D. lakes

43. An example of a Cushite is a _____

- A. Boran
- B. Kikuyu
- C. Maasai
- D. Luo

44. In Kenya we have _____ counties

- A. 8
- B. 25
- C. 25
- D. 47

45. Watering plants during drought season is known as _____

- A. farming
- B. drought
- C. Irrigation
- D. flooding

46. Things that people do to get money or create wealth is called _____

- A. Irrigation
- B. economic activities
- C. Stealing
- D. resources

47. Which of the following is a basic need _____

- A. T.V
- B. market
- C. Business
- D. Shelter

48. The needle of a compass always points to the _____

- A. North
- B. East
- C. South
- D. West

49. People who worship together form a _____ community

- A. Farming
- B. Trading
- C. religious
- D. Working

50. A group of families from one ancestor form a _____

- A. society
- B. community
- C. a group
- D. clan

51. Which of the following is not a food crop _____

- A. maize
- B. bananas
- C. Pyrethrum
- D. Cassava

52. Chickens are kept mainly to produce _____

- A. manure
- B. feathers
- C. money
- D. meat and eggs

53. Dairy cattle are mainly kept in _____-areas

- A. hot and dry
- B. cool and wet
- C. hot and wet
- D. wet and warmer

54. Pyrethrum is used to manufacture _____

- A. Insecticides
- B. Flowers
- C. Oil
- D. Cattle feeds

55. Which of the animals is not likely to be kept in Kiambu county?

- A. Dairy cattle
- B. Donkeys
- C. pigs
- D. camels

56. Bees provide us with _____

- A. Milk
- B. wool
- C. honey and wax
- D. meat

57. Crops that are grown mainly to be sold are known as _____

- A. Substance crops
- B. food crops
- C. irrigation crops
- D. cash crops

58. Beef cattle are mainly kept in _____

- A. forests
- B. cool and wet areas
- C. ranches
- D. slaughter houses

59. Too much rainfall causes _____

- A. drought
- B. floods
- C. valley
- D. climate

60. Elections in Kenya are held after _____ years

- A. 10
- B. 12
- C. 5
- D. 4

C.R.E

61. God wants us to care for his _____

- A. Stars
- B. Creation
- C. Rain
- D. Fire

62. Christians worship God in _____ on Sundays.

- A. Temples
- B. Shrines
- C. Churches
- D. Mosques

63. The Maasai call their God _____

- A. Enkai
- B. Asis
- C. Mulungu
- D. Ngai

64. Abraham's son was called _____

- A. Moses
- B. Jacob
- C. Isaac
- D. Lot

65. Who invited Paul to stay in her house at Thyatira

- A. Dorcas
- B. Martha
- C. Hannah
- D. Lydia

66. The first people to see baby Jesus were

- A. Shepherds
- B. Wise men
- C. Herod and Pilate
- D. Peter and John

67. The preparation for the birth of Jesus Christ is called
- Lent
 - Advent
 - Christmas
 - Easter
68. Jesus was born in
- Nazareth
 - Jerusalem
 - Bethlehem
 - Galilee
69. Jesus fed four thousand on _____
- Seven loaves of bread and a few fish
 - Five loaves of bread and two fish
 - Seven fish and two loaves of bread
 - Seven loaves of bread and five fish
70. We praise God by _____
- Abusing others
 - Thanking Him
 - Stealing
 - Playing
71. The holy spirit came upon the disciples on the day of _____
- Passover
 - Easter
 - Pentecost
 - Advent
72. Kamau took Wanjiru's pen and left it at home. As a Christian Wanjiru should _____
- Beat him
 - Call her friends to beat him
 - Report to the teacher
 - Forgive him
73. _____ was sold by his brothers in Egypt.
- Jacob
 - Joseph
 - Juda
 - Benjamin
74. The time we remember the death and resurrection of Jesus Christ is called
- Easter
 - Christmas
 - Pentecost
 - Lent
75. _____ betrayed Jesus Christ
- Peter
 - Andrew
 - Paul
 - Judas Iscariot
76. _____ was raised by Jesus from the dead
- Simon's mother in law
 - Lazarus
 - Zacchaeus
 - Phillip
77. Who among the following is NOT a church leader
- Priest
 - Bishop
 - Pastor
 - Chief
78. When Jesus sent out his disciples, he instructed them to _____
- judge the sinners
 - Deny the needy
 - Take food from people
 - To carry nothing with them
79. Jesus was baptized by _____
- John revelator
 - Judas Iscariot
 - John the Baptist
 - Peter the rock
80. Who helped Jesus to carry the cross
- Simon of Cyrene
 - Joseph of Arimathea
 - Simon Peter
 - Judas Iscariot

81. Jesus prayed on Mount
A. Sinai
B. Moriah
C. Olives
D. Carmel
82. Samuel parents lived in
A. Jerusalem
B. Ramah
C. Nazareth
D. Cana
83. The last book of the Old Testament is the
A. Revelation
B. Malachi
C. Genesis
D. Matthew
84. The name Emmanuel given to Jesus means
A. Prince of peace
B. Great counselor
C. God saves
D. God with us
85. Naomi's daughter-in-law was called
A. Martha
B. Lydia
C. Ruth
D. Rebecca
86. Which of the following is a gift of the Holy Spirit?
A. Prophecy
B. Joy
C. Peace
D. Humility
87. Ananias and Sapphira were punished because they
A. Kept something for themselves
B. Lied to the Holy Spirit
C. They did not want to share with others
D. They were jealous of the church leaders
88. What does God want Christians to do on Sabbath day?
A. Go to work
B. Do general cleaning
C. Rest and visit friends
D. Rest and worship Him
89. When Solomon was asked by God what he wanted, he chose
A. Riches
B. Money
C. Wisdom
D. Glory
90. Those who honour and respect their parents will be blessed with
A. Wisdom
B. Long life
C. Money riches
D. Many children

GATUNDU DISTRICT EXAMINATION
STANDARD FOUR – END TERM I - 2016

MARKING SCHEME

ENGLISH	KISWAHILI	MATHS	SCIENCE	SOCIAL STUDIES	
1. C	1. A	1. B	1. C	1. A	51. C
2. B	2. B	2. C	2. D	2. B	52. D
3. B	3. C	3. D	3. D	3. D	53. B
4. A	4. D	4. A	4. A	4. A	54. A
5. D	5. B	5. C	5. A	5. C	55. D
6. D	6. C	6. A	6. B	6. D	56. C
7. C	7. D	7. B	7. D	7. A	57. D
8. C	8. A	8. B	8. B	8. D	58. C
9. D	9. C	9. C	9. B	9. A	59. B
10. C	10. D	10. C	10. D	10. B	60. C
11. B	11. A	11. A	11. B	11. D	
12. A	12. B	12. D	12. A	12. A	
13. A	13. D	13. B	13. D	13. C	
14. B	14. C	14. C	14. B	14. B	C.R.E
15. C	15. B	15. D	15. B	15. A	
16. A	16. B	16. C	16. B	16. D	61. B
17. B	17. D	17. B	17. B	17. C	62. C
18. D	18. A	18. A	18. B	18. B	63. A
19. A	19. C	19. C	19. B	19. A	64. C
20. D	20. D	20. D	20. C	20. B	65. D
21. D	21. B	21. D	21. A	21. D	66. B
22. C	22. A	22. D	22. A	22. B	67. B
23. A	23. B	23. C	23. B	23. A	68. C
24. B	24. C	24. A	24. C	24. D	69. A
25. D	25. C	25. B	25. C	25. C	70. B
26. C	26. A	26. C	26. A	26. A	71. C
27. B	27. D	27. B	27. B	27. D	72. D
28. B	28. B	28. C	28. A	28. B	73. B
29. D	29. D	29. A	29. A	29. A	74. A
30. C	30. C	30. D	30. C	30. B	75. D
31. A	31. B	31. B	31. A	31. B	76. B
32. B	32. C	32. A	32. D	32. A	77. D
33. A	33. A	33. C	33. B	33. B	78. D
34. D	34. B	34. D	34. D	34. C	79. C
35. B	35. A	35. D	35. B	35. C	80. A
36. A	36. A	36. A	36. A	36. A	81. C
37. B	37. B	37. A	37. A	37. B	82. B
38. D	38. A	38. C	38. B	38. D	83. B
39. C	39. B	39. C	39. A	39. C	84. D
40. C	40. A	40. D	40. A	40. B	85. C
41. A	41. D	41. C	41. A	41. B	86. A
42. C	42. A	42. C	42. C	42. C	87. B
43. D	43. B	43. B	43. B	43. A	88. D
44. B	44. C	44. B	44. B	44. D	89. C
45. A	45. C	45. B	45. C	45. C	90. B
46. C	46. C	46. A	46. D	46. B	
47. D	47. A	47. C	47. B	47. D	
48. B	48. D	48. B	48. C	48. A	
49. A	49. D	49. A	49. A	49. C	
50. C	50. B	50. C	50. D	50. D	