

SIGNAL EXAMS 2018

MATHEMATICAL ACTIVITIES

NAME:	
SCHOOL:	

Fill in the missing numbers.

1. 27, _____, _____, 30

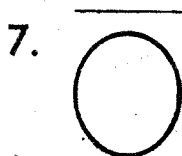


2. 32, _____, _____, 35

Add.

3. $\begin{matrix} \triangle \triangle \triangle \triangle \triangle \\ \triangle \triangle \triangle \triangle \triangle \end{matrix} + \begin{matrix} \triangle \triangle \\ \triangle \end{matrix} = \underline{\hspace{2cm}}$

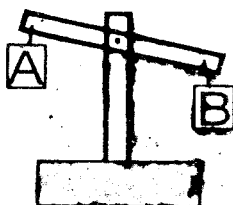
4. $\begin{matrix} r r r r \\ r r r r \end{matrix} + r r r = \underline{\hspace{2cm}}$

Name the shapes



9. A triangle has _____ sides

10. Which one is heavier?



Write in symbols.


11. Twenty six - _____

12. Forty four - _____

13. Ninety two - _____

14. One cow has one tail. How many tails do 4 cows have? _____

15. Draw half a circle.




16. _____ is the fifth month of the year.

17. What is the place value of 3 in 300? _____

18. 9 hundreds 0 tens 9 ones = _____

19. Which pencil is shorter?




20. $9 + 4 + 6 =$ _____

21. $3 + 3 + 3 =$ _____ \times _____ $=$ _____

22. $4 + 4 + 4 =$ _____ \times _____ $=$ _____

23. _____ is the third month of the year.

24. **Draw an oval**



25. $0 + \square = 11$

26. $6 - \square = 4$

27. $\square + 4 = 11$

28. $9 + 3 + 2 =$ _____

29. 001 = _____ hundreds
_____ tens _____ ones.

30. $16 + 2 =$ _____

31. $3 + 4 =$ _____

32. $9 + 6 =$ _____

33. Which one is lighter:
A. bag or B. pencil? _____

34. Which one is longer?

A. B.

35. Multiply 3 by 10 = _____.

36. An hour has _____ minutes.

37. A week has _____ days.

38. 9 = _____ hundreds _____
_____ tens _____ ones.

39. 17 = _____ hundreds
_____ tens _____ ones.

Divide.

40. $12 \div 4 =$ _____

41. $9 \div 3 =$ _____

42. $2 + 2 =$ _____

43. $10 \div 5 =$ _____

44.  = _____

45.
$$\begin{array}{r} 40 \\ -10 \\ \hline \end{array}$$

46.
$$\begin{array}{r} 46 \\ +15 \\ \hline \end{array}$$

47. $56 - 26 =$ _____

48. Kamau had 6 oranges. He shared them equally among his 2 daughters. How many oranges did each daughter get?

49. $3 \times 5 =$ _____

50. $3 \times 2 =$ _____

**SIGNAL EXAMS 2018
LANGUAGE ACTIVITIES**

SIGNAL 006

NAME:	
SCHOOL:	

Dictation.

1. _____
2. _____
3. _____
4. _____
5. _____

Add '-ing' to make doing words.

6. See - _____
7. Say - _____
8. Move - _____
9. Sing - _____
10. Leave - _____

Write in plurals.


11. Thief - _____
12. Pony - _____
13. Toy - _____
14. Bell - _____
15. Leaf - _____

Write the past tense.


16. Come - _____
17. Go - _____
18. Teach - _____
19. Sing - _____
20. Sit - _____

Name the pictures.

21. _____




22. _____




23. _____



24. _____



25.



Use 'a' or 'an'.

26. _____ arrow
27. _____ leg
28. _____ honest boy
29. _____ house
30. _____ elephant

Fill in the missing letter.

31. T ____ acher
32. ____ mbrell ____
33. B ____ ll
34. Je ____
35. ____ nife

Write the opposite.

36. Sit- _____

37. Up- _____
38. Come- _____
39. Father- _____
40. Boy- _____

Use 'is' or 'are'.

41. This _____ a chair.
42. These _____ oranges.
43. _____ this your father?
44. This _____ a pig
45. These _____ socks.

Complete the following sentences.

46. _____ is the last month of the year.
47. I am in grade _____.
48. How many months are there in a year? _____.
49. A _____ treats sick people.
50. I am a _____.

SIGNAL EXAMS 2018




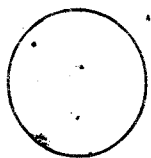

KISWAHILI ACTIVITIES

JINA:	
SHULE:	






Imla.

1. _____
2. _____
3. _____
4. _____
5. _____

Andika majina ya maumbo haya.

- | | |
|---|--|
| 6.  | 7.  |
| 8.  | 9.  |
| 10.  | |

Andika majina ya michoro hii.

11.  Hili ni _____.
12.  Huu ni _____.
13.  Hili ni _____.
14.  Hii ni _____.
15.  HUU ni _____.

Andika kwa wingi.

16. Kisu- _____
17. Mtoto- _____
18. Yai - _____
19. Mkate- _____
20. Unga- _____

Andika kwa maneno.

21. 8 - _____
22. 14 - _____
23. 0 - _____
24. 20 - _____
25. 5 - _____

Andika vizuri.

26. itm- _____
27. asba- _____
28. rafasi- _____
29. jikiko- _____
30. sape- _____

Unda majina ukianza kwa:

31. Sh _____
32. Ny _____
33. Mt _____
34. Ch _____
35. Mk _____

**Jaza pengo ukitumia 'a',
'e', 'i', 'o', 'u'.**

36. Ch__pa
37. Mp__ra
38. Ny__ka
39. Mk__te
40. ms__ch__na

**Tumia 'huyu', 'huu', au
'hawa' kujaza pengo.**

41. Mtoto _____ ni mgonjwa.
42. _____ ni ukuta.
43. _____ ni watoto wangu.
44. Mgeni _____ ni wa nani?
45. Mti _____ umeanguka.

Kamilisha sentensi hizi.

46. Nyumba yangu
haina _____.
47. Mtoto wa ng'ombe ni

48. Haraka haraka haina

49. Niko katika gredi ya _____.
50. Hasira _____
(pili, hasara, ndama,
baraka, mlango)

SIGNAL EXAMS 2018

CHRISTIAN RELIGIOUS ACTIVITIES

NAME:	
SCHOOL:	

1. God created everything in _____ days. **(5, 6, 7)**
2. The mother of Jesus was _____.
(Leah, Mary, Lucy)
3. _____ betrayed Jesus.
(Julius, Judas, Amos)
4. Christians worship God in _____.
(house, mosque, church)
5. We pray " Our father who at in _____.
(home, heaven, school)
6. The wise men were led by _____ to see baby Jesus.
(moon, star, sky)
7. Daniel prayed _____ times.
(two, seven, three)
8. The _____ is the word of God.
(book, Bible, paper)
9. Jesus died for our _____.
(cross, sins, church)
10. Abraham was the husband of _____.
(Mary, Sarah, Elizabeth)
11. Jesus had _____ disciples.
(10, 12, 14)
12. We should _____ our friends.
(hate, love, abuse)
13. God loves children who _____ their parent.
(abuse, obey, hate)
14. _____ calmed the storm.
(Angel, Jesus, Peter)
15. We celebrate the death of Jesus christ in _____ holiday.
(Christmas, Easter, Jamhuri)
16. Sharing makes us _____.
(happy, rich, poor)
17. _____ is the house of God.
(Hut, Church, Home)
18. _____ was called four times by God. **(Abraham, Samuel, Noah)**
19. Jesus is the son of _____.
(Abraham, God, Peter)
20. _____ build the ark.
(Noah, David, Moses)

SIGNAL EXAMS 2018
HYGIENE AND NUTRITION ACTIVITIES

NAME:	
SCHOOL:	

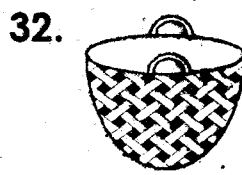

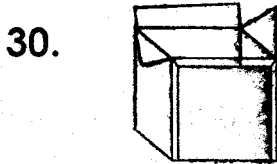
1. We use a _____ to brush our teeth.
(towel, toothbrush, toothpick)
2. Dirty utensils smell _____.
(good, bad, sweet)
3. We bathe in the _____.
(table room, kitchen, bathroom)
4. Sharing personal items makes us _____. (healthy, sick, good)
5. Food is served and eaten in the _____.
(dinning room, kitchen, bedroom)
6. We find cockroaches in _____ houses. (clean, dirty, smart)
7. Dirty hair keeps _____.
(jiggers, lice, ticks)
8. Eating breakfast makes our bodies _____.
(sick, healthy, weak)
9. We should wash our hands _____ eating. (after, before, during)
10. We use a chewed stick and _____ when we do not have a tooth brush and tooth paste.
(sugar, salt, honey)
11. A ripe mango tastes _____.
(sour, sweet, bitter)
12. We should not talk with _____ in the mouth. (friend, food, brush)
13. Drinking dirty water makes us _____.
(healthy, sick, good)
14. We should wash our hands after visiting the _____.
(kitchen, toilet, church)
Name three uses of water.
15. _____
16. _____
17. _____
18. Diseases are caused by _____.
(food, germs, water)
19. The food we eat in-between the main meals is called _____.
(chips, salad, snacks)
20. Dirty nails keep _____.
(lice, jiggers, fly)
Name three fruits we eat.
21. _____
22. _____
23. _____
24. Kitchen is a place where we prepare our _____.
(teeth, food, body)
25. After bathing we dry ourselves with a _____.
(handkerchief, towel, soap)

26. When we fall sick we go to _____.
(church, hospital, home)

27. _____ is my favourite food.

28. Always play _____ games.
(safe, rough, dangerous)

Name the pictures.



33. We should not share _____.
(food, towel, shoes)

34. We store food in a _____ and
clean place.
(warm, cool, hot)

Name two foods we cook
before eating.

35. _____

36. _____

37. A fish gives us _____.
(eggs, milk, meat)

38. A hen gives us eggs and _____.
(milk, meat, honey)

Name two animals that are
sources of food.

39. _____

40. _____

41. We eat breakfast, lunch
and _____.

(part time, supper, food)

Name two types of urinals.

42. _____

43. _____

Read and draw foods we eat.

44. Carrot

45. Sweetpotato

46. Fish

47. Cabbage

48. Plant leaves are _____ in colour.
(red, green, black)

49. A ripe tomato is _____ in colour.
(pink, red, yellow)

50. We taste with our _____.


SIGNAL EXAMS 2018


ENVIRONMENTAL ACTIVITIES

NAME:	
SCHOOL:	

Draw the following weather symbols.

1. Calm day	2. Windy day
3. Cloudy day	

- Maasai lives in _____.
(flat, hut, manyatta)
- We eat the stem of a _____.
(carrot, cabbage, sugarcane)
- My mother's brother is my _____.
(aunt, uncle, father)
- A family is a group of ____ who are related.
(animal, flower, people)
- We get eggs from a _____.
(cow, cat, hen)
- The main source of light is _____.
(moon, sun, star)
-  The weather is _____.

- During the rainy season, farmers _____ seeds.
(cook, plant, sell)
- Sick people go to _____.
(church, hospital, school)
-  The weather is _____.
- _____ is the president of Kenya. (Ruto, Uhuru, Raila)
Name four domestic animals.
- _____
- _____
- _____
- _____
- We should _____ school rules.
(learn, write, obey)
- _____ soil is used for modelling.
(Sand, Loam, Clay)
- Meat from a pig is called _____.
(beef, pork, mutton)
- Our national anthem has _____ stanzas. (2, 3, 4)
- We wear light clothes on a _____ day. (sunny, rainy, calm)

24. Shadows are formed when there is _____.

(dark, light, shade)

25. We eat the _____ of carrots.

(stem, root, leaves)

26. Sick animals are taken to a _____.

(dentist, veterinary, nurse)

27. Our headteacher is called _____.

28.  This is a _____.

(river, hill, road)

29. A _____ protects our home.

(cat, cow, dog)

30. Many trees form a _____.

(land, forest, shamba)

31. _____ is a source of water.

(Tap, Tank, Rain)

32. At school we ~~raise~~ the flag on Monday and _____.

(Tuesday, Friday, Wednesday)

33. Our clothes dry quickly when it is _____.

(rainy, cloudy, sunny)

34. We go to school to _____.

(eat, play, learn)

35. A bicycle has _____ wheels.

36. Our classteacher is called _____.

37. We put rubbish in a _____.

(paper, dustbin, bag)

38. _____ is a room where people sleep.

(Tableroom, Bedroom, Kitchen)

39. _____ gives us honey.

40. Milk is _____ in colour.

Name the four colours of our national flag.

41. _____.

42. _____.

43. _____.

44. _____.

45. The national anthem is a _____ song.

(dance, prayer, short)

46. We should say no to gifts from _____.

(parents, uncles, strangers)

47. We wear _____ clothes when it is cold.

(heavy, light)

Name the sources of light.

48.



49.



50.



SIGNAL EXAMS 2018
READING

NAME:	
SCHOOL:	

Read the following words.

- | | |
|--------------|--------------|
| 1. some | 9. biscuit |
| 2. play | 10. night |
| 3. plate | 11. friend |
| 4. good | 12. basket |
| 5. our | 13. roof |
| 6. pineapple | 14. baby |
| 7. clouds | 15. umbrella |
| 8. water | |

Read the story below.

The sun was hot. Birds were singing on the twigs. It was at noon. We walked slowly on the hot sun. We sat under the shade. After half an hour, we went home. We took our lunch and went to visit my grandmother. She was happy to see us.

SIGNAL EXAMS 2018
KUSOMA

JINA:	
SHULE:	

Soma maneno yafuatayo.

- | | |
|-------------|----------------|
| 1. kabati | 9. kelele |
| 2. mdogo | 10. mlenzi |
| 3. karatasi | 11. nyani |
| 4. ijicho | 12. maneno |
| 5. kuunda | 13. maumbo |
| 6. bakora | 14. mwanafunzi |
| 7. cheka | 15. shamba |
| 8. silabi | |

Soma sentensi hizi.

1. Mwavuli huu ni wake.
2. Kiatu hiki ni cha mwanafunzi.
3. Twendeni tukacheze.
4. Kwa nini unalia?
5. Kanga amekaangwa vizuri.