




**THE KENYA NATIONAL EXAMINATIONS BOARD**  
**COMPETENCY BASED CURRICULUM GRADE-2**  
**MATHEMATICS ACTIVITIES 2018**



Name:.....School:.....Date:.....

1. 6tens + 2 ones = \_\_\_\_\_

2. 78 = \_\_\_\_\_ tens + \_\_\_\_\_ ones.

3. 32, 33, \_\_\_\_\_, \_\_\_\_\_, \_\_\_\_\_

4. 90, \_\_\_\_\_, \_\_\_\_\_, \_\_\_\_\_, 94, \_\_\_\_\_, \_\_\_\_\_, \_\_\_\_\_, 98.

5.  $9 + 8 =$  \_\_\_\_\_

6.  $4 + 8 =$  \_\_\_\_\_

7.  $10 - 8 =$  \_\_\_\_\_

8.  $17 - 3 =$  \_\_\_\_\_

9.  $7 - \square = 5$

10.  $14 - \square = 12$

11. 
$$\begin{array}{r} 12 \\ - 9 \\ \hline \end{array}$$

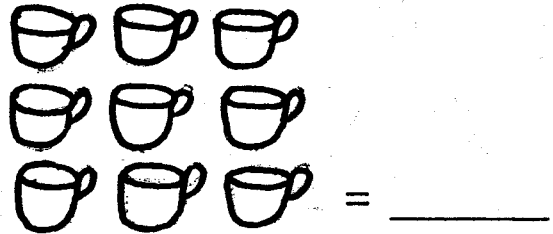
12. 
$$\begin{array}{r} 9 \\ + 1 \\ \hline 2 \end{array}$$

13. 
$$\begin{array}{r} 90 \\ - 30 \\ \hline \end{array}$$

14. 
$$\begin{array}{r} 46 \\ + 51 \\ \hline \end{array}$$

15. 
$$\begin{array}{cccccccc} \circ & \circ & \circ & \circ & \circ & \circ & \circ & \circ \\ \circ & \circ & \circ & \circ & \circ & \circ & \circ & \circ \\ \circ & \circ & \circ & \circ & \circ & \circ & \circ & \circ \\ \circ & \circ & \circ & \circ & \circ & \circ & \circ & \circ \\ \circ & \circ & \circ & \circ & \circ & \circ & \circ & \circ \\ \circ & \circ & \circ & \circ & \circ & \circ & \circ & \circ \\ \circ & \circ & \circ & \circ & \circ & \circ & \circ & \circ \\ \circ & \circ & \circ & \circ & \circ & \circ & \circ & \circ \end{array}$$
  
 \_\_\_\_\_ x \_\_\_\_\_ = 49

16. How many?



17.  $5 + 3 =$  \_\_\_\_\_

18.  $2 + 4 + 3 =$  \_\_\_\_\_

19.  $2 + 3 + 1 =$  \_\_\_\_\_

20.  $9 - 5 =$  \_\_\_\_\_

21. 
$$\begin{array}{r} 8 \\ + 4 \\ \hline 7 \end{array}$$

22.  $20 + \square = 50$

23.  $36 \div 6 =$  \_\_\_\_\_

24.  $8 \times 3 =$  \_\_\_\_\_

25.  $4 + 7 =$  \_\_\_\_\_

26.  $3 + 5 + 4 =$  \_\_\_\_\_

27. 608 = \_\_\_\_\_ hundreds  
 \_\_\_\_\_ tens \_\_\_\_\_ ones




Name these shapes

28.



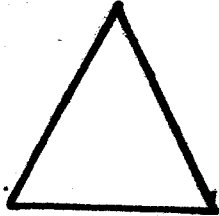
\_\_\_\_\_

29.



\_\_\_\_\_

30.



\_\_\_\_\_

31.



\_\_\_\_\_ tens \_\_\_\_\_ ones

32. Which holds more water?



33.  $\square + 4 = 9$

34.



This is a \_\_\_\_\_

35.  $9 + 2 + 6 =$  \_\_\_\_\_

Fill in the missing numbers

36. 5, \_\_\_7, 8, \_\_\_10


37. 2, 4, \_\_\_8, \_\_\_12

38. 13, \_\_\_\_, \_\_\_16, 17

39. 
$$\begin{array}{r} 13 \\ - 8 \\ \hline \end{array}$$

40. 
$$\begin{array}{r} 3 \\ + 6 \\ \hline \end{array}$$

41. This line is \_\_\_\_\_



(curved, straight, zigzag)

42. 
$$\begin{array}{r} 27 \\ + 12 \\ \hline \end{array}$$

43.  $2 + 1 + 2 =$

44. 
$$\begin{array}{r} 7 \\ + 2 \\ \hline 4 \end{array}$$

45. 
$$\begin{array}{r} 46 \\ - 13 \\ \hline \end{array}$$

46. 
$$\begin{array}{r} 21 \\ + 1 \\ \hline 16 \end{array}$$

47.  $15 - 5 = \square$

48.  $3 \times 0 = \square$

49. How many days make 2 weeks? = \_\_\_\_\_

50. The third month of the year is called \_\_\_\_\_



**THE KENYA NATIONAL EXAMINATIONS BOARD**  
**COMPETENCY BASED CURRICULUM GRADE-2**  
**ENGLISH ACTIVITIES-2018**



**BRONZE**

Name:.....School:.....Date:.....

**Dictation**

1. \_\_\_\_\_
2. \_\_\_\_\_
3. \_\_\_\_\_
4. \_\_\_\_\_
5. \_\_\_\_\_

**Add - ing**

eg. make + making

6. sit \_\_\_\_\_
7. eat \_\_\_\_\_
8. come \_\_\_\_\_
9. go \_\_\_\_\_
10. watch \_\_\_\_\_

**Write the opposite**

11. go \_\_\_\_\_
12. buy \_\_\_\_\_
13. start \_\_\_\_\_
14. short \_\_\_\_\_
15. clean \_\_\_\_\_

**Name the pictures**

- |       |       |       |       |
|-------|-------|-------|-------|
| 16.   |       | 17.   |       |
| _____ | _____ | _____ | _____ |
| 18.   |       | 19.   |       |
| _____ | _____ | _____ | _____ |
| 20.   |       |       |       |
| _____ | _____ |       |       |

**Write in the past tense**

- |           | Today | Yesterday |
|-----------|-------|-----------|
| 21. Start | _____ | _____     |
| 22. Open  | _____ | _____     |
| 23. Read  | _____ | _____     |
| 24. Drive | _____ | _____     |
| 25. Look  | _____ | _____     |

**Write in plurals**

26. Thief \_\_\_\_\_

27. Toy \_\_\_\_\_

28. Lady \_\_\_\_\_

29. Apple \_\_\_\_\_

30. Dress \_\_\_\_\_

**Write well**

31. irgl \_\_\_\_\_

32. ssder \_\_\_\_\_

33. ongera \_\_\_\_\_

34. perpa \_\_\_\_\_

35. werlof \_\_\_\_\_

**Write in small letters**

36. MAN \_\_\_\_\_

37. SPEAK \_\_\_\_\_

38. MANGO \_\_\_\_\_

39. BEHAVIOUR \_\_\_\_\_

40. DIRTY \_\_\_\_\_

**Use 'is' or 'are'**

41. \_\_\_\_\_ this a girl or boy?

42. The women \_\_\_\_\_ singing.

43. This \_\_\_\_\_ a cow.

44. The girls \_\_\_\_\_ eating.

**Make the words**

45. s \_\_\_\_\_

46. w \_\_\_\_\_

**Complete the sentences**

47. A \_\_\_\_\_ teaches pupils.

48. A \_\_\_\_\_ drives cars.

49. A \_\_\_\_\_ cuts our hair.

50. A \_\_\_\_\_ flies an  
aeroplane.



**THE KENYA NATIONAL EXAMINATIONS BOARD**  
**COMPETENCY BASED CURRICULUM GRADE-2**  
**NUTRITIONAL & HYGIENE ACTIVITIES**



**BRONZE**

**2**

Name:.....School:.....Date:.....

1. \_\_\_\_\_ causes diseases.  
**(food, germs, diseases)**

2. We should \_\_\_\_\_ food  
before cooking.  
**(handle, wash)**

3. We should not share \_\_\_\_\_  
**(food, personal items)**

4. We have \_\_\_\_\_ senses.  
**(3, 1, 5)**

5. This is a \_\_\_\_\_



**(earthworm, millipede)**

6. A true insect has \_\_\_\_\_  
body parts. **(2, 3, 5)**

7. We brush our teeth using

\_\_\_\_\_  
**(toothbrush, tooth pick)**

8. This is a \_\_\_\_\_ leaf.



**(bean, maize)**


9. The sun rises in the \_\_\_\_\_  
and sets in the \_\_\_\_\_

10. A bee is \_\_\_\_\_ animal  
kept at home.  
**(harmful, useful)**

11. We make drinking water  
safe by \_\_\_\_\_.  
**(heating, boiling)**

12. A mango has \_\_\_\_\_  
seeds. **(one, two)**

13. The item below is used to



**(wash classroom, brush  
teeth)**

14. We wear socks on \_\_\_\_\_  
**(hands, feet, legs)**

**Use symbols to draw the  
following weather conditions**


15. Rainy      16. Cloudy

**Name two domestic animals**

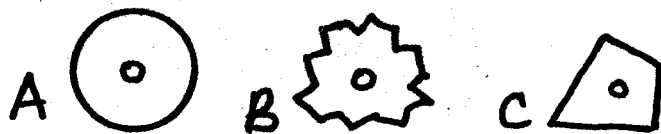
17. \_\_\_\_\_

18. \_\_\_\_\_

**Name the parts of a plant 19 - 22**



19. \_\_\_\_\_  
 20. \_\_\_\_\_  
 21. \_\_\_\_\_  
 22. \_\_\_\_\_  
 23. Fish lives in \_\_\_\_\_  
 (home, forest, water)  
 24. Leaves are \_\_\_\_\_ in  
 colour.  
 (green, yellow, white)  
 25. We eat \_\_\_\_\_ of  
 sukumawiki.  
 (roots, flowers, leaves)  
 26. How many legs has a  
 snake? (2, 0, 3)  
 27. Dirty toes get \_\_\_\_\_  
 (lice, fleas, jiggers)  
 28. We should keep our body  
 \_\_\_\_\_ (dirty, clean)  
 29. My teeth are colour \_\_\_\_\_  
 (blue, white, yellow)  
 30. We should keep finger  
 nails \_\_\_\_\_ and clean.  
 (dirty, tall, short)  
 31. Which wheel will rotate  
 well?




32. Animals kept at home are  
 called \_\_\_\_\_  
 (bush, wild, domestic)  
 33. Heavy rains cause \_\_\_\_\_  
 (floods, drought, desert)  
 34. These are \_\_\_\_\_



(stems, seeds)

35. Food is tasted using \_\_\_\_\_  
 (mouth, tongue, teeth)  
 36. We eat the seeds of \_\_\_\_\_  
 (carrots, beans, pawpaw)  
 37. We have \_\_\_\_\_ senses.  
 (4, 6, 5)

Name the following body parts



38. \_\_\_\_\_  
 39. \_\_\_\_\_  
 40. \_\_\_\_\_  
 41. \_\_\_\_\_  
 42. \_\_\_\_\_  
 43. \_\_\_\_\_  
 44. The body of birds is  
 covered with \_\_\_\_\_  
 (hair, feathers, scales)  
 45. During cold weather we  
 wear \_\_\_\_\_ (light, few, heavy)

Draw

46. flower      47. snake

48. A cow has \_\_\_\_\_ horns.  
 (3, many, 2)  
 49. We should wash our  
 hands \_\_\_\_\_ visiting the  
 toilets. (after, when, before)  
 50. It's bad to share a \_\_\_\_\_  
 (food, book, handkerchief)



**THE KENYA NATIONAL EXAMINATIONS BOARD**  
**COMPETENCY BASED CURRICULUM GRADE 2**

**KISWAHILI ACTIVITIES -2018**



JINA:..... SJULE:..... TAREHE:.....

**Imla**

1.

\_\_\_\_\_

2.

\_\_\_\_\_

3.

\_\_\_\_\_

4.

\_\_\_\_\_

5.

\_\_\_\_\_

**Jaza pengo**

6. m \_\_\_ h \_\_\_ ndi

7. m \_\_\_ f \_\_\_ ta

8. h \_\_\_ d \_\_\_ ri

9. w \_\_\_ d \_\_\_ d \_\_\_

10. j \_\_\_ h \_\_\_ z \_\_\_

**Andika kinyume**

11. Mzuri \_\_\_\_\_

12. Mriono \_\_\_\_\_

13. Shangazi \_\_\_\_\_

14. Majibu \_\_\_\_\_

15. Mfupi \_\_\_\_\_

**Panga herufi hizi upate jina sahihi**

16. rfasia \_\_\_\_\_

17. mjia \_\_\_\_\_

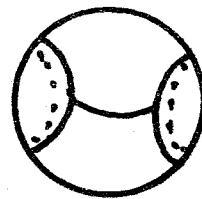
18. embe \_\_\_\_\_

19. nzkau \_\_\_\_\_


20. limumwa \_\_\_\_\_

**Andika jina la picha**


21.




22.




\_\_\_\_\_




23.



24.



25.



Umoja

Wingi

26. mlima \_\_\_\_\_

27. mtoto \_\_\_\_\_

28. Kiatu \_\_\_\_\_

29. Jani \_\_\_\_\_

30. Mkebe \_\_\_\_\_

Andika kwa herufi kubwa

31. vifaranga \_\_\_\_\_

32. trekta \_\_\_\_\_

33. blausi \_\_\_\_\_

34. mswaki \_\_\_\_\_

35. kioo \_\_\_\_\_

Jibu salamu zifuatazo

36. Shikamoo \_\_\_\_\_

37. Hodi \_\_\_\_\_

38. Hujambo \_\_\_\_\_

Andika maneno yenye mianzo ifuatayo

39. nd \_\_\_\_\_

40. mb \_\_\_\_\_

41. ny \_\_\_\_\_

42. ch \_\_\_\_\_

Kamilisha methali au vitendawili

43. Damu ni nzito kuliko \_\_\_\_\_

44. Askari mlangoni \_\_\_\_\_

45. Ananifuata kila mahali \_\_\_\_\_

46. Fuata nyuki ule \_\_\_\_\_

47. Adui \_\_\_\_\_

Chagua jibu sahihi

48. Kijiti \_\_\_\_\_  
(refu, mrefu, kirefu)

49. Nina kiatu \_\_\_\_\_  
(mzuri, kizuri, zuri)

50. Nguo \_\_\_\_\_  
(changu, langu, yangu)





**THE KENYA NATIONAL EXAMINATIONS BOARD**  
**COMPETENCY BASED CURRICULUM GRADE 2**  
**ENVIRONMENTAL & RELIGIOUS ACTIVITIES**



**BRONZE**

**2**

Name:.....School:.....Date:.....

1. We go to \_\_\_\_\_ to learn.  
**(hospital, school)**

2. The head of a school is called \_\_\_\_\_  
**(doctor, headteacher)**

3. We should keep our compound \_\_\_\_\_  
**(clean, dirty, untidy)**

4. This is a \_\_\_\_\_



**(bridge, mountain)**

5. Many trees make a \_\_\_\_\_





**(mountain, forest)**

6. Our flag has \_\_\_\_\_ colours.  
**(4, 2, 3)**

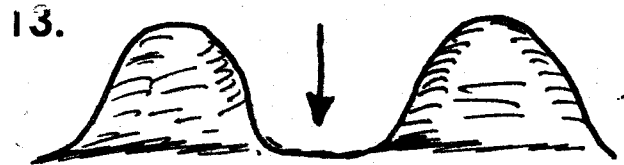
7. Bees gives us \_\_\_\_\_  
**(honey, sugar)**

8. \_\_\_\_\_ are animals kept at home. **(domestic, wild)**

**The weather is**



12. Basic needs are food, shelter and \_\_\_\_\_  
**(television, car, clothes)**



A place between two hills is called a \_\_\_\_\_  
**(river, valley, slope)**

14. At school children play in the \_\_\_\_\_ **(classroom, assembly, playground)**

15. Sitting room is also called \_\_\_\_\_ **(kitchen, bathroom, resting room)**

16. The mother of your mother is \_\_\_\_\_ **(grandparent, aunt, grandmother)**

17. Girls wear \_\_\_\_\_ **(short, dress, vest)**


18. Farmers plant their crops during \_\_\_\_\_ season. **(windy, rainy, dry)**

19. A school is headed by a \_\_\_\_\_ **(teacher, headteacher, prefect)**

20. Someone you don't know is called a \_\_\_\_\_ **(cousin, neighbour, stranger)**

21. School \_\_\_\_\_ make us look beautiful. **(clothes, uniform, books)**

22. During hot weather people \_\_\_\_\_ **(sweat, sleep, rest)**



23. This is a \_\_\_\_\_



(valley, hill, dam)

24. Father, mother and \_\_\_\_\_ makes up a nuclear family.

(friends, children, aunts)

25. We should \_\_\_\_\_ our teachers in school.  
(kill, respect, beat)

### C.R.E

26. Who was the first man to be created \_\_\_\_\_  
(Abraham, Moses, Adam)


27. Abraham and Sarah were the parent of \_\_\_\_\_  
(Samuel, Jesus, Isaac)

28. \_\_\_\_\_ killed his brother Abel. (Judas, Cain, Peter)

29. God gave me \_\_\_\_\_ to see. (nose, eyes, ears)

30. We should \_\_\_\_\_ our parents. (kill, fight, obey)

31. Draw a church



32. Jesus was born in \_\_\_\_\_  
(Bethlehem, Nazareth, Jerusalem)

33. Jesus was baptised in river \_\_\_\_\_  
(Tana, Jordan, Athi)

34. Jesus is the son of \_\_\_\_\_  
(man, God, Joseph)

35. Jesus had \_\_\_\_\_ disciples.  
(11, 12, 13)

36. This is a \_\_\_\_\_



(dictionary, maths book, bible)

37. Jesus loves little \_\_\_\_\_  
(girls, people, children)

38. We celebrate the birthday of Jesus on \_\_\_\_\_ December.  
(20th, 25th, 12th)

39. Jesus was crucified at a place called \_\_\_\_\_  
(Golgotha, Jerusalem)

40. Jesus died on the \_\_\_\_\_  
(tree, river, cross)

41. I walk with my \_\_\_\_\_  
(shoes, feet)

42. Tell God \_\_\_\_\_ for food.  
(sorry, thank you)

43. God gave me \_\_\_\_\_ to see.



(ears, eyes)

44. When we get gifts we are \_\_\_\_\_  
(sad, happy)

45. The bible is the \_\_\_\_\_ God.  
(house, word)


46. We worship God by \_\_\_\_\_  
(laughing, praying)

47. At school we should obey our \_\_\_\_\_  
(parents, teachers)

48. We should not \_\_\_\_\_ to strangers.  
(talk, run away)

49. We should \_\_\_\_\_ our parents  
(disobey, obey)

50. \_\_\_\_\_ created us.  
(Satan, Abraham, God)



THE KENYA NATIONAL EXAMINATIONS BOARD  
COMPETENCY BASED CURRICULUM GRADE 2

**LITERACY ACTIVITIES-2018**

BRONZE

2

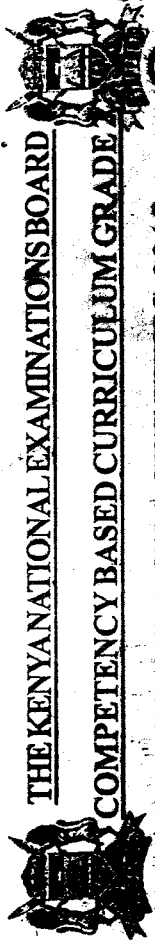
Name: ..... School: ..... Date: .....

**Read these words**

1. time
2. star
3. clap
4. chest
5. hour
6. assembly
7. across
8. middle
9. dirty
10. black
11. orange
12. camel
13. tailor
14. yellow
15. calendar
16. elephant
17. aeroplane
18. sunrise
19. compound
20. shopkeeper

**Read these sentences**

21. Please open and close the red box.
22. My brother is going to the market now.
23. All the tables and chairs are dirty.
24. All the cows are grazing in the field.
25. Who was crying yesterday.



THE KENYA NATIONAL EXAMINATIONS BOARD  
COMPETENCY BASED CURRICULUM GRADE 2

**LITERACY ACTIVITIES-2018**

BRONZE

2

Name: ..... Shule: ..... Tarehe: .....

**Soma maneno**

1. tai
2. pesa
3. rula
4. mwiko
5. ugali
6. mtoto
7. milinzi
8. pasi
9. suruali
10. rinda
11. ngamia
12. mboğa
13. kondoo
14. bendera
15. punda
16. samaki
17. mgongo
18. peremende
19. mbalimbali
20. duara dufu

**Soma Sentensi hizi**

21. Dada yangu ataleta maembe jioni.
22. Wanafunzi wote wanacheza uwanjani.
23. Mtoto wa nyoka ni nyoka.
24. Ni muhimu tuwaheshimu watoto wetu.
25. Je, utaenda sokoni kesho.

