




Mathematics Activities


Grade 2



NAME SCHOOL DATE

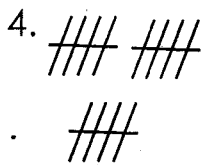
Count and write.




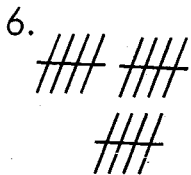




Count the tallies.







Circle the lesser number.

7. 92 90
 8. 191 192
 9. 43 69
 10. 22 24
 11. 10 20
 12. 130 103

Write in words.

13. 40 _____
 14. 100 _____
 15. 90 _____
 16. 10 _____
 17. 20 _____
 18. 8 _____
 19. 17 _____

Write the days of the week.

20. _____
 21. _____
 22. _____
 23. _____
 24. _____
 25. _____

Fill in the missing numbers.

26. 0, 5, 10, 15, 20, 25, 30, __, __, __

27. 0, 2, 4, 6, 8, 10, 12, 14, __, __, __

28. 0, 4, 8, 12, 16, 20, 24, __, __, __

29. 0, 10, 20, 30, 40, 50, 60, __, __, __

30. 20, 40, 60, 80, __, __, __

Add.

31. $40 + 42 + 8 =$

32. $52 + 32 + 2 =$

33. $42 + 52 + 10 =$

34. $62 + 61 + 30 + =$

35. $30 + 90 + 10 =$

36. $100 + 11 + 1 =$

37. $100 + 1 + 101 =$

Subtract.

38. $52 - 20 =$

39. $30 - 29 =$

40. $28 - 20 =$


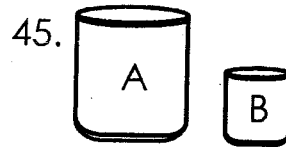
41. $100 - 80 =$

42. $70 - 20 =$

43. $50 - 42 =$

44. $69 - 9 =$


Which one is bigger?



47. Tuta has 180 goats, while Tito has 130 goats. How many goats do they have altogether?

48. John has 80 sweets while Steve has 30 sweets. How many sweets do they have altogether?


Who is older.



Susan
10 years



Joe
8 years



Father
28 years



Son
16 years







Hygiene & Nutrition activities

Grade 2

NAME SCHOOL DATE

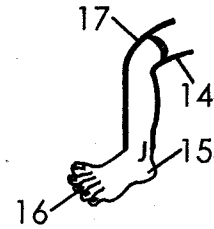
Match the organs with their function.

- | | | |
|----|---|----------|
| 1. |  | seeing |
| 2. |  | tasting |
| 3. |  | hearing |
| 4. |  | smelling |

5. The human body is covered with _____
(skin, scales, feathers)
6. Rotten things smell _____
(good, bad, sweet)
7. Hair is kept tidy with brush and _____
(comb, brush, stick)
8. We wear socks to keep our feet clean and _____
(warm, hot, dry)
9. We should flush the _____ after use.
(bathroom, toilet, latrine)
10. Plants grow from _____
(roots, leaves, flowers)
11. We grow crops for _____
(food, keeping, fuel)





12. Dirty feet keep _____ and dirty hair keep. **(lice, jiggers)**
13. We should wear _____ clothes when it is hot.
(light, good, heavy)


Name the parts of the leg.



14. _____
 15. _____
 16. _____
 17. _____
- (knee, thigh, toes ankle)**

Name the pictures.

- | | |
|--|---|
| 18.  | 19.  |
| 20.  | 21.  |
| 22. _____ | 23. _____ |



24.



25.



(hat, orange, trouser, skirt, towel, shoes, socks, shirt)

Write what it provides to us.

- 26. dog _____
- 27. bee _____
- 28. goat _____
- 29. sheep _____
- 30. cow _____
- 31. camel _____

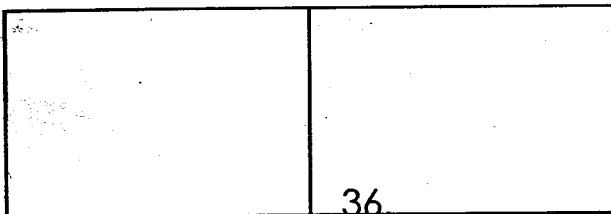
(milk, mutton, wool, guarding home, carrying things honey)

32. Animals kept at home are called _____ animals. (domestic, tamed)

Draw your utensils.

33.

34.



35.

36.

37. Clothes dry well when it is _____ (hot, rainy, calm)

38. _____ has no seeds. (pawpaw, mango, sugarcane)

39. We boil water to kill _____ (germs, colour, dirty)

40. People with eye problems wear _____ (bandage, glasses, cloths)

41. A fish swims using the _____ (gills, wings, fin)

42. We have _____ toes.

43. Clean water should be _____ in colour. (colourless, white, blue)

44. When sick we visit the _____ (teachers, doctor)

45. Meat from pig is called _____

46. Meat from cows is called _____

47. Meat from goats is called _____ (beef, pork, mutton)

Name three fruits we eat.

48. _____

49. _____

50. _____



Tusome Early Literacy Programme

Grade 2

Muhula wa 1

Jaribio la Kiswahili

Jina: _____

Shule: _____ Darasa: _____

Sehemu ya A: Imla.
Andika maneno atakayosema mwalimu.

1. _____
2. _____
3. _____
4. _____
5. _____
6. _____
7. _____
8. _____
9. _____
10. _____

Sehemu ya B: Silabi
Andika maneno yakianza kwa silabi hizi.

11. ha - _____
12. m - _____
13. za - _____
14. ba - _____

15. ko - _____
16. ti - _____
17. va - _____
18. tu - _____

Sehemu ya C: Sarufi
Andika wingi wa maneno haya.

19. ameniokoa - _____
20. ameniona - _____
21. amezama - _____
22. ameiba - _____
23. ameimba - _____
24. amesafiri - _____
25. ameandika - _____

Sehemu ya D: Msamiati.

Unganisha hali ya hewa na picha.



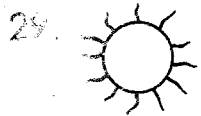
hali ya upepo



hali ya kiangazi



hali ya mvua



hali ya mawingu



hali tulivu


Sehemu ya E: Sarufi.

Kamilisha sentensi ukitumia 'yule' au 'wale'

31. Msichana _____ ni mzuri.
32. Twiga _____ ni mrefu.
33. Mchezaji _____ ni hodari.
34. Mnyama _____ ni mkali.
35. Wakulima _____ ni werevu.
36. Mchungaji _____ ni mjanja.

Sehemu ya F: Msamiati

Andika sehemu za mnyama huyu.



37. _____

38. _____

39. _____

40. _____

41. _____

(mkia, mguu, mdomo, sikio, upembe)

Sehemu ya G: Msamiati

Andika majina ya vifaa hivi.

42. 

43. 

44. 

45. 

46. 

47. 

(shoka, panga, kifyekeo, nyundo, firimbi, jembe)

Sehemu ya H: Ufahamu

Soma hadithi kisha ujibu maswali.

Kiilu anaishi Mombasa. Nyumba yake ni ya ghorofa. Nje ya nyumba kuna maua ya kupendeza. Siku moja paa la nyumba yake liliharibiwa na upepo mkali. Kiilu alikasirika sana.

48. Kiilu anaishi wapi? _____

49. Nje ya nyumba ya kiilu kuna nini? _____

50. Kwa nini Kiilu alikasirika sana? _____



ENVIRONMENTAL/RELIGIOUS ACTIVITIES

Grade 2



NAME SCHOOL DATE

Name the following physical features.

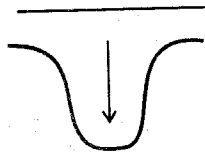
1.



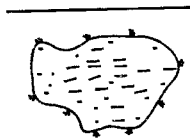
2.



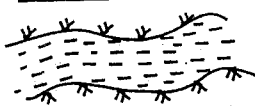
3.



4.



5.



6.

Every home must have a _____
(toilet, kitchen, school)

7.

Rain comes from the _____
(clouds, sky, air)

8.

The head of a family is _____
(father, mother, aunt)

9.

Cows eat _____
(glass, grass)

Name three wild animals.

10. _____

11. _____

12. _____

13. People who live near us are our _____
(thieves, strangers, neighbours)

14.

We should keep rubbish in the _____
(dustbin, cupboard, drum)

15.

People who live near a lake are _____
(thieves, farmers, fishermen)

16.

We should keep our environment _____
(clean, rubbish, dirty)

Name three domestic animals.


17. _____

18. _____

19. _____

The weather is

20.



21.




22.



Name these tools.

23.



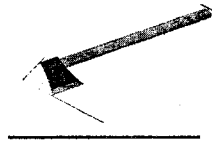
24.



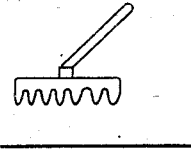
25.



26.



27.



(rake, axe, panga, hoe, slasher)

28. Many trees growing together form a _____

29. We should keep our toilets and latrines _____ (clean, dirty)

30. The roof of this house is made of _____




(grass, iron, sheets)


C. R. E

Name these pictures.


31.



32.



33.



C.R.E

Name three books of the Bible.

34. _____

35. _____

36. _____

37. Man was created on the _____ day. (6th, 7th)

38. Jacob had _____ sons.

39. Jesus had _____ disciples.

40. Who died for our sins? _____ (Adam, Jesus)

41. Jesus lived in the town of _____ (Bethlehem, Jerusalem)

42. The wife of Abraham was called _____ (Mary, Sarah, Ruth)

43. The first book in the Bible is _____ (Genesis, Leviticus, Psalms)

44. _____ killed Goliath. (Jonathan, Saul, David)

45. The earthly father of Jesus was called _____ (John, Joseph, Adam)

46. Jesus is a _____ from God to us. (gift, curse)

47. _____ raised Jairus daughter who was dead. (Jesus, Moses, Peter)

48. We should be _____ to other people. (selfish, kind, bad)

49. Elisha was a _____ (prophet, priest, pastor)

50. The father of David was called _____ (Samuel, Jesse, Solomon)

Tusome Early Literacy Programme

Grade 2

Term 1	End term
---------------	-----------------

English Test

Name: _____

School: _____ Class: _____

Part A: Dictation.

Write the words as the teacher says them.

1. _____
2. _____
3. _____
4. _____
5. _____
6. _____
7. _____
8. _____
9. _____
10. _____

Part B: Write a sentence using the following words.

11. slow _____
12. wash _____
13. eat _____
14. baby _____

15. know _____
16. clean _____
17. dirty _____

PART C: Use the letters to make the names of the parts of the body.

e	g	s	o
h	y	t	k
a	n	d	l
t	e	r	f

18. _____
19. _____
20. _____
21. _____
22. _____

Part D: Write the sentences correctly.

- 23. dirty Tom very is.

- 24. Mike wash face his wants to

- 25. clay with plays she

- 26. my are teeth hand dirty and





- 27. is he a boy.

- 28. wash wants Jane to the cup.

Part E: Copy the words two times.

- 29. car _____
- 30. far _____
- 31. play _____
- 32. tar _____
- 33. school _____
- 34. bus _____
- 35. pig _____

Part F: Name the pictures below.

- 36.  _____
- 37.  _____
- 38.  _____
- 39.  _____

40.



41.



Part G: Fill in the blank spaces using the following words.

Wings Cat Song stick Shell

- 42. There is a long _____ under the table.
- 43. Mat sings a funny _____
- 44. The story is about a fat _____
- 45. A _____ is round on the sea shore.
- 46. A hen has two _____

Part H: Write four sentences on the picture below.



- 47. _____
- 48. _____
- 49. _____
- 50. _____



SOLUTION TRIAL EXAMS 2018

Grade 2

NAME SCHOOL DATE.....

READING

Read these words:

- | | | | |
|--------------|--------------|--------------|-------------|
| 1. leaves | 6. slim | 11. fur | 16. niece |
| 2. come | 7. shaggy | 12. called | 17. trough |
| 3. afternoon | 8. mountain | 13. domestic | 18. worship |
| 4. lunch | 9. evening | 14. tomorrow | 19. laughed |
| 5. brown | 10. tomatoes | 15. bundles | 20. ankle |

Read these sentences:

21. My mother travelled to Uganda.
22. These are my clothes in the bag.
23. Peter saw a big snake and screamed.
24. When I fell down I broke my wrist.
25. All the class two pupils were making noise in class.

KUSOMA

Soma maneno haya:

- | | | | |
|--------------|--------------|--------------|-------------|
| 1. shikilia | 6. chandarua | 11. chakula | 16. vyombo |
| 2. tafadhali | 7. zizi | 12. kitoweo | 17. nyembe |
| 3. samahani | 8. ng'ombe | 13. pilipili | 18. daktari |
| 4. kwekwe | 9. ng'ambo | 14. mzazi | 19. dawati |
| 5. samli | 10. shauku | 15. zambarau | 20. vyema |

Soma sentensi hizi:

21. Mtoto huyu aliadhibiwa na mzazi wake.
22. Je! unaitwa nani?
23. Mgeni huyu ni wetu.
24. Wuui! wuui! mama alipiga kelele kwa vishindo.
25. Shuleni mwetu kila mwanafunzi lazima atie bidii.