

HIGH FLYER SERIES EVALUATION TEST

STANDARD TWO – YEAR 2017

MATHEMATICS



DATE:

NAME: SCHOOL:

Fill in the missing numbers

1.

13		15	
	18		20

2. $81 - \quad = 79, 78$

3. $5, \quad, 15, 20, \quad, 30$

Fill in the missing words or symbols

4. 23

5. Thirty nine

6. Eighty eight

7. 200

8. 9 ten 3 ones =

9. 309 = hundreds tens
 ones

10. $\begin{array}{r} 31 \\ - 8 \\ \hline \end{array}$

11. $\begin{array}{r} 87 \\ - 34 \\ \hline \end{array}$

12. $\begin{array}{r} 835 \\ - 224 \\ \hline \end{array}$

13. $8 + 7 + 6 =$

14. $17 - \quad = 9$

15. $\quad + 13 = 23$

16. $80 - \quad = 30$

17. $77 + 18 =$

18. $89 - 68 =$

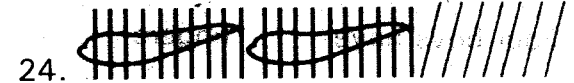
19. $6 + 6 + 6 + 6 = \quad \times$

20. $6 \times 10 =$

21. $3 \times \quad = 12$

22. Share 15 bananas among three pupils.

23. $24 \div 8 =$



25. 0 hundreds 5 tens 8 ones =

26.

Sh	cts
418	35
+ 81	40

27.

Sh	cts
69	75
- 8	60

28. The tenth month of the year is


29. What is the shape of a bicycle wheel?

30. Which one holds more water, basin or jug?



31. What is 6×3 ?

32. What is the time?



It is _____ o'clock


33. 20 shillings = _____ five shillings coin.

34. One day = _____ hours.

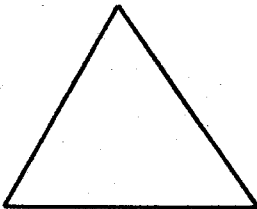
35. Four boys have _____ fingers.

36. Five cows have _____ legs.

Name the shapes



37.



38.

39. Divide 20 oranges to 5 children


40. 2 years = _____ months

41. If today is Thursdays, yesterday was _____

42. 9 hundreds = _____

43. How much is 3 twenty shillings coins? _____

Price list



Sh. 50

Sh. 200

Sh. 100

44. How much is a cup and a kettle? _____

45. Musa had sh. 500. What balance did he get after buying a kettle and a bucket? _____

46. Njeri bought a cup, kettle and a bucket. How much did she pay? _____

$$\begin{array}{r} 555 \\ - 240 \\ \hline \end{array}$$

$$\begin{array}{r} 385 \\ + 474 \\ \hline \end{array}$$

0	0	0	0
0	0	0	0
0	0	0	0
0	0	0	0
0	0	0	0

$$49. 5 \times \underline{\hspace{2cm}} = \underline{\hspace{2cm}}$$

50. Mutua had 500 eggs. He sold 200 eggs. How many eggs was he left with? _____




HIGH FLYER SERIES EVALUATION TEST
STANDARD TWO – YEAR 2017
SOCIAL STUDIES

DATE:

NAME: SCHOOL:

1. A location is divided into _____
(villages, sub-locations, divisions)
2. A clean environment keeps away _____
(strangers, thieves, diseases)
3. We enter the school through the _____
(roof, fence, gate)
4. _____ gives us rain.
(Trees, Rivers, Crops)
5. We should _____ people with HIV/AIDS. (hate, kill, love)
6. Cows kept for meat are known as _____ cattle.
(pork, beef, dairy)
7. We get honey from _____.
(spiders, mosquitoes, bees)
8. We can cut long grass to keep away _____.
(dogs, cats, snakes)
9. Zebras, giraffes and monkeys are examples of _____ animals. (wild, domestic, forest)

10. A _____ is an animal that can carry goods. (cow, goat, camel)
11. A child who has done wrong things in school should be _____
(sent away, taken to jail, talked to)
12. Children _____ playing.
(enjoy, dislike, refuse)
13. A _____ types our tests.
(teacher, typist, watchman)
14. Dogs can _____ and hurt us.
(chase, bite, smell)
15. The first help given to an injured person is called _____.
(AIDS, First Aid, treatment)
16. When we see a tap running in school, we should turn it _____.
(off, on, up)



17.

This road sign shows _____ ahead.

(hills, river, bumps)

18. Is we throw stones at windows, we can _____ them.

(break, kill, harden)

19. To write well, pupils should place their books on the _____.

(floor, chair, desks)

20. Dustbins are also called _____ bins. (kitchen, litter, home)

21. We need _____ in school. (radios, television, toilets)

22. In the national anthem, we sing " _____ ndugu zetu'.

(Laleni, Twendeni, Amkeni)

23. We should use _____ language to one another.

(harsh, polite, rude)

24. We run during _____ (exam, opening, sports)

25. Clothes dry well when the weather is _____.

(windy, cloudy, calm)



26. We raise this in _____.

(church, school, home)

Study the weather chart below

Monday	
Tuesday	
Wednesday	
Thursday	
Friday	

27. On which day did pupils carry umbrellas to school?

(Friday, Wednesday, Thursday)

28. The best day for winnowing was _____.


(Friday, Monday, Tuesday)

29. On Thursday the pupil wore _____ clothes.

(heavy, light, many)

30. The name of our country is _____.

(Nairobi, Mombasa, Kenya)



HIGH FLYER SERIES EVALUATION TEST
STANDARD TWO – YEAR 2017
ENGLISH: LANGUAGE

DATE:

NAME: **SCHOOL:**

Dictation

1. _____
2. _____
3. _____
4. _____
5. _____

Write in figures or words

6. Seventy nine _____
7. 127 _____
8. Three hundred and three _____
9. 510 _____
10. Two hundred and sixty six _____

Write the past tense of the given words

11. Mr Marangi _____ the wall.
(paint)
12. Hazard _____ the ball. (kick)
13. She _____ the picture of
our teacher. (draw)

14. He _____ at the hospital. (die)

15. The pilot _____ the
plane to America. (fly)

Write the plurals of the words

16. Knife _____
17. Brush _____
18. Ox _____
19. Mouse _____
20. Lady _____

Write the opposites

21. Top _____
22. Light _____
23. Friend _____
24. Deep _____
25. Sad
(heavy, enemy, happy, shallow,
bottom)

Choose the correct word

26. Yesterday she _____ a picture.
(draw, drew, drawing)


27. They prepared the food _____
(themselves, myself, ourself)

28. She wore her _____ dress.
(better, best, good)

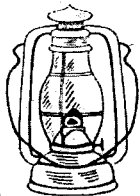
29. He _____ was punished for
coming late. (two, to, too)

30. David and Jane _____ late
for class. (was, were, is)

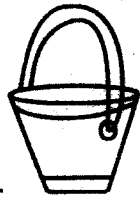
Name the pictures




31. _____



32. _____



33. _____



34. _____



35. _____

Use 'is', 'are', 'am'

36. I _____ the best writer in my class.

37. Kenyans _____ the best runners
in the world.

38. Mellisa _____ going to recite
the poem.

39. The best cups _____ from China.

40. I _____ going to drive the big car.

Use 'this' or 'these'

41. _____ is the coldest month
of the year.

42. We are going to wash _____
clothes.

43. You should clean _____
room now.

44. We cannot carry all _____
room now.

45. There is only one room which is
bigger than _____.

Use 'mine', 'yours', 'ours'

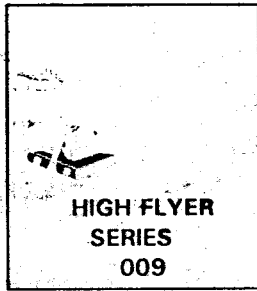
46. I bought this book. It is _____.

47. Everything belongs to us. It is all
_____.

48. This is your milk. It is _____.

49. My medicine is _____ alone.

50. These uniforms are for our team.
They are _____.



HIGH FLYER SERIES EVALUATION TEST STANDARD TWO – YEAR 2017 SCIENCE

DATE:

NAME: SCHOOL:

1. _____ is not part of the sense organs. (Eye, Tongue, Mouth)

2. Sight is ability to (hear, see, taste)

Match the following with their colour.

3. Unripe Orange Orange

4. Carrot Red

5. Blood Green

6. Diseases are caused by (houseflies, germs, water)

7. Hygiene means being (dirty, clean, hungry)

8. _____ is not a personal item. (Towel, Cup, Socks)

9. A hair brush is used for (sweeping, combing, washing)

10. Every home must have a (kitchen, latrine, flowerbed)

11. Urinals are used by (girls, women, boys)

12. _____ happens when a seed grows into a new plant. (Harvesting, Germination)

13. _____ Fruit has one seed. (Tomato, Pawpaw, Mango)

14. Most plants are colour (yellow, green, blue)

15.



This is a carrot. We eat its (leaves, root, stem)

16. _____ is not a way of caring for plants. (Harvesting, Weeding, Watering)

17.



Which plant has the leaf shown? (maize, banana, arrowroot)

18. _____ is not good for growing plants. (Darkness, Sunlight, Water)

19. Condition of air in a place is called (climate, weather, sunlight)

20. Moving air is called (clouds, dust, wind)

Draw these weather conditions.

21. Sunny

22. Cloudy

23. Calm

24. Rainy

25. On a hot day we wear
(sweaters, vests, jackets)

26. Animals kept at home are called
animals.
(tamed, wild, domestic)

27. _____ is not a useful animal.
(Cat, Dog, Rat)

28. The following are small animals
except. (elephant, snake, lizard)

29. Small animals that suck blood from a
cow are called
(ticks, houseflies, rats)

30. Birds kept at home give us meat and
(milk, eggs, skins)

31. Muddy water can be made clean by
(boiling, filtering, warming)

32. _____ make water dirty.
(Soil, Air, Clouds)

Give the names of these small animals.

33.



34.



35.



(rat, snake, tick, flea)

36.



37. Before eating we should wash our
(legs, mouth, hands)

38. Before eating a ripe mango we
should _____ it.
(cook, wash, cut)

39. _____ does not give us light.
(Clouds, Sun, Lamp)

40. When light hit a ball a _____ is
formed. (shadow, sound, darkness)

41. Our shadows are long
(at night, at noon, in the morning)

42. When we pluck a _____ sound is
produced. (drum, whistle, guitar)

43. Moving air flies a
(train, kite, cart)

44. A good use of wind is
(blowing houses, winnowing)

45. Wheels work like
(rollers, machines)


46. We can make rollers using
(stones, maize cobs, wires)

47. The best soil for modelling is
(loam, clay, sand)

48. Which letter is easy to model?
(B, I, K)

49. Which animal does not have horns?
(goat, camel, cow)

50. A fish lives in
(soil, water, house)



HIGH FLYER SERIES EVALUATION TEST
DARASA LA PILI – MWAKA 2017
KUSOMA

TAREHE:

JINA: SHULE:

Soma maneno haya:-

- | | |
|------------------|------------|
| 1. Marahaba | 6. Vyombo |
| 2. Mraba | 7. Bendera |
| 3. Vilivyookotwa | 8. Nyuzi |
| 4. Mvumilivu | 9. Miezi |
| 5. Dhahabu | 10. Ukucha |

Soma sentensi hizi:-

11. Mama na baba wanazungumza sebuleni.
12. Mwalimu na wanafunzi wanacheza uwanjani.
13. Watu wote wanaimba na kupiga makofi.
14. Vyakula vyote vimepikwa vizuri.
15. Miti ya matunda ni ya aina nyinyi.

Soma kifungu hiki

Yule mtu aliyekuwa amejifunika kichwa aliteremka haraka haraka. Alipokaribia chini akaanguka kwa kishindo. Kwa bahati mbaya akavunjika mkono. Alikimbizwa hospitalini ili aweze kutibiwa. Lakini walipofika hospitalini wakapata madaktari wamegoma.



MSURURU WA MTHANI WA HIGH FLYER SERIES
DARASA LA PILI – MWAKA 2017
KISWAHILI: LUGHA

TAREHE:

JINA: SHULE:

Imla

1.
2.
3.
4.
5.

Chagua jibu sahihi kujibu maswali.

6. U hali gani mwanafunzi?
..... (vyema, njema, poa)
7. Habari gani?
(mzuri, nzuri, zuri)
8. jibu lake ni
hatujambo.
(hujambo, hamjambo, tujambo)

**Chagua jibu lifaalo kukamilisha
sentensi hizi.**

9. Kifaranga ni mdogo.
(hiki, huyu, hii)
10. Viatu ni maridadi.
(hizi, hivi, hii)
11. Chupa zina dawa.
(hizi, hii, hawa)
12. Wanafunzi ni wazuri.
(huyu, hawa, hizi)

**Chagua neno sahihi kukamilisha
sentensi**

13. Sofia ameupoteza ufunguo
..... (lake, yake, wake)
14. Jembe lina makali.
(yake, lake, wake)
15. Wageni wameondoka.
(zetu, wetu, kwetu)
16. Nguo za shuleni
chafu. (zetu, vyetu, yetu)

Kanusha sentensi zifuatazo.

17. Chakula kimeiva
18. Mwanafunzi anasoma
19. Mtoto analia
20. Nyumba imefungwa

**Piga mstari kisichotakikana katika
kundi.**

21. Simba, fisi, ndovu, chungwa,
chui.
22. Ugali, kitanda, chapati, wali,
viazi.
23. Kikombe, tai, shati, rinda,
soksi.

24. Baba, shangazi, mwalimu,
nyanya, kaka.

25. Aprili, Mei, Oktoba, Alhamisi,
Januari.

Andika idadi hizi kwa maneno.

26. 330

27. 805

28. 98

Andika kwa wingi.

29. Chandarua


30. Mchungwa

31. Jicho


32. Jino

Chora maumbo haya

33. Duara dufu



34. Nyota



Andika kinyume.

35. Nitaenda

36. Analia

37. Amesimama

38. Usiku

Tegua vitendawili.

39. Akitolewa majini hufa

40. Kuku wangu katagia
miibani

41. Ninacho lakini sikioni

42. Askari mlangoni
(kisogo, kufuli, nanasi, samaki)

Jibu kwa usahihi.

43. hutumika pamoja
na mchi.

44. Chombo kinachotoa mwanaza
nyumbani huitwa?

45. Kitabu cha kuandikia huitwa?

46. Mzazi wangu wa kike ni?

Kamilisha methali hizi.

47. Mvumilivu hula

48. Damu ni mzito kuliko

49. Penye nia pana

50. Tamaa mbele mauti
(mbichi, njia, mbivu, maji,
nyuma, mbele, uji)



HIGH FLYER SERIES EVALUATION TEST
STANDARD TWO – YEAR 2017
READING

DATE:

NAME: SCHOOL:

Read these words

- | | |
|-------------|-------------|
| 1. Hospital | 6. Mont |
| 2. Cock | 7. Calabash |
| 3. Fence | 8. Pillow |
| 4. Mattress | 9. Video |
| 5. Broken | 10. Dried |

Read these sentences

1. There were twenty five children in the bus.
2. A bird in a hand is worth two in the bush.
3. We went to the river and caught some fish.
4. That man is the richest in our village.
5. Our teacher became angry after the window was broken.

Read this passage

Kelvin is a very serious boy. He studies hard to school, does his homework and loves football. He has two friends. Jacob and Mark. They always meet at Kelvin's house after they finish their homework.



HIGH FLYER SERIES EVALUATION TEST
STANDARD TWO – YEAR 2017
CHRISTIAN RELIGIOUS EDUCATION

DATE:

NAME: SCHOOL:

1. Jesus healed a blind and mad man.
The men _____ Him.
(beat, followed, ran away from)
2. On the way to _____ Jesus
appeared to two of his followers.
(Jerusalem, Emmaus, Nazareth)
3. Zacheaus was a _____.
(fisherman, farmer, tax-collector)
4. Messiah means _____.
(God with us, saviour, father)
5. Jesus did many _____.
(miracles, magics, lessons)
6. God blessed Abraham and Sarah
with a son named _____.
(John, Isaac, Moses)
7. The young son who went away
from home ate the food for
_____. (chicken, cows, pigs)
8. Jacob loved _____ more than
his other sons.
(Joseph, Benjamin, Israel)
9. At the temple gate, Peter and John
found a _____ man.
(mad, blind, lame)
10. King _____ wanted Naboth's
vineyard. (Saul, David, Ahab)
11. Bartimeaus was a blind _____
(thief, beggar, cripple)
12. Who betrayed Jesus?
(Peter, Judas, James)
13. Angel _____ was sent by God
to Mary. (Gabriel, Moses, Michael)
14. Most Christians go to church on
_____.
(Saturday, Fridays, Sundays)
15. Jesus got lost in Jerusalem when
he was _____ years old.
(8, 10, 12)
16. The first book in the New
Testament is _____.
(Genesis, Luke, Matthew)
17. We learn to _____ in School.
(fight, pray, steal)
18. God wants us to be _____ all
the time. (crying, happy, sad)
19. The body of Jesus was buried by
_____.
(Stephen, Joseph, Simon)
20. My CRE teacher is called
_____.