

SIGNAL EXAMS 2017

Early Grade Mathematics

Class 2

Term 3

Opener Term 3

Mathematics Test

Fill in the place value chart.


	Hundreds	Tens	Ones
1. 426	___	___	___
2. 411	___	___	___
3. 329	___	___	___
4. 972	___	___	___
5. 492	___	___	___
6. 211	___	___	___

Count and add.

7. $\begin{array}{ccc} \bigcirc\bigcirc\bigcirc\bigcirc & \bigcirc\bigcirc\bigcirc & \\ \bigcirc\bigcirc\bigcirc\bigcirc & + & \bigcirc\bigcirc\bigcirc \\ \bigcirc\bigcirc\bigcirc\bigcirc & & \bigcirc\bigcirc\bigcirc \\ \bigcirc\bigcirc\bigcirc\bigcirc & & \end{array} = \underline{\hspace{2cm}}$

8. $\begin{array}{ccc} \bigcirc\bigcirc\bigcirc & \bigcirc\bigcirc\bigcirc & \\ \bigcirc\bigcirc\bigcirc & + & \bigcirc\bigcirc \\ \bigcirc\bigcirc\bigcirc & & \bigcirc\bigcirc \end{array} = \underline{\hspace{2cm}}$

Write either a straight line or a curved line.

9.  _____

10. _____

11.



12.



Add by breaking apart.


13. $20 + 22 = 10 + \underline{\hspace{1cm}} + \underline{\hspace{1cm}}$
14. $14 + 16 = 6 + \underline{\hspace{1cm}} + \underline{\hspace{1cm}}$
15. $19 + 11 = 20 + \underline{\hspace{1cm}} + \underline{\hspace{1cm}}$
16. $12 + 9 = 16 + \underline{\hspace{1cm}} + \underline{\hspace{1cm}}$
17. $10 + 30 = 15 + \underline{\hspace{1cm}} + \underline{\hspace{1cm}}$
18. $200 = 100 + \underline{\hspace{1cm}} + \underline{\hspace{1cm}}$
19. $300 = 50 + \underline{\hspace{1cm}} + \underline{\hspace{1cm}}$
20. $40 = 31 + \underline{\hspace{1cm}} + \underline{\hspace{1cm}}$

Fill in the days of the week.

21. Monday, _____
22. _____, Thursday
23. Friday, _____
24. _____

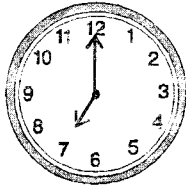
What is the time?

25.




_____ O'clock

26.



_____ O'clock

27.



_____ O'clock

Which one costs more?

28.



Ball

Shs. 200



Book

Shs. 50

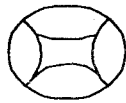
= _____

29.



Trouser

Shs. 800



Ball

Shs. 300

= _____

30.


Ole King had 200 cows. During the market day, he sold 50 of them. How many cows remained?

31.

Boni had sh. 400. He gave his sister sh. 150. How much money did he remain with?


Which one is heavier?

32.



= _____

33.



= _____

Which one is taller?

34.



35.



= _____ = _____

Circle the lesser number.

36. 44 34 24

37. 94 84 74

38. 13 12 11

Circle the greater number.

39. 42 41 61

40. 14 24 34

41. 16 9 10

42. 10 20 30

Put either +, - or =

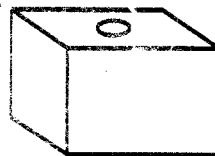
43. 9 + 9 _____ 18

44. 10 _____ 10 = 20

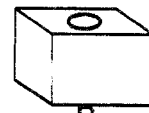
45. 16 _____ 8 = 8

Which one holds more water?

46.



A



B

= _____

47. Draw 2 squares

48. Draw 3 circles

Who is taller?

49.



Kamau



Njoroge

50. 34 + 18 = _____

SIGNAL EXAMS 2017

Early Literacy Programme

Class 2

Term 3

Opener Term 3

English Test

Part A : Dictation.

Write the words as the teacher says them.

1. _____
2. _____
3. _____
4. _____
5. _____
6. _____
7. _____
8. _____
9. _____
10. _____

Part B: Filling the blanks.

Fill in the blank spaces.


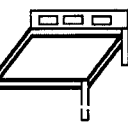
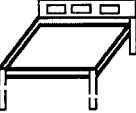



11. P__r__nt
12. F__r__st
13. B__k
14. Sch__ __l
15. H__ __dm__st__r
16. Qu__ __n
17. K__ng

Part C: Tense

Write the past tense of these words.

18. Go - _____
19. Walk - _____
20. Run - _____
21. Swim - _____
22. Drive - _____
23. Laugh - _____

Part D: Match the sentences with the pictures.

24.  Tam is swimming in the river.
25.  Tom is climbing a tree.
26.  The carpenter made a new bed.
27.  Who broke the glass?
28.  The children are playing with the ball.
29.  Our teacher bought a new blackboard.

Part E. Making sentences.
Make sentences using these words.

30. nest

31. eggs

32. elephant

33. sleeping

34. market

Part F: Plural
Write the plural of the underlined words.

35. My mother is a doctor.

36. She is a girl. _____
37. The driver drove the blue bus. _____
38. The baby cried loudly.

39. Who killed the elephant?

40. He bought a new bag.

Part G: Riddles
Fill in the gap using the words in the box.

chef	dentist	ostrich
cat	sheep	judge

41. I live at home. I kill rats. My children are called kittens. Who am I? _____
42. I wear a white coat. I take care of people's teeth. Who am I? _____
43. My body is covered with wool. Who am I? _____
44. I work in courts. I give judgements. Who am I? _____
45. Am a big bird. Although I have wings, I don't fly. Who am I? _____
46. I work in a hotel. I cook food. who am I? _____

Part H. Comprehension.
Read the story and answer the questions that follow.

Last Saturday, I woke up very early. I was to accompany my mother to the market. After taking breakfast, we walked to the bus station where we boarded a small van. The journey only took twenty five minutes. The market was a noisy place. Some people were buying things while others were selling things. I was carrying a basket. We bought fruits and vegetables. After taking our lunch in a nearby hotel, we walked back home.

47. We went to the market on which day? _____
48. We went to the market by _____.
49. The market was a _____ place.
50. What did we buy in the market?
_____ and _____

SIGNAL EXAMS 2017

Early Literacy Programme

Darasa la 2

Muhula wa 3

Mwanzo wa Muhula

Jaribio la Kiswahili

Sehemu ya A : Imla.

Andika maneno mwalimu atakayosema.

1. _____
2. _____
3. _____
4. _____
5. _____
6. _____
7. _____
8. _____
9. _____
10. _____

Sehemu ya B. Sarufi

Andika wingi wa sentensi hizi.

11. Kijana analima. _____
12. Ndege amepaa. _____
13. Mzee ameketi kivulini. _____
14. Kitanda chake kimevunjika. _____
15. Chakula kimeiva. _____
16. Kalamu hii. _____


Sehemu ya C. Silabi.

Tunga maneno kutokana na silabi hizi.


17. du _____
18. ma _____
19. so _____
20. ba _____
21. m _____
22. nya _____

Sehemu ya D. Andika majina ya picha hizi.

23.




24.



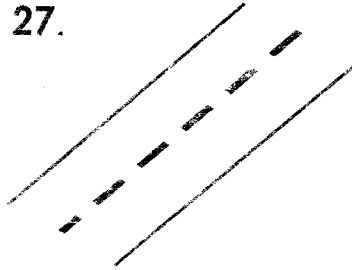
25.



26.



27.



Sehemu ya E: Nyakati.
Andika sentensi hizi kwa wakati uliopita.

28. Mwalimu amefundisha.

29. Nyoka ameuawa.

30. Mtoto analia.

31. Kaka anacheka.

32. Mzee amechoka

33. Juma atakimbia.

34. Ng'ombe atachinjwa.

Sehemu ya F. Methali.
Malizia methali hizi.


35. Haba na haba hujaza _____

36. Bendera hufuata _____

37. Haraka haraka haina _____

38. _____
Jogoo wa shamba hawiki _____39. Maji hufuata _____
(mkondo, baraka, mjini,
upepo, kibaba)

Sehemu ya G: Msamiati.
Andika rangi nne za bendera.



40.

41.

42.

43.

40. _____

41. _____

42. _____

43. _____

Sehemu ya H. Andika siku tatu za Juma.

44. _____

45. _____

46. _____

Sehemu ya I: Ufahamu.
Soma hadithi hii kisha ujibu maswali.

Mkulima ni mtu anayepanda mimea shambani na kuwafuga wanyama. Mimea inayopandwa shambani ni kama vile mihindi, miharagwe, mihogo na hata miboga. Kazi ya ukulima ni ngumu sana. Mara nyingi humbidi mkulima kuwaajiri wafanyakazi wa kumsaidia. Wanyama wanaofugwa nyumbani ni kama vile ng'ombe ambaye humpa mkulima nyama na maziwa, kuku ambao humpa nyama na mayai, kondoo ambaye humpa manyoya na nyama na mbuzi ambaye humpa maziwa na nyama.

47. Ng'ombe humpa mkulima _____ na _____

48. Nyama na mayai hutoka kwa _____




49. Faida za kondoo ni zipi? _____

50. Taja mimea miwili inayokuzwa shambani. _____, na _____

SIGNAL EXAMS 2017

SOCIAL STUDIES/RELIGIOUS EDUCATION

NAME:	
SCHOOL:	

- Long grass around the home can keep _____.
(lions, snakes, fish)
- The parents to my father are my _____.
(uncles, aunts, grandfather)
- _____ is a religious celebration.
(Madaraka day, Jamuhuri day, Christmas)
- Taking children to hospital when they are sick is providing them with _____.
(education, medical care, shelter)
- The National anthem is recited in _____ language. **(2, 3, 4)**
- We should not throw waste paper in a _____.
(dustbin, classroom, garbage heap)
-  This school building is _____.
(staffroom, toilet, library)
- When we use the road safely we avoid _____. **(hunger, accident, vehicles)**
- We should not _____ when crossing the road. **(walk, play, talk)**
- At school, a _____ is meant to be used by teachers only
(classroom, staffroom, field)
-  This is a _____.
(hill, valley, swamp)
- Pupils can play _____ at school.
(football, wrestling, fighting)
- Caning pupils at school is a way of _____ them.
(protecting, abusing, pleasing)
- There are _____ teachers in our school.
- Parents should _____ their children.
(employ, love, abuse)
- The chalkboard is found outside a _____. **(toilet, class, hospital)**
-  This house has _____ walls.
(stone, mud, brick)
- Swimming and athletics are types of _____. **(games, worship, dances)**
- At school, we suffer from shortage of _____.
(doctors, teachers, traders)
- Pupils go to the field to _____.
(read, sheep, play)
- When it is too hot, we say that the weather _____.
(rainy, sunny, windy)
- A _____ is a school symbol.
(badge, gate, class)

Name the road signs below.

23.



24.



25.



26. A lion is dangerous_____.
(plant, insect, animal)
27. A _____ prepares food for pupil at school.
(teacher, cook, watchman)
28. We should keep the school compound.
(dirty, clean, unsafe)
29. Road signs are used to ensure____ on the roads.
(accident, safety, carelessness)
30. A_____ is a school worker.
(nurse, watchman, police)


C.R.E

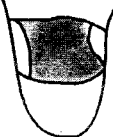


31. Jesus Christ helped people to celebrate at a wedding party in_____.
(Cana, Egypt, Bethlehem)
32. We can help the needy by giving them_____.
(Alcohol, cigarettes, food)
33. When we are in need we should_____.
(cry, sleep, pray)
34. God is _____ to us.
(proud, kind, enemy)
35. Doing what our parents tell us to do is called_____.
(love, obedience, fairness)
36. The National Anthem is a prayer for our_____.
(country, father, mother)

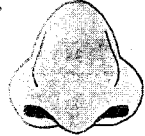
37. We should desire to please_____.
(friends, parents, God)
38. When we pray, we_____ God..
(abuse, annoy, worship)
39. A _____ is a member of our extended family.
(pastor, grandfather, mother)
40. Our relatives are given to us by _____.
(teachers, God, Parents)
41. The people who live near are our _____.
(teachers, parents, neighbours)
42. The book of _____ is found in the new testament.
(Genesis, Luke, Leviticus)
43. Christians celebrate Christmas by_____.
(fighting, praying, gossiping)
44. Jesus Christ is a gift to us from_____.
(church, hospital, school)
45. On Sabbath day, we go _____pray.
(Bethlehem, Nazareth, Jerusalem)
46. Jesus grew up in the town of_____.
(Bethlehem, Nazareth, Jerusalem)
47. Jesus was brought back to life after _____days.
(2, 3, 4)
48. Jesus went to River Jordan so as to be_____.
(crucified, baptised, tempted)
49. God instructed man to _____ for his creation.
(destroy, cave, waste)
50. Bartimaeus, a blind man was healed by_____.
(Peter, John, Jesus)

SIGNAL EXAMS 2017
SCIENCE

NAME:	
SCHOOL:	

- | | |
|--|---|
| <p>1. _____ wheels move easily.
(Big, Small, Round)</p> <p>2. We taste food using the _____.
(tongue, eyes, ears)</p> <p>3. I have _____ ears.
(2, 5, 10)</p> <p>4. We use _____ to pass human waste.
(latrines, bushes, bathrooms)</p> <p>5. We wash _____ before eating food.
(legs, hands, head)</p> <p>6. Raw foods are eaten without _____.
(washing, cooking, cutting)</p> <p>7. Camels and _____ are kept at home.
(donkeys, girrafes, eagles)</p> <p>8. _____ can be modelled using soil. (Toys, Air, Water)</p> <p>9. _____ protect protect our homes at night.
(Dogs, Cats, Goats)</p> <p>10.  This is my _____.
(ear, eye, nose)</p> | <p>11. Hens are kept for _____.
(eggs, honey, wool)</p> <p>12. A termite is a _____ animal.
(useful, harmful, domestic)</p> <p>13. We use a clean piece of cloth to remove _____ in water.
(air, colour, mud)</p> <p>14. A _____ makes holes on our clothes.
(termite, rat, flea)</p> <p>15. Wild animals live in the _____.
(forest, home, shed)</p> <p>16. Sight is the ability to _____.
(hear, see, smell)</p> <p>17. A _____ is used to make our hair neat.
(comb, toothbrush, socks)</p> <p>18. The growth of seeds to new plants is called _____.
(germination, weeding, watering)</p> <p>19. We should flush _____ after using them.
(latrines, urinals, toilets)</p> |
|--|---|

20. We hold things using our _____.
(legs, hands, eyes)
21. _____ leaves are long and narrow.
(Bean, Maize, Mango)
22.  We use this to _____.
(hear, taste, touch)
23. The toes are found on the _____.
(head, hands, legs)
24. Saliva is found in our _____.
(mouth, ears, eyes)
25. Handkerchiefs should not be _____.
(washed, shared, used)
26. A car moves using the _____.
(wheels, legs, containers)
27. We care for plants by ____ them.
(cutting, watering, uprooting)
28.  This is the _____ of a plant.
(flower, fruit, leaf)
29. We put rubbish in a _____.
(bag, basket, dustbin)
30. Plant seeds are planted in _____.
(water, soil, air)
31. Sheep are kept for _____.
(eggs, honey, meat)
32. A crocodile lives in _____.
(forests, water, holes)
33. Cups, plates and spoons are called _____.
(models, utensils, clothes)
34.  The weather is _____.
(windy, calm, cloudy)

35. Socks keep our _____ warm and clean.
(hands, head, legs)
36. We cannot touch _____.
(air, soil, trees)
37. We eat maize _____.
(roots, leaves, seeds)
38. A lamp produces _____.
(sound, light, water)
39. We use soap when _____.
(cooking, bathing, sleeping)
40. We reat spinach _____.
(roots, leaves, seeds)
41. A cow has _____ legs.
(four, two, five)
42. Electricity in the house gives us _____.
(light, water, sound)
43. A drum is _____.
(hit, blown, plucked)
44. A _____ is a young growing plant.
(seedling, flower, seed)
45.  We use this sense organ to _____.
(see, hear, smell)
46. _____ are found in dusty areas.
(Mosquitoes, Fleas, Rats)
47. A _____ is used by people to transport goods.
(horse, goat, dog)
48. People trap water from houses roofs when it is _____.
(rainy, windy, calm)
Name two raw foods
49. _____
50. _____

SIGNAL EXAMS 2017

Early Literacy Programme

Class 2

Term 3

Opener Term 3

Reading Test

Read this story loudly.

Trees are very important. Trees can grow on their own or they can be planted. Trees provide us with medicine, shade during the hot days and fruits to eat. Some are used to make paper. During the windy season, trees reduce the speed of wind which can blow away roofs. Lastly, trees make places to look beautiful. We should not cut down trees.

SIGNAL EXAMS 2017

Early Literacy Programme

Darasa 2

Muhula wa 3

Mwanzo wa muhula

Jaribio la Kusoma

Soma kifungu hiki kwa sauti.

Dereva Ali aliishi katika kijiji cha Azama. Alikuwa tajiri sana na alikuwa na wake na watoto wengi. Alikuwa na shamba kubwa alikopanda mimea tofauti tofauti kama vile mihindi, mipera na hata miharagwe. Aliwafuga ng'ombe wengi wa maziwa. Ng'ombe wake walilishwa vizuri na wafanyakazi wake na walikuwa wanono sana. Mzee Ali alipendwa na wote kwani alikuwa mwenye heshima na mpole.