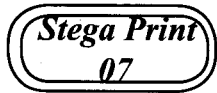


GLOWING SUPREME ASSESSMENT TEST

STANDARD 2 2017

MATHEMATICS



NAME _____ DATE _____

1. $8 + 5 =$
2. $12 + \underline{\quad} = 10 + 7 =$
3. $6 + 5 =$
4. 50, 60, 70, _____
5. 76, 65, 55, 45, _____

Write in words

6. 18 _____
7. 23 _____
8. 56 _____

Take away

- | | |
|---|---|
| $\begin{array}{r} 9. \quad 58 \\ - 13 \\ \hline \end{array}$ | $\begin{array}{r} 10. \quad 70 \\ - 40 \\ \hline \end{array}$ |
| $\begin{array}{r} 11. \quad 79 \\ - 24 \\ \hline \end{array}$ | |

Order from the smallest to the greatest

12. 47, 9, 32, 17, 21

13. 40, 10, 60, 90

14. 25, 10, 30, 5, 45


Write the missing number

15. 79, 80, _____, 82
16. 102, 103, _____, 105

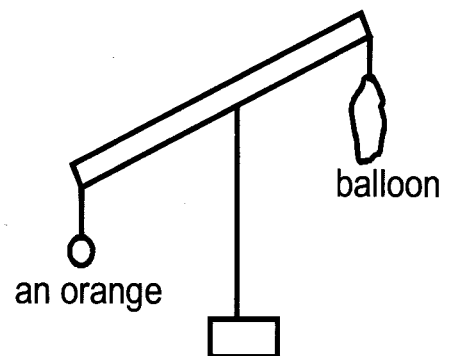
Share equally

17. $21 \div 3 =$
18. $14 \div 7 =$
19. $25 \div 5 =$
20. $5 \div 5 =$
21. Mr Otieno had 36 cows. He sold 20.
How many cows was he left with?

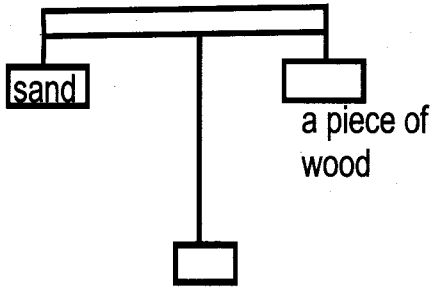
22. Tom had 6 oranges. His mother gave him 2 more oranges. How many oranges did he have altogether?

23. $23 - 3 =$
24. 
_____ x _____ = _____

25. Which is heavier?

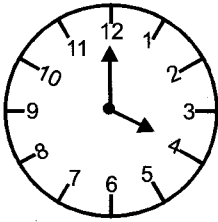


26.



27. Our classroom door is 2 _____
(km, m, kg)

28. What is the time? _____



29. Multiply $2 \times 6 =$

30. $4 \times 4 =$

31. $5 \times \square = 20$

32. Two boys have _____ ears.
(2, 4, 6)

33. Work out

sh	cts
78	50
- 22	00
<hr/>	

34. sh cts

34	00
+ 12	50
<hr/>	

35. Betty bought the following;
A loaf of bread at 50.00
A pen at 10.00
A ruler at 25.00
She gave a shopkeeper sh 200.00

note. How much money was she given back? _____

36. A 100.00 shillings note has _____ fifty shilling note. (4, 2, 1)

37. Complete the pattern


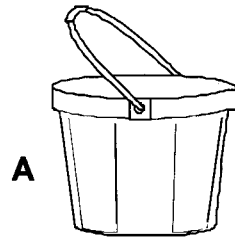


38. A triangle has _____ sides.

39. Take away 3 from 17 = _____

40. My Mathematics teacher weight is measured using _____ (kg, mm, km)

41. Which one can hold more?



42. 300

+ 200

43. 179 = _____ hundreds _____ tens _____ ones

44. 63 = _____ hundreds _____ tens _____ ones

45. 3 hundreds = _____

46. $13 + \square = 18$

47. Add $27 + \square = 30$

48. $4 + 4 + 4 = \square \times \square = \square$

49. $\square - 10 = 32$

50. 369

- 23

GLOWING SUPREME ASSESSMENT TEST

STANDARD 2 2017

ENGLISH



NAME _____

DATE _____

Part A: Dictation

Write the words as the teacher

says them

1. _____
2. _____
3. _____
4. _____
5. _____

Part B: Completing sentences

Use the words in the box to fill in

the blanks

watch	brush	blowing
shine	dew	

6. The sun will _____ today.
7. I _____ my teeth everyday.
8. Peter checks the time on his new

9. The wind is _____ strongly.
10. There is _____ on the grass in the morning.

Part C: Writing

Write words that have sound 'ell at

the end

Example - sell

11. _____
12. _____
13. _____
14. _____
15. _____

Part D: Writing

Write the sentences correctly

16. cuts farmer grass The.

17. clean do How you a sufuria?

18. gave us He new shorts.

19. bird the sang a song happy.

20. like farmers the to maize plant.

Part E: Filling the blank spaces

Use the letters in the box to fill in

the blank spaces

st	ch	ca	sm	hi
----	----	----	----	----

21. ___ ell
22. tou ___
23. ___ itch
24. ___ ppo
25. ___ lf

Part F: Writing sentences

Write a sentence using each word

26. Cry _____
27. Wash _____
28. Bus _____
29. Yesterday _____
30. Wings _____

Part G: Riddles

Complete the riddles using these

words in the box

Flask	bird	horns
house	third	

31. People live inside me. What am I?

32. People put tea inside me. What am I? _____
33. I come after first and second. What am I? _____
34. I like to fly in the sky. What am I?

35. You can find me on a cow. What am I? _____

Part G: Comprehension

Read the passage and answer the questions

Neema and Awino went to collect firewood near the river. When they got to the river they wanted to swim. They took off their clothes and got into the water. Awino slipped, "Help me Neema!" Awino cried. Neema took Awino's hand and got her out of the water. They sat on the river bank. Awino said, "Thank you my friend."

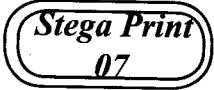
36. Where did Awino and Neema go to collect firewood? _____
37. Why did they take off their clothes?

38. Who slipped into the river? _____
39. How did Neema help Awino?

40. Who said, "Thank you" my friend?

GLOWING SUPREME ASSESSMENT TEST STANDARD 2 2017

KISWAHILI



NAME _____

DATE _____

Sehemu ya A: Imla

1. _____
2. _____
3. _____
4. _____
5. _____

Sehemu ya B: Wakati

Andika kwa wakati uliopo

6. Mkulima alienda sokoni.

7. Mama alitandika kitanda.


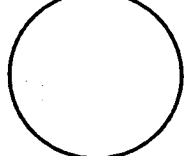
8. Viatu vyangu vitaoshwa.

9. Jino langu linauma.

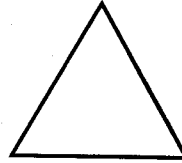
10. Tutacheza uwanjani.

Sehemu ya C: Maumbo

Andika majina ya maumbo haya

11.  _____
12.  _____


13.



14.



15.



Sehemu ya D: Wingi

Andika sentensi hizi kwa wingi

16. Hili ni ua langu.

17. Jibu langu ni sahihi.

18. Pipa hili ni langu.

19. Daftari lille ni safi.

20. Kaa linawaka.

Sehemu ya E: Kinyume

Andika kinyume cha maneno
yalivyopigiwa mstari

21. Kikombe kimewekwa karibu na _____

kabati. _____

22. Vitabu vimo ndani ya dawati.

23. Wazee wanajenga nyumba.

24. Maswali haya ni rahisi sana.

25. Mfoto huyu anapenda kucheka
sana. _____

Sehemu ya F: Silabi

Panga silabi kuunda maneno sahihi

Mfano: ridakta - daktari

26. fiusa _____

27. ocho _____

28. ngaki _____

29. fucha _____

30. nimlasa _____

Sehemu ya G: Kujaza pengo

Tumia maneno haya kujaza pengo

Kinyozi seremala daktari

dobi mkulima

31. _____ alinyoa mywele.

32. _____ alifua nguo zetu.

33. _____ alipanda mahindi na nyanya.

34. _____ alitengeneza meza, viti na
makabati.

35. _____ alimtibu mgonjwa.

Sehemu ya H: Ufahamu

Soma hadithi hii na ujibu maswali

Zamani za kale watu walitumia njia tofauti za usafiri. Watu wengi walitembea muda mrefu kwa miguu. Wengine walitumia wanyama kwa usafiri wao na wa bahari na mizigo pia. Watu walioishi karibu na mito, bahari na maziwa walitumia dau au mitumbwi. Mbali na kutembea, siku hizi watu wanatumia aina mbalimbali za magari, eropleni, baiskeli na pikipiki. Usafiri wa majini pia umeendelea sana. Siku hizi kuna meli, feri na manowari. Manowari hutumiwa sana na majeshi ya wanamaji vitani.

36. Watu walitembea kwa muda mrefu wakitumia nini? _____

37. Zamani watu walitumia nini kubeba mizigo? _____

38. Watu walioishii karibu na mito na bahari walitumia nini kusafiri?

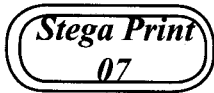
39. Meli, feri na _____ hutumiwa kusafiria majini.

40. Manowari hutumiwa sana na kina nani? _____

GLOWING SUPREME ASSESSMENT TEST

STANDARD 2 2017

SCIENCE




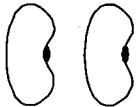
NAME _____

DATE _____

1. A drum is a source of _____.
(water, heat, sound)
 2. Our hair should be kept _____.
(tidy, untidy, dusty)
 3. Most plants are _____ in colour.
(green, yellow, black)
 4. We use _____ to clean our nose.
(socks, handkerchief, comb)
 5. Cow, goat and poultry are _____ animals.
(dangerous, harmful, useful)
 6. Pencils, maize cobs and round sticks are used as _____.
(rollers, wheels, shapes)
 7. Our shadows are shortest at _____.
(morning, noon, evening)
 8. The weather is _____.
-
9. Moving air is called _____.
(sun, wind, rain)
 10. The best shape for a wheel is _____.
(circular, oval, triangle)
 11. _____ soil can model the longest ribbon.
(loam, sand, clay)
 12. Crocodiles, whales and fish live in _____.

13. Kites can fly easily during a _____ day.
(windy, rainy, cloudy)
14. We should wash our hands _____ visiting the toilet.
(during, after, before)
15. A guitar can produce sound by _____.
(hitting, plucking, kicking)
16. Raw food should be _____ before eating.
(cooked, washed, boiled)
17. Light travel in a _____ line.
(straight, curved, zigzag)
18. Animals kept at home are called _____.
(domestic, wild, harmful)
19. Large amount of water can be stored in _____.
(tanks, tap, bottle)
20. We water plants during _____ season.
(dry, wet, rainy)
21. Termites destroys our _____.
(clothes, timbers, seeds)
22. Poultry gives us meat and _____.
(milk, eggs, skin)
23. A giraffe has a long _____.
(tail, neck, udder)
24. We wear a vest when the weather is _____.
(hot, cold, wet)

25. A snake has _____ legs.
(0, 1, 2)
26. The best soil for modelling is _____
(clay, loam, sand)
27. This is a _____ leaf.
- 
- (bean, maize, peas)
28. We wear _____ on our legs.
(socks, trousers, gloves)
29. We see with our _____
(ears, nose, eyes)
30. A bee give us _____.
(milk, wax, meat)
31. We see _____ at night.
(stars, sun, wind)
32. Removing unwanted plants is called
(harvesting, weeding, planting)
33. We eat the stem of a _____
(maize, sugarcane, mango)
34. When an empty bottle is dropped in water we can see _____.
(fire, bubbles, soil)
35. Urinals are used by _____ only.
(boys, girls, women)
36. Unripe bananas are _____ in colour.
(yellow, green, black)
37. We should brush our teeth _____ every meal.
(before, during, after)
38. _____ is the smoothness or roughness of soil.
(colour, size, texture)

39. Rain, dam and river is a source of _____
(light, sound, water)
40. We should keep our nails short and _____
(dirty, sick, clean)
41. Children carry an umbrella in the morning when the weather is _____
(windy, rainy, windy)
42. Strong wind can _____ the roofs of houses.
(uproot, blow, make)
43. Empty containers have _____ inside.
(water, soil, air)
44. A _____ and a donkey can carry heavy loads.
(goats, sheep, camel)
45. Mosquitoes spread _____.
(Cholera, Malaria, AIDS)
46. Clothes can dry quickly when the weather is _____
(cloudy and rainy, windy and sunny, windy and calm)
47. These are _____ seeds.
- 
- (bean, maize, mango)
48. Separating water from dirt using a piece of cloth is called _____
(sieving, filtering, boiling)
49. We can care for our plants by _____
(beating them, watering them, cutting them)
50. Toothbrush is to teeth as scarf is to _____
(legs, hands, neck)

GLOWING SUPREME ASSESSMENT TEST

STANDARD 2 2017

Stega Print
07

C.R.E

NAME _____

DATE _____

- | | |
|---|--|
| 1. God has promised the birth of Jesus through prophet _____
(Isaiah, Jeremiah, Elisha) | (Fairness, Honesty, Cheating) |
| 2. Plants, insects, animals and birds were created by _____
(God, man, satan) | 11. _____ and Sapphira cheated the Holy spirit. (Samuel, Ananias, Cain) |
| 3. Jesus showed power over death when He _____
(healed a blind man, cast demons, raised Jairus' daughter) | 12. Jesus healed a man with a bad skin disease called _____
(fever, leprosy, lame) |
| 4. _____ was a rich and short man from Jericho.
(John, Lazarus, Zacchaeus) | 13. The blind Bartimaeus was a _____
(thief, beggar, poor) |
| 5. Jesus appeared to His followers who were going to _____
(Emmaus, Bethlehem, Cana) | 14. Abel was a brother to _____
(Eve, Cain, Adam) |
| 6. _____ baptised Jesus in river Jordan.
(James, Philip, John) | 15. Samuel was called by God _____ times
(4, 3, 1) |
| 7. Peter denied Jesus _____ times.
(2, 4, 3) | 16. Man was created in the image of _____
(Satan, Angel, God) |
| 8. Messiah means _____
(Jesus, Saviour, Lamb of God) | 17. Children should obey God and _____
(thief, parents, strangers) |
| 9. Abraham had a son called _____
(Sarah, Isaac, Jacob) | 18. Samuel was serving in a temple under priest _____
(Abraham, Eli, Elikanah) |
| 10. _____ is telling the truth. | 19. Visitors who came to see Jesus brought _____ gifts.
(2, 3, 1) |
| | 20. Jesus healed ten lepers. How many came back to thank Jesus?
(10, 0, 1) |

GLOWING SUPREME ASSESSMENT TEST


STANDARD 2 2017

SOCIAL STUDIES

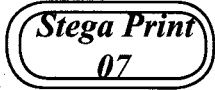


NAME _____

DATE _____

- | | |
|--|--|
| <ol style="list-style-type: none"> 1. The head of a location is _____
(D.O, chief, assistant chief) 2. At school _____ help us to know how to read and write.
(gardener, secretary, teacher) 3. Children should not go to school late is an example of school _____
(rules, property, uniform) 4. Trees and flowers make our compound _____
(uglym dirty, beautiful) 5. We raise the flag on _____
(Sunday, Friday, Wednesday) 6. Pedestrians are people walking on _____
(foot, car, water) 7. Games makes our bodies _____
(weak, lazy, strong) 8. Hills, vallesy and rivers are _____ features.
(physical, social, man-made) 9. Many trees growing together form a _____
(forest, valley, bush) 10. _____ is a source of water.
(borehole, forest, tap) 11. Dancing makes us _____
(sad, happy, bored) 12. The people living near a market are likely to be _____
(fishermen, farmer, traders) 13. Caning of children is an example of child _____
(right, education, abuse) 14. Wrong doers should be reported to the _____
(policemen, pastors, secretary) 15. People who come to see wild animals are called _____
(tourist, poachers, visitors) 16. A bicylce has _____ wheels.
(0, 1, 2) | <ol style="list-style-type: none"> 17. Animals kept for meat are known as _____
(dairy, layers, beef) 18. A _____ is a place where people sell and buy goods.
(church, school, market) 19. This is a _____ weather.
<div style="text-align: center;"></div>
(rainy, cloudy, windy) 20. The cooking area is also known as _____
(store, kitchen, bedroom) 21. School _____ help us to know what we should do in school.
(badge, anthem, rules) 22. We should _____ our prefects.
(abuse, hate, respect) 23. When the right of a child is taken away, we call this child _____
(abuse, right, cloth) 24. We should put the rubbish in a _____
(toilet, rubbish pit, office) 25. A _____ is a physical feature.
(river, cow, school) 26. A _____ is a group of people living together.
(farmers, shopkeeper, community) 27. A place where pedestrians cross the road is known as _____ crossing.
(school, animals, pedestrians) 28. _____ is not a social activity.
(medical care, games, dances) 29. A _____ helps us to cross a river.
(bridge, roundabout, bump) 30. We should not walk alone in the forest because _____ animals can attack us.
(domestic, wild, tamed) |
|--|--|

GLOWING SUPREME ASSESSMENT TEST STANDARD 2 2017



READING / KUSOMA

NAME _____

DATE _____

READING

Read these words

- | | | | | |
|------------|-------------|------------|------------|------------|
| 1. Miss | 2. Visiting | 3. Brain | 4. Smashed | 5. Lungs |
| 6. Trade | 7. Blowing | 8. Greener | 9. South | 10. Reader |
| 11. Spices | 12. Grasp | 13. Pound | 14. Cluck | 15. Beach |
| 16. Grip | 17. Gloomy | 18. Cage | 19. Mess | 20. Trunk |

Read these sentences

1. The wind was blowing the trees.
2. He sang a song and prayed.
3. I saw a wasp at the farm.
4. The mouse made the house smell.
5. The queen watches the duck cluck.

KUSOMA

Soma maneno haya.

- | | | | |
|------------------|---------------|----------------|-----------------|
| 1. Mwangalifu | 2. Mbuga | 3. Dhihaka | 4. Mzunguko |
| 5. Mmomonyoko | 6. Wazalendo | 7. Manowari | 8. Tafadhali |
| 9. Matumizi | 10. Mchwa | 11. Dhuluma | 12. Ghalani |
| 13. Mwangaza | 14. Kibinafsi | 15. Kombamwiko | 16. Manufaa |
| 17. Hutofautiana | 18. Kuwaalika | 19. Foleni | 20. Kusawazisha |

Soma sentensi hizi

1. Vipepeo wadogo wanapepea angani.
2. Tarakilishi hizi zimeharibika.
3. Mfoto huyu ana afya nzuri.
4. Magurudumu ya gari yana umbo la duara.
5. Duka lake lina bidhaa mbalimbali