

TARGETER WINGS EVALUATION TEST

STANDARD TWO - YEAR 2017

MATHEMATICS

007



Date:

NAME SCHOOL

Arrange these numbers from the smallest

1. 7, 6, 3, 2, 8, 1 _____

2. 26, 15, 29, 36, 11 _____

3.
$$\begin{array}{r} 246 \\ + 132 \\ \hline \end{array}$$

4. $52 + 124 =$

5. $74 - 12 =$

6.
$$\begin{array}{r} 18 \\ - 13 \\ \hline \end{array}$$


7.
$$\begin{array}{r} 57 \\ - 43 \\ \hline \end{array}$$

8. Circle number less than 8
4, 16, 9, 24, 3

9. $\square + 6 = 24$

10. $19 - 4 =$

11. How many parts are shaded?



12. Multiply eight by four = _____

13. $8 \times 0 =$

14. $36 - 4 =$

15. $6 \times \square = 12$

16.
$$\begin{array}{r} 54 \\ + 54 \\ \hline \end{array}$$



17. What is eighty three take away forty one? _____

18. 3 weeks = _____ days.

19.
$$\begin{array}{r} \text{shs} \quad \text{cts} \\ 4 \quad 50 \\ + 2 \quad 50 \\ \hline \end{array}$$

20. Two cars have _____ wheels.

What is the time?



23.
$$\begin{array}{r} 463 \\ - 253 \\ \hline \end{array}$$

24. The month of July has _____ days.

25. Subtract 43 from 94 = _____

26. A farmer had 250 cows. He sold 110, how many cows did he remain with? _____

27. Expand $124 = \underline{\quad} + \underline{\quad} + \underline{\quad}$

28.
$$\begin{array}{r} 126 \\ - 24 \\ \hline \end{array}$$

29. The ninth month of the year is _____


30.
$$\begin{array}{r} 94 \\ - 53 \\ \hline \end{array}$$

31. $211 = \underline{\quad}$ hundreds $\underline{\quad}$ tens $\underline{\quad}$ ones.

32. $14 + 3 + 2 =$ _____

33. Which is bigger $\frac{1}{2}$ or $\frac{1}{4}$? _____

Tens	ones
20	50
+ 13	50
<hr/>	

35.  = _____ tens _____ ones.

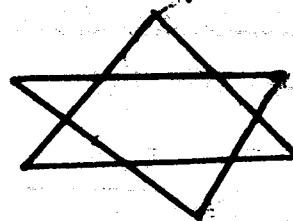
36.
$$\begin{array}{ccc} \text{OO} & \times & \text{OO} \\ \text{OO} & & \text{OO} \\ \text{OO} & & \end{array} =$$

Weeks	days
4	5
+ 4	3
<hr/>	

Write in figures

38. Six hundred and twenty seven _____

39. How many triangle can you see? _____



40. $21 + 44 =$ _____

41. $13 + 6 + 2 =$ _____

Write in words


42. 164 _____

43. 600 _____

44. $5 \times 4 =$ _____

45. $\square \times 2 = 8$

46.
$$\begin{array}{r} 4 \\ 3 \\ + 9 \\ \hline \end{array}$$

47. 

_____ + _____ =

48.
$$\begin{array}{r} 964 \\ - 82 \\ \hline \end{array}$$

49. 7 hundreds 3 tens 4 ones = _____

50. Multiply two by seven = _____

TARGETER WINGS EVALUATION TEST

STANDARD TWO - YEAR 2017

ENGLISH



007

Date:

NAME SCHOOL




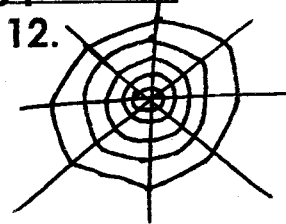
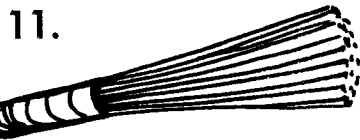
Part A: Dictation.

Write the words as the teacher says them

1. _____
2. _____
3. _____
4. _____
5. _____
6. _____
7. _____
8. _____
9. _____
10. _____

Part B: Naming pictures.

Name the following pictures



Part C: Making sentences
Make sentences using the following words.

16. rain _____
17. clean _____
18. fly _____
19. travel _____
20. brother _____

Part D: Correcting sentences.
Correct the following sentences

21. the likes He goat

22. the likes He cow

23. the like He pig

24. likes Tim swim to

25. floating likes He his on back

Part E: Filling in the gaps
Fill in the blank spaces using the following words

trees	trip	broom
plant	ground	

26. They go on a _____
27. They plant _____

29. You can make a _____
 30. They dig holes in the _____
 and plant trees.

Part F: Riddles.

Solve the following riddles

brown	broom	brain
tree	driver	

31. I am green and have a trunk. You can cut me down. What am I? _____
 32. I am a colour. Dirt looks like me. What am I? _____
 33. You need me to sweep. I am made from a tree. What am I? _____
 34. I am in your head. I help you think. What am I? _____
 35. I have a car. I go to many places. Who am I? _____

Part G: Small letters

Write the following words in small letters.

36. LESSO _____
 37. HOUSE _____
 38. MOUSE _____
 39. SOUND _____
 40. RIVER _____

Part H: Finding words

Find the words in the letter box and circle them.

Sound loud house
 mouth zoo

l	o	u	d	o	t
s	s	o	u	n	d
h	o	u	s	e	z
o	v	s	z	g	o
u	c	e	a	p	o
t	m	o	u	t	h

41. _____ 42. _____ 43. _____
 44. _____ 45. _____

Part I: Comprehension.

Read the passage and answer the questions below.

Tom has a new friend. His name is Jim. They go swimming at the river near Pat's home. They take off their coats and pair of shorts. They jump in the water and start to have fun. Then Tim brings goat to drink water at the river. Tim gets into the river to swim too.

46. What is the name of Tom's friend? _____
 47. Where do they go to swim? _____
 48. Who bring the goats to drink water? _____
 49. Did Tim swim? _____
 50. In which class do you think these children are? _____

TARGETER WINGS EVALUATION TEST

STANDARD TWO - YEAR 2017

SCIENCE

007

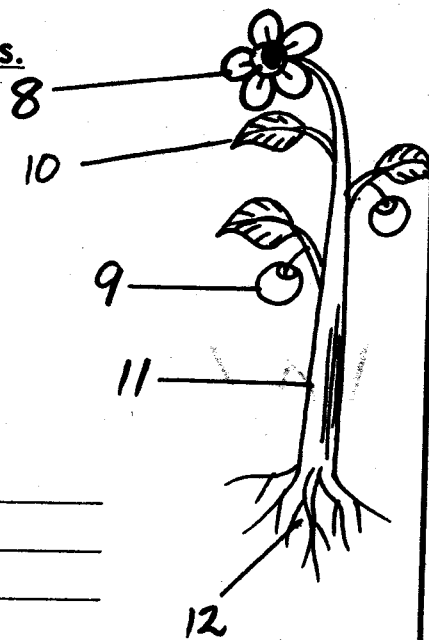


Date:

NAME SCHOOL

1. Direct _____ light can spoil our eyes.
(dim, bright)
2. A _____ grows into a new plant.
(fruit, seed, roots)
3. Wild animals bring _____ to our country.
(war, tourists)
4. Rain comes from the _____.
(air, soil, clouds)
5. _____ can be eaten both raw and cooked.
(Mango, Carrot, Pawpaw)
6. The main source of light is the _____.
(star, sun, moon)
7. Unwanted plants are called _____.
(grass, weeds, plant)
13. Farmers plough the land during the _____ season.
(dry, rainy, wet)
14. After using a latrine or toilet, we should always wash our _____.
(hair, teeth, hands)
15. _____ is a sticky substance that we remove from our ears.
(Water, Mud, Wax)
16. Winnowing is a way of separating chaff from _____.
(water, mud, grains)
17. Mud made from _____ is good from modeling.
(sand, clay, loam)
18. _____ is a rule of cleanliness.
(Hygiene, Sharing, Education)
19. Butterflies are found on _____.
(flowers, dirty places, stones)
20. We eat _____ to be healthy.
(food, water, soil)
21. The sense organ for touch is the _____.
(skin, nose, tongue)
22. We should not share our _____.
(toothbrush, broom)
23. We boil water to _____.
(kill germs, taste sweet)
24. Dirty feet have _____.
(jiggers, lice)
25. A place where an animal prefers to live is called _____.
(its house, its nest, its habitat)


Name the parts.



8. _____
9. _____
10. _____
11. _____
12. _____

(stem, fruit, leaf, flower, root)

26. Most leaves are _____ in colour.
(yellow, black, green)
27. A fish breathes through its _____
(scales, nose, gills)
28. A hen gives us _____
(eggs, honey, milk)
29. Name one farm tool _____
30. The weather is _____



- (cloudy, rainy, calm)
31. We should keep our nails _____
(broken, short, long)
32. A tick has _____ legs.
(4, 8, 6)
33. The body of a cow is covered with _____
(fur, scales, feathers)
34. A bird's mouth is called _____
(break, beak, nose)
35. God gave me _____ to breath.



- (eye, nose, ear)
36. Too much rain causes _____
(floods, drought)
37. A snake has _____ legs.
(0, 20, 4)


38. A mosquito causes _____
(flu, coughing, malaria)
39. Giving water to plants is called _____
(fishing, irrigation)
40. Bees gives us _____
(honey, sugar)
41. An earthworm moves by _____
(crawling, leaping, walking)
42. We use a panga for _____
(slashing, cutting, digging)
43. The house of a rabbit is called a _____
(kennel, stable, hutch)
44. _____ fruit has no seeds.
(Banana, Pawpaw, Orange)
45. We can tell whether something is rough or smooth through the sense of _____
(touch, sight, taste)
46. _____ have big wheels.
(Cars, Tractors, Toys)
47. After visiting the toilet we should wash our _____
(hands, mouth, legs)
48. A baby cow is called a _____
(kitten, calf, baby)

Name the seeds

49.



50.



(maize, seed, bean seed)

TARGETER WINGS EVALUATION TEST

STANDARD TWO - YEAR 2017


SOCIAL STUDIES / C.R.E

007



Date:


NAME SCHOOL

1. Every home should have a ____
(radio, car, toilet)
2. We eat the ____ of a hen.
(meat, feathers, beak)
3. We raise the flag on ____
(Friday, Sunday, Tuesday)
4. Which one of the following is not part of a bicycle? ____
(pedals, saddle, neck)
5. A family of mother father and children is called ____ family.
(an extended, a nuclear)
6. This sign means ____

(bumps ahead, no road ahead)
7. People should cross the road at the ____ crossing.
(zebra, donkey)
8. Heavy clouds in the sky may bring ____
(drought, wind, rain)
9. Every child has a right to ____
(education, child labour, punishment)
10. Peter does not have his parent. He is ____
(orphaned, deaf, blind)
11. Long ago children were taught by their ____
(grandparents, teachers)
12. A swamp is an area of ____
(plain, wet land)
13. Road signs must be followed by ____
(animals, pilots, pedestrians)
14. When do we celebrate Jamhuri day? ____
(20th October, 12th December, 1st June)
15. In between two hills there is a ____
(swamp, valley, mountain)
16. Kikuyu people live in huts while maasai live in ____
(manyatta, hut)
17. The brother to my mother is my ____
(brother, uncle, aunt)
18. The national anthem is a prayer for our ____
(country, location, school)
19. The first President of Kenya was ____
(Kenyatta, Moi, Oginga)
20. To stop the bicycle people should touch the ____
(pedals, saddle, brakes)
21. We go to school for ____ days.
(6, 5, 7)
22. Our social studies teacher is called ____
23. Animals that are kept at home are called ____ animals.
(domestic, wild)
24. Trees, animal and other things that surround us make up our ____
(environment, habitat)

25. Buses and trains are both means of _____
(communication, transport)


Name the road signs

26.



(bumps, bend, no entry)

27.



28. A clan is formed by a group of families with a common _____
(village, ancestry)

29. The weather is _____



(rainy, windy, sunny)

30. The sun rises in the _____
(East, West, North)

C.R.E

31. Angel _____ talked of Jesus.
(John, Joel, Gabriel)

32. At school we learn to read and _____
(fight, write, steal)

33. The greatest commandment is _____
(obey, love, respect)

34. God created man on the _____ day.
(sixth, fourth, seventh)

35. The old testament has _____ books.
(27, 66, 39)

36. Jesus was born in _____
(Manger, Bethlehem, Nazareth)

37. Who led the people of Israel from Egypt? _____
(Jacob, Moses, Joshua)

38. The boy from Nain was raised from death by _____
(Jesus, John, Peter)

39. The wisemen came from the _____
(North, West, East)

40. We should _____ always.
(play, pray, dance)

41. Naaman was told to wash in river _____
(Jordan, Tana, Athi)

42. Long ago people prayed under the _____.
(bed, chair, trees)

43. Jesus performed many _____
(miracles, magics)

44. _____ saw the burning bush.
(Moses, James, Abraham)

45. Maasai call their God _____
(Ngai, Enkai, Were)


46. Jesus fed 5000 people with 5 loaves of bread and _____ fish.
(2, 7, 5)

47. _____ had long hair with a lot of strength.
(Samson, Delilah, Solomon)

48. We should _____ one another.
(love, hate, abuse)

49. _____ is a house of God.
(School, Temple)

50. This is a _____



(nail, cross)

TARGETER WINGS JARIBIO LA MTHANI

DARASA LA PILI - MWAKA 2017

007



KISWAHILI

Tarehe:

JINA SHULE

Sehemu ya A:

Imla

Andika maneno nitakayoyasema.

1. _____
2. _____
3. _____
4. _____
5. _____
6. _____
7. _____
8. _____
9. _____
10. _____

Sehemu ya B: Kinyume.

Andika kinyume cha maneno haya.

11. Mwerevu _____
12. Mfupi _____
13. Juu _____
14. Mzuri _____
15. Lala _____

Sehemu ya C: Wakati.

Andika kwa wakati uliopo.

16. Walimu watacheka

17. Wananchi watamsaliamia

18. Wanyama wataenda

19. Wanafunzi watapata

20. Wazazi watauza


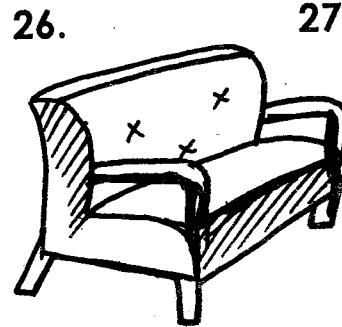
Sehemu ya D: Kukanusha.



Kanusha maneno haya.

21. aliamua _____
22. aliimba _____
23. alianza _____
24. alisinzia _____
25. alinawa _____


Sehemu ya E: Msamiati.

Andika majina ya vifaa hivi





30.



Sehemu ya F: Vitendawili
Tegua vitendawili hivi.

31. Ninacho lakini sikioni _____
32. Nameza lakini sishibi _____
33. Bubu asemaye _____
34. Mzee mwenye mishale _____
35. Natembea na nyumba yangu _____
(Nungunungu, mate, kisogo, konokono, kalamu)

Sehemu ya G: Kujaza mapengo
Jaza pengo

36. M _ _ w _ _ ng _ _
37. ang _ _
38. r _ _ d _ _
39. mv _ _
40. h _ _ w _ _

Sehemu ya H: Kukamilisha sentensi.
Kamilisha sentensi hizi.

41. Huwafunza wanafunzi _____
42. Huwatibu wagonjwa _____
43. Huendesha gari _____
44. Hupanda mimea _____
45. Hututengeneza nywele _____
(daktari, msusi, mkulima, mwalimu dereva)

Sehemu ya I: Ufahamu
Soma ufahamu kisha ujibu maswali.

Mwema huishi karibu na shule yake. Yeye huamka saa kumi na mbili asubuhi. Yeye hujitayarisha haraka haraka kwenda shuleni. Saa moja yeye hupata kiamsha kinywa na kukimbia shuleni.

46. Mwema huishi wapi? _____
47. Yeye huamka saa ngapi?
? _____
48. Yeye hujitayarisha vipi?
? _____
49. Yeye hunywa kiamsha kinywa saa ngapi? _____
50. Je, unafikiria Mwema huchelewa kwenda shule au la? _____

TARGETER WINGS EVALUATION TEST



STANDARD TWO - YEAR 2017

007

ENGLISH READING

Date:

NAME SCHOOL

Read the story aloud to the teacher.

They drank tea and ate cakes and biscuits. All the time, Matano was thinking of the difference between this beautiful house and the small house in which he lived with his parents in Kwetu Estate whose home is this? How did Mr. Matano get there? What is going to happen?

Use stop watch 1 minute per child.

Marking = correct words x 100

50

TARGETER WINGS JARIBIO LA MTIHANI



DARASA LA PILI - MWAKA 2017

007

KISWAHILI KUSOMA

Tarehe:

JINA SHULE

Soma kwa sauti.

Dakika moja kwa kila mwanafunzi.

Nilikuwa nimechelewa kuamka. Mama aliniamsha kwa fujo. Aliniambia umelala mpaka sasa tatu asubuhi. Huendi shuleni? Niliamka nikashangaa, kumbe usingizi ni kama kifo. Nilioga upesi huku moyo ukinidunda dududu! Baada ya kuoga na kuvaa sare zangu, nilichukua mkoba wangu na kukimbia kwenda shuleni Ebo! Njiani sikumwona mwanafunzi yeyote. Nilijua kwamba nimechelewa.

Kusahihisha = maneno sahihi x 100

50