

HIGH FLYER SERIES EVALUATION TEST
STANDARD TWO – YEAR 2017
MATHEMATICS



DATE:

NAME: SCHOOL:

1. $4 + 30 =$ _____
2. $47 - 23 =$ _____
3.
$$\begin{array}{r} 432 \\ +267 \\ \hline \end{array}$$
4.
$$\begin{array}{r} 283 \\ +124 \\ \hline \end{array}$$
5.
$$\begin{array}{r} 76 \\ - 7 \\ \hline \end{array}$$
6.
$$\begin{array}{r} 60 \\ - 3 \\ \hline \end{array}$$
7. 6 tens 7 ones = _____
8. $5 + 6 + 7 =$ _____
9. _____ + 6 = 15
10. How many fingers do 3 girls have?
11. _____ + 12 = 25
12. _____ - 8 = 9
13. The eighth month of the year is _____

14. Jane had 30 chicks. 10 chicks died. How many chicks were left?
15. 2 weeks have _____ days
16. 1 day = _____ hours
17. 1 hour = _____ minutes
18. Moses had 8 bananas. He ate 3 of them. How many did he remain with?
19. $16 \div 4 =$ _____
20. $18 \div 3 =$ _____
21. $15 \div 5 =$ _____
22. $415 =$ _____ + _____ + _____
23. $367 =$ _____ + _____ + _____
24. 50 = _____ tens
25. 6 bicycles have _____ wheels
26. 8 = _____ ten _____ ones
27. Take away 13 from 25 = _____

Write in words

28. 40 _____

29. 16

30. 23

31. Share 12 bananas equally among 3 girls =

32. If today is Wednesday tomorrow will be

33. $10 \times 6 =$

34. One cat and one dog have legs

35. A square has sides.

36. What is the place value of 3 in 136?

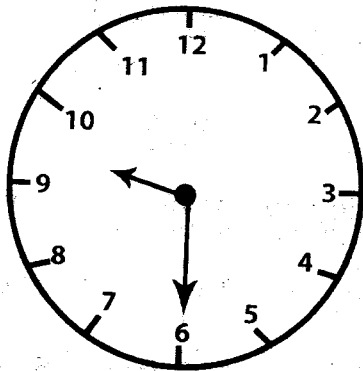
Fill in the missing numbers

37. 35, 30, 20, , 10;

38. 2, 4, 6, , 10, ,

39. Share 20 mangoes among 4 children. Each will get


40.



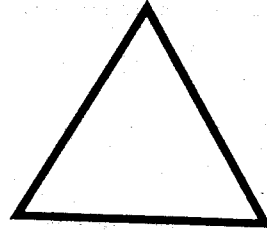
What is the time?

Name the shapes below

41.



42.



43. 50 shillings = sh. 10 coins

44. Which one holds more water?

45. $3 \times = 18$

46. $10 \times 3 =$

47. 20 shillings = five shillings coin

48. 0 hundreds 7 tens 8 ones =


Straight or zigzag

49.



50.





HIGH FLYER SERIES EVALUATION TEST
STANDARD TWO – YEAR 2017
ENGLISH: LANGUAGE

DATE:

NAME: **SCHOOL:**

Dictation

- 1.
- 2.
- 3.
- 4.
- 5.

Put 'a' or 'an'

- 6. I ate _____ egg.
- 7. The cat caught _____ mouse.
- 8. _____ elephant is a big animal.
- 9. _____ ostrich cannot fly.
- 10. He carried _____ book.

Use 'is' or 'are' to complete the following sentences

- 11. Children _____ singing together.
- 12. The cow _____ sick again.
- 13. Those animals _____ dangerous.
- 14. Eating a fruit everyday _____ good.

15. That river _____ big.

Write the past tense

- 16. Eat _____
- 17. Read _____
- 18. Wash _____
- 19. Fight _____
- 20. Sell _____

Use 'is', 'are', 'am'

- 21. I _____ in class two.
- 22. She _____ my teacher.
- 23. The woman _____ driving the lorry.
- 24. They _____ going home.
- 25. I _____ seven years old.

Write the opposite

- 26. Clean _____
- 27. Empty _____
- 28. Tall _____

29. Day

30. Clever

Add - ing

31. Look

32. Write

33. Read

34. Cook

35. Catch

Word meaning

Match a word with its meaning

36. Hungry we

wear to school

37. Milk

we ride on it

38. Uniform

we feel that way if we do not eat

39. Tears

it comes from a cow

40. Bike

they come out when we cry

Comprehension

Read the passage and answer the questions below

There was a little boy who just celebrated his birthday. His parents bought him a puppy as a birthday present. The puppy had very long ears.

One evening, he was playing with his puppy. The puppy was happily jumping about and wagging his tail. Then the little boy tried to tie the puppy's ears into a knot. The puppy stopped wagging its tail.

41. The boy had just celebrated his

42. His parents bought him a

43. The puppy had very long

44. The puppy would happily wag its

45. The boy tried to tie the puppy's

Write well

46. rlgj

47. yalp

48. nceda

49. peles

50. thoot



HIGH FLYER SERIES EVALUATION TEST
STANDARD TWO – YEAR 2017
SOCIAL STUDIES

DATE:

NAME: SCHOOL:

1. Many trees growing together make a _____.
(forest, feature, farm)


2. People walking on foot are called _____.
(motorists, pedestrians, passengers)

3. Farmers sell their crops in the _____.
(shops, school, market)


4. We get wool from _____.
(goats, cows, sheep)

5. My mother's brother is my _____.
(brother, uncle, father)

6. Long ago, people wore clothes made from _____.
(wool, skins, cotton)

7. 
These are _____.
(forests, hills, lakes)

8.



This is a picture of a _____.
(road, bridge, river)

9. The head of a location is a _____.
(Chief, elder, assistant chief)

10.A _____ directs traffic.
(driver, policeman, cyclist)

11.



This road sign shows _____ ahead.
(home, school, hospital)

12. Buses, cars and Lorries are known as _____.
(vehicles, features, furniture)

13. Trains move on _____.
(water, road, railway)



14. A bad animal is also _____
(good dangerous, helpful)

15. William helps our teacher to give out books. He is the _____
(Head teacher, monitor, boss)


16. The pupil sitting next to you is your _____ mate.
(school, class, desk)

17. A _____ sweeps the classrooms.
(messenger, watchman, cleaner)

18. The coldest month of the year is _____
(January, April, July)

19. Plains, valley and mountains are _____ features.
(man-made, physical, earthly)

20. We keep our school clean by _____ rubbish.
(hiding, burning, planting)

21. 
This shows that the weather is _____
(windy, calm, cloudy)

22. A _____ helps people to carry things.


(dog, donkey, cat)

23. Bees live in a _____
(shed, kennel, hive)

24. _____ is used to build the roof of a house.
(Mud, Iron Sheets, Papers)

25. Lack of rain for a long time causes _____
(flood, drought, wetness)

26.



This is a _____ house.
(Kikuyu, Maasai, Kamba)

27. Basic needs are _____, shelter and clothing.
(car, food, television)

28. A _____ cares for people's teeth.
(doctor, optician, dentist)

29. In school, we play games like _____
(wrestling, netball, boxing)

30. Most people who live near _____ are fishermen.
(hills, lakes, farms)





HIGH FLYER SERIES EVALUATION TEST
STANDARD TWO – YEAR 2017
CHRISTIAN RELIGIOUS EDUCATION

DATE:

NAME: SCHOOL:

1. _____ was the first woman on earth. **(Adam, Eve, Sarah)**
2. _____ is a book found in the Bible. **(Moses, David, John)**
3. Mary and Joseph lived in _____. **(Nazareth, Bethlehem, Jerusalem)**
4. The wise men were led by a _____ as they went to see baby Jesus. **(moon, sun, star)**
5. God gave us legs to _____. **(walk, kick others, step others)**
6. Moses was given the _____ Commandments. **(7, 12, 10)**
7. We should _____ those who wrong us. **(beat, hate, forgive)**
8. Who obeyed God and was ready to kill his only son? _____. **(Abraham, Moses, David)**
9. Joseph the father of Jesus worked as a _____. **(farmer, fisherman, carpenter)**
10. They _____ went to see baby Jesus. **(Kings, Angels, shepherds)**
11. We show that we are thankful to our parents by being _____. **(rude, obedient, abusive)**
12. Jesus healed ten _____. **(beggars, thieves, lepers)**
13. Our father who art in _____. **(Heaven, earth, Hell)**
14. _____ betrayed Jesus. **(Peter, John, Judas)**
15. God cares for plants by _____. **(cutting them, giving rain, uprooting them)**
16. Ruth was the daughter-in-law of _____. **(Orpha, Elizabeth, Naomi)**
17. Jesus _____ the children. **(blessed, hated, punished)**
18. Enkai is God's name for the _____. **(Kikuyu, Nandi, Maasai)**
19. _____ was the mother of John the Baptist. **(Elizabeth, Sarah, Mary Magdalene)**
20. How many God do we have? **(three, many, one)**



HIGH FLYER SERIES EVALUATION TEST

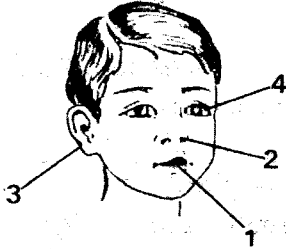
STANDARD TWO – YEAR 2017

SCIENCE

DATE:

NAME: SCHOOL:

Name the body parts



1. _____
2. _____
3. _____
4. _____


5. Without the we cannot see.
(skin, nose, eyes)
6. Jiggers are found in dirty
_____. (hair, nails, toes)
7. A _____ has no legs.
(millipede, earthworm, spider)
8. The _____ joins the head to
the body. (hands, neck, stomach)
9. We can eat the stems of _____
(cassava, sugarcane, yams)
10. Cooking makes maize _____
(sweet, soft, dry)
11. _____ is not a use of water.
(Drinking, Bathing, Modelling)
12. A rain bow has _____ colours.

(seven, ten, nine)


13. Most plants are colour _____
(yellow, green, blue)
14. When we are thirsty we drink
_____. (blood, milk, water)

Name the weather symbols shown


15.



16.

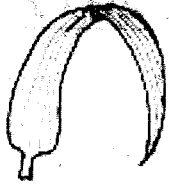


17.



18. A hen has a _____ for
feeding. (legs, mouth, beak)
19. A _____ gives us wool.
(goat, sheep, rabbit)
20. _____ are found on our feet.
(Toes, Fingers, Nails)

21. When it is raining we wear _____ . (slippers, gumboots)



22. This is a _____ leaf. (maize, bean, banana)

23. The house of a spider is called _____. (anthill, web, hole)

24. Warm water is used to wash _____. (toothbrush, handkerchief, socks)

25. Sweets spoil our _____. (hair, tongue, teeth)

26. The best soil for modelling is _____. (sand, loam, clay)

27. _____ is not a domestic animal. (Camel, Zebra, Sheep)

28. The young one of a cow is a _____. (calf, puppy, lamb)

29. We should keep our nails short and _____. (dirty, long, clean)

30. Flowers produce _____. (fruits, roots, leaves)

31. Rotten eggs smell _____. (good, nice, bad)

Match these things with their taste.

32. Lemon Sweet

33. Ripe Banana Bitter

34. Pepper Pleasant

35. Water Sour

36. _____ is not a personal item. (Handkerchief, Comb, Toothpaste)

37. Rubbish should be put in a _____. (dustpan, dustbin)

38. Water closet is another name of _____. (urinals, toilet, latrine)

39. _____ fruit has many seeds. (Pawpaw, Mango, Avocado)

40. We _____ weeds on the farm. (harvest, weed)

41. A banana plant has a _____ leaf. (small, round, big)

42. On a hot day we wear _____. (jackets, sweater, vest)

43. Umbrellas are used when the weather is _____. (cold, rainy, cloudy)

44. We keep _____ in a pond. (fish, bees, rabbits)

45. Bees give us honey and _____. (meat, milk, wax)

46. _____ is not a bird kept at home. (Hen, Ostrich, Duck)

47. A _____ does not suck our blood. (mosquito, tick, cockroach)

48. Filtering makes water _____. (clean, dirty)

49. Before eating we should _____. (wash our body, wash our hands)

50. Rollers make work _____. (hard, easier)



MSURURU WA MTHANI WA HIGH FLYER SERIES
DARASA LA PILI – MWAKA 2017
KISWAHILI: LUGHA

TAREHE:

JINA: SHULE:

Imla

1. _____
2. _____
3. _____
4. _____
5. _____

Andika kwa wingi

6. Kijiko _____
7. Chama _____
8. Mpira _____
9. Mkulima _____
10. Meza _____

Jibu maamkizi

11. Hamjambo _____
12. Pole _____
13. Hodi _____
14. Karibu kiti _____

Tumia 'na', 'li' au 'ta'


15. Jana tu _____ enda sokoni
kununua ndizi.

16. Mama a _____ pika uji wa
mtoto sasa.


17. Kesho tu _____ cheza na
marafiki zetu.

Chora picha hizi


18. Kalamu




19. Kiti



20. Kofia



21. Rinda



Andika majina ukitumia silabi hizi.




22. Sa _____

23. Me _____

24. Tu _____

25. Ku _____

Tumia 'ndani ya', 'kando ya', 'juu ya'.



26. Paka yuko _____ kiti.

27. Musa anakimbia _____
barabara.

28. Maziwa yamo _____ glasi.

29. Mjomba amesimama _____
mbwa wake.

Andika kinyume

30. Cheka _____

31. Vaa _____

32. Toka _____

33. Anua _____

Andika tarakimu hizi kwa nambari.

34. Mia moja na ishirini _____

35. Hamsini na tatu _____

36. Kumi na nane _____

Tegua vitendawili

37. Nameza lakini sishibi _____

38. Askari mlangoni _____

39. Kila niendapo anifuata _____

40. Ninacho lakini sikioni
(kivuli, mate, kisogo, kufuli)

**Tumia 'yangu', 'langu', 'wangu',
'changu', na 'kwangu'**

41. Kitabu _____ kimechomeka.

42. Mtoto _____ ni mgonjwa.

43. Jembe _____ limepotea.

44. Dada _____ alipita mtihani.

45. Tulipoenda _____ tulipata
wangueni wameketi.

Jibu ipasavyo

46. Anayefunza watoto ni _____

47. Juma moja lina siku _____

48. Siku ya tatu ya wiki ni _____

49. Kofia huvaliwa katika sehemu
gani ya mwili?

50. Ng'ombe huzaa lakini kuku
hutaga _____



HIGH FLYER SERIES EVALUATION TEST
DARASA LA PILI – MWAKA 2017
KUSOMA

TAREHE:

JINA: SHULE:

Soma maneno haya:-

- | | | |
|--------------|-------------|-------------|
| 1. Nyama | 5. Mswaki | 9. Dhambi |
| 2. Kifaranga | 6. Chora | 10. Mabonde |
| 3. Nyekundu | 7. Ndege | |
| 4. Ngamia | 8. Baiskeli | |

Soma sentensi hizi:-

11. Mama amenunua kondoo wawili.
12. Daktari amemtibu mgonjwa.
13. Kuku wetu hutaga mayai mengi.
14. Blanketi ya mtoto imeoshwa.
15. Ng'ombe yule ana maziwa mengi.

Soma kifungu hiki

Rangi za upinde ni saba. Upinde huonekana wakati ambapo kunanyesha na jua lina waka. Rangi ya juu huwa ni rangi nyekundu. Upinde ni maridadi sana.



HIGH FLYER SERIES EVALUATION TEST
STANDARD TWO – YEAR 2017
READING

DATE:

NAME: SCHOOL:

Read these words

- | | |
|-------------|--------------|
| 1. Seventy | 6. Shoulders |
| 2. Bicycles | 7. Tomorrow |
| 3. Nephew | 8. Learned |
| 4. Stomach | 9. Assembly |
| 5. Thumb | 10. Rubbish |

Read these sentences

11. She is standing in front of the classrooms.
12. What colour is that bus?
13. He spoke to the teacher at ten o'clock.
14. December is the twelfth month of the year.
15. The farmer harvested his maize last week.

Read this passage

During his birthday, his mother baked a birthday cake. She cooked nice food too. The children skipped. They jumped and danced. They sang happy birthday and clapped their hands. After the party, all the children walked home.