

Early Grade Mathematics

Class 2

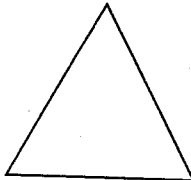
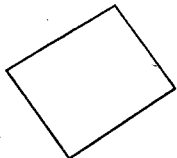

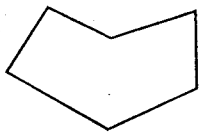
Fill in the place value chart.

		Hundreds	Tens	Ones
1.	662	_____	_____	_____
2.	422	_____	_____	_____
3.	111	_____	_____	_____
4.	112	_____	_____	_____
5.	113	_____	_____	_____
6.	221	_____	_____	_____
7.	463	_____	_____	_____

Write these numbers in words.

8. 100 _____
9. 99 _____
10. 88 _____
11. 16 _____
12. 54 _____
13. 52 _____

Write the number of sides and corners.

14.  _____ sides
_____ corners
15.  _____ sides
_____ corners
16.  _____ sides
_____ corners
17.  _____ sides
_____ corners

Write the order from the greatest.

18. 221, 42, 52, 69, 23

19. 100, 200, 150, 160, 120

20. 99, 88, 77, 66, 44, 54, 34, 24

Fill in the missing number.

21. $48 + 10 = 49 + \underline{\quad}$
22. $62 + \underline{\quad} = 72 + 20$
23. $64 + 10 = 70 + \underline{\quad}$

24. $0 + 10 = 9 + \underline{\quad}$

25. $92 + 2 = 93 + \underline{\quad}$

26. $99 + 4 = 100 + \underline{\quad}$

Divide

27. $4 \div 2 = \underline{\quad}$

28. $4 \div 1 = \underline{\quad}$

29. $20 \div 20 = \underline{\quad}$

30. $10 \div 5 = \underline{\quad}$

31. $10 \div 2 = \underline{\quad}$

32. $16 \div 8 = \underline{\quad}$

Work out.

33.
$$\begin{array}{r} 99 \\ + 27 \\ \hline \end{array}$$

34.
$$\begin{array}{r} 64 \\ + 22 \\ \hline \end{array}$$

35.
$$\begin{array}{r} 39 \\ + 22 \\ \hline \end{array}$$

36.
$$\begin{array}{r} 100 \\ + 10 \\ \hline \end{array}$$

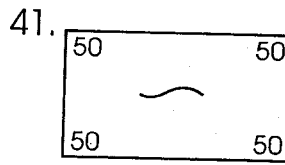
37.
$$\begin{array}{r} 101 \\ + 22 \\ \hline \end{array}$$

38. $50 - 40 = \underline{\quad}$

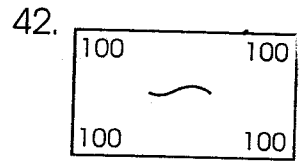
39. $140 - 60 = \underline{\quad}$

40. $100 - 50 = \underline{\quad}$


Write the value.



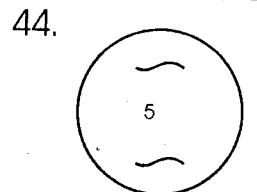
Sh.



Sh.



Sh.



Sh.

Write the missing numbers.

45. 160, 161, 162, , , 165, 166

46. 150, 155, 160, , ,

47. Mary had sh. 150 in the bank. Her husband added sh. 90 in the bank. How much money does Mary have now? Sh.

Write the numbers that come before and after.

48. , 153,

49. , 150,

Circle the taller one.

50.

A



B





imamH roltf sht anelo



Tusome Early Literacy Programme

Class 2

Term 2	End Term
---------------	-----------------

English Test

Name: _____

School: _____ Class: _____

Part A: Dictation.

Write the words as the teacher says them.

1. _____
2. _____
3. _____
4. _____
5. _____
6. _____
7. _____
8. _____
9. _____
10. _____

Part B: Write words that have letter 'ew' at the end.

Example: New

11. _____
12. _____
13. _____
14. _____
15. _____

Part C: Write the following sentences correctly.

16. plant trees wants Brenda to.
- _____
- _____



17. _____ cleans the floor Naomi.

18. _____ will how to go dad town?

19. _____ comes home janet by school from bus.

20. _____ bike Mike a to ride likes.

Part E: Use the words in the box to fill in the blanks.

snores drink dress
light dig

21. Jane wears a _____.

22. My father _____ when he sleeps.

23. I _____ the farm.

24. We _____ when we are thirsty.

25. We need _____ to see.

Part F: Read the story and answer the questions.

Ongonya falls in a hole. He now has a dirty bag. His books are also torn. When Ongonya gets home, he says, "Look father, I tore my books." His father tells him to clean the bag then he mends the books. Ongonya is happy.

26. Who falls in a hole?

27. What happens to Ongonya's books?

28. What does Ongonya tell his father?

29. Who mends the books?

30. Who is happy?

Tusome Early Literacy Programme

Darasa la 2

Muhula wa 2

Mwisho wa Muhula

Jaribio la Kiswahili

Jina: _____

Shule: _____ Darasa: _____

Sehemu ya A: Imla.

1. _____
2. _____
3. _____
4. _____
5. _____

Sehemu ya B: Kanusha sentensi.

6. Nilienda shuleni

7. Nilinunua sukari

8. Niliuza makaa

9. Niliosha vyombo

10. Nilicheza mpira
siku cheza mpira.

Sehemu ya C: Tegua vitendawili hivi. kivuli, yai, shoka, ngoma, njia/ barabara

11. Mwanangu analia mwituni _____
12. Kamba ndefu lakini haifungi kuni

13. Mwanangu akilia watu hucheza

14. Nyumba yangu haina mlango

15. Popote niendapo hunifuata

Sehemu ya D: Chora maumbo haya.

16. Pembe tatu	
17. Duara dufu	
18. Mstatili	

19. Mraba	
20. Duara	

Sehemu ya E: Silabi

Panga silabi kuunda maneno sahihi

Mfano: fuharu-furaha

21. lakucha _____.
22. fucha _____.
23. tuaki _____.
24. sarada _____.
25. simchana _____.

Sehemu ya F: Jaza mapengo.

Tumia maneno haya kujaza mapengo.

Mwalimu, Mpishi, Mkulima, Polisi, Dereva

26. _____ alipika chakula.
27. _____ alimshika mwizi.
28. _____ alifundisha wanafunzi.
29. _____ aliendesha gari.
30. _____ alilima shamba.

Sehemu ya G: Kanusha maneno yafuatayo.

31. _____ usicheze.
32. lima _____
33. _____ usilinde.
34. angalia _____
35. _____ Usilime.

Sehemu ya H: Akifisha sentensi hizi.

36. juma amekuja shuleni.

_____.

37. Mwalimu anataka nini

_____.

38. baba amepika chakula

_____.

39. wewe ni nani

_____.

40. alimwita saumu.

Sehemu ya I: Endelea kuandika majina ya miezi.

Januari	Februari	41. _____
Aprili	42. ____	Juni
43. _____	Agosti	44. _____
45. _____	Novemba	46. _____

Sehemu ya J: Ufahamu

Soma hadithi kisha ujibu maswali.

Jana wanafunzi wa darasa la pili walitembelea shule ya Arata. Walikutana na wanafunzi wasioweza kuongea. Waliwasiliana nao kwa kutumia lugha ya ishara. Walicheza mpira wa vikapu na wote wakafurahi sana.

Maswali.

47. Wanafunzi wa darasa la _____ walitembelea shule gani
48. _____.
49. Waliwasiliana vipi na wanafunzi wa shule ya Arata _____
50. Walicheza mpira wa aina gani



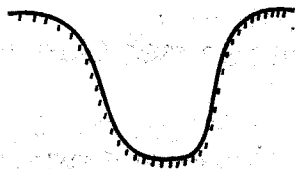
006

NAME SCHOOL DATE.....

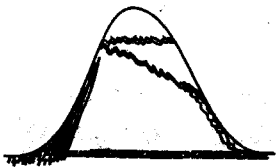
SOCIAL STUDIES

1. The sun sets in the _____.
(**North, East, West**)
2. A group of people living together is called a _____.
(**school, clan, community**)
3. _____ are people who grows crops and keep animals
(**Maasai, Farmers, Traders**)
4. Food, clothes and shelter are called _____ needs.
(**children, basic, school**)
5. The green colour in our flag stands for _____. (**land, people, vegetable**)

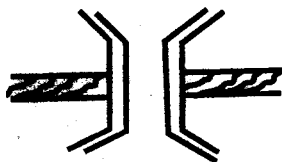
Name the drawn features.



6. _____




7. _____



8. _____

9. The best day to wear a pullover is on a _____ day (**cold, calm, sunny**)
10. Many trees growing together forms a _____. (**lake, forest, farm**)

11. A _____ family has father, mother and children.
(**nuclear, single, extended**)
12. The roof of a traditional hut is made using :- (**stones, grass, mud**)
13. Heavy clouds on the sky may bring _____. (**sun, drought, rain**)
14. We get uniforms from _____.
(**parents, government, teachers**)
15. Office where teachers sit is called :-
(**staffroom, kitchen, class**)
16. The green light on the traffic light means:- (**go, stop, get ready**)
17. The road sign means :-



(**no entry, crossroad, airport**)


18. Our national flag has _____ colours.
(**4, 3, 5**)
19. The quickest means of travelling is by _____.
(**road, air, water**)
20. The traditional Maasai house is called :- (**Manyatta, Thingira, Ot**)
21. The head of a location is called :-
(**sub-chief, elder, chief**)

22. _____ was a game which was played long time ago.
(**Wrestling, Tennis, Basketball**)
23. When singing the national anthem we should :- (**sit, run, stand**)
24. People who come to see wild animals and other attractions are called:- (**visitors, poachers, tourists**)
25. The smallest administrative unit is a:-
(**location, village, division**)
26. We go to school to :-
(**play, pray, learn**)
27. Animals kept at home are called:-
(**wild, domestic, bush**)
28. A bicycle has _____ wheels. (**2, 6, 4**)
29. Which one is a cash crop ?
(**Potato, Maize, Tea**)
30. A family where one parent is missing is called _____ family.
(**nuclear, single, extended**)
- C. R. E**
31. God created everything in _____ days. (**4, 6, 7**)
32. Jacob was the younger son of _____.
(**John, Eli, Isaac**)
33. The kings of Egypt were called:-
(**Herods, Pharaohs, Jews**)
34. Jesus stayed in the grave for _____ days. (**2, 3, 4**)
35. Joseph had _____ brothers.
(**11, 10, 12**)
36. Jesus healed _____ lepers.
(**10, 12, 9**)
37. _____ delivered the children of Israel from Egypt. (**Joshua, Moses, Jesus**)
38. Who said "I will make you fishers of men"? (**Moses, Elijah, Jesus**)
39. Jeremiah and Amos were _____
(**messengers, disciples, prophets**)
40. Jesus was baptised in river :-
(**Tana, Athi, Jordan**)
41. Jesus performed his miracle in _____
(**Bethlehem, Cana, Jerusalem**)
42. The Akamba call their God _____
(**Ngai, Were, Mulungu**)
43. _____ was swallowed by a big fish. (**Peter, Job, Jonah**)
44. The first book in the New Testament is called _____
(**Genesis, Mathew, Luke**)
45. Prophet _____ was fed by ravens.
(**Elijah, Elisha, Moses**)
46. _____ was given the ten commandments.
(**Joshua, Noah, Moses**)
47. Emmanuel means _____
(**saviour, redeemer, God with us**)
48. Jesus' earthly father was a _____.
(**farmer, carpenter, trader**)
49. The Bible has _____ books.
(**66, 39, 69**)
50. When you wrong someone you say _____
(**sorry, excuse me, good**)













NAME SCHOOL DATE

SCIENCE

- A bird has _____ legs.
(4, 2, 3)
- Which food is bad for our teeth.
(carrot, cabbage, sweets)
- We use _____ to see.
(ears, eyes, nose)
- We should clean our nose using a
(handkerchief, paper, leaf)
- Dirty hair has
(jiggers, lice, cockroach)
- The weather is _____ 
(rainy, windy, cloudy)
- A _____ is a big animal.
(rat, elephant, mice)
- Domestic animals live in the

(forest, farm, home)
- We should keep our nails _____
(long, clean, dirty)
- Which animal gives us milk. _____
(cow, sheep, donkey)

Use the weather chart below to answer question 11 - 14.


Days	Morning	Afternoon
Monday		
Tuesday		
Wednesday		
Thursday		
Friday		

- On which two days did the children carry umbrellas in the morning _____
(Monday and Tuesday, Tuesday and Friday, Tuesday and Thursday)
- On which day was it windy in the afternoon _____
(Tuesday, Wednesday, Friday)
- On which day was it sunny throughout the day. _____
(Thursday, Monday, Tuesday)
- On which day was it raining in the afternoon. _____
(Friday, Thursday, Monday)
- We eat the _____ of a cabbage. (roots, fruits, leaves)
- I use _____ to walk.
(hands, legs, fingers)
- Hair is found on the _____.
(head, stomach, legs)
- The area between the head and the shoulder is called _____
(hair, neck, hand)
- The _____ are used to hear.
(eyes, ears, nose)
- A _____ is an example of a vegetable. (kales, mangoes, maize)
- A hen gives us _____
(eggs, milk, skin)
- We should _____ food before swallowing.
(chew, crush, spit)

23. Meat from a cow is called _____
(pork, bacon, beef)
24. Most plants are _____ in colour.
(brown, green, yellow)
25. Trees gives us _____
(shade, honey, milk)
26. Which small animal makes honey

(wasp, cockroach, bee)
27. Malaria is spread by _____
(mosquito, bees, butterfly)

Name the parts of the bird shown below.



(feathers, beak, eyes, legs)

31. Which part of a plant is found in the soil _____
(leaf, roots, stem)
32. A _____ guards our house against thieves. (cat, donkey, dog)
33. A _____ is not a source of water. (pipe, river, dam)
34. The best soil for growing crops is _____
(sand, loam, clay)
35. Drinking water should be _____ before drinking.
(sieved, boiled, filtered)
36. Which is the best shape of making a wheel.
(round, square, triangular)
37. We should wear heavy clothes when its _____
(hot, sunny, cold)
38. Teeth should be brushed _____


- every meal. (after, before, during)
39. Fish moves by _____
(walking, swimming, running)
40. A _____ eats meat.
(cow, goat, dog)
41. We should wash our bodies with soap and _____
(water, oil, ink)
42. A pawpaw has _____ seeds.
(no, one, many)

43.



This is the leaf of a _____ plant.
(bean, maize, orange)

44.



This is a _____
(earthworm, snake, lizard)

45. We can fly kites when its _____
(rainy, cloudy, windy)
46. Our bodies are full of _____
(air, oil, blood)
47. We should not play with _____
(kites, fire, balls)
48. I have _____ nose. (2, 1, 0)
49. _____ people cannot hear.
(blind, dumb, deaf)
50. I have _____ fingers. (4, 10, 5)



Tusome Early Literacy Programme Class 2

Term 2

End Term

English Reading Test

Read the story.

There is an old dog in our school. It is a huge dog. The children like to play with it. Today something is wrong. The dog will not jump. It will not run. Teacher says, "Let us call the vet. It may be sick." The vet says, "This dog is not sick. It is old."

Muhula wa 2

Mwisho wa Muhula

Jaribio la Kiswahili: Kusoma

Soma sentensi zifuatazo.

1. Homa ya matumbo yahitaji matibabu.
2. Katiba yapinga dhuluma ya watoto.
3. Tarakilishi na rununu hurahisisha mawasiliano.
4. Flamingo na Bata bukini ni ndege wa msituni.

Soma hadithi fupi ifuatayo.

Kuajiriwa kama seremala ni kazi nzuri. Utatumia viganja vyako kufanya kazi. Kazi hii inahitaji uvumilivu. Baada ya kazi hii jipe lishe bora.