



SOLUTION TRIAL EXAMS 2017

Standard Two



NAME SCHOOL DATE

MATHS

Write in words.

1. 908 -
2. 107 -
3. $5 + 5 + 5 + 5 = 5 \times 5 =$ _____
4. Which number comes before 50?

5.
$$\begin{array}{r} 945 \\ + 204 \\ \hline \end{array}$$

Fill in the next numbers.

6. 32, 34, 36, 38, _____
7. 100, 200, 300, 400, _____
8. What is the place value of 6 in 69?

9. Write ninety four in symbols _____

10. $\square + 16 = 20$ 11. $10 - \square = 6$

12. $3 + 5 + 6 =$ 13.
$$\begin{array}{r} 35 \\ + 47 \\ \hline \end{array}$$

14.
$$\begin{array}{r} 71 \\ + 68 \\ \hline \end{array}$$

15. Wanja had 60 marbles. 10 of them got lost on her way home. How many marbles was she left with?

16. $8 \overline{)64}$ 17. $6 \times 5 =$ _____

18.
$$\begin{array}{r} 419 \\ - 315 \\ \hline \end{array}$$

19. 649 = _____ hundreds _____ tens _____ ones

20. $\square - 8 = 14$ 21. $18 + \square = 26$

22.
$$\begin{array}{r} 957 \\ - 53 \\ \hline \end{array}$$
 23.
$$\begin{array}{r} \square \\ - 7 \\ \hline 18 \end{array}$$

Arrange from the biggest to the smallest.

24. 84, 106, 65, 23, 368


25. 25, 75, 45, 55, 150

Work out.

26.
$$\begin{array}{r} 2 \\ \times 3 \\ \hline \end{array}$$

27. $5 \times \square = 25$

28.
$$\begin{array}{r} 4 \\ \times 4 \\ \hline \end{array}$$

29.  = $\underline{\quad}$ x $\underline{\quad}$ = $\underline{\quad}$

30.
$$\begin{array}{r} 10 \\ \times 3 \\ \hline \end{array}$$

31. $5 \overline{)20}$

32. There are 20 pupils in class 2. If 8 of them are girls, how many are boys?


33. 6 girls had 10 sweets each. How many sweets did they have altogether? _____

34. $3 \overline{)9}$

35. 4 pupils shared 8 books equally. How many books did each get?

36.
$$\begin{array}{r} 16 \\ \times 23 \\ \hline \end{array}$$

37. Which cup holds more water **A** or **B**? _____



38. $3 \overline{)12}$

39. $8 \times 10 =$

40. $3 - \square = 5$

41. $\square - 5 = 25$

42. 6 cows have _____ legs.

43. Take away 7 from 30 _____

44.
$$\begin{array}{r} 355 \\ -146 \\ \hline \end{array}$$

45. 18 oranges were shared equally among 6 children. How many mangoes did each get?

46. $32 =$ _____ hundreds _____ tens _____ ones

47. $7 + 7 + 7 =$ _____

48. One week has _____ days.

Fill in the missing numbers.

49. 29, _____, _____, 32, 33, _____, 35

50. 45, _____, _____, 48, _____, _____, 51

25. - sheep

26. classroom -

27. tooth -

28. - oxen

Write in small or capital letters.

29. meeting -

30. visitors -

31. ORANGES -

32. HURRY -

Write doing words from the following words.


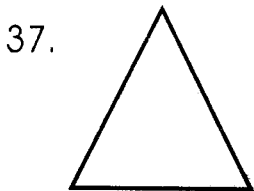
33. make -

34. dig -

35. cycle -

36. fetch -

Name the shape.



39. 

Join the words with those in brackets to make one word.

40. head _____

41. match _____

42. black _____

43. tooth _____

(board, teacher, box, brush)

Use 'to' 'two' or 'too'.

44. The tea is _____ hot to drink.

45. The children are going _____ the river.

46. Munyi has _____ cars.

Complete these sentences.

47. A person who flies an aeroplane is called a _____.

48. A person who makes and repairs clothes is called a _____.

49. My name is _____.

50. My classteacher is _____.



JAWABU LA MAJARIBIO 2017
Darasa la Pili

JINA SHULE TAREHE

KISWAHILI

Imla.

1. _____
2. _____
3. _____
4. _____
5. _____

Jaza pengo kwa hurefi zifaazo.

6. m ___ dakt ___ r ___
7. m ___ l ___ m ___
8. s ___
9. p ___ s ___
10. mk ___

Andika vizuri.

11. sook -
12. jim -
13. bokoki -
14. mbaash -

Andika kinyume.

15. asubuhi -
16. tamu -
17. mrefu -
18. penda -

Andika sentensi hizi kwa wingi.

19. Kikombe kimevunjika.

20. Kiti kimeoshwa.

21. Mtoto analia

Kamilisha methali.


22. Haba na haba hujaza _____.
23. Dalili ya mvua ni _____.
24. Mtoto akililia wembe _____.

Andika kwa maneno au nambari.

25. 48 _____
26. Mia moja na kumi _____
27. Themanini na nane _____

28. Hamsini na tatu _____


Andika majina ya picha.

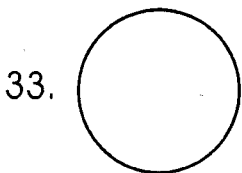






Andika majina ya maumbo.







Andika kwa herufi kubwa au udogo.

35. MNAZI -

36. seremala -

37. pendwa -

38. KELBU -

Kamilisha vitendawili

39. Kila niendapo hunifuata _____.

40. Mlima sipandi _____.

41. Kamba yangu ndefu lakini haifungi kuni _____.

Tumia 'hiki' 'hivi' 'huyu' 'hizi' au 'hawa'.

42. Mkulima _____ analima shamba.

43. Nguo _____ ni zangu.

44. Viatu _____ vina kamba ndefu.

45. Kiberiti _____ ni cha mama.

Andika kwa wingi au umoja.

Umoja

Wingi

46. dawati - _____

47. _____ - mishipi

48. nyumba - _____

Kamilisha sentensi.

49. Jina langu ni _____.

50. Nina miaka _____.



SOLUTION TRIAL EXAMS 2017

Standard Two



NAME SCHOOL DATE

SCIENCE

1. I have _____ noses to smell.
(2, 0, 1)

2. _____ smells good.
(Perfume, Rotten egg, Rubbish)

3. Which fruit tastes bitter?
(Bananas, Mangoes, Lemon)

4. This is a sense organ for _____.



(sight, hearing, taste)

5. Things that are far look _____.
(big, large, small)

6. We should brush our teeth _____ every meal.
(during, after, before)

7. The weather is _____.



(cloudy, calm, rainy)

8. _____ are worn on the feet.
(Socks, Ties, Gloves)

9. The dirt found in our ears is called _____.
(mucus, saliva, wax)

10. We should dry our bodies using a _____.
(bedsheet, sack, towel)

11. This is a _____.



(cabbage, carrot, cassava)

12. Most trees are _____ in colour.
(brown, yellow, green)

13. We eat the _____ of a sugarcane.
(leaves, stem, roots)

14. We sweep our classroom using a _____.
(broom, dustbin, brush)

15. People with poor eyesight wear _____.
(goggles, shades, spectacles)

16. Toes are found in _____.
(hands, legs, fingers)

17. The house of a spider is called a _____.
(kennel, nest, web)

18. Which of these is a small animal?
_____. (Elephant, Rat, Buffalo)

19. Bees make _____.
(milk, water, honey)

20. We clean our nose using a _____.
(blanket, paperbag, handkerchief)

21. The _____ is the sense organ for touch.
(skin, finger, tongue)

22. Dirty feet carry _____.
(lice, jiggers, mosquitoes)

23. People who cannot see are called _____.
(blind, deaf, dumb)

24. We pass urine and faeces in a _____.
(hole, toilet, house)

25. Seeds need _____ to germinate.
(fin, water, leaves)

26. A young plant is called a _____.
(seed, fruit, seedling)

27. Which of these is a fruit?
(Cabbage, Avocado, Kale)

28. This is a _____ leaf.



(broad, long, tall)

29. Unwanted plants in the farm are called _____.
(leaves, weeds, trees)

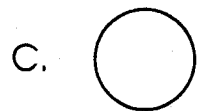
30. A _____ is an animal kept at home.
(cat, lion, bat)

31. Cows give us milk and _____.
(honey, eggs, skin)

32. I have _____ toes. (5, 10, 6)

33. Which small animal causes malaria?
(Bee, Butterfly, Mosquito)

34. Which type of wheel will move easily? _____



35. We can play with kites during _____ weather.
(cold, windy, rainy)

36. _____ clouds bring a lot of rain.
(Bright, Dark, White)

37. The animal shown below _____ in water.



(runs, swims, walk)

38. We get water to drink from _____.
(buckets, forests, rivers)

39. Germs cause _____.
(happiness, diseases, joy)

40. The fruit shown below is a _____.



(guava, mango, pineapple)

41. Cows, goats and sheep have _____ legs. (4, 6, 2)

42. Every home must have a _____.
(newspaper, toilet, tv)

43. We boil water to kill _____.
(dust, diseases, germs)

44. We should not share _____.
(toys, books, combs)

45. We do not need _____ when cleaning our classrooms.
(a toothbrush, a broom, soap)

46. We should _____ fruits before cutting.
(wash, cut, cook)

47. The weather is _____.



(cold, windy, calm)

48. This is a _____.



(brush, broom, branch)

49. Dirty hair keep _____.
(jiggers, mites, lice)

50. A _____ is not a pet.
(goat, cat, dog)



SOLUTION TRIAL EXAMS 2017

Standard Two

NAME SCHOOL DATE

SOCIAL STUDIES

1. Which of these rooms is not found in school?
(Office, Toilet, Bedroom)

2. A path that vehicles move on is called a _____
(river, road, valley)


3. The head of a school is the _____
(headmaster, chief, prefect)

4. _____ blows away roof tops.
(Rain, Wind, Cloud)

5. We carry umbrellas when the weather is _____
(calm, cloudy, rainy)

6. The best time for washing clothes is during _____ weather.
(sunny, rainy, cloudy)

7. The figure shown below shows _____



(valleys, hills, rivers)

8. A place where pupils read and write is called a _____
(classroom, toilet, field)

9. This is a _____



(balloon, kite, string)

10. Which is not a subject learnt in school?
(Cooking, English, Mathematics)

11. Our national flag has _____ colours. **(4, 6, 3)**

12. _____ is an example of a game played in school.
(Football, Fighting, Hide and seek)

13. _____ make our compound beautiful. **(Trees, Dust, Papers)**

14. We should _____ school rules.
(ignore, disobey, obey)

15. _____ is worn when going to school.
(Jeans, Raincoat, Uniform)

16. We sweep our compound using a _____. **(hands, ruler, broom)**

17. Every child has a right to _____.
(steal, fight, education)

18. During the rainy season, we wear _____ clothes.
(light, bright, heavy)

19. Which item is not found in a classroom?
(Rubber, Plate, Textbook)

20. _____ toilets keep flies.
(Clean, Dirty, Nice)

21. We should not play with _____.
(ropes, balls, knives)

22. Children with dirty uniform look _____ . **(clean, untidy, smart)**
23. We should _____ school property. **(break, steal, clean)**
24. Teachers write on _____ using chalk. **(books, boards, desks)**
25. We should put rubbish in _____ **(sacks, desks, dustbins)**
26. People who walk on foot along the road are called _____ **(pedestrians, motorists, cyclists)**
27. Animals kept for meat are called _____ animals. **(meat, beef, dairy)**
28. Many trees growing together are called a _____ **(farm, bush, forest)**
29. Too much rain causes _____ **(drought, famine, floods)**
30. A place where crops such as maize, beans and fruits are grown is called a _____ **(compound, school, shamba)**

C.R.E

31. Jesus had _____ disciples. **(6, 12, 3)**
32. Mother, father, aunt, uncle, grandfather are my _____ **(relatives, parents, neighbours)**
33. _____ created the world in 6 days. **(Satan, God, Man)**
34. Children are a _____ from God. **(curse, burden, gift)**

35. People living together should _____ one another. **(beat, abuse, respect)**
36. _____ was the son of God. **(Philip, Jesus, Simon)**
37. _____ walked on water. **(Peter, John, James)**
38. Moses saw a burning _____ **(charcoal, bush, mountain)**
39. The father of Isaac was called _____ **(Zechariah, Solomon, Abraham)**
40. Jesus grew up in a town called _____ **(Bethlehem, Jerusalem, Nazareth)**
41. We remember the death of Jesus during _____ **(Christmas, advert, Good friday)**
42. A _____ is the word of God. **(novel, Bible, textbook)**
43. The Maasai call their God _____ **(Enkai, Mulungu, Nyasaye)**
44. The first people to see baby Jesus were the _____ **(Pharisees, wisemen, shepherds)**
45. God made _____ to give us light at night. **(clouds, stars, sun)**
46. God is happy when we _____ our parents. **(beat, obey, ignore)**
47. Jesus healed _____ lepers. **(6, 5, 10)**
48. The first book of the Bible is _____ **(Exodus, Genesis, Matthew)**
49. _____ betrayed Jesus for 30 silver coins. **(Peter, Judas, James)**
50. God created _____ and placed them in water. **(cows, birds, crocodiles)**



SOLUTION TRIAL EXAMS 2017

Standard Two



NAME SCHOOL DATE

READING

Read these words:

- | | | | |
|-------------|------------|------------|------------|
| 1. hide | 6. orange | 11. arrive | 16. school |
| 2. shoe | 7. singing | 12. packet | 17. lock |
| 3. glasses | 8. short | 13. wall | 18. small |
| 4. compound | 9. ring | 14. help | 19. these |
| 5. friend | 10. head | 15. soil | 20. walk |

Read these sentences:

21. I have finished my work.
22. Trees are growing tall.
23. They are talking to the teachers.
24. Why are you late?
25. Wash your face.

KUSOMA

Soma maneno haya:

- | | | | |
|-------------|------------|--------------|------------|
| 1. pete | 6. buluu | 11. andika | 16. mimea |
| 2. katakata | 7. nje | 12. seredani | 17. rinda |
| 3. papai | 8. majengo | 13. chupa | 18. haraka |
| 4. ukuta | 9. panga | 14. kesho | 19. vyoo |
| 5. mkulima | 10. yaya | 15. msumeno | 20. chuma |

Soma sentensi hizi:

21. Mkate umenunuliwa.
22. Ukucha umekatika.
23. Wanafunzi wanasoma vitabu.
24. Lango hili limepakwa rangi nzuri.
25. Mtoto ameketi kitini.