

TARGETER WINGS EVALUATION TEST

STANDARD TWO - YEAR 2017

MATHEMATICS

003



Date:

NAME SCHOOL

1. $4 + \square = 10$

2. 2 tens + 3 ones =

3. $37 = \underline{\quad}$ tens $\underline{\quad}$ ones.

4. $143 = \underline{\quad}$ hundreds $\underline{\quad}$ tens
 $\underline{\quad}$ ones.

5. $\square + 6 = 14$

6. $12 - 7 =$

7. $7 \times 10 =$

8. Which number is bigger
18 or 78? $\underline{\quad}$

9.
$$\begin{array}{r} 64 \\ +24 \\ \hline \end{array}$$

10.
$$\begin{array}{r} 13 \\ +16 \\ \hline \end{array}$$

11.
$$\begin{array}{r} 69 \\ -32 \\ \hline \end{array}$$

12.
$$\begin{array}{r} 78 \\ -41 \\ \hline \end{array}$$

13.
$$\begin{array}{r} 136 \\ +47 \\ \hline \end{array}$$

14.
$$\begin{array}{r} 206 \\ +144 \\ \hline \end{array}$$

15. 90, 80, $\underline{\quad}$, $\underline{\quad}$, 50

16. $19 - 12 =$

17. $17 - 7 =$

18. $\underline{\quad} = 3 \text{ tens} + 8 \text{ ones}$

Write in words or figure.

19. One hundred $\underline{\hspace{2cm}}$

20. Sixty two $\underline{\hspace{2cm}}$

21. 52 $\underline{\hspace{2cm}}$

22. 84 $\underline{\hspace{2cm}}$

23. $29 - 23 =$

24.
$$\begin{array}{r} 93 \\ -60 \\ \hline \end{array}$$

25.
$$\begin{array}{r} 59 \\ -16 \\ \hline \end{array}$$

Arrange from smallest to the biggest

26. 6, 4, 8, 3, 5 $\underline{\hspace{2cm}}$

27. $50 + 10 =$

28. Seven hens have $\underline{\quad}$ legs.

Fill in the missing numbers.

29. 73, $\underline{\quad}$, $\underline{\quad}$, 71, 70, 69, $\underline{\quad}$

30. This is a $\underline{\quad}$ line.

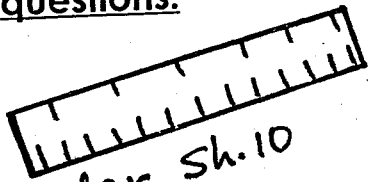


(straight, wavy, zigzag)

31. Draw an oval shape.

32. $30 + 4 =$

Use the shopping list to answer questions.



Ruler Sh.10



book Sh.20



rubber Sh.5



Orange Sh.5

33. How much is a rubber and a book? _____
sh _____ + _____ = sh. _____

34. How much is a ruler and an orange? _____

35. How much is a book and a ruler? _____


36. Omega had 16 pencils. His father gave him 20 more. How many pencils did he have altogether? _____

37. There are _____ months in a year.

38. Which number comes after 99?

39. Take away 7 from 15?

40.



The time is _____ o'clock.

41. A ruler has a _____ shape.
(circle, triangle, rectangle)

42. $6 + 8 + 4 =$

43. There are 48 pupils in a class. 7 are absent. How many pupils are present? _____

44. We can draw circles using a _____
(ruler, coin, stick)

45. _____ is the fourth day of the week.
(Sunday, Monday, Wednesday)

46.
$$\begin{array}{r} 179 \\ + 24 \\ \hline \end{array}$$

47. $6 + 5 + 3 =$

48. Three ducks have _____ beaks

49. $12 + 0 =$

50. Arrange from the biggest to the smallest
8, 17, 23, 9, 5, 11

TARGETER WINGS JARIBIO LA MTHANI



DARASA LA PILI - MWAKA 2017

003

KISWAHILI

Tarehe:

JINA SHULE

Sehemu ya A:

Imla

Andika maneno nitakayoyasema.

1. _____
2. _____
3. _____
4. _____
5. _____
6. _____
7. _____
8. _____
9. _____
10. _____

Sehemu ya B: Kuandika wingi.

Andika wingi wa sentensi zifuatazo.

11. Bata huyu ni mzuri.

12. Ndege huyu ni mnono.

13. Twiga huyu ni mrefu.

14. Simba huyu ni mkali.

15. Kondoo huyu ni mnono.

Sehemu ya C: Kukanusha sentensi
Kanusha sentensi zifuatazo.

16. Mwanafunzi anaandika.

17. Mwalimu alifunza.

18. Njoo hapa.

19. Mama atafua nguo.

20. Mtoto anakimbia.

Sehemu ya D: Kinyume

Andika kinyume cha maneno haya.

21. Fungua _____
22. Vaa _____
23. Uza _____
24. Rahisi _____
25. Nyepesi _____


Sehemu ya E: Msamiati

Jaza mapengo ukitumia silabi
uliyopewa.

26.  Ta _____ lo (u, si)

27.  So ___ si (k, pu)

28.  M ___ ki (ku, swa)

29.  Ki ___ na (ja, cha)

30.  Ki ___ tu (a, ji)

Sehemu ya F: Wakati

Andika sentensi hizi kwa wakati uliopo.

31. Mimi nitalia _____

32. Koki atasema _____

33. Ayoo atakuja _____

34. Wamiti atahukumiwa _____

35. Njoki ataona kitunguu _____

Sehemu ya G: Kujaza mapengo


Tumia kando ya, juu ya, chini ya, ndani ya kujaza mapengo

36.




Maziwa yamo _____ chupa.

37.



Mpira uko _____ meza.

38.



Paka yuko _____ meza.

39.



Kaka yuko _____ mto.

40.



Kiti kiko _____ mti.

Sehemu ya H: Kujaza mapengo.

Tumia huu, hii, hili, hizi, hiki, huyu au hivi kujaza mapengo.

41. Mtoto _____ analia.

42. Kiti _____ kimevunjika.

43. Jino _____ linauma.

44. Vitabu _____ vimeraruka.

45. Nyumba _____ zitauzwa.

46. Mmea _____ umakauka.

Sehemu ya I: Ufahamu

Soma ufahamu kisha ujibu maswali.

Baba yangu ni mkulima hodari. Baba yangu anataka kupanda mahindi shambani. Kwanza atafyeka nyasi akitumia kifyekeo halafu atalima akitumia jembe au trekta. Atapanda mbegu za mahindi na kunyunyizia maji. Baada ya muda, baba atapalilia mahindi yake. Mwishowe baba atavuna mahindi na kuyauza sokoni.

47. Baba yangu anafanya kazi gani? _____

48. Baba anatumia nini kufyeka? _____

49. Baba hutumia nini kulima? _____

50. Baba huyauza mahindi yake wapi? _____

TARGETER WINGS EVALUATION TEST

STANDARD TWO - YEAR 2017

SCIENCE



003

Date:

NAME SCHOOL

1. We have _____ senses.
(six, five, two)
2. The sense organ that covers our body is _____.
(scales, fur, skin)
3. The nose is used to smell and _____.
(taste, breathe, feel)
4. A ripe banana smells _____



- (good, bad)
5. We know the shape of things by using our sense of _____.
(taste, touch, sight)
 6. Ripe tomatoes are in _____ colour.
(red, green, yellow)
 7. We eat the _____ of sukumawiki.
(stem, root, leaf)
 8. _____ is found on the face.
(Nose, Toes, Knees)
 9. _____ is a sensory organ.
(An eye, A head, A hand)
 10. We cut our fingernails short by using a _____.
(knife, nail cutter, sharpener)
 11. We dry our hands with a _____.
(rug, duster, towel)

12. We hold umbrellas over our heads when it is _____




- (cold, rainy, cloudy)
13. We use a _____ to sweep our classroom.
(broom, duster, dustbin)
 14. Rain comes from the _____.
(soil, air, clouds)
 15. _____ gives us eggs and meat.
(Chicken, Cow, Camel)
 16. If we eat dirty food we can get _____.
(dirty, sick, well)
 17. A leaf can be rough or _____.
(sweet, weak, smooth)
 18. The ears are the sense organs for _____.
(smelling, hearing, tasting)
 19. A camel carries loads and _____.
(cars, lorries, people)
 20. A maize cob is _____.
(rough, smooth)
 21. _____ plant has bigger leaves.
(Bean, Banana, potato)
 22. Young plants are called _____.
(seedlings, planting, thorns)
 23. It is always good to put rubbish in a _____.
(toilet, dustbin, kitchen)

24. Keeping ourselves and our surroundings clean is called _____
(discipline, weather, hygiene)
25. Removing soap using clean water when washing is called _____
(rinsing, drying, hanging)
26. We should keep our _____ and toilets clean.
(latrines, bushes)
27. Blood is _____ in colour.
(red, black, green)
28. We should not share _____.
(cups, towels, houses)
29. Toilets must be cleaned using soap, water and a _____.
(stick, brush, toothbrush)
30. When wiping the floor of our house we should use a _____ mop.
(clean, dirty, smelly)
31. We should wear _____ on our hands when handling rubbish.
(socks, scarfs, gloves)
32. _____ is the place where boys and men pass urine.
(Toilet, Urinal, Bush)
33. When seeds _____ they grow into seedlings.
(breathe, die, germinate)
34. Most plants grow from _____.
(soil, seeds, leaves)
35. We plants seeds in the _____.
(soil, air, water)
36. When there is no rain, we should _____ our plants.
(weed, water, dry)
37. Unwanted plants are called _____.
(maize, plants, weeds)

38. Draw a small leaf

39. This is a _____ leaf.



- (bean, maize, potato)
40. Removing weeds from the farm is called _____.
(watering, weeding, germinating)
41. People wear heavy clothes when it is _____.
(hot, sunny, cold)
42. A tick has _____ legs.
(6, 8, 4)
43. Germs like _____ places.
(clean, dirty, neat)
44. _____ give us firewood.
(Stone, Trees, Mangoes)
45. A _____ changes its colour.
(hen, snake, chameleon)
46. When we are hungry we _____ food.
(eat, play, drink)
47. A _____ treats sick people.
(teacher, doctor, nurse)
48. Pigs give us _____.
(milk, skins, pork)
49. We find _____ inside the mouth.
(teeth, hair, nails)
50. Which animal eats rats? _____.
(Rabbit, Cat, Donkey)

TARGETER WINGS EVALUATION TEST

STANDARD TWO - YEAR 2017

SOCIAL STUDIES / C.R.E




003

Date:

NAME SCHOOL

Name two buildings found in the school

1. _____
2. _____
3. Rain makes our _____ grow.
(clothes, plants, animals)
4. Winds help our _____ to dry faster.
(clothes, beds, road)
5. We sit in the _____ when it is hot.
(shade, sun, rain)
6. Many huts make a _____
(district, homestead, family)
7. A _____ family has only one parent and children.
(nuclear, extended, single parent)
8. Our headteacher is called _____
9. Many trees growing together make a _____
(forest, ocean, river)
10. The black colour on our flag stands for _____



(land, people, vegetation)

11. My father's brother is my _____
(aunt, uncle, nephew)

12. We help ourselves in the _____
(bedroom, kitchen, toilet)
13. Tools are kept in a _____
(house, granary, store)
14. Children go to school because we have a right to _____
(work, play, education).
15. It is used to cut small trees.



It is a _____
(jembe, panga, slasher)

16. I should _____ school rules.
(disobey, obey, ignore)
17. Surrounding means _____
(things above us, things around us, bad things)
18. _____ guards our school when we are not there.
(Head teacher, Teacher, Watchman)
19. We make new _____ in school.
(friends, birds, enemies)
20. _____ help pupils to follow the schools rules.
(Thieves, Teachers, Guards)
21. The _____ helps pupils to know what they will learn each day.
(timetable, rules, menu)
22. We learn to _____ our teachers and parents in school.
(cheat, obey, disobey)

23. I tell pupils what to do in school. What am I? _____
(Syllabus, Textbooks, School rules)
24. We should _____ long grass around our school compound to keep away bad animals.
(grow, keep, cut)
25. Playing makes our bodies _____
(strong, weak, sick)
26. The ground becomes _____ during rainy weather.
(wet, dry, hot)
27. Draw a river
28. _____ is how sunny, windy or rainy a place is.
(Warmth, Weather, Clouds)
29. We drink a lot of _____ when it is hot.
(water, ink, oil)
30. I should keep my body _____
(dirty, dull, clean)

C.R.E

31. Parents are a _____ from God.
(curse, burden, gift)
32. We should _____ our relatives.
(love, hate, fight)
33. _____ was Ruth's mother-in-law.
(Naomi, Orpha, Mary)
34. Pupils must _____ teachers.
(respect, hate, laugh)
35. We should _____ God's creation.
(kill, burn, take care of)

36. _____ is the last book in the Bible.
(Revelation, Malachi, Genesis)
37. The Bible is divided into _____ books.
(1, 2, 3)
38. The Bible is a _____ book.
(story, holy, big)
39. _____ died for our sins.
(God, Satan, Jesus)
40. Jesus grew up in _____
(Jerusalem, Nazareth, Bethlehem)
41. _____ were the first people to visit baby Jesus.
(Wisemen, Greekmen, Shepherds)
42. Prophet _____ talked about the birth of Jesus.
(Isaiah, Jeremiah, Elijah)
43. Jacob had _____ sons.
(10, 11, 12)
44. _____ loves little children.
(Satan, God, Peter)
45. _____ was thrown in the den of lions.
(John, Stephen, Daniel)
46. Sinners will go to _____
(hell, heaven, soil)
47. _____ created my parents.
(Satan, Man, God)
48. The wisemen came from the _____
(North, East, South)
49. _____ taught us the Lord's prayer.
(Jesus, Peter, John)
50. Another name for Tabitha was _____
(Jane, Dorcas, Mary)

TARGETER WINGS EVALUATION TEST

STANDARD TWO - YEAR 2017

ENGLISH READING



003

Date:

NAME SCHOOL

Read the story aloud to the teacher.

Today the weather is sunny. Daniel and Joseph are playing in the sun. Suddenly the weather changes. The wind starts to blow. Then it gets cold. Daniel puts on his heavy jacket and Joseph gets his scarf and sweater. It is too windy. The children go inside the house. It starts to rain. Daniel and Joseph are happy. The crops will grow in the farm.

Use stop watch 1 minute per child.
Marking = correct words x 100

65

TARGETER WINGS EVALUATION TEST

STANDARD TWO - YEAR 2017

ENGLISH



003

Date:

NAME SCHOOL

Part A: Dictation.

Write the words as the teacher says them

1. _____
2. _____
3. _____
4. _____
5. _____
6. _____
7. _____
8. _____
9. _____
10. _____


Part B: Writing sentences.

Write a sentence using each word


11. dog _____
12. run _____
13. red _____
14. hot _____
15. wet _____
16. sick _____

Part C: Matching sentences to the picture

17. The weather is windy.



18. The dog licks the jam.



19. The baby is sleeping.



20. The boys are playing football.



21. The ball is on the table.



22. The cat is under the table.



Part D: Writing sentences correctly Write the following sentences correctly

23. is on Ben way home his

24. nail There is leg a on his

25. pain feels of Jame a lot.

26. sits down under a tree He

27. day is a hot It



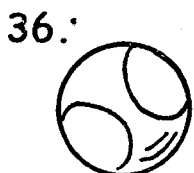


28. bad rain Too is much

Part E: Filling in the blanks.
Fill in the blanks using the words below.

car	far	tar	wool	play
-----	-----	-----	------	------

29. A bike cannot go _____
30. A tarmac road is made of _____
31. Mat plays with his toy _____
32. Sam and Tam want to _____
33. The sheep has white _____

Part F: Naming pictures.
Write the name of the following pictures.



Part G: Filling in the missing letters.

Fill in the missing letters using the letters in the box.

ra	ng	a	ss	r	i
----	----	---	----	---	---

40. si _____ ing
41. g _____ ass
42. cla _____
43. pa _____
44. _____ in
45. read _____ ng

Part H: Comprehension

Read the passage and answer the questions below.

Tom and Kate have a duck. They take the duck to the pool. Tom and Kate sit under a shade and chat. It is not time to go home. They look in the pool. The duck is not there. On their way home, they see the duck. Tom and Kate laugh.

46. What do Kate and Tom have? _____
47. Where do they take the duck? _____
48. Where do they sit to chat? _____
49. Where do they find the duck? _____
50. What do they do after getting the duck? _____

TARGETER WINGS JARIBIO LA MTIHANI



DARASA LA PILI - MWAKA 2017

003

KISWAHILI KUSOMA

Tarehe:

JINA SIHULE

Soma kwa sauti.

Dakika moja kwa kila mwanafunzi.

Juma na rafiki yake walisoma kuhusu hali ya anga. Mwalimu wao wa somo la Kiswahili aliwaelezea hali tofauti za anga. Mwalimu wao aliwaonyesha picha ya wakati wa joto. Pia aliwaonyesha picha ya wakati wa mvua. Mwalimu wao aliwaambia wanafunzi wake kwamba radi ni hatari sana. Juma na rafiki yake walifurahi sana kujua hali ya anga.

Kusahihisha = $\frac{\text{maneno sahihi}}{55} \times 100$

55