

TARGETER WINGS EVALUATION TEST

STANDARD TWO - YEAR 2017

MATHEMATICS

001



Date:

NAME SCHOOL

Count and write how many.

1. 50 = _____ tens _____ ones.

2. 78 = _____ tens _____ ones.

Write in words.

3. 19 _____

4. 6 _____

5. 20 _____

Fill in the missing numbers.

6. 10, 8, 6, _____


7. 40, 50, 60, _____

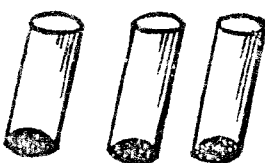
8. 15, 16, _____, 18

9. 5 tens 3 ones = _____

10. 6 tens 0 ones = _____

Count and write how many.

11.  = _____


12.  = _____

Add

13. 10 + 12 = _____

14. 2 + 4 = _____

15. How many tails do 2 goats have? _____

16.
$$\begin{array}{r} 33 \\ +13 \\ \hline \end{array}$$

17.
$$\begin{array}{r} 7 \\ +30 \\ \hline \end{array}$$

18. 30 - 20 = _____

19. 11 - 6 = _____

Take away

20. 16 - 8 = _____

21. 9 - 3 = _____

22.
$$\begin{array}{r} 80 \\ -40 \\ \hline \end{array}$$

23.
$$\begin{array}{r} 50 \\ -30 \\ \hline \end{array}$$

24. $\square + 6 = 8$

25.
$$\begin{array}{r} 5 \\ +\square \\ \hline 10 \end{array}$$

26.
$$\begin{array}{r} 3 \\ 3 \\ +3 \\ \hline \end{array}$$

27.
$$\begin{array}{r} 44 \\ -12 \\ \hline \end{array}$$

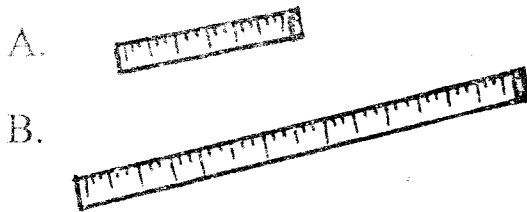
28. $40 - 30 = \underline{\hspace{2cm}}$

29. Which line is zigzagi?




30.
$$\begin{array}{c} \triangle \\ \triangle \end{array} + \begin{array}{c} \triangle \triangle \\ \triangle \end{array} + \triangle \triangle = \underline{\hspace{2cm}}$$

31. Which ruler is longer?



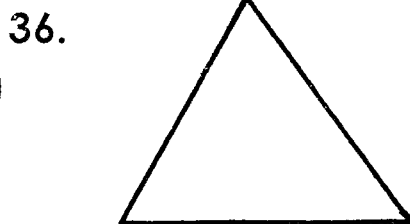
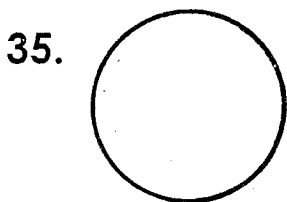
32. Which glass hold less water?



33.
$$\begin{array}{r} 10 \\ +14 \\ \hline \end{array}$$

34. $14 - 1 = \underline{\hspace{2cm}}$

Name the shapes.



37. $12 - \square = 10$

38. $\square + 2 = 4$

39. I have _____ toes.

Choose the smaller number.

40. 66 or 96 _____

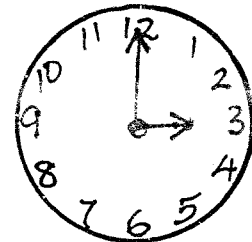
41. 47 or 27 _____

Take away

42.
$$\begin{array}{r} 43 \\ -10 \\ \hline \end{array}$$

43. $10 - 9 = \underline{\hspace{2cm}}$

44. It is _____ o'clock.



45. Jim had 7 pencils. He gave 3 to Okoth. How many pencils was he left with?

46. Add seven and eight.

47. Five boys have _____ hands.

48. Monday, _____, Wednesday.

49. Take away 5 from 9

50. Write in numbers
Eight six _____



TARGETER WINGS
MWAKA - 2017

KISWAHILI
Darasa la Pili

001

JINA

SHULE

TAREHE:

Sehemu ya A. (Imla)

Andika maneno nitakayoyasema

1. _____
2. _____
3. _____
4. _____
5. _____
6. _____
7. _____
8. _____
9. _____
10. _____

Sehemu ya B: Kanusha sentensi.

Kanusha sentensi zifuatazo.

11. Mtoto huyu ni mrefu.

12. Mama anapika chakula.

13. Mimi napenda kusoma

14. Mwalimu anafunza vizuri

15. Mgeni amewasili

Sehemu ya C: Kuandika wingi.

Andika maneno haya kwa wingi.

16. Mguu _____
17. Mkono _____
18. Mgongo _____
19. Mdomo _____
20. Mfupa _____

Sehemu ya D: Kuandika tarakimu.

Andika tarakimu zifuatazo kwa maneno.

21. 36 _____
22. 40 _____
23. 88 _____
24. 67 _____
25. 100 _____

Sehemu ya E: Msamiati
Andika majina ya sehemu hizi za mwili







26. _____ 28. _____
 27. _____ 29. _____
 30. _____

Sehemu ya F: Kinyume
Andika kinyume cha maneno
yafuatayo.

31. Mvulana _____
 32. Mchana _____
 33. Ndani _____
 34. Mzee _____
 35. Tajiri _____

Sehemu ya G: Kulinganisha picha na
jina.



Sehemu H: Wakati
Andika sentensi zifuatazo katika wakati
uliopita.

41. Mtoto analia

 42. Mgeni anakuja

 43. Ng'ombe anakula nyasi

 44. Ukuta unabomoka

 45. Kiti kinavunjika

Sehemu ya 1:Ufahamu

Soma ufahamu kisha ujibu maswali
 Kenya ni nchi ya kupendeza sana. Watalii wengi hufuruhai kuzuru nchi yetu. Watalii hupenda kuwaona wanyama pori kwenye mbuga zetu. Mbuga ya Maasai Mara ina maajabu ya ulimwengu. Hii ni kwa sababu ya nyumba ambao huvuka mto mara katika msimu wao wa mwaka.

46. Ni nchi gani ambayo ni ya kupendeza? _____
 47. Ni akina nani ambao huja kuwaona wanyama pori? _____
 48. Ni mbuga gani ina maajabu ya ulimwengu?

 49. Ni wanyama gani ambao huvuka mto mara? _____
 50. Tunawezaje kuhifadhi mazingira yetu? _____



ENGLISH

STD 2

DATE:

NAME SCHOOL

Part A: Dictation

Write the words as the teacher says them.

1. _____
2. _____
3. _____
4. _____
5. _____
6. _____
7. _____
8. _____
9. _____
10. _____

Part B: Filling in the blank spaces.

Choose a word to fill in the blanks.

River	Giraffes	Air
Trees	Live	

11. _____ eat leaves from trees.
12. _____ give us shade.
13. Trees clean the _____
14. Birds _____ in trees
15. The _____ has clean water.

Part C: Solving riddles.

Solve the riddles using the words below

face	house	cup	book	fish
------	-------	-----	------	------

16. People put tea inside me. What am I? _____
17. People write on me. What am I? _____
18. I have your nose and mouth. What am I? _____
19. People love to eat me. I live in water. What am I? _____
20. People live inside me. What am I? _____

Part D: Finding words from the box. Find

the following words in the letter box below

21. cage	22. race	23. wage
24. ice	25. face	



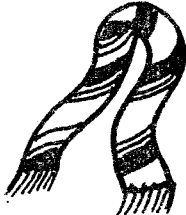


f	a	c	e	x
t	r	a	c	e
w	a	g	e	m
l	c	e	l	u

Part E: Writing sentences.

Write a sentence using each word.

26. Brother _____
27. Rain _____
28. Cook _____
29. Clean _____
30. boil _____

Part F: Matching words to pictures.
Match the word with the correct picture.

31.  a scarf
32.  a goat
33.  a blouse
34.  a hat
35.  a pair of shorts

Part G: Filling in letters in blank.
Fill in the missing letters in the word.

36. sk__rt.
37. shir__
38. bo__
39. t__y
40. di__t

Part H: Writing sentences correctly.
Write the following sentences correctly.

41. Sits near Rose wall the

42. School pam going is to

43. Cow feed I my will _____

44. Cuts farmer grass the

45. Cups you do clean How?

Part 1: Comprehension
Read the passage and answer the questions below.

Lila and Kamau live in Mau village. They go to Mau primary school. They are both in class two. Lila wears a skirt and blouse while Kamau wears a pair of short and a shirt. When they get back home, they change their school uniform. They play and have fun.

46. Where do Lila and Kamau live?

47. Who wears a skirt and a blouse?

48. What is the name of their school?
49. Lila and Kamau are in class

50. What does Kamau wear?

TARGETER WINGS EVALUATION TEST

STANDARD TWO - YEAR 2017

001

SOCIAL STUDIES/ C.R.E



Date:

NAME SCHOOL

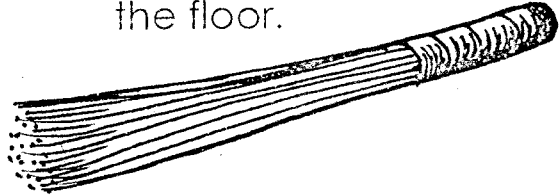
1. A living room is used to _____.
(cook, rest, eat)
2. We throw rubbish in a _____.
(dustbin, slasher, basket)
3. Family needs are also called _____ needs.
(free, basic, important)
4. Shelter is also called _____.
(rain, house, field)
5. Basic needs are _____ clothes and shelter.
(desk, ruler, food)
6. My _____ belongs to the extended family.
(father, uncle, sister)
7. People can buy food from the market or _____ in farms.
(throw, grow, use)
8. My aunt's children are my _____.
(parents, uncle, cousins)
9. The sister of my mother is my _____.
(uncle, aunt, cousin)

Draw these tools.

10. Jembe 11. slasher


12. _____ celebrate idd-ul-fitr.
(Christians, Muslims)

13. We use a _____ to sweep the floor.



(handbrush, panga, jembe)

14. Our national flag has _____ colours.

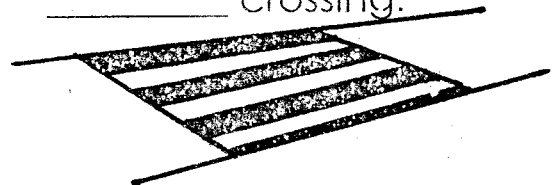


(4, 6, 2)

15. We should not _____ on the road.

(walk, step, pray)

16. We cross the road safely at a _____ crossing.



(railway, zebra, hot)

17. Knives and _____ can cut us.
(beans, razorblades, ruler)

18. Fire can be _____.
(harmful, played, with)

19. We cut down big trees using an _____.

(knife, axe, jembe)

20. _____ chase away thieves at our homes.

(Parents, Cats, Dogs)

21. Njoroge wanted to cut grass. He used a _____.

(slasher, jembe, axe)

22. We get firewood from _____.
(roads, trees, rivers)


23. Going to school is one of the child _____.
(rights, abuse, shame)

Name these physical features.

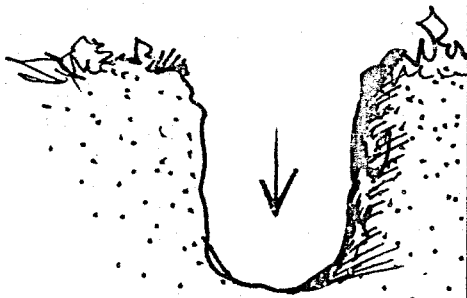
24.



25.



26.



27. Hammer, jembe, axe, rake are all called _____.
(furniture, tools, utensils)

28. The day I was born is my _____
(birthday, wedding, funeral)

29. The National Anthem is sung at the _____.
(church, assembly, wedding)

30. _____ is a male parent.
(Father, Mother, Sister)

C.R.E

31. To _____ is to do what I am told to do.
(cry, obey, pray)

32. David played music for king _____.
(Saul, Solomon, Herod)

33. The father of Jesus was a _____.
(doctor, teacher, carpenter)

34. Another name for Tabitha is _____.
(Dorcas, Mary, Joy)

35. The _____ were led to baby Jesus by a star.
(disciples, wisemen, shepherd)

36. Elikanah and _____ were parents of Samuel.
(Mary, Elizabeth, Hannah)

37. The _____ wisemen took their gifts to baby Jesus.
(4, 3, 2)

38. Jesus changed _____ into wine at Cana of Galilee.
(juice, air, wine)

39. We celebrate Christmas in _____.
(January, December, April)

40. Jesus was baptised by _____ the baptist.
(John, Eli, Peter)

41. The wife of Abraham was _____.
(Sarah, Mary, Grace)

42. Jesus was born in _____.
(Nazareth, Bethlehem)

43. The _____ is the word of God.
(New primary English, Bible, Dictionary)

44. Mr _____ built an Ark.
(James, Noah, David)

45. Abraham was told by God to sacrifice his _____.
(son, wife, father)

46. _____ saw a burning bush.
(Jacob, Moses, Isaac)

47. I should keep my body _____.
(clean, dirty, smelly)

48. It is not good to _____.
(sing, steal, write)

49. _____ is a good friend of children.
(Satan, Devil, Jesus)

50. I will _____ my teachers.
(abuse, respect, hate)

TARGETER WINGS EVALUATION TEST

STANDARD TWO - YEAR 2017

SCIENCE


001




Date:

NAME SCHOOL

1. Dirty hands will make us _____.
(fat, sick, healthy)
2. Towels should not be _____.
(shared, used, cleaned)
3. _____ is the main source of light.
(Lamp, Sun, Torch)
4. The weather is _____.




5. Hair is found on the _____.
(stomach, leg, toes)
6. We eat the _____ of carrots.




7. Leaves are _____ in colour.
(red, green, yellow)
8. We boil water for drinking to kill _____.
(germs, seeds, insects)
9. Moving air is called _____.
(dust, wind, soil)
10. A bicycle has _____ legs.
(3, 4, 2)
11. Dirty hair may keep _____.
(jiggers, lice, mice)
12. I see with my _____.
(eye, ears, mouth)

13. A bird eats _____.




(meat, eggs, grains)

14. A true insect has _____ legs.
(8, 6, 3)



15. A butterfly has _____.
(horns, shells, wings)
16. I have _____ lips.
(5, 1, 2)
17. A _____ is a personal item.
(toothpaste, towel)
18. A tick has _____ legs.
(3, 8, 6)
19. My legs bends at the _____.
(shin, thigh, knee)
20. Drinking water must be _____.
(dirty, boiled, liffle)
21. We get _____ from the sun.
(sound, water, light)
22. When it rains, I wear _____.
(gumboots, slippers, sandals)
23. Making things from soil is called _____.
(building, modelling, cutting)
24. The sun sets in the _____.
(North, East, West)
25. A hen lays _____.
(feathers, eggs, maize)
26. When I am thirsty, I take _____.
(water, flour, rice)


27. A _____ has air in it.
(pencil, rubber, baloon)
28. Light helps us to _____ things.
(eat, seen, run)
29. A handcart has _____ wheels
(2, 4, 3)
30. _____ is a food we get from animals.
(Bananas, Eggs, Mango)
31. I eat _____ when I am hungry.
(grass, clothes, food)
32. A _____ lays eggs.
(cat, cock, hen)
33. Mangoes are _____.
(berries, fruit, vegetales)
34. A _____ lives in a web.
(spider, tick, snail)
35. On a cloudy day we cannot see the _____.



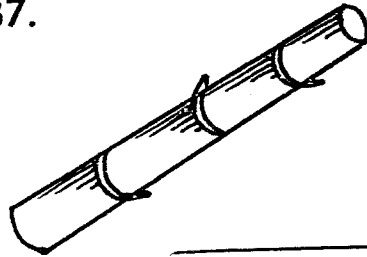
(trees, sun, birds)

Name these things.

36.



37.



38. We hear the sound of _____ at school.
(stone, bell, siren)

Draw two sources of water.

39.

40.

41. Swimming in the river is _____.
(fair, good, bad)
42. A wheelbarrow has _____ wheels.
(1, 3, 2)
43. Animals which live in the forest are _____ animals.
(home, wild, tame)
44. I should wash my hands _____ visiting the toilet.
(before, after)
45. When we mix soil with water we get _____.
(dust, mud, flour)
46. A goat gives us meat and _____.
(wool, feathers, milk)
47. A _____ had a hand shell.
(fly, cow, tortoise)
48. I go to school in the _____.
(noon, morning, evening)
49. A bird has _____ beaks.
(1, 2, 3)
50. We get meat, milk and eggs from _____.
(garden, animals, crops)



**TARGETER WINGS
YEAR - 2017**

001

Date:

NAME SCHOOL

English Reading Exam - 2017
Class 2

Read the story aloud to the teacher.

During the school holidays children have fun. In the morning, they have breakfast and go out to play. When they see the sun up in the sky, it is midday. The children run home for lunch. They all take an afternoon nap. When the sun sets, the children help with evening work.

**Mtihan: Tusome
Darasa la 2**

Soma kwa sauti.

Kila Jumapili Rosa huamka saa kumi na mbili asubuhi. Yeye hunawa uso na kupiga meno yake mswaki. Rosa hufika kanisani saa moja na nusu. Rosa hucheza na marafiki wake hadi saa mbili. Baadaye mwalimu wao huanza ibada katika ibada yao, wao huimba nyimbo mbalimbali. Ibada yao humalizika saa sita mchana.