



HIGH PERFORMANCE EXAM SERIES STANDARD TWO



[2] SOCIAL STUDIES & C.R.E

YEAR 2016


NAME: _____

SCHOOL: _____

DATE: _____

1. When raising the flag, we sing the _____ (national anthem, school anthem, praise)
2. We get milk from a _____ (donkey, snake, cow)
3. Who is the head of your school? _____ (Chief, Headteacher, Pastor)
4. A brother to my mother is my _____ (aunt, uncle, mother)
5. We find _____ in the library (pens, books, utensils)
6. _____ is the head of the family
7. _____ is the President of Kenya.
8. A _____ is a group of people living together.
9. Cyclists are people who ride _____ (donkeys, bicycles, cars)
10. The sun sets in the _____ every evening. (West, East, South)
11. We grow crops in the _____ (market, shamba, house)
12. Mother father and children make a _____ (family, tribe, clan)
13. Which animal eats grass? _____ (Dog, Cow, Lion)
14. A school is a place where _____ go to learn.
15.  This element of weather is called _____
16. The chairs we sit on are made of _____ (paper, wood, stones)
17. When its raining we carry _____ (paper bags, umbrellas, aprons)
18. The pupil incharge of others in class is _____ (classteacher, prefect, headboy)
19. The _____ gives us light during the day. (sun, moon, stars)
20. _____ provides us with shade. (trees, wind, rain)
21.  This road sign shows there is _____ ahead. (accident, bumps, school)
22. Our government gives us _____ to teach us. (doctors, pastors, teachers)
23. We enter the school through the _____ (fence, gate, window)

24.



This traditional homestead is called _____

25. A _____ is a drawing found on our flag. (**ball, shield, cross**)

26. Water falls from the sky as _____. (**rain, smoke, wind**)

27. We wear _____ clothes when it is hot. (**light, warm, wet**)

28. People we do not know are called _____ (**strangers, friends, grown ups**)

29. Games make our bodies _____ and _____. (**strong and weak, strong and health, sick and dirty**)

30. An elephant is a _____ animal. (**domestic, wild**)

C.R.E

31. All plants are created by _____. (**Adam, Eve, God**)

32. The Bible is the word of _____. (**God, Satan, church**)

33. God is _____ when we live in unity (**sad, happy, silent**)

34. It is our Christian duty to _____ our parents. (**beat, obey, disobey**)

35. I am a _____ to my grandparents. (**visitor, cousin, grandchild**)

36. God wants us to _____ for our neighbours. (**pray, die, cook**)

37. My teachers teach me how to _____ (**cry, read, fight**)

38. Pupils in my school are my _____. (**schoolmates, classmates, deskmates**)

39. God talked to _____ near a burning bush. (**Moses, Abraham, Jacob**)

40. _____ had long hair with a lot of strength. (**Solomon, Samson, Simon**)

41. The blind man who was healed by Jesus was called _____. (**Abraham, Bartimaeus, Elijah**)

42. There are 39 books in the _____ testament. (**new, old, current**)

43. _____ is the first book of the Bible. (**Revelation, Genesis, Luke**)

44. We should read the Bible _____. (**everyday, Sunday only**)

45. The first man to be created was _____. (**Adam, Joseph, Joshua**)

46. God created everything in _____ days. (**seven, six, two**)

47. Patience and sharing with others are some of the _____ we learn in school. (**values, songs, games**)

48. God gives us _____. (**enemies, wisdom, hatred**)

49. Adam and _____ are our first parents. (**Mary, Eve, Hannah**)

50. _____ take care of their children always. (**Villagers, Parents, Visitors**)



HIGH PERFORMANCE EXAM SERIES

STANDARD TWO

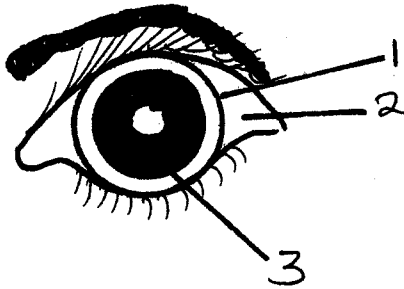
YEAR 2016

[2]

SCIENCE

NAME: _____ SCHOOL: _____ DATE: _____

Name the parts of the eye



1. _____
2. _____
3. _____

4. We should not drink _____ water. (dirty, boiled, fresh)
5. Our nails should be _____ (short, long, medium)
6. Moving air is called _____ (rain, wind, storm)
7. A rainbow has _____ colours. (7, 10, 8)
8. A long period without rain causes _____ (floods, famine, drought)
9. A _____ lives in dry land. (cow, fish, whale)
10. We breath out _____ (oxygen, carbon dioxide, nitrogen)
11. Which of the following is not a way of cleaning the classroom? _____ (sweeping, building, wiping)

12. We should not _____ personal items. (share, wash, clean)

13. Which of the following animals is a domestic animal? _____ (Cat, Lion, Monkey)

Name the parts of the body



14. _____
15. _____
16. _____
17. _____
18. _____ are found in cattle. (Lice, Ticks, Insects)
19. An insect has _____ body parts (4, 3, 5)

Write three uses of water

20. _____
21. _____
22. _____

Name three body parts of an insect

23. _____
24. _____
25. _____
26. How many legs does a tick have?
_____ (6, 8, 3)
27. A spider is divided into _____
parts. (3, 2, 4)
28. The following has two wheels .
Which one? _____
(Wheelbarrow, Car, Bicycle)
29. Dirty feet can keep _____
(lice, jiggers, flies)


Name three types of clothes

30. _____
31. _____
32. _____
33. We wear _____ clothes when
its cold. (dirty, clean, warm)
34. I am the king of the jungle. Who
am I? (Lion, Hyena, Leopard)
35. The _____ gives us light at
night. (moon, stars, sun)
36. We eat _____ to be healthy
37. _____ is a sense organ.
38. We use our _____ to hear.
(eyes, nose, ear)


39. A _____ should not be shared
(razor blade, book, pen)
40. We boil water to _____
(kill germs, make it sweet,
cool it)
41. A cow gives us _____
(skin, eggs, feathers)
42. Shoes are made of _____
(paper, feathers, leather)
43. _____ destroys timber
(Fleas, Termites, Insects)
44. A snake can _____ a person.
(bite, eat, chew)
45. Germs spread _____
(diseases, foods, warmth)

Draw the pictures


46. Cow



47. Dog



48. Goat



49. The colour of leaves is _____
(brown, yellow, green)

50.  The weather is _____
(sunny, rainy, clam)



HIGH PERFORMANCE EXAM SERIES

STANDARD TWO

YEAR 2016


[2]

MATHEMATICS

NAME: _____ SCHOOL: _____ DATE: _____

1. $30 + \underline{\quad} = 42$
2. Karanja went to a shop and bought a book for Sh. 10. and a pencil for Sh. 5. How much will he get as balance from Sh. 25?
= _____
3.
$$\begin{array}{r} 85 \\ - 25 \\ \hline \\ \hline \end{array}$$
4. $278 = \underline{\quad} + 150$
5. 6 tens + 0 ones = _____
6. **Write in figures;**
Fifty six = _____
7. Write the numbers less than 50 from the ones given below
30, 60, 72, 53, 49, 89, 90

8. $6 \times 10 = \underline{\quad}$
9.
$$4 \overline{)28}$$
10. $28 - 8 = \underline{\quad}$
11. Arrange the numbers from the largest to the smallest;
98, 57, 46, 22, 37, 89

12. $0 + 10 + 40 = \underline{\quad}$
13. $6 \times \underline{\quad} = 60$
14. $63 \div 7 = \underline{\quad}$
15.
$$\begin{array}{r} 72 \\ + 27 \\ \hline \\ \hline \end{array}$$
16. What is twenty nine take away thirteen? _____
17. Complete the sequence below
92, 94, _____, 98, 100
18. How many sides does a triangle have?
 _____
19. $13 + 10 + 12 = \underline{\quad}$
20. $24 \div 3 = \underline{\quad}$
21. _____ $\times 9 = 27$
22. $49 \div 7 = \underline{\quad}$
23. The classroom door is about _____ metres. (**10m, 2m, 100 m**)
24. $76 - 26 = \underline{\quad}$

25. Write 555 in words.

26. $20 = \underline{\hspace{2cm}}$ tens
27. Nine cars have _____ wheels.
28.
$$\begin{array}{r} 9\text{m} \quad 20\text{cm} \\ +3\text{m} \quad 16\text{cm} \\ \hline \\ \hline \end{array}$$
29. _____ $\div 12 =$ _____
30. Complete the missing numbers
5, 10, 15, _____, 25, 30
31. How many legs does six snakes have? _____
32. $6 + 6 + 6 + 6 = \underline{\hspace{1cm}} \times \underline{\hspace{1cm}} = \underline{\hspace{1cm}}$
33. 4 months have = _____ weeks
34. $62 = \underline{\hspace{1cm}}$ tens + _____ ones
35. Add;
$$\begin{array}{r} 9 \\ 3 \\ + 6 \\ \hline \\ \hline \end{array}$$
36.
$$\begin{array}{r} 10\text{m} \quad 20\text{cm} \\ + 6\text{m} \quad 10\text{cm} \\ \hline \\ \hline \end{array}$$
37. $9 \times 7 = \underline{\hspace{2cm}}$
38. A jiko costs Sh. 24. How much would I pay for four such jikos?
 $= \underline{\hspace{2cm}}$
39. 1 full tray = _____ eggs
40.
$$\begin{array}{r} \text{Shs} \quad \text{cts} \\ 8 \quad 24 \\ +7 \quad 19 \\ \hline \\ \hline \end{array}$$
41. Add three to nine. $= \underline{\hspace{2cm}}$
42. 9 hundreds 4 tens 0 ones = _____
43. The seventh month of the year is

44. $24 \div 4 = \underline{\hspace{2cm}}$
45.
$$\begin{array}{r} 179 \\ - 48 \\ \hline \\ \hline \end{array}$$
46. $68 - 54 = \underline{\hspace{2cm}}$
47. How many fingers do six girls have? _____
48. Sunday, Monday, Tuesday,

49. November has _____ days
50. $0 \times 9 = \underline{\hspace{2cm}}$



HIGH PERFORMANCE EXAM SERIES

STANDARD TWO

YEAR 2016

[2]

ENGLISH

NAME: _____

SCHOOL: _____

DATE: _____

Dictation

1. _____
2. _____
3. _____
4. _____
5. _____

Re-arrange the words to make correct sentences

6. the sunny weather is

7. is here Thomas

8. a pencil is this

Write the plural

9. Mango - _____
10. Sheep - _____

Make sentences using each word

11. Window

12. Teacher

13. Water

Fill in the blanks using the given words

14. I ate _____ and fish.
15. Juma rides a _____ to school.
16. A dog can _____ you.

(bike, rice, bite, your)







Circle the words with the given letter

17. t - pray am mat
18. a - cat met sit
19. e - mat met is

Add 'ing'

20. Play - _____
21. Pray - _____
22. Close - _____
23. Write - _____
24. Say - _____

Match the words with the pictures

- | | | |
|-----|---|-----------|
| 25. |  | Pineapple |
| 26. |  | Maize |
| 27. |  | Banana |
| 28. |  | Apple |
| 29. |  | Berries |
| 30. |  | Cabbage |

Write the opposites

- | | | |
|-----------|---|-------|
| 31. Go | - | _____ |
| 32. Sit | - | _____ |
| 33. Old | - | _____ |
| 34. Late | - | _____ |
| 35. Happy | - | _____ |

Fill in the gaps with the missing letters

36. Cla _____

37. M _____ th _____ r

38. F _____ the _____

39. B _____ g

40. T _____ a

Complete these sentences

41. A _____ shaves our hair.
42. A _____ repairs water pipes.
43. A _____ sells meat.
44. A _____ eats meat.
45. A young elephant is called _____
(plumber, barber, leopard, butcher, calf)

Read the passage below and answer questions 46 - 50

John and James are pupils at Jaribu Primary School. They are both in Standard Two. They are both eight years old. They like playing football. Their English teacher is called Natasha. Teacher Natasha is a good teacher.

46. Name the two boys in the passage. _____
47. What is the name of their school? _____
48. They are both in Standard Two. (True or False) _____
49. The boys like playing _____
50. Who is Natasha? _____



HIGH PERFORMANCE EXAM SERIES

STANDARD TWO

YEAR 2016

[2]

READING & KUSOMA

NAME: _____

SCHOOL: _____

DATE: _____

READING

Read these words

- | | | | |
|------------|------------|-------------|---------------|
| 1. School | 6. Basket | 11. Parrot | 16. Pineapple |
| 2. Padlock | 7. Wear | 12. Tongue | 17. Clouds |
| 3. Outside | 8. Carrot | 13. Bandage | 18. Forest |
| 4. Feather | 9. Floor | 14. Shirt | 19. Aeroplane |
| 5. Blanket | 10. Bucket | 15. Rabbit | 20. Shoulder |

Read this passage

Yesterday morning when I was going to school, I saw a group of lions. I was very afraid and started running away while screaming. My neighbour, Mr. Juma heard me and asked me to stop running as the lions had not seen me.

KUSOMA

Soma majina haya

- | | | | |
|-------------|------------|--------------|-------------|
| 1. Tembea | 6. Methali | 11. Ufizi | 16. Bakuli |
| 2. Salamu | 7. Jukumu | 12. Sindano | 17. Daktari |
| 3. Tetemeka | 8. Chezea | 13. Mavazi | 18. Masikio |
| 4. Baridi | 9. Kiganja | 14. Baiskeli | 19. Nguruwe |
| 5. Shingo | 10. Dereva | 15. Mgongo | 20. Uwanja |

Soma sentensi hizi

Maji ni muhimu sana. Sisi hutumia maji kuoga na pia kunywa. Hupatikana mtoni, ziwani, bwawani na pia mvua hutupa maji. Maji ya kunywa lazima yachemshwe na pia yahifadhiwa katika pahali safi.



HIGH PERFORMANCE EXAM SERIES
DARASA LA PILI
MWAKA 2016
[2]
KISWAHILI

JINA

SHULE:

TAREHE:

Imla

1. _____
2. _____
3. _____
4. _____
5. _____

Andika maneno haya vizuri

6. nibusa - _____
7. komno - _____
8. mleche - _____

Umoja

Wingi

9. Nyumba - _____
10. Maji - _____
11. Mmea - _____
12. Mwalimu - _____
13. Jino - _____

14. Nguo - _____

15. Mkate - _____

Kanusha maneno haya

16. Analia - _____

17. Anacheka - _____

18. Anapakua - _____

19. Analima - _____

20. Anasoma - _____

Kanusha sentensi zifuatazo

21. Tumelipa karo.

22. Tumelala kitandani.

23. Pika chai ya wageni.

24. Tullenda sokoni leo.

25. Watoto wanacheza mpira.

Unda maneno ukitumia silabi hizi

26. Cha - _____
27. Ma - _____
28. Sa - _____
29. Ku - _____
30. Ki - _____

Andika wingi wa sentensi hizi

31. Kitabu kimepotea.

32. Kalamu imeanguka.

33. Huyu ni mgonjwa.

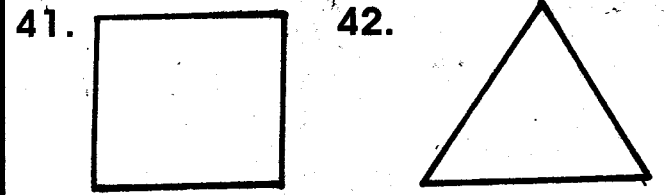
34. Mwanafunzi ameketi.

35. Nyanya analala.

Andika kinyume cha maneno haya

36. Cheka - _____
37. Lala - _____
38. Anika - _____
39. Mama - _____
40. Dada - _____

Andika majina ya maumbo haya



(mraba, mstatili, pembe tatu)

Kamilisha methali na vitendawili

43. Bendera hufuata _____
44. Nyumba yangu haina mlango.

45. Fatuma mchafu _____

(ufagio, upepo, yai)

Soma kifungu kifuatacho kisha ujibu maswali 46 - 50:

Ng'ombe ni mnyama mkubwa anayefugwa nyumbani. Anaweza kuwa na rangi nyeupe au nyeusi. Ng'ombe hutupa maziwa anapokamwa na nyama anapochinjwa. Ng'ombe hula nyasi na mwana wake huitwa ndama. Ng'ombe ni mnyama mwenye faida sana.

46. Ng'ombe hufugwa wapi?

47. Mwana wa ng'ombe anaitwa _____
48. Ng'ombe ana pembe ngapi?

49. Ng'ombe hutupa nini? _____
50. Je, ng'ombe ana faida kwetu?
(Ndio, La) _____