

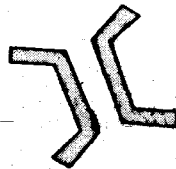



**SIGNAL EXAMS 2016**  
**SOCIAL STUDIES/RE**

**SIGNAL 003**

NAME:	
SCHOOL:	

1. A \_\_\_\_\_ is not a school building. **(toilet, staffroom, hospital)**
2. When we get sick, we go to a \_\_\_\_\_ **(church, school, hospital)**
3. Our \_\_\_\_\_ help us to learn at school. **(farmers, teachers, uncles)**
4.  We raise this on \_\_\_\_\_ **(Tuesday, Monday, Thursday)**
5. When we play games, we become \_\_\_\_\_ **(sick, weak, strong)**
6. Complete the verse of the National Anthem: Nasi tujitoe kwa \_\_\_\_\_ **(hekima, nguvu, bidii)**
7. We \_\_\_\_\_ the school compound to keep it clean. **(dirty, sweep, walk)**
8. A school is a place where we go to \_\_\_\_\_ **(play, learn, talk)**
9.  The walls of this house are built of \_\_\_\_\_ **(sand, mud, cowdung)**
10. Our teacher meet and discuss in the \_\_\_\_\_ **(library, staffroom, classroom)**

11. School \_\_\_\_\_ guide us on what to do or not to do. **(flag, motto, rules)**
12. We play \_\_\_\_\_ at school. **(wrestling, fighting, football)**
13. \_\_\_\_\_ are people who travel on foot. **(Passengers, Pedestrians, Cyclists)**
14. My school is called \_\_\_\_\_
15. A person whom I do not know is a \_\_\_\_\_ **(friend, teacher, stranger)**
16. The \_\_\_\_\_ is the head of our school. **(prefect, headteacher, classteacher)**
17. At school, we play games at the \_\_\_\_\_ **(classroom, toilet, playfield)**
18.  On our way to school, we may come across a \_\_\_\_\_ **(bridge, valley, hill)**
19. We should walk on the side of the road. **(left, right, centre)**
20.  This physical feature is a \_\_\_\_\_ **(river, mountain,, lake)**
21. We should \_\_\_\_\_ when the teacher is not in class. **(fight, make noise, keep quiet)**
22. Desks and \_\_\_\_\_ are found in the classroom. **(spoons, chalks, buckets)**

23. Aunts, uncles and grandparents are my \_\_\_\_\_  
(relatives, strangers, enemies)
24. We sing the National anthem while \_\_\_\_\_  
(standing, sitting, laughing)
25. The school \_\_\_\_\_ is a statement that defines our goal. (gate, motto, badge)
26. I should not \_\_\_\_\_ with my classmates. (read, share, fight)
27. Our \_\_\_\_\_ provide our basic needs. (teachers, parents, leaders)
28. Children should not be \_\_\_\_\_  
(disciplined, overworked, educated)
29. Sharp objects at home can \_\_\_\_\_ us. (eat, cut, cook)
30. A \_\_\_\_\_ is a building material for traditional houses. (timber, iron sheets, grass)

### CRE

31. Hannah showed \_\_\_\_\_ to God. (gratitude, hatred, pride)
32. Jesus taught his \_\_\_\_\_ the Lords prayer. (parents, disciples, enemies)
33. To follow given instructions is called \_\_\_\_\_. (respect, kindness, obedience)
34. Jesus \_\_\_\_\_ the sick. (hated, healed, beat)
35. Jesus Christ fed the \_\_\_\_\_ crowd. (angry, hungry, small)


36. Jesus Christ \_\_\_\_\_ his parents. (obeyed, disrespected, ignored)
37. We should share with the \_\_\_\_\_  
(rich, needy, relatives)
38. We should \_\_\_\_\_ rules at home and at school. (ignore, break, obey)
39. The wise men \_\_\_\_\_ Jesus. (disobeyed, worshipped, crucified)
40. Servants should be \_\_\_\_\_ to their employers. (faithful, proud, unkind)
41. God created the \_\_\_\_\_  
(sun, moon, stars)
42. The first followers of Jesus Christ were \_\_\_\_\_  
(James and John, Peter and Andrew)
43. Jesus was the son of \_\_\_\_\_  
(God, Satan, man)
44. Jesus was baptised in a \_\_\_\_\_  
(lake, river, sea)
45. The people who come to our home are \_\_\_\_\_  
(passengers, visitors, farmers)
46. We should always trust in \_\_\_\_\_  
(friends, God, parents)
47. We should desire to be \_\_\_\_\_ of Jesus Christ. (an enemy, a friend, a reject)
48. Jesus Christ showed concern for the \_\_\_\_\_  
(needy, rich, friends)
49. At school, we learn to be \_\_\_\_\_  
(harsh, kind, rich)
50. Today, we celebrate the birth of Jesus during \_\_\_\_\_  
(Sunday, Easter, Christmas)

SIGNAL EXAMS 2016

SIGNAL 003

SCIENCE

NAME:	
SCHOOL:	

- |   |  |
|---|--|
| <p>1. We are able to tell the smell of something by using our _____ (eyes, ears, nose)</p> <p>2.  We use our _____ to hear. (legs, ears, noses)</p> <p>3. A banana plant has a _____ leaf. (tiny, big, small)<br/><b>Draw the weather symbols for:</b></p> <p>4. A rainy day</p> <p>5. A calm day</p> <p>6. A cloudy day</p> <p>7. A sunny day</p> | <p>8. When it is cold, we put on _____ and _____ clothes. (heavy, cold, light, warm)</p> <p>9. We sweat more when it is _____ (rainy, cold, hot)</p> <p>10. The white things seen on the sky are called _____ (water, clouds, wind)</p> <p>11. We do weeding by uprooting the _____ (maize, beans, weeds)</p> <p>12. The edible parts of a plant are the parts that we _____ (cut, plant, eat)</p> <p>13. We feel a lot of heat when it is _____ (cloudy, rainy, sunny)</p> <p>14. We water crops when there is no _____ (sun, rain, wind)</p> <p>15. We touch things using our _____ (legs, hands, toes)</p> <p>16. Things that we should not share are called _____ items. (new, clean, personal)</p> <p>17. The tongue is the sense organ for _____ (touch, taste, sight)</p> <p>18. We should learn in _____ classrooms. (dirty, untidy, clean)</p> <p>19. Eyes, nose, ears, tongue and skin are called _____ organs. (body, sense, smell)</p> |
|---|--|

20. This is the leaf of a \_\_\_\_\_ plant.  
(bean, maize, mango)



21. We can use \_\_\_\_\_ to make wheels.  
(water, papers, wires)

22. Only men and boys can use \_\_\_\_\_  
(latrines, toilets, urinals)

23. Name two useful animals and \_\_\_\_\_

**Name and draw any four personal items**

24. \_\_\_\_\_

25. \_\_\_\_\_

26. \_\_\_\_\_

27. \_\_\_\_\_

28. The lips are parts of my \_\_\_\_\_  
(hands, mouth, legs)

29. We eat the fruits of a \_\_\_\_\_ plant.  
(lemon, kunda, tea)

30. We can feel the texture of things through our \_\_\_\_\_  
(eyes, skin, ears)

31. A river is a source of \_\_\_\_\_  
(trees, air, water)


32. We can feel whether soil is smooth or rough using our \_\_\_\_\_  
(eyes, ears, hands)

33. This source of water is called \_\_\_\_\_  
(river, rain, ocean)



34. The \_\_\_\_\_ is a source of light.  
(clouds, sun, rain)

35. We open the \_\_\_\_\_ to fetch water.  
(dam, tap, drum)



36. This source of light is called \_\_\_\_\_  
(sun, fire, electricity)



37. Most plant leaves have a green \_\_\_\_\_  
(texture, colour, shape)

**Match the plant with the part eaten**

Plant	part eaten
38. Mango	stem
39. Cabbage	roots
40. Sweet potato	fruit
41. Sugarcane	leaves

42. I have \_\_\_\_\_ sense organs.  
(5, 2, 10)

43. A round balloon has \_\_\_\_\_ in it.  
(water, air, soil)

44. A \_\_\_\_\_ is \_\_\_\_\_ to produce sound.  
(blown, rang, plucked)



45. We use \_\_\_\_\_ to cook food.  
(soil, water, clothes)

46. We wear heavy clothes to keep our body \_\_\_\_\_  
(cold, shivering, warm)

47. I have \_\_\_\_\_ on my head.  
(air, hair, nails)

48. When a vehicle hoots, we hear \_\_\_\_\_  
(water, sound, light)

49. The foot and the toes are found on the \_\_\_\_\_  
(arm, head, leg)

50. During this weather, we put \_\_\_\_\_ on \_\_\_\_\_ clothes.  
(heavy, warm, light)



**SIGNAL EXAMS 2016**  
**MATHEMATICS**

**SIGNAL 003**

<b>NAME:</b>	
<b>SCHOOL:</b>	

**Match the numbers**

- |           |    |             |
|-----------|----|-------------|
| <b>1.</b> | 99 | Seventy two |
| <b>2.</b> | 68 | Forty nine  |
| <b>3.</b> | 94 | Ninety nine |
| <b>4.</b> | 72 | Sixty eight |
| <b>5.</b> | 49 | Ninety four |

**6.**

$$\begin{array}{r} 64 \\ + 32 \\ \hline \\ \hline \end{array}$$

**7.**

$$\begin{array}{r} 80 \\ + 10 \\ \hline \\ \hline \end{array}$$

**8.**

$$\begin{array}{r} 29 \\ + 30 \\ \hline \\ \hline \end{array}$$

**9.**

$$\begin{array}{r} 34 \\ + 26 \\ \hline \\ \hline \end{array}$$

**10.**

$$\begin{array}{r} 62 \\ + 32 \\ \hline \\ \hline \end{array}$$

**Write in words**

**11.** 32 = \_\_\_\_\_

**12.** 16 = \_\_\_\_\_

**13.** 58 = \_\_\_\_\_

**14.** 88 = \_\_\_\_\_

**15.** 80 = \_\_\_\_\_ tens

**16.** 60 = \_\_\_\_\_ tens

**17.** 2 tens + 3 tens = \_\_\_\_\_

**18.** 4 tens + 5 tens = \_\_\_\_\_

**19.**


\_\_\_\_\_ x \_\_\_\_\_ = \_\_\_\_\_

**20.** 46 + 22 = \_\_\_\_\_

**21.** 16 - 8 = \_\_\_\_\_

**22.** 88 + 6 = \_\_\_\_\_

**23.** 44 - 22 = \_\_\_\_\_

24. 
$$\begin{array}{r} 96 \\ - 34 \\ \hline \\ \hline \end{array}$$

25. 
$$\begin{array}{r} 87 \\ - 23 \\ \hline \\ \hline \end{array}$$

26. 
$$\begin{array}{r} 79 \\ - 28 \\ \hline \\ \hline \end{array}$$

27. 
$$\begin{array}{r} 69 \\ - 33 \\ \hline \\ \hline \end{array}$$

28.  $3 + 4 + 1 = \underline{\hspace{2cm}}$

29.  $6 + 2 + 2 = \underline{\hspace{2cm}}$

30.  $5 + \square = 25$

31.  $15 + \square = 30$

32.  $216 = \underline{\hspace{1cm}}$  hundreds  
 $\underline{\hspace{1cm}}$  tens  $\underline{\hspace{1cm}}$  ones

33.  $43 = \underline{\hspace{1cm}}$  hundreds  
 $\underline{\hspace{1cm}}$  tens  $\underline{\hspace{1cm}}$  ones

34. 
$$\begin{array}{r} 194 \\ - 162 \\ \hline \\ \hline \end{array}$$

35. 
$$\begin{array}{r} 316 \\ - 204 \\ \hline \\ \hline \end{array}$$

36. 
$$\begin{array}{r} 419 \\ + 220 \\ \hline \\ \hline \end{array}$$

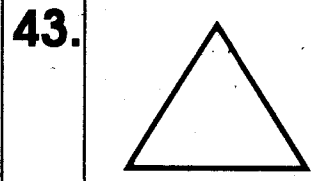


37. 
$$\begin{array}{r} 321 \\ + 221 \\ \hline \\ \hline \end{array}$$

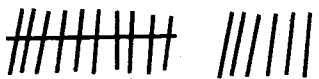
38.  $2 + 2 + 2 = 2 \times \underline{\hspace{2cm}}$

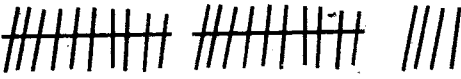
39.  $3 + 3 + 3 = 3 \times \underline{\hspace{2cm}}$

40.  $1 + 1 + 1 = 1 \times \underline{\hspace{2cm}}$

**Name these shapes**

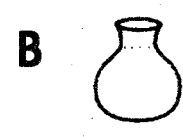
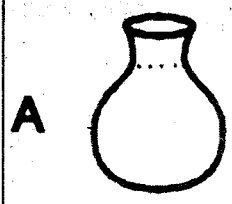


44.   
=  $\underline{\hspace{1cm}}$  tens  $\underline{\hspace{1cm}}$  ones

45.   
=  $\underline{\hspace{1cm}}$  tens  $\underline{\hspace{1cm}}$  ones

46.  $5 + 3 + 2 = \underline{\hspace{2cm}}$

47. Which one is bigger?  
(A, B)



**What is the next number**

48. 36, 38, 40,  $\underline{\hspace{2cm}}$

49. 25, 35, 45,  $\underline{\hspace{2cm}}$


50. 110, 210, 310,  $\underline{\hspace{2cm}}$

**SIGNAL EXAMS 2016**

**SIGNAL 003**

**SCIENCE**

<b>NAME:</b>	
<b>SCHOOL:</b>	

- |  |  |
|--|--|
| <p>1. We are able to tell the smell of something by using our _____ (eyes, ears, nose)</p> <p>2.  We use our _____ to hear. (legs, ears, noses)</p> <p>3. A banana plant has a _____ leaf. (tiny, big, small)<br/> <b>Draw the weather symbols for:</b></p> <p>4. A rainy day</p> <p>5. A calm day</p> <p>6. A cloudy day</p> <p>7. A sunny day</p> | <p>8. When it is cold, we put on _____ and _____ clothes. (heavy, cold, light, warm)</p> <p>9. We sweat more when it is _____ (rainy, cold, hot)</p> <p>10. The white things seen on the sky are called _____ (water, clouds, wind)</p> <p>11. We do weeding by uprooting the _____ (maize, beans, weeds)</p> <p>12. The edible parts of a plant are the parts that we _____ (cut, plant, eat)</p> <p>13. We feel a lot of heat when it is _____ (cloudy, rainy, sunny)</p> <p>14. We water crops when there is no _____ (sun, rain, wind)</p> <p>15. We touch things using our _____ (legs, hands, toes)</p> <p>16. Things that we should not share are called _____ items. (new, clean, personal)</p> <p>17. The tongue is the sense organ for _____ (touch, taste, sight)</p> <p>18. We should learn in _____ classrooms. (dirty, untidy, clean)</p> <p>19. Eyes, nose, ears, tongue and skin are called _____ organs. (body, sense, smell)</p> |
|--|--|

20. This is the leaf of a \_\_\_\_\_ plant.  
(bean, maize, mango)



21. We can use \_\_\_\_\_ to make wheels. (water, papers, wires)

22. Only men and boys can use \_\_\_\_\_ (latrines, toilets, urinals)

23. Name two useful animals and \_\_\_\_\_

**Name and draw any four personal items**

24. \_\_\_\_\_

25. \_\_\_\_\_

26. \_\_\_\_\_

27. \_\_\_\_\_

28. The lips are parts of my \_\_\_\_\_ (hands, mouth, legs)

29. We eat the fruits of a \_\_\_\_\_ plant. (lemon, kundu, tea)

30. We can feel the texture of things through our \_\_\_\_\_ (eyes, skin, ears)

31. A river is a source of \_\_\_\_\_ (trees, air, water)


32. We can feel whether soil is smooth or rough using our \_\_\_\_\_ (eyes, ears, hands)

33. This source of water is called \_\_\_\_\_ (river, rain, ocean)



34. The \_\_\_\_\_ is a source of light. (clouds, sun, rain)

35. We open the \_\_\_\_\_ to fetch water. (dam, tap, drum)



36. This source of light is called \_\_\_\_\_ (sun, fire, electricity)



37. Most plant leaves have a green \_\_\_\_\_ (texture, colour, shape)

**Match the plant with the part eaten**

Plant	part eaten
38. Mango	stem
39. Cabbage	roots
40. Sweet potato	fruit
41. Sugarcane	leaves

42. I have \_\_\_\_\_ sense organs. (5, 2, 10)

43. A round balloon has \_\_\_\_\_ in it. (water, air, soil)

44. A \_\_\_\_\_ is \_\_\_\_\_ to produce sound. (blown, rang, plucked)



45. We use \_\_\_\_\_ to cook food. (soil, water, clothes)

46. We wear heavy clothes to keep our body \_\_\_\_\_ (cold, shivering, warm)

47. I have \_\_\_\_\_ on my head. (air, hair, nails)

48. When a vehicle hoots, we hear \_\_\_\_\_ (water, sound, light)

49. The foot and the toes are found on the \_\_\_\_\_ (arm, head, leg)

50. During this weather, we put \_\_\_\_\_ on \_\_\_\_\_ clothes. (heavy, warm, light)





## DARASA LA PILI

SIGNAL 003

SIGNAL EXAMS 2016 KUSOMA

JINA:	
SHULE:	

### Soma maneno haya.

1. Mwalimu	8. Daktari	15. Mjomba
2. Jumapili	9. Hospitali	16. Mpira
3. Dawati	10. Januari	17. Kisogo
4. Māhindi	11. Blanketi	18. Mbingu
5. Rinda	12. Chungu	19. Baridi
6. Duara	13. Daffari	20. Mpishi
7. Njiwa	14. Gwaride	

### Soma sentensi hizi

21. Mwaka mmoja una miezi kumi na miwili.
22. Darasa letu ni kubwa.
23. Kabati hili ni la mwalimu.
24. Chungu hiki ni cheusi.
25. Wanafunzi wote wamevaa sare.

## STANDARD TWO

SIGNAL 003

SIGNAL EXAMS 2016 READING

NAME:	
SCHOOL:	

### Read these words

1. Tailor	8. Friend	15. Rubber
2. Mine	9. Child	16. Field
3. Star	10. Carton	17. Parade
4. Village	11. Great	18. Evening
5. Polite	12. Purple	19. Across
6. Lion	13. Room	20. Table
7. Allow	14. Neatly	

### Read these sentences

21. She sat under a shade.
22. They are reading a storybook.
23. He is my best friend.
24. Please, give me a pen.
25. Keep your nails short.

**SIGNAL EXAMS 2016**

**SIGNAL 003**

**KISWAHILI**

<b>JINA:</b>	
<b>SHULE:</b>	

**IMLA**

- \_\_\_\_\_
- \_\_\_\_\_
- \_\_\_\_\_
- \_\_\_\_\_
- \_\_\_\_\_

**Jaza pengo**

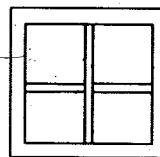
- D \_\_\_\_\_ wat \_\_\_\_\_
- B \_\_\_\_\_ st \_\_\_\_\_ ni
- Adhuh \_\_\_\_\_ r \_\_\_\_\_
- K \_\_\_\_\_ s \_\_\_\_\_ g \_\_\_\_\_ di
- K \_\_\_\_\_ b \_\_\_\_\_ ko


**Andika wingi**


- Kiganja \_\_\_\_\_
- Mwanafunzi \_\_\_\_\_
- Wimbo \_\_\_\_\_
- Mmea \_\_\_\_\_


15. Shamba \_\_\_\_\_


**Andika majina ya picha hizi**

16.  \_\_\_\_\_

17.  \_\_\_\_\_

18.  \_\_\_\_\_

19.  \_\_\_\_\_

20.  \_\_\_\_\_

(ndizi, daftari, penseli, kikapu, dirisha)

**Andika kinyume**

- Mbele \_\_\_\_\_
- Shangazi \_\_\_\_\_
- Mchana \_\_\_\_\_

24. Funga \_\_\_\_\_

25. Nyanya \_\_\_\_\_  
(fungua, mjomba,  
nyuma, babu, usiku)

**Andika kwa wakati ujao (ta)**

26. Anasoma \_\_\_\_\_

27. Mlifika \_\_\_\_\_

28. Wanalala \_\_\_\_\_

29. Mnasafiri \_\_\_\_\_

30. Ninatembea \_\_\_\_\_

**Jibu salamu**

31. Hujambo? \_\_\_\_\_

32. Habari? \_\_\_\_\_

33. Uhali gani? \_\_\_\_\_

**Kanusha sentensi**

34. Tunaenda uwanjani \_\_\_\_\_

35. Mtoto analia \_\_\_\_\_

36. Kichwa kinauma \_\_\_\_\_

37. Mama anaitwa \_\_\_\_\_

**Tumia 'a', 'ni' au 'u'**

38. Mtoto \_\_\_\_\_ nacheza.

39. Mimi \_\_\_\_\_ naimba.

40. Wewe \_\_\_\_\_ naitwa.

41. Fatuma \_\_\_\_\_ nafagia.

42. Yeye \_\_\_\_\_ nasoma.

**Tumia ' \_ ake'**

43. Ufagio \_\_\_\_\_

44. Kiti \_\_\_\_\_

45. Darasa \_\_\_\_\_

46. Mfuko \_\_\_\_\_

47. Nguo \_\_\_\_\_

**Kamilisha sentensi**

48. Watoto huandika kwenye \_\_\_\_\_

**(Chati, daftari)**

49. \_\_\_\_\_ ni sehemu ya mwili.

**(Kidevu, Kiranja)**

50. \_\_\_\_\_ ni kifaa cha kufyekea nyasi nyumbani.

**(Plau, Kifyekeo)**