

NAIROBI INTERPRIVATE SCHOOLS EXAM

STANDARD TWO - YEAR 2016

MATHEMATICS



NAME: _____

SCHOOL: _____

DATE: _____

Write the missing numbers

1. 11, 12, 13, 14, _____

2. 292, 293, 294, _____

3. 10, 20, 30, _____

4.
$$\begin{array}{r} 38 \\ +31 \\ \hline \end{array}$$

5.
$$\begin{array}{r} 47 \\ +42 \\ \hline \end{array}$$

6.
$$\begin{array}{r} 66 \\ +33 \\ \hline \end{array}$$

7.
$$\begin{array}{r} 80 \\ -20 \\ \hline \end{array}$$

8.
$$\begin{array}{r} 74 \\ -52 \\ \hline \end{array}$$

9.
$$\begin{array}{r} 59 \\ -27 \\ \hline \end{array}$$

10. $96 = \text{_____ tens and _____ ones.}$

11. $30 + \text{_____} = 35$

12. $15 - \text{_____} = 12$

Write in words

13. $9 = \text{_____}$

14. $46 = \text{_____}$

15. $98 = \text{_____}$

16. $124 = \text{_____}$

17.
$$\begin{array}{r} 2 \\ + 6 \\ \hline 7 \end{array}$$

18. $19 - 5 = \text{_____}$

19. $10 - 1 = \text{_____}$

20. $2 \times \text{_____} = 0$

Name the shapes



Fill the correct place value

23. $85 = \text{_____ tens} + \text{_____ ones}$

Write the numbers

24. A year has _____ months.

25.
$$\begin{array}{r} 77 \\ -47 \\ \hline \end{array}$$

26. _____ + 8 = 21

Write in numbers

27. Three hundred and thirty nine = _____

28. Forty four = _____

29. 3 + _____ = 9

30. The number before 99 is _____

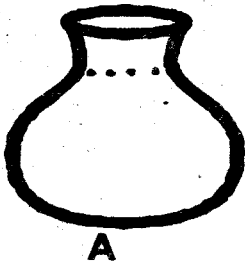
Work out:-

31.
$$\begin{array}{r} 325 \\ +222 \\ \hline \end{array}$$

32. 7 + 8 = _____

33. 5 + 5 + 5 = _____

34. Which holds more water? _____



35. 49 = _____ tens _____ ones

36.



Which one is heavier? _____

37. 5 cows + 6 cows = _____ cows

38. Two boys have _____ fingers

39. 700 + 77 = _____

40. The fifth day of the week is called _____

41. 56 - 32 = _____

42.
$$\begin{array}{r} 9 \\ + 230 \\ \hline \end{array}$$

43. Subtract 24 from 88 _____

44. 89 - 4 = _____

45. How many legs do 5 cows have?

46.
$$\begin{array}{r} 87 \\ -72 \\ \hline \end{array}$$

47. 90 - 50 = _____

48.
$$\begin{array}{r} 79 \\ -9 \\ \hline \end{array}$$

49.
$$\begin{array}{r} 341 \\ +213 \\ \hline \end{array}$$

50.
$$\begin{array}{r} 7 \\ +152 \\ \hline \end{array}$$

NAIROBI INTERPRIVATE SCHOOLS EXAM

STANDARD TWO - YEAR 2016

ENGLISH



NAME: _____ SCHOOL: _____ DATE: _____

Dictation

1. _____
2. _____
3. _____
4. _____
5. _____

Fill the missing letters

6. Am ___ u ___ ance
7. St ___ an ___ er
8. Pat ___ en ___

Write the opposite

9. Night - _____
10. Laugh - _____
11. Small - _____

Choose the word to make one name



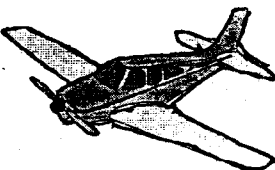


12. Class _____
13. Play _____
14. Break _____
15. Moon _____

(fast, light, room, ground)

What is the name of:

16. A person who preaches the gospel _____
17. A person who drives a car _____
18. A person who looks after sick people _____
19. A person who flies an aeroplane _____
20. A person who looks after our teeth: _____
(pilot, a dentist, nurse, motorist, pastor)

Name the pictures drawn

21.  _____
22.  _____
23.  _____
24.  _____
25.  _____

Add 'ing

26. Cook _____

27. Right _____

Write "a" or "an"

28. _____ nose.

29. _____ arrow.

30. _____ engine.

Use "was" or "were"

31. The cups _____ broken.

32. The girl _____ reading a book.

Use "I" or "we"

33. _____ were dancing in the hall.

34. _____ am a tall person.

Write the plurals

35. Tooth - _____

36. Loaf - _____

37. Enemy - _____

Fill in the correct answer

38. There are _____ months in a year.

39. A _____ is used for cleaning the board.

40. A _____ is used for cooking food.

41. A _____ is used for combing the hair.

(comb, duster, twelve, pot)

Today Yesterday

e.g. Wash Washed

42. Jump _____

43. Cook _____

44. Walk _____

Choose the correct word

45. This is a _____ flower.

46. She has a _____ sister.

47. A cat _____ milk.

48. A bird _____ well.

(beautiful, sings, drinks, nice)

Write these words correctly

49. ckddlopa - _____

50. ntaimou - _____

NAIROBI INTERPRIVATE SCHOOLS EXAM
STANDARD TWO - YEAR 2016
READING & KUSOMA



NAME: _____

SCHOOL: _____

DATE: _____

READING

Read these words

- | | | | |
|----------|------------|------------|-----------------|
| 1. Boat | 6. Rich | 11. Pound | 16. Bottom |
| 2. Seven | 7. Double | 12. chalks | 17. Evening |
| 3. Big | 8. Dentist | 13. Begin | 18. Banana |
| 4. Lion | 9. Glass | 14. Family | 19. Black board |
| 5. Heavy | 10. Basket | 15. Dirty | 20. Table |

Read these sentences

21. John is washing a car.
22. The kitten is sleeping.
23. Who is digging in the shamba?
24. The carpenter has come.
25. The white cat has jumped.

KUSOMA

Soma majina haya

- | | | | |
|------------|-------------|-------------|---------------|
| 1. Chora | 6. Mseto | 11. silabi | 16. Vitatu |
| 2. Paka | 7. Kofia | 12. Gwaride | 17. Marudio |
| 3. Maua | 8. Alijibu | 13. Maswala | 18. Tarakimu |
| 4. Wino | 9. Changu | 14. Herufi | 19. Kuigiza |
| 5. Kuchora | 10. Kipindi | 15. Maneno | 20. Cherehani |

Soma sentensi hizi

21. Juma ana vifutio vitatu.
22. Majibu yote yana alama ya kikomo.
23. Hivi ni vidole zangu.
24. Je, utachora picha ngapi?
25. Mami amenunua taa ya kikopo.

NAIROBI INTERPRIVATE SCHOOLS EXAM

DARASA LA PILI - MWAKA 2016

KISWAHILI



JINA _____

SHULE: _____

TAREHE: _____

Imla

1. _____
2. _____
3. _____
4. _____
5. _____

Andika kinyume

6. Kubwa - _____
7. Chafu - _____
8. Mchana - _____
9. Chini - _____
10. Mweupe - _____

Andika maneno vizuri

11. ndakita - _____
12. saniha - _____
13. mamliku - _____
14. oomkn - _____
15. ziemw - _____

Chora maumbo haya:-

16. Duara 17. Pembe tatu

18. Mraba

Andika kwa tarakimu au maneno:-

19. $63 =$ _____
20. Mia moja na kumi na saba
= _____
21. $203 =$ _____
22. Mia moja na thelathini na mbili
= _____

Umoja

Wingi

23. Kioo _____
24. Kijana _____
25. Mtu _____
26. Jicho _____

Jaza pengo


27. Ch_____p_____
28. S_____mak_____
29. D_____b_____
30. B_____nd_____r_____
31. Mb_____z_____

Andika malina

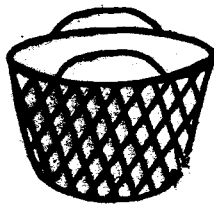
32.



33.




34.



35.



36.



Tumia "huyu", "hiki" na "hii"

37. Ameingia ndani ya nyumba _____
38. Mvulana _____ anacheza vizuri.
39. Kitabu _____ hakisomeki.

Tegua vitendawili

40. Kule ng'o na huku ng'o _____
41. Nimezaliwa na mguu mmoja _____
42. Niangalie nikumbuke _____
(uoga, nzi, giza, kioo)

Unda maneno ukitumia mianzo

43. mg _____
44. nd _____

Chagua jibu sahihi

45. Dereva _____ amenisaidia.
(huyu, hili, hii)
46. Mwimbaji _____ anaitwa Stano.
(ule, yule, huu)
47. Wapishi _____ wamepika.
(wale, haya, huu)
48. Kuku _____ ni wetu.
(ile, yule, huu)

Kamilisha methali

49. Dalili ya mvua ni _____
50. Mfoto wa kuku ni _____
(kifaranga, jua, ndege, mawingu)


NAIROBI INTERPRIVATE SCHOOLS EXAM

STANDARD TWO - YEAR 2016

SOCIAL STUDIES & C.R.E




NAME: _____ SCHOOL: _____ DATE: _____


1. The sun sets in the _____
(East, West, South)
2. A place where we learn to read and write is a _____
(home, school, house)
3. A person who lives next to us is called _____
(enemy, neighbour, brother)
4.  The weather today is _____
(sunny, rainy, cloudy)
5. We keep our tools in the _____
(store, kitchen, bathroom)
6. The room where food is prepared is called a _____
(kitchen, bathroom, bedroom)
7. Maasai house is called _____
(manyatta, hut, igloo)

Draw the following pictures

8. House



9. Bicycle




10. A _____ lives in water.
(crocodile, buffalo, lion)
11. People who drive cars are called _____
(pedestrians, motorists, children)
12. My aunts children are my _____
(parents, uncles, cousins)

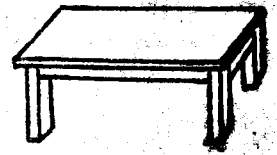
13. Rubbish brings _____
which can make us sick.
(flies, grasshoppers, jiggers)
14. Heavy clouds in the sky may bring _____
(rain, wind, sun)
15. A place where we go to help ourselves is called a _____
(toilet, playground, class)

Name the things found in our school

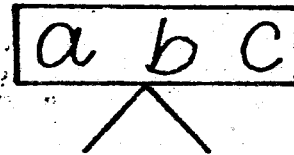
16.



17.



18.





19. _____ helps us to carry heavy things. (Cows, Dogs, Donkeys)
20. Books are kept in the _____
(shelf, toilet, kitchen)
21. Animals which are kept at home are _____
(domestic, wild, forest)
22. Name the road sign below



(children crossing, zebra crossing, hospital)

23. A person who sells things in the shop is called a _____
(shopkeeper, barber, market)
24. A low area between two hills is called _____
(hill, valley, swamp)
25. Many trees growing together make a _____
(mountain, forest, farm)
26. A _____ shows the lesson for each day.
(register, teacher, timetable)
27. The meat of a sheep is called ____
(beef, mutton, pork)
28. The _____ keep our school safe at night.
(watchman, cook, teacher)
29. We sit and rest in the _____
(bedroom, kitchen, sitting room)
30. When a child is overworked, that is called _____
(right, need, abuse)
31. _____ was sold in Egypt by his brothers.
(Daniel, Samuel, Joseph)
32. Jesus _____ little children.
(hate, loves, beat)
33. _____ built an ark.
(Moses, Noah, Peter)
34. God created _____ to give us light during the day.
(moon, sun, stars)
35. We speak to God through _____.
(praying, jumping, dancing)
36. The first book in the Bible is _____.
(Matthew, Genesis, Revelation)
37. The first people to see baby Jesus were _____.
(wisemen, shepherds, watchman)
38. Immanuel means _____.
(God with us, saviour, God's love)
39. A person who cannot see is a _____.
(dumb, blind, lame)
40. Who taught the disciple of the Lord's prayer _____.
(Jesus, God, David)
41. _____ was the son of Abraham.
(Isaac, Jonah, John)

C. R. E

31. Our father who art in _____
(earth, sky, heaven)
32. Moses was given _____ commandments.
(12, 2, 10)
33. _____ baptised Jesus.
(Joseph, Peter, John the baptist)
34. We should _____ the needy.
(beat, help, abuse)
35. David killed _____.
(Samson, Noah, Goliath)
36. _____ was God's friend.
(Cain, Abraham, satan)
- Draw these pictures**
48. Stars 
49. Moon 
50. A good _____ helped the man who was beaten by robbers.
(samaritan, wisemen, Shepherd)

NAIROBI INTERPRIVATE SCHOOLS EXAM

STANDARD TWO - YEAR 2016

SCIENCE




NAME: _____

SCHOOL: _____



DATE: _____


1. A fish breathes through _____
(nose, gills, mouth)

2.  This is a _____
plant.
(maize, mango, bean)

3. A hot day is usually _____
(sunny, windy, cloudy)

Name the items we use

4.  5. 

6. 

(handkerchief, toothbrush, comb)

7. Drinking water must be _____
before drinking.
(boiled, cooked, stored)

8. Plants grows from _____
(flowers, seeds, leaves)

9. The animals we keep at home are
called _____ animals.
(wild, tamed, domestic)

10. A _____ is an animal that
guards our home.
(cow, dog, donkey)

11. A _____ can sink in water.
(stone, paper, leaf)

12. When it is rainy people wear
_____ (slippers, gumboots,
open shoes)


13. We should not share _____
(food, towels, pencils)

14. We get water from the _____
(kitchen, bottle, dam)

Name the weather symbols below

15. 

16. 

17. 

18. 

19. The growing of a young plant from
seed is called _____
(seedlings, weed, germination)


20. A _____ lives in water.
(crocodile, goat, cow)

21. We taste with our _____
(teeth, tongue, nose)

22. When one is nose bleeding
_____ comes out.
(blood, water, mucus)

23. The house of bees is called _____
(nest, hive, forests)

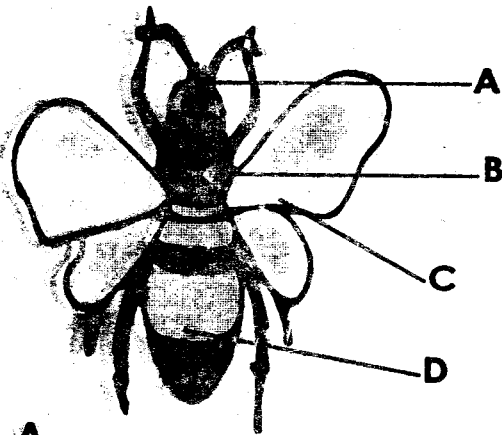
24. We feel with our _____
(hands, legs, ears)

25.  This is a _____ plant leaf. (bean, maize, peas)

26. We should cover our latrines to keep away _____ (fleas, flies, jiggers)

27. The mouth of a bird is called a _____ (beak, muzzle, mouth)

Name the parts of the insects



28. A _____

29. B _____

30. C _____

31. D _____

(wings, abdomen, thorax, head)

32. We use a towel to _____ our bodies. (shear, dry, wet)

33. A wheelbarrow has _____ wheels. (1, 2, 3)

34. We boil water to kill _____ (germs, flies, cockroaches)

35. A long period without rain causes _____ (drought, food, dry)

36. Most plants leaves are _____ in colour. (red, blue, green)

37. Personal items should not be _____ (washed, cooked, shared)

38. A young plant is called _____ (seedling, seed, bean)

39. We should always put papers in the _____ (toilets, dust bin, corner)

40. We put on _____ clothes when it is cold. (red, light, heavy)

41. Milk is good for our _____ (teeth, clothes, eyes)

42. Cooked meat smells _____ (good, bad, bitter)

43. The best soil for modelling is _____ (clay, sand, loam)


44. Fruits are _____ before eating. (washed, cooked, boiled)

45. A _____ is a domestic animal. (cat, lion, snake)

46. If we drink dirty water we become _____ (sick, healthy, tall)

47.  This kite can be moved by _____ (air, sun, wind)

48. We mix soil and _____ to make mud. (salt, sugar, water)

49. 

This farm tool is used for _____ (cutting, digging, milking)

50. Which one of the following animals lives in dirty bodies? _____ (Mosquitoes, Lice, Cockroaches)