



HIGH FLYER SERIES EVALUATION TEST
STANDARD TWO – YEAR 2016
SOCIAL STUDIES

DATE:


NAME: SCHOOL:

Name the physical features

1.



2.



3.



(Road, Valley, Forest, bridge, plain)

4. Another name for shelter is _____.
(hotel, housing, store)

5. We store grains in a _____.
(cottage, granary, garage)

6. Every home must have a _____.
(toilet, car, television)

7. Clothes keep our bodies _____.
(cold, warm, good)

8. Related people living together make a _____.
(house, home, family)

9. Houses protect us from _____.
(sleep, rain, friends)

10. The daughter of my sister is my _____.
(cousin, niece, uncle)

11.



This is a _____ for collecting soil.
(Jembe, Panga, Shovel)

12. The best soil for farming is _____ soil.
(loam, clay, sand)

13. Ropes can be made using _____.
(clay, wood, sisal)

14. A living room is also called a _____ room.
(eating, sleeping, sitting)

15. _____ are people who live near our homes.
(Strangers, Friends, Neighbours)

16. Lion and giraffes are examples of _____ animals.
(big, wild, tame)
17. _____ is a family celebration.
(Meeting, Birthday, Lunch)
18. The coldest month in the year is _____.
(January, July, December)
19. The walls of a modern house are built with _____.
(grass, mud, stones)
20. We plant crops during the _____ season.
(cold, rainy, dry)
21. Dogs are kept mainly to _____ our home. (stay, eat, guard)
22. We wear _____ when going to school.
(smart, uniform, Sunday best)
23. The flag of Kenya has four colours. Black colour means _____.
(blood, people, plants)
24. On a rainy day, we wear _____ clothes. (many, heavy, light)
25. Strangers can _____ us.
(bless, hurt, greet)
26. Street families need _____.
(abuse, money, stealing)
27. When raising the flag, we stand _____.
(alert, at ease, attention)
28. We should walk on the _____ side of the road.
(middle, left, right)
29. Our government has provided free _____ to school children.
(homes, transport, education)
30. We use wool to make _____.
(clothes, shoes, furniture)



HIGH FLYER SERIES EVALUATION TEST
STANDARD TWO – YEAR 2016
MATHEMATICS



DATE:

NAME: SCHOOL:

Write in words

1. 27 =

2. 33 =

3. 94 =

4. 60 =

Add

5. $2 + 8 + 7 =$

6. $13 + 5 =$

7.	80	8.	30
	20		30
	+10		+20
	-----		-----

9. Add thirteen to sixteen

Subtract/take away

10. Thirty from forty five =

11.	97	12.	89
	-25		-63
	-----		-----

13.	77	14.	36
	-40		-13
	-----		-----


15. - 13 = 20

16. $15 + \underline{\quad} = 25$

17. 101 = hundreds tens ones

18. 99 = hundreds tens ones

19.



The time is

20. A cow has 4 legs. 3 cows have
 legs

21.	Sh:	cts
	24	70
	+10	25
	-----	-----

22.	Sh	cts
	53	95
	-30	45
	-----	-----

23. 900 = hundreds tens ones

24. $12 + \underline{\quad} = 15$

25. $39 - \underline{\quad} = 27$

26. Which month comes after
 September?

(November, October, August)

27. What is 77 take away 7 _____

28. 2 weeks have _____ days

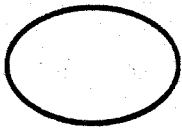
29.
$$\begin{array}{r} 5 \\ 0 \\ +5 \\ \hline \end{array}$$

30. $7 - 4 - 1 =$ _____


31. Put together 19 and 10, you get _____

Name these shapes

32.



33.



34.



35.




36.



(triangle, circle, zigzag, curved, 'square)

37.

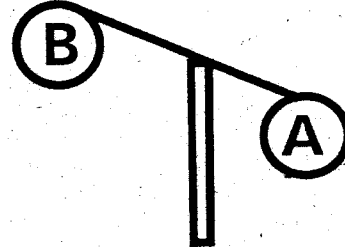


Share these balls between 2 boys.
Each will get _____ balls

38. Arrange from the smallest to the largest

21, 0, 19, 6, 33, 12 _____

39.



Which one is lighter A or B? _____

40. $4 + 0 + 6 =$ _____

41. 4 hundreds 0 tens 6 ones = _____

42. Friday, _____, Sunday
(Thursday, Monday, Saturday)

43. A rubber costs sh 9. What is the cost of 2 rubbers? _____

44. Our class has 18 boys and 12 girls.
How many pupils are in our class altogether? _____

45.



46.
$$\begin{array}{r} 67 \\ -23 \\ \hline \end{array}$$

47. _____ - 7 = 13

48. _____ = 7 hundred 0 tens 3 ones

49. One girl has _____ eyes

50. Which one is smaller 68 or 86?



HIGH FLYER SERIES EVALUATION TEST

STANDARD TWO – YEAR 2016

SCIENCE

DATE:

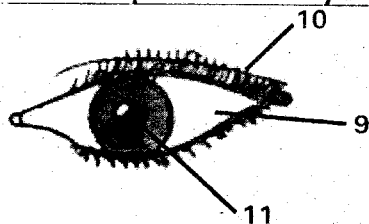
NAME: SCHOOL:

Match the following sense organs with their senses

Sense Organ	Sense
1. Nose	Sight
2. Skin	Taste
3. Tongue	Smell
4. Eye	Touch

5. _____ smells good.
(Perfume, Rotten Eggs)
6. _____ tastes sour.
(Lemon, Banana, Pepper)
7. _____ has a pleasant taste.
(Soda, Water, Honey)
8. Ripe bananas are colour _____.
(yellow, red, green)

Name the parts of the eye shown.



- (pupil, eyebrows, white part)
12. _____ is not a personal item.
(toothbrush, socks, spoon)
13. We should use _____ water when washing a handkerchief.
(warm, cold, hot)


14. We should not share _____.
(socks, plates, basins)

Draw the following:


15. Socks



16. Comb



17. Tooth brush



18. We should wear _____ when cleaning a latrine.
(gloves, socks, helmet)
19. A water closet is a modern _____.
(toilet, urinal, latrine)
20. A young plant is called a _____.
(tree, seedling)
21. _____ is not a domestic animal.
(Dog, Camel, Zebra)
22. Removing unwanted plants from the farm is called _____.
(harvesting, weeding)
23. A maize plant has a _____ leaf.
(round, star shaped, long thin)



24.



This is a _____ leaf.
(banana, jacaranda, pawpaw)

25. Moving air is called _____.
(clouds, wind, weather)

Draw these weather symbols

26. Sunny



27. Cloudy



28. Rainy



29. We wear _____ on a cold day.
(vest, jacket, t-shirt)

30. We wear _____ on our feet when
walking on a muddy road.
(gumboots, slippers, shoes)

31. _____ is not a pet animal.
(Cat, Dog, Cow)

32. Cows give us _____ and _____.
(milk and meat, eggs and meat)

33.



This animal lives in
_____. (air, soil, water)

34. _____ is a harmful animal.
(Bee, Butterfly, Mosquito)

35. The house of a spider is called
_____. (hive, web, hole)

36. A _____ grows into a jigger.
(tick, flea, mice)

37. A _____ does not have legs.
(millipede, snail, cockroach)

38. We can see through a _____.
(mirror, glass, stone)

39. An animal without horns is a
_____. (cow, donkey, goat)

40. An earthworm lives in the _____.
(water, soil, air)

41. Elephants eat _____.
(plants, meat, stones)

42. We use a _____ when collecting
rubbish from the floor.
(dustbin, dustpan, spoon)

43. The shape of a wheel is _____.
(oval, circle, square)

44. _____ spoils our teeth.
(Milk, Cakes, Sugarcane)

45. When we share combs we can
get _____. (ringworms, malaria, aids)

46. We wash our bodies to keep
them _____. (dirty, tidy, smelly)

47. We should wash our hands _____
visiting the latrine.
(before, after)

48.



This is a root of _____.
(cassava, potato, carrot)

49. Which soil feels smooth?
(clay, loam, sand)

50. After bathing we use a _____ to
wipe the body.
(blanket, towel, sheet)



HIGH FLYER SERIES EVALUATION TEST
STANDARD TWO – YEAR 2016
ENGLISH: LANGUAGE

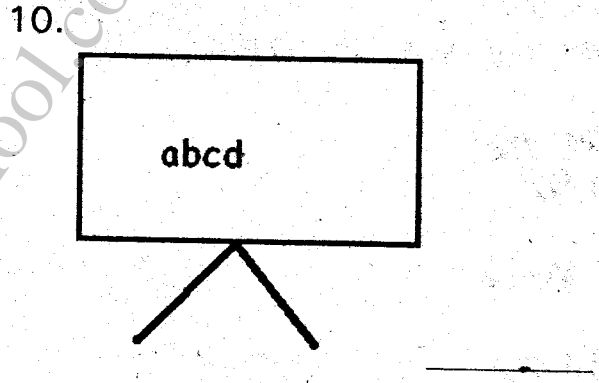




DATE:

NAME: SCHOOL:

Dictation

- 1. _____
- 2. _____
- 3. _____
- 4. _____
- 5. _____

Name these pictures



Fill in the missing letters

- 11. Pl ___ ase
- 12. Exc ___ se
- 13. D ___ sk
- 14. R ___ ler
- 15. H ___ se

- | | |
|------------|-------------|
| <u>One</u> | <u>many</u> |
| 16. Box | _____ |
| 17. Pot | _____ |

18. Leaf _____

19. House _____

20. Mango _____

Write the opposite

21. Good _____

22. Small _____

23. Clean _____

24. Girl _____

25. Cold _____

(boy, big, bad, hot, dirty)

Add -ing

26. Cut _____

27. Write _____

28. Stop _____

29. Eat _____

30. Draw _____

Write correctly

31. ttlebo _____

32. bleta _____

33. werflo _____

34. nmawo _____

35. gba _____

Write in words or figures

36. Ninety six _____

37. Fourteen _____

38. 100 _____

39. Eighty seven _____

40. 32 _____

Write 'a' or 'an'

41. _____ elbow

42. _____ pupil

43. _____ ox

44. _____ teacher

45. _____ desk

Complete these sentences

46. My school is called _____

47. I am _____ years old.

48. We go to school for _____ days a week.

49. One year has _____ months.

50. An egg has _____ shape.



HIGH FLYER SERIES EVALUATION TEST
DARASA LA PILI – MWAKA 2016
KUSOMA

TAREHE:

JINA: SHULE:

Soma maneno haya:-

- | | | |
|-------------|-------------|--------------|
| 1. Kalamu | 8. Mpira | 15. Kanza |
| 2. Bakuli | 9. Shangazi | 16. Kiroboto |
| 3. Blanketi | 10. Kucha | 17. Upanga |
| 4. Kisu | 11. Kipaji | 18. Mshipi |
| 5. Choo | 12. Soma | 19. Dereva |
| 6. Jua | 13. Kitabu | 20. Ukimwi |
| 7. Picha | 14. Kucha | |

Soma sentensi hizi:-

21. Huyu ni shangazi.
22. Dawati langu ni fupi.
23. Ninapenda kula wali.
24. Haraka haraka haina baraka.
25. Mimi ni mwanafunzi.





HIGH FLYER SERIES EVALUATION TEST
STANDARD TWO – YEAR 2016
CHRISTIAN RELIGIOUS EDUCATION

DATE:

NAME: SCHOOL:

1. God created man on the _____ day. (6th, 5th, 3rd)
2. Christians worship in a _____. (Mosque, Church, Temple)
3. Samuel's mother was called _____. (Hannah, Peninah, Sarah)
4. _____ was the wife of Elimelech. (Ruth, Naomi, Orpha)
5. We should be _____ to our teachers. (selfish, rude, obedient)
6. A _____ is a woman whose husband has died. (orphan, widow, widower)
7. _____ was a prophet of God. (Judas, John, Ezekiel)
8. Jesus raised _____ daughter. (Jairus, Lazarus, Mary)
9. _____ are people who live near our home. (Friends, Strangers, Neighbours)
10. David's Father was called _____. (Saul, Jesse, Solomon)
11. We go to church to _____. (cry, pray, play)
12. Muslims worship on a _____. (Sunday, Saturday, Friday)
13. The plants that we grow and get food from were created by _____. (angels, God, Satan)
14. I should pray to God _____. (at night, anytime, morning)
15. The New Testament has _____ books. (39, 66, 27)
16. Jesus changed water into wine at cana of _____. (Bethlehem, Galilee, Nazareth)
17. When Jesus healed ten lepers, only _____ said 'Thank you'. (4, 2, 1)
18. The last book in the Bible is _____. (Genesis, Revelation, Mark)
19. My brother's daughter is my _____. (niece, nephew, cousin)
20. Jesus hates _____. (sins, man animals)



MSURURU WA MTHANI WA HIGH FLYER SERIES
DARASA LA PILI – MWAKA 2016
KISWAHILI: LUGHA

TAREHE:

JINA: SHULE:

Imla

1. _____
2. _____
3. _____
4. _____
5. _____

Jaza pengo

6. Mk _____ b _____
7. S _____ m _____ ki _____
8. K _____ k _____ mbe _____
9. Ny _____ mb _____
10. Sh _____ l _____

Andika jina la nambari

(Mfano: Viti 2 _____ viti viwili)

11. Miti 4 _____
12. Viatu 9 _____
13. Vitanda 6 _____
14. Mikono 5 _____
15. Wazee 16 _____

Tumia "huyu" "hivi" "hawa" au "hiki"

16. _____ ni kuku wetu.
17. _____ kitanda ni changu.
18. Viatu _____ ni vyetu.
19. Wageni _____ ni wetu.

Andika kwa wingi

20. Mgeni _____
21. Chakula _____
22. Mtoto _____
23. Kisu _____
24. Mvulana _____
25. Ufagio _____

Andika vizuri

26. Atuki _____
27. Suki _____
28. Aas _____
29. Modom _____
30. Timi _____

Andika majina

31.



32.



33.



34.



35.



Andika kinyume

36. Mvulana _____

37. Babu _____


38. Adui _____

39. Mweusi _____

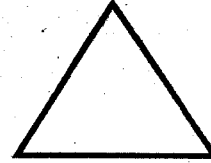
40. Rahisi _____

Maumbo

41.



42.



43.



Kanusha maneno

44. Kula _____

45. Simama _____

46. Kimbia _____

Kamilisha maamkizi

47. Hujambo _____

48. Shikamo _____

(marahaba, sijambo,
hatujambo)

Kamilisha methali na vitendawili

49. Haraka haraka haina _____

50. Mama nieleke _____

(moto, baraka, kitanda)



HIGH FLYER SERIES EVALUATION TEST
STANDARD TWO – YEAR 2016
READING

DATE:

NAME: SCHOOL:

Read these words

- | | | |
|-----------|-----------|-------------|
| 1. Bottle | 6. Doctor | 11. Away |
| 2. Hiss | 7. Sorry | 12. Yellow |
| 3. Lamp | 8. Cried | 13. Running |
| 4. Apron | 9. Sweet | 14. Monkey |
| 5. Please | 10. Climb | 15. Horse |

Read these sentences

16. He will paint the house.
17. We store grains in a granary.
18. Empty the dustbin.
19. My cousin will come on Sunday.
20. Who broke the window?